

BASIC COLLEGE

MATHEMATICS

CHARLES P. MCKEAGUE

3E

A TEXT / WORKBOOK

Basic College Mathematics

A TEXT/WORKBOOK

THIRD EDITION

Charles P. McKeague
CUESTA COLLEGE



**Basic College Mathematics: A Text/Workbook,
Third Edition****Charles P. McKeague**

Acquisitions Editor: Marc Bove

Assistant Editor: Stefanie Beeck

Editorial Assistant: Kyle O'Loughlin

Media Editor: Heleny Wong

Marketing Manager: Gordon Lee

Marketing Assistant: Angela Kim

Marketing Communications Manager:
Katy Malatesta

Content Project Manager: Jennifer Ridsen

Creative Director: Rob Hugel

Art Director: Vernon Boes

Print Buyer: Karen Hunt

Rights Acquisitions Account Manager, Text:
Bob KauserRights Acquisitions Account Manager, Image:
Don Schlotman

Production Service: XYZ Textbooks

Text Designer: Diane Beasley

Photo Researcher: Kathleen Olson

Illustrator: Kristina Chung/XYZ Textbooks

Cover Designer: Irene Morris

Cover Image: Pete McArthur

Compositor: Devin Christ/XYZ Textbooks

© 2011, 2007 Brooks/Cole, Cengage Learning

ALL RIGHTS RESERVED. No part of this work covered by the copyright herein may be reproduced, transmitted, stored, or used in any form or by any means graphic, electronic, or mechanical, including but not limited to photocopying, recording, scanning, digitizing, taping, Web distribution, information networks, or information storage and retrieval systems, except as permitted under Section 107 or 108 of the 1976 United States Copyright Act, without the prior written permission of the publisher.

For product information and technology assistance, contact us at
Cengage Learning Customer & Sales Support, 1-800-354-9706

For permission to use material from this text or product,
submit all requests online at **www.cengage.com/permissions**

Further permissions questions can be emailed to
permissionrequest@cengage.com

Library of Congress Control Number: 2010922074

ISBN-13: 978-0-8400-5310-7

ISBN-10: 0-8400-5310-X

Brooks/Cole20 Davis Drive
Belmont, CA 94002-3098
USA

Cengage Learning is a leading provider of customized learning solutions with office locations around the globe, including Singapore, the United Kingdom, Australia, Mexico, Brazil, and Japan. Locate your local office at:

www.cengage.com/global

Cengage Learning products are represented in Canada by Nelson Education, Ltd.

To learn more about Brooks/Cole, visit **www.cengage.com/brookscole**
Purchase any of our products at your local college store or at our preferred
online store **www.CengageBrain.com**

Brief Contents

Chapter 1	Whole Numbers	1
Chapter 2	Fractions and Mixed Numbers	87
Chapter 3	Decimals	183
Chapter 4	Ratio and Proportion	249
Chapter 5	Percent	301
Chapter 6	Descriptive Statistics	365
Chapter 7	Measurement	413
Chapter 8	Geometry	465
Chapter 9	Introduction to Algebra	517
Chapter 10	Solving Equations	577
Appendix A	Resources	653
Appendix B	One Hundred Addition Facts	654
Appendix C	One Hundred Multiplication Facts	655
Appendix D	Negative Exponents	657
Appendix E	Scientific Notation	663
Appendix F	More about Scientific Notation	667
	Solutions to Selected Practice Problems	S-1
	Answers to Odd-Numbered Problems	A-1
	Index	I-1

Contents

1 Whole Numbers 1

Introduction 1

- 1.1 Place Value and Names for Numbers 3
- 1.2 Addition with Whole Numbers, and Perimeter 13
- 1.3 Rounding and Estimating 25
- 1.4 Subtraction with Whole Numbers 33
- 1.5 Multiplication with Whole Numbers, and Area 41
- 1.6 Division with Whole Numbers 55
- 1.7 Exponents and Order of Operations 67

Summary 75

Review 77

Test 79

Projects 81

A Glimpse of Algebra 83



2 Fractions and Mixed Numbers 87

Introduction 87

- 2.1 The Meaning and Properties of Fractions 89
- 2.2 Prime Numbers, Factors, and Reducing to Lowest Terms 101
- 2.3 Multiplication with Fractions, and the Area of a Triangle 109
- 2.4 Division with Fractions 121
- 2.5 Addition and Subtraction with Fractions 129
- 2.6 Mixed-Number Notation 141
- 2.7 Multiplication and Division with Mixed Numbers 147
- 2.8 Addition and Subtraction with Mixed Numbers 153
- 2.9 Combinations of Operations and Complex Fractions 161

Summary 169


Review 173

Cumulative Review 175

Test 176

Projects 177

A Glimpse of Algebra 179



3 Decimals 183

Introduction 183

3.1 Decimal Notation and Place Value 185

3.2 Addition and Subtraction with Decimals 193

3.3 Multiplication with Decimals; Circumference and Area of a Circle 201

3.4 Division with Decimals 213

3.5 Fractions and Decimals, and the Volume of a Sphere 225

Summary 237

Review 239

Cumulative Review 241

Test 242

Projects 243

A Glimpse of Algebra 245



4 Ratio and Proportion 249

Introduction 249

4.1 Ratios 251

4.2 Rates and Unit Pricing 259

4.3 Solving Equations by Division 265

4.4 Proportions 269

4.5 Applications of Proportions 275

4.6 Similar Figures 281

Summary 289


Review 291

Cumulative Review 293

Test 294

Projects 295

A Glimpse of Algebra 297



5 Percent 301

Introduction 301

5.1 Percents, Decimals, and Fractions 303

5.2 Basic Percent Problems 313

5.3 General Applications of Percent 323

5.4 Sales Tax and Commission 329

5.5 Percent Increase or Decrease and Discount 337

5.6 Interest 345

Summary 353

Review 355

Cumulative Review 357

Test 358

Projects 359

A Glimpse of Algebra 361



6 Descriptive Statistics 365

Introduction 365

6.1 Mean, Median, and Mode 367

6.2 Displaying Information 375

6.3 Pie Charts 385

6.4 Introduction to Probability 393

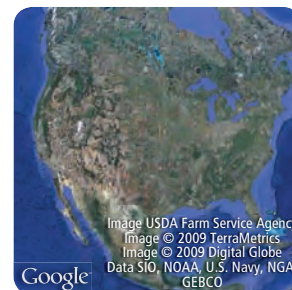
Summary 403

Review 407

Cumulative Review 409

Test 410

Projects 411



7 Measurement 413

Introduction 413

7.1 Unit Analysis I: Length 415

7.2 Unit Analysis II: Area and Volume 425

7.3 Unit Analysis III: Weight 435

7.4 Converting Between the U.S. and Metric Systems and Temperature 441

7.5 Operations with Time and Mixed Units 449

Summary 455

Review 459

Cumulative Review 461

Test 462

Projects 463



8 Geometry 465

Introduction 465

8.1 Perimeter and Circumference 467

8.2 Area 475

8.3 Surface Area 483

8.4 Volume 491

8.5 Square Roots and the Pythagorean Theorem 499

Summary 507

Review 511

Cumulative Review 513

Test 514

Projects 515



9 Introduction to Algebra 517

Introduction 517

9.1 Positive and Negative Numbers 519

9.2 Addition with Negative Numbers 529

9.3 Subtraction with Negative Numbers 539

9.4 Multiplication with Negative Numbers 549

9.5 Division with Negative Numbers 557

9.6 Simplifying Algebraic Expressions 563


Summary 569

Review 571

Cumulative Review 573

Test 574

Projects 575



10 Solving Equations 577

Introduction 577

10.1 The Distributive Property and Algebraic Expressions 579

10.2 The Addition Property of Equality 591

10.3 The Multiplication Property of Equality 599

10.4 Linear Equations in One Variable 607

10.5 Applications 615

10.6 Evaluating Formulas 627

10.7 Paired Data and the Rectangular Coordinate System 637

Summary 645

Review 647

Cumulative Review 649

Test 650

Projects 651

Appendix A – Resources 653

Appendix B – One Hundred Addition Facts 654

Appendix C – One Hundred Multiplication Facts 655

Appendix D – Negative Exponents 657


Appendix E – Scientific Notation 663

Appendix F – More about Scientific Notation 667

Solutions to Selected Practice Problems S-1

Answers to Odd-Numbered Problems A-1

Index I-1



Preface to the Instructor

I have a passion for teaching mathematics. That passion carries through to my textbooks. My goal is a textbook that is user-friendly for both students and instructors. For students, this book forms a bridge to beginning algebra with clear, concise writing, continuous review, and interesting applications. For the instructor, I build features into the text that reinforce the habits and study skills we know will bring success to our students.

The third edition of *Basic College Mathematics* builds upon these strengths.

Applying the Concepts Students are always curious about how the mathematics they are learning can be applied, so we have included applied problems in most of the problem sets in the book and have labeled them to show students the array of uses of mathematics. These applied problems are written in an inviting way, many times accompanied by new interesting illustrations to help students overcome some of the apprehension associated with application problems.

Getting Ready for the Next Section Many students think of mathematics as a collection of discrete, unrelated topics. Their instructors know that this is not the case. The new Getting Ready for the Next Section problems reinforce the cumulative, connected nature of this course by showing how the concepts and techniques flow one from another throughout the course. These problems review all of the material that students will need in order to be successful, forming a bridge to the next section, gently preparing students to move forward.

Maintaining Your Skills One of the major themes of our book is continuous review. We strive to continuously hone techniques learned earlier by keeping the important concepts in the forefront of the course. The Maintaining Your Skills problems review material from the previous chapter, or they review problems that form the foundation of the course—the problems that you expect students to be able to solve when they get to the next course.

The Basic Mathematics Course as a Bridge to Further Success

Basic mathematics is a bridge course. The course and its syllabus bring the student to the level of ability required of college students, while getting them ready to make a successful start in introductory algebra.

Our Proven Commitment to Student Success

After two successful editions, we have developed several interlocking, proven features that will improve students' chances of success in the course. We place practical, easily understood study skills in the first five chapters scattered throughout the sections. Here are some of the other, important success features of the book.

Chapter Pretest These are meant as a diagnostic test taken before starting the work in the chapter. Much of the material here is learned in the chapter so proficiency on the pretests is not necessary.

Getting Ready for Chapter X This is a set of problems from previous chapters that students need in order to be successful in the current chapter. These are review problems intended to reinforce the idea that all topics in the course are built on previous topics.

Getting Ready for Class Just before each problem set is a list of four questions under the heading Getting Ready for Class. These problems require written responses from students and are to be done before students come to class. The answers can be found by reading the preceding section. These questions reinforce the importance of reading the section before coming to class.

Blueprint for Problem Solving Found in the main text, this feature is a detailed outline of steps required to successfully attempt application problems. Intended as a guide to problem solving in general, the blueprint takes the student through the solution process to various kinds of applications.

A Glimpse of Algebra These sections, found in most chapters, show how some of the material in the chapter looks when it is extended to algebra.

Chapter Openings Each chapter opens with an introduction in which a real-world application is used to stimulate interest in the chapter. We expand on these opening applications later in the chapter.

End-of-Chapter Summary, Review, and Assessment

We have learned that students are more comfortable with a chapter that sums up what they have learned thoroughly and accessibly, and reinforces concepts and techniques well. To help students grasp concepts and get more practice, each chapter ends with the following features that together give a comprehensive re-examination of the chapter.

Chapter Summary The chapter summary recaps all main points from the chapter in a visually appealing grid. In the margin, next to each topic, is an example that illustrates the type of problem associated with the topic being reviewed. Our way of summarizing shows students that concepts in mathematics do relate—and that mastering one concept is a bridge to the next. When students prepare for a test, they can use the chapter summary as a guide to the main concepts of the chapter.

Chapter Review Following the chapter summary in each chapter is the chapter review. It contains an extensive set of problems that review all the main topics in the chapter. This feature can be used flexibly, as assigned review, as a recommended self-test for students as they prepare for examinations, or as an in-class quiz or test.

Cumulative Review Starting in Chapter 2, following the chapter review in each chapter is a set of problems that reviews material from all preceding chapters. This keeps students current with past topics and helps them retain the information they study.

Chapter Test A set of problems representative of all the main points of the chapter. These don't contain as many problems as the chapter review, and should be completed in 50 minutes.

Chapter Projects Each chapter closes with a pair of projects. One is a group project, suitable for students to work on in class. Group projects list details about number of participants, equipment, and time, so that instructors can determine how well the project fits into their classroom. The second project is a research project for students to do outside of class and tends to be open ended.

Supplements for the Instructor

Please contact your sales representative.

Annotated Instructor's Edition ISBN-10: 0840053118 | ISBN-13: 9780840053114
This special instructor's version of the text contains answers next to all exercises and instructor notes at the appropriate location.

Complete Solutions Manual ISBN-10: 0840061595 | ISBN-13: 9780840061591
This manual contains complete solutions for all problems in the text.

Enhanced WebAssign The logo for Enhanced WebAssign features the word "WebAssign" in a bold, black, sans-serif font. Above the "A" in "Assign", the word "ENHANCED" is written in a smaller, red, sans-serif font, enclosed within a red, rounded rectangular shape.

Instant feedback and ease of use are just two reasons why WebAssign is the most widely used homework system in higher education. WebAssign's homework delivery system allows you to assign, collect, grade, and record homework assignments via the web. And now, this proven system has been enhanced to include links to textbook sections, video examples, and problem-specific tutorials. For further utility, students will also have the option to purchase an online multimedia eBook of the text. Enhanced WebAssign is more than a homework system—it is a complete learning system for math students.

PowerLecture with ExamView® Algorithmic Equations

ISBN-10: 0840061609 | ISBN-13: 9780840061607

This CD-ROM provides the instructor with dynamic media tools for teaching. Create, deliver, and customize tests (both print and online) in minutes with *ExamView® Computerized Testing Featuring Algorithmic Equations*. Easily build solution sets for homework or exams using *Solution Builder's* online solutions manual. Microsoft® PowerPoint® lecture slides and figures from the book are also included on this CD-ROM.

Text-Specific Videos ISBN-10: 0840053134 | ISBN-13: 9780840053138

This set of text-specific videos features segments taught by the author, worked-out solutions to many examples in the book. Available to instructors only.

Supplements for the Student

Enhanced WebAssign The logo for Enhanced WebAssign features the word "WebAssign" in a bold, black, sans-serif font. Above the "A" in "Assign", the word "ENHANCED" is written in a smaller, red, sans-serif font, enclosed within a red, rounded rectangular shape.

Get instant feedback on your homework assignments with Enhanced WebAssign (assigned by your instructor). This online homework system is easy to use and includes helpful links to textbook sections, video examples, and problem-specific tutorials. For further ease of use, purchase an online multimedia eBook via WebAssign.

Student Solutions Manual ISBN-10: 0840053126 | ISBN-13: 9780840053121

This manual contains complete annotated solutions to all odd problems in the problem sets and all chapter review and chapter test exercises.

Acknowledgments

I would like to thank my editor at Cengage Learning, Marc Bove, for his help and encouragement with this project. Devin Christ, the head of production at our office, was a tremendous help in organizing and planning the details of putting this book together. Mary Gentilucci, Staci Truelson and Tammy Fisher-Vasta assisted with error checking and proofreading. Special thanks to my other friends at Cengage Learning and Jennifer Riden, project manager, who did a great job of coordinating everyone and everything in order to publish this book.

Pat McKeague
February 2010

Preface to the Student

I often find my students asking themselves the question “Why can’t I understand this stuff the first time?” The answer is “You’re not expected to.” Learning a topic in mathematics isn’t always accomplished the first time around. There are many instances when you will find yourself reading over new material a number of times before you can begin to work problems. That’s just the way things are in mathematics. If you don’t understand a topic the first time you see it, that doesn’t mean there is something wrong with you. Understanding mathematics takes time. The process of understanding requires reading the book, studying the examples, working problems, and getting your questions answered.

How to Be Successful in Mathematics

1. If you are in a lecture class, be sure to attend all class sessions on time. You cannot know exactly what goes on in class unless you are there. Missing class and then expecting to find out what went on from someone else is not the same as being there yourself.

2. Read the book. It is best to read the section that will be covered in class beforehand. Reading in advance, even if you do not understand everything you read, is still better than going to class with no idea of what will be discussed.

3. Work problems every day and check your answers. The key to success in mathematics is working problems. The more problems you work, the better you will become at working them. The answers to the odd-numbered problems are given in the back of the book. When you have finished an assignment, be sure to compare your answers with those in the book. If you have made a mistake, find out what it is, and correct it.

4. Do it on your own. Don’t be misled into thinking someone else’s work is your own. Having someone else show you how to work a problem is not the same as working the same problem yourself. It is okay to get help when you are stuck. As a matter of fact, it is a good idea. Just be sure you do the work yourself.

5. Review every day. After you have finished the problems your instructor has assigned, take another 15 minutes and review a section you have already completed. The more you review, the longer you will retain the material you have learned.

6. Don’t expect to understand every new topic the first time you see it. Sometimes you will understand everything you are doing, and sometimes you won’t. That’s just the way things are in mathematics. Expecting to understand each new topic the first time you see it can lead to disappointment and frustration. The process of understanding takes time. It requires that you read the book, work problems, and get your questions answered.

7. Spend as much time as it takes for you to master the material. No set formula exists for the exact amount of time you need to spend on mathematics to master it. You will find out as you go along what is or isn’t enough time for you. If you end up spending 2 or more hours on each section in order to master the material there, then that’s how much time it takes; trying to get by with less will not work.

8. Relax. It’s probably not as difficult as you think.

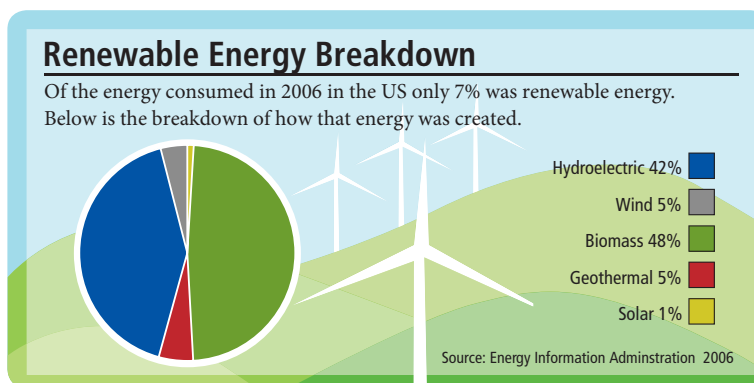
Whole Numbers

1



Introduction

The Hoover Dam, as shown in an image from Google Earth, sits on the border of Nevada and Arizona and was the largest producer of hydroelectric power in the United States when it was completed in 1935. Hydroelectric power is the most widely used form of renewable energy today, accounting for about 19% of the world's electricity. Hydroelectricity is a very clean source of power as it does not produce carbon dioxide or any waste products.



As the chart indicates, the demand for energy is soaring, and developing new sources of energy production is more important than ever. In this chapter we will begin reading and understanding this type of chart.

Chapter Outline

- 1.1 Place Value and Names for Numbers
- 1.2 Addition with Whole Numbers, and Perimeter
- 1.3 Rounding and Estimating
- 1.4 Subtraction with Whole Numbers
- 1.5 Multiplication with Whole Numbers, and Area
- 1.6 Division with Whole Numbers
- 1.7 Exponents and Order of Operations

Chapter Pretest

The pretest below contains problems that are representative of the problems you will find in the chapter. Those of you studying on your own, or working in a self-paced course, can use the pretest to determine which parts of the chapter will require the most work on your part.

1. Write 7,062 in expanded form.

2. Write 3,409,021 in words.

3. Write eighteen thousand, five hundred seven with digits instead of words.

4. Add.

$$\begin{array}{r} 341 \\ +256 \\ \hline \end{array}$$

5. Add.

$$\begin{array}{r} 1,029 \\ +4,381 \\ \hline \end{array}$$

6. Subtract.

$$\begin{array}{r} 512 \\ -301 \\ \hline \end{array}$$

7. Subtract.

$$\begin{array}{r} 1,700 \\ -1,436 \\ \hline \end{array}$$

8. Multiply.

$$\begin{array}{r} 27 \\ \times 8 \\ \hline \end{array}$$

9. Multiply.

$$\begin{array}{r} 536 \\ \times 40 \\ \hline \end{array}$$

10. Divide.

$$18 \overline{)576}$$

11. Divide.

$$23 \overline{)4,018}$$

Round.

12. 513 to the nearest ten

13. 6,798 to the nearest hundred

Simplify.

14. $7 + 3 \cdot 2^3$

15. $4 + 5[2 + 6(9 - 7)]$

16. Write the expression using symbols, then simplify.

6 times the difference of 12 and 8.

Getting Ready for Chapter 1

To get started in this book, we assume that you can do simple addition and multiplication problems. To check to see that you are ready for the chapter, fill in each of the tables below. If you have difficulty, you can find further practice in Appendix A and Appendix B at the back of the book.

TABLE 1

Addition Facts

+	0	1	2	3	4	5	6	7	8	9
0										
1										
2										
3										
4										
5										
6										
7										
8										
9										

TABLE 2

Multiplication Facts

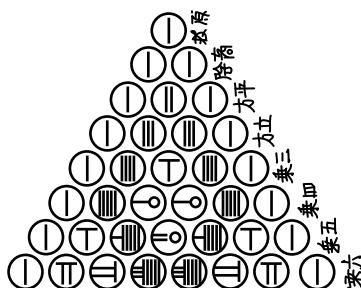
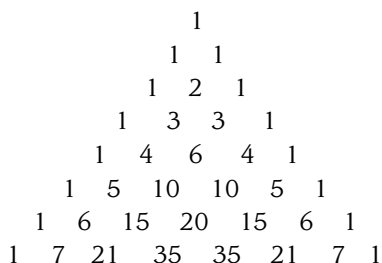
×	0	1	2	3	4	5	6	7	8	9
0										
1										
2										
3										
4										
5										
6										
7										
8										
9										

Place Value and Names for Numbers

1.1

Introduction . . .

The two diagrams below are known as Pascal's triangle, after the French mathematician and philosopher Blaise Pascal (1623–1662). Both diagrams contain the same information. The one on the left contains numbers in our number system; the one on the right uses numbers from Japan in 1781.



PASCAL'S TRIANGLE IN JAPAN
From Mural Chūzen's *Sampō Dōshi-mon* (1781)

A Place Value

Our number system is based on the number 10 and is therefore called a “base 10” number system. We write all numbers in our number system using the *digits* 0, 1, 2, 3, 4, 5, 6, 7, 8, and 9. The positions of the digits in a number determine the values of the digits. For example, the 5 in the number 251 has a different value from the 5 in the number 542.

The *place values* in our number system are as follows: The first digit on the right is in the *ones column*. The next digit to the left of the ones column is in the *tens column*. The next digit to the left is in the *hundreds column*. For a number like 542, the digit 5 is in the hundreds column, the 4 is in the tens column, and the 2 is in the ones column.

If we keep moving to the left, the columns increase in value. The table shows the name and value of each of the first seven columns in our number system:

Millions Column	Hundred Thousands Column	Ten Thousands Column	Thousands Column	Hundreds Column	Tens Column	Ones Column
1,000,000	100,000	10,000	1,000	100	10	1

EXAMPLE 1

Give the place value of each digit in the number 305,964.

SOLUTION Starting with the digit at the right, we have:

4 in the ones column, 6 in the tens column, 9 in the hundreds column, 5 in the thousands column, 0 in the ten thousands column, and 3 in the hundred thousands column.

Objectives

- A** State the place value for numbers in standard notation.
- B** Write a whole number in expanded form.
- C** Write a number in words.
- D** Write a number from words.




Note Next to each Example in the text is a Practice Problem with the same number. After you read through an Example, try the Practice Problem next to it. The answers to the Practice Problems are at the bottom of the page. Be sure to check your answers as you work these problems. The worked-out solutions to all Practice Problems with more than one step are given in the back of the book. So if you find a Practice Problem that you cannot work correctly, you can look up the correct solution to that problem in the back of the book.

PRACTICE PROBLEMS

1. Give the place value of each digit in the number 46,095.

Answer

1. 5 ones, 9 tens, 0 hundreds, 6 thousands, 4 ten thousands



Large Numbers

The photograph shown here was taken by the Hubble telescope in April 2002. The object in the photograph is called the *Cone Nebula*. In astronomy, distances to objects like the Cone Nebula are given in light-years, the distance light travels in a year. If we assume light travels 186,000 miles in one second, then a light-year is 5,865,696,000,000 miles; that is

5 trillion, 865 billion, 696 million miles

To find the place value of digits in large numbers, we can use Table 1. Note how the Ones, Thousands, Millions, Billions, and Trillions categories are each broken into Ones, Tens, and Hundreds. Note also that we have written the digits for our light-year in the last row of the table.

Trillions			Billions			Millions			Thousands			Ones		
Hundreds	Tens	Ones	Hundreds	Tens	Ones	Hundreds	Tens	Ones	Hundreds	Tens	Ones	Hundreds	Tens	Ones
		5	8	6	5	6	9	6	0	0	0	0	0	0

2. Give the place value of each digit in the number 21,705,328,456.

EXAMPLE 2

Give the place value of each digit in the number 73,890,672,540.

SOLUTION The following diagram shows the place value of each digit.

Ten Billions	Billions	Hundred Millions	Ten Millions	Millions	Hundred Thousands	Ten Thousands	Thousands	Hundreds	Tens	Ones
7	3,	8	9	0,	6	7	2,	5	4	0

B Expanded Form

We can use the idea of place value to write numbers in *expanded form*. For example, the number 542 can be written in expanded form as

$$542 = 500 + 40 + 2$$

because the 5 is in the hundreds column, the 4 is in the tens column, and the 2 is in the ones column.

Here are more examples of numbers written in expanded form.

EXAMPLE 3

Write 5,478 in expanded form.

SOLUTION $5,478 = 5,000 + 400 + 70 + 8$

We can use money to make the results from Example 3 more intuitive. Suppose you have \$5,478 in cash as follows:

3. Write 3,972 in expanded form.

Answers

2. 6 ones, 5 tens, 4 hundreds, 8 thousands, 2 ten thousands, 3 hundred thousands, 5 millions, 0 ten millions, 7 hundred millions, 1 billion, 2 ten billions
3. $3,000 + 900 + 70 + 2$



Using this diagram as a guide, we can write

$$\$5,478 = \$5,000 + \$400 + \$70 + \$8$$

which shows us that our work writing numbers in expanded form is consistent with our intuitive understanding of the different denominations of money.

EXAMPLE 4

Write 354,798 in expanded form.

SOLUTION $354,798 = 300,000 + 50,000 + 4,000 + 700 + 90 + 8$

EXAMPLE 5

Write 56,094 in expanded form.

SOLUTION Notice that there is a 0 in the hundreds column. This means we have 0 hundreds. In expanded form we have

$$56,094 = 50,000 + 6,000 + 90 + 4$$

↑
Note that we don't have to include the 0 hundreds

EXAMPLE 6

Write 5,070,603 in expanded form.

SOLUTION The columns with 0 in them will not appear in the expanded form.

$$5,070,603 = 5,000,000 + 70,000 + 600 + 3$$

STUDY SKILLS

Some of the students enrolled in my mathematics classes develop difficulties early in the course. Their difficulties are not associated with their ability to learn mathematics; they all have the potential to pass the course. Research has identified three variables that affect academic achievement. These are (1) how much math you know before entering a course, (2) the quality of instruction (classroom atmosphere, teaching style, textbook content and format), and (3) your academic self concept, attitude, anxiety, and study habits. As a student, you have the most control over the last variable. Your academic self concept is a significant predictor of mathematics achievement. Students who get off to a poor start do so because they have not developed the study skills necessary to be successful in mathematics. Throughout this textbook you will find tips and things you can do to begin to develop effective study skills and improve your academic self concept.

Put Yourself on a Schedule

The general rule is that you spend two hours on homework for every hour you are in class. Make a schedule for yourself in which you set aside two hours each day to work on this course. Once you make the schedule, stick to it. Don't just complete your assignments and then stop. Use all the time you have set aside. If you complete the assignment and have time left over, read the next section in the book, and then work more problems. As the course progresses you may find that two hours a day is not enough time to master the material in this course. If it takes you longer than two hours a day to reach your goals for this course, then that's how much time it takes. Trying to get by with less will not work.

4. Write 271,346 in expanded form.

5. Write 71,306 in expanded form.

6. Write 4,003,560 in expanded form.

Answers

4. $200,000 + 70,000 + 1,000 + 300 + 40 + 6$
5. $70,000 + 1,000 + 300 + 6$
6. $4,000,000 + 3,000 + 500 + 60$

C Writing Numbers in Words

The idea of place value and expanded form can be used to help write the names for numbers. Naming numbers and writing them in words takes some practice. Let's begin by looking at the names of some two-digit numbers. Table 2 lists a few. Notice that the two-digit numbers that do not end in 0 have two parts. These parts are separated by a hyphen.

TABLE 2

Number	In English	Number	In English
25	<i>Twenty-five</i>	30	<i>Thirty</i>
47	<i>Forty-seven</i>	62	<i>Sixty-two</i>
93	<i>Ninety-three</i>	77	<i>Seventy-seven</i>
88	<i>Eighty-eight</i>	50	<i>Fifty</i>

The following examples give the names for some larger numbers. In each case the names are written according to the place values given in Table 1.

EXAMPLE 7

Write each number in words.

- a. 452 b. 397 c. 608

SOLUTION

- a. Four hundred fifty-two
 b. Three hundred ninety-seven
 c. Six hundred eight

EXAMPLE 8

Write each number in words.

- a. 3,561 b. 53,662 c. 547,801

SOLUTION

- a. Three thousand, five hundred sixty-one



Notice how the comma separates the thousands from the hundreds

- b. Fifty-three thousand, six hundred sixty-two
 c. Five hundred forty-seven thousand, eight hundred one

EXAMPLE 9

Write each number in words.

- a. 507,034,005
 b. 739,600,075
 c. 5,003,007,006

SOLUTION

- a. Five hundred seven million, thirty-four thousand, five
 b. Seven hundred thirty-nine million, six hundred thousand, seventy-five
 c. Five billion, three million, seven thousand, six

7. Write each number in words.

- a. 724
 b. 595
 c. 307

8. Write each number in words.

- a. 4,758
 b. 62,779
 c. 305,440

9. Write each number in words.

- a. 707,044,002
 b. 452,900,008
 c. 4,008,002,001

Answers

7. a. Seven hundred twenty-four
 b. Five hundred ninety-five
 c. Three hundred seven
 8. a. Four thousand, seven hundred fifty-eight
 b. Sixty-two thousand, seven hundred seventy-nine
 c. Three hundred five thousand, four hundred forty
 9. a. Seven hundred seven million, forty-four thousand, two
 b. Four hundred fifty-two million, nine hundred thousand, eight
 c. Four billion, eight million, two thousand, one

STUDY SKILLS**Find Your Mistakes and Correct Them**

There is more to studying mathematics than just working problems. You must always check your answers with the answers in the back of the book. When you have made a mistake, find out what it is, and then correct it. Making mistakes is part of the process of learning mathematics. I have never had a successful student who didn't make mistakes—lots of them. Your mistakes are your guides to understanding; look forward to them.

Here is a practical reason for being able to write numbers in word form.

Michael Smith 1221 Main Street Anytown, NY 11001	1001
	DATE <u>7/8/08</u>
PAY TO THE ORDER OF <u>Campus Book Store</u>	\$ <u>423.00</u>
<u>Four hundred twenty-three and no cents</u>	DOLLARS
	<u>Michael Smith</u>
Ⓢ 01001 Ⓢ 0111332200233 Ⓢ 1142232 Ⓢ	

D Writing Numbers from Words

The next examples show how we write a number given in words as a number written with digits.

EXAMPLE 10

Write five thousand, six hundred forty-two, using digits instead of words.

SOLUTION *Five thousand, six hundred forty-two*

5, 6 42

EXAMPLE 11

Write each number with digits instead of words.

- Three million, fifty-one thousand, seven hundred
- Two billion, five
- Seven million, seven hundred seven

SOLUTION a. 3,051,700

b. 2,000,000,005

c. 7,000,707

10. Write six thousand, two hundred twenty-one using digits instead of words.

11. Write each number with digits instead of words.
- Eight million, four thousand, two hundred
 - Twenty-five million, forty
 - Nine million, four hundred thirty-one

Answers

10. 6,221

11. a. 8,004,200

b. 25,000,040

c. 9,000,431

Sets and the Number Line

In mathematics a collection of numbers is called a *set*. In this chapter we will be working with the set of *counting numbers* and the set of *whole numbers*, which are defined as follows:

$$\text{Counting numbers} = \{1, 2, 3, \dots\}$$

$$\text{Whole numbers} = \{0, 1, 2, 3, \dots\}$$

The dots mean “and so on,” and the braces $\{ \}$ are used to group the numbers in the set together.

Another way to visualize the whole numbers is with a *number line*. To draw a number line, we simply draw a straight line and mark off equally spaced points along the line, as shown in Figure 1. We label the point at the left with 0 and the rest of the points, in order, with the numbers 1, 2, 3, 4, 5, and so on.

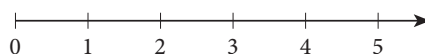


FIGURE 1

The arrow on the right indicates that the number line can continue in that direction forever. When we refer to numbers in this chapter, we will always be referring to the whole numbers.

STUDY SKILLS

Gather Information on Available Resources

You need to anticipate that you will need extra help sometime during the course. There is a form to fill out in Appendix A to help you gather information on resources available to you. One resource is your instructor; you need to know your instructor's office hours and where the office is located. Another resource is the math lab or study center, if they are available at your school. It also helps to have the phone numbers of other students in the class, in case you miss class. You want to anticipate that you will need these resources, so now is the time to gather them together.

Getting Ready for Class

After reading through the preceding section, respond in your own words and in complete sentences.

1. Give the place value of the 9 in the number 305,964.
2. Write the number 742 in expanded form.
3. Place a comma and a hyphen in the appropriate place so that the number 2,345 is written correctly in words below:

two thousand three hundred forty five

4. Is there a largest whole number?

Note

Counting numbers are also called natural numbers.

Problem Set 1.1

A Give the place value of each digit in the following numbers. [Examples 1, 2]

1. 78

2. 93

3. 45

4. 79

5. 348

6. 789

7. 608

8. 450

9. 2,378

10. 6,481

11. 273,569

12. 768,253

Give the place value of the 5 in each of the following numbers.

13. 458,992

14. 75,003,782

15. 507,994,787

16. 320,906,050

17. 267,894,335

18. 234,345,678,789

19. 4,569,000

20. 50,000

B Write each of the following numbers in expanded form. [Examples 3–6]

21. 658

22. 479

23. 68

24. 71

25. 4,587

26. 3,762

27. 32,674

28. 54,883

29. 3,462,577

30. 5,673,524

31. 407

32. 508

33. 30,068

34. 50,905

35. 3,004,008

36. 20,088,060

C Write each of the following numbers in words. [Examples 7–9]

37. 29

38. 75

39. 40

40. 90

41. 573

42. 895

43. 707

44. 405

45. 770

46. 450

47. 23,540

48. 56,708

49. 3,004

50. 5,008

51. 3,040

52. 5,080

53. 104,065,780

54. 637,008,500

55. 5,003,040,008

56. 7,050,800,001

57. 2,546,731

58. 6,998,454

D Write each of the following numbers with digits instead of words. [Examples 10, 11]

59. Three hundred twenty-five

60. Forty-eight

61. Five thousand, four hundred thirty-two

62. One hundred twenty-three thousand, sixty-one

63. Eighty-six thousand, seven hundred sixty-two

64. One hundred million, two hundred thousand, three hundred

65. Two million, two hundred

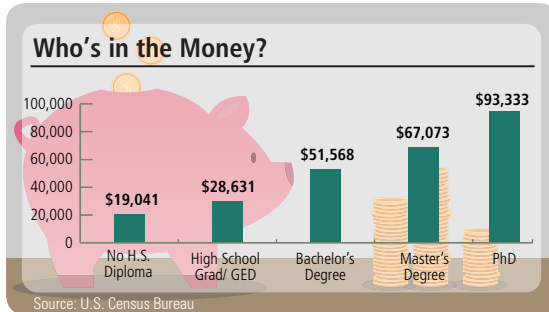
66. Two million, two

67. Two million, two thousand, two hundred

68. Two billion, two hundred thousand, two hundred two

Applying the Concepts


69. The illustration shows the average income of workers 18 and older by education.



Write the following numbers in words:

- the average income of someone with only a high school education
- the average income of someone with a Ph.D.

70. Write the following numbers in words from the information in the given illustration:



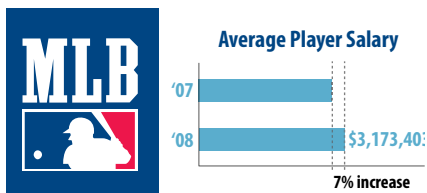
- the height in feet of the Taipei 101 building in Taipei, Taiwan
- the height in feet of the Sears Tower in Chicago, Illinois

71. **MP3s** A new MP3 player has the ability to hold over 125,000 songs. Write the place value of the 1 in the number of songs.

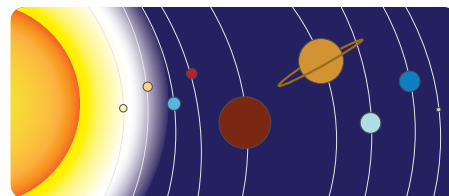


72. **Music Downloads** The top three downloaded songs for one month on Amazon.com had a combined 450,320 downloads. Write the place value of the 3 in the number of downloads.

73. **Baseball Salaries** According to mlb.com, Major League Baseball's 2008 average player salary was \$3,173,403, representing an increase of 7% from the previous season's average. Write 3,173,403 in words.



74. **Astronomy** The distance from the sun to the earth is 92,897,416 miles. Write this number in expanded form.



- 75. Web Searches** The phrase “math help” was searched on Google approximately 21,480 times in one month in 2008. Write this number in words.
- 76. Web Searches** The phrase “math help” was searched on Yahoo approximately 6,180 times in one month in 2008. Write this number in words.

Writing Checks In each of the checks below, fill in the appropriate space with the dollar amount in either digits or in words.

77.

Michael Smith 1221 Main Street Anytown, NY 11001	DATE <u>7/8/08</u>	1002
PAY TO THE ORDER OF <u>Sunshine Apartment Complex</u>	\$ <u>750.00</u>	
	DOLLARS	
	<u>Michael Smith</u>	
⑆01001⑆ 0111332200233⑆ 1142232⑆		

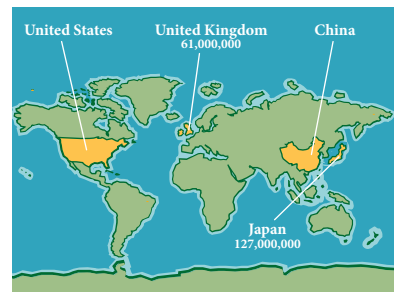
78.

Michael Smith 1221 Main Street Anytown, NY 11001	DATE <u>7/8/08</u>	1003
PAY TO THE ORDER OF <u>Electric and Gas Company</u>	\$ <input type="text"/>	
	<u>Two hundred sixteen dollars and no cents</u>	DOLLARS
	<u>Michael Smith</u>	
⑆01001⑆ 0111332200233⑆ 1142232⑆		

Populations of Countries The table below gives estimates of the populations of some countries for mid-year 2008. The first column under *Population* gives the population in digits. The second column gives the population in words. Fill in the blanks.

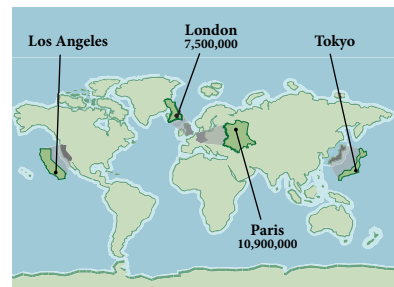
Country	Population	
	Digits	Words
79. United States	_____	Three hundred four million
80. People's Republic of China	_____	One billion, three hundred thirty million
81. Japan	127,000,000	_____
82. United Kingdom	61,000,000	_____

(From U.S. Census Bureau, International Data Base)



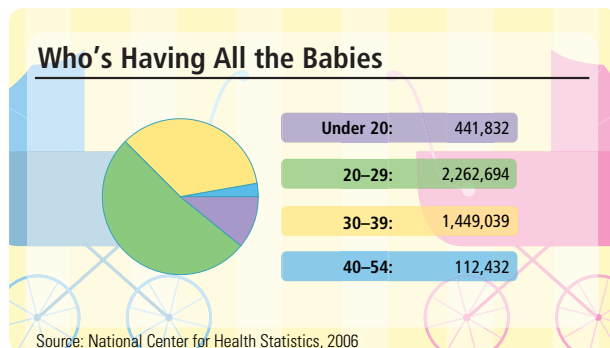
Populations of Cities The table below gives estimates of the populations of some cities for mid-year 2008. The first column under *Population* gives the population in digits. The second column gives the population in words. Fill in the blanks.

City	Population	
	Digits	Words
83. Tokyo	_____	Thirty-six million
84. Los Angeles	_____	Eighteen million
85. Paris	10,900,000	_____
86. London	7,500,000	_____



Introduction . . .

The chart shows the number of babies born in 2006, grouped together according to the age of mothers.



There is much more information available from the table than just the numbers shown. For instance, the chart tells us how many babies were born to mothers less than 30 years of age. But to find that number, we need to be able to do addition with whole numbers. Let's begin by visualizing addition on the number line.

Facts of Addition

Using lengths to visualize addition can be very helpful. In mathematics we generally do so by using the number line. For example, we add 3 and 5 on the number line like this: Start at 0 and move to 3, as shown in Figure 1. From 3, move 5 more units to the right. This brings us to 8. Therefore, $3 + 5 = 8$.

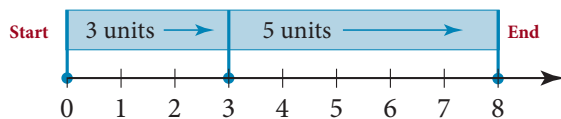


FIGURE 1

If we do this kind of addition on the number line with all combinations of the numbers 0 through 9, we get the results summarized in Table 1 on the next page.

We call the information in Table 1 our basic addition facts. Your success with the examples and problems in this section depends on knowing the basic addition facts.

Objectives

- A** Add whole numbers.
- B** Understand the notation and vocabulary of addition.
- C** Use the properties of addition.
- D** Find a solution to an equation by inspection.
- E** Find the perimeter of a figure.

Note

Table 1 is a summary of the addition facts that you *must* know in order to make a successful start in your study of basic mathematics. You *must* know how to add any pair of numbers that come from the list. You *must* be fast and accurate. You don't want to have to think about the answer to $7 + 9$. You should know it's 16. Memorize these facts now. Don't put it off until later.

Appendix B at the back of the book has 100 problems on the basic addition facts for you to practice. You may want to go there now and work those problems.

PRACTICE PROBLEMS

1. Add: $63 + 25$

Note

To show *why* we add digits with the same place value, we can write each number showing the place value of the digits:

$$\begin{array}{l} 43 = 4 \text{ tens} + 3 \text{ ones} \\ + 52 = \underline{5 \text{ tens} + 2 \text{ ones}} \\ \quad \quad \quad 9 \text{ tens} + 5 \text{ ones} \end{array}$$

2. Add: $342 + 605$

TABLE 1

ADDITION TABLE										
+	0	1	2	3	4	5	6	7	8	9
0	0	1	2	3	4	5	6	7	8	9
1	1	2	3	4	5	6	7	8	9	10
2	2	3	4	5	6	7	8	9	10	11
3	3	4	5	6	7	8	9	10	11	12
4	4	5	6	7	8	9	10	11	12	13
5	5	6	7	8	9	10	11	12	13	14
6	6	7	8	9	10	11	12	13	14	15
7	7	8	9	10	11	12	13	14	15	16
8	8	9	10	11	12	13	14	15	16	17
9	9	10	11	12	13	14	15	16	17	18

We read Table 1 in the following manner: Suppose we want to use the table to find the answer to $3 + 5$. We locate the 3 in the column on the left and the 5 in the row at the top. We read *across* from the 3 and *down* from the 5. The entry in the table that is across from 3 and below 5 is 8.

A Adding Whole Numbers

To add whole numbers, we add digits within the same place value. First we add the digits in the ones place, then the tens place, then the hundreds place, and so on.

EXAMPLE 1

Add: $43 + 52$

SOLUTION This type of addition is best done vertically. First we add the digits in the ones place.

$$\begin{array}{r} 43 \\ + 52 \\ \hline 5 \end{array}$$

Then we add the digits in the tens place.

$$\begin{array}{r} 43 \\ + 52 \\ \hline 95 \end{array}$$

EXAMPLE 2

Add: $165 + 801$

SOLUTION Writing the sum vertically, we have

$$\begin{array}{r} 165 \\ + 801 \\ \hline 966 \end{array}$$

← Add ones place

↑ Add tens place

↑ Add hundreds place

Answers

1. 88
2. 947

Addition with Carrying

In Examples 1 and 2, the sums of the digits with the same place value were always 9 or less. There are many times when the sum of the digits with the same place value will be a number larger than 9. In these cases we have to do what is called *carrying* in addition. The following examples illustrate this process.

EXAMPLE 3

Add: $197 + 213 + 324$

SOLUTION We write the sum vertically and add digits with the same place value.

$$\begin{array}{r} ^1 \\ 197 \\ 213 \\ + 324 \\ \hline ^1 \\ 4 \end{array}$$

When we add the ones, we get $7 + 3 + 4 = 14$
We write the 4 and carry the 1 to the tens column

$$\begin{array}{r} ^{11} \\ 197 \\ 213 \\ + 324 \\ \hline ^{11} \\ 34 \end{array}$$

We add the tens, including the 1 that was carried over from the last step. We get 13, so we write the 3 and carry the 1 to the hundreds column

$$\begin{array}{r} ^{11} \\ 197 \\ 213 \\ + 324 \\ \hline ^{11} \\ 734 \end{array}$$

We add the hundreds, including the 1 that was carried over from the last step

EXAMPLE 4

Add: $46,789 + 2,490 + 864$

SOLUTION We write the sum vertically—with the digits with the same place value aligned—and then use the shorthand form of addition.

$$\begin{array}{r} ^1 ^2 ^2 ^1 ^1 \\ 4 \\ \\ \\ \hline ^5 ^0 ^1 ^4 ^3 \\ \\ \\ \\ \end{array}$$

These are the numbers that have been carried

Write the 3; carry the 1
Write the 4; carry the 2
Write the 1; carry the 2
Write the 0; carry the 1
No carrying necessary

Ones
Tens
Hundreds
Thousands
Ten thousands

Adding numbers as we are doing here takes some practice. Most people don't make mistakes in carrying. Most mistakes in addition are made in adding the numbers in the columns. That is why it is so important that you are accurate with the basic addition facts given in this chapter.

B Vocabulary

The word we use to indicate addition is the word *sum*. If we say “the sum of 3 and 5 is 8,” what we mean is $3 + 5 = 8$. The word *sum* always indicates addition. We can state this fact in symbols by using the letters a and b to represent numbers.

3. Add.
- $375 + 121 + 473$
 - $495 + 699 + 978$

Note

Notice that Practice Problem 3 has two parts. Part a is similar to the problem shown in Example 3. Part b is similar also, but a little more challenging in nature. We will do this from time to time throughout the text. If a practice problem contains more parts than the example to which it corresponds, then the additional parts cover the same concept, but are more challenging than Part a.

4. Add.
- $57,904 + 7,193 + 655$
 - $68,495 + 7,236 + 878 + 29 + 5$

Answers

3. a. 969 b. 2,172
4. a. 65,752 b. 76,643

Note

When mathematics is used to solve every-day problems, the problems are almost always stated in words. The translation of English to symbols is a very important part of mathematics.

Definition

If a and b are any two numbers, then the **sum** of a and b is $a + b$. To find the sum of two numbers, we add them.

Table 2 gives some phrases and sentences in English and their mathematical equivalents written in symbols.

TABLE 2

In English	In Symbols
The sum of 4 and 1	$4 + 1$
4 added to 1	$1 + 4$
8 more than m	$m + 8$
x increased by 5	$x + 5$
The sum of x and y	$x + y$
The sum of 2 and 4 is 6.	$2 + 4 = 6$

C Properties of Addition

Once we become familiar with addition, we may notice some facts about addition that are true regardless of the numbers involved. The first of these facts involves the number 0 (zero).

Whenever we add 0 to a number, the result is the original number. For example,

$$7 + 0 = 7 \quad \text{and} \quad 0 + 3 = 3$$

Because this fact is true no matter what number we add to 0, we call it a property of 0.

Addition Property of 0

If we let a represent any number, then it is always true that

$$a + 0 = a \quad \text{and} \quad 0 + a = a$$

In words: Adding 0 to any number leaves that number unchanged.

A second property we notice by becoming familiar with addition is that the order of two numbers in a sum can be changed without changing the result.

$$\begin{array}{l} 3 + 5 = 8 \quad \text{and} \quad 5 + 3 = 8 \\ 4 + 9 = 13 \quad \text{and} \quad 9 + 4 = 13 \end{array}$$

This fact about addition is true for *all* numbers. The order in which you add two numbers doesn't affect the result. We call this fact the *commutative property of addition*, and we write it in symbols as follows.

Commutative Property of Addition

If a and b are any two numbers, then it is always true that

$$a + b = b + a$$

In words: Changing the order of two numbers in a sum doesn't change the result.

Note

When we use letters to represent numbers, as we do when we say "If a and b are any two numbers," then a and b are called variables, because the values they take on vary. We use the variables a and b in the definitions and properties on this page because we want you to know that the definitions and properties are true for all numbers that you will encounter in this book.

STUDY SKILLS**Accept Definitions**

It is important that you don't overcomplicate definitions. When I tell my students that my name is Mr. McKeague, they don't ask "why?" You should approach definitions in the same way. Just accept them as they are, and memorize them if you have to. If someone asks you what the commutative property is, you should be able to respond, "With addition, the commutative property says that if a and b are two numbers then $a + b = b + a$. In other words, you can change the order of two numbers you are adding without changing the result."

EXAMPLE 5

Use the commutative property of addition to rewrite each sum.

a. $4 + 6$

b. $5 + 9$

c. $3 + 0$

d. $7 + n$


SOLUTION The commutative property of addition indicates that we can change the order of the numbers in a sum without changing the result. Applying this property we have:

a. $4 + 6 = 6 + 4$

b. $5 + 9 = 9 + 5$

c. $3 + 0 = 0 + 3$

d. $7 + n = n + 7$

Notice that we did not actually add any of the numbers. The instructions were to use the commutative property, and the commutative property involves only the order of the numbers in a sum. 

The last property of addition we will consider here has to do with sums of more than two numbers. Suppose we want to find the sum of 2, 3, and 4. We could add 2 and 3 first, and then add 4 to what we get:

$$(2 + 3) + 4 = 5 + 4 = 9$$

Or, we could add the 3 and 4 together first and then add the 2:

$$2 + (3 + 4) = 2 + 7 = 9$$

The result in both cases is the same. If we try this with any other numbers, the same thing happens. We call this fact about addition the *associative property of addition*, and we write it in symbols as follows.

Associative Property of Addition

If a , b , and c represent any three numbers, then

$$(a + b) + c = a + (b + c)$$

In words: Changing the grouping of three numbers in a sum doesn't change the result.

5. Use the commutative property of addition to rewrite each sum.
- $7 + 9$
 - $6 + 3$
 - $4 + 0$
 - $5 + n$

Note

This discussion is here to show why we write the next property the way we do. Sometimes it is helpful to look ahead to the property itself (in this case, the associative property of addition) to see what it is that is being justified.

Answer

5. a. $9 + 7$ b. $3 + 6$ c. $0 + 4$
d. $n + 5$

6. Use the associative property of addition to rewrite each sum.

- a. $(3 + 2) + 9$
 b. $(4 + 10) + 1$
 c. $5 + (9 + 1)$
 d. $3 + (8 + n)$

7. Add.

- a. $6 + 2 + 4 + 8 + 3$
 b. $24 + 17 + 36 + 13$

Note

The letter n as we are using it here is a variable, because it represents a number. In this case it is the number that is a solution to an equation.

8. Use inspection to find the solution to each equation.

- a. $n + 9 = 17$
 b. $n + 2 = 10$
 c. $8 + n = 9$
 d. $16 = n + 10$

Answers

6. a. $3 + (2 + 9)$ b. $4 + (10 + 1)$
 c. $(5 + 9) + 1$ d. $(3 + 8) + n$
 7. a. 23 b. 90
 8. a. 8 b. 8 c. 1 d. 6

Chapter 1 Whole Numbers

EXAMPLE 6

Use the associative property of addition to rewrite each sum.

- a. $(5 + 6) + 7$ b. $(3 + 9) + 1$ c. $6 + (8 + 2)$ d. $4 + (9 + n)$

SOLUTION The associative property of addition indicates that we are free to regroup the numbers in a sum without changing the result.

- a. $(5 + 6) + 7 = 5 + (6 + 7)$
 b. $(3 + 9) + 1 = 3 + (9 + 1)$
 c. $6 + (8 + 2) = (6 + 8) + 2$
 d. $4 + (9 + n) = (4 + 9) + n$

The commutative and associative properties of addition tell us that when adding whole numbers, we can use any order and grouping. When adding several numbers, it is sometimes easier to look for pairs of numbers whose sums are 10, 20, and so on.

EXAMPLE 7

Add: $9 + 3 + 2 + 7 + 1$

SOLUTION We find pairs of numbers that we can add quickly:

$$\begin{array}{r} 9 + 3 + 2 + 7 + 1 \\ \swarrow \quad \downarrow \quad \searrow \quad \swarrow \\ = 10 + 10 + 2 \\ = 22 \end{array}$$

D Solving Equations

We can use the addition table to help solve some simple equations. If n is used to represent a number, then the equation

$$n + 3 = 5$$

will be true if n is 2. The number 2 is therefore called a *solution* to the equation, because, when we replace n with 2, the equation becomes a true statement:

$$2 + 3 = 5$$

Equations like this are really just puzzles, or questions. When we say, "Solve the equation $n + 3 = 5$," we are asking the question, "What number do we add to 3 to get 5?"

When we solve equations by reading the equation to ourselves and then stating the solution, as we did with the equation above, we are solving the equation by inspection.

EXAMPLE 8

Find the solution to each equation by inspection.

- a. $n + 5 = 9$
 b. $n + 6 = 12$
 c. $4 + n = 5$
 d. $13 = n + 8$

SOLUTION We find the solution to each equation by using the addition facts given in Table 1.

- a. The solution to $n + 5 = 9$ is 4, because $4 + 5 = 9$.
 b. The solution to $n + 6 = 12$ is 6, because $6 + 6 = 12$.
 c. The solution to $4 + n = 5$ is 1, because $4 + 1 = 5$.
 d. The solution to $13 = n + 8$ is 5, because $13 = 5 + 8$.

E Perimeter

FACTS FROM GEOMETRY Perimeter

We end this section with an introduction to perimeter. Here we will find the perimeter of several different shapes called *polygons*. A *polygon* is a closed geometric figure, with at least three sides, in which each side is a straight line segment.

The most common polygons are squares, rectangles, and triangles. Examples of these are shown in Figure 2.

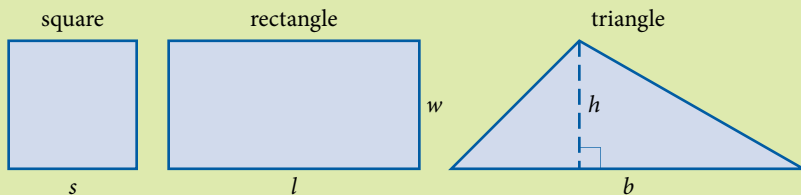


FIGURE 2

In the square, s is the length of the side, and each side has the same length. In the rectangle, l stands for the length, and w stands for the width. The width is usually the lesser of the two. The b and h in the triangle are the base and height, respectively. The height is always perpendicular to the base. That is, the height and base form a 90° , or right, angle where they meet.

Definition

The **perimeter** of any polygon is the sum of the lengths of the sides, and it is denoted with the letter P .

EXAMPLE 9

Find the perimeter of each geometric figure.

- a. 15 inches
- b. 37 feet, 24 feet
- c. 36 yards, 23 yards, 24 yards, 24 yards, 12 yards

SOLUTION In each case we find the perimeter by adding the lengths of all the sides.

- a. The figure is a square. Because the length of each side in the square is the same, the perimeter is

$$P = 15 + 15 + 15 + 15 = 60 \text{ inches}$$

- b. In the rectangle, two of the sides are 24 feet long, and the other two are 37 feet long. The perimeter is the sum of the lengths of the sides.

$$P = 24 + 24 + 37 + 37 = 122 \text{ feet}$$

- c. For this polygon, we add the lengths of the sides together. The result is the perimeter.

$$P = 36 + 23 + 24 + 12 + 24 = 119 \text{ yards}$$

Note

In the triangle, the small square where the broken line meets the base is the notation we use to show that the two line segments meet at right angles. That is, the height h and the base b are perpendicular to each other; the angle between them is 90° .

9. Find the perimeter of each geometric figure.

- a. 7 feet
- b. 88 inches, 33 inches
- c. 44 yards, 66 yards, 77 yards

Answer

9. a. 28 feet b. 242 inches
c. 187 yards

USING TECHNOLOGY**Calculators**

From time to time we will include some notes like this one, which show how a calculator can be used to assist us with some of the calculations in the book. Most calculators on the market today fall into one of two categories: those with algebraic logic and those with function logic. Calculators with algebraic logic have a key with an equals sign on it. Calculators with function logic do not have an equals key. Instead they have a key labeled ENTER or EXE (for execute). Scientific calculators use algebraic logic, and graphing calculators, such as the TI-83, use function logic.

Here are the sequences of keystrokes to use to work the problem shown in Part c of Example 9.

Scientific Calculator: 36 $\boxed{+}$ 23 $\boxed{+}$ 24 $\boxed{+}$ 12 $\boxed{+}$ 24 $\boxed{=}$

Graphing Calculator: 36 $\boxed{+}$ 23 $\boxed{+}$ 24 $\boxed{+}$ 12 $\boxed{+}$ 24 $\boxed{\text{ENT}}$

Getting Ready for Class

After reading through the preceding section, respond in your own words and in complete sentences.

1. What number is the sum of 6 and 8?
2. Make up an addition problem using the number 456 that does not involve carrying.
3. Make up an addition problem using the number 456 that involves carrying from the ones column to the tens column only.
4. What is the perimeter of a geometric figure?

Problem Set 1.2

A Find each of the following sums. (Add.) [Examples 1–4]

1. $3 + 5 + 7$

2. $2 + 8 + 6$

3. $1 + 4 + 9$

4. $2 + 8 + 3$

5. $5 + 9 + 4 + 6$

6. $8 + 1 + 6 + 2$

7. $1 + 2 + 3 + 4 + 5$

8. $5 + 6 + 7 + 8 + 9$

9. $9 + 1 + 8 + 2$

10. $7 + 3 + 6 + 4$

A Add each of the following. (There is no carrying involved in these problems.) [Examples 1, 2]

11.
$$\begin{array}{r} 43 \\ 25 \\ \hline \end{array}$$

12.
$$\begin{array}{r} 56 \\ 23 \\ \hline \end{array}$$

13.
$$\begin{array}{r} 81 \\ 17 \\ \hline \end{array}$$

14.
$$\begin{array}{r} 37 \\ 22 \\ \hline \end{array}$$

15.
$$\begin{array}{r} 4,281 \\ 3,016 \\ \hline \end{array}$$

16.
$$\begin{array}{r} 2,749 \\ 1,250 \\ \hline \end{array}$$

17.
$$\begin{array}{r} 3,482 \\ 3,005 \\ \hline \end{array}$$

18.
$$\begin{array}{r} 2,496 \\ 7,503 \\ \hline \end{array}$$

19.
$$\begin{array}{r} 32 \\ 21 \\ 43 \\ \hline \end{array}$$

20.
$$\begin{array}{r} 521 \\ 340 \\ 135 \\ \hline \end{array}$$

21.
$$\begin{array}{r} 6,245 \\ 203 \\ 1,001 \\ \hline \end{array}$$

22.
$$\begin{array}{r} 27 \\ 4,510 \\ 342 \\ \hline \end{array}$$

A Add each of the following. (All problems involve carrying in at least one column.) [Examples 3, 4]

23.
$$\begin{array}{r} 49 \\ 16 \\ \hline \end{array}$$

24.
$$\begin{array}{r} 85 \\ 29 \\ \hline \end{array}$$

25.
$$\begin{array}{r} 74 \\ 28 \\ \hline \end{array}$$

26.
$$\begin{array}{r} 36 \\ 46 \\ \hline \end{array}$$

27.
$$\begin{array}{r} 682 \\ 193 \\ \hline \end{array}$$

28.
$$\begin{array}{r} 439 \\ 270 \\ \hline \end{array}$$

29.
$$\begin{array}{r} 638 \\ 191 \\ \hline \end{array}$$

30.
$$\begin{array}{r} 444 \\ 595 \\ \hline \end{array}$$

31.
$$\begin{array}{r} 4,963 \\ 5,428 \\ \hline \end{array}$$

32.
$$\begin{array}{r} 8,291 \\ 7,489 \\ \hline \end{array}$$

33.
$$\begin{array}{r} 6,205 \\ 9,999 \\ \hline \end{array}$$

34.
$$\begin{array}{r} 8,888 \\ 9,999 \\ \hline \end{array}$$

35.
$$\begin{array}{r} 56,789 \\ 98,765 \\ \hline \end{array}$$

36.
$$\begin{array}{r} 45,678 \\ 87,654 \\ \hline \end{array}$$

37.
$$\begin{array}{r} 52,468 \\ 58,642 \\ \hline \end{array}$$

38.
$$\begin{array}{r} 13,579 \\ 97,531 \\ \hline \end{array}$$

39.
$$\begin{array}{r} 4,296 \\ 8,720 \\ 4,375 \\ \hline \end{array}$$

40.
$$\begin{array}{r} 5,637 \\ 481 \\ 7,899 \\ \hline \end{array}$$

41.
$$\begin{array}{r} 4,994 \\ 449 \\ 9,449 \\ \hline \end{array}$$

42.
$$\begin{array}{r} 6,824 \\ 371 \\ 4,857 \\ \hline \end{array}$$

43.
$$\begin{array}{r} 12 \\ 34 \\ 56 \\ 78 \\ \hline \end{array}$$

44.
$$\begin{array}{r} 21 \\ 43 \\ 65 \\ 87 \\ \hline \end{array}$$

45.
$$\begin{array}{r} 999 \\ 444 \\ 555 \\ 222 \\ \hline \end{array}$$

46.
$$\begin{array}{r} 646 \\ 464 \\ 525 \\ 252 \\ \hline \end{array}$$

47.
$$\begin{array}{r} 9,245 \\ 672 \\ 8,341 \\ 27 \\ \hline \end{array}$$

48.
$$\begin{array}{r} 45 \\ 9,876 \\ 54 \\ 6,789 \\ \hline \end{array}$$

B Complete the following tables.

49.

First Number a	Second Number b	Their Sum $a + b$
61	38	
63	36	
65	34	
67	32	

50.

First Number a	Second Number b	Their Sum $a + b$
10	45	
20	35	
30	25	
40	15	

51.

First Number a	Second Number b	Their Sum $a + b$
9	16	
36	64	
81	144	
144	256	

52.

First Number a	Second Number b	Their Sum $a + b$
25	75	
24	76	
23	77	
22	78	

C Rewrite each of the following using the commutative property of addition. [Example 5]

53. $5 + 9$

54. $2 + 1$

55. $3 + 8$

56. $9 + 2$

57. $6 + 4$

58. $1 + 7$

C Rewrite each of the following using the associative property of addition. [Example 6]

59. $(1 + 2) + 3$

60. $(4 + 5) + 9$

61. $(2 + 1) + 6$

62. $(2 + 3) + 8$

63. $1 + (9 + 1)$

64. $2 + (8 + 2)$

65. $(4 + n) + 1$

66. $(n + 8) + 1$

D Find a solution for each equation. [Example 8]

67. $n + 6 = 10$

68. $n + 4 = 7$

69. $n + 8 = 13$

70. $n + 6 = 15$

71. $4 + n = 12$

72. $5 + n = 7$

73. $17 = n + 9$

74. $13 = n + 5$

B Write each of the following expressions in words. Use the word *sum* in each case. [Table 2]

75. $4 + 9$

76. $9 + 4$

77. $8 + 1$

78. $9 + 9$

79. $2 + 3 = 5$

80. $8 + 2 = 10$

B Write each of the following in symbols. [Table 2]

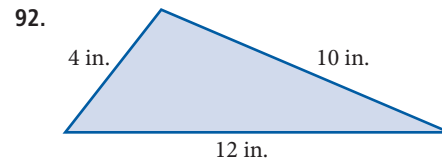
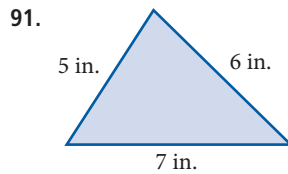
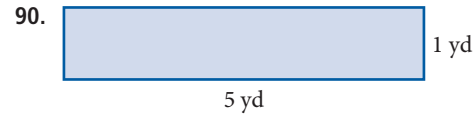
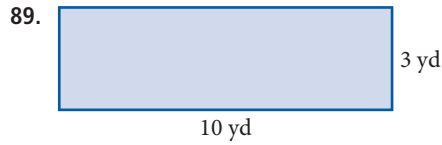
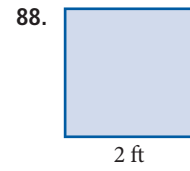
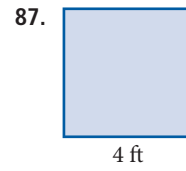
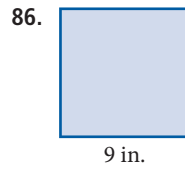
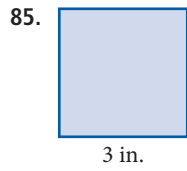
81. a. The sum of 5 and 2
b. 3 added to 8

82. a. The sum of a and 4
b. 6 more than x

83. a. m increased by 1
b. The sum of m and n

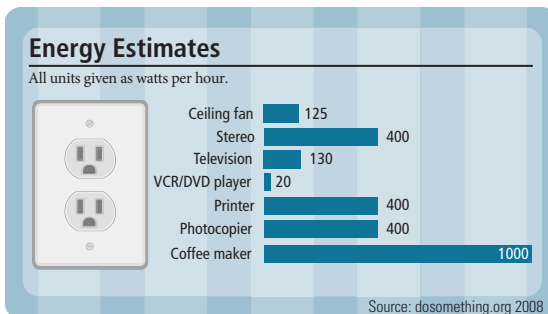
84. a. The sum of 4 and 8 is 12.
b. The sum of a and b is 6.

E Find the perimeter of each figure. The first four figures are squares. [Example 9]



E Applying the Concepts


93. Classroom appliances use a lot of energy. You can save energy by unplugging or turning off unused appliances.



Use the information in the given illustration to find the following:

- the number of watts/hour saved by unplugging a DVD player and a television
- the number of watts/hour saved by unplugging a ceiling fan and a coffee maker

94. The information in the illustration represents the number of picture messages sent for the first nine months of the year, in millions.



Use the information to find the following:

- the number of picture messages sent in all nine months
- the number of picture messages sent in March and April

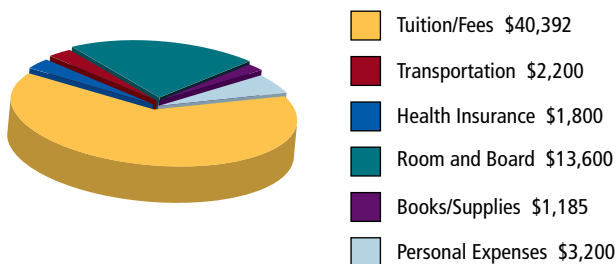
95. **Checkbook Balance** On Monday Bob had a balance of \$241 in his checkbook. On Tuesday he made a deposit of \$108, and on Thursday he wrote a check for \$24. What was the balance in his checkbook on Wednesday?

RECORD ALL CHARGES OR CREDITS THAT AFFECT YOUR ACCOUNT					
NUMBER	DATE	DESCRIPTION OF TRANSACTION	PAYMENT/DEBIT (-)	DEPOSIT/CREDIT (+)	BALANCE
					\$241 00
	11/06	Deposit		\$108 00	?
14-01	11/18	Postage Stamps	\$24 00		?

96. **Number of Passengers** A plane flying from Los Angeles to New York left Los Angeles with 67 passengers on board. The plane stopped in Bakersfield and picked up 28 passengers, and then it stopped again in Dallas where 57 more passengers came on board. How many passengers were on the plane when it landed in New York?

97. **College Costs** According to data from *The Chronicle of Higher Education*, the most expensive college in the country is George Washington University in Washington, D.C. According to the university's website, a student entering as a freshman during the 2008 – 09 academic year can expect to pay the expenses shown in the chart below:

2008-09 Costs for Attending George Washington University



- What are the total of the expenses for one year at George Washington University?
- How much of these total expenses are college related?
- What is the total amount for expenses that are not directly related to attending this college?

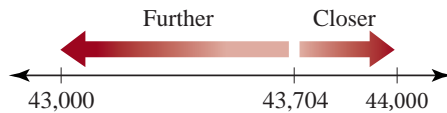
98. **Improving Your Quantitative Literacy** Quantitative literacy is a subject discussed by many people involved in teaching mathematics. The person they are concerned with when they discuss it is you. We are going to work at improving your quantitative literacy, but before we do that we should answer the question, what is quantitative literacy? Lynn Arthur Steen, a noted mathematics educator, has stated that quantitative literacy is “the capacity to deal effectively with the quantitative aspects of life.”
- Give a definition for the word *quantitative*.
 - Give a definition for the word *literacy*.
 - Are there situations that occur in your life that you find distasteful or that you try to avoid because they involve numbers and mathematics? If so, list some of them here. (For example, some people find the process of buying a car particularly difficult because they feel that the numbers and details of the financing are beyond them.)

Rounding and Estimating

1.3

Introduction . . .

Many times when we talk about numbers, it is helpful to use numbers that have been *rounded off*, rather than exact numbers. For example, the city where I live has a population of 43,704. But when I tell people how large the city is, I usually say, "The population is about 44,000." The number 44,000 is the original number rounded to the nearest thousand. The number 43,704 is closer to 44,000 than it is to 43,000, so it is rounded to 44,000. We can visualize this situation on the number line.



A Rounding

The steps used in rounding numbers are given below.

Strategy Rounding Whole Numbers

To summarize, we list the following steps:

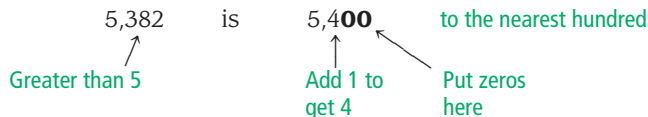
- Step 1:** Locate the digit just to the right of the place you are to round to.
- Step 2:** If that digit is less than 5, replace it and all digits to its right with zeros.
- Step 3:** If that digit is 5 or more, replace it and all digits to its right with zeros, and add 1 to the digit to its left.

You can see from these rules that in order to round a number you must be told what column (or place value) to round to.

EXAMPLE 1

Round 5,382 to the nearest hundred.

SOLUTION There is a 3 in the hundreds column. We look at the digit just to its right, which is 8. Because 8 is greater than 5, we add 1 to the 3, and we replace the 8 and 2 with zeros:



EXAMPLE 2

Round 94 to the nearest ten.

SOLUTION There is a 9 in the tens column. To its right is 4. Because 4 is less than 5, we simply replace it with 0:



Objectives

- A** Round whole numbers.
- B** Estimate the answer to a problem.

Note

After you have used the steps listed here to work a few problems, you will find that the procedure becomes almost automatic.

PRACTICE PROBLEMS

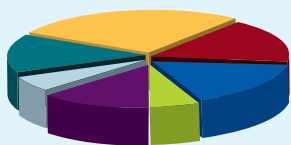
- Round 5,742 to the nearest
 - hundred
 - thousand
- Round 87 to the nearest
 - ten
 - hundred








Answers

- a.** 5,700 **b.** 6,000
- a.** 90 **b.** 100

3. Round 980 to the nearest
- hundred
 - thousand

4. Round 376,804,909 to the nearest
- million
 - ten thousand



	House Payments \$10,200
	Taxes \$6,137
	Miscellaneous \$6,142
	Entertainment \$2,142
	Car Expenses \$4,847
	Savings \$2,149
	Food \$5,296

5. Use the pie chart above to answer these questions.
- To the nearest ten dollars, what is the total amount spent on food and car expenses?
 - To the nearest hundred dollars, how much is spent on savings and taxes?
 - To the nearest thousand dollars, how much is spent on items other than food and entertainment?

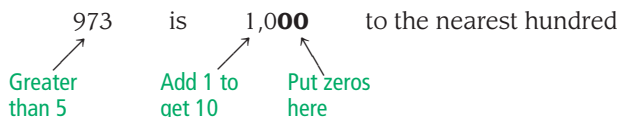
Answers

3. a. 1,000 b. 1,000
4. a. 377,000,000 b. 376,800,000

EXAMPLE 3

Round 973 to the nearest hundred.

SOLUTION We have a 9 in the hundreds column. To its right is 7, which is greater than 5. We add 1 to 9 to get 10, and then replace the 7 and 3 with zeros:



EXAMPLE 4

Round 47,256,344 to the nearest million.

SOLUTION We have 7 in the millions column. To its right is 2, which is less than 5. We simply replace all the digits to the right of 7 with zeros to get:

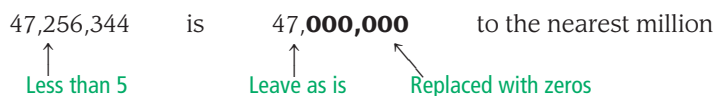


Table 1 gives more examples of rounding.

TABLE 1

Original Number	Rounded to the Nearest		
	Ten	Hundred	Thousand
6,914	6,910	6,900	7,000
8,485	8,490	8,500	8,000
5,555	5,560	5,600	6,000
1,234	1,230	1,200	1,000

Rule

If we are doing calculations and are asked to round our answer, we do all our arithmetic first and then round the result. That is, the last step is to round the answer; we don't round the numbers first and then do the arithmetic.

EXAMPLE 5

The pie chart in the margin shows how a family earning \$36,913 a year spends their money.

- To the nearest hundred dollars, what is the total amount spent on food and entertainment?
- To the nearest thousand dollars, how much of their income is spent on items other than taxes and savings?

SOLUTION In each case we add the numbers in question and then round the sum to the indicated place.

- We add the amounts spent on food and entertainment and then round that result to the nearest hundred dollars.

Food	\$5,296
Entertainment	2,142
Total	<u>\$7,438</u> = \$7,400 to the nearest hundred dollars

- b. We add the numbers for all items except taxes and savings.

House payments	\$10,200
Food	5,296
Car expenses	4,847
Entertainment	2,142
Miscellaneous	<u>6,142</u>
Total	\$28,627 = \$29,000 to the nearest thousand dollars

B Estimating

When we *estimate* the answer to a problem, we simplify the problem so that an approximate answer can be found quickly. There are a number of ways of doing this. One common method is to use rounded numbers to simplify the arithmetic necessary to arrive at an approximate answer, as our next example shows.

EXAMPLE 6

Estimate the answer to the following problem by rounding each number to the nearest thousand.

$$\begin{array}{r} 4,872 \\ 1,691 \\ 777 \\ + 6,124 \\ \hline \end{array}$$

SOLUTION We round each of the four numbers in the sum to the nearest thousand. Then we add the rounded numbers.

4,872	rounds to	5,000
1,691	rounds to	2,000
777	rounds to	1,000
<u>+ 6,124</u>	rounds to	<u>+ 6,000</u>
		14,000

We estimate the answer to this problem to be approximately 14,000. The actual answer, found by adding the original unrounded numbers, is 13,464.

Here is a practical application for which the ability to estimate can be a useful tool.

EXAMPLE 7

On the way home from classes you stop at the local grocery store to pick up a few things. You know that you have a \$20.00 bill in your wallet. You pick up the following items: a loaf of wheat bread for \$2.29, a gallon of milk for \$3.96, a dozen eggs for \$2.18, a pound of apples for \$1.19, and a box of your favorite cereal for \$4.59. Use estimation to determine if you will have enough to pay for your groceries when you get to the cashier.

SOLUTION We round the items in our grocery cart off to the nearest dollar:

wheat bread for \$2.29	rounds to	\$2.00
milk for \$3.96	rounds to	\$4.00
eggs for \$2.18	rounds to	\$2.00
apples for \$1.19	rounds to	\$1.00
<u>+ cereal for \$4.59</u>	rounds to	<u>+ \$5.00</u>
		\$14.00

We estimate our total to be \$14.00. Thus, \$20.00 will be enough to pay for the groceries. (The actual cost of the groceries is \$14.21.)

6. Estimate the answer by first rounding each number to the nearest thousand.

a.
$$\begin{array}{r} 5,287 \\ 2,561 \\ 888 \\ + 4,898 \\ \hline \end{array}$$

b.
$$\begin{array}{r} 702 \\ 3,944 \\ 1,001 \\ + 3,500 \\ \hline \end{array}$$

Note

In Example 6 we are asked to *estimate* an answer, so it is okay to round the numbers in the problem before adding them. In Example 5 we are asked for a rounded answer, meaning that we are to find the exact answer to the problem and then round to the indicated place. In that case we must not round the numbers in the problem before adding.

Answer

5. a. \$10,140 b. \$8,300
c. \$29,000
6. a. 14,000 b. 10,000

DESCRIPTIVE STATISTICS

Bar Charts

The table and chart below give two representations for the amount of caffeine in five different drinks, one numeric and the other visual.

TABLE 2

Beverage (6-ounce cup)	Caffeine (in milligrams)
Brewed coffee	100
Instant coffee	70
Tea	50
Cocoa	5
Decaffeinated coffee	4

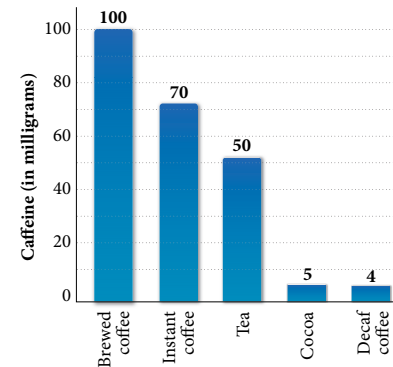


FIGURE 1

The diagram in Figure 1 is called a *bar chart*. The horizontal line below which the drinks are listed is called the *horizontal axis*, while the vertical line that is labeled from 0 to 100 is called the *vertical axis*.

Getting Ready for Class

After reading through the preceding section, respond in your own words and in complete sentences.

1. Describe the process you would use to round the number 5,382 to the nearest thousand.
2. Describe the process you would use to round the number 47,256,344 to the nearest ten thousand.
3. Find a number not containing the digit 7 that will round to 700 when rounded to the nearest hundred.
4. When I ask a class of students to round the number 7,499 to the nearest thousand, a few students will give the answer as 8,000. In what way are these students using the rule for rounding numbers incorrectly?

Problem Set 1.3

A Round each of the numbers to the nearest ten. [Examples 1–5]

1. 42

2. 44

3. 46

4. 48

5. 45

6. 73

7. 77

8. 75

9. 458

10. 455

11. 471

12. 680

13. 56,782

14. 32,807

15. 4,504

16. 3,897

Round each of the numbers to the nearest hundred. [Examples 1–5]

17. 549

18. 954

19. 833

20. 604

21. 899

22. 988

23. 1090

24. 6,778

25. 5,044

26. 56,990

27. 39,603

28. 31,999

Round each of the numbers to the nearest thousand. [Examples 1–5]

29. 4,670

30. 9,054

31. 9,760

32. 4,444

33. 978

34. 567

35. 657,892

36. 688,909

37. 509,905

38. 608,433

39. 3,789,345

40. 5,744,500

A Complete the following table by rounding the numbers on the left as indicated by the headings in the table. [Examples 1–5]

Original Number	Rounded to the Nearest		
	Ten	Hundred	Thousand
41. 7,821			
42. 5,945			
43. 5,999			
44. 4,353			
45. 10,985			
46. 11,108			
47. 99,999			
48. 95,505			

B Estimating Estimate the answer to each of the following problems by rounding each number to the indicated place value and then adding. [Example 6]

49. hundred

$$\begin{array}{r} 750 \\ 275 \\ + 120 \\ \hline \end{array}$$

50. thousand

$$\begin{array}{r} 1,891 \\ 765 \\ + 3,223 \\ \hline \end{array}$$

51. hundred

$$\begin{array}{r} 472 \\ 422 \\ 536 \\ + 511 \\ \hline \end{array}$$

52. hundred

$$\begin{array}{r} 399 \\ 601 \\ 744 \\ + 298 \\ \hline \end{array}$$

53. thousand

$$\begin{array}{r} 25,399 \\ 7,601 \\ 18,744 \\ + 6,298 \\ \hline \end{array}$$

54. thousand

$$\begin{array}{r} 9,999 \\ 8,888 \\ 7,777 \\ + 6,666 \\ \hline \end{array}$$

55. hundred

$$\begin{array}{r} 9,999 \\ 8,888 \\ 7,777 \\ + 6,666 \\ \hline \end{array}$$

56. ten thousand

$$\begin{array}{r} 127,675 \\ 72,560 \\ + 219,065 \\ \hline \end{array}$$

57. ten thousand

$$\begin{array}{r} 65,000 \\ 31,000 \\ 15,555 \\ + 72,000 \\ \hline \end{array}$$

58. ten

$$\begin{array}{r} 10,061 \\ 10,044 \\ 10,035 \\ + 10,025 \\ \hline \end{array}$$

59. hundred

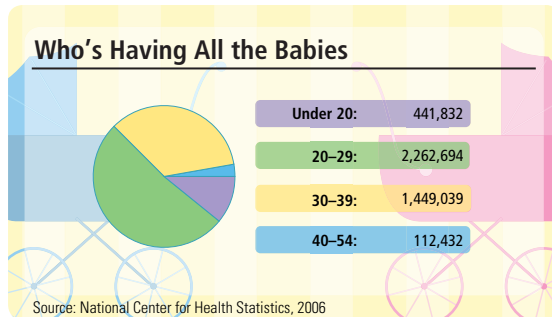
$$\begin{array}{r} 20,150 \\ 18,250 \\ 12,350 \\ + 30,450 \\ \hline \end{array}$$

60. hundred

$$\begin{array}{r} 1,950 \\ 2,849 \\ 3,750 \\ + 4,649 \\ \hline \end{array}$$

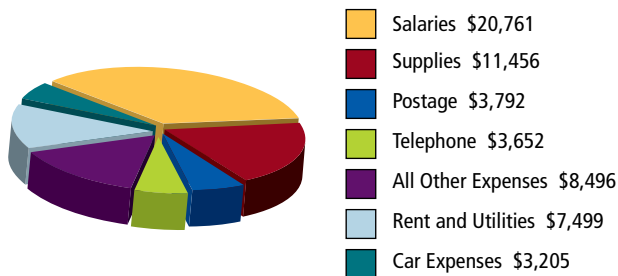
■ Applying the Concepts

61. **Age of Mothers** About 4 million babies were born in 2006. The chart shows the breakdown by mothers' age and number of babies. Use the chart to answer the following questions.



- What is the exact number of babies born in 2006?
- Using your answer from Part a, is the statement “About 4 million babies were born in 2006” correct?
- To the nearest hundred thousand, how many babies were born to mothers aged 20 to 29 in 2006?
- To the nearest thousand, how many babies were born to mothers 40 years old or older?

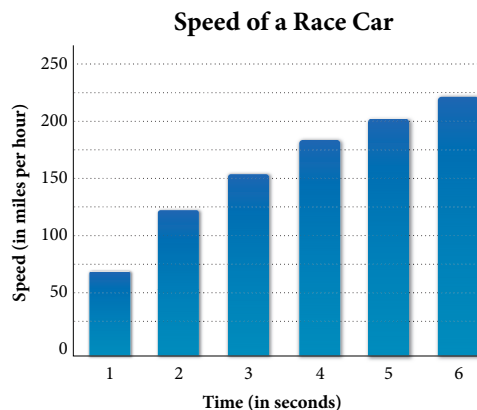
62. **Business Expenses** The pie chart shows one year's worth of expenses for a small business. Use the chart to answer the following questions.



- To the nearest hundred dollars, how much was spent on postage and supplies?
- Find the total amount spent, to the nearest hundred dollars, on rent and utilities and car expenses.
- To the nearest thousand dollars, how much was spent on items other than salaries and rent and utilities?
- To the nearest thousand dollars, how much was spent on items other than postage, supplies, and car expenses?

The bar chart below is similar to the one we studied in this section. It was given to me by a friend who owns and operates an alcohol dragster. The dragster contains a computer that gives information about each of his races. This particular race was run during the 1993 Winternationals. The bar chart gives the speed of a race car in a quarter-mile drag race every second during the race. The horizontal lines have been added to assist you with Problems 63–66.

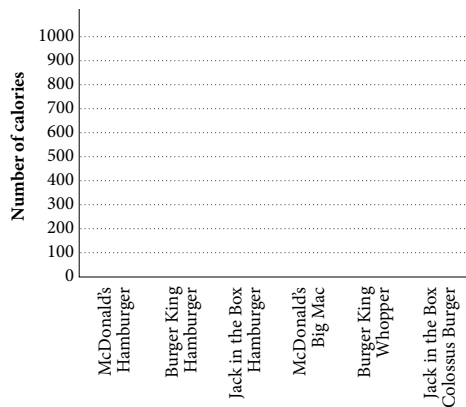
63. Is the speed of the race car after 3 seconds closer to 160 miles per hour or 190 miles per hour?
64. After 4 seconds, is the speed of the race car closer to 150 miles per hour or 190 miles per hour?
65. Estimate the speed of the car after 1 second.



66. Estimate the speed of the car after 6 seconds.

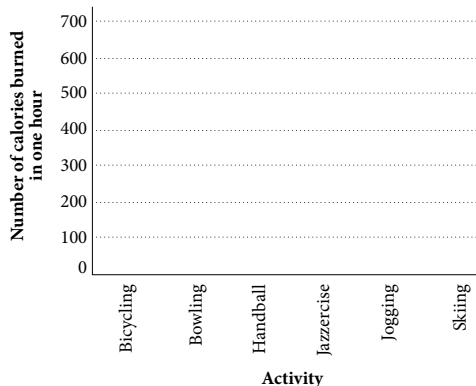
67. **Fast Food** The following table lists the number of calories consumed by eating some popular fast foods. Use the axes in the figure below to construct a bar chart from the information in the table.

CALORIES IN FAST FOOD	
Food	Calories
McDonald's Hamburger	270
Burger King Hamburger	260
Jack in the Box Hamburger	280
McDonald's Big Mac	510
Burger King Whopper	630
Jack in the Box Colossus Burger	940



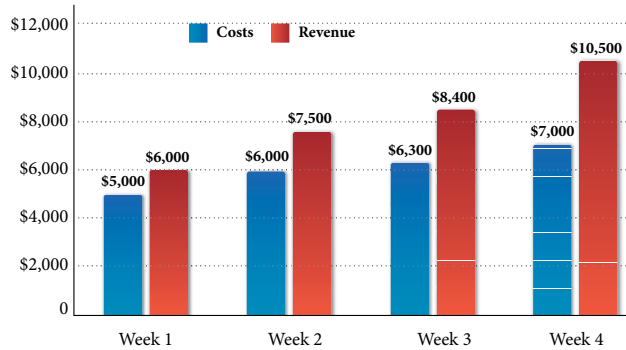
68. **Exercise** The following table lists the number of calories burned in 1 hour of exercise by a person who weighs 150 pounds. Use the axes in the figure below to construct a bar chart from the information in the table.

CALORIES BURNED BY A 150-POUND PERSON IN ONE HOUR	
Activity	Calories
Bicycling	374
Bowling	265
Handball	680
Jazzercise	340
Jogging	680
Skiing	544



Introduction . . .

In business, subtraction is used to calculate profit. Profit is found by subtracting costs from revenue. The following double bar chart shows the costs and revenue of the Baby Steps Shoe Company during one 4-week period.



To find the profit for Week 1, we subtract the costs from the revenue, as follows:

$$\begin{aligned} \text{Profit} &= \$6,000 - \$5,000 \\ \text{Profit} &= \$1,000 \end{aligned}$$

Subtraction is the opposite operation of addition. If you understand addition and can work simple addition problems quickly and accurately, then subtraction shouldn't be difficult for you.

A Vocabulary

The word *difference* always indicates subtraction. We can state this in symbols by letting the letters a and b represent numbers.

Definition

The **difference** of two numbers a and b is $a - b$

Table 1 gives some word statements involving subtraction and their mathematical equivalents written in symbols.

In English	In Symbols
The difference of 9 and 1	$9 - 1$
The difference of 1 and 9	$1 - 9$
The difference of m and 4	$m - 4$
The difference of x and y	$x - y$
3 subtracted from 8	$8 - 3$
2 subtracted from t	$t - 2$
The difference of 7 and 4 is 3.	$7 - 4 = 3$
The difference of 9 and 3 is 6.	$9 - 3 = 6$

Objectives

- A Understand the notation and vocabulary of subtraction.
- B Subtract whole numbers.
- C Subtraction with borrowing.

B The Meaning of Subtraction

When we want to subtract 3 from 8, we write

$$8 - 3, \quad 8 \text{ subtract } 3, \quad \text{or} \quad 8 \text{ minus } 3$$

The number we are looking for here is the difference between 8 and 3, or the number we add to 3 to get 8. That is:

$$8 - 3 = ? \quad \text{is the same as} \quad ? + 3 = 8$$

In both cases we are looking for the number we add to 3 to get 8. The number we are looking for is 5. We have two ways to write the same statement.

$$\begin{array}{cc} \text{Subtraction} & \text{Addition} \\ 8 - 3 = 5 & \text{or} \quad 5 + 3 = 8 \end{array}$$

For every subtraction problem, there is an equivalent addition problem. Table 2 lists some examples.

TABLE 2		
Subtraction		Addition
$7 - 3 = 4$	because	$4 + 3 = 7$
$9 - 7 = 2$	because	$2 + 7 = 9$
$10 - 4 = 6$	because	$6 + 4 = 10$
$15 - 8 = 7$	because	$7 + 8 = 15$

To subtract numbers with two or more digits, we align the numbers vertically and subtract in columns.

PRACTICE PROBLEMS

- Subtract.
 - $684 - 431$
 - $7,406 - 3,405$

- Subtract 405 from 6,857.
 - Subtract 234 from 345.

EXAMPLE 1

Subtract: $376 - 241$

SOLUTION We write the problem vertically, aligning digits with the same place value. Then we subtract in columns.

$$\begin{array}{r} 376 \\ - 241 \\ \hline 135 \end{array} \quad \leftarrow \text{Subtract the bottom number in each column from the number above it}$$

EXAMPLE 2

Subtract 503 from 7,835.

SOLUTION In symbols this statement is equivalent to

$$7,835 - 503$$

To subtract we write 503 below 7,835 and then subtract in columns.

$$\begin{array}{r} 7,835 \\ - 503 \\ \hline 7,332 \end{array}$$

$5 - 3 = 2$ **Ones**
 $3 - 0 = 3$ **Tens**
 $8 - 5 = 3$ **Hundreds**
 $7 - 0 = 7$ **Thousands**

Answers

- 253
 - 4,001
- 6,452
 - 111

As you can see, subtraction problems like the ones in Examples 1 and 2 are fairly simple. We write the problem vertically, lining up the digits with the same place value, and subtract in columns. We always subtract the bottom number from the top number.

C Subtraction with Borrowing

Subtraction must involve *borrowing* when the bottom digit in any column is larger than the digit above it. In one sense, borrowing is the reverse of the carrying we did in addition.

EXAMPLE 3

Subtract: $92 - 45$

SOLUTION We write the problem vertically with the place values of the digits showing:

$$\begin{array}{r} 92 = 9 \text{ tens} + 2 \text{ ones} \\ - 45 = 4 \text{ tens} + 5 \text{ ones} \\ \hline \end{array}$$

Look at the ones column. We cannot subtract immediately, because 5 is larger than 2. Instead, we borrow 1 ten from the 9 tens in the tens column. We can rewrite the number 92 as

$$\begin{array}{l} 9 \text{ tens} + 2 \text{ ones} \\ \swarrow \quad \searrow \\ = 8 \text{ tens} + 1 \text{ ten} + 2 \text{ ones} \\ \quad \quad \quad \downarrow \quad \swarrow \\ = 8 \text{ tens} + 12 \text{ ones} \end{array}$$

Now we are in a position to subtract.

$$\begin{array}{r} 92 = 9 \text{ tens} + 2 \text{ ones} = 8 \text{ tens} + 12 \text{ ones} \\ - 45 = 4 \text{ tens} + 5 \text{ ones} = 4 \text{ tens} + 5 \text{ ones} \\ \hline 4 \text{ tens} + 7 \text{ ones} \end{array}$$

The result is 4 tens + 7 ones, which can be written in standard form as 47.

Writing the problem out in this way is more trouble than is actually necessary. The shorthand form of the same problem looks like this:

$$\begin{array}{r} 8 \quad 12 \leftarrow \text{This shows we have} \\ 9 \quad 2 \quad \text{borrowed 1 ten to go} \\ - 4 \quad 5 \quad \text{with the 2 ones} \\ \hline 4 \quad 7 \\ \uparrow \quad \uparrow \\ 12 - 5 = 7 \quad \text{Ones} \\ 8 - 4 = 4 \quad \text{Tens} \end{array}$$

This shortcut form shows all the necessary work involved in subtraction with borrowing. We will use it from now on. ■

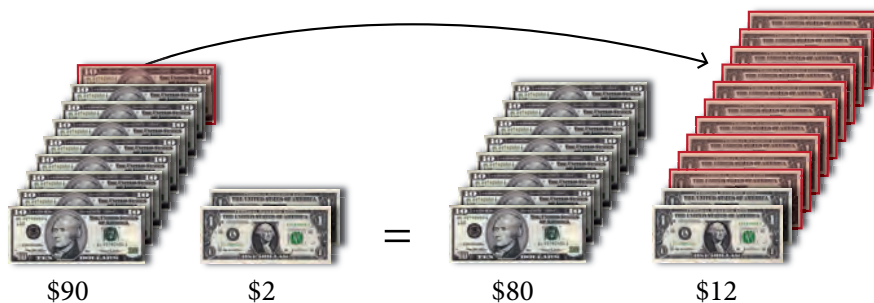
3. Subtract.
- $63 - 47$
 - $532 - 403$

Note The discussion here shows why borrowing is necessary and how we go about it. To understand borrowing you should pay close attention to this discussion.

Answer

3. a. 16 b. 129

The borrowing that changed 9 tens + 2 ones into 8 tens + 12 ones can be visualized with money.



4. a. Find the difference of 656 and 283.
b. Find the difference of 3,729 and 1,749.

EXAMPLE 4

Find the difference of 549 and 187.

SOLUTION In symbols the difference of 549 and 187 is written

$$549 - 187$$

Writing the problem vertically so that the digits with the same place value are aligned, we have

$$\begin{array}{r} 549 \\ - 187 \\ \hline \end{array}$$

The top number in the tens column is smaller than the number below it. This means that we will have to borrow from the next larger column.

$$\begin{array}{r} \overset{4}{5} \overset{14}{4} \overset{\leftarrow}{9} \\ - 1 \quad 8 \quad 7 \\ \hline 3 \quad 6 \quad 2 \end{array}$$

Borrow 1 hundred to go with the 4 tens

$$\begin{array}{r} \uparrow \quad \uparrow \quad \uparrow \\ 9 - 7 = 2 \quad \text{Ones} \\ 14 - 8 = 6 \quad \text{Tens} \\ 4 - 1 = 3 \quad \text{Hundreds} \end{array}$$

The actual work we did in borrowing looks like this:

$$\begin{array}{l} 5 \text{ hundreds} + 4 \text{ tens} + 9 \text{ ones} \\ \downarrow \quad \searrow \\ = 4 \text{ hundreds} + 1 \text{ hundred} + 4 \text{ tens} + 9 \text{ ones} \\ \quad \quad \downarrow \quad \swarrow \\ = 4 \text{ hundreds} + 14 \text{ tens} + 9 \text{ ones} \end{array}$$

Getting Ready for Class

After reading through the preceding section, respond in your own words and in complete sentences.

- Which sentence below describes the problem shown in Example 1?
 - The difference of 241 and 376 is 135.
 - The difference of 376 and 241 is 135.
- Write a subtraction problem using the number 234 that involves borrowing from the tens column to the ones column.
- Write a subtraction problem using the number 234 in which the answer is 111.
- Describe how you would subtract the number 56 from the number 93.

Answers

4. a. 373 b. 1,980

Problem Set 1.4

A Perform the indicated operation. [Examples 1, 2, 4]

- Subtract 24 from 56.
- Subtract 71 from 89.
- Subtract 23 from 45.
- Subtract 97 from 98.
- Find the difference of 29 and 19.
- Find the difference of 37 and 27.
- Find the difference of 126 and 15.
- Find the difference of 348 and 32.

B Work each of the following subtraction problems. [Examples 1, 2]

$$\begin{array}{r} 9. \quad 975 \\ - 663 \\ \hline \end{array}$$

$$\begin{array}{r} 10. \quad 480 \\ - 260 \\ \hline \end{array}$$

$$\begin{array}{r} 11. \quad 904 \\ - 501 \\ \hline \end{array}$$

$$\begin{array}{r} 12. \quad 657 \\ - 507 \\ \hline \end{array}$$

$$\begin{array}{r} 13. \quad 9,876 \\ - 8,765 \\ \hline \end{array}$$

$$\begin{array}{r} 14. \quad 5,008 \\ - 3,002 \\ \hline \end{array}$$

$$\begin{array}{r} 15. \quad 7,976 \\ - 3,432 \\ \hline \end{array}$$

$$\begin{array}{r} 16. \quad 6,980 \\ - 470 \\ \hline \end{array}$$

C Find the difference in each case. (These problems all involve borrowing.) [Example 3]

$$17. \quad 52 - 37$$

$$18. \quad 65 - 48$$

$$19. \quad 70 - 37$$

$$20. \quad 90 - 21$$

$$21. \quad 74 - 69$$

$$22. \quad 31 - 28$$

$$23. \quad 51 - 18$$

$$24. \quad 64 - 58$$

$$25. \quad 329 - 234$$

$$26. \quad 518 - 492$$

$$27. \quad 348 - 196$$

$$28. \quad 759 - 661$$

$$\begin{array}{r} 29. \quad 932 \\ - 658 \\ \hline \end{array}$$

$$\begin{array}{r} 30. \quad 895 \\ - 597 \\ \hline \end{array}$$

$$\begin{array}{r} 31. \quad 647 \\ - 159 \\ \hline \end{array}$$

$$\begin{array}{r} 32. \quad 842 \\ - 199 \\ \hline \end{array}$$

$$\begin{array}{r} 33. \quad 905 \\ - 367 \\ \hline \end{array}$$

$$\begin{array}{r} 34. \quad 804 \\ - 238 \\ \hline \end{array}$$

$$\begin{array}{r} 35. \quad 600 \\ - 437 \\ \hline \end{array}$$

$$\begin{array}{r} 36. \quad 800 \\ - 342 \\ \hline \end{array}$$

$$\begin{array}{r} 37. \quad 4,583 \\ - 2,973 \\ \hline \end{array}$$

$$\begin{array}{r} 38. \quad 7,849 \\ - 2,957 \\ \hline \end{array}$$

$$\begin{array}{r} 39. \quad 79,040 \\ - 32,957 \\ \hline \end{array}$$

$$\begin{array}{r} 40. \quad 86,492 \\ - 78,506 \\ \hline \end{array}$$

A Complete the following tables.

41.

First Number a	Second Number b	The Difference of a and b $a - b$
25	15	
24	16	
23	17	
22	18	

42.

First Number a	Second Number b	The Difference of a and b $a - b$
90	79	
80	69	
70	59	
60	49	

43.

First Number a	Second Number b	The Difference of a and b $a - b$
400	256	
400	144	
225	144	
225	81	

44.

First Number a	Second Number b	The Difference of a and b $a - b$
100	36	
100	64	
25	16	
25	9	

A Write each of the following expressions in words. Use the word *difference* in each case.

45. $10 - 2$

46. $9 - 5$

47. $a - 6$

48. $7 - x$

49. $8 - 2 = 6$

50. $m - 1 = 4$

51. What number do you subtract from 8 to get 5?

52. What number do you subtract from 6 to get 0?

53. What number do you subtract from 15 to get 7?

54. What number do you subtract from 21 to get 14?

55. What number do you subtract from 35 to get 12?

56. What number do you subtract from 41 to get 11?

A Write each of the following sentences as mathematical expressions.

57. The difference of 8 and 3

58. The difference of x and 259. 9 subtracted from y 60. a subtracted from b

61. The difference of 3 and 2 is 1.

62. The difference of 10 and y is 5.63. The difference of 37 and $9x$ is 10.64. The difference of $3x$ and $2y$ is 15.65. The difference of $2y$ and $15x$ is 24.66. The difference of $25x$ and $9y$ is 16.67. The difference of $(x + 2)$ and $(x + 1)$ is 1.68. The difference of $(x - 2)$ and $(x - 4)$ is 2.

D Applying the Concepts

Not all of the following application problems involve only subtraction. Some involve addition as well. Be sure to read each problem carefully.

69. Checkbook Balance Diane has \$504 in her checking account. If she writes five checks for a total of \$249, how much does she have left in her account?

70. Checkbook Balance Larry has \$763 in his checking account. If he writes a check for each of the three bills listed below, how much will he have left in his account?

Item	Amount
Rent	\$418
Phone	\$25
Car repair	\$117

71. Home Prices In 1985, Mr. Hicks paid \$137,500 for his home. He sold it in 2008 for \$310,000. What is the difference between what he sold it for and what he bought it for?

72. Oil Spills In March 1977, an oil tanker hit a reef off Taiwan and spilled 3,134,500 gallons of oil. In March 1989, an oil tanker hit a reef off Alaska and spilled 10,080,000 gallons of oil. How much more oil was spilled in the 1989 disaster?

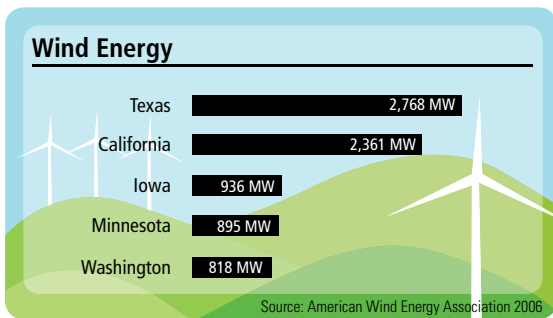
73. Wind Speeds On April 12, 1934, the wind speed on top of Mount Washington was recorded at 231 miles per hour. When Hurricane Katrina struck on August 28, 2005, the highest recorded wind speed was 140 miles per hour. How much faster was the wind on top of Mount Washington, than the winds from Hurricane Katrina?

74. Concert Attendance Eleven thousand, seven hundred fifty-two people attended a recent concert at the Pepsi Arena in Albany, New York. If the arena holds 17,500 people, how many empty seats were there at the concert?

75. Computer Hard Drive You purchase a new computer with 320 gigabytes of hard drive capacity. (A gigabyte is roughly a billion bytes). After loading a variety of programs you discover that you have used 147 gigabytes of your hard drive's capacity. How much hard drive capacity do you still have available?

76. State Size Alaska is the largest state in the United States with an area of 663,267 square miles. Rhode Island is the smallest state with an area of 1,545 square miles. How many more square miles does Alaska have when compared to Rhode Island?

77. Wind Energy The bar chart below shows the states producing the most wind energy in 2006.

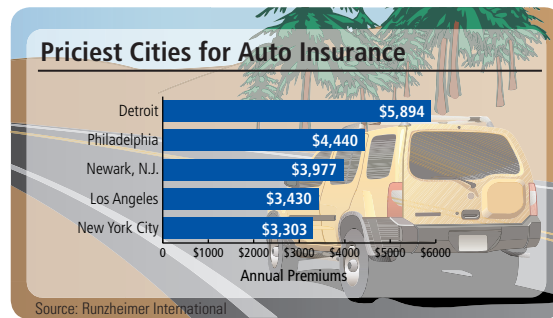


a. Use the information in the bar chart to fill in the missing entries in the table.

State	Energy (megawatts)
Texas	
California	
Iowa	818

b. How much more wind energy is produced in Texas than in California?

78. Auto Insurance Costs The bar chart below shows the cities with the highest annual insurance rates in 2006.



a. Use the information in the bar chart to fill in the missing entries in the table.

City	Cost (dollars)
Detroit	
Philadelphia	
Los Angeles	3,303

b. How much more does auto insurance cost in Detroit than in Los Angeles?

Introduction . . .

A supermarket orders 35 cases of a certain soft drink. If each case contains 12 cans of the drink, how many cans were ordered?



To solve this problem and others like it, we must use multiplication. Multiplication is what we will cover in this section.

A Multiplying Whole Numbers

To begin, we can think of multiplication as shorthand for repeated addition. That is, multiplying 3 times 4 can be thought of this way:

$$3 \text{ times } 4 = 4 + 4 + 4 = 12$$

Multiplying 3 times 4 means to add three 4's. We can write 3 times 4 as 3×4 , or $3 \cdot 4$.

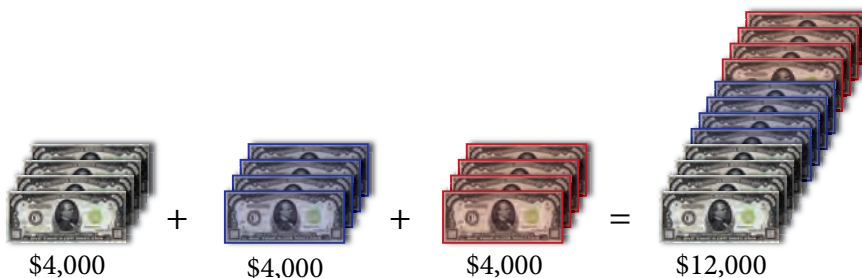
EXAMPLE 1

Multiply: $3 \cdot 4,000$

SOLUTION Using the definition of multiplication as repeated addition, we have

$$\begin{aligned} 3 \cdot 4,000 &= 4,000 + 4,000 + 4,000 \\ &= 12,000 \end{aligned}$$

Here is one way to visualize this process.



Notice that if we had multiplied 3 and 4 to get 12 and then attached three zeros on the right, the result would have been the same. ■

Objectives

- A** Multiply whole numbers.
- B** Understand the notation and vocabulary of multiplication.
- C** Identify properties of multiplication.
- D** Find the area of squares and rectangles.
- E** Solve equations with multiplication.

PRACTICE PROBLEMS

1. Multiply.
 - a. $4 \cdot 70$
 - b. $4 \cdot 700$
 - c. $4 \cdot 7,000$

Answer

1. a. 280
- b. 2,800
- c. 28,000

Note

The kind of notation we will use to indicate multiplication will depend on the situation. For example, when we are solving equations that involve letters, it is not a good idea to indicate multiplication with the symbol \times , since it could be confused with the letter x . The symbol we will use to indicate multiplication most often in this book is the multiplication dot.

Note

We are assuming that you know the basic multiplication facts given in the table below. If you need some practice with these facts, go to Appendix 2 at the back of the book.

BASIC MULTIPLICATION FACTS

\times	1	2	3	4	5	6	7	8	9
1	1	2	3	4	5	6	7	8	9
2	2	4	6	8	10	12	14	16	18
3	3	6	9	12	15	18	21	24	27
4	4	8	12	16	20	24	28	32	36
5	5	10	15	20	25	30	35	40	45
6	6	12	18	24	30	36	42	48	54
7	7	14	21	28	35	42	49	56	63
8	8	16	24	32	40	48	56	64	72
9	9	18	27	36	45	54	63	72	81

- Identify the products and factors in the statement
 $6 \cdot 7 = 42$
- Identify the products and factors in the statement
 $70 = 2 \cdot 5 \cdot 7$

Answers

- Factors: 6, 7; products: $6 \cdot 7$ and 42
- Factors: 2, 5, 7; products: $2 \cdot 5 \cdot 7$ and 70

B Notation

There are many ways to indicate multiplication. All the following statements are equivalent. They all indicate multiplication with the numbers 3 and 4.

$$3 \cdot 4, \quad 3 \times 4, \quad 3(4), \quad (3)4, \quad (3)(4), \quad \begin{array}{r} 4 \\ \times 3 \\ \hline \end{array}$$

If one or both of the numbers we are multiplying are represented by letters, we may also use the following notation:

$$\begin{array}{l} 5n \text{ means } 5 \text{ times } n \\ ab \text{ means } a \text{ times } b \end{array}$$

Vocabulary

We use the word *product* to indicate multiplication. If we say "The product of 3 and 4 is 12," then we mean

$$3 \cdot 4 = 12$$

Both $3 \cdot 4$ and 12 are called the product of 3 and 4. The 3 and 4 are called *factors*.

TABLE 1

In English	In Symbols
The product of 2 and 5	$2 \cdot 5$
The product of 5 and 2	$5 \cdot 2$
The product of 4 and n	$4n$
The product of x and y	xy
The product of 9 and 6 is 54	$9 \cdot 6 = 54$
The product of 2 and 8 is 16	$2 \cdot 8 = 16$

EXAMPLE 2

Identify the products and factors in the statement

$$9 \cdot 8 = 72$$

SOLUTION The factors are 9 and 8, and the products are $9 \cdot 8$ and 72.

EXAMPLE 3

Identify the products and factors in the statement

$$30 = 2 \cdot 3 \cdot 5$$

SOLUTION The factors are 2, 3, and 5. The products are $2 \cdot 3 \cdot 5$ and 30.

C Distributive Property

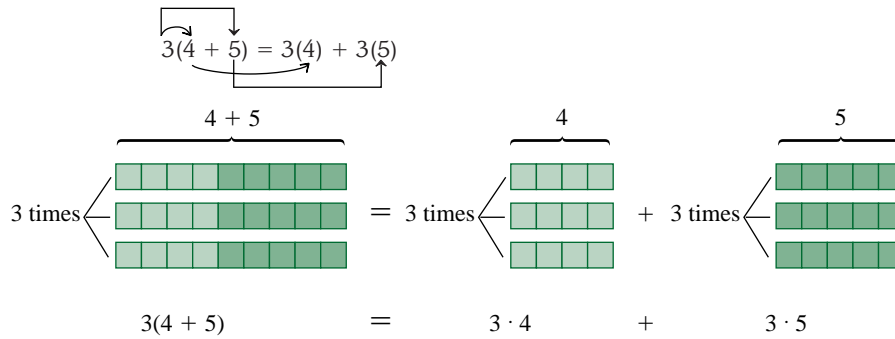
To develop an efficient method of multiplication, we need to use what is called the *distributive property*. To begin, consider the following two problems:

Problem 1	Problem 2
$3(4 + 5)$	$3(4) + 3(5)$
$= 3(9)$	$= 12 + 15$
$= 27$	$= 27$

The result in both cases is the same number, 27. This indicates that the original two expressions must have been equal also. That is,

$$3(4 + 5) = 3(4) + 3(5)$$

This is an example of the distributive property. We say that multiplication *distributes* over addition.



We can write this property in symbols using the letters a , b , and c to represent any three whole numbers.

Distributive Property

If a , b , and c represent any three whole numbers, then

$$a(b + c) = a(b) + a(c)$$

Suppose we want to find the product $7(65)$. By writing 65 as $60 + 5$ and applying the distributive property, we have:

$$\begin{aligned} 7(65) &= 7(60 + 5) & 65 &= 60 + 5 \\ &= 7(60) + 7(5) & \text{Distributive property} \\ &= 420 + 35 & \text{Multiplication} \\ &= 455 & \text{Addition} \end{aligned}$$

We can write the same problem vertically like this:

$$\begin{array}{r} 60 + 5 \\ \times \quad 7 \\ \hline 35 \leftarrow 7(5) = 35 \\ + 420 \leftarrow 7(60) = 420 \\ \hline 455 \end{array}$$

This saves some space in writing. But notice that we can cut down on the amount of writing even more if we write the problem this way:

$$\begin{array}{r} \text{STEP 2: } 7(6) = 42; \text{ add the } 3 \text{ we carried to } 42 \text{ to get } 45 \rightarrow \overset{3}{6}5 \\ \times 7 \\ \hline 455 \leftarrow \text{STEP 1: } 7(5) = 35; \text{ write the } 5 \text{ in the ones column, and then carry the } 3 \text{ to the tens column} \end{array}$$

This shortcut notation takes some practice.

EXAMPLE 4

Multiply: $9(43)$

$$\begin{array}{r} \text{STEP 2: } 9(4) = 36; \text{ add the } 2 \text{ we carried to } 36 \text{ to get } 38 \rightarrow \overset{2}{4}3 \\ \times 9 \\ \hline 387 \leftarrow \text{STEP 1: } 9(3) = 27; \text{ write the } 7 \text{ in the ones column, and then carry the } 2 \text{ to the tens column} \end{array}$$

4. Multiply.
a. $8(57)$
b. $8(570)$

Answer

4. a. 456 b. 4,560

5. Multiply.
 a. $45(62)$
 b. $45(620)$

Note

This discussion is to show why we multiply the way we do. You should go over it in detail, so you will understand the reasons behind the process of multiplication. Besides being able to do multiplication, you should understand it.

6. Multiply.
 a. $356(641)$
 b. $3,560(641)$

Chapter 1 Whole Numbers**EXAMPLE 5**Multiply: $52(37)$ **SOLUTION** This is the same as $52(30 + 7)$ or by the distributive property

$$52(30) + 52(7)$$

We can find each of these products by using the shortcut method:

$$\begin{array}{r} 52 \\ \times 30 \\ \hline 1,560 \end{array} \qquad \begin{array}{r} 52 \\ \times 7 \\ \hline 364 \end{array}$$

The sum of these two numbers is $1,560 + 364 = 1,924$. Here is a summary of what we have so far:

$$\begin{aligned} 52(37) &= 52(30 + 7) & 37 &= 30 + 7 \\ &= 52(30) + 52(7) & \text{Distributive property} \\ &= 1,560 + 364 & \text{Multiplication} \\ &= 1,924 & \text{Addition} \end{aligned}$$

The shortcut form for this problem is

$$\begin{array}{r} 52 \\ \times 37 \\ \hline 364 \\ + 1,560 \\ \hline 1,924 \end{array} \quad \begin{array}{l} \longleftarrow 7(52) = 364 \\ \longleftarrow 30(52) = 1,560 \end{array}$$

In this case we have not shown any of the numbers we carried, simply because it becomes very messy.

EXAMPLE 6Multiply: $279(428)$ **SOLUTION**

$$\begin{array}{r} 279 \\ \times 428 \\ \hline 2,232 \\ 5,580 \\ + 111,600 \\ \hline 119,412 \end{array} \quad \begin{array}{l} \longleftarrow 8(279) = 2,232 \\ \longleftarrow 20(279) = 5,580 \\ \longleftarrow 400(279) = 111,600 \end{array}$$

USING TECHNOLOGY**Calculators**

Here is how we would work the problem shown in Example 6 on a calculator:

Scientific Calculator: $279 \times 428 =$ **Graphing Calculator:** $279 \times 428 \text{ ENT}$ **Estimating**

One way to estimate the answer to the problem shown in Example 6 is to round each number to the nearest hundred and then multiply the rounded numbers. Doing so would give us this:

$$300(400) = 120,000$$

Our estimate of the answer is 120,000, which is close to the actual answer, 119,412. Making estimates is important when we are using calculators; having an estimate of the answer will keep us from making major errors in multiplication.

Answers


5. a. 2,790 b. 27,900
 6. a. 228,196 b. 2,281,960

EXAMPLE 7

A supermarket orders 35 cases of a certain soft drink. If each case contains 12 cans of the drink, how many cans were ordered?

SOLUTION We have 35 cases, and each case has 12 cans. The total number of cans is the product of 35 and 12, which is $35(12)$:

$$\begin{array}{r} 12 \\ \times 35 \\ \hline 60 \\ + 360 \\ \hline 420 \end{array} \quad \begin{array}{l} \leftarrow 5(12) = 60 \\ \leftarrow 30(12) = 360 \end{array}$$



There is a total of 420 cans of the soft drink.

EXAMPLE 8

Shirley earns \$12 an hour for the first 40 hours she works each week. If she has \$109 deducted from her weekly check for taxes and retirement, how much money will she take home if she works 38 hours this week?

SOLUTION To find the amount of money she earned for the week, we multiply 12 and 38. From that total we subtract 109. The result is her take-home pay. Without showing all the work involved in the calculations, here is the solution:

$$\begin{array}{l} 38(\$12) = \$456 \quad \text{Her total weekly earnings} \\ \$456 - \$109 = \$347 \quad \text{Her take-home pay} \end{array}$$

EXAMPLE 9

In 1993, the government standardized the way in which nutrition information is presented on the labels of most packaged food products. Figure 1 shows one of these standardized food labels. It is from a package of Fritos Corn Chips that I ate the day I was writing this example. Approximately how many chips are in the bag, and what is the total number of calories consumed if all the chips in the bag are eaten?

SOLUTION Reading toward the top of the label, we see that there are about 32 chips in one serving, and 3 servings in the bag. Therefore, the total number of chips in the bag is

$$3(32) = 96 \text{ chips}$$

This is an approximate number, because each serving is approximately 32 chips. Reading further we find that each serving contains 160 calories. Therefore, the total number of calories consumed by eating all the chips in the bag is

$$3(160) = 480 \text{ calories}$$

As we progress through the book, we will study more of the information in nutrition labels.

Nutrition Facts	
Serving Size 1 oz. (28g/About 32 chips)	
Servings Per Container: 3	
Amount Per Serving	
Calories 160	Calories from fat 90
% Daily Value*	
Total Fat 10 g	16%
Saturated Fat 1.5g	8%
Cholesterol 0mg	0%
Sodium 160mg	7%
Total Carbohydrate 15g	5%
Dietary Fiber 1g	4%
Sugars 0g	
Protein 2g	
Vitamin A 0%	Vitamin C 0%
Calcium 2%	Iron 0%
*Percent Daily Values are based on a 2,000 calorie diet	

FIGURE 1

7. If each tablet of vitamin C contains 550 milligrams of vitamin C, what is the total number of milligrams of vitamin C in a bottle that contains 365 tablets?

8. If Shirley works 36 hours the next week and has the same amount deducted from her check for taxes and retirement, how much will she take home?

9. The amounts given in the middle of the nutrition label in Figure 1 are for one serving of chips. If all the chips in the bag are eaten, how much fat has been consumed? How much sodium?

Note The letter g that is shown after some of the numbers in the nutrition label in Figure 1 stands for grams, a unit used to measure weight. The unit mg stands for milligrams, another, smaller unit of weight. We will have more to say about these units later in the book.

Answers

- 200,750 milligrams
- \$323
- 30 g of fat, 480 mg of sodium

10. If a 150-pound person bowls for 3 hours, will he or she burn all the calories consumed by eating two bags of the chips mentioned in Example 9?


EXAMPLE 10

The table below lists the number of calories burned in 1 hour of exercise by a person who weighs 150 pounds. Suppose a 150-pound person goes bowling for 2 hours after having eaten the bag of chips mentioned in Example 9. Will he or she burn all the calories consumed from the chips?

Activity	Calories Burned in 1 Hour by a 150-Pound Person
Bicycling	374
Bowling	265
Handball	680
Jazzercise	340
Jogging	680
Skiing	544

SOLUTION Each hour of bowling burns 265 calories. If the person bowls for 2 hours, a total of

$$2(265) = 530 \text{ calories}$$

will have been burned. Because the bag of chips contained only 480 calories, all of them have been burned with 2 hours of bowling. 

More Properties of Multiplication

Multiplication Property of 0

If a represents any number, then

$$a \cdot 0 = 0 \quad \text{and} \quad 0 \cdot a = 0$$

In words: Multiplication by 0 always results in 0.

Multiplication Property of 1

If a represents any number, then

$$a \cdot 1 = a \quad \text{and} \quad 1 \cdot a = a$$

In words: Multiplying any number by 1 leaves that number unchanged.

Commutative Property of Multiplication

If a and b are any two numbers, then

$$ab = ba$$

In words: The order of the numbers in a product doesn't affect the result.

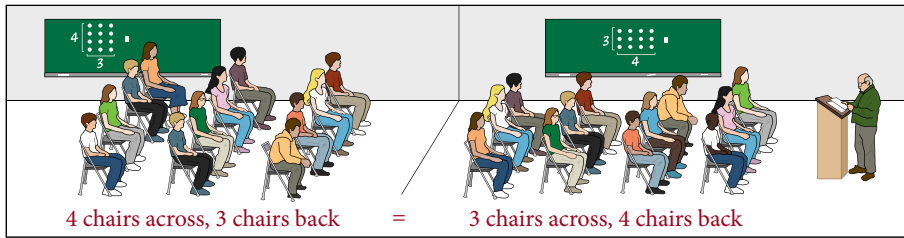
Associative Property of Multiplication

If a , b , and c represent any three numbers, then

$$(ab)c = a(bc)$$

In words: We can change the grouping of the numbers in a product without changing the result.

To visualize the commutative property, we can think of an instructor with 12 students.

**EXAMPLE 11**

Use the commutative property of multiplication to rewrite each of the following products:

a. $7 \cdot 9$ b. $4(6)$

SOLUTION Applying the commutative property to each expression, we have:

a. $7 \cdot 9 = 9 \cdot 7$ b. $4(6) = 6(4)$

EXAMPLE 12

Use the associative property of multiplication to rewrite each of the following products:

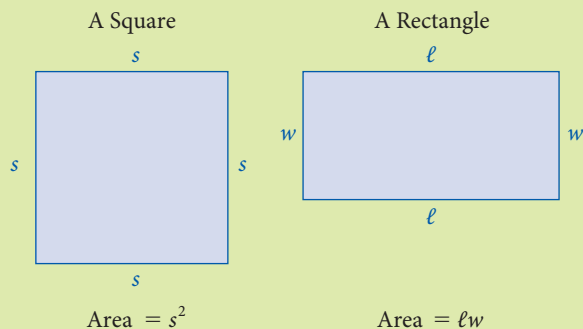
a. $(2 \cdot 7) \cdot 9$ b. $3 \cdot (8 \cdot 2)$

SOLUTION Applying the associative property of multiplication, we regroup as follows:

a. $(2 \cdot 7) \cdot 9 = 2 \cdot (7 \cdot 9)$ b. $3 \cdot (8 \cdot 2) = (3 \cdot 8) \cdot 2$

D Formulas for Area**FACTS FROM GEOMETRY: Formulas for Area**

A square and rectangle are shown in the following figures. Note that we have labeled the dimensions of each with variables. The formula for the area of each object is given in terms of its dimensions.



The formula for area gives us a measure of the amount of surface the object has.

11. Use the commutative property of multiplication to rewrite each of the following products.
- a. $5 \cdot 8$
b. $7(2)$

12. Use the associative property of multiplication to rewrite each of the following products.
- a. $(5 \cdot 7) \cdot 4$
b. $4 \cdot (6 \cdot 4)$

Answers

11. a. $8 \cdot 5$ b. $2(7)$

12. a. $5 \cdot (7 \cdot 4)$ b. $(4 \cdot 6) \cdot 4$

13. Find the area of the figures in Example 13, with the following changes:

- a. $s = 4$ feet
 b. $l = 7$ inches
 $w = 5$ inches

14. Use multiplication facts to find the solution to each of the following equations.

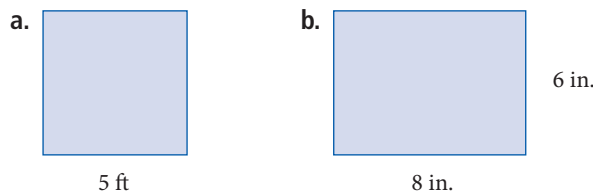
- a. $5 \cdot n = 35$
 b. $8 \cdot n = 72$
 c. $49 = 7 \cdot n$
 d. $27 = 9 \cdot n$

Answers

13. a. 16 square feet
 b. 35 square inches
 14. a. 7 b. 9 c. 7 d. 3

EXAMPLE 13

Find the area of each figure.



SOLUTION We use the preceding formulas to find the area. In each case, the units for area are square units.

- a. Area = $s^2 = (5 \text{ feet})^2 = 25$ square feet
 b. Area = $lw = (8 \text{ inches})(6 \text{ inches}) = 48$ square inches

E Solving Equations

If n is used to represent a number, then the equation

$$4 \cdot n = 12$$

is read “4 times n is 12,” or “The product of 4 and n is 12.” This means that we are looking for the number we multiply by 4 to get 12. The number is 3. Because the equation becomes a true statement if n is 3, we say that 3 is the solution to the equation.

EXAMPLE 14

Find the solution to each of the following equations:

- a. $6 \cdot n = 24$ b. $4 \cdot n = 36$ c. $15 = 3 \cdot n$ d. $21 = 3 \cdot n$

- SOLUTION**
- The solution to $6 \cdot n = 24$ is 4, because $6 \cdot 4 = 24$.
 - The solution to $4 \cdot n = 36$ is 9, because $4 \cdot 9 = 36$.
 - The solution to $15 = 3 \cdot n$ is 5, because $15 = 3 \cdot 5$.
 - The solution to $21 = 3 \cdot n$ is 7, because $21 = 3 \cdot 7$.

Getting Ready for Class

After reading through the preceding section, respond in your own words and in complete sentences.

- Use the numbers 7, 8, and 9 to give an example of the distributive property.
- When we write the distributive property in words, we say “multiplication distributes over addition.” It is also true that multiplication distributes over subtraction. Use the letters a , b , and c to write the distributive property using multiplication and subtraction.
- We can multiply 8 and 487 by writing 487 in expanded form as $400 + 80 + 7$ and then applying the distributive property. Apply the distributive property to the expression below and then simplify.

$$8(400 + 80 + 7) =$$

- Find the mistake in the following multiplication problem. Then work the problem correctly.

$$\begin{array}{r} 43 \\ \times 68 \\ \hline 344 \\ + 258 \\ \hline 602 \end{array}$$

Problem Set 1.5

A Multiply each of the following. [Example 1]

1. $3 \cdot 100$

2. $7 \cdot 100$

3. $3 \cdot 200$

4. $4 \cdot 200$

5. $6 \cdot 500$

6. $8 \cdot 400$

7. $5 \cdot 1,000$

8. $8 \cdot 1,000$

9. $3 \cdot 7,000$

10. $6 \cdot 7,000$

11. $9 \cdot 9,000$

12. $7 \cdot 7,000$

A Find each of the following products. (Multiply.) In each case use the shortcut method. [Examples 4–6]

13.
$$\begin{array}{r} 25 \\ \times 4 \\ \hline \end{array}$$

14.
$$\begin{array}{r} 43 \\ \times 9 \\ \hline \end{array}$$

15.
$$\begin{array}{r} 38 \\ \times 6 \\ \hline \end{array}$$

16.
$$\begin{array}{r} 45 \\ \times 7 \\ \hline \end{array}$$

17.
$$\begin{array}{r} 18 \\ \times 2 \\ \hline \end{array}$$

18.
$$\begin{array}{r} 29 \\ \times 3 \\ \hline \end{array}$$

19.
$$\begin{array}{r} 72 \\ \times 20 \\ \hline \end{array}$$

20.
$$\begin{array}{r} 68 \\ \times 30 \\ \hline \end{array}$$

21.
$$\begin{array}{r} 19 \\ \times 50 \\ \hline \end{array}$$

22.
$$\begin{array}{r} 24 \\ \times 40 \\ \hline \end{array}$$

23.
$$\begin{array}{r} 69 \\ \times 25 \\ \hline \end{array}$$

24.
$$\begin{array}{r} 27 \\ \times 36 \\ \hline \end{array}$$

25.
$$\begin{array}{r} 11 \\ \times 11 \\ \hline \end{array}$$

26.
$$\begin{array}{r} 12 \\ \times 21 \\ \hline \end{array}$$

27.
$$\begin{array}{r} 97 \\ \times 16 \\ \hline \end{array}$$

28.
$$\begin{array}{r} 24 \\ \times 39 \\ \hline \end{array}$$

29.
$$\begin{array}{r} 168 \\ \times 25 \\ \hline \end{array}$$

30.
$$\begin{array}{r} 452 \\ \times 34 \\ \hline \end{array}$$

$$\begin{array}{r} 31. \quad 728 \\ \times 91 \\ \hline \end{array}$$

$$\begin{array}{r} 32. \quad 680 \\ \times 76 \\ \hline \end{array}$$

$$\begin{array}{r} 33. \quad 698 \\ \times 400 \\ \hline \end{array}$$

$$\begin{array}{r} 34. \quad 879 \\ \times 600 \\ \hline \end{array}$$

$$\begin{array}{r} 35. \quad 111 \\ \times 111 \\ \hline \end{array}$$

$$\begin{array}{r} 36. \quad 123 \\ \times 321 \\ \hline \end{array}$$

$$\begin{array}{r} 37. \quad 532 \\ \times 200 \\ \hline \end{array}$$

$$\begin{array}{r} 38. \quad 277 \\ \times 900 \\ \hline \end{array}$$

$$\begin{array}{r} 39. \quad 856 \\ \times 232 \\ \hline \end{array}$$

$$\begin{array}{r} 40. \quad 455 \\ \times 248 \\ \hline \end{array}$$

$$\begin{array}{r} 41. \quad 976 \\ \times 628 \\ \hline \end{array}$$

$$\begin{array}{r} 42. \quad 432 \\ \times 555 \\ \hline \end{array}$$

$$\begin{array}{r} 43. \quad 2,468 \\ \times 135 \\ \hline \end{array}$$

$$\begin{array}{r} 44. \quad 2,725 \\ \times 324 \\ \hline \end{array}$$

$$\begin{array}{r} 45. \quad 24,563 \\ \times 735 \\ \hline \end{array}$$

$$\begin{array}{r} 46. \quad 56,728 \\ \times 852 \\ \hline \end{array}$$

$$\begin{array}{r} 47. \quad 44,777 \\ \times 5,888 \\ \hline \end{array}$$

$$\begin{array}{r} 48. \quad 33,999 \\ \times 2,555 \\ \hline \end{array}$$

B Complete the following tables.

49.

First Number a	Second Number b	Their Product ab
11	11	
11	22	
22	22	
22	44	

50.

First Number a	Second Number b	Their Product ab
25	15	
25	30	
50	15	
50	30	

51.

First Number a	Second Number b	Their Product ab
25	10	
25	100	
25	1,000	
25	10,000	

52.

First Number a	Second Number b	Their Product ab
11	111	
11	222	
22	111	
22	222	

53.

First Number a	Second Number b	Their Product ab
12	20	
36	20	
12	40	
36	40	

54.

First Number a	Second Number b	Their Product ab
10	12	
100	12	
1,000	12	
10,000	12	

B Write each of the following expressions in words, using the word *product*.

55. $6 \cdot 7$

56. $9(4)$

57. $2 \cdot n$

58. $5 \cdot x$

59. $9 \cdot 7 = 63$

60. $(5)(6) = 30$

B Write each of the following in symbols.

61. The product of 7 and n 62. The product of 9 and x

63. The product of 6 and 7 is 42.

64. The product of 8 and 9 is 72.

65. The product of 0 and 6 is 0.

66. The product of 1 and 6 is 6.

B Identify the products in each statement.

67. $9 \cdot 7 = 63$

68. $2(6) = 12$

69. $4(4) = 16$

70. $5 \cdot 5 = 25$

B Identify the factors in each statement.

71. $2 \cdot 3 \cdot 4 = 24$

72. $6 \cdot 1 \cdot 5 = 30$

73. $12 = 2 \cdot 2 \cdot 3$

74. $42 = 2 \cdot 3 \cdot 7$

C Rewrite each of the following using the commutative property of multiplication. [Example 11]

75. $5(9)$

76. $4(3)$

77. $6 \cdot 7$

78. $8 \cdot 3$

C Rewrite each of the following using the associative property of multiplication. [Example 12]

79. $2 \cdot (7 \cdot 6)$

80. $4 \cdot (8 \cdot 5)$

81. $3 \times (9 \times 1)$

82. $5 \times (8 \times 2)$

C Use the distributive property to rewrite each expression, then simplify.

83. $7(2 + 3)$

84. $4(5 + 8)$

85. $9(4 + 7)$

86. $6(9 + 5)$

87. $3(x + 1)$

88. $5(x + 8)$

89. $2(x + 5)$

90. $4(x + 3)$

E Find a solution for each equation. [Example 14]

91. $4 \cdot n = 12$

92. $3 \cdot n = 12$

93. $9 \cdot n = 81$

94. $6 \cdot n = 36$

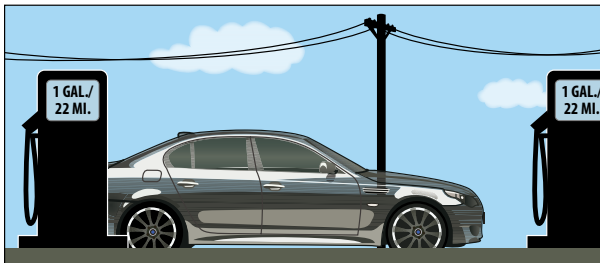
95. $0 = n \cdot 5$

96. $6 = 1 \cdot n$


■ Applying the Concepts

Most, but not all, of the application problems that follow require multiplication. Read the problems carefully before trying to solve them.

97. Planning a Trip A family decides to drive their compact car on their vacation. They figure it will require a total of about 130 gallons of gas for the vacation. If each gallon of gas will take them 22 miles, how long is the trip they are planning?



98. Rent A student pays \$675 rent each month. How much money does she spend on rent in 2 years?



- 99. Downloading Songs** You receive a gift card for the Apple™ iTunes™ store for \$25.00 and download 18 songs at \$0.99 per song. How much is left on your gift card?
- 100. Cost of Building a Home** When you consider building a new home it is helpful to be able to estimate the cost of building that house. A simple way to do this is to multiply the number of square feet under the roof of the house by the average building cost per square foot. Suppose you contact a builder who estimates that, on average, he charges \$142.00 per square foot. Determine the cost to build a 2,067 square foot house.
- 101. World's Busiest Airport** Atlanta, Georgia is home to the world's busiest airport, Hartsfield-Jackson Atlanta International Airport. According to the Federal Aviation Administration about 50 jets can land and take off every 15 minutes which is about 200 jets an hour. About how many jets land and take off in the month of July?
- 102. Flowers** It is probably no surprise that Valentine's Day is the busiest day of the year for florists. It is estimated that 214 million roses were produced for Valentine's Day in 2007 (Source: Society of American Florists). If a single rose costs a consumer \$2.50, what was the total revenue for the roses produced?

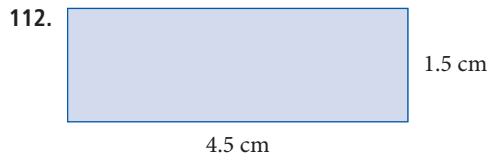
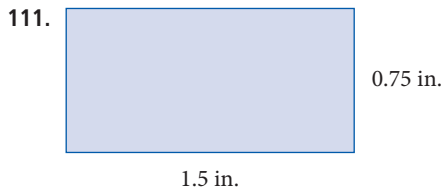
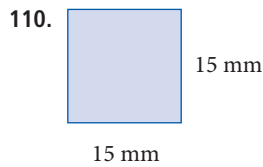
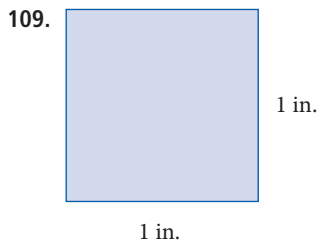
Exercise and Calories The table below is an extension of the table we used in Example 10 of this section. It gives the amount of energy expended during 1 hour of various activities for people of different weights. The accompanying figure is a nutrition label from a bag of Doritos tortilla chips. Use the information from the table and the nutrition label to answer Problems 103–108.

CALORIES BURNED THROUGH EXERCISE			
Activity	Calories Per Hour		
	120 Pounds	150 Pounds	180 Pounds
Bicycling	299	374	449
Bowling	212	265	318
Handball	544	680	816
Jazzercise	272	340	408
Jogging	544	680	816
Skiing	435	544	653

Nutrition Facts	
Serving Size 1 oz. (28g/About 12 chips)	
Servings Per Container About 2	
Amount Per Serving	
Calories 140	Calories from fat 60
% Daily Value*	
Total Fat 7g	11%
Saturated Fat 1g	6%
Cholesterol 0mg	0%
Sodium 170mg	7%
Total Carbohydrate 18g	6%
Dietary Fiber 1g	4%
Sugars less than 1g	
Protein 2g	
Vitamin A 0%	Vitamin C 0%
Calcium 4%	Iron 2%
*Percent Daily Values are based on a 2,000 calorie diet	

- 103.** Suppose you weigh 180 pounds. How many calories would you burn if you play handball for 2 hours and then ride your bicycle for 1 hour?
- 104.** How many calories are burned by a 120-lb person who jogs for 1 hour and then goes bike riding for 2 hours?
- 105.** How many calories would you consume if you ate the entire bag of chips?
- 106.** Approximately how many chips are in the bag?
- 107.** If you weigh 180 pounds, will you burn off the calories consumed by eating 3 servings of tortilla chips if you ride your bike 1 hour?
- 108.** If you weigh 120 pounds, will you burn off the calories consumed by eating 3 servings of tortilla chips if you ride your bike for 1 hour?

D Find the area of each figure. [Example 13]



■ Estimating

Mentally estimate the answer to each of the following problems by rounding each number to the indicated place and then multiplying.

113.
$$\begin{array}{r} 750 \text{ hundred} \\ \times 12 \text{ ten} \\ \hline \end{array}$$

114.
$$\begin{array}{r} 591 \text{ hundred} \\ \times 323 \text{ hundred} \\ \hline \end{array}$$

115.
$$\begin{array}{r} 3,472 \text{ thousand} \\ \times 511 \text{ hundred} \\ \hline \end{array}$$

116.
$$\begin{array}{r} 399 \text{ hundred} \\ \times 298 \text{ hundred} \\ \hline \end{array}$$

117.
$$\begin{array}{r} 2,399 \text{ thousand} \\ \times 698 \text{ hundred} \\ \hline \end{array}$$

118.
$$\begin{array}{r} 9,999 \text{ thousand} \\ \times 666 \text{ hundred} \\ \hline \end{array}$$

■ Extending the Concepts: Number Sequences

A *geometric sequence* is a sequence of numbers in which each number is obtained from the previous number by multiplying by the same number each time. For example, the sequence 3, 6, 12, 24, ... is a geometric sequence, starting with 3, in which each number comes from multiplying the previous number by 2. Find the next number in each of the following geometric sequences.

119. 5, 10, 20, ...

120. 10, 50, 250, ...

121. 2, 6, 18, ...

122. 12, 24, 48, ...

Introduction . . .

Darlene is planning a party and would like to serve 8-ounce glasses of soda. The glasses will be filled from 32-ounce bottles of soda. In order to know how many bottles of soda to buy, she needs to find out how many of the 8-ounce glasses can be filled by one of the 32-ounce bottles. One way to solve this problem is with division: dividing 32 by 8. A diagram of the problem is shown in Figure 1.

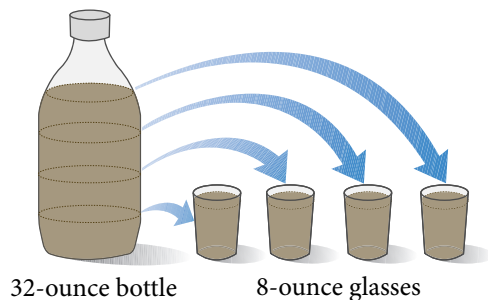


FIGURE 1

As a division problem:

$$32 \div 8 = 4$$

As a multiplication problem:

$$4 \cdot 8 = 32$$

A Notation

As was the case with multiplication, there are many ways to indicate division. All the following statements are equivalent. They all mean 10 divided by 5.

$$10 \div 5, \quad \frac{10}{5}, \quad 10/5, \quad 5 \overline{)10}$$

The kind of notation we use to write division problems will depend on the situation. We will use the notation $5 \overline{)10}$ mostly with the long-division problems found in this chapter. The notation $\frac{10}{5}$ will be used in the chapter on fractions and in later chapters. The horizontal line used with the notation $\frac{10}{5}$ is called the *fraction bar*.

Vocabulary

The word *quotient* is used to indicate division. If we say “The quotient of 10 and 5 is 2,” then we mean

$$10 \div 5 = 2 \quad \text{or} \quad \frac{10}{5} = 2$$

The 10 is called the *dividend*, and the 5 is called the *divisor*. All the expressions, $10 \div 5$, $\frac{10}{5}$, and 2, are called the *quotient* of 10 and 5.

Objectives

- A** Understand the notation and vocabulary of division.
- B** Divide whole numbers.
- C** Solve applications using division.

TABLE 1

In English	In Symbols
The quotient of 15 and 3	$15 \div 3$, or $\frac{15}{3}$, or $15/3$
The quotient of 3 and 15	$3 \div 15$, or $\frac{3}{15}$, or $3/15$
The quotient of 8 and n	$8 \div n$, or $\frac{8}{n}$, or $8/n$
x divided by 2	$x \div 2$, or $\frac{x}{2}$, or $x/2$
The quotient of 21 and 3 is 7.	$21 \div 3 = 7$, or $\frac{21}{3} = 7$

The Meaning of Division

One way to arrive at an answer to a division problem is by thinking in terms of multiplication. For example, if we want to find the quotient of 32 and 8, we may ask, “What do we multiply by 8 to get 32?”

$$32 \div 8 = ? \quad \text{means} \quad 8 \cdot ? = 32$$

Because we know from our work with multiplication that $8 \cdot 4 = 32$, it must be true that

$$32 \div 8 = 4$$

Table 2 lists some additional examples.

TABLE 2

Division	because	Multiplication
$18 \div 6 = 3$	because	$6 \cdot 3 = 18$
$32 \div 8 = 4$	because	$8 \cdot 4 = 32$
$10 \div 2 = 5$	because	$2 \cdot 5 = 10$
$72 \div 9 = 8$	because	$9 \cdot 8 = 72$

B Division by One-Digit Numbers

Consider the following division problem:

$$465 \div 5$$

We can think of this problem as asking the question, “How many fives can we subtract from 465?” To answer the question we begin subtracting multiples of 5. One way to organize this process is shown below:

$$\begin{array}{r}
 90 \leftarrow \text{We first guess that there are at least 90 fives in 465} \\
 \overline{5)465} \\
 - 450 \leftarrow 90(5) = 450 \\
 \hline
 15 \leftarrow 15 \text{ is left after we subtract 90 fives from 465}
 \end{array}$$

What we have done so far is subtract 90 fives from 465 and found that 15 is still left. Because there are 3 fives in 15, we continue the process.

$$\begin{array}{r}
 3 \leftarrow \text{There are 3 fives in 15} \\
 90 \\
 5 \overline{)465} \\
 \underline{-450} \\
 15 \\
 \underline{-15} \leftarrow 3 \cdot 5 = 15 \\
 0 \leftarrow \text{The difference is 0}
 \end{array}$$

The total number of fives we have subtracted from 465 is

$$90 + 3 = 93$$

We now summarize the results of our work.

$$465 \div 5 = 93 \quad \begin{array}{l} \text{which we check} \\ \text{with multiplication} \end{array} \rightarrow \begin{array}{r} 93 \\ \times 5 \\ \hline 465 \end{array}$$

The division problem just shown can be shortened by eliminating the subtraction signs, eliminating the zeros in each estimate, and eliminating some of the numbers that are repeated in the problem.

	3		93
	90		5)465
The shorthand	5)465	looks like	5)465
form for this	450	this.	45↓
problem	15		15
	15		15
	0		0
			The arrow indicates that we bring down the 5 after we subtract.

The problem shown above on the right is the shortcut form of what is called *long division*. Here is an example showing this shortcut form of long division from start to finish.

EXAMPLE 1

Divide: $595 \div 7$

SOLUTION Because $7(8) = 56$, our first estimate of the number of sevens that can be subtracted from 595 is 80:

$$\begin{array}{r}
 8 \leftarrow \text{The 8 is placed above the tens column} \\
 \text{so we know our first estimate is 80} \\
 7 \overline{)595} \\
 \underline{56} \downarrow \leftarrow 8(7) = 56 \\
 35 \leftarrow 59 - 56 = 3; \text{ then bring down the 5}
 \end{array}$$

Since $7(5) = 35$, we have

$$\begin{array}{r}
 85 \leftarrow \text{There are 5 sevens in 35} \\
 7 \overline{)595} \\
 \underline{56} \downarrow \\
 35 \\
 \underline{35} \leftarrow 5(7) = 35 \\
 0 \leftarrow 35 - 35 = 0
 \end{array}$$

Our result is $595 \div 7 = 85$, which we can check with multiplication:

$$\begin{array}{r}
 85 \\
 \times 7 \\
 \hline
 595
 \end{array}$$

PRACTICE PROBLEMS

1. Divide.
 - a. $296 \div 4$
 - b. $2,960 \div 4$

Answer

1. a. 74 b. 740

Division by Two-Digit Numbers

EXAMPLE 2

Divide: $9,380 \div 35$

SOLUTION In this case our divisor, 35, is a two-digit number. The process of division is the same. We still want to find the number of thirty-fives we can subtract from 9,380.

$$\begin{array}{r} 2 \quad \leftarrow \text{The 2 is placed above the hundreds column} \\ 35 \overline{)9,380} \\ \underline{70} \quad \leftarrow 2(35) = 70 \\ 238 \quad \leftarrow 93 - 70 = 23; \text{ then bring down the 8} \end{array}$$

We can make a few preliminary calculations to help estimate how many thirty-fives are in 238:

$$5 \times 35 = 175 \quad 6 \times 35 = 210 \quad 7 \times 35 = 245$$

Because 210 is the closest to 238 without being larger than 238, we use 6 as our next estimate:

$$\begin{array}{r} 26 \quad \leftarrow 6 \text{ in the tens column means this estimate is } 60 \\ 35 \overline{)9,380} \\ \underline{70} \\ 238 \\ \underline{210} \quad \leftarrow 6(35) = 210 \\ 280 \quad \leftarrow 238 - 210 = 28; \text{ bring down the } 0 \end{array}$$

Because $35(8) = 280$, we have

$$\begin{array}{r} 268 \\ 35 \overline{)9,380} \\ \underline{70} \\ 238 \\ \underline{210} \\ 280 \\ \underline{280} \quad \leftarrow 8(35) = 280 \\ 0 \quad \leftarrow 280 - 280 = 0 \end{array}$$

We can check our result with multiplication:

$$\begin{array}{r} 268 \\ \times 35 \\ \hline 1,340 \\ 8,040 \\ \hline 9,380 \end{array}$$

EXAMPLE 3

Divide: 1,872 by 18.

SOLUTION Here is the first step.

$$\begin{array}{r} 1 \quad \leftarrow 1 \text{ is placed above hundred column} \\ 18 \overline{)1,872} \\ \underline{18} \quad \leftarrow \text{Multiply } 1(18) \text{ to get } 18 \\ 0 \quad \leftarrow \text{Subtract to get } 0 \end{array}$$

2. Divide.

a. $6,792 \div 24$

b. $67,920 \div 24$

3. Divide.

$1,872 \div 9$

Answer

2. a. 283 b. 2,830

The next step is to bring down the 7 and divide again.

$$\begin{array}{r}
 10 \leftarrow 0 \text{ is placed above tens column. } 0 \text{ is the largest number} \\
 18 \overline{)1,872} \quad \leftarrow \text{we can multiply by 18 and not go over 7} \\
 \underline{18} \downarrow \\
 07 \\
 \underline{0} \leftarrow \text{Multiply } 0(18) \text{ to get } 0 \\
 7 \leftarrow \text{Subtract to get } 7
 \end{array}$$

Here is the complete problem.

$$\begin{array}{r}
 104 \\
 18 \overline{)1,872} \\
 \underline{18} \downarrow \\
 07 \downarrow \\
 \underline{0} \downarrow \\
 72 \\
 \underline{72} \\
 0
 \end{array}$$

To show our answer is correct, we multiply.

$$18(104) = 1,872$$

Division with Remainders

Suppose Darlene was planning to use 6-ounce glasses instead of 8-ounce glasses for her party. To see how many glasses she could fill from the 32-ounce bottle, she would divide 32 by 6. If she did so, she would find that she could fill 5 glasses, but after doing so she would have 2 ounces of soda left in the bottle. A diagram of this problem is shown in Figure 2.

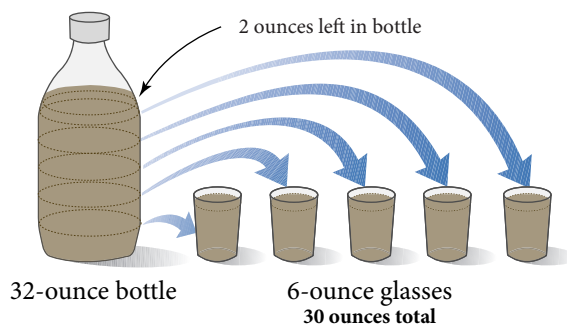


FIGURE 2

Writing the results in the diagram as a division problem looks like this:

$$\begin{array}{r}
 5 \leftarrow \text{Quotient} \\
 \text{Divisor} \rightarrow 6 \overline{)32} \leftarrow \text{Dividend} \\
 \underline{30} \\
 2 \leftarrow \text{Remainder}
 \end{array}$$

4. Divide.

a. $1,883 \div 27$

b. $1,883 \div 18$

EXAMPLE 4Divide: $1,690 \div 67$ **SOLUTION** Dividing as we have previously, we get

$$\begin{array}{r}
 25 \\
 67 \overline{)1,690} \\
 \underline{1\ 34} \\
 350 \\
 \underline{335} \\
 15 \leftarrow 15 \text{ is left over}
 \end{array}$$

We have 15 left, and because 15 is less than 67, no more sixty-sevens can be subtracted. In a situation like this we call 15 the *remainder* and write

These indicate that the remainder is 15

$$\begin{array}{r}
 25 \text{ R } 15 \\
 67 \overline{)1,690} \\
 \underline{1\ 34} \\
 350 \\
 \underline{335} \\
 15
 \end{array}
 \quad \text{or} \quad
 \begin{array}{r}
 25 \frac{15}{67} \\
 67 \overline{)1,690} \\
 \underline{1\ 34} \\
 350 \\
 \underline{335} \\
 15
 \end{array}$$

Both forms of notation shown above indicate that 15 is the remainder. The notation R 15 is the notation we will use in this chapter. The notation $\frac{15}{67}$ will be useful in the chapter on fractions.

To check a problem like this, we multiply the divisor and the quotient as usual, and then add the remainder to this result:

$$\begin{array}{r}
 67 \\
 \times 25 \\
 \hline
 335 \\
 1,340 \\
 \hline
 1,675 \leftarrow \text{Product of divisor and quotient}
 \end{array}$$

$$\begin{array}{c}
 1,675 + 15 = 1,690 \\
 \uparrow \qquad \qquad \swarrow \\
 \text{Remainder} \qquad \text{Dividend}
 \end{array}$$

USING TECHNOLOGY**Calculators**

Here is how we would work the problem shown in Example 4 on a calculator:

Scientific Calculator: 1690 $\boxed{\div}$ 67 $\boxed{=}$

Graphing Calculator: 1690 $\boxed{\div}$ 67 $\boxed{\text{ENT}}$

In both cases the calculator will display 25.223881 (give or take a few digits at the end), which gives the remainder in decimal form. We will discuss decimals later in the book.

Answer

4. a. $69 \text{ R } 20$, or $69\frac{20}{27}$

b. $104 \text{ R } 11$, or $104\frac{11}{18}$

C Applications

EXAMPLE 5

A family has an annual income of \$35,880. How much is their average monthly income?

SOLUTION Because there are 12 months in a year and the yearly (annual) income is \$35,880, we want to know what \$35,880 divided into 12 equal parts is. Therefore we have

$$\begin{array}{r} 2990 \\ 12 \overline{)35,880} \\ \underline{24} \\ 118 \\ \underline{108} \\ 108 \\ \underline{108} \\ 00 \end{array}$$

Because $35,880 \div 12 = 2,990$, the monthly income for this family is \$2,990.

Division by Zero

We cannot divide by 0. That is, we cannot use 0 as a divisor in any division problem. Here's why.

Suppose there was an answer to the problem

$$\frac{8}{0} = ?$$

That would mean that

$$0 \cdot ? = 8$$

But we already know that multiplication by 0 always produces 0. There is no number we can use for the ? to make a true statement out of

$$0 \cdot ? = 8$$

Because this was equivalent to the original division problem

$$\frac{8}{0} = ?$$

we have no number to associate with the expression $\frac{8}{0}$. It is undefined.

Rule

Division by 0 is undefined. Any expression with a divisor of 0 is undefined. We cannot divide by 0.

5. A family spends \$1,872 on a 12-day vacation. How much did they spend each day on average?

Note

To estimate the answer to Example 5 quickly, we can replace 35,880 with 36,000 and mentally calculate $36,000 \div 12$ which gives an estimate of 3,000. Our actual answer, 2,990, is close enough to our estimate to convince us that we have not made a major error in our calculation.

Getting Ready for Class

After reading through the preceding section, respond in your own words and in complete sentences.

1. Which sentence below describes the problem shown in Example 1?
 - a. The quotient of 7 and 595 is 85.
 - b. Seven divided by 595 is 85.
 - c. The quotient of 595 and 7 is 85.
2. In Example 2, we divide 9,380 by 35 to obtain 268. Suppose we add 35 to 9,380, making it 9,415. What will our answer be if we divide 9,415 by 35?
3. Example 4 shows that $1,690 \div 67$ gives a quotient of 25 with a remainder of 15. If we were to divide 1,692 by 67, what would the remainder be?
4. Explain why division by 0 is undefined in mathematics.

Problem Set 1.6

A Write each of the following in symbols.

1. The quotient of 6 and 3
2. The quotient of 3 and 6
3. The quotient of 45 and 9
4. The quotient of 12 and 4
5. The quotient of r and s
6. The quotient of s and r
7. The quotient of 20 and 4 is 5.
8. The quotient of 20 and 5 is 4.

Write a multiplication statement that is equivalent to each of the following division statements.

9. $6 \div 2 = 3$
10. $6 \div 3 = 2$
11. $\frac{36}{9} = 4$
12. $\frac{36}{4} = 9$
13. $\frac{48}{6} = 8$
14. $\frac{35}{7} = 5$
15. $28 \div 7 = 4$
16. $81 \div 9 = 9$

B Find each of the following quotients. (Divide.) [Examples 1–3]

17. $25 \div 5$
18. $72 \div 8$
19. $40 \div 5$
20. $12 \div 2$
21. $9 \div 0$
22. $7 \div 1$
23. $360 \div 8$
24. $285 \div 5$
25. $\frac{138}{6}$
26. $\frac{267}{3}$
27. $5 \overline{)7,650}$
28. $5 \overline{)5,670}$
29. $5 \overline{)6,750}$
30. $5 \overline{)6,570}$
31. $3 \overline{)54,000}$
32. $3 \overline{)50,400}$
33. $3 \overline{)50,040}$
34. $3 \overline{)50,004}$

■ Estimating

Work Problems 35 through 38 mentally, without using a calculator.

35. The quotient $845 \div 93$ is closest to which of the following numbers?
 a. 10 b. 100 c. 1,000 d. 10,000
36. The quotient $762 \div 43$ is closest to which of the following numbers?
 a. 2 b. 20 c. 200 d. 2,000
37. The quotient $15,208 \div 771$ is closest to which of the following numbers?
 a. 2 b. 20 c. 200 d. 2,000
38. The quotient $24,471 \div 523$ is closest to which of the following numbers?
 a. 5 b. 50 c. 500 d. 5,000

Mentally give a one-digit estimate for each of the following quotients. That is, for each quotient, mentally estimate the answer using one of the digits 1, 2, 3, 4, 5, 6, 7, 8, or 9.

39. $316 \div 289$ 40. $662 \div 289$ 41. $728 \div 355$ 42. $728 \div 177$

43. $921 \div 243$ 44. $921 \div 442$ 45. $673 \div 109$ 46. $673 \div 218$

B Divide. You shouldn't have any wrong answers because you can always check your results with multiplication.
 [Examples 1–3]

47. $1,440 \div 32$ 48. $1,206 \div 67$ 49. $\frac{2,401}{49}$ 50. $\frac{4,606}{49}$

51. $28 \overline{)12,096}$ 52. $28 \overline{)96,012}$ 53. $63 \overline{)90,594}$ 54. $45 \overline{)17,595}$

55. $87 \overline{)61,335}$ 56. $79 \overline{)48,032}$ 57. $45 \overline{)135,900}$ 58. $56 \overline{)227,920}$

B Complete the following tables.

59.

First Number a	Second Number b	The Quotient of a and b $\frac{a}{b}$
100	25	
100	26	
100	27	
100	28	

60.

First Number a	Second Number b	The Quotient of a and b $\frac{a}{b}$
100	25	
101	25	
102	25	
103	25	

B The following division problems all have remainders. [Example 4]

61. $6\overline{)370}$

62. $8\overline{)390}$

63. $3\overline{)271}$

64. $3\overline{)172}$

65. $26\overline{)345}$

66. $26\overline{)543}$

67. $71\overline{)16,620}$

68. $71\overline{)33,240}$

69. $23\overline{)9,250}$

70. $23\overline{)20,800}$

71. $169\overline{)5,950}$

72. $391\overline{)34,450}$

C Applying the Concepts [Example 5]

The application problems that follow may involve more than merely division. Some may require addition, subtraction, or multiplication, whereas others may use a combination of two or more operations.


73. Monthly Income A family has an annual income of \$42,300. How much is their monthly income?

74. Hourly Wages If a man works an 8-hour shift and is paid \$96, how much does he make for 1 hour?

75. Price per Pound If 6 pounds of a certain kind of fruit cost \$4.74, how much does 1 pound cost?

76. Cost of a Dress A dress shop orders 45 dresses for a total of \$2,205. If they paid the same amount for each dress, how much was each dress?

- 77. Filling Glasses** How many 32-ounce bottles of Coke will be needed to fill sixteen 6-ounce glasses?
- 78. Filling Glasses** How many 8-ounce glasses can be filled from three 32-ounce bottles of soda?

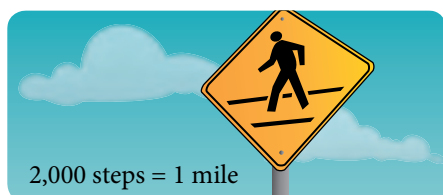


- 79. Filling Glasses** How many 5-ounce glasses can be filled from a 32-ounce bottle of milk? How many ounces of milk will be left in the bottle when all the glasses are full?
- 80. Filling Glasses** How many 3-ounce glasses can be filled from a 28-ounce bottle of milk? How many ounces of milk will be left in the bottle when all the glasses are filled?

- 81. Boston Red Sox** The annual payroll for the Boston Red Sox for the 2007 season was about \$156 million dollars. If there are 40 players on the roster what is the average salary per player for the Boston Red Sox?
- 82. Miles per Gallon** A traveling salesman kept track of his mileage for 1 month. He found that he traveled 1,104 miles and used 48 gallons of gas. How many miles did he travel on each gallon of gas?

- 83. Milligrams of Calcium** Suppose one egg contains 25 milligrams of calcium, a piece of toast contains 40 milligrams of calcium, and a glass of milk contains 215 milligrams of calcium. How many milligrams of calcium are contained in a breakfast that consists of three eggs, two glasses of milk, and four pieces of toast?
- 84. Milligrams of Iron** Suppose a glass of juice contains 3 milligrams of iron and a piece of toast contains 2 milligrams of iron. If Diane drinks two glasses of juice and has three pieces of toast for breakfast, how much iron is contained in the meal?

- 85. Fitness Walking** The guidelines for fitness now indicate that a person who walks 10,000 steps daily is physically fit. According to *The Walking Site* on the Internet, it takes just over 2,000 steps to walk one mile. If that is the case, how many miles do you need to walk in order to take 10,000 steps?
- 86. Fundraiser** As part of a fundraiser for the Earth Day activities on your campus, three volunteers work to stuff 3,210 envelopes with information about global warming. How many envelopes did each volunteer stuff?



Exponents and Order of Operations

1.7

Exponents are a shorthand way of writing repeated multiplication. In the expression 2^3 , 2 is called the *base* and 3 is called the *exponent*. The expression 2^3 is read “2 to the third power” or “2 cubed.” The exponent 3 tells us to use the base 2 as a multiplication factor three times.

$$2^3 = 2 \cdot 2 \cdot 2 \quad 2 \text{ is used as a factor three times}$$

The expression 2^3 is equal to the number 8. We can summarize this discussion with the following definition.

Definition

An **exponent** is a whole number that indicates how many times the base is to be used as a factor. Exponents indicate repeated multiplication.

A Exponents

In the expression 5^2 , 5 is the base and 2 is the exponent. The meaning of the expression is

$$\begin{aligned} 5^2 &= 5 \cdot 5 && 5 \text{ is used as a factor two times} \\ &= 25 \end{aligned}$$

The expression 5^2 is read “5 to the second power” or “5 squared.”

Here are some more examples.

EXAMPLE 1

3^2 The base is 3, and the exponent is 2. The expression is read “3 to the second power” or “3 squared.”

EXAMPLE 2

3^3 The base is 3, and the exponent is 3. The expression is read “3 to the third power” or “3 cubed.”

EXAMPLE 3

2^4 The base is 2, and the exponent is 4. The expression is read “2 to the fourth power.”

As you can see from these examples, a base raised to the second power is also said to be *squared*, and a base raised to the third power is also said to be *cubed*. These are the only two exponents (2 and 3) that have special names. All other exponents are referred to only as “fourth powers,” “fifth powers,” “sixth powers,” and so on.

B Expressions with Exponents

The next examples show how we can simplify expressions involving exponents by using repeated multiplication.

EXAMPLE 4

$$3^2 = 3 \cdot 3 = 9$$

EXAMPLE 5

$$4^2 = 4 \cdot 4 = 16$$

Objectives

- A Identify the base and exponent of an expression.
- B Simplify expressions with exponents.
- C Use the rule for order of operations.

PRACTICE PROBLEMS

For each expression, name the base and the exponent, and write the expression in words.

1. 5^2

2. 2^3

3. 1^4

Simplify each of the following by using repeated multiplication.

4. 5^2

5. 9^2

Answers

1–3. See solutions section.

4. 25 5. 81

6. 2^3

7. 1^4

8. 2^5

EXAMPLE 6

$3^3 = 3 \cdot 3 \cdot 3 = 9 \cdot 3 = 27$

EXAMPLE 7

$3^4 = 3 \cdot 3 \cdot 3 \cdot 3 = 9 \cdot 9 = 81$

EXAMPLE 8

$2^4 = 2 \cdot 2 \cdot 2 \cdot 2 = 4 \cdot 4 = 16$

USING TECHNOLOGY**Calculators**

Here is how we use a calculator to evaluate exponents, as we did in Example 8:

Scientific Calculator: 2 $\boxed{x^y}$ 4 $\boxed{=}$

Graphing Calculator: 2 $\boxed{\wedge}$ 4 $\boxed{\text{ENT}}$ or 2 $\boxed{x^y}$ 4 $\boxed{\text{ENT}}$

(depending on the calculator)

Finally, we should consider what happens when the numbers 0 and 1 are used as exponents. First of all, any number raised to the first power is itself. That is, if we let the letter a represent any number, then

$$a^1 = a$$

To take care of the cases when 0 is used as an exponent, we must use the following definition:

Definition

Any number other than 0 raised to the 0 power is 1. That is, if a represents any nonzero number, then it is always true that

$$a^0 = 1$$

EXAMPLE 9

$5^1 = 5$

EXAMPLE 10

$9^1 = 9$

EXAMPLE 11

$4^0 = 1$

EXAMPLE 12

$8^0 = 1$

C Order of Operations

The symbols we use to specify operations, $+$, $-$, \cdot , \div , along with the symbols we use for grouping, $()$ and $[]$, serve the same purpose in mathematics as punctuation marks in English. They may be called the punctuation marks of mathematics.

Consider the following sentence:

Bob said John is tall.

It can have two different meanings, depending on how we punctuate it:

1. "Bob," said John, "is tall."
2. Bob said, "John is tall."

Simplify each of the following expressions.

9. 7^1

10. 4^1

11. 9^0

12. 1^0

Answers

6. 8 7. 1 8. 32

9. 7 10. 4 11. 1 12. 1

Without the punctuation marks we don't know which meaning the sentence has.

Now, consider the following mathematical expression:

$$4 + 5 \cdot 2$$

What should we do? Should we add 4 and 5 first, or should we multiply 5 and 2 first? There seem to be two different answers. In mathematics we want to avoid situations in which two different results are possible. Therefore we follow the rule for order of operations.

Definition

Order of Operations When evaluating mathematical expressions, we will perform the operations in the following order:

1. If the expression contains grouping symbols, such as parentheses (), brackets [], or a fraction bar, then we perform the operations inside the grouping symbols, or above and below the fraction bar, first.
2. Then we evaluate, or simplify, any numbers with exponents.
3. Then we do all multiplications and divisions in order, starting at the left and moving right.
4. Finally, we do all additions and subtractions, from left to right.

According to our rule, the expression $4 + 5 \cdot 2$ would have to be evaluated by multiplying 5 and 2 first, and then adding 4. The correct answer—and the only answer—to this problem is 14.

$$\begin{aligned} 4 + 5 \cdot 2 &= 4 + 10 && \text{Multiply first,} \\ &= 14 && \text{then add} \end{aligned}$$

Here are some more examples that illustrate how we apply the rule for order of operations to simplify (or evaluate) expressions.

EXAMPLE 13

Simplify: $4 \cdot 8 - 2 \cdot 6$

SOLUTION We multiply first and then subtract:

$$\begin{aligned} 4 \cdot 8 - 2 \cdot 6 &= 32 - 12 && \text{Multiply first,} \\ &= 20 && \text{then subtract} \end{aligned}$$

EXAMPLE 14

Simplify: $5 + 2(7 - 1)$

SOLUTION According to the rule for the order of operations, we must do what is inside the parentheses first:

$$\begin{aligned} 5 + 2(7 - 1) &= 5 + 2(6) && \text{Inside parentheses first,} \\ &= 5 + 12 && \text{then multiply,} \\ &= 17 && \text{then add} \end{aligned}$$

EXAMPLE 15

Simplify: $9 \cdot 2^3 + 36 \div 3^2 - 8$

SOLUTION

$$\begin{aligned} 9 \cdot 2^3 + 36 \div 3^2 - 8 &= 9 \cdot 8 + 36 \div 9 - 8 && \text{Exponents first,} \\ &= 72 + 4 - 8 && \text{then multiply and divide,} \\ &&& \text{left to right.} \\ &= 76 - 8 && \text{Add and subtract,} \\ &= 68 && \text{left to right} \end{aligned}$$


Note To help you to remember the order of operations you can use the popular sentence

Please **Excuse My Dear Aunt Sally**, or the acronym **PEMDAS**

Parentheses (or grouping)
Exponents

Multiplication and
Division, from left to right

Addition and
Subtraction, from left to right

13. Simplify.

- a. $5 \cdot 7 - 3 \cdot 6$
- b. $5 \cdot 70 - 3 \cdot 60$

14. Simplify: $7 + 3(6 + 4)$

15. Simplify.

- a. $28 \div 7 - 3$
- b. $6 \cdot 3^2 + 64 \div 2^4 - 2$

Answers

13. a. 17 b. 170 14. 37
15. a. 1 b. 56

USING TECHNOLOGY**Calculators**

Here is how we use a calculator to work the problem shown in Example 14:

SCIENTIFIC CALCULATOR: 5 $\boxed{+}$ 2 $\boxed{\times}$ ($\boxed{7}$ $\boxed{-}$ 1 $\boxed{)}$ $\boxed{=}$

GRAPHING CALCULATOR: 5 $\boxed{+}$ 2 ($\boxed{7}$ $\boxed{-}$ 1 $\boxed{)}$ $\boxed{\text{ENT}}$

Example 15 on a calculator looks like this:

SCIENTIFIC CALCULATOR: 9 $\boxed{\times}$ 2 $\boxed{\times^y}$ 3 $\boxed{+}$ 36 $\boxed{\div}$ 3 $\boxed{\times^y}$ 2 $\boxed{-}$ 8 $\boxed{=}$

GRAPHING CALCULATOR: 9 $\boxed{\times}$ 2 $\boxed{\wedge}$ 3 $\boxed{+}$ 36 $\boxed{\div}$ 3 $\boxed{\wedge}$ 2 $\boxed{-}$ 8 $\boxed{\text{ENT}}$

16. Simplify.

- a. $5 + 3[24 - 5(6 - 2)]$
 b. $50 + 30[240 - 50(6 - 2)]$

EXAMPLE 16

Simplify: $3 + 2[10 - 3(5 - 2)]$

SOLUTION The brackets, [], are used in the same way as parentheses. In a case like this we move to the innermost grouping symbols first and begin simplifying:

$$\begin{aligned} 3 + 2[10 - 3(5 - 2)] &= 3 + 2[10 - 3(3)] \\ &= 3 + 2[10 - 9] \\ &= 3 + 2[1] \\ &= 3 + 2 \\ &= 5 \end{aligned}$$

Table 1 lists some English expressions and their corresponding mathematical expressions written in symbols.

TABLE 1

In English	Mathematical Equivalent
5 times the sum of 3 and 8	$5(3 + 8)$
Twice the difference of 4 and 3	$2(4 - 3)$
6 added to 7 times the sum of 5 and 6	$6 + 7(5 + 6)$
The sum of 4 times 5 and 8 times 9	$4 \cdot 5 + 8 \cdot 9$
3 subtracted from the quotient of 10 and 2	$10 \div 2 - 3$

STUDY SKILLS**Read the Book Before Coming to Class**

As we mentioned in the Preface, it is best to have read the section to be covered in class before getting to class. Even if you don't understand everything that you have read, you are still better off reading ahead than not. The Getting Ready for Class questions at the end of each section are intended to give you things to look for in the reading that will be important in understanding what is in the section.

Getting Ready for Class

After reading through the preceding section, respond in your own words and in complete sentences.

- In the expression 5^3 , which number is the base?
- Give a written description of the process you would use to simplify the expression $3 + 4(5 + 6)$.
- What is the first step in simplifying the expression $8 + 6 \div 3 - 1$?
- How do you remember the correct Order of Operations?

Answers

16. a. 17 b. 1,250

Problem Set 1.7

A For each of the following expressions, name the base and the exponent. [Examples 1–3]

1. 4^5

2. 5^4

3. 3^6

4. 6^3

5. 8^2

6. 2^8

7. 9^1

8. 1^9

9. 4^0

10. 0^4

B Use the definition of exponents as indicating repeated multiplication to simplify each of the following expressions. [Examples 4–12]

11. 6^2

12. 7^2

13. 2^3

14. 2^4

15. 1^4

16. 5^1

17. 9^0

18. 27^0

19. 9^2

20. 8^2

21. 10^1

22. 8^1

23. 12^1

24. 16^0

25. 45^0

26. 3^4

C Use the rule for the order of operations to simplify each expression. [Examples 13–16]

27. $16 - 8 + 4$

28. $16 - 4 + 8$

29. $20 \div 2 \cdot 10$

30. $40 \div 4 \cdot 5$

31. $20 - 4 \cdot 4$

32. $30 - 10 \cdot 2$

33. $3 + 5 \cdot 8$

34. $7 + 4 \cdot 9$

35. $3 \cdot 6 - 2$

36. $5 \cdot 1 + 6$

37. $6 \cdot 2 + 9 \cdot 8$

38. $4 \cdot 5 + 9 \cdot 7$

39. $4 \cdot 5 - 3 \cdot 2$

40. $5 \cdot 6 - 4 \cdot 3$

41. $5^2 + 7^2$

42. $4^2 + 9^2$

43. $480 + 12(32)^2$

44. $360 + 14(27)^2$

45. $3 \cdot 2^3 + 5 \cdot 4^2$

46. $4 \cdot 3^2 + 5 \cdot 2^3$

47. $8 \cdot 10^2 - 6 \cdot 4^3$

48. $5 \cdot 11^2 - 3 \cdot 2^3$

49. $2(3 + 6 \cdot 5)$

50. $8(1 + 4 \cdot 2)$

51. $19 + 50 \div 5^2$

52. $9 + 8 \div 2^2$

53. $9 - 2(4 - 3)$

54. $15 - 6(9 - 7)$

55. $4 \cdot 3 + 2(5 - 3)$

56. $6 \cdot 8 + 3(4 - 1)$

57. $4[2(3) + 3(5)]$

58. $3[2(5) + 3(4)]$

59. $(7 - 3)(8 + 2)$

60. $(9 - 5)(9 + 5)$

61. $3(9 - 2) + 4(7 - 2)$

62. $7(4 - 2) - 2(5 - 3)$

63. $18 + 12 \div 4 - 3$

64. $20 + 16 \div 2 - 5$

65. $4(10^2) + 20 \div 4$

66. $3(4^2) + 10 \div 5$

67. $8 \cdot 2^4 + 25 \div 5 - 3^2$

68. $5 \cdot 3^4 + 16 \div 8 - 2^2$

69. $5 + 2[9 - 2(4 - 1)]$

70. $6 + 3[8 - 3(1 + 1)]$

71. $3 + 4[6 + 8(2 - 0)]$

72. $2 + 5[9 + 3(4 - 1)]$

73. $\frac{15 + 5(4)}{17 - 12}$

74. $\frac{20 + 6(2)}{11 - 7}$

Translate each English expression into an equivalent mathematical expression written in symbols. Then simplify.

75. 8 times the sum of 4 and 2

76. 3 times the difference of 6 and 1

77. Twice the sum of 10 and 3

78. 5 times the difference of 12 and 6

79. 4 added to 3 times the sum of 3 and 4

80. 25 added to 4 times the difference of 7 and 5

81. 9 subtracted from the quotient of 20 and 2

82. 7 added to the quotient of 6 and 2

83. The sum of 8 times 5 and 5 times 4

84. The difference of 10 times 5 and 6 times 2

Applying the Concepts

Nutrition Labels Use the three nutrition labels below to work Problems 95–100.

SPAGHETTI

Nutrition Facts	
Serving Size 2 oz. (56g/1/8 of pkg) dry	
Servings Per Container: 8	
Amount Per Serving	
Calories 210	Calories from fat 10
% Daily Value*	
Total Fat 1g	2%
Saturated Fat 0g	0%
Poly unsaturated Fat 0.5g	
Monounsaturated Fat 0g	
Cholesterol 0mg	0%
Sodium 0mg	0%
Total Carbohydrate 42g	14%
Dietary Fiber 2g	7%
Sugars 3g	
Protein 7g	
Vitamin A 0%	Vitamin C 0%
Calcium 0%	Iron 10%

*Percent Daily Values are based on a 2,000 calorie diet

CANNED ITALIAN TOMATOES

Nutrition Facts	
Serving Size 1/2 cup (121g)	
Servings Per Container: about 3 1/2	
Amount Per Serving	
Calories 25	Calories from fat 0
% Daily Value*	
Total Fat 0g	0%
Saturated Fat 0g	0%
Cholesterol 0mg	0%
Sodium 300mg	12%
Potassium 145mg	4%
Total Carbohydrate 4g	2%
Dietary Fiber 1g	4%
Sugars 4g	
Protein 1g	
Vitamin A 20%	Vitamin C 15%
Calcium 4%	Iron 15%

*Percent Daily Values are based on a 2,000 calorie diet. Your daily values may be higher or lower depending on your calorie needs.

SHREDDED ROMANO CHEESE

Nutrition Facts	
Serving Size 2 tsp (5g)	
Servings Per Container: 34	
Amount Per Serving	
Calories 20	Calories from fat 10
% Daily Value*	
Total Fat 1.5g	2%
Saturated Fat 1g	5%
Cholesterol 5mg	2%
Sodium 70mg	3%
Total Carbohydrate 0g	0%
Fiber 0g	0%
Sugars 0g	
Protein 2g	
Vitamin A 0%	Vitamin C 0%
Calcium 4%	Iron 0%

*Percent Daily Values (DV) are based on a 2,000 calorie diet

Find the total number of calories in each of the following meals.

- | | | | | | | | |
|----------------------|-----------|----------------------|------------|----------------------|------------|----------------------|------------|
| 85. Spaghetti | 1 serving | 86. Spaghetti | 1 serving | 87. Spaghetti | 2 servings | 88. Spaghetti | 2 servings |
| Tomatoes | 1 serving | Tomatoes | 2 servings | Tomatoes | 1 serving | Tomatoes | 1 serving |
| Cheese | 1 serving | Cheese | 1 serving | Cheese | 1 serving | Cheese | 2 servings |

The following table lists the number of calories consumed by eating some popular fast foods. Use the table to work Problems 89 and 90.

- 89.** Compare the total number of calories in the meal in Problem 95 with the number of calories in a McDonald's Big Mac.
- 90.** Compare the total number of calories in the meal in Problem 98 with the number of calories in a Burger King hamburger.

CALORIES IN FOOD	
Food	Calories
McDonald's hamburger	270
Burger King hamburger	260
Jack in the Box hamburger	280
McDonald's Big Mac	510
Burger King Whopper	630
Jack in the Box Colossus burger	940

■ Extending the Concepts: Number Sequences

There is a relationship between the two sequences below. The first sequence is the *sequence of odd numbers*. The second sequence is called the *sequence of squares*.

1, 3, 5, 7, . . . The sequence of odd numbers

1, 4, 9, 16, . . . The sequence of squares

91. Add the first two numbers in the sequence of odd numbers.
92. Add the first three numbers in the sequence of odd numbers.
93. Add the first four numbers in the sequence of odd numbers.
94. Add the first five numbers in the sequence of odd numbers.

Chapter 1 Summary

The numbers in brackets indicate the sections in which the topics were discussed.

EXAMPLES

The margins of the chapter summaries will be used for examples of the topics being reviewed, whenever convenient.

Place Values for Decimal Numbers [1.1]

The place values for the digits of any base 10 number are as follows:

Trillions			Billions			Millions			Thousands			Ones		
Hundreds	Tens	Ones	Hundreds	Tens	Ones	Hundreds	Tens	Ones	Hundreds	Tens	Ones	Hundreds	Tens	Ones

1. The number 42,103,045 written in words is "forty-two million, one hundred three thousand, forty-five."

The number 5,745 written in expanded form is
 $5,000 + 700 + 40 + 5$

Vocabulary Associated with Addition, Subtraction, Multiplication, and Division [1.2, 1.4, 1.5, 1.6]

The word *sum* indicates addition.

The word *difference* indicates subtraction.

The word *product* indicates multiplication.

The word *quotient* indicates division.

2. The sum of 5 and 2 is $5 + 2$.
The difference of 5 and 2 is $5 - 2$.
The product of 5 and 2 is $5 \cdot 2$.
The quotient of 10 and 2 is $10 \div 2$.

Properties of Addition and Multiplication [1.2, 1.5]

If a , b , and c represent any three numbers, then the properties of addition and multiplication used most often are:

Commutative property of addition: $a + b = b + a$

Commutative property of multiplication: $a \cdot b = b \cdot a$

Associative property of addition: $(a + b) + c = a + (b + c)$

Associative property of multiplication: $(a \cdot b) \cdot c = a \cdot (b \cdot c)$


Distributive property: $a(b + c) = a(b) + a(c)$

3. $3 + 2 = 2 + 3$
 $3 \cdot 2 = 2 \cdot 3$
 $(x + 3) + 5 = x + (3 + 5)$
 $(4 \cdot 5) \cdot 6 = 4 \cdot (5 \cdot 6)$
 $3(4 + 7) = 3(4) + 3(7)$

Perimeter of a Polygon [1.2]

The *perimeter* of any polygon is the sum of the lengths of the sides, and it is denoted with the letter P .

4. The perimeter of the rectangle below is
 $P = 37 + 37 + 24 + 24$
 $= 122$ feet



Steps for Rounding Whole Numbers [1.3]

5. 5,482 to the nearest ten is 5,480.
5,482 to the nearest hundred is 5,500.
5,482 to the nearest thousand is 5,000.

1. Locate the digit just to the right of the place you are to round to.
2. If that digit is less than 5, replace it and all digits to its right with zeros.
3. If that digit is 5 or more, replace it and all digits to its right with zeros, and add 1 to the digit to its left.

Division by 0 (Zero) [1.6]

6. Each expression below is undefined.

$$5 \div 0 \quad \frac{7}{0} \quad 4/0$$

Division by 0 is undefined. We cannot use 0 as a divisor in any division problem.

Order of Operations [1.7]

7. $4 + 6(8 - 2)$
 $= 4 + 6(6)$ *Inside parentheses first*
 $= 4 + 36$ *Then multiply*
 $= 40$ *Then add*

To simplify a mathematical expression:

1. We simplify the expression inside the grouping symbols first. Grouping symbols are parentheses (), brackets [], or a fraction bar.
2. Then we evaluate any numbers with exponents.
3. We then perform all multiplications and divisions in order, starting at the left and moving right.
4. Finally, we do all the additions and subtractions, from left to right.

Exponents [1.7]

8. $2^3 = 2 \cdot 2 \cdot 2 = 8$
 $5^0 = 1$
 $3^1 = 3$

In the expression 2^3 , 2 is the *base* and 3 is the *exponent*. An exponent is a shorthand notation for repeated multiplication. The exponent 0 is a special exponent. Any nonzero number to the 0 power is 1.

Chapter 1 Review

The numbers in brackets indicate the sections in which problems of a similar type can be found.

1. One of the largest Pacific blue marlins was caught near Hawaii in 1982. It weighed 1,376 pounds. Write 1,376 in words. [1.1]
2. In 2003 the New York Yankees had the highest home attendance in major league baseball. The attendance that year was 3,465,600. Write 3,465,600 in words. [1.1]

For Problems 3 and 4, write each number with digits instead of words. [1.1]

3. Five million, two hundred forty-five thousand, six hundred fifty-two
4. Twelve million, twelve thousand, twelve
5. In 2003 the Montreal Expos had the lowest attendance in major league baseball. The attendance that year was 1,025,639. Write 1,025,639 in expanded form. [1.1]
6. According to the American Medical Association, in 2002, there were 215,005 female physicians practicing medicine in the United States. Write 215,005 in expanded form. [1.1]

Identify each of the statements in Problems 7–14 as an example of one of the following properties. [1.2, 1.5]

- a. Addition property of 0
- b. Multiplication property of 0
- c. Multiplication property of 1
- d. Commutative property of addition
- e. Commutative property of multiplication
- f. Associative property of addition
- g. Associative property of multiplication

7. $5 + 7 = 7 + 5$

8. $(4 + 3) + 2 = 4 + (3 + 2)$

9. $6 \cdot 1 = 6$

10. $8 + 0 = 8$

11. $5 \cdot 0 = 0$

12. $4 \cdot 6 = 6 \cdot 4$

13. $5 \cdot (3 \cdot 2) = (5 \cdot 3) \cdot 2$

14. $(6 + 2) + 3 = (2 + 6) + 3$

Find each of the following sums. (Add.) [1.2]

15.
$$\begin{array}{r} 498 \\ + 251 \\ \hline \end{array}$$

16.
$$\begin{array}{r} 784 \\ + 598 \\ \hline \end{array}$$

17.
$$\begin{array}{r} 7,384 \\ 251 \\ + 637 \\ \hline \end{array}$$

18.
$$\begin{array}{r} 4,901 \\ 648 \\ + 3,592 \\ \hline \end{array}$$

Find each of the following differences. (Subtract.) [1.4]

$$\begin{array}{r} 19. \quad 789 \\ -475 \\ \hline \end{array}$$

$$\begin{array}{r} 20. \quad 792 \\ -178 \\ \hline \end{array}$$

$$\begin{array}{r} 21. \quad 5,908 \\ -2,759 \\ \hline \end{array}$$

$$\begin{array}{r} 22. \quad 3,527 \\ -1,789 \\ \hline \end{array}$$

Find each of the following products. (Multiply.) [1.5]

$$23. \quad 8(73)$$

$$24. \quad 7(984)$$

$$25. \quad 63(59)$$

$$26. \quad 49(876)$$

Find each of the following quotients. (Divide.) [1.6]

$$27. \quad 692 \div 4$$

$$28. \quad 1,020 \div 15$$

$$29. \quad 36 \overline{)15,408}$$

$$30. \quad 286 \overline{)21,736}$$

Round the number 3,781,092 to the nearest: [1.3]

31. Ten

32. Hundred

33. Hundred thousand

34. Million

Use the rule for the order of operations to simplify each expression as much as possible. [1.7]

$$35. \quad 4 + 3 \cdot 5^2$$

$$36. \quad 7(9)^2 - 6(4)^3$$

$$37. \quad 3(2 + 8 \cdot 9)$$

$$38. \quad 7 - 2(6 - 4)$$

$$39. \quad 24 \div 6 \cdot 2$$

$$40. \quad 20 \cdot 3 \div 12 \cdot 2$$

$$41. \quad 4(3 - 1)^3$$

$$42. \quad 36 \div 9 \cdot 3^2$$

Write an expression using symbols that is equivalent to each of the following expressions; then simplify. [1.7]

43. 3 times the sum of 4 and 6

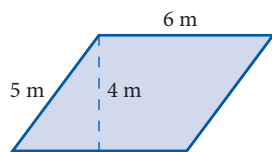
44. 9 times the difference of 5 and 3

45. Twice the difference of 17 and 5

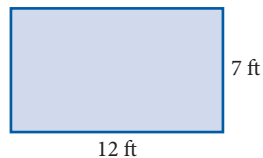
46. The product of 5 and the sum of 8 and 2

Find the perimeter of the shapes. [1.2]

47.



48.



Chapter 1 Test

- Write the number 20,347 in words.
- Write the number two million, forty-five thousand, six with digits instead of words.
- Write the number 123,407 in expanded form.

Identify each of the statements in Problems 4–7 as an example of one of the following properties.

- Addition property of 0
 - Multiplication property of 0
 - Multiplication property of 1
 - Commutative property of addition
 - Commutative property of multiplication
 - Associative property of addition
 - Associative property of multiplication
- $(5 + 6) + 3 = 5 + (6 + 3)$
 - $9 + 0 = 9$
 - $7 \cdot 1 = 7$
 - $5 \cdot 6 = 6 \cdot 5$

Find each of the following sums. (Add.)

- $$\begin{array}{r} 135 \\ + 741 \\ \hline \end{array}$$
- $$\begin{array}{r} 5,401 \\ 329 \\ + 10,653 \\ \hline \end{array}$$

Find each of the following differences. (Subtract.)

- $$\begin{array}{r} 937 \\ - 413 \\ \hline \end{array}$$
- $$\begin{array}{r} 7,052 \\ - 3,967 \\ \hline \end{array}$$

Find each of the following products. (Multiply.)

- $9(186)$
- $62(359)$

Find each of the following quotients. (Divide.)

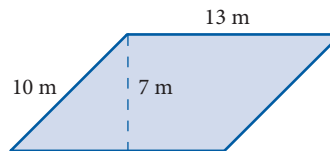
- $1,105 \div 13$
- $583 \overline{)12,243}$

- Round the number 516,249 to the nearest ten thousand.

Use the rule for the order of operations to simplify each expression as much as possible.

- $8(5)^2 - 7(3)^3$
- $8 - 2(5 - 3)$
- $7 + 2(53 - 3)$
- $3(x - 2)$

- Twice the sum of 11 and 7
- The quotient of 20 and 5 increased by 9
- Find the perimeter.



The snapshot shows the top grossing films. Use the chart to answer the following questions.



- How much more did Lord of the Rings gross than Jurassic Park?
- How much more did Titanic gross than Star Wars: Episode I?

Chapter 1 Projects

WHOLE NUMBERS

GROUP PROJECT

Egyptian Numbers

Number of People 3

Time Needed 10 minutes

Equipment Pencil and paper

Background The Egyptians had a fully developed number system as early as 3500 B.C. They recorded very large numbers in the macehead of Narmer, which boasts of the spoils taken during wars, and the *Book of the Dead*, a collection of religious texts. The Egyptians used a base-ten system. A special pictograph was used to represent each power of ten. Here are some pictographs used.



1	10	100	1,000	10,000	100,000	1,000,000
	∩	☉	🌺	☞	🐸	🧑
staff	horseshoe	rope	lotus flower	bent finger	tadpole or frog	astonished person

Example Usually the direction of writing was from right to left, with the larger units first. Symbols were placed in rows to save lateral space. Writing the number 132,146 in Egyptian hieroglyphics looks like this:

$$132,146 = \begin{array}{ccccccc} \text{|||} & \text{∩∩∩} & \text{☉} & \text{🌺🌺} & \text{🐸🐸🐸} & & \\ \text{|||} & \text{∩} & & & & & \end{array}$$

Express each of the given numbers in Egyptian hieroglyphics.

- 1,842
- 4,310,175

Procedure Write each of the following Egyptian numbers in our system.

- $$\begin{array}{ccccccc} \text{|||} & \text{∩∩∩} & \text{☉☉} & \text{🌺🌺🌺} & \text{☞☞} & \text{🐸} & \text{🧑} \\ \text{|||} & \text{∩∩} & \text{☉} & \text{🌺🌺} & \text{☞} & & \\ & \text{∩∩} & & & & & \end{array}$$

- $$\begin{array}{ccccccc} \text{∩∩∩} & \text{🌺🌺🌺} & \text{🐸🐸🐸} & \text{☞☞} & \text{🧑} & & \\ & \text{🌺} & & & & & \end{array}$$

Students and Instructors: The end of each chapter in this book will have two projects. The group projects are intended to be done in class. The research projects are to be completed outside of class. They can be done in groups or individually.

RESEARCH PROJECT

Leopold Kronecker

Leopold Kronecker (1823–1891) was a German mathematician and logician who thought that arithmetic should be based on whole numbers. He is known for the quote, “God made the natural numbers; all else is the work of man.” He was openly critical of the efforts of his contemporaries. Kronecker’s primary work was in the field of algebraic number theory. Research the life of Leopold Kronecker, or discuss the work of a mathematician who was criticized by Kronecker.



Courtesy of Wolfram Research/
National Science Foundation

A Glimpse of Algebra

At the end of most chapters of this book you will find a section like this one. These sections show how some of the material in the chapter looks when it is extended to algebra. If you are planning to take an algebra course after you have finished this one, these sections will give you a head start. If you are not planning to take algebra, these sections will give you an idea of what algebra is like. Who knows? You may decide to take an algebra class after you work through a few of these sections.

In this chapter we did some work with exponents. We can use the definition of exponents, along with the commutative property of multiplication, to rewrite some expressions that contain variables and exponents.

We can expand the expression $(5x)^2$ using the definition of exponents as

$$(5x)^2 = (5x)(5x)$$

Because the expression on the right is all multiplication, we can rewrite it as

$$(5x)(5x) = 5 \cdot x \cdot 5 \cdot x$$

And because multiplication is a commutative operation, we can rearrange this last expression so that the numbers are grouped together, and the variables are grouped together:

$$5 \cdot x \cdot 5 \cdot x = (5 \cdot 5)(x \cdot x)$$

Now, because

$$5 \cdot 5 = 25 \quad \text{and} \quad x \cdot x = x^2$$

we can rewrite the expression as

$$(5 \cdot 5)(x \cdot x) = 25x^2$$

Here is what the problem looks like when the steps are shown together:

$$\begin{aligned}(5x)^2 &= (5x)(5x) && \text{Definition of exponents} \\ &= (5 \cdot 5)(x \cdot x) && \text{Commutative property} \\ &= 25x^2 && \text{Multiplication and definition of exponents}\end{aligned}$$

We have shown only the important steps in this summary. We rewrite the expression by (1) applying the definition of exponents to expand it, (2) rearranging the numbers and variables by using the commutative property, and then (3) simplifying by multiplication.

Here are some more examples.

EXAMPLE 1

Expand $(7x)^2$ using the definition of exponents, and then simplify the result.

SOLUTION We begin by writing the expression as $(7x)(7x)$, then rearranging the numbers and variables, and then simplifying:

$$\begin{aligned}(7x)^2 &= (7x)(7x) && \text{Definition of exponents} \\ &= (7 \cdot 7)(x \cdot x) && \text{Commutative property} \\ &= 49x^2 && \text{Multiplication and definition of exponents}\end{aligned}$$

PRACTICE PROBLEMS

1. Expand $(3x)^2$ using the definition of exponents, and then simplify the result.

Answer

1. $9x^2$

2. Expand and simplify: $(2a)^3$

3. Expand and simplify: $(7xy)^2$

4. Simplify: $(3x)^2(7xy)^2$

5. Simplify: $(5x)^3(2x)^2$

EXAMPLE 2

Expand and simplify: $(5a)^3$

SOLUTION We begin by writing the expression as $(5a)(5a)(5a)$:

$$\begin{aligned}(5a)^3 &= (5a)(5a)(5a) && \text{Definition of exponents} \\ &= (5 \cdot 5 \cdot 5)(a \cdot a \cdot a) && \text{Commutative property} \\ &= 125a^3 && 5 \cdot 5 \cdot 5 = 125; a \cdot a \cdot a = a^3\end{aligned}$$

EXAMPLE 3

Expand and simplify: $(8xy)^2$

SOLUTION Proceeding as we have above, we have:

$$\begin{aligned}(8xy)^2 &= (8xy)(8xy) && \text{Definition of exponents} \\ &= (8 \cdot 8)(x \cdot x)(y \cdot y) && \text{Commutative property} \\ &= 64x^2y^2 && 8 \cdot 8 = 64; x \cdot x = x^2; y \cdot y = y^2\end{aligned}$$

EXAMPLE 4

Simplify: $(7x)^2(8xy)^2$

SOLUTION We begin by applying the definition of exponents:

$$\begin{aligned}(7x)^2(8xy)^2 &= (7x)(7x)(8xy)(8xy) \\ &= (7 \cdot 7 \cdot 8 \cdot 8)(x \cdot x \cdot x \cdot x)(y \cdot y) && \text{Commutative property} \\ &= 3,136x^4y^2\end{aligned}$$

EXAMPLE 5

Simplify: $(2x)^3(4x)^2$

SOLUTION Proceeding as we have above, we have:

$$\begin{aligned}(2x)^3(4x)^2 &= (2x)(2x)(2x)(4x)(4x) \\ &= (2 \cdot 2 \cdot 2 \cdot 4 \cdot 4)(x \cdot x \cdot x \cdot x \cdot x) \\ &= 128x^5\end{aligned}$$

Answer

2. $8a^3$ 3. $49x^2y^2$ 4. $441x^4y^2$
5. $500x^5$

A Glimpse of Algebra Problems

Use the definition of exponents to expand each of the following expressions. Apply the commutative property, and simplify the result in each case.

1. $(6x)^2$

2. $(9x)^2$

3. $(4x)^2$

4. $(10x)^2$

5. $(3a)^3$

6. $(6a)^3$

7. $(2ab)^3$

8. $(5ab)^3$

9. $(9xy)^2$

10. $(5xy)^2$

11. $(5xyz)^2$

12. $(7xyz)^2$

13. $(4x)^2(9xy)^2$

14. $(10x)^2(5xy)^2$

15. $(2x)^2(3x)^2(4x)^2$

16. $(5x)^2(2x)^2(10x)^2$

17. $(2x)^3(5x)^2$

18. $(3x)^3(4x)^2$

19. $(2a)^3(3a)^2(10a)^2$

20. $(3a)^3(2a)^2(10a)^2$

21. $(3xy)^3(4xy)^2$

22. $(2xy)^4(3xy)^2$

23. $(5xyz)^2(2xyz)^4$

24. $(6xyz)^2(3xyz)^3$

25. $(xy)^3(xz)^2(yz)^4$

26. $(xy)^4(xz)^2(yz)^3$

27. $(2a^3b^2)^2(3a^2b^3)^4$

28. $(4a^4b^3)^2(5a^2b^4)^2$

29. $(5x^2y^3)(2x^3y^3)^3$

30. $(8x^2y^2)^2(3x^3y^4)^2$


Fractions and Mixed Numbers

2



Introduction

Crater Lake, located in the Cascade Mountain range in Southern Oregon, is 594 meters deep, making it the deepest lake in the United States. Here is a chart showing the depth of Crater Lake and the location of some lakes that are deeper than Crater Lake.



As you can see from the chart, although Crater Lake is the deepest lake in the United States, it is far from being the deepest lake in the world. We can use fractions to compare the depths of these lakes. For example, Crater Lake is approximately $\frac{2}{5}$ as deep as Lake Tanganyika. In this chapter, we begin our work with fractions.

Chapter Outline

- 2.1 The Meaning and Properties of Fractions
- 2.2 Prime Numbers, Factors, and Reducing to Lowest Terms
- 2.3 Multiplication with Fractions, and the Area of a Triangle
- 2.4 Division with Fractions
- 2.5 Addition and Subtraction with Fractions
- 2.6 Mixed-Number Notation
- 2.7 Multiplication and Division with Mixed Numbers
- 2.8 Addition and Subtraction with Mixed Numbers
- 2.9 Combinations of Operations and Complex Fractions

Chapter Pretest

The pretest below contains problems that are representative of the problems you will find in the chapter.

1. Reduce to lowest terms: $\frac{16}{20}$

2. Factor 112 into a product of prime factors.

Perform the indicated operations. Reduce all answers to lowest terms.

3. $\frac{3}{8} \cdot 16$

4. $10 \div \left(\frac{5}{6}\right)$

5. $\frac{32}{45} \div \frac{40}{63}$

6. $\frac{3}{4} \div 9$

7. $\frac{5}{16} + \frac{7}{20}$

8. $\frac{5}{8} + \frac{1}{6}$

9. Write $4\frac{3}{5}$ as an improper fraction.

10. Write $\frac{21}{8}$ as a mixed number.

Perform the indicated operations. Reduce all answers to lowest terms.

11. $1\frac{3}{8} \cdot 2\frac{4}{5}$

12. $12 \div 3\frac{1}{6}$

13. $4\frac{1}{5} + 1\frac{1}{10}$

14. $6\frac{1}{6} - 3\frac{1}{3}$

Simplify each of the following as much as possible.

15. $\left(\frac{1}{4}\right)^2$

16. $\left(\frac{1}{3}\right)^2 \cdot 27 + \left(\frac{3}{2}\right)^2 \cdot 4$

17. $12 + \frac{9}{10} \div \frac{10}{9}$

18. $\left(1 - \frac{1}{4}\right)\left(1\frac{2}{3} - \frac{1}{3}\right)$

19. $\frac{\frac{3}{5}}{\frac{9}{10}}$

20. $\frac{2 + \frac{1}{4}}{2 - \frac{1}{4}}$

Getting Ready for Chapter 2

The problems below review material covered previously that you need to know in order to be successful in Chapter 2. If you have any difficulty with the problems here, you need to go back and review before going on to Chapter 2.

1. Place either $<$ or $>$ between the two numbers so that the resulting statement is true.

a. 9 5 b. 10 0 c. 0 1 d. 2001 201

Simplify.

2. $2 \cdot 5$

3. $5 - 3$

4. $13 + 12 - 9$

5. $5 \cdot 4 + 3$

6. $64 \div 8 \cdot 2$

7. $17 - (3 \cdot 5 + 2)$

8. $(3 + 5)(2 + 1)$

9. $3 + 2(3 + 4)^2$

10. $32 \div 4^2 + 75 \div 5^2$

The following division problems all have remainders. Divide.

11. $11 \div 4$

12. $208 \div 24$

13. $8,648 \div 43$

14. $14,713 \div 29$

15. Use the distributive property to rewrite $2 \cdot 7 + 3 \cdot 7$. 16. Rewrite using exponents: $2 \cdot 2 \cdot 3 \cdot 3 \cdot 3$.

The Meaning and Properties of Fractions

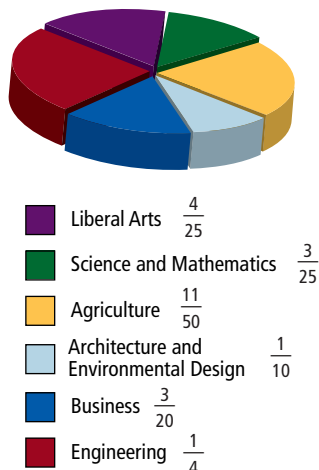
2.1

Introduction . . .

The information in the table below was taken from the website for Cal Poly. The pie chart was created from the table. Both the table and pie chart use fractions to specify how the students at Cal Poly are distributed among the different schools within the university.

CAL POLY ENROLLMENT FOR FALL	
School	Fraction Of Students
Agriculture	$\frac{11}{50}$
Architecture and Environmental Design	$\frac{1}{10}$
Business	$\frac{3}{20}$
Engineering	$\frac{1}{4}$
Liberal Arts	$\frac{4}{25}$
Science and Mathematics	$\frac{3}{25}$

Cal Poly Enrollment for Fall



From the table, we see that $\frac{1}{4}$ (one-fourth) of the students are enrolled in the School of Engineering. This means that one out of every four students at Cal Poly is studying engineering. The fraction $\frac{1}{4}$ tells us we have 1 part of 4 equal parts.

Figure 1 at the right shows a rectangle that has been divided into equal parts in four different ways. The shaded area for each rectangle is $\frac{1}{2}$ the total area.

Now that we have an intuitive idea of the meaning of fractions, here are the more formal definitions and vocabulary associated with fractions.

A The Numerator and Denominator

Definition

A **fraction** is any number that can be put in the form $\frac{a}{b}$ (also sometimes written a/b), where a and b are numbers and b is not 0.

Some examples of fractions are:

$$\frac{1}{2} \quad \frac{3}{4} \quad \frac{7}{8} \quad \frac{9}{5}$$

One-half Three-fourths Seven-eighths Nine-fifths

STUDY SKILLS

Intend to Succeed

I always have a few students who simply go through the motions of studying without intending to master the material. It is more important to them to look like they are studying than to actually study. You need to study with the intention of being successful in the course no matter what it takes.

Objectives

- A** Identify the numerator and denominator of a fraction.
- B** Identify proper and improper fractions.
- C** Write equivalent fractions.
- D** Simplify fractions with division.
- E** Compare the size of fractions.


Note When we use a letter to represent a number, or a group of numbers, that letter is called a variable. In the definition below, we are restricting the numbers that the variable b can represent to numbers other than 0. As you will see later in the chapter, we do this to avoid writing an expression that would imply division by the number 0.



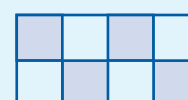
a. $\frac{1}{2}$ is shaded



b. $\frac{2}{4}$ are shaded



c. $\frac{3}{6}$ are shaded



d. $\frac{4}{8}$ are shaded

FIGURE 1 FOUR WAYS TO VISUALIZE $\frac{1}{2}$

PRACTICE PROBLEMS

1. Name the terms of the fraction $\frac{5}{6}$. Which is the numerator and which is the denominator?
2. Name the numerator and the denominator of the fraction $\frac{x}{3}$.
3. Why is the number 9 considered to be a fraction?

4. Which of the following are proper fractions?

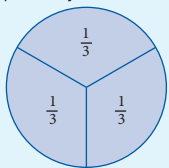
$$\frac{1}{6} \quad \frac{2}{3} \quad \frac{8}{5}$$

5. Which of the following are improper fractions?

$$\frac{5}{9} \quad \frac{6}{5} \quad \frac{4}{3} \quad 7$$

Note

There are many ways to give meaning to fractions like $\frac{2}{3}$ other than by using the number line. One popular way is to think of cutting a pie into three equal pieces, as shown below. If you take two of the pieces, you have taken $\frac{2}{3}$ of the pie.



Answers

1. Terms: 5 and 6; numerator: 5; denominator: 6
2. Numerator: x ; denominator: 3
3. Because it can be written $\frac{9}{1}$
4. $\frac{1}{6}$, $\frac{2}{3}$ 5. $\frac{6}{5}$, $\frac{4}{3}$, 7

Definition

For the fraction $\frac{a}{b}$, a and b are called the **terms** of the fraction. More specifically, a is called the **numerator**, and b is called the **denominator**.

$$\text{fraction } \frac{a}{b} \begin{array}{l} \leftarrow \text{numerator} \\ \leftarrow \text{denominator} \end{array}$$

EXAMPLE 1

The terms of the fraction $\frac{3}{4}$ are 3 and 4. The 3 is called the numerator, and the 4 is called the denominator.

EXAMPLE 2

The numerator of the fraction $\frac{a}{5}$ is a . The denominator is 5. Both a and 5 are called terms.

EXAMPLE 3

The number 7 may also be put in fraction form, because it can be written as $\frac{7}{1}$. In this case, 7 is the numerator and 1 is the denominator.

B Proper and Improper Fractions

Definition

A **proper fraction** is a fraction in which the numerator is less than the denominator. If the numerator is greater than or equal to the denominator, the fraction is called an **improper fraction**.

EXAMPLE 4

The fractions $\frac{3}{4}$, $\frac{1}{8}$, and $\frac{9}{10}$ are all proper fractions, because in each case the numerator is less than the denominator.

EXAMPLE 5

The numbers $\frac{9}{5}$, $\frac{10}{10}$, and 6 are all improper fractions, because in each case the numerator is greater than or equal to the denominator. (Remember that 6 can be written as $\frac{6}{1}$, in which case 6 is the numerator and 1 is the denominator.)

Fractions on the Number Line

We can give meaning to the fraction $\frac{2}{3}$ by using a number line. If we take that part of the number line from 0 to 1 and divide it into *three equal parts*, we say that we have divided it into *thirds* (see Figure 2). Each of the three segments is $\frac{1}{3}$ (one third) of the whole segment from 0 to 1.

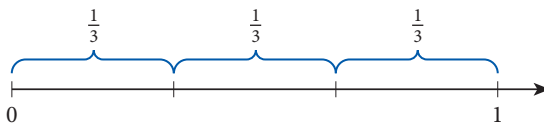


FIGURE 2

Two of these smaller segments together are $\frac{2}{3}$ (two thirds) of the whole segment. And three of them would be $\frac{3}{3}$ (three thirds), or the whole segment, as indicated in Figure 3.

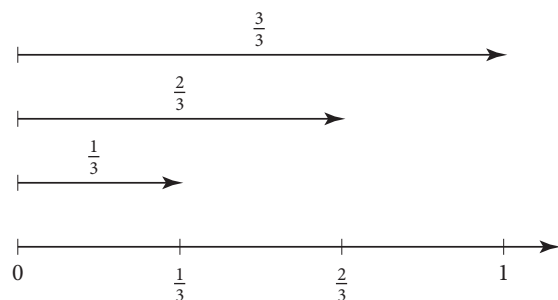


FIGURE 3

Let's do the same thing again with six and twelve equal divisions of the segment from 0 to 1 (see Figure 4).

The same point that we labeled with $\frac{1}{3}$ in Figure 3 is now labeled with $\frac{2}{6}$ and with $\frac{4}{12}$. It must be true then that

$$\frac{4}{12} = \frac{2}{6} = \frac{1}{3}$$

Although these three fractions look different, each names the same point on the number line, as shown in Figure 4. All three fractions have the same *value*, because they all represent the same number.

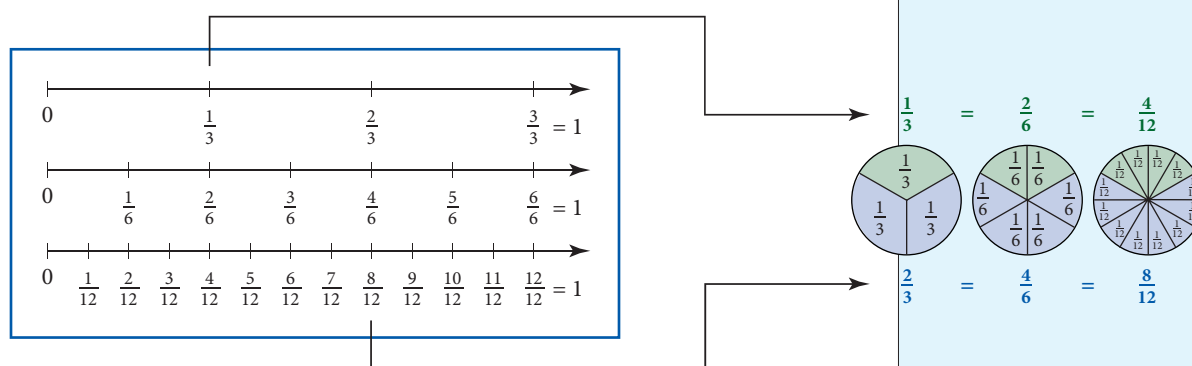


FIGURE 4

C Equivalent Fractions

Definition

Fractions that represent the same number are said to be **equivalent**. Equivalent fractions may look different, but they must have the same value.

It is apparent that every fraction has many different representations, each of which is equivalent to the original fraction. The next two properties give us a way of changing the terms of a fraction without changing its value.

Property 1 for Fractions

If a , b , and c are numbers and b and c are not 0, then it is always true that

$$\frac{a}{b} = \frac{a \cdot c}{b \cdot c}$$

In words: If the numerator and the denominator of a fraction are multiplied by the same nonzero number, the resulting fraction is equivalent to the original fraction.

6. Write $\frac{2}{3}$ as an equivalent fraction with denominator 12.

7. Write $\frac{2}{3}$ as an equivalent fraction with denominator $12x$.

8. Write $\frac{15}{20}$ as an equivalent fraction with denominator 4.

EXAMPLE 6

Write $\frac{3}{4}$ as an equivalent fraction with denominator 20.

SOLUTION The denominator of the original fraction is 4. The fraction we are trying to find must have a denominator of 20. We know that if we multiply 4 by 5, we get 20. Property 1 indicates that we are free to multiply the denominator by 5 so long as we do the same to the numerator.

$$\frac{3}{4} = \frac{3 \cdot 5}{4 \cdot 5} = \frac{15}{20}$$

The fraction $\frac{15}{20}$ is equivalent to the fraction $\frac{3}{4}$.

EXAMPLE 7

Write $\frac{3}{4}$ as an equivalent fraction with denominator $12x$.

SOLUTION If we multiply 4 by $3x$, we will have $12x$:

$$\frac{3}{4} = \frac{3 \cdot 3x}{4 \cdot 3x} = \frac{9x}{12x}$$

Property 2 for Fractions

If a , b , and c are integers and b and c are not 0, then it is always true that

$$\frac{a}{b} = \frac{a \div c}{b \div c}$$

In words: If the numerator and the denominator of a fraction are divided by the same nonzero number, the resulting fraction is equivalent to the original fraction.

EXAMPLE 8

Write $\frac{10}{12}$ as an equivalent fraction with denominator 6.

SOLUTION If we divide the original denominator 12 by 2, we obtain 6. Property 2 indicates that if we divide both the numerator and the denominator by 2, the resulting fraction will be equal to the original fraction:

$$\frac{10}{12} = \frac{10 \div 2}{12 \div 2} = \frac{5}{6}$$

Answers

6. $\frac{8}{12}$ 7. $\frac{8x}{12x}$ 8. $\frac{3}{4}$

D The Number 1 and Fractions

There are two situations involving fractions and the number 1 that occur frequently in mathematics. The first is when the denominator of a fraction is 1. In this case, if we let a represent any number, then

$$\frac{a}{1} = a \quad \text{for any number } a.$$

The second situation occurs when the numerator and the denominator of a fraction are the same nonzero number:

$$\frac{a}{a} = 1 \quad \text{for any nonzero number } a.$$

EXAMPLE 9

Simplify each expression.

$$\text{a. } \frac{24}{1} \qquad \text{b. } \frac{24}{24} \qquad \text{c. } \frac{48}{24} \qquad \text{d. } \frac{72}{24}$$

SOLUTION In each case we divide the numerator by the denominator:

$$\text{a. } \frac{24}{1} = 24 \qquad \text{b. } \frac{24}{24} = 1 \qquad \text{c. } \frac{48}{24} = 2 \qquad \text{d. } \frac{72}{24} = 3$$

E Comparing Fractions

We can compare fractions to see which is larger or smaller when they have the same denominator.

EXAMPLE 10

Write each fraction as an equivalent fraction with denominator 24. Then write them in order from smallest to largest.

$$\frac{5}{8} \quad \frac{5}{6} \quad \frac{3}{4} \quad \frac{2}{3}$$

SOLUTION We begin by writing each fraction as an equivalent fraction with denominator 24.

$$\frac{5}{8} = \frac{15}{24} \quad \frac{5}{6} = \frac{20}{24} \quad \frac{3}{4} = \frac{18}{24} \quad \frac{2}{3} = \frac{16}{24}$$

Now that they all have the same denominator, the smallest fraction is the one with the smallest numerator and the largest fraction is the one with the largest numerator. Writing them in order from smallest to largest we have:

$$\frac{15}{24} < \frac{16}{24} < \frac{18}{24} < \frac{20}{24}$$

or

$$\frac{5}{8} < \frac{2}{3} < \frac{3}{4} < \frac{5}{6}$$

STUDY SKILLS

Be Focused, Not Distracted

I have students who begin their assignments by asking themselves, "Why am I taking this class?" or, "When am I ever going to use this stuff?" If you are asking yourself similar questions, you may be distracting yourself from doing the things that will produce the results you want in this course. Don't dwell on questions and evaluations of the class that can be used as excuses for not doing well. If you want to succeed in this course, focus your energy and efforts toward success.

9. Simplify.

$$\text{a. } \frac{18}{1} \qquad \text{b. } \frac{18}{18}$$

$$\text{c. } \frac{36}{18} \qquad \text{d. } \frac{72}{18}$$

10. Write each fraction as an equivalent fraction with denominator 12. Then write in order from smallest to largest.

$$\frac{1}{3}, \frac{1}{6}, \frac{1}{4}, \frac{5}{12}$$

Answers

9. a. 18 b. 1 c. 2 d. 4

10. $\frac{2}{12}, \frac{3}{12}, \frac{4}{12}, \frac{5}{12}$

DESCRIPTIVE STATISTICS

Calculators

The table and bar chart give the daily gain in the price of a certain stock for one week, when stock prices were given in terms of fractions instead of decimals.

Change in Stock Price	
Day	Gain
Monday	$\frac{3}{4}$
Tuesday	$\frac{9}{16}$
Wednesday	$\frac{3}{32}$
Thursday	$\frac{7}{32}$
Friday	$\frac{1}{16}$

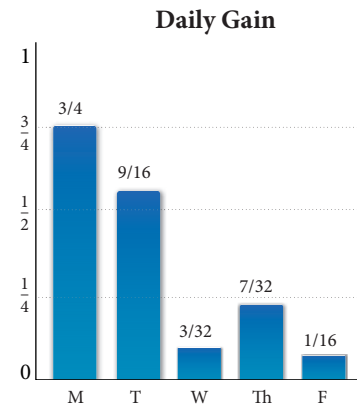


FIGURE 5 Bar Chart

Figure 6 below shows another way to visualize the information in the table. It is called a scatter diagram. In the *scatter diagram*, dots are used instead of the bars shown in Figure 5 to represent the gain in stock price for each day of the week. If we connect the dots in Figure 6 with straight lines, we produce the diagram in Figure 7, which is known as a *line graph*.

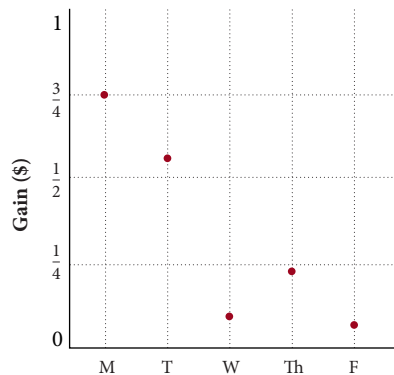


FIGURE 6 Scatter Diagram

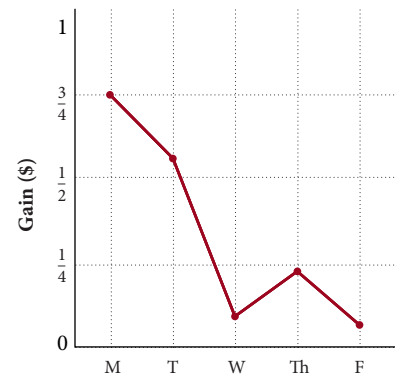


FIGURE 7 Line Graph

Getting Ready for Class

After reading through the preceding section, respond in your own words and in complete sentences. An answer of yes or no should always be accompanied by a sentence explaining why the answer is yes or no.

1. Explain what a fraction is.
2. Which term in the fraction $\frac{7}{8}$ is the numerator?
3. Is the fraction $\frac{3}{9}$ a proper fraction?
4. What word do we use to describe fractions such as $\frac{1}{5}$ and $\frac{4}{20}$, which look different, but have the same value?

Problem Set 2.1

A Name the numerator of each fraction. [Examples 1–3]

1. $\frac{1}{3}$

2. $\frac{1}{4}$

3. $\frac{2}{3}$

4. $\frac{2}{4}$

5. $\frac{x}{8}$

6. $\frac{y}{10}$

7. $\frac{a}{b}$

8. $\frac{x}{y}$

A Name the denominator of each fraction. [Examples 1–3]

9. $\frac{2}{5}$

10. $\frac{3}{5}$

11. 6

12. 2

13. $\frac{a}{12}$

14. $\frac{b}{14}$

A Complete the following tables.

15.

Numerator a	Denominator b	Fraction $\frac{a}{b}$
3	5	
1		$\frac{1}{7}$
	y	$\frac{x}{y}$
$x + 1$	x	

16.

Numerator a	Denominator b	Fraction $\frac{a}{b}$
2	9	
	3	$\frac{4}{3}$
1		$\frac{1}{x}$
x		$\frac{x}{x+1}$

B

17. For the set of numbers $\left\{\frac{3}{4}, \frac{6}{5}, \frac{12}{3}, \frac{1}{2}, \frac{9}{10}, \frac{20}{10}\right\}$, list all the proper fractions.

18. For the set of numbers $\left\{\frac{1}{8}, \frac{7}{9}, \frac{6}{3}, \frac{18}{6}, \frac{3}{5}, \frac{9}{8}\right\}$, list all the improper fractions.

Indicate whether each of the following is *True* or *False*.

19. Every whole number greater than 1 can also be expressed as an improper fraction.

20. Some improper fractions are also proper fractions.

C

21. Adding the same number to the numerator and the denominator of a fraction will not change its value.

22. The fractions $\frac{3}{4}$ and $\frac{9}{16}$ are equivalent.

C Divide the numerator and the denominator of each of the following fractions by 2. [Examples 6–8]

23. $\frac{6}{8}$

24. $\frac{10}{12}$

25. $\frac{86}{94}$

26. $\frac{106}{142}$

C Divide the numerator and the denominator of each of the following fractions by 3. [Examples 6–8]

27. $\frac{12}{9}$

28. $\frac{33}{27}$

29. $\frac{39}{51}$

30. $\frac{57}{69}$

C Write each of the following fractions as an equivalent fraction with denominator 6. [Examples 6–8]

31. $\frac{2}{3}$

32. $\frac{1}{2}$

33. $\frac{55}{66}$

34. $\frac{65}{78}$

C Write each of the following fractions as an equivalent fraction with denominator 12. [Examples 6–8]

35. $\frac{2}{3}$

36. $\frac{5}{6}$

37. $\frac{56}{84}$

38. $\frac{143}{156}$

C Write each fraction as an equivalent fraction with denominator $12x$. [Example 7]

39. $\frac{1}{6}$

40. $\frac{3}{4}$

C Write each number as an equivalent fraction with denominator $24a$. [Example 7]

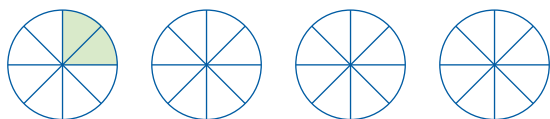
41. 2

42. 1

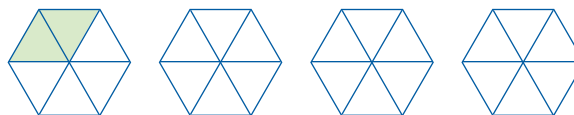
43. 5

44. 8

45. One-fourth of the first circle below is shaded. Use the other three circles to show three other ways to shade one-fourth of the circle.



46. The objects below are hexagons, six-sided figures. One-third of the first hexagon is shaded. Shade the other three hexagons to show three other ways to represent one-third.



D Simplify by dividing the numerator by the denominator.

47. $\frac{3}{1}$

48. $\frac{3}{3}$

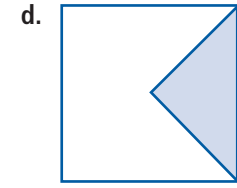
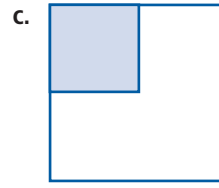
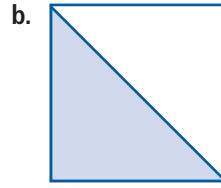
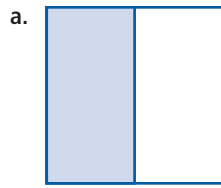
49. $\frac{6}{3}$

50. $\frac{12}{3}$

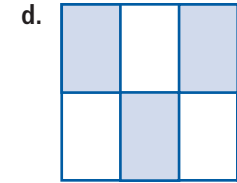
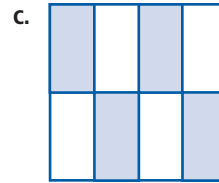
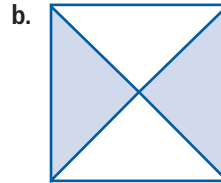
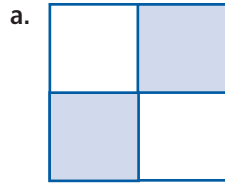
51. $\frac{37}{1}$

52. $\frac{37}{37}$

53. For each square below, what fraction of the area is given by the shaded region?



54. For each square below, what fraction of the area is given by the shaded region?



The number line below extends from 0 to 2, with the segment from 0 to 1 and the segment from 1 to 2 each divided into 8 equal parts. Locate each of the following numbers on this number line.

55. $\frac{1}{4}$

56. $\frac{1}{8}$

57. $\frac{1}{16}$

58. $\frac{5}{8}$

59. $\frac{3}{4}$

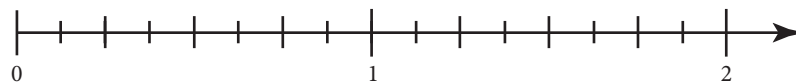
60. $\frac{15}{16}$

61. $\frac{3}{2}$

62. $\frac{5}{4}$

63. $\frac{31}{16}$

64. $\frac{15}{8}$



E [Example 10]

65. Write each fraction as an equivalent fraction with denominator 100. Then write them in order from smallest to largest.


$$\frac{3}{10} \quad \frac{1}{20} \quad \frac{4}{25} \quad \frac{2}{5}$$

66. Write each fraction as an equivalent fraction with denominator 30. Then write them in order from smallest to largest.


$$\frac{1}{15} \quad \frac{5}{6} \quad \frac{7}{10} \quad \frac{1}{2}$$

Applying the Concepts

67. **Rainfall** The chart shows the average rainfall for Death Valley in the given months. Write the rainfall for January as an equivalent fraction with denominator 12.

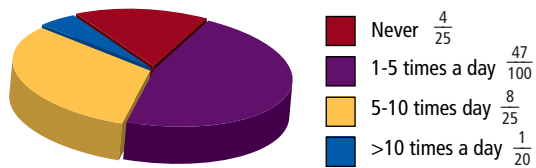


68. **Rainfall** The chart shows the average rainfall for Death Valley in the given months. Write the rainfall for April as an equivalent fraction with denominator 75.



69. **Sending E-mail** The pie chart below shows the fraction of workers who responded to a survey about sending non-work-related e-mail from the office. Use the pie chart to fill in the table.

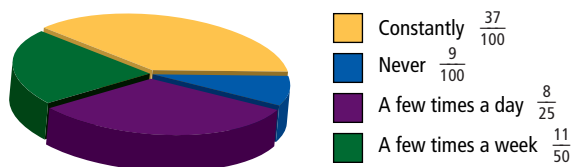
Workers sending personal e-mail from the office



How Often Workers Send Non-Work-Related E-Mail From the Office	Fraction of Respondents Saying Yes
never	_____
1 to 5 times a day	_____
5 to 10 times a day	_____
more than 10 times a day	_____

70. **Surfing the Internet** The pie chart below shows the fraction of workers who responded to a survey about viewing non-work-related sites during working hours. Use the pie chart to fill in the table.

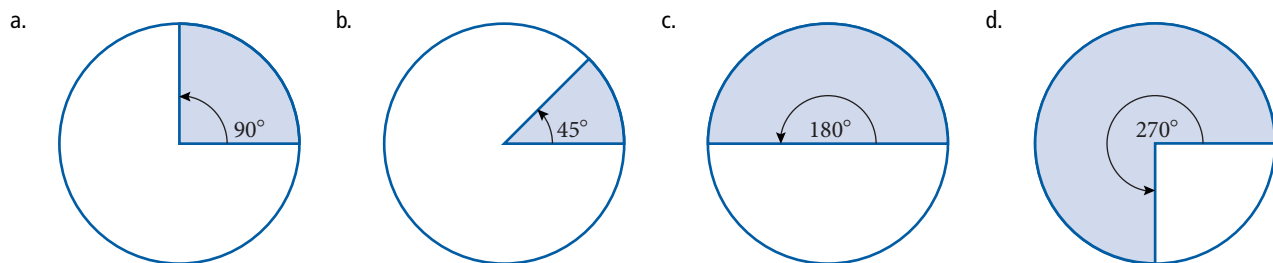
Workers surfing the net from the office



How Often Workers View Non-Work-Related Sites From the Office	Fraction of Respondents Saying Yes
never	_____
a few times a week	_____
a few times a day	_____
constantly	_____

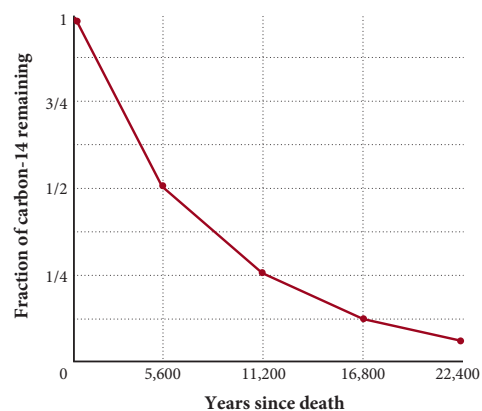
- 71. Number of Children** If there are 3 girls in a family with 5 children, then we say that $\frac{3}{5}$ of the children are girls. If there are 4 girls in a family with 5 children, what fraction of the children are girls?
- 72. Medical School** If 3 out of every 7 people who apply to medical school actually get accepted, what fraction of the people who apply get accepted?
- 73. Downloaded Songs** The new iPod™ Shuffle will hold up to 500 songs. You load 311 of your favorite tunes onto your iPod. Represent the number of songs on your iPod as a fraction of the total number of songs it can hold.
- 74. Cell Phones** In a survey of 1,000 cell phone subscribers it was determined that 160 subscribers owned more than one cell phone and used different carriers for each phone. Represent the number of cell phone subscribers with more than one carrier as a fraction.
- 75. College Basketball** Recently the men's basketball team at the University of Maryland won 19 of the 33 games they played. What fraction represents the number of games won?
- 76. Score on a Test** Your math teacher grades on a point system. You take a test worth 75 points and score a 67 on the test. Represent your score as a fraction.

- 77. Circles** A circle measures 360 degrees, which is commonly written as 360° . The shaded region of each of the circles below is given in degrees. Write a fraction that represents the area of the shaded region for each of these circles.



- 78. Carbon Dating** All living things contain a small amount of carbon-14, which is radioactive and decays. The half-life of carbon-14 is 5,600 years. During the lifetime of an organism, the carbon-14 is replenished, but after its death the carbon-14 begins to disappear. By measuring the amount left, the age of the organism can be determined with surprising accuracy. The line graph below shows the fraction of carbon-14 remaining after the death of an organism. Use the line graph to complete the table.

Concentration of Carbon-14	
Years Since Death of Organism	Fraction of Carbon-14 Remaining
0	1
	$\frac{1}{2}$
11,200	
16,800	



■ Estimating

79. Which of the following fractions is closest to the number 0?

- a. $\frac{1}{2}$ b. $\frac{1}{3}$ c. $\frac{1}{4}$ d. $\frac{1}{5}$

80. Which of the following fractions is closest to the number 1?

- a. $\frac{1}{2}$ b. $\frac{1}{3}$ c. $\frac{1}{4}$ d. $\frac{1}{5}$

81. Which of the following fractions is closest to the number 0?

- a. $\frac{1}{8}$ b. $\frac{3}{8}$ c. $\frac{5}{8}$ d. $\frac{7}{8}$

82. Which of the following fractions is closest to the number 1?

- a. $\frac{1}{8}$ b. $\frac{3}{8}$ c. $\frac{5}{8}$ d. $\frac{7}{8}$

■ Getting Ready for the Next Section

Multiply.

83. $2 \cdot 2 \cdot 3 \cdot 3 \cdot 3$

84. $2^2 \cdot 3^3$

85. $2^2 \cdot 3 \cdot 5$

86. $2 \cdot 3^2 \cdot 5$

Divide.

87. $12 \div 3$

88. $15 \div 3$

89. $20 \div 4$

90. $24 \div 4$

91. $42 \div 6$

92. $72 \div 8$

93. $102 \div 2$

94. $105 \div 7$

■ Maintaining Your Skills

The problems below review material covered previously.

Simplify.

95. $3 + 4 \cdot 5$

96. $20 - 8 \cdot 2$

97. $5 \cdot 2^4 - 3 \cdot 4^2$

98. $7 \cdot 8^2 + 2 \cdot 5^2$

99. $4 \cdot 3 + 2(5 - 3)$

100. $6 \cdot 8 + 3(4 - 1)$

101. $18 + 12 \div 4 - 3$

102. $20 + 16 \div 2 - 5$

Prime Numbers, Factors, and Reducing to Lowest Terms

2.2

Introduction . . .

Suppose you and a friend decide to split a medium-sized pizza for lunch. When the pizza is delivered you find that it has been cut into eight equal pieces. If you eat four pieces, you have eaten $\frac{4}{8}$ of the pizza, but you also know that you have eaten $\frac{1}{2}$ of the pizza. The fraction $\frac{4}{8}$ is equivalent to the fraction $\frac{1}{2}$; that is, they both have the same value. The mathematical process we use to rewrite $\frac{4}{8}$ as $\frac{1}{2}$ is called *reducing to lowest terms*. Before we look at that process, we need to define some new terms. Here is our first one:

A Prime Numbers

Definition

A **prime number** is any whole number greater than 1 that has exactly two divisors—itsself and 1. (A number is a divisor of another number if it divides it without a remainder.)

Prime numbers = {2, 3, 5, 7, 11, 13, 17, 19, 23, 29, 31, 37, . . . }

The list goes on indefinitely. Each number in the list has exactly two distinct divisors—itsself and 1.

Definition

Any whole number greater than 1 that is not a prime number is called a **composite number**. A composite number always has at least one divisor other than itsself and 1.

EXAMPLE 1

Identify each of the numbers below as either a prime number or a composite number. For those that are composite, give two divisors other than the number itself or 1.

- a. 43 b. 12

SOLUTION a. 43 is a prime number, because the only numbers that divide it without a remainder are 43 and 1.
b. 12 is a composite number, because it can be written as $12 = 4 \cdot 3$, which means that 4 and 3 are divisors of 12. (These are not the only divisors of 12; other divisors are 1, 2, 6, and 12.)

B Factoring

Every composite number can be written as the product of prime factors. Let's look at the composite number 108. We know we can write 108 as $2 \cdot 54$. The number 2 is a prime number, but 54 is not prime. Because 54 can be written as $2 \cdot 27$, we have

$$\begin{aligned} 108 &= 2 \cdot 54 \\ &= 2 \cdot 2 \cdot 27 \end{aligned}$$

Objectives

- A Identify numbers as prime or composite.
- B Factor a number into a product of prime factors.
- C Write a fraction in lowest terms.
- D Solve applications involving reducing fractions to lowest terms.

PRACTICE PROBLEMS

1. Which of the numbers below are prime numbers, and which are composite? For those that are composite, give two divisors other than the number itself and 1.
37, 39, 51, 59

Note

You may have already noticed that the word *divisor* as we are using it here means the same as the word *factor*. A divisor and a factor of a number are the same thing. A number can't be a divisor of another number without also being a factor of it.

Answer

1. See solutions section.

Note

This process works by writing the original composite number as the product of any two of its factors and then writing any factor that is not prime as the product of any two of its factors. The process is continued until all factors are prime numbers. You do not have to start with the smallest prime factor, as shown in Example 1. No matter which factors you start with you will always end up with the same prime factorization of a number.

2. Factor into a product of prime factors.
- 90
 - 900

Note

There are some “shortcuts” to finding the divisors of a number. For instance, if a number ends in 0 or 5, then it is divisible by 5. If a number ends in an even number (0, 2, 4, 6, or 8), then it is divisible by 2. A number is divisible by 3 if the sum of its digits is divisible by 3. For example, 921 is divisible by 3 because the sum of its digits is $9 + 2 + 1 = 12$, which is divisible by 3.

3. Which of the following fractions are in lowest terms?
 $\frac{1}{6}$, $\frac{2}{8}$, $\frac{15}{25}$, $\frac{9}{13}$
4. Reduce $\frac{12}{18}$ to lowest terms by dividing the numerator and the denominator by 6.

Answers

2. a. $2 \cdot 3^2 \cdot 5$ b. $2^2 \cdot 3^2 \cdot 5^2$
3. $\frac{1}{6}$, $\frac{9}{13}$ 4. $\frac{2}{3}$

Chapter 2 Fractions and Mixed Numbers

Now the number 27 can be written as $3 \cdot 9$ or $3 \cdot 3 \cdot 3$ (because $9 = 3 \cdot 3$), so

$$\begin{aligned} 108 &= 2 \cdot 54 \\ 108 &= 2 \cdot 2 \cdot 27 \\ 108 &= 2 \cdot 2 \cdot 3 \cdot 9 \\ 108 &= 2 \cdot 2 \cdot 3 \cdot 3 \cdot 3 \end{aligned}$$

This last line is the number 108 written as the product of prime factors. We can use exponents to rewrite the last line:

$$108 = 2^2 \cdot 3^3$$

EXAMPLE 2

Factor 60 into a product of prime factors.

SOLUTION We begin by writing 60 as $6 \cdot 10$ and continue factoring until all factors are prime numbers:

$$\begin{aligned} 60 &= 6 \cdot 10 \\ &= 2 \cdot 3 \cdot 2 \cdot 5 \\ &= 2^2 \cdot 3 \cdot 5 \end{aligned}$$

Notice that if we had started by writing 60 as $3 \cdot 20$, we would have achieved the same result:

$$\begin{aligned} 60 &= 3 \cdot 20 \\ &= 3 \cdot 2 \cdot 10 \\ &= 3 \cdot 2 \cdot 2 \cdot 5 \\ &= 2^2 \cdot 3 \cdot 5 \end{aligned}$$

C Reducing Fractions

We can use the method of factoring numbers into prime factors to help reduce fractions to lowest terms. Here is the definition for lowest terms.

Definition

A fraction is said to be in **lowest terms** if the numerator and the denominator have no factors in common other than the number 1.

EXAMPLE 3

The fractions $\frac{1}{2}$, $\frac{1}{3}$, $\frac{2}{3}$, $\frac{1}{4}$, $\frac{3}{4}$, $\frac{1}{5}$, $\frac{2}{5}$, $\frac{3}{5}$, and $\frac{4}{5}$ are all in lowest terms, because in each case the numerator and the denominator have no factors other than 1 in common. That is, in each fraction, no number other than 1 divides both the numerator and the denominator exactly (without a remainder).

EXAMPLE 4

The fraction $\frac{6}{8}$ is not written in lowest terms, because the numerator and the denominator are both divisible by 2. To write $\frac{6}{8}$ in lowest terms, we apply Property 2 from Section 2.1 and divide both the numerator and the denominator by 2:

$$\frac{6}{8} = \frac{6 \div 2}{8 \div 2} = \frac{3}{4}$$

The fraction $\frac{3}{4}$ is in lowest terms, because 3 and 4 have no factors in common except the number 1.

Reducing a fraction to lowest terms is simply a matter of dividing the numerator and the denominator by all the factors they have in common. We know from Property 2 of Section 2.1 that this will produce an equivalent fraction.

EXAMPLE 5


Reduce the fraction $\frac{12}{15}$ to lowest terms by first factoring the numerator and the denominator into prime factors and then dividing both the numerator and the denominator by the factor they have in common.

SOLUTION The numerator and the denominator factor as follows:

$$12 = 2 \cdot 2 \cdot 3 \quad \text{and} \quad 15 = 3 \cdot 5$$

The factor they have in common is 3. Property 2 tells us that we can divide both terms of a fraction by 3 to produce an equivalent fraction. So

$$\begin{aligned} \frac{12}{15} &= \frac{2 \cdot 2 \cdot 3}{3 \cdot 5} && \text{Factor the numerator and the denominator completely} \\ &= \frac{2 \cdot 2 \cdot 3 \div 3}{3 \cdot 5 \div 3} && \text{Divide by 3} \\ &= \frac{2 \cdot 2}{5} = \frac{4}{5} \end{aligned}$$

The fraction $\frac{4}{5}$ is equivalent to $\frac{12}{15}$ and is in lowest terms, because the numerator and the denominator have no factors other than 1 in common. 

We can shorten the work involved in reducing fractions to lowest terms by using a slash to indicate division. For example, we can write the above problem as:

$$\frac{12}{15} = \frac{2 \cdot 2 \cdot 3}{3 \cdot 5} = \frac{4}{5}$$

So long as we understand that the slashes through the 3's indicate that we have divided both the numerator and the denominator by 3, we can use this notation.


D Applications**EXAMPLE 6**

Laura is having a party. She puts 4 six-packs of soda in a cooler for her guests. At the end of the party she finds that only 4 sodas have been consumed. What fraction of the sodas are left? Write your answer in lowest terms.

SOLUTION She had 4 six-packs of soda, which is $4(6) = 24$ sodas. Only 4 were consumed at the party, so 20 are left. The fraction of sodas left is

$$\frac{20}{24}$$

Factoring 20 and 24 completely and then dividing out both the factors they have in common gives us

$$\frac{20}{24} = \frac{2 \cdot 2 \cdot 5}{2 \cdot 2 \cdot 2 \cdot 3} = \frac{5}{6}$$


EXAMPLE 7

Reduce $\frac{6}{42}$ to lowest terms.

SOLUTION We begin by factoring both terms. We then divide through by any factors common to both terms:

$$\frac{6}{42} = \frac{2 \cdot 3}{2 \cdot 3 \cdot 7} = \frac{1}{7}$$

5. Reduce the fraction $\frac{15}{20}$ to lowest terms by first factoring the numerator and the denominator into prime factors and then dividing out the factors they have in common.

6. Reduce to lowest terms.
a. $\frac{30}{35}$ b. $\frac{300}{350}$

Note

The slashes in Example 6 indicate that we have divided both the numerator and the denominator by $2 \cdot 2$, which is equal to 4. With some fractions it is apparent at the start what number divides the numerator and the denominator. For instance, you may have recognized that both 20 and 24 in Example 6 are divisible by 4. We can divide both terms by 4 without factoring first, just as we did in Section 2.1. Property 2 guarantees that dividing both terms of a fraction by 4 will produce an equivalent fraction:

$$\frac{20}{24} = \frac{20 \div 4}{24 \div 4} = \frac{5}{6}$$

7. Reduce to lowest terms.
a. $\frac{8}{72}$ b. $\frac{16}{144}$

Answers

5. $\frac{3}{4}$ 6. Both are $\frac{6}{7}$.

We must be careful in a problem like this to remember that the slashes indicate division. They are used to indicate that we have divided both the numerator and the denominator by $2 \cdot 3 = 6$. The result of dividing the numerator 6 by $2 \cdot 3$ is 1. It is a very common mistake to call the numerator 0 instead of 1 or to leave the numerator out of the answer.

Reduce each fraction to lowest terms.

8. $\frac{5}{50}$

9. $\frac{120}{25}$

EXAMPLE 8

Reduce to lowest terms: $\frac{4}{40} = \frac{2 \cdot 2 \cdot 1}{2 \cdot 2 \cdot 2 \cdot 5}$
 $= \frac{1}{10}$

EXAMPLE 9

Reduce to lowest terms: $\frac{105}{30} = \frac{3 \cdot 5 \cdot 7}{2 \cdot 3 \cdot 5}$
 $= \frac{7}{2}$

Getting Ready for Class

After reading through the preceding section, respond in your own words and in complete sentences.

- What is a prime number?
- Why is the number 22 a composite number?
- Factor 120 into a product of prime factors.
- What is meant by the phrase "a fraction in lowest possible terms"?

Answers

7. Both are $\frac{1}{9}$ 8. $\frac{1}{10}$ 9. $\frac{24}{5}$

Problem Set 2.2

A Identify each of the numbers below as either a prime number or a composite number. For those that are composite, give at least one divisor (factor) other than the number itself or the number 1. [Example 1]

1. 11

2. 23

3. 105

4. 41

5. 81

6. 50

7. 13

8. 219

B Factor each of the following into a product of prime factors. [Example 2]

9. 12

10. 8

11. 81

12. 210

13. 215

14. 75

15. 15

16. 42

C Reduce each fraction to lowest terms. [Examples 4, 5, 7–9]

17. $\frac{5}{10}$

18. $\frac{3}{6}$

19. $\frac{4}{6}$

20. $\frac{4}{10}$

21. $\frac{8}{10}$

22. $\frac{6}{10}$

23. $\frac{36}{20}$

24. $\frac{32}{12}$

25. $\frac{42}{66}$

26. $\frac{36}{60}$

27. $\frac{24}{40}$

28. $\frac{50}{75}$

29. $\frac{14}{98}$

30. $\frac{12}{84}$

31. $\frac{70}{90}$

32. $\frac{80}{90}$

33. $\frac{42}{30}$

34. $\frac{60}{36}$

35. $\frac{18}{90}$

36. $\frac{150}{210}$

37. $\frac{110}{70}$

38. $\frac{45}{75}$

39. $\frac{180}{108}$

40. $\frac{105}{30}$

41. $\frac{96}{108}$

42. $\frac{66}{84}$

43. $\frac{126}{165}$

44. $\frac{210}{462}$

45. $\frac{102}{114}$

46. $\frac{255}{285}$

47. $\frac{294}{693}$

48. $\frac{273}{385}$

49. Reduce each fraction to lowest terms.

a. $\frac{6}{51}$ b. $\frac{6}{52}$ c. $\frac{6}{54}$ d. $\frac{6}{56}$ e. $\frac{6}{57}$

50. Reduce each fraction to lowest terms.

a. $\frac{6}{42}$ b. $\frac{6}{44}$ c. $\frac{6}{45}$ d. $\frac{6}{46}$ e. $\frac{6}{48}$

51. Reduce each fraction to lowest terms.

a. $\frac{2}{90}$ b. $\frac{3}{90}$ c. $\frac{5}{90}$ d. $\frac{6}{90}$ e. $\frac{9}{90}$

52. Reduce each fraction to lowest terms.

a. $\frac{3}{105}$ b. $\frac{5}{105}$ c. $\frac{7}{105}$ d. $\frac{15}{105}$ e. $\frac{21}{105}$

53. The answer to each problem below is wrong. Give the correct answer in lowest terms.

a. $\frac{5}{15} = \frac{5}{3 \cdot 5} = \frac{0}{3}$

b. $\frac{5}{6} = \frac{3+2}{4+2} = \frac{3}{4}$

c. $\frac{6}{30} = \frac{2 \cdot 3}{2 \cdot 3 \cdot 5} = 5$

54. The answer to each problem below is wrong. Give the correct answer in lowest terms.

a. $\frac{10}{20} = \frac{7+3}{17+3} = \frac{7}{17}$

b. $\frac{9}{36} = \frac{3 \cdot 3}{2 \cdot 2 \cdot 3 \cdot 3} = \frac{0}{4}$

c. $\frac{4}{12} = \frac{2 \cdot 2}{2 \cdot 2 \cdot 3} = 3$

55. Which of the fractions $\frac{6}{8}$, $\frac{15}{20}$, $\frac{9}{16}$, and $\frac{21}{28}$ does not reduce to $\frac{3}{4}$?

56. Which of the fractions $\frac{4}{9}$, $\frac{10}{15}$, $\frac{8}{12}$, and $\frac{6}{12}$ do not reduce to $\frac{2}{3}$?

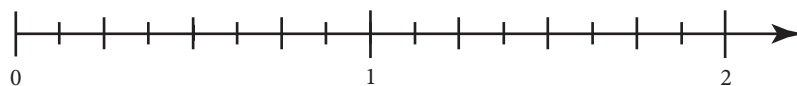
The number line below extends from 0 to 2, with the segment from 0 to 1 and the segment from 1 to 2 each divided into 8 equal parts. Locate each of the following numbers on this number line.

57. $\frac{1}{2}$, $\frac{2}{4}$, $\frac{4}{8}$, and $\frac{8}{16}$

58. $\frac{3}{2}$, $\frac{6}{4}$, $\frac{12}{8}$, and $\frac{24}{16}$

59. $\frac{5}{4}$, $\frac{10}{8}$, and $\frac{20}{16}$

60. $\frac{1}{4}$, $\frac{2}{8}$, and $\frac{4}{16}$

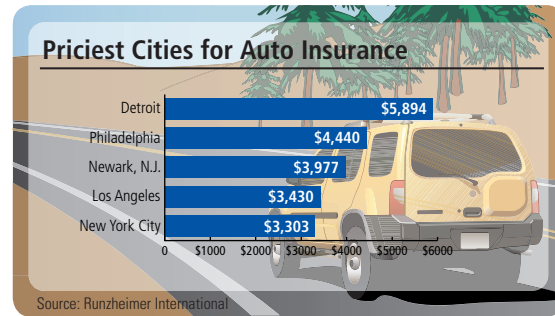


D Applying the Concepts [Example 6]

- 61. Tower Heights** The Eiffel Tower is 1,060 feet tall and the Stratosphere Tower in Las Vegas is 1,150 feet tall. Write the height of the Eiffel tower over the height of the Stratosphere Tower and then reduce to lowest terms.



- 62. Car Insurance** The chart below shows the annual cost of auto insurance for some major U.S. cities. Write the price of auto insurance in Los Angeles over the price of insurance in Detroit and then reduce to lowest terms.



- 63. Hours and Minutes** There are 60 minutes in 1 hour. What fraction of an hour is 20 minutes? Write your answer in lowest terms.
- 64. Final Exam** Suppose 33 people took the final exam in a math class. If 11 people got an A on the final exam, what fraction of the students did not get an A on the exam? Write your answer in lowest terms.
- 65. Driving Distractions** Many of us focus our attention on things other than driving when we are behind the wheel of our car. In a survey of 150 drivers, it was noted that 48 drivers spend time reading or writing while they are driving. Represent the number of drivers who spend time reading or writing while driving as a fraction in lowest terms.
- 66. Watching Television** According to the U.S. Census Bureau, it is estimated that the average person watches 4 hours of TV each day. Represent the number of hours of TV watched each day as a fraction in lowest terms.
- 67. Hurricanes** Over a recent five-year period, 9 hurricanes struck the mainland of the United States. Three of these hurricanes were classified as a category 3, 4 or 5. Represent the number of major hurricanes that struck the mainland U.S. over this time period as a fraction in lowest terms.
- 68. Gasoline Tax** Suppose a gallon of regular gas costs \$3.99, and 54 cents of this goes to pay state gas taxes. What fractional part of the cost of a gallon of gas goes to state taxes? Write your answer in lowest terms.
- 69. On-Time Record** A random check of Delta airline flights for the past month showed that of the 350 flights scheduled 185 left on time. Represent the number of on time flights as a fraction in lowest terms.
- 70. Internet Users** Based on the most recent data available, there are approximately 1,320,000,000 Internet users in the world. North America makes up about 240,000,000 of this total. Represent the number of Internet users in North America as a fraction of the total expressed in lowest terms.

Nutrition The nutrition labels below are from two different granola bars.

71. What fraction of the calories in Bar 1 comes from fat?

72. What fraction of the calories in Bar 2 comes from fat?

73. For Bar 1, what fraction of the total fat is from saturated fat?

74. What fraction of the total carbohydrates in Bar 1 is from sugar?

GRANOLA BAR 1

Nutrition Facts	
Serving Size 2 bars (47g)	
Servings Per Container: 6	
Amount Per Serving	
Calories 210	Calories from fat 70
% Daily Value*	
Total Fat 8g	12%
Saturated Fat 1g	5%
Cholesterol 0mg	0%
Sodium 150mg	6%
Total Carbohydrate 32g	11%
Fiber 2g	10%
Sugars 12g	
Protein 4g	

*Percent Daily Values are based on a 2,000 calorie diet. Your daily values may be higher or lower depending on your calorie needs.

GRANOLA BAR 2

Nutrition Facts	
Serving Size 1 bar (21g)	
Servings Per Container: 8	
Amount Per Serving	
Calories 80	Calories from fat 15
% Daily Value*	
Total Fat 1.5g	2%
Saturated Fat 0g	0%
Cholesterol 0mg	0%
Sodium 60mg	3%
Total Carbohydrate 16g	5%
Fiber 1g	4%
Sugars 5g	
Protein 2g	

*Percent Daily Values are based on a 2,000 calorie diet. Your daily values may be higher or lower depending on your calorie needs.

Getting Ready for the Next Section

Multiply.

75. $1 \cdot 3 \cdot 1$

76. $2 \cdot 4 \cdot 5$

77. $3 \cdot 5 \cdot 3$

78. $1 \cdot 4 \cdot 1$

79. $5 \cdot 5 \cdot 1$

80. $6 \cdot 6 \cdot 2$

Factor into prime factors.

81. 60

82. 72

83. $15 \cdot 4$

84. $8 \cdot 9$

Expand and multiply.

85. 3^2

86. 4^2

87. 5^2

88. 6^2

Maintaining Your Skills

Simplify.

89. $16 - 8 + 4$

90. $16 - 4 + 8$

91. $24 - 14 + 8$

92. $24 - 16 + 6$

93. $36 - 6 + 12$

94. $36 - 9 + 20$

95. $48 - 12 + 17$

96. $48 - 13 + 15$

Multiplication with Fractions, and the Area of a Triangle

2.3

Objectives

- A Multiply fractions.
- B Find the area of a triangle.

Introduction . . .

A recipe calls for $\frac{3}{4}$ cup of flour. If you are making only $\frac{1}{2}$ the recipe, how much flour do you use? This question can be answered by multiplying $\frac{1}{2}$ and $\frac{3}{4}$. Here is the problem written in symbols:

$$\frac{1}{2} \cdot \frac{3}{4} = \frac{3}{8}$$

As you can see from this example, to multiply two fractions, we multiply the numerators and then multiply the denominators. We begin this section with the rule for multiplication of fractions.

A Multiplying Fractions

Rule

The product of two fractions is the fraction whose numerator is the product of the two numerators and whose denominator is the product of the two denominators. We can write this rule in symbols as follows:

If a , b , c , and d represent any numbers and b and d are not zero, then


$$\frac{a}{b} \cdot \frac{c}{d} = \frac{a \cdot c}{b \cdot d}$$

EXAMPLE 1

Multiply: $\frac{3}{5} \cdot \frac{2}{7}$

SOLUTION Using our rule for multiplication, we multiply the numerators and multiply the denominators:


$$\frac{3}{5} \cdot \frac{2}{7} = \frac{3 \cdot 2}{5 \cdot 7} = \frac{6}{35}$$

The product of $\frac{3}{5}$ and $\frac{2}{7}$ is the fraction $\frac{6}{35}$. The numerator 6 is the product of 3 and 2, and the denominator 35 is the product of 5 and 7. 

EXAMPLE 2

Multiply: $\frac{3}{8} \cdot 5$

SOLUTION The number 5 can be written as $\frac{5}{1}$. That is, 5 can be considered a fraction with numerator 5 and denominator 1. Writing 5 this way enables us to apply the rule for multiplying fractions.

$$\begin{aligned} \frac{3}{8} \cdot 5 &= \frac{3}{8} \cdot \frac{5}{1} \\ &= \frac{3 \cdot 5}{8 \cdot 1} \\ &= \frac{15}{8} \end{aligned}$$




You may wonder why we did not divide the amount needed by 2. Dividing by 2 is the same as multiplying by $\frac{1}{2}$.

PRACTICE PROBLEMS

- Multiply: $\frac{2}{3} \cdot \frac{5}{9}$
- Multiply: $\frac{2}{5} \cdot 7$

Answers

- $\frac{10}{27}$
- $\frac{14}{5}$

3. Multiply: $\frac{1}{3} \left(\frac{4}{5} \cdot \frac{1}{3} \right)$

EXAMPLE 3

Multiply: $\frac{1}{2} \left(\frac{3}{4} \cdot \frac{1}{5} \right)$

SOLUTION We find the product inside the parentheses first and then multiply the result by $\frac{1}{2}$:

$$\begin{aligned} \frac{1}{2} \left(\frac{3}{4} \cdot \frac{1}{5} \right) &= \frac{1}{2} \left(\frac{3 \cdot 1}{4 \cdot 5} \right) \\ &= \frac{1}{2} \left(\frac{3}{20} \right) \\ &= \frac{1 \cdot 3}{2 \cdot 20} = \frac{3}{40} \end{aligned}$$

The properties of multiplication that we developed in Chapter 1 for whole numbers apply to fractions as well. That is, if a , b , and c are fractions, then

$$a \cdot b = b \cdot a \quad \text{Multiplication with fractions is commutative}$$

$$a \cdot (b \cdot c) = (a \cdot b) \cdot c \quad \text{Multiplication with fractions is associative}$$

To demonstrate the associative property for fractions, let's do Example 3 again, but this time we will apply the associative property first:

$$\begin{aligned} \frac{1}{2} \left(\frac{3}{4} \cdot \frac{1}{5} \right) &= \left(\frac{1}{2} \cdot \frac{3}{4} \right) \cdot \frac{1}{5} && \text{Associative property} \\ &= \left(\frac{1 \cdot 3}{2 \cdot 4} \right) \cdot \frac{1}{5} \\ &= \left(\frac{3}{8} \right) \cdot \frac{1}{5} \\ &= \frac{3 \cdot 1}{8 \cdot 5} = \frac{3}{40} \end{aligned}$$

The result is identical to that of Example 3.

Here is another example that involves the associative property. Problems like this will be useful when we solve equations.

The answers to all the examples so far in this section have been in lowest terms. Let's see what happens when we multiply two fractions to get a product that is not in lowest terms.

EXAMPLE 4

Multiply: $\frac{15}{8} \cdot \frac{4}{9}$

SOLUTION Multiplying the numerators and multiplying the denominators, we have

$$\begin{aligned} \frac{15}{8} \cdot \frac{4}{9} &= \frac{15 \cdot 4}{8 \cdot 9} \\ &= \frac{60}{72} \end{aligned}$$

The product is $\frac{60}{72}$, which can be reduced to lowest terms by factoring 60 and 72 and then dividing out any factors they have in common:

$$\begin{aligned} \frac{60}{72} &= \frac{2 \cdot 2 \cdot 3 \cdot 5}{2 \cdot 2 \cdot 2 \cdot 3 \cdot 3} \\ &= \frac{5}{6} \end{aligned}$$

4. Multiply.

a. $\frac{12}{25} \cdot \frac{5}{6}$

b. $\frac{12}{25} \cdot \frac{50}{60}$

Answers

3. $\frac{4}{45}$ 4. Both are $\frac{2}{5}$

We can actually save ourselves some time by factoring before we multiply. Here's how it is done:


$$\begin{aligned}\frac{15}{8} \cdot \frac{4}{9} &= \frac{15 \cdot 4}{8 \cdot 9} \\ &= \frac{(3 \cdot 5) \cdot (2 \cdot 2)}{(2 \cdot 2 \cdot 2) \cdot (3 \cdot 3)} \\ &= \frac{3 \cdot 5 \cdot 2 \cdot 2}{2 \cdot 2 \cdot 2 \cdot 3 \cdot 3} \\ &= \frac{5}{6}\end{aligned}$$

The result is the same in both cases. Reducing to lowest terms before we actually multiply takes less time. 

Here are some additional examples.


EXAMPLE 5 Multiply: $\frac{9}{2} \left(\frac{8}{18} \right)$

SOLUTION $\frac{9}{2} \left(\frac{8}{18} \right) = \frac{9 \cdot 8}{2 \cdot 18}$

$$\begin{aligned}&= \frac{(3 \cdot 3) \cdot (2 \cdot 2 \cdot 2)}{2 \cdot (2 \cdot 3 \cdot 3)} \\ &= \frac{3 \cdot 3 \cdot 2 \cdot 2 \cdot 2}{2 \cdot 2 \cdot 3 \cdot 3} \\ &= \frac{2}{1} \\ &= 2\end{aligned}$$


EXAMPLE 6 Multiply: $\frac{2}{3} \cdot \frac{6}{5} \cdot \frac{5}{8}$


SOLUTION $\frac{2}{3} \cdot \frac{6}{5} \cdot \frac{5}{8} = \frac{2 \cdot 6 \cdot 5}{3 \cdot 5 \cdot 8}$

$$\begin{aligned}&= \frac{2 \cdot (2 \cdot 3) \cdot 5}{3 \cdot 5 \cdot (2 \cdot 2 \cdot 2)} \\ &= \frac{2 \cdot 2 \cdot 3 \cdot 5}{3 \cdot 5 \cdot 2 \cdot 2 \cdot 2} \\ &= \frac{1}{2}\end{aligned}$$


In Chapter 1 we did some work with exponents. We can extend our work with exponents to include fractions, as the following examples indicate.

EXAMPLE 7 Expand and multiply: $\left(\frac{3}{4} \right)^2$

SOLUTION $\left(\frac{3}{4} \right)^2 = \left(\frac{3}{4} \right) \left(\frac{3}{4} \right)$

$$\begin{aligned}&= \frac{3 \cdot 3}{4 \cdot 4} \\ &= \frac{9}{16}\end{aligned}$$


5. Multiply.

a. $\frac{8}{3} \cdot \frac{9}{24}$

b. $\frac{8}{30} \cdot \frac{90}{24}$

Note

Although $\frac{2}{1}$ is in lowest terms, it is still simpler to write the answer as just 2. We will always do this when the denominator is the number 1.

6. Multiply: $\frac{3}{4} \cdot \frac{8}{3} \cdot \frac{1}{6}$

Apply the definition of exponents, and then multiply.

7. $\left(\frac{2}{3} \right)^2$

Answers

5. Both are 1 6. $\frac{1}{3}$ 7. $\frac{4}{9}$

8. a. $\left(\frac{3}{4}\right)^2 \cdot \frac{1}{2}$
 b. $\left(\frac{2}{3}\right)^3 \cdot \frac{9}{8}$

9. a. Find $\frac{2}{3}$ of $\frac{1}{2}$.
 b. Find $\frac{3}{5}$ of 15.

10. a. What is $\frac{2}{3}$ of 12?
 b. What is $\frac{2}{3}$ of 120?

Note

As you become familiar with multiplying fractions, you may notice shortcuts that reduce the number of steps in the problems. It's okay to use these shortcuts if you understand why they work and are consistently getting correct answers. If you are using shortcuts and not consistently getting correct answers, then go back to showing all the work until you completely understand the process.

Answers

8. a. $\frac{9}{32}$ b. $\frac{1}{3}$ 9. a. $\frac{1}{3}$ b. 9
 10. a. 8 b. 80

EXAMPLE 8

Expand and multiply: $\left(\frac{5}{6}\right)^2 \cdot \frac{1}{2}$

SOLUTION $\left(\frac{5}{6}\right)^2 \cdot \frac{1}{2} = \frac{5}{6} \cdot \frac{5}{6} \cdot \frac{1}{2}$
 $= \frac{5 \cdot 5 \cdot 1}{6 \cdot 6 \cdot 2}$
 $= \frac{25}{72}$

The word *of* used in connection with fractions indicates multiplication. If we want to find $\frac{1}{2}$ of $\frac{2}{3}$, then what we do is multiply $\frac{1}{2}$ and $\frac{2}{3}$.

EXAMPLE 9

Find $\frac{1}{2}$ of $\frac{2}{3}$.

SOLUTION Knowing the word *of*, as used here, indicates multiplication, we have

$$\frac{1}{2} \text{ of } \frac{2}{3} = \frac{1}{2} \cdot \frac{2}{3}$$

$$= \frac{1 \cdot 2}{2 \cdot 3} = \frac{1}{3}$$

This seems to make sense. Logically, $\frac{1}{2}$ of $\frac{2}{3}$ should be $\frac{1}{3}$, as Figure 1 shows.

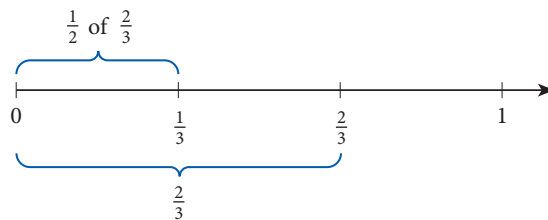


FIGURE 1

EXAMPLE 10

What is $\frac{3}{4}$ of 12?

SOLUTION Again, *of* means multiply.

$$\frac{3}{4} \text{ of } 12 = \frac{3}{4}(12)$$

$$= \frac{3}{4}\left(\frac{12}{1}\right)$$

$$= \frac{3 \cdot 12}{4 \cdot 1}$$

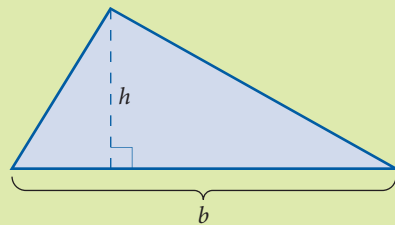
$$= \frac{3 \cdot 2 \cdot 2 \cdot 3}{2 \cdot 2 \cdot 1}$$

$$= \frac{9}{1} = 9$$

B The Area of a Triangle

FACTS FROM GEOMETRY The Area of a Triangle

The formula for the area of a triangle is one application of multiplication with fractions. Figure 2 shows a triangle with base b and height h . Below the triangle is the formula for its area. As you can see, it is a product containing the fraction $\frac{1}{2}$.



$$\text{Area} = \frac{1}{2} (\text{base})(\text{height})$$

$$A = \frac{1}{2} bh$$

FIGURE 2 The area of a triangle

EXAMPLE 11

Find the area of the triangle in Figure 3.

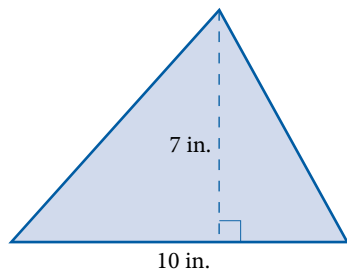
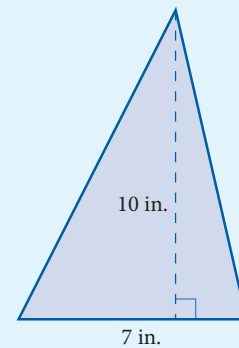


FIGURE 3 A triangle with base 10 inches and height 7 inches

SOLUTION Applying the formula for the area of a triangle, we have

$$A = \frac{1}{2}bh = \frac{1}{2} \cdot 10 \cdot 7 = 5 \cdot 7 = 35 \text{ in}^2$$

11. Find the area of the triangle below.



Note

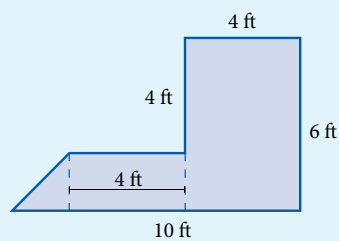
How did we get in^2 as the final units in Example 11? In this problem:

$$\begin{aligned} A &= \frac{1}{2}bh \\ &= \frac{1}{2} \cdot 10 \text{ inches} \cdot 7 \text{ inches} \\ &= 5 \text{ in.} \cdot 7 \text{ in.} = 35 \text{ in}^2 \end{aligned}$$

Answers

11. 35 in^2

12. Find the total area enclosed by the figure.



Note

This is just a reminder about unit notation. In Example 11 we wrote our final units as in^2 but could have just as easily written them as **sq in**. In Example 12 we wrote our final units as **sq ft** but could have just as easily written them as ft^2 .

EXAMPLE 12

Find the area of the figure in Figure 4.

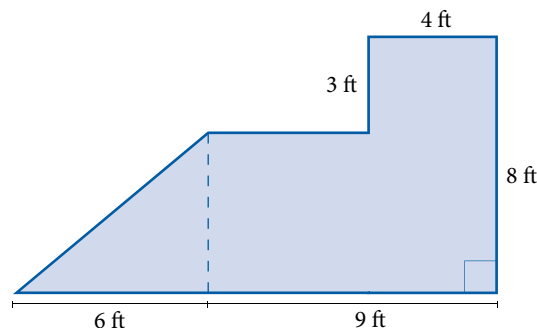


FIGURE 4

SOLUTION We divide the figure into three parts and then find the area of each part (see Figure 5). The area of the whole figure is the sum of the areas of its parts.

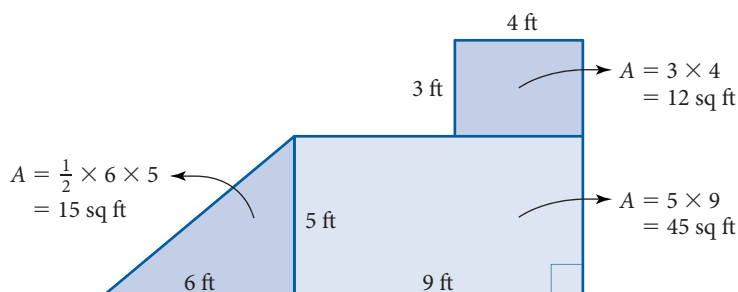


FIGURE 5

$$\begin{aligned} \text{Total area} &= 12 + 45 + 15 \\ &= 72 \text{ sq ft} \end{aligned}$$

STUDY SKILLS

Be Resilient

Don't let setbacks keep you from your goals. You want to put yourself on the road to becoming someone who can succeed in this class or any class in college. Failing a test or quiz or having a difficult time on some topics is normal. No one goes through college without some setbacks. A low grade on a test or quiz is simply a signal that some reevaluation of your study habits needs to take place.

Getting Ready for Class

After reading through the preceding section, respond in your own words and in complete sentences.

1. When we multiply the fractions $\frac{3}{5}$ and $\frac{2}{7}$, the numerator in the answer will be what number?
2. When we ask for $\frac{1}{2}$ of $\frac{2}{3}$, are we asking for an addition problem or a multiplication problem?
3. True or false? Reducing to lowest terms before you multiply two fractions will give the same answer as if you were to reduce after you multiply.
4. Write the formula for the area of a triangle with base x and height y .

Answer

12. 34 ft^2

Problem Set 2.3

A Find each of the following products. (Multiply.) [Examples 1–6]

1. $\frac{2}{3} \cdot \frac{4}{5}$

2. $\frac{5}{6} \cdot \frac{7}{4}$

3. $\frac{1}{2} \cdot \frac{7}{4}$

4. $\frac{3}{5} \cdot \frac{4}{7}$

5. $\frac{5}{3} \cdot \frac{3}{5}$

6. $\frac{4}{7} \cdot \frac{7}{4}$

7. $\frac{3}{4} \cdot 9$

8. $\frac{2}{3} \cdot 5$

9. $\frac{6}{7} \left(\frac{7}{6} \right)$

10. $\frac{2}{9} \left(\frac{9}{2} \right)$

11. $\frac{1}{2} \cdot \frac{1}{3} \cdot \frac{1}{4}$

12. $\frac{2}{3} \cdot \frac{4}{5} \cdot \frac{1}{3}$

13. $\frac{2}{5} \cdot \frac{3}{5} \cdot \frac{4}{5}$

14. $\frac{1}{4} \cdot \frac{3}{4} \cdot \frac{3}{4}$

15. $\frac{3}{2} \cdot \frac{5}{2} \cdot \frac{7}{2}$

16. $\frac{4}{3} \cdot \frac{5}{3} \cdot \frac{7}{3}$

A Complete the following tables.

17.

First Number x	Second Number y	Their Product xy
$\frac{1}{2}$	$\frac{2}{3}$	
$\frac{2}{3}$	$\frac{3}{4}$	
$\frac{3}{4}$	$\frac{4}{5}$	
$\frac{5}{a}$	$\frac{a}{6}$	

18.

First Number x	Second Number y	Their Product xy
12	$\frac{1}{2}$	
12	$\frac{1}{3}$	
12	$\frac{1}{4}$	
12	$\frac{1}{6}$	

19.

First Number x	Second Number y	Their Product xy
$\frac{1}{2}$	30	
$\frac{1}{5}$	30	
$\frac{1}{6}$	30	
$\frac{1}{15}$	30	

20.

First Number x	Second Number y	Their Product xy
$\frac{1}{3}$	$\frac{3}{5}$	
$\frac{3}{5}$	$\frac{5}{7}$	
$\frac{5}{7}$	$\frac{7}{9}$	
$\frac{7}{b}$	$\frac{b}{11}$	

A Multiply each of the following. Be sure all answers are written in lowest terms. [Examples 1–6]

21. $\frac{9}{20} \cdot \frac{4}{3}$

22. $\frac{135}{16} \cdot \frac{2}{45}$

23. $\frac{3}{4} \cdot 12$

24. $\frac{3}{4} \cdot 20$

25. $\frac{1}{3}(3)$

26. $\frac{1}{5}(5)$

27. $\frac{2}{5} \cdot 20$

28. $\frac{3}{5} \cdot 15$

29. $\frac{72}{35} \cdot \frac{55}{108} \cdot \frac{7}{110}$

30. $\frac{32}{27} \cdot \frac{72}{49} \cdot \frac{1}{40}$

A Expand and simplify each of the following. [Examples 7, 8]

31. $\left(\frac{2}{3}\right)^2$

32. $\left(\frac{3}{5}\right)^2$

33. $\left(\frac{3}{4}\right)^2$

34. $\left(\frac{2}{7}\right)^2$

35. $\left(\frac{1}{2}\right)^2$

36. $\left(\frac{1}{3}\right)^2$

37. $\left(\frac{2}{3}\right)^3$

38. $\left(\frac{3}{5}\right)^3$

39. $\left(\frac{3}{4}\right)^2 \cdot \frac{8}{9}$

40. $\left(\frac{5}{6}\right)^2 \cdot \frac{12}{15}$

41. $\left(\frac{1}{2}\right)^2 \left(\frac{3}{5}\right)^2$

42. $\left(\frac{3}{8}\right)^2 \left(\frac{4}{3}\right)^2$

43. $\left(\frac{1}{2}\right)^2 \cdot 8 + \left(\frac{1}{3}\right)^2 \cdot 9$

44. $\left(\frac{2}{3}\right)^2 \cdot 9 + \left(\frac{1}{2}\right)^2 \cdot 4$

A [Examples 9, 10]

45. Find $\frac{3}{8}$ of 64.

46. Find $\frac{2}{3}$ of 18.

47. What is $\frac{1}{3}$ of the sum of 8 and 4?

48. What is $\frac{3}{5}$ of the sum of 8 and 7?

49. Find $\frac{1}{2}$ of $\frac{3}{4}$ of 24.

50. Find $\frac{3}{5}$ of $\frac{1}{3}$ of 15.

Find the mistakes in Problems 51 and 52. Correct the right-hand side of each one.

51. $\frac{1}{2} \cdot \frac{3}{5} = \frac{4}{10}$

52. $\frac{2}{7} \cdot \frac{3}{5} = \frac{5}{35}$

53. a. Complete the following table.

Number x	Square x^2
1	
2	
3	
4	
5	
6	
7	
8	

b. Using the results of part a, fill in the blank in the following statement:

For numbers larger than 1, the square of the number is ____ than the number.

54. a. Complete the following table.

Number x	Square x^2
$\frac{1}{2}$	
$\frac{1}{3}$	
$\frac{1}{4}$	
$\frac{1}{5}$	
$\frac{1}{6}$	
$\frac{1}{7}$	
$\frac{1}{8}$	

b. Using the results of part a, fill in the blank in the following statement:

For numbers between 0 and 1, the square of the number is ____ than the number.

B [Examples 11, 12]

55. Find the area of the triangle with base 19 inches and height 14 inches.

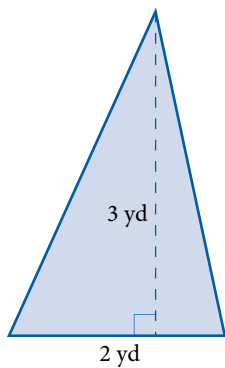
56. Find the area of the triangle with base 13 inches and height 8 inches.

57. The base of a triangle is $\frac{4}{3}$ feet and the height is $\frac{2}{3}$ feet. Find the area.

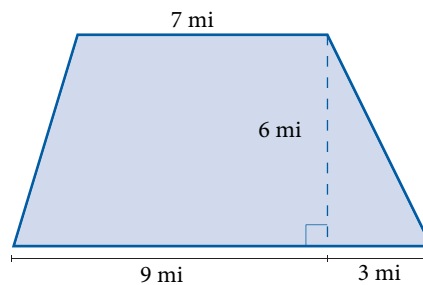
58. The base of a triangle is $\frac{8}{7}$ feet and the height is $\frac{14}{5}$ feet. Find the area.

Find the area of each figure.

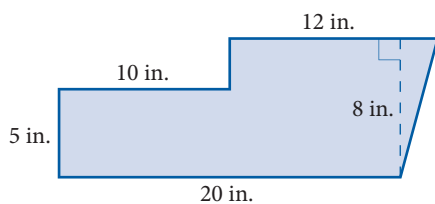
59.



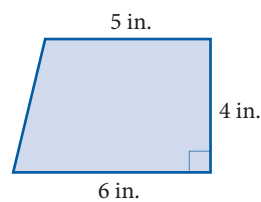
60.



61.




62.




Applying the Concepts

63. **Rainfall** The chart shows the average rainfall for Death Valley in the given months. Use this chart to answer the questions below.



- How many inches of rain is 5 times the average for January?
- How many inches of rain is 7 times the average for May?
- How many inches of rain is 12 times the average for September?

64. **Rainfall** The chart shows the average rainfall for Death Valley in the given months. Use this chart to answer the questions below.



- How many inches of rain is 6 times the average for February?
- How many inches of rain is 5 times the average for April?
- How many inches of rain is 8 times the average for October?

- 65. Hot Air Balloon** Aerostar International makes a hot air balloon called the Rally 105 that has a volume of 105,400 cubic feet. Another balloon, the Rally 126, was designed with a volume that is approximately $\frac{6}{5}$ the volume of the Rally 105. Find the volume of the Rally 126 to the nearest hundred cubic feet.
- 66. Bicycle Safety** The National Safe Kids Campaign and Bell Sports sponsored a study that surveyed 8,159 children ages 5 to 14 who were riding bicycles. Approximately $\frac{2}{5}$ of the children were wearing helmets, and of those, only $\frac{13}{20}$ were wearing the helmets correctly. About how many of the children were wearing helmets correctly?
- 67. Health Care** According to a study reported on MSNBC, almost one-third of the people diagnosed with diabetes don't seek proper medical care. If there are 12 million Americans with diabetes, about how many of them are seeking proper medical care?
- 68. Working Students** Studies indicate that approximately $\frac{3}{4}$ of all undergraduate college students work while attending school. A local community college has a student enrollment of 8,500 students. How many of these students work while attending college?
- 69. Cigarette Tax** In a recent survey of 1,410 adults, it was determined that $\frac{3}{5}$ of those surveyed favored raising the tax on cigarettes as a way to discourage young people from smoking. What number of adults believes that this would reduce the number of young people who smoke?
- 70. Shared Rent** You and three friends decide to rent an apartment for the academic year rather than to live in the dorms. The monthly rent is \$1250. If you and your friends split the rent equally, what is your share of the monthly rent?
- 71. Importing Oil** According to the U.S. Department of Energy, we imported approximately 8,340,000 barrels of oil in November 2007, which represents a typical month. We import a little over $\frac{1}{5}$ of our oil from Canada, approximately $\frac{3}{20}$ of our oil from Venezuela, and less than $\frac{1}{10}$ of our oil from Iraq. Determine the amount of oil we imported from each of these countries.
- 72. Improving Your Quantitative Literacy** MSNBC reported that at least three-fourths of the 55 companies that advertise nationally on television will cut spending on commercials because of electronics that let viewers record programs and edit out commercials. Does this mean at least 41, or at least 42, of the companies will cut spending on commercials?

Geometric Sequences Recall that a geometric sequence is a sequence in which each term comes from the previous term by multiplying by the same number each time. For example, the sequence $1, \frac{1}{2}, \frac{1}{4}, \frac{1}{8}, \dots$ is a geometric sequence in which each term is found by multiplying the previous term by $\frac{1}{2}$. By observing this fact, we know that the next term in the sequence will be $\frac{1}{8} \cdot \frac{1}{2} = \frac{1}{16}$.

Find the next number in each of the geometric sequences below.

73. $1, \frac{1}{3}, \frac{1}{9}, \dots$

74. $1, \frac{1}{4}, \frac{1}{16}, \dots$

75. $\frac{3}{2}, 1, \frac{2}{3}, \frac{4}{9}, \dots$

76. $\frac{2}{3}, 1, \frac{3}{2}, \frac{9}{4}, \dots$

Estimating For each problem below, mentally estimate which of the numbers 0, 1, 2, or 3 is closest to the answer. Make your estimate without using pencil and paper or a calculator.

77. $\frac{11}{5} \cdot \frac{19}{20}$

78. $\frac{3}{5} \cdot \frac{1}{20}$

79. $\frac{16}{5} \cdot \frac{23}{24}$

80. $\frac{9}{8} \cdot \frac{31}{32}$

■ Getting Ready for the Next Section

In the next section we will do division with fractions. As you already know, division and multiplication are closely related. These review problems are intended to let you see more of the relationship between multiplication and division.

Perform the indicated operations.

81. $8 \div 4$

82. $8 \cdot \frac{1}{4}$

83. $15 \div 3$

84. $15 \cdot \frac{1}{3}$

85. $18 \div 6$

86. $18 \cdot \frac{1}{6}$

For each number below, find a number to multiply it by to obtain 1.

87. $\frac{3}{4}$

88. $\frac{9}{5}$

89. $\frac{1}{3}$

90. $\frac{1}{4}$

91. 7

92. 2

■ Maintaining Your Skills

Simplify.

93. $20 \div 2 \cdot 10$

94. $40 \div 4 \cdot 5$

95. $24 \div 8 \cdot 3$

96. $24 \div 4 \cdot 6$

97. $36 \div 6 \cdot 3$

98. $36 \div 9 \cdot 2$

99. $48 \div 12 \cdot 2$

100. $48 \div 8 \cdot 3$

Introduction . . .

A few years ago our 4-H club was making blankets to keep their lambs clean at the county fair. Each blanket required $\frac{3}{4}$ yard of material. We had 9 yards of material left over from the year before. To see how many blankets we could make, we divided 9 by $\frac{3}{4}$. The result was 12, meaning that we could make 12 lamb blankets for the fair.

Before we define division with fractions, we must first introduce the idea of *reciprocals*. Look at the following multiplication problems:

$$\frac{3}{4} \cdot \frac{4}{3} = \frac{12}{12} = 1 \quad \frac{7}{8} \cdot \frac{8}{7} = \frac{56}{56} = 1$$

In each case the product is 1. Whenever the product of two numbers is 1, we say the two numbers are *reciprocals*.

Definition

Two numbers whose product is 1 are said to be **reciprocals**. In symbols, the reciprocal of $\frac{a}{b}$ is $\frac{b}{a}$, because

$$\frac{a}{b} \cdot \frac{b}{a} = \frac{a \cdot b}{b \cdot a} = \frac{a \cdot b}{a \cdot b} = 1 \quad (a \neq 0, b \neq 0)$$

Every number has a reciprocal except 0. The reason that 0 does not have a reciprocal is because the product of *any* number with 0 is 0. It can never be 1. Reciprocals of whole numbers are fractions with 1 as the numerator. For example, the reciprocal of 5 is $\frac{1}{5}$, because

$$5 \cdot \frac{1}{5} = \frac{5}{1} \cdot \frac{1}{5} = \frac{5}{5} = 1$$

Table 1 lists some numbers and their reciprocals.

Number	Reciprocal	Reason
$\frac{3}{4}$	$\frac{4}{3}$	Because $\frac{3}{4} \cdot \frac{4}{3} = \frac{12}{12} = 1$
$\frac{9}{5}$	$\frac{5}{9}$	Because $\frac{9}{5} \cdot \frac{5}{9} = \frac{45}{45} = 1$
$\frac{1}{3}$	3	Because $\frac{1}{3} \cdot 3 = \frac{1}{3} \cdot \frac{3}{1} = \frac{3}{3} = 1$
7	$\frac{1}{7}$	Because $7 \cdot \frac{1}{7} = \frac{7}{1} \cdot \frac{1}{7} = \frac{7}{7} = 1$

A Dividing Fractions

Division with fractions is accomplished by using reciprocals. More specifically, we can define division by a fraction to be the same as multiplication by its reciprocal. Here is the precise definition:

Definition

If a , b , c , and d are numbers and b , c , and d are all not equal to 0, then

$$\frac{a}{b} \div \frac{c}{d} = \frac{a}{b} \cdot \frac{d}{c}$$

Objectives

- A** Divide fractions.
- B** Simplify order of operation problems involving division of fractions.
- C** Solve application problems involving division of fractions.

Note

Defining division to be the same as multiplication by the reciprocal does make sense. If we divide 6 by 2, we get 3. On the other hand, if we multiply 6 by $\frac{1}{2}$ (the reciprocal of 2), we also get 3. Whether we divide by 2 or multiply by $\frac{1}{2}$, we get the same result.

PRACTICE PROBLEMS

1. Divide.

- a. $\frac{1}{3} \div \frac{1}{6}$
 b. $\frac{1}{30} \div \frac{1}{60}$

2. Divide: $\frac{5}{9} \div \frac{10}{3}$

3. Divide.

- a. $\frac{3}{4} \div 3$
 b. $\frac{3}{5} \div 3$
 c. $\frac{3}{7} \div 3$

4. Divide: $4 \div \frac{1}{5}$

Answers

1. Both are 2 2. $\frac{1}{6}$
 3. a. $\frac{1}{4}$ b. $\frac{1}{5}$ c. $\frac{1}{7}$ 4. 20


This definition states that dividing by the fraction $\frac{c}{d}$ is exactly the same as multiplying by its reciprocal $\frac{d}{c}$. Because we developed the rule for multiplying fractions in Section 2.3, we do not need a new rule for division. We simply *replace the divisor by its reciprocal* and multiply. Here are some examples to illustrate the procedure.

EXAMPLE 1

Divide: $\frac{1}{2} \div \frac{1}{4}$

SOLUTION The divisor is $\frac{1}{4}$, and its reciprocal is $\frac{4}{1}$. Applying the definition of division for fractions, we have

$$\begin{aligned}\frac{1}{2} \div \frac{1}{4} &= \frac{1}{2} \cdot \frac{4}{1} \\ &= \frac{1 \cdot 4}{2 \cdot 1} \\ &= \frac{1 \cdot 2 \cdot 2}{2 \cdot 1} \\ &= \frac{2}{1} \\ &= 2\end{aligned}$$


The quotient of $\frac{1}{2}$ and $\frac{1}{4}$ is 2. Or, $\frac{1}{4}$ “goes into” $\frac{1}{2}$ two times. Logically, our definition for division of fractions seems to be giving us answers that are consistent with what we know about fractions from previous experience. Because 2 times $\frac{1}{4}$ is $\frac{2}{4}$ or $\frac{1}{2}$, it seems logical that $\frac{1}{2}$ divided by $\frac{1}{4}$ should be 2. 

EXAMPLE 2

Divide: $\frac{3}{8} \div \frac{9}{4}$

SOLUTION Dividing by $\frac{9}{4}$ is the same as multiplying by its reciprocal, which is $\frac{4}{9}$:


$$\begin{aligned}\frac{3}{8} \div \frac{9}{4} &= \frac{3}{8} \cdot \frac{4}{9} \\ &= \frac{3 \cdot 2 \cdot 2}{2 \cdot 2 \cdot 2 \cdot 3 \cdot 3} \\ &= \frac{1}{6}\end{aligned}$$

The quotient of $\frac{3}{8}$ and $\frac{9}{4}$ is $\frac{1}{6}$. 

EXAMPLE 3

Divide: $\frac{2}{3} \div 2$


SOLUTION The reciprocal of 2 is $\frac{1}{2}$. Applying the definition for division of fractions, we have

$$\begin{aligned}\frac{2}{3} \div 2 &= \frac{2}{3} \cdot \frac{1}{2} \\ &= \frac{2 \cdot 1}{3 \cdot 2} \\ &= \frac{1}{3}\end{aligned}$$


EXAMPLE 4

Divide: $2 \div \left(\frac{1}{3}\right)$

SOLUTION We replace $\frac{1}{3}$ by its reciprocal, which is 3, and multiply:

$$\begin{aligned}2 \div \left(\frac{1}{3}\right) &= 2(3) \\ &= 6\end{aligned}$$


Here are some further examples of division with fractions. Notice in each case that the first step is the only new part of the process.

EXAMPLE 5

Divide: $\frac{4}{27} \div \frac{16}{9}$

SOLUTION $\frac{4}{27} \div \frac{16}{9} = \frac{4}{27} \cdot \frac{9}{16}$
 $= \frac{4 \cdot 9}{3 \cdot 9 \cdot 4 \cdot 4}$
 $= \frac{1}{12}$

In Example 5 we did not factor the numerator and the denominator completely in order to reduce to lowest terms because, as you have probably already noticed, it is not necessary to do so. We need to factor only enough to show what numbers are common to the numerator and the denominator. If we factored completely in the second step, it would look like this:

$$= \frac{2 \cdot 2 \cdot 3 \cdot 3}{3 \cdot 3 \cdot 3 \cdot 2 \cdot 2 \cdot 2 \cdot 2}$$

$$= \frac{1}{12}$$

The result is the same in both cases. From now on we will factor numerators and denominators only enough to show the factors we are dividing out.

EXAMPLE 6

Divide: $\frac{16}{35} \div 8$

SOLUTION $\frac{16}{35} \div 8 = \frac{16}{35} \cdot \frac{1}{8}$
 $= \frac{2 \cdot 8 \cdot 1}{35 \cdot 8}$
 $= \frac{2}{35}$

EXAMPLE 7

Divide: $27 \div \left(\frac{3}{2}\right)$

SOLUTION $27 \div \left(\frac{3}{2}\right) = 27 \cdot \left(\frac{2}{3}\right)$
 $= \frac{3 \cdot 9 \cdot 2}{3}$
 $= 18$

B Fractions and the Order of Operations

The next two examples combine what we have learned about division of fractions with the rule for order of operations.

EXAMPLE 8

The quotient of $\frac{8}{3}$ and $\frac{1}{6}$ is increased by 5. What number results?

SOLUTION Translating to symbols, we have

$$\frac{8}{3} \div \frac{1}{6} + 5 = \frac{8}{3} \cdot \frac{6}{1} + 5$$

$$= 16 + 5$$

$$= 21$$

Find each quotient.

5. a. $\frac{5}{32} \div \frac{10}{42}$
 b. $\frac{15}{32} \div \frac{30}{42}$

6. a. $\frac{12}{25} \div 6$
 b. $\frac{24}{25} \div 6$

7. a. $12 \div \frac{4}{3}$
 b. $12 \div \frac{4}{5}$
 c. $12 \div \frac{4}{7}$

8. The quotient of $\frac{5}{4}$ and $\frac{1}{8}$ is increased by 8. What number results?

Answers

5. Both are $\frac{21}{32}$ 6. a. $\frac{2}{25}$ b. $\frac{4}{25}$
 7. a. 9 b. 15 c. 21 8. 18

9. Simplify:

$$18 \div \left(\frac{3}{5}\right)^2 + 48 \div \left(\frac{2}{5}\right)^2$$

10. How many blankets can the 4-H club make with 12 yards of material?

Chapter 2 Fractions and Mixed Numbers

EXAMPLE 9

Simplify: $32 \div \left(\frac{4}{3}\right)^2 + 75 \div \left(\frac{5}{2}\right)^2$

SOLUTION According to the rule for order of operations, we must first evaluate the numbers with exponents, then divide, and finally, add.

$$\begin{aligned} 32 \div \left(\frac{4}{3}\right)^2 + 75 \div \left(\frac{5}{2}\right)^2 &= 32 \div \frac{16}{9} + 75 \div \frac{25}{4} \\ &= 32 \cdot \frac{9}{16} + 75 \cdot \frac{4}{25} \\ &= 18 + 12 \\ &= 30 \end{aligned}$$

C Applications

EXAMPLE 10

A 4-H club is making blankets to keep their lambs clean at the county fair. If each blanket requires $\frac{3}{4}$ yard of material, how many blankets can they make from 9 yards of material?

SOLUTION To answer this question we must divide 9 by $\frac{3}{4}$.

$$\begin{aligned} 9 \div \frac{3}{4} &= 9 \cdot \frac{4}{3} \\ &= 3 \cdot 4 \\ &= 12 \end{aligned}$$

They can make 12 blankets from the 9 yards of material.

Getting Ready for Class

After reading through the preceding section, respond in your own words and in complete sentences.

1. What do we call two numbers whose product is 1?
2. True or false? The quotient of $\frac{3}{5}$ and $\frac{3}{8}$ is the same as the product of $\frac{3}{5}$ and $\frac{8}{3}$.
3. How are multiplication and division of fractions related?
4. Dividing by $\frac{19}{9}$ is the same as multiplying by what number?

Answers

9. 350 10. 16 blankets

Problem Set 2.4

A Find the quotient in each case by replacing the divisor by its reciprocal and multiplying. Reduce to LCD. [Examples 1–7]

1. $\frac{3}{4} \div \frac{1}{5}$

2. $\frac{1}{3} \div \frac{1}{2}$

3. $\frac{2}{3} \div \frac{1}{2}$

4. $\frac{5}{8} \div \frac{1}{4}$

5. $6 \div \left(\frac{2}{3}\right)$

6. $8 \div \left(\frac{3}{4}\right)$

7. $20 \div \frac{1}{10}$

8. $16 \div \frac{1}{8}$

9. $\frac{3}{4} \div 2$

10. $\frac{3}{5} \div 2$

11. $\frac{7}{8} \div \frac{7}{8}$

12. $\frac{4}{3} \div \frac{4}{3}$

13. $\frac{7}{8} \div \frac{8}{7}$

14. $\frac{4}{3} \div \frac{3}{4}$

15. $\frac{9}{16} \div \frac{3}{4}$

16. $\frac{25}{36} \div \frac{5}{6}$

17. $\frac{25}{46} \div \frac{40}{69}$

18. $\frac{25}{24} \div \frac{15}{36}$

19. $\frac{13}{28} \div \frac{39}{14}$

20. $\frac{28}{125} \div \frac{5}{2}$

21. $\frac{27}{196} \div \frac{9}{392}$

22. $\frac{16}{135} \div \frac{2}{45}$

23. $\frac{25}{18} \div 5$

24. $\frac{30}{27} \div 6$

25. $6 \div \frac{4}{3}$

26. $12 \div \frac{4}{3}$

27. $\frac{4}{3} \div 6$

28. $\frac{4}{3} \div 12$

29. $\frac{3}{4} \div \frac{1}{2} \cdot 6$

30. $12 \div \frac{6}{7} \cdot 7$

31. $\frac{2}{3} \cdot \frac{3}{4} \div \frac{5}{8}$

32. $4 \cdot \frac{7}{6} \div 7$

33. $\frac{35}{110} \cdot \frac{80}{63} \div \frac{16}{27}$

34. $\frac{20}{72} \cdot \frac{42}{18} \div \frac{20}{16}$

B Simplify each expression as much as possible. [Examples 8, 9]

35. $10 \div \left(\frac{1}{2}\right)^2$

36. $12 \div \left(\frac{1}{4}\right)^2$

37. $\frac{18}{35} \div \left(\frac{6}{7}\right)^2$

38. $\frac{48}{55} \div \left(\frac{8}{11}\right)^2$

39. $\frac{4}{5} \div \frac{1}{10} + 5$

40. $\frac{3}{8} \div \frac{1}{16} + 4$

41. $10 + \frac{11}{12} \div \frac{11}{24}$

42. $15 + \frac{13}{14} \div \frac{13}{42}$

43. $24 \div \left(\frac{2}{5}\right)^2 + 25 \div \left(\frac{5}{6}\right)^2$

44. $18 \div \left(\frac{3}{4}\right)^2 + 49 \div \left(\frac{7}{9}\right)^2$


45. $100 \div \left(\frac{5}{7}\right)^2 + 200 \div \left(\frac{2}{3}\right)^2$

46. $64 \div \left(\frac{8}{11}\right)^2 + 81 \div \left(\frac{9}{11}\right)^2$


47. What is the quotient of $\frac{3}{8}$ and $\frac{5}{8}$?48. Find the quotient of $\frac{4}{5}$ and $\frac{16}{25}$.49. If the quotient of 18 and $\frac{3}{5}$ is increased by 10, what number results?50. If the quotient of 50 and $\frac{5}{3}$ is increased by 8, what number results?51. Show that multiplying 3 by 5 is the same as dividing 3 by $\frac{1}{5}$.52. Show that multiplying 8 by $\frac{1}{2}$ is the same as dividing 8 by 2.

C Applying the Concepts [Example 10]

53. **Pyramids** The Luxor Hotel in Las Vegas is $\frac{5}{7}$ the original height of the Great Pyramid of Giza. If the hotel is 350 feet tall, what was the original height of the Great Pyramid of Giza?



54. **Skyscrapers** The Bloomberg tower in New York City is $\frac{3}{5}$ the height of the Sears Tower. How tall is the Bloomberg tower?



55. **Sewing** If $\frac{6}{7}$ yard of material is needed to make a blanket, how many blankets can be made from 12 yards of material?
56. **Manufacturing** A clothing manufacturer is making scarves that require $\frac{3}{8}$ yard of material each. How many can be made from 27 yards of material?
57. **Cooking** A man is making cookies from a recipe that calls for $\frac{3}{4}$ teaspoon of oil. If the only measuring spoon he can find is a $\frac{1}{8}$ teaspoon, how many of these will he have to fill with oil in order to have a total of $\frac{3}{4}$ teaspoon of oil?
58. **Cooking** A cake recipe calls for $\frac{1}{2}$ cup of sugar. If the only measuring cup available is a $\frac{1}{8}$ cup, how many of these will have to be filled with sugar to make a total of $\frac{1}{2}$ cup of sugar?
59. **Cartons of Milk** If a small carton of milk holds exactly $\frac{1}{2}$ pint, how many of the $\frac{1}{2}$ -pint cartons can be filled from a 14-pint container?
60. **Pieces of Pipe** How many pieces of pipe that are $\frac{2}{3}$ foot long must be laid together to make a pipe 16 feet long?
61. **Lot Size** A land developer wants to subdivide 5 acres of property into lots suitable for building a home. If each lot is to be $\frac{1}{4}$ of an acre in size how many lots can be made?
62. **House Plans** If $\frac{1}{8}$ inch represents 1 ft on a drawing of a new home, determine the dimensions of a bedroom that measures 2 inches by 2 inches on the drawing.

Getting Ready for the Next Section

Write each fraction as an equivalent fraction with denominator 6.

63. $\frac{1}{2}$

64. $\frac{1}{3}$

65. $\frac{3}{2}$

66. $\frac{2}{3}$

Write each fraction as an equivalent fraction with denominator 12.

67. $\frac{1}{3}$

68. $\frac{1}{2}$

69. $\frac{2}{3}$

70. $\frac{3}{4}$

Write each fraction as an equivalent fraction with denominator 30.

71. $\frac{7}{15}$

72. $\frac{3}{10}$

73. $\frac{3}{5}$

74. $\frac{1}{6}$

Write each fraction as an equivalent fraction with denominator 24.

75. $\frac{1}{2}$

76. $\frac{1}{4}$

77. $\frac{1}{6}$

78. $\frac{1}{8}$

Write each fraction as an equivalent fraction with denominator 36.

79. $\frac{5}{12}$

80. $\frac{7}{18}$

81. $\frac{1}{4}$

82. $\frac{1}{6}$

Maintaining Your Skills

83. Fill in the table by rounding the numbers.

Number	Rounded to the Nearest		
	Ten	Hundred	Thousand
74			
747			
474			

84. Fill in the table by rounding the numbers.

Number	Rounded to the Nearest		
	Ten	Hundred	Thousand
63			
636			
363			

85. **Estimating** The quotient $253 \div 24$ is closer to which of the following?

- a. 5 b. 10 c. 15 d. 20

86. **Estimating** The quotient $1,000 \div 47$ is closer to which of the following?

- a. 5 b. 10 c. 15 d. 20

Addition and Subtraction with Fractions

2.5

Objectives

- A Add and subtract fractions with the same denominator.
- B Add and subtract fractions with different denominators.

Introduction . . .

Adding and subtracting fractions is actually just another application of the distributive property. The distributive property looks like this:

$$a(b + c) = a(b) + a(c)$$

where a , b , and c may be whole numbers or fractions. We will want to apply this property to expressions like

$$\frac{2}{7} + \frac{3}{7}$$

But before we do, we must make one additional observation about fractions.

The fraction $\frac{2}{7}$ can be written as $2 \cdot \frac{1}{7}$, because

$$2 \cdot \frac{1}{7} = \frac{2}{1} \cdot \frac{1}{7} = \frac{2}{7}$$

Likewise, the fraction $\frac{3}{7}$ can be written as $3 \cdot \frac{1}{7}$, because

$$3 \cdot \frac{1}{7} = \frac{3}{1} \cdot \frac{1}{7} = \frac{3}{7}$$

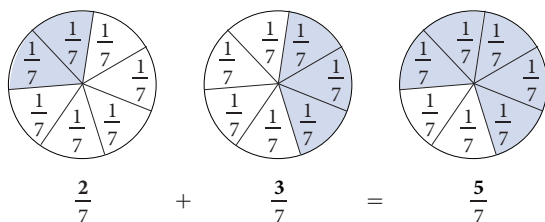
In general, we can say that the fraction $\frac{a}{b}$ can always be written as $a \cdot \frac{1}{b}$, because

$$a \cdot \frac{1}{b} = \frac{a}{1} \cdot \frac{1}{b} = \frac{a}{b}$$

To add the fractions $\frac{2}{7}$ and $\frac{3}{7}$, we simply rewrite each of them as we have done above and apply the distributive property. Here is how it works:

$$\begin{aligned} \frac{2}{7} + \frac{3}{7} &= 2 \cdot \frac{1}{7} + 3 \cdot \frac{1}{7} && \text{Rewrite each fraction} \\ &= (2 + 3) \cdot \frac{1}{7} && \text{Apply the distributive property} \\ &= 5 \cdot \frac{1}{7} && \text{Add 2 and 3 to get 5} \\ &= \frac{5}{7} && \text{Rewrite } 5 \cdot \frac{1}{7} \text{ as } \frac{5}{7} \end{aligned}$$

We can visualize the process shown above by using circles that are divided into 7 equal parts:



The fraction $\frac{5}{7}$ is the sum of $\frac{2}{7}$ and $\frac{3}{7}$. The steps and diagrams above show why we add numerators *but do not add denominators*. Using this example as justification, we can write a rule for adding two fractions that have the same denominator.



Note Most people who have done any work with adding fractions know that you add fractions that have the same denominator by adding their numerators, but not their denominators. However, most people don't know why this works. The reason why we add numerators but not denominators is because of the distributive property. And that is what the discussion at the left is all about. If you really want to understand addition of fractions, pay close attention to this discussion.

A Combining Fractions with the Same Denominator

Rule

To add two fractions that have the same denominator, we add their numerators to get the numerator of the answer. The denominator in the answer is the same denominator as in the original fractions.

What we have here is the sum of the numerators placed over the *common denominator*. In symbols we have the following:

Addition and Subtraction of Fractions

If a , b , and c are numbers, and c is not equal to 0, then

$$\frac{a}{c} + \frac{b}{c} = \frac{a+b}{c}$$

This rule holds for subtraction as well. That is,

$$\frac{a}{c} - \frac{b}{c} = \frac{a-b}{c}$$

PRACTICE PROBLEMS

Find the sum or difference. Reduce all answers to lowest terms.

1. $\frac{3}{10} + \frac{1}{10}$

2. $\frac{a+5}{12} + \frac{3}{12}$

3. $\frac{8}{7} - \frac{5}{7}$

4. $\frac{5}{9} + \frac{8}{9} + \frac{5}{9}$

Answers

1. $\frac{2}{5}$ 2. $\frac{a+8}{12}$ 3. $\frac{3}{7}$ 4. 2

EXAMPLE 1

Add: $\frac{3}{8} + \frac{1}{8}$

SOLUTION $\frac{3}{8} + \frac{1}{8} = \frac{3+1}{8}$ Add numerators; keep the same denominator

$= \frac{4}{8}$ The sum of 3 and 1 is 4

$= \frac{1}{2}$ Reduce to lowest terms

EXAMPLE 2

Subtract: $\frac{a+5}{8} - \frac{3}{8}$

SOLUTION $\frac{a+5}{8} - \frac{3}{8} = \frac{a+5-3}{8}$ Combine numerators; keep the same denominator

$= \frac{a+2}{8}$ The difference of 5 and 3 is 2

EXAMPLE 3

Subtract: $\frac{9}{5} - \frac{3}{5}$

SOLUTION $\frac{9}{5} - \frac{3}{5} = \frac{9-3}{5}$ Subtract numerators; keep the same denominator

$= \frac{6}{5}$ The difference of 9 and 3 is 6

EXAMPLE 4

Add: $\frac{3}{7} + \frac{2}{7} + \frac{9}{7}$

SOLUTION $\frac{3}{7} + \frac{2}{7} + \frac{9}{7} = \frac{3+2+9}{7}$

$= \frac{14}{7}$

$= 2$

As Examples 1–4 indicate, addition and subtraction are simple, straightforward processes when all the fractions have the same denominator.

B The Least Common Denominator or LCD

We will now turn our attention to the process of adding fractions that have different denominators. In order to get started, we need the following definition.

Definition

The **least common denominator** (LCD) for a set of denominators is the smallest number that is exactly divisible by each denominator. (Note that, in some books, the least common denominator is also called the **least common multiple**.)

In other words, all the denominators of the fractions involved in a problem must divide into the least common denominator exactly. That is, they divide it without leaving a remainder.

EXAMPLE 5

Find the LCD for the fractions $\frac{5}{12}$ and $\frac{7}{18}$.

SOLUTION The least common denominator for the denominators 12 and 18 must be the smallest number divisible by both 12 and 18. We can factor 12 and 18 completely and then build the LCD from these factors. Factoring 12 and 18 completely gives us

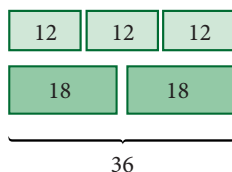
$$12 = 2 \cdot 2 \cdot 3 \quad 18 = 2 \cdot 3 \cdot 3$$

Now, if 12 is going to divide the LCD exactly, then the LCD must have factors of $2 \cdot 2 \cdot 3$. If 18 is to divide it exactly, it must have factors of $2 \cdot 3 \cdot 3$. We don't need to repeat the factors that 12 and 18 have in common:

$$\left. \begin{array}{l} 12 = 2 \cdot 2 \cdot 3 \\ 18 = 2 \cdot 3 \cdot 3 \end{array} \right\} \begin{array}{l} \text{12 divides the LCD} \\ \text{LCD} = 2 \cdot 2 \cdot 3 \cdot 3 = 36 \\ \text{18 divides the LCD} \end{array}$$

The LCD for 12 and 18 is 36. It is the smallest number that is divisible by both 12 and 18; 12 divides it exactly three times, and 18 divides it exactly two times.

We can visualize the results in Example 5 with the diagram below. It shows that 36 is the smallest number that both 12 and 18 divide evenly. As you can see, 12 divides 36 exactly 3 times, and 18 divides 36 exactly 2 times.



EXAMPLE 6

Add: $\frac{5}{12} + \frac{7}{18}$

SOLUTION We can add fractions only when they have the same denominators. In Example 5, we found the LCD for $\frac{5}{12}$ and $\frac{7}{18}$ to be 36. We change $\frac{5}{12}$ and $\frac{7}{18}$ to equivalent fractions that have 36 for a denominator by applying Property 1 for fractions:

$$\frac{5}{12} = \frac{5 \cdot 3}{12 \cdot 3} = \frac{15}{36}$$

$$\frac{7}{18} = \frac{7 \cdot 2}{18 \cdot 2} = \frac{14}{36}$$

5. a. Find the LCD for the fractions:

$$\frac{5}{18} \text{ and } \frac{3}{14}$$

- b. Find the LCD for the fractions:

$$\frac{5}{36} \text{ and } \frac{3}{28}$$

Note

The ability to find least common denominators is very important in mathematics. The discussion here is a detailed explanation of how to find an LCD.

6. Add.

a. $\frac{5}{18} + \frac{3}{14}$

b. $\frac{5}{36} + \frac{3}{28}$

Answer

5. a. 126 b. 252

The fraction $\frac{15}{36}$ is equivalent to $\frac{5}{12}$, because it was obtained by multiplying both the numerator and the denominator by 3. Likewise, $\frac{14}{36}$ is equivalent to $\frac{7}{18}$, because it was obtained by multiplying the numerator and the denominator by 2. All we have left to do is to add numerators.

$$\frac{15}{36} + \frac{14}{36} = \frac{29}{36}$$

The sum of $\frac{5}{12}$ and $\frac{7}{18}$ is the fraction $\frac{29}{36}$. Let's write the complete problem again step by step.

$$\begin{aligned} \frac{5}{12} + \frac{7}{18} &= \frac{5 \cdot 3}{12 \cdot 3} + \frac{7 \cdot 2}{18 \cdot 2} \\ &= \frac{15}{36} + \frac{14}{36} \\ &= \frac{29}{36} \end{aligned}$$

Rewrite each fraction as an equivalent fraction with denominator 36

Add numerators; keep the common denominator

7. a. Find the LCD for $\frac{2}{9}$ and $\frac{4}{15}$.
b. Find the LCD for $\frac{2}{27}$ and $\frac{4}{45}$.

8. Add.
a. $\frac{2}{9} + \frac{4}{15}$
b. $\frac{2}{27} + \frac{4}{45}$

EXAMPLE 7

Find the LCD for $\frac{3}{4}$ and $\frac{1}{6}$.

SOLUTION We factor 4 and 6 into products of prime factors and build the LCD from these factors.

$$\left. \begin{array}{l} 4 = 2 \cdot 2 \\ 6 = 2 \cdot 3 \end{array} \right\} \text{LCD} = 2 \cdot 2 \cdot 3 = 12$$

The LCD is 12. Both denominators divide it exactly; 4 divides 12 exactly 3 times, and 6 divides 12 exactly 2 times.

EXAMPLE 8

Add: $\frac{3}{4} + \frac{1}{6}$

SOLUTION In Example 7, we found that the LCD for these two fractions is 12. We begin by changing $\frac{3}{4}$ and $\frac{1}{6}$ to equivalent fractions with denominator 12:

$$\begin{aligned} \frac{3}{4} &= \frac{3 \cdot 3}{4 \cdot 3} = \frac{9}{12} \\ \frac{1}{6} &= \frac{1 \cdot 2}{6 \cdot 2} = \frac{2}{12} \end{aligned}$$

The fraction $\frac{9}{12}$ is equal to the fraction $\frac{3}{4}$, because it was obtained by multiplying the numerator and the denominator of $\frac{3}{4}$ by 3. Likewise, $\frac{2}{12}$ is equivalent to $\frac{1}{6}$, because it was obtained by multiplying the numerator and the denominator of $\frac{1}{6}$ by 2. To complete the problem we add numerators:

$$\frac{9}{12} + \frac{2}{12} = \frac{11}{12}$$

The sum of $\frac{3}{4}$ and $\frac{1}{6}$ is $\frac{11}{12}$. Here is how the complete problem looks:

$$\begin{aligned} \frac{3}{4} + \frac{1}{6} &= \frac{3 \cdot 3}{4 \cdot 3} + \frac{1 \cdot 2}{6 \cdot 2} \\ &= \frac{9}{12} + \frac{2}{12} \\ &= \frac{11}{12} \end{aligned}$$

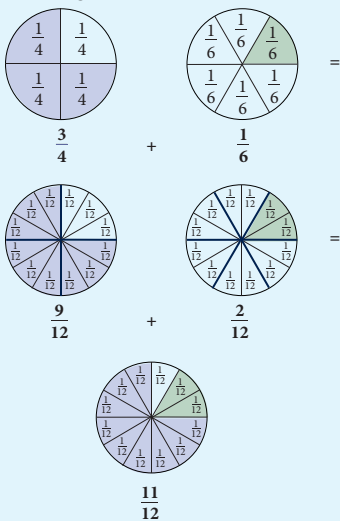
Rewrite each fraction as an equivalent fraction with denominator 12

Add numerators; keep the same denominator

Note

We can visualize the work in Example 8 using circles and shading:

shading:



Answers

6. a. $\frac{31}{63}$ b. $\frac{31}{126}$ 7. a. 45 b. 135
8. a. $\frac{22}{45}$ b. $\frac{22}{135}$

EXAMPLE 9

Subtract: $\frac{7}{15} - \frac{3}{10}$

SOLUTION Let's factor 15 and 10 completely and use these factors to build the LCD:

$$\begin{array}{l} 15 = 3 \cdot 5 \\ 10 = 2 \cdot 5 \end{array} \left. \vphantom{\begin{array}{l} 15 \\ 10 \end{array}} \right\} \text{LCD} = 2 \cdot 3 \cdot 5 = 30$$

15 divides the LCD
↓
10 divides the LCD

Changing to equivalent fractions and subtracting, we have

$$\begin{aligned} \frac{7}{15} - \frac{3}{10} &= \frac{7 \cdot 2}{15 \cdot 2} - \frac{3 \cdot 3}{10 \cdot 3} && \text{Rewrite as equivalent fractions with} \\ & && \text{the LCD for the denominator} \\ &= \frac{14}{30} - \frac{9}{30} \\ &= \frac{5}{30} && \text{Subtract numerators; keep the LCD} \\ &= \frac{1}{6} && \text{Reduce to lowest terms} \end{aligned}$$

As a summary of what we have done so far, and as a guide to working other problems, we now list the steps involved in adding and subtracting fractions with different denominators.

Strategy Adding or Subtracting Any Two Fractions

- Step 1** Factor each denominator completely, and use the factors to build the LCD. (Remember, the LCD is the smallest number divisible by each of the denominators in the problem.)
- Step 2** Rewrite each fraction as an equivalent fraction that has the LCD for its denominator. This is done by multiplying both the numerator and the denominator of the fraction in question by the appropriate whole number.
- Step 3** Add or subtract the numerators of the fractions produced in Step 2. This is the numerator of the sum or difference. The denominator of the sum or difference is the LCD.
- Step 4** Reduce the fraction produced in Step 3 to lowest terms if it is not already in lowest terms.

The idea behind adding or subtracting fractions is really very simple. We can only add or subtract fractions that have the same denominators. If the fractions we are trying to add or subtract do not have the same denominators, we rewrite each of them as an equivalent fraction with the LCD for a denominator.

Here are some additional examples of sums and differences of fractions.

EXAMPLE 10

Subtract: $\frac{3}{5} - \frac{1}{6}$

SOLUTION The LCD for 5 and 6 is their product, 30. We begin by rewriting each fraction with this common denominator:

$$\begin{aligned} \frac{3}{5} - \frac{1}{6} &= \frac{3 \cdot 6}{5 \cdot 6} - \frac{1 \cdot 5}{6 \cdot 5} \\ &= \frac{18}{30} - \frac{5}{30} \\ &= \frac{13}{30} \end{aligned}$$

9. Subtract: $\frac{8}{25} - \frac{3}{20}$

10. Subtract: $\frac{3}{4} - \frac{1}{5}$

Answers

9. $\frac{17}{100}$ 10. $\frac{11}{20}$

11. Add.

a. $\frac{1}{9} + \frac{1}{4} + \frac{1}{6}$

b. $\frac{1}{90} + \frac{1}{40} + \frac{1}{60}$

12. Subtract: $2 - \frac{3}{4}$ **EXAMPLE 11**Add: $\frac{1}{6} + \frac{1}{8} + \frac{1}{4}$ **SOLUTION** We begin by factoring the denominators completely and building the LCD from the factors that result:

$$\left. \begin{array}{l} 6 = 2 \cdot 3 \\ 8 = 2 \cdot 2 \cdot 2 \\ 4 = 2 \cdot 2 \end{array} \right\} \begin{array}{l} \text{8 divides the LCD} \\ \text{LCD} = 2 \cdot 2 \cdot 2 \cdot 3 = 24 \\ \text{4 divides the LCD} \quad \text{6 divides the LCD} \end{array}$$

We then change to equivalent fractions and add as usual:

$$\frac{1}{6} + \frac{1}{8} + \frac{1}{4} = \frac{1 \cdot 4}{6 \cdot 4} + \frac{1 \cdot 3}{8 \cdot 3} + \frac{1 \cdot 6}{4 \cdot 6} = \frac{4}{24} + \frac{3}{24} + \frac{6}{24} = \frac{13}{24}$$

EXAMPLE 12Subtract: $3 - \frac{5}{6}$ **SOLUTION** The denominators are 1 (because $3 = \frac{3}{1}$) and 6. The smallest number divisible by both 1 and 6 is 6.

$$3 - \frac{5}{6} = \frac{3}{1} - \frac{5}{6} = \frac{3 \cdot 6}{1 \cdot 6} - \frac{5}{6} = \frac{18}{6} - \frac{5}{6} = \frac{13}{6}$$

Getting Ready for Class*After reading through the preceding section, respond in your own words and in complete sentences.*

1. When adding two fractions with the same denominators, we always add their _____, but we never add their _____.
2. What does the abbreviation *LCD* stand for?
3. What is the first step when finding the LCD for the fractions $\frac{5}{12}$ and $\frac{7}{18}$?
4. When adding fractions, what is the last step?

Answers11. a. $\frac{19}{36}$ b. $\frac{19}{360}$ 12. $\frac{5}{4}$

Problem Set 2.5

A Find the following sums and differences, and reduce to lowest terms. (Add or subtract as indicated.) [Examples 1–4]

1. $\frac{3}{6} + \frac{1}{6}$

2. $\frac{2}{5} + \frac{3}{5}$

3. $\frac{5}{8} - \frac{3}{8}$

4. $\frac{6}{7} - \frac{1}{7}$

5. $\frac{3}{4} - \frac{1}{4}$

6. $\frac{7}{9} - \frac{4}{9}$

7. $\frac{2}{3} - \frac{1}{3}$

8. $\frac{9}{8} - \frac{1}{8}$

9. $\frac{1}{4} + \frac{2}{4} + \frac{3}{4}$

10. $\frac{2}{5} + \frac{3}{5} + \frac{4}{5}$

11. $\frac{x+7}{2} - \frac{1}{2}$

12. $\frac{x+5}{4} - \frac{3}{4}$

13. $\frac{1}{10} + \frac{3}{10} + \frac{4}{10}$

14. $\frac{3}{20} + \frac{1}{20} + \frac{4}{20}$

15. $\frac{1}{3} + \frac{4}{3} + \frac{5}{3}$

16. $\frac{5}{4} + \frac{4}{4} + \frac{3}{4}$

B Complete the following tables. [Examples 5–12]

17.

First Number a	Second Number b	The Sum of a and b $a + b$
$\frac{1}{2}$	$\frac{1}{3}$	
$\frac{1}{3}$	$\frac{1}{4}$	
$\frac{1}{4}$	$\frac{1}{5}$	
$\frac{1}{5}$	$\frac{1}{6}$	

18.

First Number a	Second Number b	The Sum of a and b $a + b$
1	$\frac{1}{2}$	
1	$\frac{1}{3}$	
1	$\frac{1}{4}$	
1	$\frac{1}{5}$	

19.

First Number a	Second Number b	The Sum of a and b $a + b$
$\frac{1}{12}$	$\frac{1}{2}$	
$\frac{1}{12}$	$\frac{1}{3}$	
$\frac{1}{12}$	$\frac{1}{4}$	
$\frac{1}{12}$	$\frac{1}{6}$	

20.

First Number a	Second Number b	The Sum of a and b $a + b$
$\frac{1}{8}$	$\frac{1}{2}$	
$\frac{1}{8}$	$\frac{1}{4}$	
$\frac{1}{8}$	$\frac{1}{16}$	
$\frac{1}{8}$	$\frac{1}{24}$	

B Find the LCD for each of the following; then use the methods developed in this section to add or subtract as indicated.
[Examples 5–14]

21. $\frac{4}{9} + \frac{1}{3}$

22. $\frac{1}{2} + \frac{1}{4}$

23. $2 + \frac{1}{3}$

24. $3 + \frac{1}{2}$

25. $\frac{3}{4} + 1$

26. $\frac{3}{4} + 2$

27. $\frac{1}{2} + \frac{2}{3}$

28. $\frac{1}{8} + \frac{3}{4}$

29. $\frac{1}{4} + \frac{1}{5}$

30. $\frac{1}{3} + \frac{1}{5}$

31. $\frac{1}{2} + \frac{1}{5}$

32. $\frac{1}{2} - \frac{1}{5}$

33. $\frac{5}{12} + \frac{3}{8}$

34. $\frac{9}{16} + \frac{7}{12}$

35. $\frac{8}{30} - \frac{1}{20}$

36. $\frac{9}{40} - \frac{1}{30}$

37. $\frac{3}{10} + \frac{1}{100}$

38. $\frac{9}{100} + \frac{7}{10}$

39. $\frac{10}{36} + \frac{9}{48}$

40. $\frac{12}{28} + \frac{9}{20}$

41. $\frac{17}{30} + \frac{11}{42}$

42. $\frac{19}{42} + \frac{13}{70}$

43. $\frac{25}{84} + \frac{41}{90}$

44. $\frac{23}{70} + \frac{29}{84}$

45. $\frac{13}{126} - \frac{13}{180}$

46. $\frac{17}{84} - \frac{17}{90}$

47. $\frac{3}{4} + \frac{1}{8} + \frac{5}{6}$

48. $\frac{3}{8} + \frac{2}{5} + \frac{1}{4}$

49. $\frac{3}{10} + \frac{5}{12} + \frac{1}{6}$

50. $\frac{5}{21} + \frac{1}{7} + \frac{3}{14}$

51. $\frac{1}{2} + \frac{1}{3} + \frac{1}{4} + \frac{1}{6}$

52. $\frac{1}{8} + \frac{1}{4} + \frac{1}{5} + \frac{1}{10}$

53. $10 - \frac{2}{9}$

54. $9 - \frac{3}{5}$

55. $\frac{1}{10} + \frac{4}{5} - \frac{3}{20}$

56. $\frac{1}{2} + \frac{3}{4} - \frac{5}{8}$

57. $\frac{1}{4} - \frac{1}{8} + \frac{1}{2} - \frac{3}{8}$

58. $\frac{7}{8} - \frac{3}{4} + \frac{5}{8} - \frac{1}{2}$

There are two ways to work the problems below. You can combine the fractions inside the parentheses first and then multiply, or you can apply the distributive property first, then add.

59. $15\left(\frac{2}{3} + \frac{3}{5}\right)$

60. $15\left(\frac{4}{5} - \frac{1}{3}\right)$

61. $4\left(\frac{1}{2} + \frac{1}{4}\right)$

62. $6\left(\frac{1}{3} + \frac{1}{2}\right)$

63. Find the sum of $\frac{3}{7}$, 2, and $\frac{1}{9}$.

64. Find the sum of 6, $\frac{6}{11}$, and 11.

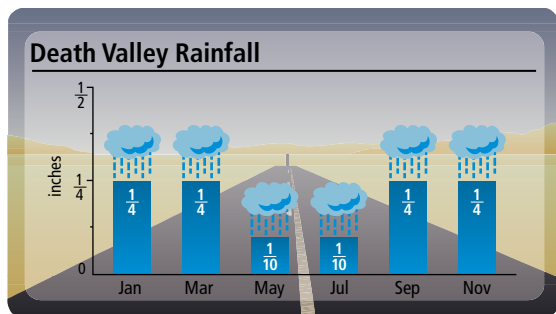
65. Give the difference of $\frac{7}{8}$ and $\frac{1}{4}$.

66. Give the difference of $\frac{9}{10}$ and $\frac{1}{100}$.


■ Applying the Concepts

Some of the application problems below involve multiplication or division, while others involve addition or subtraction.

- 67. Rainfall** How much total rainfall did Death Valley get during the months of July and September?



- 68. Rainfall** How much more rainfall did Death Valley get in February than in December?



- 69. Capacity** One carton of milk contains $\frac{1}{2}$ pint while another contains 4 pints. How much milk is contained in both cartons?

- 70. Baking** A recipe calls for $\frac{2}{3}$ cup of flour and $\frac{3}{4}$ cup of sugar. What is the total amount of flour and sugar called for in the recipe?

- 71. Budgeting** A student earns \$2,500 a month while working in college. She sets aside $\frac{1}{20}$ of this money for gas to travel to and from campus, $\frac{1}{16}$ for food, and $\frac{1}{25}$ for savings. What fraction of her income does she plan to spend on these three items?

- 72. Popular Majors** Enrollment figures show that the most popular programs at a local college are liberal art studies and business programs. The liberal arts studies program accounts for $\frac{1}{5}$ of the student enrollment while business programs account for $\frac{1}{10}$ of the enrollment. What fraction of student enrollment chooses one of these two areas of study?

- 73. Exercising** According to national studies, childhood obesity is on the rise. Doctors recommend a minimum of 30 minutes of exercise three times a week to help keep us fit. Suppose during a given week you walk for $\frac{1}{4}$ hour one day, $\frac{2}{3}$ of an hour a second day and of an hour on a third day. Find the total number of hours walked as a fraction.

- 74. Cooking** You are making pancakes for breakfast and need $\frac{3}{4}$ of a cup of milk for your batter. You discover that you only have $\frac{1}{2}$ cup of milk in the refrigerator. How much more milk do you need?

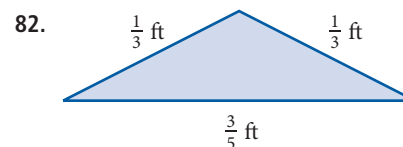
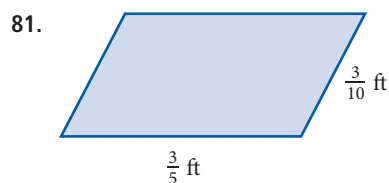
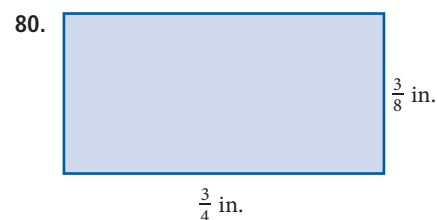
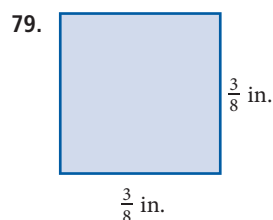
75. Conference Attendees At a recent mathematics conference $\frac{1}{3}$ of the attendees were teachers, $\frac{1}{4}$ were software salespersons, and $\frac{1}{12}$ were representatives from various book publishing companies. The remainder of the people in the conference center were employees of the center. What fraction represents the employees of the conference center?

76. Painting Recently you purchased $\frac{1}{2}$ gallon of paint to paint your dorm room. Once the job was finished you realized that you only used $\frac{1}{3}$ of the gallon. What fractional amount of the paint is left in the can?

77. Subdivision A 6-acre piece of land is subdivided into $\frac{3}{5}$ -acre lots. How many lots are there?

78. Cutting Wood A 12-foot piece of wood is cut into shelves. If each is $\frac{3}{4}$ foot in length, how many shelves are there?

Find the perimeter of each figure.



Arithmetic Sequences Recall that an arithmetic sequence is a sequence in which each term comes from the previous term by adding the same number each time. For example, the sequence $1, \frac{3}{2}, 2, \frac{5}{2}, \dots$ is an arithmetic sequence that starts with the number 1. Then each term after that is found by adding $\frac{1}{2}$ to the previous term. By observing this fact, we know that the next term in the sequence will be $\frac{5}{2} + \frac{1}{2} = \frac{6}{2} = 3$.

Find the next number in each arithmetic sequence below.

83. $1, \frac{4}{3}, \frac{5}{3}, 2, \dots$

84. $1, \frac{5}{4}, \frac{3}{2}, \frac{7}{4}, \dots$

85. $\frac{3}{2}, 2, \frac{5}{2}, \dots$

86. $\frac{2}{3}, 1, \frac{4}{3}, \dots$

Getting Ready for the Next Section

Simplify.

87. $9 \cdot 6 + 5$

88. $4 \cdot 6 + 3$

89. Write 2 as a fraction with denominator 8.

90. Write 2 as a fraction with denominator 4.

91. Write 1 as a fraction with denominator 8.

92. Write 5 as a fraction with denominator 4.

Add.

93. $\frac{8}{4} + \frac{3}{4}$

94. $\frac{16}{8} + \frac{1}{8}$

95. $2 + \frac{1}{8}$

96. $2 + \frac{3}{4}$

97. $1 + \frac{1}{8}$

98. $5 + \frac{3}{4}$

Divide.

99. $11 \div 4$

100. $10 \div 3$

101. $208 \div 24$

102. $207 \div 26$

Maintaining Your Skills

Multiply or divide as indicated.

103. $\frac{3}{4} \div \frac{5}{6}$

104. $12 \div \frac{1}{2}$

105. $12 \cdot \frac{2}{3}$

106. $12 \cdot \frac{3}{4}$

107. $4 \cdot \frac{3}{4}$

108. $4 \cdot \frac{1}{2}$

109. $\frac{7}{6} \div \frac{7}{12}$

110. $\frac{9}{10} \div \frac{7}{10}$

111. $\frac{2}{3} \cdot \frac{3}{4} \cdot \frac{4}{5} \cdot \frac{5}{6} \cdot \frac{6}{7}$

112. $\frac{11}{12} \cdot \frac{10}{11} \cdot \frac{9}{10} \cdot \frac{8}{9} \cdot \frac{7}{8}$

113. $\frac{35}{110} \cdot \frac{80}{63} \div \frac{16}{27}$

114. $\frac{20}{72} \cdot \frac{42}{18} \div \frac{20}{16}$

Mixed-Number Notation

2.6

Objectives

- A** Change mixed numbers to improper fractions.
- B** Change improper fractions to mixed numbers.

Introduction . . .

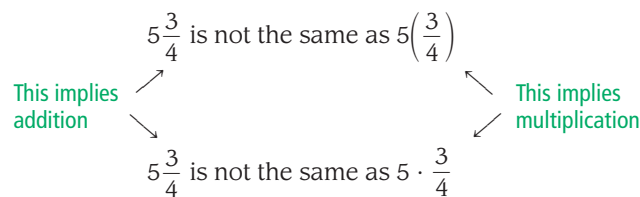
If you are interested in the stock market, you know that, prior to the year 2000, stock prices were given in eighths. For example, at one point in 1990, one share of Intel Corporation was selling at $\$73\frac{5}{8}$, or seventy-three and five-eighths dollars. The number $73\frac{5}{8}$ is called a *mixed number*. It is the sum of a whole number and a proper fraction. With mixed-number notation, we leave out the addition sign.

Notation

A number such as $5\frac{3}{4}$ is called a *mixed number* and is equal to $5 + \frac{3}{4}$. It is simply the sum of the whole number 5 and the proper fraction $\frac{3}{4}$, written without a + sign. Here are some further examples:

$$2\frac{1}{8} = 2 + \frac{1}{8}, \quad 6\frac{5}{9} = 6 + \frac{5}{9}, \quad 11\frac{2}{3} = 11 + \frac{2}{3}$$

The notation used in writing mixed numbers (writing the whole number and the proper fraction next to each other) must always be interpreted as addition. It is a mistake to read $5\frac{3}{4}$ as meaning 5 times $\frac{3}{4}$. If we want to indicate multiplication, we must use parentheses or a multiplication symbol. That is:



A Changing Mixed Numbers to Improper Fractions

To change a mixed number to an improper fraction, we write the mixed number with the + sign showing and then add the two numbers, as we did earlier.

EXAMPLE 1

Change $2\frac{3}{4}$ to an improper fraction.

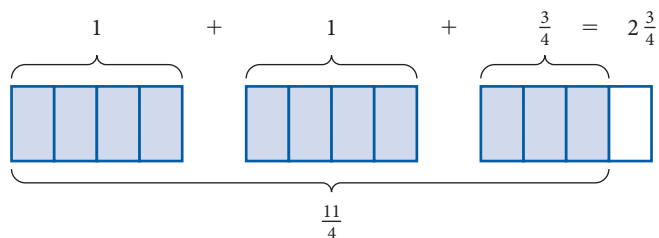
SOLUTION

$$\begin{aligned} 2\frac{3}{4} &= 2 + \frac{3}{4} && \text{Write the mixed number as a sum} \\ &= \frac{2}{1} + \frac{3}{4} && \text{Show that the denominator of 2 is 1} \\ &= \frac{4 \cdot 2}{4 \cdot 1} + \frac{3}{4} && \text{Multiply the numerator and the denominator of } \frac{2}{1} \text{ by 4 so both fractions will have the same denominator} \\ &= \frac{8}{4} + \frac{3}{4} \\ &= \frac{11}{4} && \text{Add the numerators; keep the common denominator} \end{aligned}$$

The mixed number $2\frac{3}{4}$ is equal to the improper fraction $\frac{11}{4}$. The diagram that follows further illustrates the equivalence of $2\frac{3}{4}$ and $\frac{11}{4}$.

PRACTICE PROBLEMS

1. Change $5\frac{2}{3}$ to an improper fraction.



2. Change $3\frac{1}{6}$ to an improper fraction.

EXAMPLE 2

Change $2\frac{1}{8}$ to an improper fraction.

SOLUTION

$$2\frac{1}{8} = 2 + \frac{1}{8}$$

Write as addition

$$= \frac{2}{1} + \frac{1}{8}$$

Write the whole number 2 as a fraction

$$= \frac{8 \cdot 2}{8 \cdot 1} + \frac{1}{8}$$

Change $\frac{2}{1}$ to a fraction with denominator 8

$$= \frac{16}{8} + \frac{1}{8}$$

$$= \frac{17}{8}$$

Add the numerators

If we look closely at Examples 1 and 2, we can see a shortcut that will let us change a mixed number to an improper fraction without so many steps.

Strategy Changing a Mixed Number to an Improper Fraction (Shortcut)

Step 1: Multiply the whole number part of the mixed number by the denominator.

Step 2: Add your answer to the numerator of the fraction.

Step 3: Put your new number over the original denominator.

3. Use the shortcut to change $5\frac{2}{3}$ to an improper fraction.

EXAMPLE 3

Use the shortcut to change $5\frac{3}{4}$ to an improper fraction.

SOLUTION

1. First, we multiply 4×5 to get 20.

2. Next, we add 20 to 3 to get 23.

3. The improper fraction equal to $5\frac{3}{4}$ is $\frac{23}{4}$.

Here is a diagram showing what we have done:

Step 1 Multiply $4 \times 5 = 20$.

$$5\frac{3}{4}$$

Step 2 Add $20 + 3 = 23$.

Mathematically, our shortcut is written like this:

$$5\frac{3}{4} = \frac{(4 \cdot 5) + 3}{4} = \frac{20 + 3}{4} = \frac{23}{4}$$

The result will always have the same denominator as the original mixed number

The shortcut shown in Example 3 works because the whole-number part of a mixed number can always be written with a denominator of 1. Therefore, the LCD for a whole number and fraction will always be the denominator of the fraction. That is why we multiply the whole number by the denominator of the fraction:

$$5\frac{3}{4} = 5 + \frac{3}{4} = \frac{5}{1} + \frac{3}{4} = \frac{4 \cdot 5}{4 \cdot 1} + \frac{3}{4} = \frac{4 \cdot 5 + 3}{4} = \frac{23}{4}$$

Answers

1. $\frac{17}{3}$ 2. $\frac{19}{6}$ 3. $\frac{17}{3}$

EXAMPLE 4 Change $6\frac{5}{9}$ to an improper fraction.

SOLUTION Using the first method, we have

$$6\frac{5}{9} = 6 + \frac{5}{9} = \frac{6}{1} + \frac{5}{9} = \frac{9 \cdot 6}{9 \cdot 1} + \frac{5}{9} = \frac{54}{9} + \frac{5}{9} = \frac{59}{9}$$

Using the shortcut method, we have

$$6\frac{5}{9} = \frac{(9 \cdot 6) + 5}{9} = \frac{54 + 5}{9} = \frac{59}{9}$$

B Changing Improper Fractions to Mixed Numbers

To change an improper fraction to a mixed number, we divide the numerator by the denominator. The result is used to write the mixed number.

EXAMPLE 5 Change $\frac{11}{4}$ to a mixed number.

SOLUTION Dividing 11 by 4 gives us

$$\begin{array}{r} 2 \\ 4 \overline{)11} \\ \underline{8} \\ 3 \end{array}$$

We see that 4 goes into 11 two times with 3 for a remainder. We write this as

$$\frac{11}{4} = 2 + \frac{3}{4} = 2\frac{3}{4}$$

The improper fraction $\frac{11}{4}$ is equivalent to the mixed number $2\frac{3}{4}$.

An easy way to visualize the results in Example 5 is to imagine having 11 quarters. Your 11 quarters are equivalent to $\frac{11}{4}$ dollars. In dollars, your quarters are worth 2 dollars plus 3 quarters, or $2\frac{3}{4}$ dollars.



EXAMPLE 6 Change $\frac{10}{3}$ to a mixed number.

SOLUTION $\frac{10}{3}$: $\begin{array}{r} 3 \\ 3 \overline{)10} \\ \underline{9} \\ 1 \end{array}$ so $\frac{10}{3} = 3 + \frac{1}{3} = 3\frac{1}{3}$

EXAMPLE 7 Change $\frac{208}{24}$ to a mixed number.

SOLUTION $\frac{208}{24}$: $\begin{array}{r} 8 \\ 24 \overline{)208} \\ \underline{192} \\ 16 \end{array}$ so $\frac{208}{24} = 8 + \frac{16}{24} = 8 + \frac{2}{3} = 8\frac{2}{3}$
↓
Reduce to lowest terms

4. Change $6\frac{4}{9}$ to an improper fraction.

CALCULATOR NOTE

The sequence of keys to press on a calculator to obtain the numerator in Example 4 looks like this:

$$9 \times 6 + 5 =$$

5. Change $\frac{11}{3}$ to a mixed number.

Note

This division process shows us how many ones are in $\frac{11}{4}$ and, when the ones are taken out, how many fourths are left.

Change each improper fraction to a mixed number.

6. $\frac{14}{5}$

7. $\frac{207}{26}$

Answers

4. $\frac{58}{9}$ 5. $3\frac{2}{3}$ 6. $2\frac{4}{5}$ 7. $7\frac{25}{26}$

Long Division, Remainders, and Mixed Numbers

Mixed numbers give us another way of writing the answers to long division problems that contain remainders. Here is how we divided 1,690 by 67 in Chapter 1:

$$\begin{array}{r}
 25 \text{ R } 15 \\
 67 \overline{)1,690} \\
 \underline{134} \\
 350 \\
 \underline{335} \\
 15
 \end{array}$$

The answer is 25 with a remainder of 15. Using mixed numbers, we can now write the answer as $25\frac{15}{67}$. That is,

$$\frac{1,690}{67} = 25\frac{15}{67}$$

The quotient of 1,690 and 67 is $25\frac{15}{67}$.

Getting Ready for Class

After reading through the preceding section, respond in your own words and in complete sentences.

1. What is a mixed number?
2. The expression $5\frac{3}{4}$ is equivalent to what addition problem?
3. The improper fraction $\frac{11}{4}$ is equivalent to what mixed number?
4. Why is $\frac{13}{5}$ an improper fraction, but $\frac{3}{5}$ is not an improper fraction?

Problem Set 2.6

A Change each mixed number to an improper fraction. [Examples 1–4]

1. $4\frac{2}{3}$

2. $3\frac{5}{8}$

3. $5\frac{1}{4}$

4. $7\frac{1}{2}$

5. $1\frac{5}{8}$

6. $1\frac{6}{7}$

7. $15\frac{2}{3}$

8. $17\frac{3}{4}$

9. $4\frac{20}{21}$

10. $5\frac{18}{19}$

11. $12\frac{31}{33}$

12. $14\frac{29}{31}$

B Change each improper fraction to a mixed number. [Examples 5–7]

13. $\frac{9}{8}$

14. $\frac{10}{9}$

15. $\frac{19}{4}$

16. $\frac{23}{5}$

17. $\frac{29}{6}$

18. $\frac{7}{2}$

19. $\frac{13}{4}$

20. $\frac{41}{15}$

21. $\frac{109}{27}$

22. $\frac{319}{23}$

23. $\frac{428}{15}$

24. $\frac{769}{27}$

■ Getting Ready for the Next Section

Change to improper fractions.

25. $2\frac{3}{4}$

26. $3\frac{1}{5}$

27. $4\frac{5}{8}$

28. $1\frac{3}{5}$

29. $2\frac{4}{5}$

30. $5\frac{9}{10}$

Find the following products. (Multiply.)

31. $\frac{3}{8} \cdot \frac{3}{5}$

32. $\frac{11}{4} \cdot \frac{16}{5}$

33. $\frac{2}{3} \left(\frac{9}{16} \right)$

34. $\frac{7}{10} \left(\frac{5}{21} \right)$

Find the quotients. (Divide.)

35. $\frac{4}{5} \div \frac{7}{8}$

36. $\frac{3}{4} \div \frac{1}{2}$

37. $\frac{8}{5} \div \frac{14}{5}$

38. $\frac{59}{10} \div 2$

■ Maintaining Your Skills

Perform the indicated operations.

39. $\frac{2}{3} \cdot \frac{3}{4} \div \frac{5}{8}$

40. $4 \cdot \frac{7}{6} \div 7$

41. $\frac{3}{4} \div \frac{1}{2} \cdot 6$

42. $\frac{2}{3} \div \frac{1}{6} \cdot 12$

43. $12 \div \frac{6}{7} \cdot 7$

44. $15 \div \frac{5}{8} \cdot 16$

Multiplication and Division with Mixed Numbers

2.7

Objectives

- A Multiply mixed numbers.
- B Divide mixed numbers.

Introduction . . .

The figure here shows one of the nutrition labels we worked with in Chapter 1. It is from a can of Italian tomatoes. Notice toward the top of the label, the number of servings in the can is $3\frac{1}{2}$. The number $3\frac{1}{2}$ is called a *mixed number*. If we want to know how many calories are in the whole can of tomatoes, we must be able to multiply $3\frac{1}{2}$ by 25 (the number of calories per serving). Multiplication with mixed numbers is one of the topics we will cover in this section.

The procedures for multiplying and dividing mixed numbers are the same as those we used in Sections 2.3 and 2.4 to multiply and divide fractions. The only additional work involved is in changing the mixed numbers to improper fractions before we actually multiply or divide.

CANNED ITALIAN TOMATOES

Nutrition Facts	
Serving Size 1/2 cup (121g)	
Servings Per Container: about 3 1/2	
Amount Per Serving	
Calories 25	Calories from fat 0
% Daily Value*	
Total Fat 0g	0%
Saturated Fat 0g	0%
Cholesterol 0mg	0%
Sodium 300mg	12%
Potassium 145mg	4%
Total Carbohydrate 4g	2%
Dietary Fiber 1g	4%
Sugars 4g	
Protein 1g	
Vitamin A 20%	• Vitamin C 15%
Calcium 4%	• Iron 15%

*Percent Daily Values are based on a 2,000 calorie diet. Your daily values may be higher or lower depending on your calorie needs.

A Multiplying Mixed Numbers

EXAMPLE 1

Multiply: $2\frac{3}{4} \cdot 3\frac{1}{5}$

SOLUTION We begin by changing each mixed number to an improper fraction:

$$2\frac{3}{4} = \frac{11}{4} \quad \text{and} \quad 3\frac{1}{5} = \frac{16}{5}$$

Using the resulting improper fractions, we multiply as usual. (That is, we multiply numerators and multiply denominators.)

$$\begin{aligned} \frac{11}{4} \cdot \frac{16}{5} &= \frac{11 \cdot 16}{4 \cdot 5} \\ &= \frac{11 \cdot 4 \cdot 4}{4 \cdot 5} \\ &= \frac{44}{5} \quad \text{or} \quad 8\frac{4}{5} \end{aligned}$$

EXAMPLE 2

Multiply: $3 \cdot 4\frac{5}{8}$

SOLUTION Writing each number as an improper fraction, we have

$$3 = \frac{3}{1} \quad \text{and} \quad 4\frac{5}{8} = \frac{37}{8}$$

The complete problem looks like this:

$$\begin{aligned} 3 \cdot 4\frac{5}{8} &= \frac{3}{1} \cdot \frac{37}{8} && \text{Change to improper fractions} \\ &= \frac{111}{8} && \text{Multiply numerators and} \\ &&& \text{multiply denominators} \\ &= 13\frac{7}{8} && \text{Write the answer as a mixed number} \end{aligned}$$

PRACTICE PROBLEMS

1. Multiply: $2\frac{3}{4} \cdot 4\frac{1}{3}$

2. Multiply: $2 \cdot 3\frac{5}{8}$

Note

As you can see, once you have changed each mixed number to an improper fraction, you multiply the resulting fractions the same way you did in Section 2.3.

Answers

1. $11\frac{11}{12}$ 2. $7\frac{1}{4}$

B Dividing Mixed Numbers

Dividing mixed numbers also requires that we change all mixed numbers to improper fractions before we actually do the division.

3. Divide: $1\frac{3}{5} \div 3\frac{2}{5}$

4. Divide: $4\frac{5}{8} \div 2$

EXAMPLE 3

Divide: $1\frac{3}{5} \div 2\frac{4}{5}$

SOLUTION We begin by rewriting each mixed number as an improper fraction:

$$1\frac{3}{5} = \frac{8}{5} \quad \text{and} \quad 2\frac{4}{5} = \frac{14}{5}$$

We then divide using the same method we used in Section 2.4. Remember? We multiply by the reciprocal of the divisor. Here is the complete problem:

$$\begin{aligned} 1\frac{3}{5} \div 2\frac{4}{5} &= \frac{8}{5} \div \frac{14}{5} && \text{Change to improper fractions} \\ &= \frac{8}{5} \cdot \frac{5}{14} && \text{To divide by } \frac{14}{5}, \text{ multiply by } \frac{5}{14} \\ &= \frac{8 \cdot 5}{5 \cdot 14} && \text{Multiply numerators and} \\ &&& \text{multiply denominators} \\ &= \frac{4 \cdot 2 \cdot 5}{5 \cdot 2 \cdot 7} && \text{Divide out factors common to} \\ &&& \text{the numerator and denominator} \\ &= \frac{4}{7} && \text{Answer in lowest terms} \end{aligned}$$

EXAMPLE 4

Divide: $5\frac{9}{10} \div 2$

SOLUTION We change to improper fractions and proceed as usual:

$$\begin{aligned} 5\frac{9}{10} \div 2 &= \frac{59}{10} \div \frac{2}{1} && \text{Write each number as an improper fraction} \\ &= \frac{59}{10} \cdot \frac{1}{2} && \text{Write division as multiplication} \\ &&& \text{by the reciprocal} \\ &= \frac{59}{20} && \text{Multiply numerators and} \\ &&& \text{multiply denominators} \\ &= 2\frac{19}{20} && \text{Change to a mixed number} \end{aligned}$$

Getting Ready for Class

After reading through the preceding section, respond in your own words and in complete sentences.

1. What is the first step when multiplying or dividing mixed numbers?
2. What is the reciprocal of $2\frac{4}{5}$?
3. Dividing $5\frac{9}{10}$ by 2 is equivalent to multiplying $5\frac{9}{10}$ by what number?
4. Find $4\frac{5}{8}$ of 3.

Answers

3. $\frac{8}{17}$ 4. $2\frac{5}{16}$

Problem Set 2.7

A Write your answers as proper fractions or mixed numbers, not as improper fractions.

Find the following products. (Multiply.) [Examples 1, 2]

1. $3\frac{2}{5} \cdot 1\frac{1}{2}$

2. $2\frac{1}{3} \cdot 6\frac{3}{4}$

3. $5\frac{1}{8} \cdot 2\frac{2}{3}$

4. $1\frac{5}{6} \cdot 1\frac{4}{5}$

5. $2\frac{1}{10} \cdot 3\frac{3}{10}$

6. $4\frac{7}{10} \cdot 3\frac{1}{10}$

7. $1\frac{1}{4} \cdot 4\frac{2}{3}$

8. $3\frac{1}{2} \cdot 2\frac{1}{6}$

9. $2 \cdot 4\frac{7}{8}$

10. $10 \cdot 1\frac{1}{4}$

11. $\frac{3}{5} \cdot 5\frac{1}{3}$

12. $\frac{2}{3} \cdot 4\frac{9}{10}$

13. $2\frac{1}{2} \cdot 3\frac{1}{3} \cdot 1\frac{1}{2}$

14. $3\frac{1}{5} \cdot 5\frac{1}{6} \cdot 1\frac{1}{8}$

15. $\frac{3}{4} \cdot 7 \cdot 1\frac{4}{5}$

16. $\frac{7}{8} \cdot 6 \cdot 1\frac{5}{6}$

B Find the following quotients. (Divide.) [Examples 3, 4]

17. $3\frac{1}{5} \div 4\frac{1}{2}$

18. $1\frac{4}{5} \div 2\frac{5}{6}$

19. $6\frac{1}{4} \div 3\frac{3}{4}$

20. $8\frac{2}{3} \div 4\frac{1}{3}$

21. $10 \div 2\frac{1}{2}$

22. $12 \div 3\frac{1}{6}$

23. $8\frac{3}{5} \div 2$

24. $12\frac{6}{7} \div 3$

25. $\left(\frac{3}{4} \div 2\frac{1}{2}\right) \div 3$

26. $\frac{7}{8} \div \left(1\frac{1}{4} \div 4\right)$

27. $\left(8 \div 1\frac{1}{4}\right) \div 2$

28. $8 \div \left(1\frac{1}{4} \div 2\right)$

29. $2\frac{1}{2} \cdot \left(3\frac{2}{5} \div 4\right)$

30. $4\frac{3}{5} \cdot \left(2\frac{1}{4} \div 5\right)$

31. Find the product of $2\frac{1}{2}$ and 3.

32. Find the product of $\frac{1}{5}$ and $3\frac{2}{3}$.

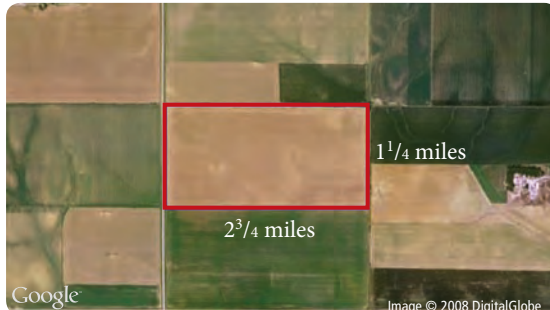
33. What is the quotient of $2\frac{3}{4}$ and $3\frac{1}{4}$?

34. What is the quotient of $1\frac{1}{5}$ and $2\frac{2}{5}$?

■ Applying the Concepts

- 35. Cooking** A certain recipe calls for $2\frac{3}{4}$ cups of sugar. If the recipe is to be doubled, how much sugar should be used?
- 36. Cooking** A recipe calls for $3\frac{1}{4}$ cups of flour. If Diane is using only half the recipe, how much flour should she use?
- 37. Number Problem** Find $\frac{3}{4}$ of $1\frac{7}{9}$. (Remember that *of* means multiply.)
- 38. Number Problem** Find $\frac{5}{6}$ of $2\frac{4}{15}$.
- 39. Cost of Gasoline** If a gallon of gas costs $335\frac{9}{10}$ ¢, how much do 8 gallons cost?
- 40. Cost of Gasoline** If a gallon of gas costs $353\frac{9}{10}$ ¢, how much does $\frac{1}{2}$ gallon cost?
- 41. Distance Traveled** If a car can travel $32\frac{3}{4}$ miles on a gallon of gas, how far will it travel on 5 gallons of gas?
- 42. Sewing** If it takes $1\frac{1}{2}$ yards of material to make a pillow cover, how much material will it take to make 3 pillow covers?
- 43. Buying Stocks** Assume that you have \$1000 to invest in the stock market. Because you own an iPod™ and an iPhone™, you decide to buy Apple stock. It is currently selling at a cost of $\$150\frac{7}{8}$ per share. At this price how many shares can you buy?
- 44. Subdividing Land** A local developer owns $145\frac{3}{4}$ acres of land that he hopes to subdivide into $2\frac{1}{2}$ acre home site lots to sell. How many home sites can be developed from this tract of land?
- 45. Selling Stocks** You inherit 100 shares of Cisco stock that has a current value of $\$25\frac{1}{6}$ per share. How much will you receive when you sell the stock?
- 46. Gas Mileage** You won a new car and are anxious to see what kind of gas mileage you get. You travel $427\frac{1}{5}$ miles before needing to fill your tank. You purchase $13\frac{3}{4}$ gallons of gas. How many miles were you able to travel on a single gallon of gas?
- 47. Area** Find the area of a bedroom that measures $11\frac{1}{2}$ ft by $15\frac{7}{8}$ ft.
- 48. Building Shelves** You are building a small bookcase. You need three shelves, each with a length of $4\frac{7}{8}$ ft. You bought a piece of wood that is 15 ft long. Will this board be long enough?

49. The Google Earth image shows some fields in the mid-western part of the United States. The rectangle outlines a corn field, and gives the dimensions in miles. Find the area of the corn field written as a mixed number.
50. **Dollar Bill** The size of the dollar now is $\frac{2}{3}$ of its original size. If the size now is $\frac{307}{50}$ inches long, how long was the dollar?



Nutrition The figure below shows nutrition labels for two different cans of Italian tomatoes.

CANNED TOMATOES 1

Nutrition Facts	
Serving Size 1/2 cup (121g)	
Servings Per Container: about 3 1/2	
Amount Per Serving	
Calories 45	Calories from fat 0
% Daily Value*	
Total Fat 0g	0%
Saturated Fat 0g	0%
Cholesterol 0mg	0%
Sodium 560mg	23%
Total Carbohydrate 11g	4%
Dietary Fiber 2g	8%
Sugars 9g	
Protein 1g	
Vitamin A 10%	• Vitamin C 25%
Calcium 2%	• Iron 2%
*Percent Daily Values are based on a 2,000 calorie diet.	

CANNED TOMATOES 2

Nutrition Facts	
Serving Size 1/2 cup (121g)	
Servings Per Container: about 3 1/2	
Amount Per Serving	
Calories 25	Calories from fat 0
% Daily Value*	
Total Fat 0g	0%
Saturated Fat 0g	0%
Cholesterol 0mg	0%
Sodium 300mg	12%
Potassium 145mg	4%
Total Carbohydrate 4g	2%
Dietary Fiber 1g	4%
Sugars 4g	
Protein 1g	
Vitamin A 20%	• Vitamin C 15%
Calcium 4%	• Iron 15%
*Percent Daily Values are based on a 2,000 calorie diet. Your daily values may be higher or lower depending on your calorie needs.	

51. Compare the total number of calories in the two cans of tomatoes.
52. Compare the total amount of sugar in the two cans of tomatoes.
53. Compare the total amount of sodium in the two cans of tomatoes.
54. Compare the total amount of protein in the two cans of tomatoes.

Getting Ready for the Next Section

55. Write as equivalent fractions with denominator 15.

a. $\frac{2}{3}$ b. $\frac{1}{5}$ c. $\frac{3}{5}$ d. $\frac{1}{3}$

56. Write as equivalent fractions with denominator 12.

a. $\frac{3}{4}$ b. $\frac{1}{3}$ c. $\frac{5}{6}$ d. $\frac{1}{4}$

57. Write as equivalent fractions with denominator 20.

a. $\frac{1}{4}$ b. $\frac{3}{5}$ c. $\frac{9}{10}$ d. $\frac{1}{10}$

58. Write as equivalent fractions with denominator 24.

a. $\frac{3}{4}$ b. $\frac{7}{8}$ c. $\frac{5}{8}$ d. $\frac{3}{8}$

Maintaining Your Skills

Add or subtract the following fractions, as indicated.

59. $\frac{2}{3} + \frac{1}{5}$

60. $\frac{3}{4} + \frac{5}{6}$

61. $\frac{2}{3} + \frac{8}{9}$

62. $\frac{1}{4} + \frac{3}{5} + \frac{9}{10}$

63. $\frac{9}{10} - \frac{3}{10}$

64. $\frac{7}{10} - \frac{3}{5}$

65. $\frac{1}{14} + \frac{3}{21}$

66. $\frac{5}{12} - \frac{1}{3}$

Extending the Concepts

To find the square of a mixed number, we first change the mixed number to an improper fraction, and then we square the result. For example:

$$\left(2\frac{1}{2}\right)^2 = \left(\frac{5}{2}\right)^2 = \frac{25}{4}$$

If we are asked to write our answer as a mixed number, we write it as $6\frac{1}{4}$.

Find each of the following squares, and write your answers as mixed numbers.

67. $\left(1\frac{1}{2}\right)^2$

68. $\left(3\frac{1}{2}\right)^2$

69. $\left(1\frac{3}{4}\right)^2$

70. $\left(2\frac{3}{4}\right)^2$

Addition and Subtraction with Mixed Numbers

2.8

Objectives

- A** Perform addition and subtraction with mixed numbers.
- B** Perform subtraction involving borrowing with mixed numbers.

Introduction . . .

In March 1995, rumors that Michael Jordan would return to basketball sent stock prices for the companies whose products he endorsed higher. The price of one share of General Mills, the maker of Wheaties, which Michael Jordan endorses, went from $\$60\frac{1}{2}$ to $\$63\frac{3}{8}$. To find the increase in the price of this stock, we must be able to subtract mixed numbers.

The notation we use for mixed numbers is especially useful for addition and subtraction. When adding and subtracting mixed numbers, we will assume you recall how to go about finding a least common denominator (LCD). (If you don't remember, then review Section 2.5.)

A Combining Mixed Numbers

EXAMPLE 1

Add: $3\frac{2}{3} + 4\frac{1}{5}$

SOLUTION Method 1: We begin by writing each mixed number showing the + sign. We then apply the commutative and associative properties to rearrange the order and grouping:

$$\begin{aligned} 3\frac{2}{3} + 4\frac{1}{5} &= 3 + \frac{2}{3} + 4 + \frac{1}{5} && \text{Expand each number to show the + sign} \\ &= 3 + 4 + \frac{2}{3} + \frac{1}{5} && \text{Commutative property} \\ &= (3 + 4) + \left(\frac{2}{3} + \frac{1}{5}\right) && \text{Associative property} \\ &= 7 + \left(\frac{5 \cdot 2}{5 \cdot 3} + \frac{3 \cdot 1}{3 \cdot 5}\right) && \text{Add } 3 + 4 = 7; \text{ then multiply to get the LCD} \\ &= 7 + \left(\frac{10}{15} + \frac{3}{15}\right) && \text{Write each fraction with the LCD} \\ &= 7 + \frac{13}{15} && \text{Add the numerators} \\ &= 7\frac{13}{15} && \text{Write the answer in mixed-number notation} \end{aligned}$$

Method 2: As you can see, we obtain our result by adding the whole-number parts ($3 + 4 = 7$) and the fraction parts ($\frac{2}{3} + \frac{1}{5} = \frac{13}{15}$) of each mixed number. Knowing this, we can save ourselves some writing by doing the same problem in columns:

$$\begin{array}{r} 3\frac{2}{3} = 3\frac{2 \cdot 5}{3 \cdot 5} = 3\frac{10}{15} \\ + 4\frac{1}{5} = 4\frac{1 \cdot 3}{5 \cdot 3} = 4\frac{3}{15} \\ \hline 7\frac{13}{15} \end{array}$$

↑
Write each fraction with LCD 15

The second method shown above requires less writing and lends itself to mixed-number notation. We will use this method for the rest of this section.

PRACTICE PROBLEMS

1. Add: $3\frac{2}{3} + 2\frac{1}{4}$

Note You should try both methods given in Example 1 on Practice Problem 1.

Answer

1. $5\frac{11}{12}$

2. Add: $5\frac{3}{4} + 6\frac{4}{5}$

Note

Once you see how to change from a whole number and an improper fraction to a whole number and a proper fraction, you will be able to do this step without showing any work.

3. Add: $6\frac{3}{4} + 2\frac{7}{8}$

4. Add: $2\frac{1}{3} + 1\frac{1}{4} + 3\frac{11}{12}$

Chapter 2 Fractions and Mixed Numbers

EXAMPLE 2

Add: $5\frac{3}{4} + 9\frac{5}{6}$

SOLUTION The LCD for 4 and 6 is 12. Writing the mixed numbers in a column and then adding looks like this:

$$\begin{array}{r} 5\frac{3}{4} = 5\frac{3 \cdot 3}{4 \cdot 3} = 5\frac{9}{12} \\ + 9\frac{5}{6} = 9\frac{5 \cdot 2}{6 \cdot 2} = 9\frac{10}{12} \\ \hline 14\frac{19}{12} \end{array}$$

The fraction part of the answer is an improper fraction. We rewrite it as a whole number and a proper fraction:

$$\begin{aligned} 14\frac{19}{12} &= 14 + \frac{19}{12} && \text{Write the mixed number with a + sign} \\ &= 14 + 1\frac{7}{12} && \text{Write } \frac{19}{12} \text{ as a mixed number} \\ &= 15\frac{7}{12} && \text{Add 14 and 1} \end{aligned}$$

EXAMPLE 3

Add: $5\frac{2}{3} + 6\frac{8}{9}$

$$\begin{array}{r} 5\frac{2}{3} = 5\frac{2 \cdot 3}{3 \cdot 3} = 5\frac{6}{9} \\ + 6\frac{8}{9} = 6\frac{8}{9} = 6\frac{8}{9} \\ \hline 11\frac{14}{9} = 12\frac{5}{9} \end{array}$$

The last step involves writing $\frac{14}{9}$ as $1\frac{5}{9}$ and then adding 11 and 1 to get 12.

EXAMPLE 4

Add: $3\frac{1}{4} + 2\frac{3}{5} + 1\frac{9}{10}$

SOLUTION The LCD is 20. We rewrite each fraction as an equivalent fraction with denominator 20 and add:

$$\begin{array}{r} 3\frac{1}{4} = 3\frac{1 \cdot 5}{4 \cdot 5} = 3\frac{5}{20} \\ 2\frac{3}{5} = 2\frac{3 \cdot 4}{5 \cdot 4} = 2\frac{12}{20} \\ + 1\frac{9}{10} = 1\frac{9 \cdot 2}{10 \cdot 2} = 1\frac{18}{20} \\ \hline 6\frac{35}{20} = 7\frac{15}{20} = 7\frac{3}{4} \end{array}$$

Reduce to lowest terms

Change to a mixed number

We should note here that we could have worked each of the first four examples in this section by first changing each mixed number to an improper fraction and

Answers

2. $12\frac{11}{20}$ 3. $9\frac{5}{8}$ 4. $7\frac{1}{2}$

then adding as we did in Section 2.5. To illustrate, if we were to work Example 4 this way, it would look like this:

$$\begin{aligned}
 3\frac{1}{4} + 2\frac{3}{5} + 1\frac{9}{10} &= \frac{13}{4} + \frac{13}{5} + \frac{19}{10} && \text{Change to improper fractions} \\
 &= \frac{13 \cdot 5}{4 \cdot 5} + \frac{13 \cdot 4}{5 \cdot 4} + \frac{19 \cdot 2}{10 \cdot 2} && \text{LCD is 20} \\
 &= \frac{65}{20} + \frac{52}{20} + \frac{38}{20} && \text{Equivalent fractions} \\
 &= \frac{155}{20} && \text{Add numerators} \\
 &= 7\frac{15}{20} = 7\frac{3}{4} && \text{Change to a mixed number, and reduce}
 \end{aligned}$$

As you can see, the result is the same as the result we obtained in Example 4.

There are advantages to both methods. The method just shown works well when the whole-number parts of the mixed numbers are small. The vertical method shown in Examples 1–4 works well when the whole-number parts of the mixed numbers are large.

Subtraction with mixed numbers is very similar to addition with mixed numbers.

EXAMPLE 5


Subtract: $3\frac{9}{10} - 1\frac{3}{10}$

SOLUTION Because the denominators are the same, we simply subtract the whole numbers and subtract the fractions:

$$\begin{array}{r}
 3\frac{9}{10} \\
 - 1\frac{3}{10} \\
 \hline
 2\frac{6}{10} = 2\frac{3}{5}
 \end{array}$$

Reduce to lowest terms

An easy way to visualize the results in Example 5 is to imagine 3 dollar bills and 9 dimes in your pocket. If you spend 1 dollar and 3 dimes, you will have 2 dollars and 6 dimes left.

**EXAMPLE 6**

Subtract: $12\frac{7}{10} - 8\frac{3}{5}$

SOLUTION The common denominator is 10. We must rewrite $\frac{3}{5}$ as an equivalent fraction with denominator 10:

$$\begin{array}{r}
 12\frac{7}{10} = 12\frac{7}{10} = 12\frac{7}{10} \\
 - 8\frac{3}{5} = - 8\frac{3 \cdot 2}{5 \cdot 2} = - 8\frac{6}{10} \\
 \hline
 4\frac{1}{10}
 \end{array}$$

5. Subtract: $4\frac{7}{8} - 1\frac{5}{8}$

6. Subtract: $12\frac{7}{10} - 7\frac{2}{5}$

Answers

5. $3\frac{1}{4}$ 6. $5\frac{3}{10}$

7. Subtract: $10 - 5\frac{4}{7}$

Note

Convince yourself that 10 is the same as $9\frac{7}{7}$. The reason we choose to write the 1 we borrowed as $\frac{7}{7}$ is that the fraction we eventually subtracted from $\frac{7}{7}$ was $\frac{2}{7}$. Both fractions must have the same denominator, 7, so that we can subtract.

8. Subtract: $6\frac{1}{3} - 2\frac{2}{3}$

9. Subtract: $6\frac{3}{4} - 2\frac{5}{6}$

Answers

7. $4\frac{3}{7}$ 8. $3\frac{2}{3}$ 9. $3\frac{11}{12}$

B Borrowing with Mixed Numbers**EXAMPLE 7**

Subtract: $10 - 5\frac{2}{7}$

SOLUTION In order to have a fraction from which to subtract $\frac{2}{7}$, we borrow 1 from 10 and rewrite the 1 we borrow as $\frac{7}{7}$. The process looks like this:

$$\begin{array}{r} 10 = 9\frac{7}{7} \quad \leftarrow \text{We rewrite 10 as } 9 + 1, \text{ which is } 9 + \frac{7}{7} = 9\frac{7}{7} \\ - 5\frac{2}{7} = -5\frac{2}{7} \quad \text{Then we can subtract as usual} \\ \hline 4\frac{5}{7} \end{array}$$

EXAMPLE 8

Subtract: $8\frac{1}{4} - 3\frac{3}{4}$

SOLUTION Because $\frac{3}{4}$ is larger than $\frac{1}{4}$, we again need to borrow 1 from the whole number. The 1 that we borrow from the 8 is rewritten as $\frac{4}{4}$, because 4 is the denominator of both fractions:

$$\begin{array}{r} 8\frac{1}{4} = 7\frac{5}{4} \quad \leftarrow \text{Borrow 1 in the form } \frac{4}{4}; \\ - 3\frac{3}{4} = -3\frac{3}{4} \quad \text{then } \frac{4}{4} + \frac{1}{4} = \frac{5}{4} \\ \hline 4\frac{2}{4} = 4\frac{1}{2} \quad \text{Reduce to lowest terms} \end{array}$$

EXAMPLE 9

Subtract: $4\frac{3}{4} - 1\frac{5}{6}$

SOLUTION This is about as complicated as it gets with subtraction of mixed numbers. We begin by rewriting each fraction with the common denominator 12:

$$\begin{array}{r} 4\frac{3}{4} = 4\frac{3 \cdot 3}{4 \cdot 3} = 4\frac{9}{12} \\ - 1\frac{5}{6} = -1\frac{5 \cdot 2}{6 \cdot 2} = -1\frac{10}{12} \\ \hline \end{array}$$

Because $\frac{10}{12}$ is larger than $\frac{9}{12}$, we must borrow 1 from 4 in the form $\frac{12}{12}$ before we subtract:

$$\begin{array}{r} 4\frac{9}{12} = 3\frac{21}{12} \quad \leftarrow 4 = 3 + 1 = 3 + \frac{12}{12}, \text{ so } 4\frac{9}{12} = \left(3 + \frac{12}{12}\right) + \frac{9}{12} \\ - 1\frac{10}{12} = -1\frac{10}{12} \quad \quad \quad = 3 + \left(\frac{12}{12} + \frac{9}{12}\right) \\ \hline 2\frac{11}{12} \quad \quad \quad = 3 + \frac{21}{12} \\ \quad \quad \quad = 3\frac{21}{12} \end{array}$$

Getting Ready for Class

After reading through the preceding section, respond in your own words and in complete sentences.

1. Is it necessary to "borrow" when subtracting $1\frac{3}{10}$ from $3\frac{9}{10}$?
2. To subtract $1\frac{2}{7}$ from 10, it is necessary to rewrite 10 as what mixed number?
3. To subtract $11\frac{20}{30}$ from $15\frac{3}{30}$ it is necessary to rewrite $15\frac{3}{30}$ as what mixed number?
4. Rewrite $14\frac{19}{12}$ so that the fraction part is a proper fraction instead of an improper fraction.

Problem Set 2.8

A Add and subtract the following mixed numbers as indicated. [Examples 1–6]

1. $2\frac{1}{5} + 3\frac{3}{5}$

2. $8\frac{2}{9} + 1\frac{5}{9}$

3. $4\frac{3}{10} + 8\frac{1}{10}$

4. $5\frac{2}{7} + 3\frac{3}{7}$

5. $6\frac{8}{9} - 3\frac{4}{9}$

6. $12\frac{5}{12} - 7\frac{1}{12}$

7. $9\frac{1}{6} + 2\frac{5}{6}$

8. $9\frac{1}{4} + 5\frac{3}{4}$

9. $3\frac{5}{8} - 2\frac{1}{4}$

10. $7\frac{9}{10} - 6\frac{3}{5}$

11. $11\frac{1}{3} + 2\frac{5}{6}$

12. $1\frac{5}{8} + 2\frac{1}{2}$

13. $7\frac{5}{12} - 3\frac{1}{3}$

14. $7\frac{3}{4} - 3\frac{5}{12}$

15. $6\frac{1}{3} - 4\frac{1}{4}$

16. $5\frac{4}{5} - 3\frac{1}{3}$

17. $10\frac{5}{6} + 15\frac{3}{4}$

18. $11\frac{7}{8} + 9\frac{1}{6}$

19. $5\frac{2}{3} + 6\frac{1}{3}$

20. $8\frac{5}{6} + 9\frac{5}{6}$

21.
$$\begin{array}{r} 10\frac{13}{16} \\ - 8\frac{5}{16} \\ \hline \end{array}$$

22.
$$\begin{array}{r} 17\frac{7}{12} \\ - 9\frac{5}{12} \\ \hline \end{array}$$

23.
$$\begin{array}{r} 6\frac{1}{2} \\ + 2\frac{5}{14} \\ \hline \end{array}$$

24.
$$\begin{array}{r} 9\frac{11}{12} \\ + 4\frac{1}{6} \\ \hline \end{array}$$

25.
$$\begin{array}{r} 1\frac{5}{8} \\ + 1\frac{3}{4} \\ \hline \end{array}$$

26.
$$\begin{array}{r} 7\frac{6}{7} \\ + 2\frac{3}{14} \\ \hline \end{array}$$

27.
$$\begin{array}{r} 4\frac{2}{3} \\ + 5\frac{3}{5} \\ \hline \end{array}$$

28.
$$\begin{array}{r} 9\frac{4}{9} \\ + 1\frac{1}{6} \\ \hline \end{array}$$

29.
$$\begin{array}{r} 5\frac{4}{10} \\ - 3\frac{1}{3} \\ \hline \end{array}$$

30.
$$\begin{array}{r} 12\frac{7}{8} \\ - 3\frac{5}{6} \\ \hline \end{array}$$

31.
$$\begin{array}{r} 10\frac{1}{20} \\ + 11\frac{4}{5} \\ \hline \end{array}$$

32.
$$\begin{array}{r} 18\frac{7}{8} \\ + 19\frac{1}{12} \\ \hline \end{array}$$

A Find the following sums. (Add.) [Examples 1–4]

33. $1\frac{1}{4} + 2\frac{3}{4} + 5$

34. $6 + 5\frac{3}{5} + 8\frac{2}{5}$

35. $7\frac{1}{10} + 8\frac{3}{10} + 2\frac{7}{10}$

36. $5\frac{2}{7} + 8\frac{1}{7} + 3\frac{5}{7}$

37. $\frac{3}{4} + 8\frac{1}{4} + 5$

38. $\frac{5}{8} + 1\frac{1}{8} + 7$

39. $3\frac{1}{2} + 8\frac{1}{3} + 5\frac{1}{6}$

40. $4\frac{1}{5} + 7\frac{1}{3} + 8\frac{1}{15}$

41.
$$\begin{array}{r} 8\frac{2}{3} \\ 9\frac{1}{8} \\ + 6\frac{1}{4} \\ \hline \end{array}$$

42.
$$\begin{array}{r} 7\frac{3}{5} \\ 8\frac{2}{3} \\ + 1\frac{1}{5} \\ \hline \end{array}$$

43.
$$\begin{array}{r} 6\frac{1}{7} \\ 9\frac{3}{14} \\ + 12\frac{1}{2} \\ \hline \end{array}$$

44.
$$\begin{array}{r} 1\frac{5}{6} \\ 2\frac{3}{4} \\ + 5\frac{1}{2} \\ \hline \end{array}$$

B The following problems all involve the concept of borrowing. Subtract in each case. [Examples 7–9]

45. $8 - 1\frac{3}{4}$

46. $5 - 3\frac{1}{3}$

47. $15 - 5\frac{3}{10}$

48. $24 - 10\frac{5}{12}$

49. $8\frac{1}{4} - 2\frac{3}{4}$

50. $12\frac{3}{10} - 5\frac{7}{10}$

51. $9\frac{1}{3} - 8\frac{2}{3}$

52. $7\frac{1}{6} - 6\frac{5}{6}$

53. $4\frac{1}{4} - 2\frac{1}{3}$

54. $6\frac{1}{5} - 1\frac{2}{3}$

55. $9\frac{2}{3} - 5\frac{3}{4}$

56. $12\frac{5}{6} - 8\frac{7}{8}$

57. $16\frac{3}{4} - 10\frac{4}{5}$

58. $18\frac{5}{12} - 9\frac{3}{4}$

59. $10\frac{3}{10} - 4\frac{4}{5}$

60. $9\frac{4}{7} - 7\frac{2}{3}$

61. $13\frac{1}{6} - 12\frac{5}{8}$

62. $21\frac{2}{5} - 20\frac{5}{6}$

63. $15\frac{3}{10} - 11\frac{4}{5}$

64. $19\frac{3}{15} - 10\frac{2}{3}$

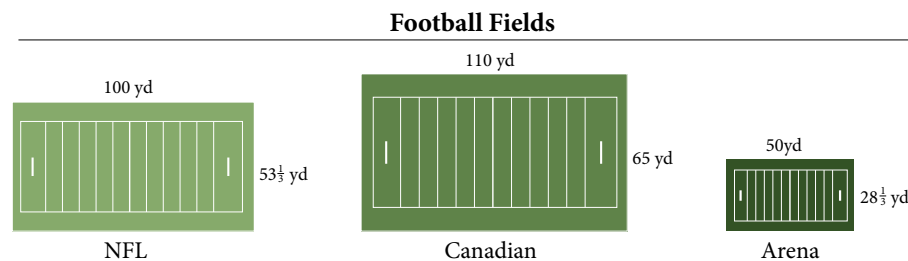
■ Applying the Concepts

Stock Prices As we mentioned in the introduction to this section, in March 1995, rumors that Michael Jordan would return to basketball sent stock prices for the companies whose products he endorses higher. The table at the right gives some of the details of those increases. Use the table to work Problems 65–70.

Stock Prices for Companies with Michael Jordan Endorsements			
Company	Product Endorsed	Stock Price (Dollars)	
		3/8/95	3/13/95
Nike	Air Jordans	$74\frac{7}{8}$	$77\frac{3}{8}$
Quaker Oats	Gatorade	$32\frac{1}{4}$	$32\frac{5}{8}$
General Mills	Wheaties	$60\frac{1}{2}$	$63\frac{3}{8}$
McDonald's		$32\frac{7}{8}$	$34\frac{3}{8}$

65. Find the difference in the price of Nike stock between March 13 and March 8.
66. Find the difference in price of General Mills stock between March 13 and March 8.
67. If you owned 100 shares of Nike stock, how much more are the 100 shares worth on March 13 than on March 8?
68. If you owned 1,000 shares of General Mills stock on March 8, how much more would they be worth on March 13?
69. If you owned 200 shares of McDonald's stock on March 8, how much more would they be worth on March 13?
70. If you owned 100 shares of McDonald's stock on March 8, how much more would they be worth on March 13?

71. **Area and Perimeter** The diagrams below show the dimensions of playing fields for the National Football League (NFL), the Canadian Football League, and Arena Football.



- a. Find the perimeter of each football field.
- b. Find the area of each football field.
72. **Triple Crown** The three races that constitute the Triple Crown in horse racing are shown in the table. The information comes from the ESPN website.
- a. Write the distances in order from smallest to largest.
- b. How much longer is the Belmont Stakes race than the Preakness Stakes?

Race	Distance (miles)
Kentucky Derby	$1\frac{1}{4}$
Preakness Stakes	$1\frac{3}{16}$
Belmont Stakes	$1\frac{1}{2}$

73. **Length of Jeans** A pair of jeans is $32\frac{1}{2}$ inches long. How long are the jeans after they have been washed if they shrink $1\frac{1}{3}$ inches?
74. **Manufacturing** A clothing manufacturer has two rolls of cloth. One roll is $35\frac{1}{2}$ yards, and the other is $62\frac{5}{8}$ yards. What is the total number of yards in the two rolls?

Getting Ready for the Next Section

Multiply or divide as indicated.

75. $\frac{11}{8} \cdot \frac{29}{8}$

76. $\frac{3}{4} \div \frac{5}{6}$

77. $\frac{7}{6} \cdot \frac{12}{7}$

78. $10\frac{1}{3} \div 8\frac{2}{3}$

Combine.

79. $\frac{3}{4} + \frac{5}{8}$

80. $\frac{1}{2} + \frac{2}{3}$

81. $2\frac{3}{8} + 1\frac{1}{4}$

82. $3\frac{2}{3} + 4\frac{1}{3}$

Maintaining Your Skills

Use the rule for order of operations to combine the following.

83. $3 + 2 \cdot 7$

84. $8 \cdot 3 - 2$

85. $4 \cdot 5 - 3 \cdot 2$

86. $9 \cdot 7 + 6 \cdot 5$

87. $3 \cdot 2^3 + 5 \cdot 4^2$

88. $6 \cdot 5^2 + 2 \cdot 3^3$

89. $3[2 + 5(6)]$

90. $4[2(3) + 3(5)]$

91. $(7 - 3)(8 + 2)$

92. $(9 - 5)(9 + 5)$

Extending the Concepts


93. Find the difference between $6\frac{1}{5}$ and $2\frac{7}{10}$.

94. Give the difference between $5\frac{1}{3}$ and $1\frac{5}{6}$.

95. Find the sum of $3\frac{1}{8}$ and $2\frac{3}{5}$.

96. Find the sum of $1\frac{5}{6}$ and $3\frac{4}{9}$.

97. **Improving Your Quantitative Literacy** A column on horse racing in the *Daily News* in Los Angeles reported that the horse Action This Day ran 3 furlongs in $35\frac{1}{5}$ seconds and another horse, Halfbridled, went two-fifths of a second faster. How many seconds did it take Halfbridled to run 3 furlongs?



Combinations of Operations and Complex Fractions

2.9

Objectives

- A Simplify expressions involving fractions and mixed numbers.
- B Simplify complex fractions.

Introduction . . .

Now that we have developed skills with both fractions and mixed numbers, we can simplify expressions that contain both types of numbers.

A Simplifying Expressions Involving Fractions and Mixed Numbers

EXAMPLE 1

Simplify the expression: $5 + \left(2\frac{1}{2}\right)\left(3\frac{2}{3}\right)$

SOLUTION The rule for order of operations indicates that we should multiply $2\frac{1}{2}$ times $3\frac{2}{3}$ and then add 5 to the result:

$$\begin{aligned} 5 + \left(2\frac{1}{2}\right)\left(3\frac{2}{3}\right) &= 5 + \left(\frac{5}{2}\right)\left(\frac{11}{3}\right) && \text{Change the mixed numbers to improper fractions} \\ &= 5 + \frac{55}{6} && \text{Multiply the improper fractions} \\ &= \frac{30}{6} + \frac{55}{6} && \text{Write 5 as } \frac{30}{6} \text{ so both numbers have the same denominator} \\ &= \frac{85}{6} && \text{Add fractions by adding their numerators} \\ &= 14\frac{1}{6} && \text{Write the answer as a mixed number} \end{aligned}$$

EXAMPLE 2

Simplify: $\left(\frac{3}{4} + \frac{5}{8}\right)\left(2\frac{3}{8} + 1\frac{1}{4}\right)$

SOLUTION We begin by combining the numbers inside the parentheses:

$$\begin{aligned} \frac{3}{4} + \frac{5}{8} &= \frac{3 \cdot 2}{4 \cdot 2} + \frac{5}{8} && \text{and} && 2\frac{3}{8} &= && 2\frac{3}{8} &= && 2\frac{3}{8} \\ &= \frac{6}{8} + \frac{5}{8} && && + 1\frac{1}{4} &= && + 1\frac{1 \cdot 2}{4 \cdot 2} &= && + 1\frac{2}{8} \\ &= \frac{11}{8} && && && && && 3\frac{5}{8} \end{aligned}$$

Now that we have combined the expressions inside the parentheses, we can complete the problem by multiplying the results:

$$\begin{aligned} \left(\frac{3}{4} + \frac{5}{8}\right)\left(2\frac{3}{8} + 1\frac{1}{4}\right) &= \left(\frac{11}{8}\right)\left(3\frac{5}{8}\right) \\ &= \frac{11}{8} \cdot \frac{29}{8} && \text{Change } 3\frac{5}{8} \text{ to an improper fraction} \\ &= \frac{319}{64} && \text{Multiply fractions} \\ &= 4\frac{63}{64} && \text{Write the answer as a mixed number} \end{aligned}$$

PRACTICE PROBLEMS

1. Simplify the expression:

$$4 + \left(1\frac{1}{2}\right)\left(2\frac{3}{4}\right)$$

2. Simplify:

$$\left(\frac{2}{3} + \frac{1}{6}\right)\left(2\frac{5}{6} + 1\frac{1}{3}\right)$$

Answers

1. $8\frac{1}{8}$ 2. $3\frac{17}{36}$

3. Simplify:

$$\frac{3}{7} + \frac{1}{3} \left(1\frac{1}{2} + 4\frac{1}{2} \right)^2$$

4. Simplify:

$$\frac{\frac{2}{3}}{\frac{5}{9}}$$

EXAMPLE 3Simplify: $\frac{3}{5} + \frac{1}{2} \left(3\frac{2}{3} + 4\frac{1}{3} \right)^2$ **SOLUTION** We begin by combining the expressions inside the parentheses:

$$\begin{aligned} \frac{3}{5} + \frac{1}{2} \left(3\frac{2}{3} + 4\frac{1}{3} \right)^2 &= \frac{3}{5} + \frac{1}{2} (8)^2 && \text{The sum inside the parentheses is 8} \\ &= \frac{3}{5} + \frac{1}{2} (64) && \text{The square of 8 is 64} \\ &= \frac{3}{5} + 32 && \frac{1}{2} \text{ of 64 is 32} \\ &= 32\frac{3}{5} && \text{The result is a mixed number} \end{aligned}$$

B Complex Fractions**Definition**

A **complex fraction** is a fraction in which the numerator and/or the denominator are themselves fractions or combinations of fractions.

Each of the following is a complex fraction:

$$\frac{\frac{3}{4}}{\frac{5}{6}}, \quad \frac{3 + \frac{1}{2}}{2 - \frac{3}{4}}, \quad \frac{\frac{1}{2} + \frac{2}{3}}{\frac{3}{4} - \frac{1}{6}}$$

EXAMPLE 4Simplify: $\frac{\frac{3}{4}}{\frac{5}{6}}$ **SOLUTION** This is actually the same as the problem $\frac{3}{4} \div \frac{5}{6}$, because the bar between $\frac{3}{4}$ and $\frac{5}{6}$ indicates division. Therefore, it must be true that

$$\begin{aligned} \frac{\frac{3}{4}}{\frac{5}{6}} &= \frac{3}{4} \div \frac{5}{6} \\ &= \frac{3}{4} \cdot \frac{6}{5} \\ &= \frac{18}{20} \\ &= \frac{9}{10} \end{aligned}$$

As you can see, we continue to use properties we have developed previously when we encounter new situations. In Example 4 we use the fact that division by a number and multiplication by its reciprocal produce the same result. We are taking a new problem, simplifying a complex fraction, and thinking of it in terms of a problem we have done previously, division by a fraction.

Answers3. $12\frac{3}{7}$ 4. $1\frac{1}{5}$

EXAMPLE 5

Simplify: $\frac{\frac{1}{2} + \frac{2}{3}}{\frac{3}{4} - \frac{1}{6}}$

SOLUTION Let's decide to call the numerator of this complex fraction the *top* of the fraction and its denominator the *bottom* of the complex fraction. It will be less confusing if we name them this way. The LCD for all the denominators on the top and bottom is 12, so we can multiply the top and bottom of this complex fraction by 12 and be sure all the denominators will divide it exactly. This will leave us with only whole numbers on the top and bottom:

$$\begin{aligned} \frac{\frac{1}{2} + \frac{2}{3}}{\frac{3}{4} - \frac{1}{6}} &= \frac{12\left(\frac{1}{2} + \frac{2}{3}\right)}{12\left(\frac{3}{4} - \frac{1}{6}\right)} && \text{Multiply the top and bottom by the LCD} \\ &= \frac{12 \cdot \frac{1}{2} + 12 \cdot \frac{2}{3}}{12 \cdot \frac{3}{4} - 12 \cdot \frac{1}{6}} && \text{Distributive property} \\ &= \frac{6 + 8}{9 - 2} && \text{Multiply each fraction by 12} \\ &= \frac{14}{7} && \text{Add on top and subtract on bottom} \\ &= 2 && \text{Reduce to lowest terms} \end{aligned}$$

The problem can be worked in another way also. We can simplify the top and bottom of the complex fraction separately. Simplifying the top, we have

$$\frac{1}{2} + \frac{2}{3} = \frac{1 \cdot 3}{2 \cdot 3} + \frac{2 \cdot 2}{3 \cdot 2} = \frac{3}{6} + \frac{4}{6} = \frac{7}{6}$$

Simplifying the bottom, we have

$$\frac{3}{4} - \frac{1}{6} = \frac{3 \cdot 3}{4 \cdot 3} - \frac{1 \cdot 2}{6 \cdot 2} = \frac{9}{12} - \frac{2}{12} = \frac{7}{12}$$

We now write the original complex fraction again using the simplified expressions for the top and bottom. Then we proceed as we did in Example 4.

$$\begin{aligned} \frac{\frac{1}{2} + \frac{2}{3}}{\frac{3}{4} - \frac{1}{6}} &= \frac{\frac{7}{6}}{\frac{7}{12}} \\ &= \frac{7}{6} \div \frac{7}{12} && \text{The divisor is } \frac{7}{12} \\ &= \frac{7}{6} \cdot \frac{12}{7} && \text{Replace } \frac{7}{12} \text{ by its reciprocal and multiply} \\ &= \frac{7 \cdot 2 \cdot 6}{6 \cdot 7} && \text{Divide out common factors} \\ &= 2 \end{aligned}$$

STUDY SKILLS**Review with the Exam in Mind**

Each day you should review material that will be covered on the next exam. Your review should consist of working problems. Preferably, the problems you work should be problems from your list of difficult problems.

5. Simplify: $\frac{\frac{1}{2} + \frac{3}{4}}{\frac{2}{3} - \frac{1}{4}}$

Note

We are going to simplify this complex fraction by two different methods. This is the first method.

Note

The fraction bar that separates the numerator of the complex fraction from its denominator works like parentheses. If we were to rewrite this problem without it, we would write it like this:

$$\left(\frac{1}{2} + \frac{2}{3}\right) \div \left(\frac{3}{4} - \frac{1}{6}\right)$$

That is why we simplify the top and bottom of the complex fraction separately and then divide.

Answer

5. 3

6. Simplify: $\frac{4 + \frac{2}{3}}{3 - \frac{1}{4}}$

7. Simplify: $\frac{12\frac{1}{3}}{6\frac{2}{3}}$

Answers

6. $1\frac{23}{33}$ 7. $1\frac{17}{20}$

Chapter 2 Fractions and Mixed Numbers

EXAMPLE 6

Simplify: $\frac{3 + \frac{1}{2}}{2 - \frac{3}{4}}$

SOLUTION The simplest approach here is to multiply both the top and bottom by the LCD for all fractions, which is 4:

$$\frac{3 + \frac{1}{2}}{2 - \frac{3}{4}} = \frac{4\left(3 + \frac{1}{2}\right)}{4\left(2 - \frac{3}{4}\right)}$$

Multiply the top and bottom by 4

$$= \frac{4 \cdot 3 + 4 \cdot \frac{1}{2}}{4 \cdot 2 - 4 \cdot \frac{3}{4}}$$

Distributive property

$$= \frac{12 + 2}{8 - 3}$$

Multiply each number by 4

$$= \frac{14}{5}$$

Add on top and subtract on bottom

$$= 2\frac{4}{5}$$

EXAMPLE 7

Simplify: $\frac{10\frac{1}{3}}{8\frac{2}{3}}$

SOLUTION The simplest way to simplify this complex fraction is to think of it as a division problem.

$$\frac{10\frac{1}{3}}{8\frac{2}{3}} = 10\frac{1}{3} \div 8\frac{2}{3}$$

Write with a \div symbol

$$= \frac{31}{3} \div \frac{26}{3}$$

Change to improper fractions

$$= \frac{31}{3} \cdot \frac{3}{26}$$

Write in terms of multiplication

$$= \frac{31 \cdot 3}{3 \cdot 26}$$

Divide out the common factor 3

$$= \frac{31}{26} = 1\frac{5}{26}$$

Answer as a mixed number

Getting Ready for Class

After reading through the preceding section, respond in your own words and in complete sentences.

1. What is a complex fraction?

2. Rewrite $\frac{\frac{5}{6}}{\frac{1}{3}}$ as a multiplication problem.

3. True or false? The rules for order of operations tell us to work inside parentheses first.

4. True or false? We find the LCD when we add or subtract fractions, but not when we multiply them.

Problem Set 2.9

A Use the rule for order of operations to simplify each of the following. [Examples 1–3]

1. $3 + \left(1\frac{1}{2}\right)\left(2\frac{2}{3}\right)$

2. $7 - \left(1\frac{3}{5}\right)\left(2\frac{1}{2}\right)$

3. $8 - \left(\frac{6}{11}\right)\left(1\frac{5}{6}\right)$

4. $10 + \left(2\frac{4}{5}\right)\left(\frac{5}{7}\right)$

5. $\frac{2}{3}\left(1\frac{1}{2}\right) + \frac{3}{4}\left(1\frac{1}{3}\right)$

6. $\frac{2}{5}\left(2\frac{1}{2}\right) + \frac{5}{8}\left(3\frac{1}{5}\right)$

7. $2\left(1\frac{1}{2}\right) + 5\left(6\frac{2}{5}\right)$

8. $4\left(5\frac{3}{4}\right) + 6\left(3\frac{5}{6}\right)$

9. $\left(\frac{3}{5} + \frac{1}{10}\right)\left(\frac{1}{2} + \frac{3}{4}\right)$

10. $\left(\frac{2}{9} + \frac{1}{3}\right)\left(\frac{1}{5} + \frac{1}{10}\right)$

11. $\left(2 + \frac{2}{3}\right)\left(3 + \frac{1}{8}\right)$

12. $\left(3 - \frac{3}{4}\right)\left(3 + \frac{1}{3}\right)$

13. $\left(1 + \frac{5}{6}\right)\left(1 - \frac{5}{6}\right)$

14. $\left(2 - \frac{1}{4}\right)\left(2 + \frac{1}{4}\right)$

15. $\frac{2}{3} + \frac{1}{3}\left(2\frac{1}{2} + \frac{1}{2}\right)^2$

16. $\frac{3}{5} + \frac{1}{4}\left(2\frac{1}{2} - \frac{1}{2}\right)^3$

17. $2\frac{3}{8} + \frac{1}{2}\left(\frac{1}{3} + \frac{5}{3}\right)^3$

18. $8\frac{2}{3} + \frac{1}{3}\left(\frac{8}{5} + \frac{7}{5}\right)^2$

19. $2\left(\frac{1}{2} + \frac{1}{3}\right) + 3\left(\frac{2}{3} + \frac{1}{4}\right)$

20. $5\left(\frac{1}{5} + \frac{3}{10}\right) + 2\left(\frac{1}{10} + \frac{1}{2}\right)$

B Simplify each complex fraction as much as possible. [Examples 4–7]

$$21. \frac{\frac{2}{3}}{\frac{3}{4}}$$

$$22. \frac{\frac{5}{6}}{\frac{3}{12}}$$

$$23. \frac{\frac{2}{3}}{\frac{4}{3}}$$

$$24. \frac{\frac{7}{9}}{\frac{5}{9}}$$

$$25. \frac{\frac{11}{20}}{\frac{5}{10}}$$

$$26. \frac{\frac{9}{16}}{\frac{3}{4}}$$

$$27. \frac{\frac{1}{2} + \frac{1}{3}}{\frac{1}{2} - \frac{1}{3}}$$

$$28. \frac{\frac{1}{4} + \frac{1}{5}}{\frac{1}{4} - \frac{1}{5}}$$

$$29. \frac{\frac{5}{8} - \frac{1}{4}}{\frac{1}{8} + \frac{1}{2}}$$

$$30. \frac{\frac{3}{4} + \frac{1}{3}}{\frac{2}{3} + \frac{1}{6}}$$

$$31. \frac{\frac{9}{20} - \frac{1}{10}}{\frac{1}{10} + \frac{9}{20}}$$

$$32. \frac{\frac{1}{2} + \frac{2}{3}}{\frac{3}{4} + \frac{5}{6}}$$

$$33. \frac{1 + \frac{2}{3}}{1 - \frac{2}{3}}$$

$$34. \frac{5 - \frac{3}{4}}{2 + \frac{3}{4}}$$

$$35. \frac{2 + \frac{5}{6}}{5 - \frac{1}{3}}$$

$$36. \frac{9 - \frac{11}{5}}{3 + \frac{13}{10}}$$

$$37. \frac{3 + \frac{5}{6}}{1 + \frac{5}{3}}$$

$$38. \frac{10 + \frac{9}{10}}{5 + \frac{4}{5}}$$

$$39. \frac{\frac{1}{3} + \frac{3}{4}}{2 - \frac{1}{6}}$$

$$40. \frac{3 + \frac{5}{2}}{\frac{5}{6} + \frac{1}{4}}$$

$$41. \frac{\frac{5}{6}}{3 + \frac{2}{3}}$$

$$42. \frac{9 - \frac{3}{2}}{\frac{7}{4}}$$

B Simplify each of the following complex fractions. [Examples 5–7]

$$43. \frac{2\frac{1}{2} + \frac{1}{2}}{3\frac{3}{5} - \frac{2}{5}}$$

$$44. \frac{5\frac{3}{8} + \frac{5}{8}}{4\frac{1}{4} + 1\frac{3}{4}}$$

$$45. \frac{2 + 1\frac{2}{3}}{3\frac{5}{6} - 1}$$

$$46. \frac{5 + 8\frac{3}{5}}{2\frac{3}{10} + 4}$$

$$47. \frac{3\frac{1}{4} - 2\frac{1}{2}}{5\frac{3}{4} + 1\frac{1}{2}}$$

$$48. \frac{9\frac{3}{8} + 2\frac{5}{8}}{6\frac{1}{2} + 7\frac{1}{2}}$$

$$49. \frac{3\frac{1}{4} + 5\frac{1}{6}}{2\frac{1}{3} + 3\frac{1}{4}}$$

$$50. \frac{8\frac{5}{6} + 1\frac{2}{3}}{7\frac{1}{3} + 2\frac{1}{4}}$$

$$51. \frac{6\frac{2}{3} + 7\frac{3}{4}}{8\frac{1}{2} + 9\frac{7}{8}}$$

$$52. \frac{3\frac{4}{5} - 1\frac{9}{10}}{6\frac{5}{6} - 2\frac{3}{4}}$$

53. What is twice the sum of $2\frac{1}{5}$ and $\frac{3}{6}$?

54. Find 3 times the difference of $1\frac{7}{9}$ and $\frac{2}{9}$.

55. Add $5\frac{1}{4}$ to the sum of $\frac{3}{4}$ and 2.

56. Subtract $\frac{7}{8}$ from the product of 2 and $3\frac{1}{2}$.

■ Applying the Concepts

57. **Tri-cities** The Google Earth image shows a right triangle between three cities in Colorado. If the distance between Edgewater and Denver is 4 miles, and the distance between Denver and North Washington is $2\frac{1}{2}$ miles, what is the area of the triangle created by the three cities?



58. **Tri-cities** The Google Earth image shows a right triangle between three cities in California. If the distance between Pomona and Ontario is $5\frac{7}{10}$ miles, and the distance between Ontario and Upland is $3\frac{3}{5}$ miles, what is the area of the triangle created by the three cities?



59. **Manufacturing** A dress manufacturer usually buys two rolls of cloth, one of $32\frac{1}{2}$ yards and the other of $25\frac{1}{3}$ yards, to fill his weekly orders. If his orders double one week, how much of the cloth should he order? (Give the total yardage.)
60. **Body Temperature** Suppose your normal body temperature is $98\frac{3}{5}^{\circ}$ Fahrenheit. If your temperature goes up $3\frac{1}{5}^{\circ}$ on Monday and then down $1\frac{4}{5}^{\circ}$ on Tuesday, what is your temperature on Tuesday?

■ Maintaining Your Skills

These problems review the four basic operations with fractions from this chapter.

Perform the indicated operations.

61. $\frac{3}{4} \cdot \frac{8}{9}$

62. $8 \cdot \frac{5}{6}$

63. $\frac{2}{3} \div 4$

64. $\frac{7}{8} \div \frac{14}{24}$

65. $\frac{3}{7} - \frac{2}{7}$

66. $\frac{6}{7} + \frac{9}{14}$

67. $10 - \frac{2}{9}$

68. $\frac{2}{3} - \frac{3}{5}$

Chapter 2 Summary

Definition of Fractions [2.1]

A fraction is any number that can be written in the form $\frac{a}{b}$, where a and b are numbers and b is not 0. The number a is called the *numerator*, and the number b is called the *denominator*.

EXAMPLES

1. Each of the following is a fraction:

$$\frac{1}{2}, \frac{3}{4}, \frac{8}{1}, \frac{7}{3}$$

Properties of Fractions [2.1]

Multiplying the numerator and the denominator of a fraction by the same nonzero number will produce an equivalent fraction. The same is true for dividing the numerator and denominator by the same nonzero number. In symbols the properties look like this: If a , b , and c are numbers and b and c are not 0, then

$$\text{Property 1 } \frac{a}{b} = \frac{a \cdot c}{b \cdot c} \quad \text{Property 2 } \frac{a}{b} = \frac{a \div c}{b \div c}$$

2. Change $\frac{3}{4}$ to an equivalent fraction with denominator 12.

$$\frac{3}{4} = \frac{3 \cdot 3}{4 \cdot 3} = \frac{9}{12}$$

Fractions and the Number 1 [2.1]

If a represents any number, then

$$\frac{a}{1} = a \quad \text{and} \quad \frac{a}{a} = 1 \quad (\text{where } a \text{ is not } 0)$$

3. $\frac{5}{1} = 5, \frac{5}{5} = 1$

Reducing Fractions to Lowest Terms [2.2]

To reduce a fraction to lowest terms, factor the numerator and the denominator, and then divide both the numerator and denominator by any factors they have in common.

4.
$$\begin{aligned} \frac{90}{588} &= \frac{2 \cdot 3 \cdot 3 \cdot 5}{2 \cdot 2 \cdot 3 \cdot 7 \cdot 7} \\ &= \frac{3 \cdot 5}{2 \cdot 7 \cdot 7} \\ &= \frac{15}{98} \end{aligned}$$

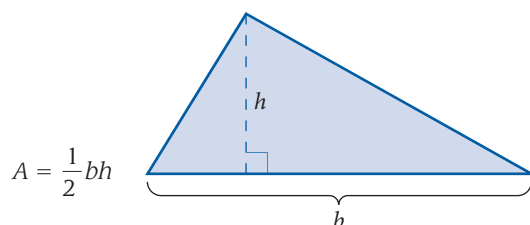
Multiplying Fractions [2.3]

To multiply fractions, multiply numerators and multiply denominators.

5.
$$\frac{3}{5} \cdot \frac{4}{7} = \frac{3 \cdot 4}{5 \cdot 7} = \frac{12}{35}$$

The Area of a Triangle [2.3]

The formula for the area of a triangle with base b and height h is



6. If the base of a triangle is 10 inches and the height is 7 inches, then the area is

$$\begin{aligned} A &= \frac{1}{2}bh \\ &= \frac{1}{2} \cdot 10 \cdot 7 \\ &= 5 \cdot 7 \\ &= 35 \text{ square inches} \end{aligned}$$

Reciprocals [2.4]

Any two numbers whose product is 1 are called *reciprocals*. The numbers $\frac{2}{3}$ and $\frac{3}{2}$ are reciprocals, because their product is 1.

$$7. \frac{3}{8} \div \frac{1}{3} = \frac{3}{8} \cdot \frac{3}{1} = \frac{9}{8}$$

Division with Fractions [2.4]

To divide by a fraction, multiply by its reciprocal. That is, the quotient of two fractions is defined to be the product of the first fraction with the reciprocal of the second fraction (the divisor).

Least Common Denominator (LCD) [2.5]

The *least common denominator* (LCD) for a set of denominators is the smallest number that is exactly divisible by each denominator.

$$8. \frac{1}{8} + \frac{3}{8} = \frac{1+3}{8} \\ = \frac{4}{8} \\ = \frac{1}{2}$$

Addition and Subtraction of Fractions [2.5]

To add (or subtract) two fractions with a common denominator, add (or subtract) numerators and use the common denominator. In symbols: If a , b , and c are numbers with c not equal to 0, then

$$\frac{a}{c} + \frac{b}{c} = \frac{a+b}{c} \quad \text{and} \quad \frac{a}{c} - \frac{b}{c} = \frac{a-b}{c}$$

Additional Facts about Fractions

1. In some books fractions are called *rational numbers*.
2. Every whole number can be written as a fraction with a denominator of 1.
3. The commutative, associative, and distributive properties are true for fractions.
4. The word *of* as used in the expression " $\frac{2}{3}$ of 12" indicates that we are to multiply $\frac{2}{3}$ and 12.
5. Two fractions with the same value are called *equivalent fractions*.

Mixed-Number Notation [2.6]

A mixed number is the sum of a whole number and a fraction. The + sign is not shown when we write mixed numbers; it is implied. The mixed number $4\frac{2}{3}$ is actually the sum $4 + \frac{2}{3}$.

Changing Mixed Numbers to Improper Fractions [2.6]

To change a mixed number to an improper fraction, we write the mixed number showing the + sign and add as usual. The result is the same if we multiply the denominator of the fraction by the whole number and add what we get to the numerator of the fraction, putting this result over the denominator of the fraction.

$$9. \quad 4\frac{2}{3} = \frac{3 \cdot 4 + 2}{3} = \frac{14}{3}$$

Mixed number Improper fraction

Changing an Improper Fraction to a Mixed Number [2.6]

To change an improper fraction to a mixed number, divide the denominator into the numerator. The quotient is the whole-number part of the mixed number. The fraction part is the remainder over the divisor.

10. Change $\frac{14}{3}$ to a mixed number.

Quotient

$$\begin{array}{r} 4 \\ 3 \overline{)14} \\ \underline{12} \\ 2 \end{array} \qquad \frac{14}{3} = 4\frac{2}{3}$$

Remainder

Divisor

Multiplication and Division with Mixed Numbers [2.7]

To multiply or divide two mixed numbers, change each to an improper fraction and multiply or divide as usual.

$$11. \quad 2\frac{1}{3} \cdot 1\frac{3}{4} = \frac{7}{3} \cdot \frac{7}{4} = \frac{49}{12} = 4\frac{1}{12}$$

Addition and Subtraction with Mixed Numbers [2.8]

To add or subtract two mixed numbers, add or subtract the whole-number parts and the fraction parts separately. This is best done with the numbers written in columns.

$$12. \quad \begin{array}{r} 3\frac{4}{9} = 3\frac{4}{9} \\ + 2\frac{2}{3} = + 2\frac{2 \cdot 3}{3 \cdot 3} = + 2\frac{6}{9} \\ \hline 5\frac{10}{9} = 6\frac{1}{9} \end{array}$$

Common denominator

Add whole numbers

Add fractions

Borrowing in Subtraction with Mixed Numbers [2.8]

It is sometimes necessary to borrow when doing subtraction with mixed numbers. We always change to a common denominator before we actually borrow.

$$13. \quad \begin{array}{r} 4\frac{1}{3} = 4\frac{2}{6} = 3\frac{8}{6} \\ - 1\frac{5}{6} = - 1\frac{5}{6} = - 1\frac{5}{6} \\ \hline 2\frac{3}{6} = 2\frac{1}{2} \end{array}$$

Complex Fractions [2.9]

A fraction that contains a fraction in its numerator or denominator is called a *complex fraction*.

$$14. \quad \begin{aligned} \frac{4 + \frac{1}{3}}{2 - \frac{5}{6}} &= \frac{6\left(4 + \frac{1}{3}\right)}{6\left(2 - \frac{5}{6}\right)} \\ &= \frac{6 \cdot 4 + 6 \cdot \frac{1}{3}}{6 \cdot 2 - 6 \cdot \frac{5}{6}} \\ &= \frac{24 + 2}{12 - 5} \\ &= \frac{26}{7} = 3\frac{5}{7} \end{aligned}$$

COMMON MISTAKES

1. The most common mistake when working with fractions occurs when we try to add two fractions without using a common denominator. For example,

$$\frac{2}{3} + \frac{4}{5} \neq \frac{2+4}{3+5}$$

If the two fractions we are trying to add don't have the same denominators, then we must rewrite each one as an equivalent fraction with a common denominator. *We never add denominators when adding fractions.*

Note: We do *not* need a common denominator when multiplying fractions.

2. A common mistake made with division of fractions occurs when we multiply by the reciprocal of the first fraction instead of the reciprocal of the divisor. For example,

$$\frac{2}{3} \div \frac{5}{6} \neq \frac{3}{2} \cdot \frac{5}{6}$$

Remember, we perform division by multiplying by the reciprocal of the divisor (the fraction to the right of the division symbol).

3. If the answer to a problem turns out to be a fraction, that fraction should always be written in lowest terms. It is a mistake not to reduce to lowest terms.
4. A common mistake when working with mixed numbers is to confuse mixed-number notation for multiplication of fractions. The notation $3\frac{2}{5}$ does *not* mean 3 *times* $\frac{2}{5}$. It means 3 *plus* $\frac{2}{5}$.
5. Another mistake occurs when multiplying mixed numbers. The mistake occurs when we don't change the mixed number to an improper fraction before multiplying and instead try to multiply the whole numbers and fractions separately. Like this:

$$\begin{aligned} 2\frac{1}{2} \cdot 3\frac{1}{3} &= (2 \cdot 3) + \left(\frac{1}{2} \cdot \frac{1}{3}\right) \quad \text{Mistake} \\ &= 6 + \frac{1}{6} \\ &= 6\frac{1}{6} \end{aligned}$$

Remember, the correct way to multiply mixed numbers is to first change to improper fractions and then multiply numerators and multiply denominators. This is correct:

$$2\frac{1}{2} \cdot 3\frac{1}{3} = \frac{5}{2} \cdot \frac{10}{3} = \frac{50}{6} = 8\frac{2}{6} = 8\frac{1}{3} \quad \text{Correct}$$

Chapter 2 Review

Reduce each of the following fractions to lowest terms. [2.2]

1. $\frac{6}{8}$

2. $\frac{12}{36}$

3. $\frac{110}{70}$

4. $\frac{45}{75}$

Multiply the following fractions. (That is, find the product in each case, and reduce to lowest terms.) [2.3]

5. $\frac{1}{5}(5)$

6. $\frac{80}{27}\left(\frac{3}{20}\right)$

7. $\frac{96}{25} \cdot \frac{15}{98} \cdot \frac{35}{54}$

8. $\frac{3}{5} \cdot 75 \cdot \frac{2}{3}$

Find the following quotients. (That is, divide and reduce to lowest terms.) [2.4]

9. $\frac{8}{9} \div \frac{4}{3}$

10. $\frac{9}{10} \div 3$

11. $\frac{15}{36} \div \frac{10}{9}$

12. $\frac{18}{49} \div \frac{36}{28}$

Perform the indicated operations. Reduce all answers to lowest terms. [2.5]

13. $\frac{6}{8} - \frac{2}{8}$

14. $\frac{9}{10} + \frac{11}{10}$

15. $3 + \frac{1}{2}$

16. $\frac{9}{52} + \frac{5}{78}$

17. $\frac{11}{126} - \frac{5}{84}$

18. $\frac{3}{10} + \frac{7}{25} + \frac{3}{4}$

Change to improper fractions. [2.6]

19. $3\frac{5}{8}$

20. $7\frac{2}{3}$

Change to mixed numbers. [2.6]

21. $\frac{15}{4}$

22. $\frac{110}{8}$

Perform the indicated operations. [2.7, 2.8]

23. $2 \div 3\frac{1}{4}$

24. $4\frac{7}{8} \div 2\frac{3}{5}$

25. $6 \cdot 2\frac{1}{2} \cdot \frac{4}{5}$

26. $3\frac{1}{5} + 4\frac{2}{5}$

27. $8\frac{2}{3} + 9\frac{1}{4}$

28. $5\frac{1}{3} - 2\frac{8}{9}$

Simplify each of the following as much as possible. [2.9]

29. $3 + 2\left(4\frac{1}{3}\right)$

30. $\left(2\frac{1}{2} + \frac{3}{4}\right)\left(2\frac{1}{2} - \frac{3}{4}\right)$

Simplify each complex fraction as much as possible. [2.9]

31. $\frac{1 + \frac{2}{3}}{1 - \frac{2}{3}}$

32. $\frac{3 - \frac{3}{4}}{3 + \frac{3}{4}}$

33. $\frac{\frac{7}{8} - \frac{1}{2}}{\frac{1}{4} + \frac{1}{2}}$

34. $\frac{2\frac{1}{8} + 3\frac{1}{3}}{1\frac{1}{6} + 5\frac{1}{4}}$

35. **Defective Parts** If $\frac{1}{10}$ of the items in a shipment of 200 items are defective, how many are defective? [2.3]

36. **Number of Students** If 80 students took a math test and $\frac{3}{4}$ of them passed, then how many students passed the test? [2.3]

37. **Translating** What is 3 times the sum of $2\frac{1}{4}$ and $\frac{3}{4}$? [2.9]

38. **Translating** Subtract $\frac{5}{6}$ from the product of $1\frac{1}{2}$ and $\frac{2}{3}$. [2.9]

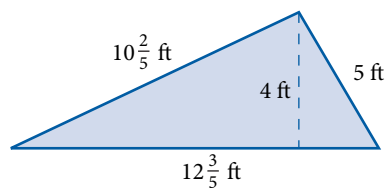
39. **Cooking** If a recipe that calls for $2\frac{1}{2}$ cups of flour will make 48 cookies, how much flour is needed to make 36 cookies? [2.7]

40. **Length of Wood** A piece of wood $10\frac{3}{4}$ inches long is divided into 6 equal pieces. How long is each piece? [2.7]

41. **Cooking** A recipe that calls for $3\frac{1}{2}$ tablespoons of oil is tripled. How much oil must be used in the tripled recipe? [2.7]

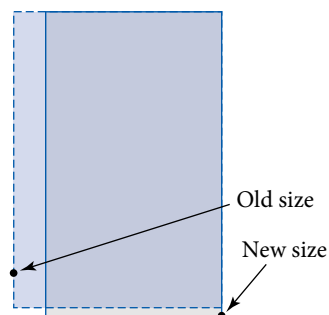
42. **Sheep Feed** A rancher fed his sheep $10\frac{1}{2}$ pounds of feed on Monday, $9\frac{3}{4}$ pounds on Tuesday, and $12\frac{1}{4}$ pounds on Wednesday. How many pounds of feed did he use on these 3 days? [2.8]

43. Find the area and the perimeter of the triangle below. [2.7, 2.8]



44. **Comparing Area** On April 3, 2000, *USA TODAY* changed the size of its paper. Previous to this date, each page of the paper was $13\frac{1}{2}$ inches wide and $22\frac{1}{4}$ inches long. The new paper size is $1\frac{1}{4}$ inches narrower and $\frac{1}{2}$ inch longer. [2.7, 2.8]

- What was the area of a page previous to April 3, 2000?
- What is the area of a page after April 3, 2000?
- What is the difference in the areas of the two page sizes?



Chapter 2 Cumulative Review

Simplify.

$$1. \begin{array}{r} 172 \\ 6,050 \\ + 95 \\ \hline \end{array}$$

$$3. \left(\frac{9}{13}\right)^2$$

$$5. \frac{5}{8} - \frac{3}{8}$$

$$7. \frac{2}{3} \cdot \frac{6}{11}$$

$$9. 4 \div \frac{1}{6}$$

$$11. \frac{92}{21}$$

$$13. 25^2$$

$$15. \frac{2}{3} + \frac{1}{4}$$

$$17. \frac{3}{12} \div \frac{9}{16}$$

$$19. 12 \cdot \frac{3}{4}$$

$$21. 2,639 - 365$$

$$23. \left(\frac{3}{5} + \frac{2}{25}\right) - \frac{4}{125}$$

$$2. \begin{array}{r} 4,320 \\ \times 17 \\ \hline \end{array}$$

$$4. 17 - (11 - 4)$$

$$6. 17\frac{13}{16} - 9\frac{5}{12}$$

$$8. 4^3 - 2^2$$

$$10. 196 \div 14 \div 7$$

$$12. \frac{180}{252}$$

$$14. (7 + 4) - (8 - 3)$$

$$16. 1,030(604)$$

$$18. 4 + 5^2 - 2 \cdot 6 + 3$$

$$20. \left(\frac{2}{3}\right)^2 \cdot \left(\frac{1}{2}\right)^3$$

$$22. \frac{7\frac{1}{9}}{2\frac{2}{3}}$$

$$24. 6 + \frac{3}{11} \div \frac{1}{2}$$

25. Round the following numbers to the nearest ten, then add.

$$\begin{array}{r} 747 \\ 116 \\ + 222 \\ \hline \end{array}$$

26. Find the sum of $\frac{2}{3}$, $\frac{1}{9}$, and $\frac{3}{4}$.

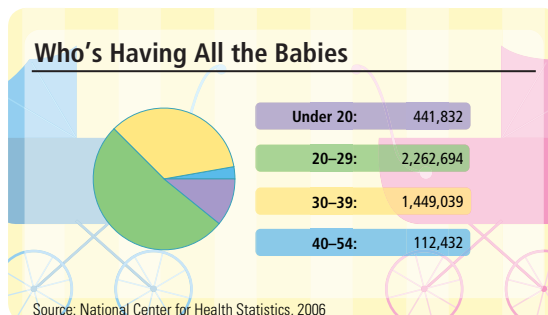
27. Write the fraction $\frac{3}{13}$ as an equivalent fraction with a denominator of $39x$.

28. Reduce $\frac{14}{49}$ to lowest terms.

29. Add $\frac{4}{5}$ to half of $\frac{4}{9}$.

30. **Neptune's Diameter** The planet Neptune has an equatorial diameter of about 30,760 miles. Write out Neptune's diameter in words and expanded form.

The chart shows the number of babies born to different age groups of women.



31. **Babies** How many babies were born to mothers between the ages of 30 and 54?

Chapter 2 Test

Perform the indicated operations. Reduce all answers to lowest terms.

1. $\frac{3}{10} + \frac{1}{10}$

2. $\frac{5}{8} - \frac{2}{8}$

3. $4 + \frac{3}{5}$

4. $\frac{3}{10} + \frac{2}{5}$

5. $\frac{5}{6} + \frac{2}{9} + \frac{1}{4}$

6. $7\frac{1}{3} + 2\frac{3}{8}$

7. $5\frac{1}{6} - 1\frac{1}{2}$

8. $6 - \frac{3}{5}$

9. $\frac{3}{5} - \frac{4}{15}$

10. $\frac{4}{9} + \frac{2}{3} - 1$

11. $\frac{9}{16} - \frac{1}{4}$

12. $2\frac{2}{3} - 1\frac{5}{6}$

13. $3\frac{1}{5} - \frac{7}{10}$

14. $\frac{7}{12} - \frac{1}{3}$

15. $2\frac{5}{8} - 2\frac{1}{4}$

16. $3\frac{2}{3} + \frac{5}{6}$

17. $4\frac{3}{5} + 2\frac{1}{15}$

18. $1\frac{8}{9} + 1\frac{7}{12} - \frac{3}{4}$

Simplify each of the following as much as possible.

19. $4 + 3\left(4\frac{1}{4}\right)$

20. $\left(2\frac{1}{3} + \frac{1}{2}\right)\left(3\frac{2}{3} - \frac{1}{6}\right)$

21. $\frac{\frac{11}{12} - \frac{2}{3}}{\frac{1}{6} + \frac{1}{3}}$

22. $5 - 2\left(1\frac{2}{3}\right)$

23. $\left(5\frac{1}{3} - \frac{5}{6}\right)\left(2\frac{1}{2} + \frac{1}{4}\right)$

24. $\left(\frac{9}{2}\right)^2 - \frac{7}{2}$

25. $\left(\frac{1}{3}\right)\left(2\frac{1}{2}\right) - \frac{2}{3}$

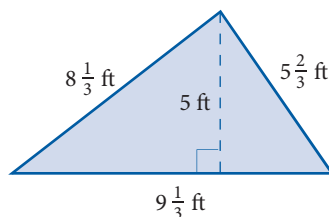
26. $\frac{4\frac{1}{6}}{1\frac{1}{9}}$

27. $\frac{\frac{8}{15}}{5\frac{1}{3}}$

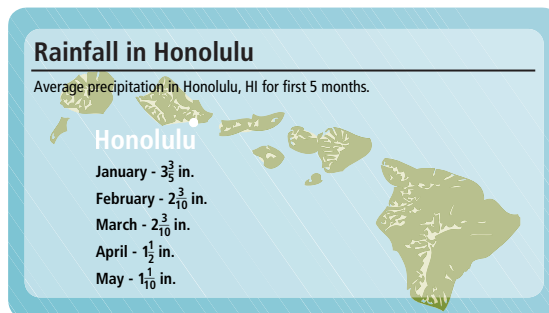
28. $\frac{\left(1\frac{7}{8} + \frac{3}{4}\right)}{\left(4\frac{1}{4} - \frac{1}{2}\right)}$

29. **Sewing** A dress that is $31\frac{1}{6}$ inches long is shortened by $3\frac{2}{3}$ inches. What is the new length of the dress?

30. Find the perimeter of the triangle below.



The chart shows the monthly average rainfall in Honolulu.



31. How much rain does Honolulu get during the first three months of the year?

Chapter 2 Projects

FRACTIONS AND MIXED NUMBERS

GROUP PROJECT

Recipe

Number of People 2

Time Needed 5 minutes

Equipment Pencil and paper

Background Here is Martha Stewart's recipe for chocolate chip cookies.

Chocolate Chip Cookies

Makes 2 dozen

You can substitute bittersweet chocolate for half of the semisweet chocolate chips.

1 cup (2 sticks) unsalted butter, room temperature

1 1/2 cups packed light-brown sugar

1/2 cup granulated sugar

1 teaspoon pure vanilla extract

1 large egg, room temperature

2 cups all-purpose flour

1/2 teaspoon baking soda

1/2 teaspoon salt

12 ounces semisweet chocolate, coarsely chopped, or one 12-ounce bag semisweet chocolate chips

Procedure Rewrite the recipe to make 3 dozen cookies by multiplying the quantities by $1\frac{1}{2}$.

_____ cups (_____ sticks) unsalted butter, room temperature

_____ cups packed light-brown sugar

_____ cups granulated sugar

_____ teaspoons pure vanilla extract

1. Heat oven to 375°. Line several baking sheets with parchment paper, and set aside.

2. Combine butter and both sugars in the bowl of an electric mixer fitted with the paddle attachment, and beat until light and fluffy. Add vanilla, and mix to combine. Add egg, and continue beating until well combined.

3. In a medium bowl, whisk together the flour, baking soda, and salt. Slowly add the dry ingredients to the butter mixture. Mix on low speed until just combined. Stir in chocolate chips.

4. Scoop out 2 tablespoons of dough, and place on a prepared baking sheet. Repeat with remaining dough, placing scoops 3 inches apart. Bake until just brown around the edges, 16 to 18 minutes, rotating the pans between the oven shelves halfway through baking. Remove from the oven, and let cool slightly before removing cookies from the baking sheets. Store in an airtight container at room temperature for up to 1 week.

_____ large eggs, room temperature

_____ cups all-purpose flour

_____ teaspoons baking soda

_____ teaspoons salt

_____ ounces semisweet chocolate, coarsely chopped, or _____ 12-ounce bags semisweet chocolate chips

RESEARCH PROJECT

Sophie Germain

The photograph at the right shows the street sign in Paris named for the French mathematician Sophie Germain (1776-1831). Among her contributions to mathematics is her work with prime numbers. In this chapter we had an introductory look at some of the classifications for numbers, including the prime numbers. Within the prime numbers themselves, there are still further classifications. In fact, a Sophie Germain prime is a prime number P , for which both P and $2P + 1$ are primes. For example, the prime number 2 is the first Sophie Germain prime because both 2 and $2 \cdot 2 + 1 = 5$ are prime numbers. The next Germain prime is 3 because both 3 and $2 \cdot 3 + 1 = 7$ are primes.

Sophie Germain was born on April 1, 1776, in Paris, France. She taught herself mathematics by reading the books in her father's library at home. Today she is recognized most for her work in number theory, which includes her work with prime numbers. Research the life of Sophie Germain. Write a short essay that includes information on her work with prime numbers and how her results contributed to solving Fermat's Theorem almost 200 years later.



Cheryl Slaughter

A Glimpse of Algebra

In algebra, we add and subtract fractions in the same way that we have added and subtracted fractions in this chapter. For example, consider the expression

$$\frac{x}{3} + \frac{2}{3}$$

The two fractions have the same denominator. So to add these fractions, all we have to do is add the numerators to get $x + 2$. The denominator of the sum is the common denominator 3:

$$\frac{x}{3} + \frac{2}{3} = \frac{x+2}{3}$$

Here are some further examples.

EXAMPLE 1

Add or subtract as indicated.

a. $\frac{x}{5} + \frac{4}{5}$ b. $\frac{x+5}{8} - \frac{3}{8}$ c. $\frac{4x}{10} + \frac{3x}{10}$ d. $\frac{5}{x} + \frac{3}{x}$

SOLUTION In each case the denominators are the same. We add or subtract the numerators and write the sum or difference over the common denominator.

a. $\frac{x}{5} + \frac{4}{5} = \frac{x+4}{5}$

b. $\frac{x+5}{8} - \frac{3}{8} = \frac{x+5-3}{8} = \frac{x+2}{8}$

c. $\frac{4x}{10} + \frac{3x}{10} = \frac{4x+3x}{10} = \frac{7x}{10}$

d. $\frac{5}{x} + \frac{3}{x} = \frac{5+3}{x} = \frac{8}{x}$

To add or subtract fractions that do not have the same denominator, we must first find the LCD. We then change each fraction to an equivalent fraction that has the LCD for its denominator. Finally, when all that has been done, we add or subtract the numerators and put the result over the common denominator.

EXAMPLE 2

Add: $\frac{x}{3} + \frac{1}{2}$

SOLUTION The LCD for 3 and 2 is 6. We multiply the numerator and the denominator of the first fraction by 2, and the numerator and the denominator of the second fraction by 3, to change each fraction to an equivalent fraction with the LCD for a denominator. We then add the numerators as usual. Here is how it looks:

$$\frac{x}{3} + \frac{1}{2} = \frac{x \cdot 2}{3 \cdot 2} + \frac{1 \cdot 3}{2 \cdot 3}$$

Change to equivalent fractions. Also, $x \cdot 2$ is the same as $2x$, because multiplication is commutative.

$$= \frac{2x}{6} + \frac{3}{6}$$

$$= \frac{2x+3}{6}$$

Add the numerators

PRACTICE PROBLEMS

1. Add or subtract as indicated:

a. $\frac{x}{6} + \frac{5}{6}$

b. $\frac{x+3}{7} - \frac{1}{7}$

c. $\frac{9x}{4} + \frac{4x}{4}$

d. $\frac{9}{x} + \frac{3}{x}$

Note

Remember, the LCD is the least common denominator. It is the smallest expression that is divisible by each of the denominators.

2. Add: $\frac{x}{3} + \frac{1}{5}$

Answers

1. a. $\frac{x+5}{6}$ b. $\frac{x+2}{7}$ c. $\frac{13x}{4}$ d. $\frac{12}{x}$

2. $\frac{5x+3}{15}$

3. Add: $\frac{5}{x} + \frac{2}{3}$

Note

In Examples 3 and 4, it is understood that x cannot be 0. Do you know why?

4. Add: $\frac{1}{2} + \frac{3}{x} + \frac{1}{5}$

5. Add or subtract as indicated.

a. $3 + \frac{x}{8}$

b. $1 - \frac{a}{4}$

c. $6 + \frac{2}{x}$

d. $x + \frac{2}{3}$

Answers

3. $\frac{15 + 2x}{3x}$ 4. $\frac{7x + 30}{10x}$

5. a. $\frac{24 + x}{8}$ b. $\frac{4 - a}{4}$

c. $\frac{6x + 2}{x}$ d. $\frac{3x + 2}{3}$

EXAMPLE 3

Add: $\frac{4}{x} + \frac{2}{3}$

SOLUTION The LCD for x and 3 is $3x$. We multiply the numerator and the denominator of the first fraction by 3, and the numerator and the denominator of the second fraction by x , to get two fractions with the same denominator. We then add the numerators:

$$\begin{aligned} \frac{4}{x} + \frac{2}{3} &= \frac{4 \cdot 3}{x \cdot 3} + \frac{2 \cdot x}{3 \cdot x} && \text{Change to equivalent fractions} \\ &= \frac{12}{3x} + \frac{2x}{3x} \\ &= \frac{12 + 2x}{3x} && \text{Add the numerators} \end{aligned}$$

EXAMPLE 4

Add: $\frac{1}{2} + \frac{5}{x} + \frac{1}{3}$

SOLUTION The LCD for 2, x , and 3 is $6x$.

$$\begin{aligned} \frac{1}{2} + \frac{5}{x} + \frac{1}{3} &= \frac{1 \cdot 3x}{2 \cdot 3x} + \frac{5 \cdot 6}{x \cdot 6} + \frac{1 \cdot 2x}{3 \cdot 2x} && \text{Change to equivalent fractions} \\ &= \frac{3x}{6x} + \frac{30}{6x} + \frac{2x}{6x} \\ &= \frac{5x + 30}{6x} && \text{Add the numerators} \end{aligned}$$

In this chapter we changed mixed numbers to improper fractions. For example, the mixed number $3\frac{4}{5}$ can be changed to an improper fraction as follows:

$$3\frac{4}{5} = 3 + \frac{4}{5} = \frac{3 \cdot 5}{1 \cdot 5} + \frac{4}{5} = \frac{15}{5} + \frac{4}{5} = \frac{19}{5}$$

A similar kind of problem in algebra would be to add 2 and $\frac{x}{8}$.

EXAMPLE 5

Add or subtract as indicated.

a. $2 + \frac{x}{8}$ b. $1 - \frac{a}{2}$ c. $5 + \frac{3}{x}$ d. $x + \frac{3}{5}$

SOLUTION We can think of each whole number and the letter x in part (d) as a fraction with denominator 1. In each case we multiply the numerator and the denominator of the first number by the denominator of the fraction.

$$\begin{aligned} \text{a. } 2 + \frac{x}{8} &= \frac{2 \cdot 8}{1 \cdot 8} + \frac{x}{8} = \frac{16}{8} + \frac{x}{8} = \frac{16 + x}{8} \\ \text{b. } 1 - \frac{a}{2} &= \frac{1 \cdot 2}{1 \cdot 2} - \frac{a}{2} = \frac{2}{2} - \frac{a}{2} = \frac{2 - a}{2} \\ \text{c. } 5 + \frac{3}{x} &= \frac{5 \cdot x}{1 \cdot x} + \frac{3}{x} = \frac{5x}{x} + \frac{3}{x} = \frac{5x + 3}{x} \\ \text{d. } x + \frac{3}{5} &= \frac{x \cdot 5}{x \cdot 5} + \frac{3}{5} = \frac{5x}{5} + \frac{3}{5} = \frac{5x + 3}{5} \end{aligned}$$

A Glimpse of Algebra Problems

Add or subtract as indicated.

1. $\frac{x}{4} + \frac{3}{4}$

2. $\frac{x}{8} - \frac{5}{8}$

3. $\frac{x+6}{5} - \frac{4}{5}$

4. $\frac{x+1}{3} + \frac{2}{3}$

5. $\frac{5x}{8} + \frac{2x}{8}$

6. $\frac{9x}{7} - \frac{3x}{7}$

7. $\frac{6}{x} - \frac{4}{x}$

8. $\frac{3}{x} + \frac{7}{x}$

For each sum or difference, find the LCD, change to equivalent fractions, and then add or subtract numerators as indicated.

9. $\frac{x}{2} + \frac{1}{3}$

10. $\frac{x}{6} - \frac{3}{4}$

11. $\frac{x}{2} - \frac{1}{4}$

12. $\frac{x}{3} - \frac{1}{6}$

13. $\frac{3}{x} + \frac{3}{4}$

14. $\frac{2}{x} - \frac{1}{3}$

15. $\frac{4}{5} - \frac{1}{x}$

16. $\frac{3}{4} - \frac{1}{x}$

17. $\frac{1}{3} + \frac{2}{x} + \frac{1}{4}$

18. $\frac{1}{5} + \frac{1}{x} + \frac{1}{3}$

19. $\frac{1}{2} + \frac{1}{x} + \frac{1}{4}$

20. $\frac{1}{3} + \frac{1}{x} + \frac{1}{6}$

Add or subtract as indicated.

21. $3 + \frac{x}{4}$

22. $2 + \frac{x}{7}$

23. $5 - \frac{x}{2}$

24. $6 - \frac{x}{8}$

25. $4 - \frac{a}{7}$

26. $6 - \frac{a}{4}$

27. $1 + \frac{2a}{5}$

28. $3 + \frac{4a}{9}$

29. $8 + \frac{3}{x}$

30. $7 + \frac{9}{x}$

31. $2 - \frac{5}{x}$

32. $3 - \frac{1}{x}$

33. $x + \frac{3}{4}$

34. $x + \frac{5}{6}$

35. $x + \frac{2x}{9}$

36. $x + \frac{3x}{5}$

37. $a - \frac{4a}{7}$

38. $a - \frac{3a}{5}$

39. $2x - \frac{3x}{4}$

40. $3x - \frac{2x}{5}$

Decimals

3



Chapter Outline

- 3.1 Decimal Notation and Place Value
- 3.2 Addition and Subtraction with Decimals
- 3.3 Multiplication with Decimals; Circumference and Area of a Circle
- 3.4 Division with Decimals
- 3.5 Fractions and Decimals, and the Volume of a Sphere

Introduction

The 2000 Summer Olympic Games in Sydney, Australia, featured more than 10,000 athletes competing from 199 countries. The image above shows many of the venues as they appeared in Google Earth in 2008, almost eight years after the 2000 Olympics. The chart below shows the top four finishes in the 400-meter Freestyle swimming event in Sydney.

400-meter Freestyle Swimming
Final times for the 400-meter freestyle swim

Ian Thorpe	3:40.59
Massimiliano Rosolino	3:43.40
Klete Keller	3:47.00
Emiliano Brembilla	3:47.01

Source: espn.com

The times in the chart are in minutes and seconds, accurate to the nearest hundredth of a second. In this chapter we work with numbers like these to obtain a good working knowledge of the decimal numbers we see everywhere around us.

Chapter Pretest

The pretest below contains problems that are representative of the problems you will find in the chapter.

1. Write the number 4.013 in words.
2. Write 12.09 as a mixed number.
3. Write *thirty-four hundredths* as a decimal number.
4. Write $\frac{21}{50}$ as a decimal.
5. Write the following numbers in order from smallest to largest.
0.04, 0.4, 0.51, 0.5, 0.45, 0.41
6. Change 0.85 to a fraction, and then reduce to lowest terms.

Perform the indicated operations.

7. $7.36 + 8.05$
8. $20.3 - 15.09$
9. 3.6×2.7
10. $56.78(10)$
11. $32 \overline{)131.84}$
12. $1.04 \div 0.12$

Getting Ready for Chapter 3

The problems below review material covered previously that you need to know in order to be successful in Chapter 3. If you have any difficulty with the problems here, you need to go back and review before going on to Chapter 3.

Simplify.

1. $25,430 + 2,897 + 379,600$
2. $39,812 - 14,236$
3. $2,000 - 1,564$
4. $800 - 137$
5. 305×436
6. $13(56)$
7. $480 + 12(32)^2$
8. $384 \div 4$
9. $49,896 \div 27$
10. $5,974 \div 20$
11. $5^2 + 7^2$
12. $\left(\frac{1}{4}\right)^2$
13. $\frac{3}{4}\left(\frac{2}{5}\right)$
14. $\frac{1}{2}\left(2\frac{5}{8}\right)\left(1\frac{1}{4}\right)$
15. Round 9,235 to the nearest hundred.
16. Reduce: $\frac{38}{100}$

Factor into a product of prime factors.

17. 48
18. 180

Decimal Notation and Place Value

3.1

Introduction . . .

In this chapter we will focus our attention on *decimals*. Anyone who has used money in the United States has worked with decimals already. For example, if you have been paid an hourly wage, such as

\$6.25 per hour
 ↑
 Decimal point



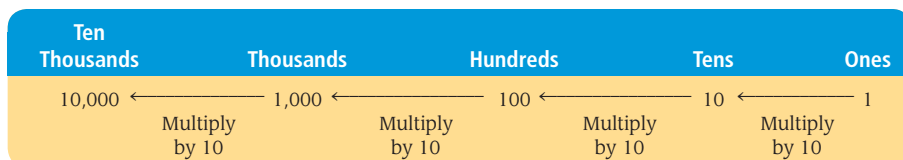
you have had experience with decimals. What is interesting and useful about decimals is their relationship to fractions and to powers of ten. The work we have done up to now—especially our work with fractions—can be used to develop the properties of decimal numbers.

A Place Value

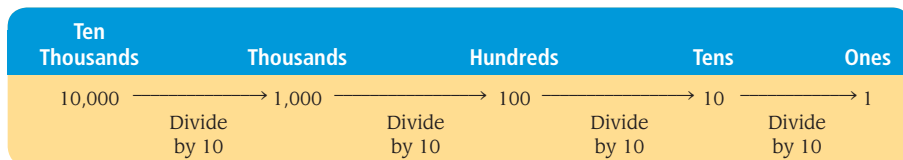
In Chapter 1 we developed the idea of place value for the digits in a whole number. At that time we gave the name and the place value of each of the first seven columns in our number system, as follows:

Millions Column	Hundred Thousands Column	Ten Thousands Column	Thousands Column	Hundreds Column	Tens Column	Ones Column
1,000,000	100,000	10,000	1,000	100	10	1

As we move from right to left, we multiply by 10 each time. The value of each column is 10 times the value of the column on its right, with the rightmost column being 1. Up until now we have always looked at place value as increasing by a factor of 10 each time we move one column to the left:



To understand the idea behind decimal numbers, we notice that moving in the opposite direction, from left to right, we *divide* by 10 each time:



If we keep going to the right, the next column will have to be

$$1 \div 10 = \frac{1}{10} \quad \text{Tenths}$$

The next one after that will be

$$\frac{1}{10} \div 10 = \frac{1}{10} \cdot \frac{1}{10} = \frac{1}{100} \quad \text{Hundredths}$$

Objectives

- A** Understand place value for decimal numbers.
- B** Write decimal numbers in words and with digits.
- C** Convert decimals to fractions and fractions to decimals.
- D** Round a decimal number.
- E** Solve applications involving decimals.

After that, we have

$$\frac{1}{100} \div 10 = \frac{1}{100} \cdot \frac{1}{10} = \frac{1}{1,000} \quad \text{Thousandths}$$

We could continue this pattern as long as we wanted. We simply divide by 10 to move one column to the right. (And remember, dividing by 10 gives the same result as multiplying by $\frac{1}{10}$.)

To show where the ones column is, we use a *decimal point* between the ones column and the tenths column.



Note Because the digits to the right of the decimal point have fractional place values, numbers with digits to the right of the decimal point are called decimal fractions. In this book we will also call them decimal numbers, or simply decimals for short.

Thousands	Hundreds	Tens	Ones	Tenths	Hundredths	Thousandths	Ten Thousandths	Hundred Thousandths
1,000	100	10	1	$\frac{1}{10}$	$\frac{1}{100}$	$\frac{1}{1,000}$	$\frac{1}{10,000}$	$\frac{1}{100,000}$

↑
Decimal point

The ones column can be thought of as the middle column, with columns larger than 1 to the left and columns smaller than 1 to the right. The first column to the right of the ones column is the tenths column, the next column to the right is the hundredths column, the next is the thousandths column, and so on. The decimal point is always written between the ones column and the tenths column.

We can use the place value of decimal fractions to write them in expanded form.

EXAMPLE 1

Write 423.576 in expanded form.

SOLUTION $423.576 = 400 + 20 + 3 + \frac{5}{10} + \frac{7}{100} + \frac{6}{1,000}$

B Writing Decimals with Words

EXAMPLE 2

Write each number in words.

- a. 0.4
- b. 0.04
- c. 0.004

SOLUTION a. 0.4 is “four tenths.”
 b. 0.04 is “four hundredths.”
 c. 0.004 is “four thousandths.”

When a decimal fraction contains digits to the left of the decimal point, we use the word “and” to indicate where the decimal point is when writing the number in words.

EXAMPLE 3

Write each number in words.

- a. 5.4
- b. 5.04
- c. 5.004

SOLUTION a. 5.4 is “five and four tenths.”
 b. 5.04 is “five and four hundredths.”
 c. 5.004 is “five and four thousandths.”

PRACTICE PROBLEMS

- Write 785.462 in expanded form.
- Write in words.
 - a. 0.06
 - b. 0.7
 - c. 0.008
- Write in words.
 - a. 5.06
 - b. 4.7
 - c. 3.008



Note Sometimes we name decimal fractions by simply reading the digits from left to right and using the word “point” to indicate where the decimal point is. For example, using this method the number 5.04 is read “five point zero four.”

Answers

1–3. See solutions section.

EXAMPLE 4 Write 3.64 in words.

SOLUTION The number 3.64 is read “three and sixty-four hundredths.” The place values of the digits are as follows:

$$\begin{array}{ccc} 3 & . & 6 & 4 \\ \uparrow & & \uparrow & \swarrow \\ 3 \text{ ones} & & 6 \text{ tenths} & 4 \text{ hundredths} \end{array}$$

We read the decimal part as “sixty-four hundredths” because

$$6 \text{ tenths} + 4 \text{ hundredths} = \frac{6}{10} + \frac{4}{100} = \frac{60}{100} + \frac{4}{100} = \frac{64}{100}$$

EXAMPLE 5 Write 25.4936 in words.

SOLUTION Using the idea given in Example 4, we write 25.4936 in words as “twenty-five and four thousand, nine hundred thirty-six ten thousandths.”

C Converting Between Fractions and Decimals

In order to understand addition and subtraction of decimals in the next section, we need to be able to convert decimal numbers to fractions or mixed numbers.

EXAMPLE 6 Write each number as a fraction or a mixed number. Do not reduce to lowest terms.

- a. 0.004 b. 3.64 c. 25.4936

SOLUTION a. Because 0.004 is 4 thousandths, we write

$$\begin{array}{ccc} 0.004 = \frac{4}{1,000} \\ \uparrow & & \swarrow \\ \text{Three digits after} & & \text{Three zeros} \\ \text{the decimal point} & & \end{array}$$

b. Looking over the work in Example 4, we can write

$$\begin{array}{ccc} 3.64 = 3\frac{64}{100} \\ \uparrow & & \swarrow \\ \text{Two digits after} & & \text{Two zeros} \\ \text{the decimal point} & & \end{array}$$

c. From the way in which we wrote 25.4936 in words in Example 5, we have

$$\begin{array}{ccc} 25.4936 = 25\frac{4936}{10,000} \\ \uparrow & & \swarrow \\ \text{Four digits after} & & \text{Four zeros} \\ \text{the decimal point} & & \end{array}$$

D Rounding Decimal Numbers

The rule for rounding decimal numbers is similar to the rule for rounding whole numbers. If the digit in the column to the right of the one we are rounding to is 5 or more, we add 1 to the digit in the column we are rounding to; otherwise, we leave it alone. We then replace all digits to the right of the column we are rounding to with zeros if they are to the left of the decimal point; otherwise, we simply delete them. Table 1 illustrates the procedure.

4. Write in words.
a. 5.98
b. 5.098

5. Write 305.406 in words.

6. Write each number as a fraction or a mixed number. Do not reduce to lowest terms.
a. 0.06
b. 5.98
c. 305.406

Answers

4–5. See solutions section.

6. a. $\frac{6}{100}$ b. $5\frac{98}{100}$ c. $305\frac{406}{1,000}$

TABLE 1

Number	Rounded to the Nearest		
	Whole Number	Tenth	Hundredth
24.785	25	24.8	24.79
2.3914	2	2.4	2.39
0.98243	1	1.0	0.98
14.0942	14	14.1	14.09
0.545	1	0.5	0.55

7. Round 8,935.042 to the nearest:
 a. hundred
 b. hundredth

8. Round 0.05067 to the nearest:
 a. ten thousandth
 b. tenth

9. Round each number in the bar chart to the nearest tenth of a dollar

EXAMPLE 7

Round 9,235.492 to the nearest hundred.

SOLUTION The number next to the hundreds column is 3, which is less than 5. We change all digits to the right to 0, and we can drop all digits to the right of the decimal point, so we write

9,200

EXAMPLE 8

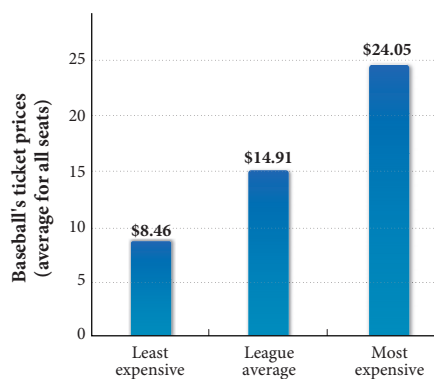
Round 0.00346 to the nearest ten thousandth.

SOLUTION Because the number to the right of the ten thousandths column is more than 5, we add 1 to the 4 and get

0.0035

E Applications with Decimals**EXAMPLE 9**

The bar chart below shows some ticket prices for a recent major league baseball season. Round each ticket price to the nearest dollar.



SOLUTION Using our rule for rounding decimal numbers, we have the following results:

Least expensive: \$8.46 rounds to \$8

League average: \$14.91 rounds to \$15

Most expensive: \$24.05 rounds to \$24

Getting Ready for Class

After reading through the preceding section, respond in your own words and in complete sentences.

- Write 754.326 in expanded form.
- Write $400 + 70 + 5 + \frac{1}{10} + \frac{3}{100} + \frac{7}{1,000}$ in decimal form.
- Write seventy-two and three tenths in decimal form.

Answers

7. a. 8,900 b. 8,935.04
 8. a. 0.0507 b. 0.1
 9. Least expensive, \$8.50; league average, \$14.90; most expensive, \$24.10

Problem Set 3.1

B Write out the name of each number in words. [Examples 2–5]

1. 0.3
2. 0.03
3. 0.015
4. 0.0015
5. 3.4
6. 2.04
7. 52.7
8. 46.8

C Write each number as a fraction or a mixed number. Do not reduce your answers. [Example 6]

9. 405.36
10. 362.78
11. 9.009
12. 60.06
13. 1.234
14. 12.045
15. 0.00305
16. 2.00106

A Give the place value of the 5 in each of the following numbers. [Examples 2–5]

17. 458.327
18. 327.458
19. 29.52
20. 25.92
21. 0.00375
22. 0.00532
23. 275.01
24. 0.356
25. 539.76
26. 0.123456

B Write each of the following as a decimal number.

27. Fifty-five hundredths
28. Two hundred thirty-five ten thousandths
29. Six and nine tenths
30. Forty-five thousand and six hundred twenty-one thousandths
31. Eleven and eleven hundredths
32. Twenty-six thousand, two hundred forty-five and sixteen hundredths
33. One hundred and two hundredths
34. Seventy-five and seventy-five hundred thousandths
35. Three thousand and three thousandths
36. One thousand, one hundred eleven and one hundred eleven thousandths

For each pair of numbers, place the correct symbol, $<$ or $>$, between the numbers.

37. a. 0.02 0.2
b. 0.3 0.032

38. a. 0.45 0.5
b. 0.5 0.56

39. Write the following numbers in order from smallest to largest.
 0.02 0.05 0.025 0.052 0.005 0.002

40. Write the following numbers in order from smallest to largest.
 0.2 0.02 0.4 0.04 0.42 0.24

41. Which of the following numbers will round to 7.5?
 7.451 7.449 7.54 7.56

42. Which of the following numbers will round to 3.2?
 3.14999 3.24999 3.279 3.16111

C Change each decimal to a fraction, and then reduce to lowest terms.

43. 0.25

44. 0.75

45. 0.125

46. 0.375

47. 0.625

48. 0.0625

49. 0.875

50. 0.1875

Estimating For each pair of numbers, choose the number that is closest to 10.

51. 9.9 and 9.99

52. 8.5 and 8.05

53. 10.5 and 10.05

54. 10.9 and 10.99

Estimating For each pair of numbers, choose the number that is closest to 0.

55. 0.5 and 0.05

56. 0.10 and 0.05

57. 0.01 and 0.02

58. 0.1 and 0.01

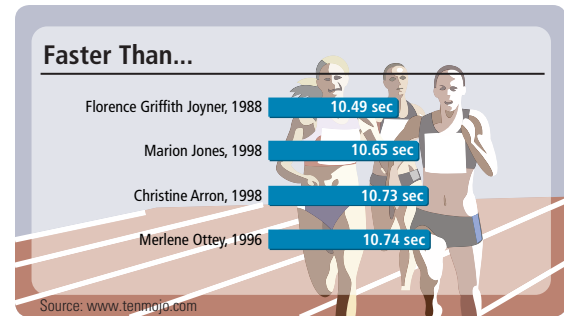
D Complete the following table. [Examples 7, 8]

Number	Rounded to the Nearest			
	Whole Number	Tenth	Hundredth	Thousandth
59. 47.5479	_____	_____	_____	_____
60. 100.9256	_____	_____	_____	_____
61. 0.8175	_____	_____	_____	_____
62. 29.9876	_____	_____	_____	_____
63. 0.1562	_____	_____	_____	_____
64. 128.9115	_____	_____	_____	_____
65. 2,789.3241	_____	_____	_____	_____
66. 0.8743	_____	_____	_____	_____
67. 99.9999	_____	_____	_____	_____
68. 71.7634	_____	_____	_____	_____

E Applying the Concepts [Example 9]

100 Meters At the 1928 Olympic Games in Amsterdam, the winning time for the women's 100 meters was 12.2 seconds. Since then, the time has continued to get faster. The chart shows the fastest times for the women's 100 meters in competition. Use the chart to answer Problems 69 and 70.

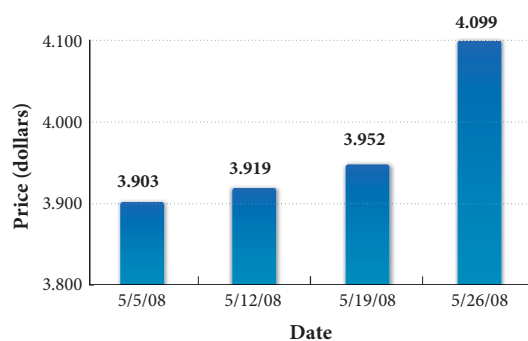
69. What is the place value of the 3 in Christine Arron's time in 1998?



70. Write Christine Arron's time using words.

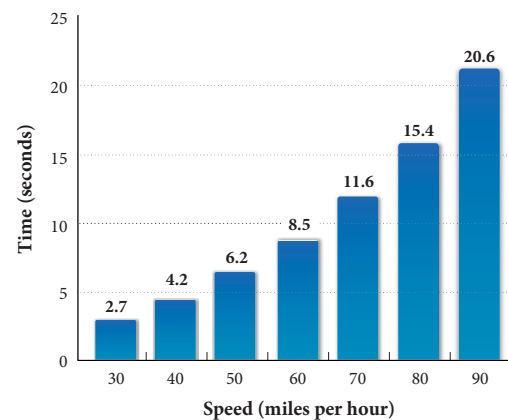
71. **Gasoline Prices** The bar chart below was created from a survey by the U.S. Department of Energy's Energy Information Administration during the month of May 2008. It gives the average price of regular gasoline for the state of California on each Monday of the month. Use the information in the chart to fill in the table.

PRICE OF 1 GALLON OF REGULAR GASOLINE	
Date	Price (Dollars)
5/5/08	
5/12/08	
5/19/08	
5/26/08	




72. **Speed and Time** The bar chart below was created from data given by *Car and Driver* magazine. It gives the minimum time in seconds for a Toyota Echo to reach various speeds from a complete stop. Use the information in the chart to fill in the table.

Speed (Miles per Hour)	Time (Seconds)
30	
40	
50	
60	
70	
80	
90	




73. Penny Weight If you have a penny dated anytime from 1959 through 1982, its original weight was 3.11 grams. If the penny has a date of 1983 or later, the original weight was 2.5 grams. Write the two weights in words.



1959-1982

1983 - present

74. Halley's Comet Halley's comet was seen from the earth during 1986. It will be another 76.1 years before it returns. Write 76.1 in words.



NASA

75. Nutrition A 50-gram egg contains 0.15 milligram of riboflavin. Write 0.15 in words.

76. Nutrition One medium banana contains 0.64 milligram of B₆. Write 0.64 in words.

Getting Ready for the Next Section

In the next section we will do addition and subtraction with decimals. To understand the process of addition and subtraction, we need to understand the process of addition and subtraction with mixed numbers.

Find each of the following sums and differences. (Add or subtract.)

$$77. 4\frac{3}{10} + 2\frac{1}{100}$$

$$78. 5\frac{35}{100} + 2\frac{3}{10}$$

$$79. 8\frac{5}{10} - 2\frac{4}{100}$$

$$80. 6\frac{3}{100} - 2\frac{125}{1,000}$$

$$81. 5\frac{1}{10} + 6\frac{2}{100} + 7\frac{3}{1,000}$$

$$82. 4\frac{3}{1,000} + 6\frac{3}{10} + 7\frac{123}{1,000}$$

Maintaining Your Skills

Write the fractions in order from smallest to largest.

$$83. \frac{3}{8} \quad \frac{3}{16} \quad \frac{3}{4} \quad \frac{3}{10}$$

$$84. \frac{3}{4} \quad \frac{1}{4} \quad \frac{5}{4} \quad \frac{1}{2}$$

Place the correct inequality symbol, < or > between each pair of numbers.

$$85. \frac{3}{8} \quad \frac{5}{6}$$

$$86. \frac{9}{10} \quad \frac{10}{11}$$

$$87. \frac{1}{12} \quad \frac{1}{13}$$

$$88. \frac{3}{4} \quad \frac{5}{8}$$

Addition and Subtraction with Decimals

3.2

Introduction . . .

The chart shows the top finishing times for the women's 400-meter race during the Sydney Olympics in 2000. In order to analyze the different finishing times, it is important that you are able to add and subtract decimals, and that is what we will cover in this section.

Sydney Olympics
The chart shows the top finishing times for the women's 400-meter race during the Sydney Olympics.

Cathy Freeman	49.11
Lorraine Graham	49.58
Katharine Merry	49.72
Donna Fraser	49.79

Source: espn.com

Objectives

- A** Add and subtract decimals.
- B** Solve applications involving addition and subtraction of decimals.

A Combining Decimals

Suppose you are earning \$8.50 an hour and you receive a raise of \$1.25 an hour. Your new hourly rate of pay is

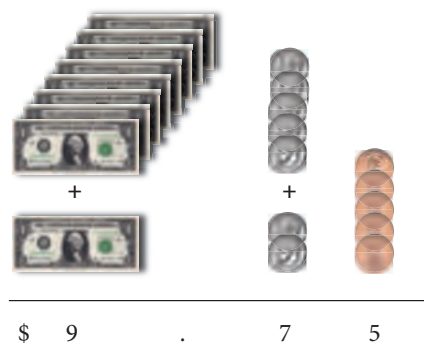
$$\begin{array}{r} \$8.50 \\ + \$1.25 \\ \hline \$9.75 \end{array}$$

To add the two rates of pay, we align the decimal points, and then add in columns.

To see why this is true in general, we can use mixed-number notation:

$$\begin{array}{r} 8.50 = 8\frac{50}{100} \\ + 1.25 = 1\frac{25}{100} \\ \hline 9\frac{75}{100} = 9.75 \end{array}$$

We can visualize the mathematics above by thinking in terms of money:



PRACTICE PROBLEMS

1. Change each decimal to a fraction, and then add. Write your answer as a decimal.
- a. $38.45 + 456.073$
 b. $38.045 + 456.73$

2. Subtract: $78.674 - 23.431$

3. Add: $16 + 0.033 + 4.6 + 0.08$

Answers

1. a. 494.523 b. 494.775
 2. 55.243 3. 20.713

Chapter 3 Decimals

EXAMPLE 1

Add by first changing to fractions: $25.43 + 2.897 + 379.6$

SOLUTION We first change each decimal to a mixed number. We then write each fraction using the least common denominator and add as usual:

$$\begin{array}{r} 25.43 = 25\frac{43}{100} = 25\frac{430}{1,000} \\ 2.897 = 2\frac{897}{1,000} = 2\frac{897}{1,000} \\ + 379.6 = 379\frac{6}{10} = 379\frac{600}{1,000} \\ \hline 406\frac{1,927}{1,000} = 407\frac{927}{1,000} = 407.927 \end{array}$$

Again, the result is the same if we just line up the decimal points and add as if we were adding whole numbers:

$$\begin{array}{r} 25.430 \\ 2.897 \\ + 379.600 \\ \hline 407.927 \end{array}$$

Notice that we can fill in zeros on the right to help keep the numbers in the correct columns. Doing this does not change the value of any of the numbers.

Note: The decimal point in the answer is directly below the decimal points in the problem

The same thing would happen if we were to subtract two decimal numbers. We can use these facts to write a rule for addition and subtraction of decimal numbers.

Rule

To add (or subtract) decimal numbers, we line up the decimal points and add (or subtract) as usual. The decimal point in the result is written directly below the decimal points in the problem.

We will use this rule for the rest of the examples in this section.

EXAMPLE 2

Subtract: $39.812 - 14.236$

SOLUTION We write the numbers vertically, with the decimal points lined up, and subtract as usual.

$$\begin{array}{r} 39.812 \\ - 14.236 \\ \hline 25.576 \end{array}$$

EXAMPLE 3

Add: $8 + 0.002 + 3.1 + 0.04$

SOLUTION To make sure we keep the digits in the correct columns, we can write zeros to the right of the rightmost digits.

$$\begin{array}{r} 8 = 8.000 \\ 3.1 = 3.100 \\ 0.04 = 0.040 \end{array}$$

Writing the extra zeros here is really equivalent to finding a common denominator for the fractional parts of the original four numbers—now we have a thousandths column in all the numbers

This doesn't change the value of any of the numbers, and it makes our task easier. Now we have

$$\begin{array}{r} 8.000 \\ 0.002 \\ 3.100 \\ + 0.040 \\ \hline 11.142 \end{array}$$

EXAMPLE 4Subtract: $5.9 - 3.0814$

SOLUTION In this case it is very helpful to write 5.9 as 5.9000, since we will have to borrow in order to subtract.

$$\begin{array}{r} 5.9000 \\ - 3.0814 \\ \hline 2.8186 \end{array}$$

EXAMPLE 5

Subtract 3.09 from the sum of 9 and 5.472.

SOLUTION Writing the problem in symbols, we have

$$\begin{aligned} (9 + 5.472) - 3.09 &= 14.472 - 3.09 \\ &= 11.382 \end{aligned}$$

B Applications**EXAMPLE 6**

While I was writing this section of the book, I stopped to have lunch with a friend at a coffee shop near my office. The bill for lunch was \$15.64. I gave the person at the cash register a \$20 bill. For change, I received four \$1 bills, a quarter, a nickel, and a penny. Was my change correct?

SOLUTION To find the total amount of money I received in change, we add:

$$\begin{array}{r} \text{Four } \$1 \text{ bills} = \$4.00 \\ \text{One quarter} = 0.25 \\ \text{One nickel} = 0.05 \\ \text{One penny} = 0.01 \\ \hline \text{Total} = \$4.31 \end{array}$$

To find out if this is the correct amount, we subtract the amount of the bill from \$20.00.

$$\begin{array}{r} \$20.00 \\ - 15.64 \\ \hline \$ 4.36 \end{array}$$

The change was not correct. It is off by 5 cents. Instead of the nickel, I should have been given a dime.

4. Subtract:

- a. $6.7 - 2.05$
b. $6.7 - 2.0563$

5. Subtract 5.89 from the sum of 7 and 3.567.

6. If you pay for a purchase of \$9.56 with a \$10 bill, how much money should you receive in change? What will you do if the change that is given to you is one quarter, two dimes, and four pennies?

Answers

4. a. 4.65 b. 4.6437 5. 4.677
6. \$0.44; Tell the clerk that you have been given too much change. Instead of two dimes, you should have received one dime and one nickel.

7. Find the perimeter of each stamp in Example 9 from the dimensions given below.

a. Each side is 1.38 inches

b. Base = 6.6 centimeters, other two sides = 4.7 centimeters

EXAMPLE 7

Find the perimeter of each of the following stamps. Write your answer as a decimal, rounded to the nearest tenth, if necessary.

a.



Each side is 3.5 centimeters

b.



Base = 2.625 inches

Other two sides =

1.875 inches

SOLUTION To find the perimeter, we add the lengths of all the sides together.

a. $P = 3.5 + 3.5 + 3.5 + 3.5 = 14.0$ cm

b. $P = 2.625 + 1.875 + 1.875 = 6.4$ in.

STUDY SKILLS**Begin to Develop Confidence with Word Problems**

The main difference between people who are good at working word problems and those who are not seems to be confidence. People with confidence know that no matter how long it takes them, they will eventually be able to solve the problem they are working on. Those without confidence begin by saying to themselves, "I'll never be able to work this problem." If you are in this second group, then instead of telling yourself that you can't do word problems, that you don't like them, or that they're not good for anything anyway, decide to do whatever it takes to master them.

Getting Ready for Class

After reading through the preceding section, respond in your own words and in complete sentences.

1. When adding numbers with decimals, why is it important to line up the decimal points?
2. Write 379.6 in mixed-number notation.
3. Look at Example 6 in this section of your book. If I had given the person at the cash register a \$20 bill and four pennies, how much change should I then have received?
4. How many quarters does the decimal 0.75 represent?

Answers

7. a. 5.52 in. b. 16.0 cm

Problem Set 3.2

A Find each of the following sums. (Add.) [Examples 1, 3]

1. $2.91 + 3.28$

2. $8.97 + 2.04$

3. $0.04 + 0.31 + 0.78$

4. $0.06 + 0.92 + 0.65$

5. $3.89 + 2.4$

6. $7.65 + 3.8$

7. $4.532 + 1.81 + 2.7$

8. $9.679 + 3.49 + 6.5$

9. $0.081 + 5 + 2.94$

10. $0.396 + 7 + 3.96$

11. $5.0003 + 6.78 + 0.004$

12. $27.0179 + 7.89 + 0.009$

13.
$$\begin{array}{r} 7.123 \\ 8.12 \\ + 9.1 \\ \hline \end{array}$$

14.
$$\begin{array}{r} 5.432 \\ 4.32 \\ + 3.2 \\ \hline \end{array}$$

15.
$$\begin{array}{r} 9.001 \\ 8.01 \\ + 7.1 \\ \hline \end{array}$$

16.
$$\begin{array}{r} 6.003 \\ 5.02 \\ + 4.1 \\ \hline \end{array}$$

17.
$$\begin{array}{r} 89.7854 \\ 3.4 \\ 65.35 \\ + 100.006 \\ \hline \end{array}$$

18.
$$\begin{array}{r} 57.4698 \\ 9.89 \\ 32.032 \\ + 572.0079 \\ \hline \end{array}$$

19.
$$\begin{array}{r} 543.21 \\ + 123.45 \\ \hline \end{array}$$

20.
$$\begin{array}{r} 987.654 \\ + 456.789 \\ \hline \end{array}$$

A Find each of the following differences. (Subtract.) [Examples 2, 4]

21. $99.34 - 88.23$

22. $47.69 - 36.58$

23. $5.97 - 2.4$

24. $9.87 - 1.04$

25. $6.3 - 2.08$

26. $7.5 - 3.04$

27. $149.37 - 28.96$

28. $796.45 - 32.68$

29. $45 - 0.067$

30. $48 - 0.075$

31. $8 - 0.327$

32. $12 - 0.962$

33. $765.432 - 234.567$

34. $654.321 - 123.456$

A Subtract. [Example 4]

35.
$$\begin{array}{r} 34.07 \\ - 6.18 \\ \hline \end{array}$$

36.
$$\begin{array}{r} 25.008 \\ - 3.119 \\ \hline \end{array}$$

37.
$$\begin{array}{r} 40.04 \\ - 4.4 \\ \hline \end{array}$$

38.
$$\begin{array}{r} 50.05 \\ - 5.5 \\ \hline \end{array}$$

39.
$$\begin{array}{r} 768.436 \\ - 356.998 \\ \hline \end{array}$$

40.
$$\begin{array}{r} 495.237 \\ - 247.668 \\ \hline \end{array}$$

A Add and subtract as indicated. [Examples 1–7]

41. $(7.8 - 4.3) + 2.5$

42. $(8.3 - 1.2) + 3.4$

43. $7.8 - (4.3 + 2.5)$

44. $8.3 - (1.2 + 3.4)$

45. $(9.7 - 5.2) - 1.4$

46. $(7.8 - 3.2) - 1.5$

47. $9.7 - (5.2 - 1.4)$

48. $7.8 - (3.2 - 1.5)$

49. Subtract 5 from the sum of 8.2 and 0.072.

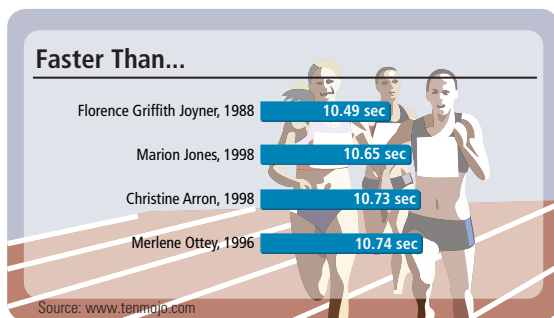
50. Subtract 8 from the sum of 9.37 and 2.5.

51. What number is added to 0.035 to obtain 4.036?

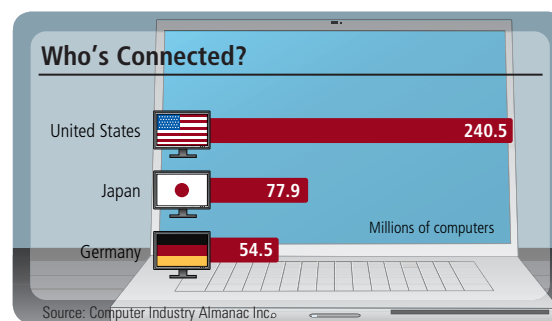
52. What number is added to 0.043 to obtain 6.054?

B Applying the Concepts [Examples 6, 7]

53. **100 Meters** At the 1928 Olympic Games in Amsterdam, the winning time for the women's 100 meters was 12.2 seconds. The chart shows the fastest times for the women's 100 meters. How much faster was Christine Arron's time than the first time recorded in 1928?



54. **Computers** The chart shows how many computers can be found in the countries containing the most computers. What is the total number of computers that can be found in these three countries?



55. **Take-Home Pay** A college professor making \$2,105.96 per month has deducted from her check \$311.93 for federal income tax, \$158.21 for retirement, and \$64.72 for state income tax. How much does the professor take home after the deductions have been taken from her monthly income?

56. **Take-Home Pay** A cook making \$1,504.75 a month has deductions of \$157.32 for federal income tax, \$58.52 for Social Security, and \$45.12 for state income tax. How much does the cook take home after the deductions have been taken from his check?

- 57. Perimeter of a Stamp** This stamp shows the Mexican artist Frida Kahlo. The stamp was issued in 2001 and is the first U.S. stamp to honor a Hispanic woman. The image area of the stamp has a width of 0.84 inches and a length of 1.41 inches. Find the perimeter of the image.



- 58. Perimeter of a Stamp** This stamp was issued in 2001 to honor the Italian scientist Enrico Fermi. The stamp caused some discussion because some of the mathematics in the upper left corner of the stamp is incorrect. The image area of the stamp has a width of 21.4 millimeters and a length of 35.8 millimeters. Find the perimeter of the image.



- 59. Change** A person buys \$4.57 worth of candy. If he pays for the candy with a \$10 bill, how much change should he receive?
- 60. Checking Account** A checking account contains \$342.38. If checks are written for \$25.04, \$36.71, and \$210, how much money is left in the account?

RECORD ALL CHARGES OR CREDITS THAT AFFECT YOUR ACCOUNT					
NUMBER	DATE	DESCRIPTION OF TRANSACTION	PAYMENT/DEBIT (-)	DEPOSIT/CREDIT (+)	BALANCE
	2/8	Deposit		\$342.38	\$342.38
1457	2/8	Woolworths	\$25.04		
1458	2/9	Walgreens	\$36.71		
1459	2/11	Electric Company	\$210.00		?

- 61. Sydney Olympics** The chart show the top finishing times for the mens' 400-meter freestyle swim during Sydney's Olympics. How much faster was Ian Thorpe than Emiliano Brembilla?
- 62. Sydney Olympics** The chart shows the top finishing times for the women's 400-meter race during the Sydney Olympics. How much faster was Lorraine Graham than Katharine Merry?

400-meter Freestyle Swimming	
Final times for the 400-meter freestyle swim.	
Ian Thorpe	3:40.59
Massimiliano Rosolino	3:43.40
Klete Keller	3:47.00
Emiliano Brembilla	3:47.01

Source: espn.com

Sydney Olympics	
The chart shows the top finishing times for the women's 400-meter race during the Sydney Olympics.	
Cathy Freeman	49.11
Lorraine Graham	49.58
Katharine Merry	49.72
Donna Fraser	49.79

Source: espn.com

- 63. Geometry** A rectangle has a perimeter of 9.5 inches. If the length is 2.75 inches, find the width.
- 64. Geometry** A rectangle has a perimeter of 11 inches. If the width is 2.5 inches, find the length.
- 65. Change** Suppose you eat dinner in a restaurant and the bill comes to \$16.76. If you give the cashier a \$20 bill and a penny, how much change should you receive? List the bills and coins you should receive for change.
- 66. Change** Suppose you buy some tools at the hardware store and the bill comes to \$37.87. If you give the cashier two \$20 bills and 2 pennies, how much change should you receive? List the bills and coins you should receive for change.

Sequences Find the next number in each sequence.

- 67.** 2.5, 2.75, 3, . . .
- 68.** 3.125, 3.375, 3.625, . . .

■ Getting Ready for the Next Section

To understand how to multiply decimals, we need to understand multiplication with whole numbers, fractions, and mixed numbers. The following problems review these concepts.

- 69.** $\frac{1}{10} \cdot \frac{3}{10}$
- 70.** $\frac{5}{10} \cdot \frac{6}{10}$
- 71.** $\frac{3}{100} \cdot \frac{17}{100}$
- 72.** $\frac{7}{100} \cdot \frac{31}{100}$
- 73.** $5\left(\frac{3}{10}\right)$
- 74.** $7 \cdot \frac{7}{10}$
- 75.** $56 \cdot 25$
- 76.** $39(48)$
- 77.** $\frac{5}{10} \times \frac{3}{10}$
- 78.** $\frac{5}{100} \times \frac{3}{1,000}$
- 79.** $2\frac{1}{10} \times \frac{7}{100}$
- 80.** $3\frac{5}{10} \times \frac{4}{100}$
- 81.** $305(436)$
- 82.** $403(522)$
- 83.** $5(420 + 3)$
- 84.** $3(550 + 2)$

■ Maintaining Your Skills

Use the rule for order of operations to simplify each expression.


- 85.** $30 \div 5 \cdot 2$
- 86.** $60 \div 3 \cdot 10$
- 87.** $22 - 2 \cdot 3$
- 88.** $37 - 7 \cdot 2$
- 89.** $12 + 18 \div 2 - 1$
- 90.** $15 + 10 \div 5 - 4$
- 91.** $3 \cdot 5^2 - 75 \div 5 + 2^3$
- 92.** $2 \cdot 3^2 - 18 \div 3 + 2^4$

Multiplication with Decimals; Circumference and Area of a Circle

3.3

Introduction . . .

The distance around a circle is called the circumference. If you know the circumference of a bicycle wheel, and you ride the bicycle for one mile, you can calculate how many times the wheel has turned through one complete revolution. In this section we learn how to multiply decimal numbers, and this gives us the information we need to work with circles and their circumferences.



A Multiplying with Decimals

Before we introduce circumference, we need to back up and discuss multiplication with decimals. Suppose that during a half-price sale a calendar that usually sells for \$6.42 is priced at \$3.21. Therefore it must be true that

$$\frac{1}{2} \text{ of } 6.42 \text{ is } 3.21$$

But, because $\frac{1}{2}$ can be written as 0.5 and *of* translates to *multiply*, we can write this problem again as

$$0.5 \times 6.42 = 3.21$$

If we were to ignore the decimal points in this problem and simply multiply 5 and 642, the result would be 3,210. So, multiplication with decimal numbers is similar to multiplication with whole numbers. The difference lies in deciding where to place the decimal point in the answer. To find out how this is done, we can use fraction notation.

EXAMPLE 1

Change each decimal to a fraction and multiply:

$$0.5 \times 0.3$$

To indicate multiplication we are using a \times sign here instead of a dot so we won't confuse the decimal points with the multiplication symbol.

SOLUTION Changing each decimal to a fraction and multiplying, we have

$$0.5 \times 0.3 = \frac{5}{10} \times \frac{3}{10}$$

Change to fractions

$$= \frac{15}{100}$$

Multiply numerators and multiply denominators

$$= 0.15$$

Write the answer in decimal form

The result is 0.15, which has two digits to the right of the decimal point. ■

What we want to do now is find a shortcut that will allow us to multiply decimals without first having to change each decimal number to a fraction. Let's look at another example.

Objectives

- A Multiply decimal numbers.
- B Solve application problems involving decimals.
- C Find the circumference of a circle.

PRACTICE PROBLEMS

1. Change each decimal to a fraction and multiply. Write your answer as a decimal.
 - a. 0.4×0.6
 - b. 0.04×0.06

Answer

1. a. 0.24 b. 0.0024

2. Change each decimal to a fraction and multiply. Write your answer as a decimal.

- a. 0.5×0.007
b. 0.05×0.07

3. Change each decimal to a fraction and multiply. Write your answer as a decimal.

- a. 3.5×0.04
b. 0.35×0.4

4. How many digits will be to the right of the decimal point in the following products?

- a. 3.706×55.88
b. 37.06×0.5588

Answers

2. Both are 0.0035
3. Both are 0.14 4. a. 5 b. 6

EXAMPLE 2

Change each decimal to a fraction and multiply: 0.05×0.003

$$\begin{aligned} \text{SOLUTION} \quad 0.05 \times 0.003 &= \frac{5}{100} \times \frac{3}{1,000} && \text{Change to fractions} \\ &= \frac{15}{100,000} && \text{Multiply numerators and} \\ &&& \text{multiply denominators} \\ &= 0.00015 && \text{Write the answer in decimal form} \end{aligned}$$

The result is 0.00015, which has a total of five digits to the right of the decimal point.

Looking over these first two examples, we can see that the digits in the result are just what we would get if we simply forgot about the decimal points and multiplied; that is, $3 \times 5 = 15$. The decimal point in the result is placed so that the total number of digits to its right is the same as the total number of digits to the right of both decimal points in the original two numbers. The reason this is true becomes clear when we look at the denominators after we have changed from decimals to fractions.

EXAMPLE 3

Multiply: 2.1×0.07

$$\begin{aligned} \text{SOLUTION} \quad 2.1 \times 0.07 &= 2\frac{1}{10} \times \frac{7}{100} && \text{Change to fractions} \\ &= \frac{21}{10} \times \frac{7}{100} \\ &= \frac{147}{1,000} && \text{Multiply numerators and} \\ &&& \text{multiply denominators} \\ &= 0.147 && \text{Write the answer as a decimal} \end{aligned}$$

Again, the digits in the answer come from multiplying $21 \times 7 = 147$. The decimal point is placed so that there are three digits to its right, because that is the total number of digits to the right of the decimal points in 2.1 and 0.07.

We summarize this discussion with a rule.

Rule

To multiply two decimal numbers:

1. Multiply as you would if the decimal points were not there.
2. Place the decimal point in the answer so that the number of digits to its right is equal to the total number of digits to the right of the decimal points in the original two numbers in the problem.

EXAMPLE 4

How many digits will be to the right of the decimal point in the following product?


$$2.987 \times 24.82$$

SOLUTION There are three digits to the right of the decimal point in 2.987 and two digits to the right in 24.82. Therefore, there will be $3 + 2 = 5$ digits to the right of the decimal point in their product.

EXAMPLE 5Multiply: 3.05×4.36

SOLUTION We can set this up as if it were a multiplication problem with whole numbers. We multiply and then place the decimal point in the correct position in the answer.

$$\begin{array}{r}
 3.05 \quad \longleftarrow 2 \text{ digits to the right of decimal point} \\
 \times 4.36 \quad \longleftarrow 2 \text{ digits to the right of decimal point} \\
 \hline
 1830 \\
 915 \\
 \hline
 1220 \\
 \hline
 132980
 \end{array}$$


 The decimal point is placed so that there are $2 + 2 = 4$ digits to its right.

As you can see, multiplying decimal numbers is just like multiplying whole numbers, except that we must place the decimal point in the result in the correct position.

Estimating

Look back to Example 5. We could have placed the decimal point in the answer by rounding the two numbers to the nearest whole number and then multiplying them. Because 3.05 rounds to 3 and 4.36 rounds to 4, and the product of 3 and 4 is 12, we estimate that the answer to 3.05×4.36 will be close to 12. We then place the decimal point in the product 132980 between the 3 and the 2 in order to make it into a number close to 12.

EXAMPLE 6

Estimate the answer to each of the following products.

- a. 29.4×8.2 b. 68.5×172 c. $(6.32)^2$

SOLUTION

a. Because 29.4 is approximately 30 and 8.2 is approximately 8, we estimate this product to be about $30 \times 8 = 240$. (If we were to multiply 29.4 and 8.2, we would find the product to be exactly 241.08.)

b. Rounding 68.5 to 70 and 172 to 170, we estimate this product to be $70 \times 170 = 11,900$. (The exact answer is 11,782.) Note here that we do not always round the numbers to the nearest whole number when making estimates. The idea is to round to numbers that will be easy to multiply.

c. Because 6.32 is approximately 6 and $6^2 = 36$, we estimate our answer to be close to 36. (The actual answer is 39.9424.)

5. Multiply.
- a. 4.03×5.22
b. 40.3×0.522

6. Estimate the answer to each product.
- a. 82.3×5.8
b. 37.5×178
c. $(8.21)^2$

Answers

5. Both are 21.0366
6. a. 480 b. 7,200 c. 64

Combined Operations

We can use the rule for order of operations to simplify expressions involving decimal numbers and addition, subtraction, and multiplication.

EXAMPLE 7

Perform the indicated operations: $0.05(4.2 + 0.03)$

SOLUTION We begin by adding inside the parentheses:

$$\begin{aligned} 0.05(4.2 + 0.03) &= 0.05(4.23) && \text{Add} \\ &= 0.2115 && \text{Multiply} \end{aligned}$$

Notice that we could also have used the distributive property first, and the result would be unchanged:

$$\begin{aligned} 0.05(4.2 + 0.03) &= 0.05(4.2) + 0.05(0.03) && \text{Distributive property} \\ &= 0.210 + 0.0015 && \text{Multiply} \\ &= 0.2115 && \text{Add} \end{aligned}$$

EXAMPLE 8

Simplify: $4.8 + 12(3.2)^2$

SOLUTION According to the rule for order of operations, we must first evaluate the number with an exponent, then multiply, and finally add.

$$\begin{aligned} 4.8 + 12(3.2)^2 &= 4.8 + 12(10.24) && (3.2)^2 = 10.24 \\ &= 4.8 + 122.88 && \text{Multiply} \\ &= 127.68 && \text{Add} \end{aligned}$$

B Applications

EXAMPLE 9

Find the area of each of the following stamps.

- a.  Each side is 35.0 millimeters

- b. Round to the nearest hundredth.



Length = 1.56 inches
Width = 0.99 inches

SOLUTION Applying our formulas for area we have

- a. $A = s^2 = (35 \text{ mm})^2 = 1,225 \text{ mm}^2$
b. $A = lw = (1.56 \text{ in.})(0.99 \text{ in.}) = 1.54 \text{ in}^2$

7. Perform the indicated operations.

- a. $0.03(5.5 + 0.02)$
b. $0.03(0.55 + 0.002)$

8. Simplify.

- a. $5.7 + 14(2.4)^2$
b. $0.57 + 1.4(2.4)^2$

9. Find the area of each stamp in Example 9 from the dimensions given below. Round answers to the nearest hundredth.

- a. Each side is 1.38 inches

- b. Length = 39.6 millimeters,
width = 25.1 millimeters

Answers

7. a. 0.1656 b. 0.01656
8. a. 86.34 b. 8.634
9. a. 1.90 in^2 b. 993.96 mm^2

EXAMPLE 10

Sally earns \$6.82 for each of the first 36 hours she works in one week and \$10.23 in overtime pay for each additional hour she works in the same week. How much money will she make if she works 42 hours in one week?

SOLUTION The difference between 42 and 36 is 6 hours of overtime pay. The total amount of money she will make is

$$\begin{array}{l} \text{Pay for the first} \quad \text{Pay for the} \\ \text{36 hours} \quad \quad \quad \text{next 6 hours} \\ \hline 6.82(36) + 10.23(6) = 245.52 + 61.38 \\ = 306.90 \end{array}$$

She will make \$306.90 for working 42 hours in one week. ■

C Circumference**FACTS FROM GEOMETRY The Circumference of a Circle**

The *circumference* of a circle is the distance around the outside, just as the perimeter of a polygon is the distance around the outside. The circumference of a circle can be found by measuring its radius or diameter and then using the appropriate formula. The *radius* of a circle is the distance from the center of the circle to the circle itself. The radius is denoted by the letter r . The *diameter* of a circle is the distance from one side to the other, through the center. The diameter is denoted by the letter d . In Figure 1 we can see that the diameter is twice the radius, or

$$d = 2r$$

The relationship between the circumference and the diameter or radius is not as obvious. As a matter of fact, it takes some fairly complicated mathematics to show just what the relationship between the circumference and the diameter is.

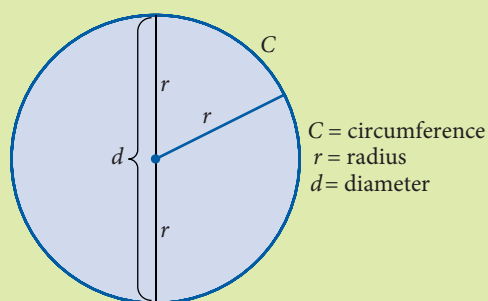


FIGURE 1

If you took a string and actually measured the circumference of a circle by wrapping the string around the circle and then measured the diameter of the same circle, you would find that the ratio of the circumference to the diameter, C/d , would be approximately equal to 3.14. The actual ratio of C to d in any circle is an irrational number. It can't be written in decimal form. We use the symbol π (Greek pi) to represent this ratio. In symbols the relationship between the circumference and the diameter in any circle is

$$\frac{C}{d} = \pi$$

10. How much will Sally make if she works 50 hours in one week?

Note

To estimate the answer to Example 10 before doing the actual calculations, we would do the following:
 $6(40) + 10(6) = 240 + 60 = 300$

Answer

10. \$388.74

Knowing what we do about the relationship between division and multiplication, we can rewrite this formula as

$$C = \pi d$$

This is the formula for the circumference of a circle. When we do the actual calculations, we will use the approximation 3.14 for π .

Because $d = 2r$, the same formula written in terms of the radius is

$$C = 2\pi r$$

Here are some examples that show how we use the formulas given above to find the circumference of a circle.

EXAMPLE 11

Find the circumference of a circle with a diameter of 5 feet.

SOLUTION Substituting 5 for d in the formula $C = \pi d$, and using 3.14 for π , we have

$$\begin{aligned} C &= 3.14(5) \\ &= 15.7 \text{ feet} \end{aligned}$$

EXAMPLE 12

Find the circumference of each coin.

a. 1 Euro coin (Round to the nearest whole number.)



Diameter = 23.25 millimeters

b. Susan B. Anthony dollar (Round to the nearest hundredth.)



Radius = 0.52 inch

SOLUTION Applying our formulas for circumference we have:

$$\begin{aligned} \text{a. } C &= \pi d \approx (3.14)(23.25) \approx 73 \text{ mm} \\ \text{b. } C &= 2\pi r \approx 2(3.14)(0.52) \approx 3.27 \text{ in.} \end{aligned}$$

11. Find the circumference of a circle with a diameter of 3 centimeters.

12. Find the circumference for each coin in Example 12 from the dimensions given below. Round answers to the nearest hundredth.

a. Diameter = 0.92 inches

b. Radius = 13.20 millimeters

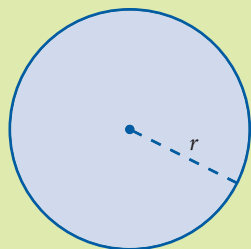
Answers

11. 9.42 cm

12. a. 2.89 in. b. 82.90 mm

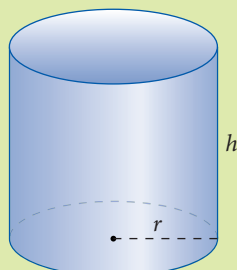
FACTS FROM GEOMETRY Other Formulas Involving π

Two figures are presented here, along with some important formulas that are associated with each figure. As you can see, each of the formulas contains the number π . When we do the actual calculations, we will use the approximation 3.14 for π .



$$\begin{aligned} \text{Area} &= \pi(\text{radius})^2 \\ A &= \pi r^2 \end{aligned}$$

FIGURE 2 Circle



$$\begin{aligned} \text{Volume} &= \pi(\text{radius})^2(\text{height}) \\ V &= \pi r^2 h \end{aligned}$$

FIGURE 3 Right circular cylinder

EXAMPLE 13

Find the area of a circle with a diameter of 10 feet.

SOLUTION The formula for the area of a circle is $A = \pi r^2$. Because the radius r is half the diameter and the diameter is 10 feet, the radius is 5 feet. Therefore,

$$A = \pi r^2 = (3.14)(5)^2 = (3.14)(25) = 78.5 \text{ ft}^2$$

EXAMPLE 14

The drinking straw shown in Figure 4 has a radius of 0.125 inch and a length of 6 inches. To the nearest thousandth, find the volume of liquid that it will hold.

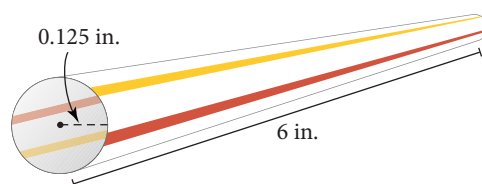


FIGURE 4

SOLUTION The total volume is found from the formula for the volume of a right circular cylinder. In this case, the radius is $r = 0.125$, and the height is $h = 6$. We approximate π with 3.14.

$$\begin{aligned} V &= \pi r^2 h \\ &= (3.14)(0.125)^2(6) \\ &= (3.14)(0.015625)(6) \\ &= 0.294 \text{ in}^3 \text{ to the nearest thousandth} \end{aligned}$$

13. Find the area of a circle with a diameter of 20 feet.

14. Find the volume of the straw in Example 14, if the radius is doubled. Round your answer to the nearest thousandth.

Answers

13. 314 ft^2 14. 1.178 in^3

STUDY SKILLS**Increase Effectiveness**

You want to become more and more effective with the time you spend on your homework. You want to increase the amount of learning you obtain in the time you have set aside. Increase those activities that you feel are the most beneficial and decrease those that have not given you the results you want.

Getting Ready for Class

After reading through the preceding section, respond in your own words and in complete sentences.

1. If you multiply 34.76 and 0.072, how many digits will be to the right of the decimal point in your answer?
2. To simplify the expression $0.053(9) + 67.42$, what would be the first step according to the rule for order of operations?
3. What is the purpose of estimating?
4. What are some applications of decimals that we use in our everyday lives?

Problem Set 3.3

A Find each of the following products. (Multiply.) [Examples 1–3, 5]

$$\begin{array}{r} 1. \quad 0.7 \\ \times 0.4 \\ \hline \end{array}$$

$$\begin{array}{r} 2. \quad 0.8 \\ \times 0.3 \\ \hline \end{array}$$

$$\begin{array}{r} 3. \quad 0.07 \\ \times 0.4 \\ \hline \end{array}$$

$$\begin{array}{r} 4. \quad 0.8 \\ \times 0.03 \\ \hline \end{array}$$

$$\begin{array}{r} 5. \quad 0.03 \\ \times 0.09 \\ \hline \end{array}$$

$$\begin{array}{r} 6. \quad 0.07 \\ \times 0.002 \\ \hline \end{array}$$

$$7. \quad 2.6(0.3)$$

$$8. \quad 8.9(0.2)$$

$$\begin{array}{r} 9. \quad 0.9 \\ \times 0.88 \\ \hline \end{array}$$

$$\begin{array}{r} 10. \quad 0.8 \\ \times 0.99 \\ \hline \end{array}$$

$$\begin{array}{r} 11. \quad 3.12 \\ \times 0.005 \\ \hline \end{array}$$

$$\begin{array}{r} 12. \quad 4.69 \\ \times 0.006 \\ \hline \end{array}$$

$$\begin{array}{r} 13. \quad 4.003 \\ \times 6.07 \\ \hline \end{array}$$

$$\begin{array}{r} 14. \quad 7.0001 \\ \times 3.04 \\ \hline \end{array}$$

$$15. \quad 5(0.006)$$

$$16. \quad 7(0.005)$$

$$\begin{array}{r} 17. \quad 75.14 \\ \times 2.5 \\ \hline \end{array}$$

$$\begin{array}{r} 18. \quad 963.8 \\ \times 0.24 \\ \hline \end{array}$$

$$\begin{array}{r} 19. \quad 0.1 \\ \times 0.02 \\ \hline \end{array}$$

$$\begin{array}{r} 20. \quad 0.3 \\ \times 0.02 \\ \hline \end{array}$$

$$21. \quad 2.796(10)$$

$$22. \quad 97.531(100)$$

$$\begin{array}{r} 23. \quad 0.0043 \\ \times 100 \\ \hline \end{array}$$

$$\begin{array}{r} 24. \quad 12.345 \\ \times 1,000 \\ \hline \end{array}$$

$$\begin{array}{r} 25. \quad 49.94 \\ \times 1,000 \\ \hline \end{array}$$

$$\begin{array}{r} 26. \quad 157.02 \\ \times 10,000 \\ \hline \end{array}$$

$$\begin{array}{r} 27. \quad 987.654 \\ \times 10,000 \\ \hline \end{array}$$

$$\begin{array}{r} 28. \quad 1.23 \\ \times 100,000 \\ \hline \end{array}$$

A Perform the following operations according to the rule for order of operations. [Examples 6, 7, 9, 10]

$$29. \quad 2.1(3.5 - 2.6)$$

$$30. \quad 5.4(9.9 - 6.6)$$

$$31. \quad 0.05(0.02 + 0.03)$$

$$32. \quad 0.04(0.07 + 0.09)$$

$$33. \quad 2.02(0.03 + 2.5)$$

$$34. \quad 4.04(0.05 + 6.6)$$

$$35. \quad (2.1 + 0.03)(3.4 + 0.05)$$

$$36. \quad (9.2 + 0.01)(3.5 + 0.03)$$

$$37. \quad (2.1 - 0.1)(2.1 + 0.1)$$

$$38. \quad (9.6 - 0.5)(9.6 + 0.5)$$

$$39. \quad 3.08 - 0.2(5 + 0.03)$$

$$40. \quad 4.09 + 0.5(6 + 0.02)$$

$$41. \quad 4.23 - 5(0.04 + 0.09)$$

$$42. \quad 7.89 - 2(0.31 + 0.76)$$

$$43. \quad 2.5 + 10(4.3)^2$$

$$44. \quad 3.6 + 15(2.1)^2$$

$$45. \quad 100(1 + 0.08)^2$$

$$46. \quad 500(1 + 0.12)^2$$


$$47. \quad (1.5)^2 + (2.5)^2 + (3.5)^2$$

$$48. \quad (1.1)^2 + (2.1)^2 + (3.1)^2$$


B Applying the Concepts [Examples 11–16]

Solve each of the following word problems. Note that not all of the problems are solved by simply multiplying the numbers in the problems. Many of the problems involve addition and subtraction as well as multiplication.

- 49. Google Earth** This Google Earth image shows an aerial view of a crop circle found near Wroughton, England. If the crop circle has a radius of 59.13 meters, what is its circumference? Use the approximation 3.14 for π . Round to the nearest hundredth.



- 50. Google Earth** This is a 3D model of the Louvre Museum in Paris, France. The pyramid that dominates the Napoleon Courtyard has a height of 21.65 meters and a square base with sides of 35.50 meters. What is the volume of the pyramid to the nearest whole number? Hint: The volume of a pyramid can be found by the equation $V = \left(\frac{1}{3}\right)(\text{area of the base})(\text{height})$.



- 51. Number Problem** What is the product of 6 and the sum of 0.001 and 0.02?
- 52. Number Problem** Find the product of 8 and the sum of 0.03 and 0.002.
- 53. Number Problem** What does multiplying a decimal number by 100 do to the decimal point?
- 54. Number Problem** What does multiplying a decimal number by 1,000 do to the decimal point?
- 55. Home Mortgage** On a certain home mortgage, there is a monthly payment of \$9.66 for every \$1,000 that is borrowed. What is the monthly payment on this type of loan if \$143,000 is borrowed?
- 56. Caffeine Content** If 1 cup of regular coffee contains 105 milligrams of caffeine, how much caffeine is contained in 3.5 cups of coffee?
- 57. Geometry of a Coin** The \$1 coin shown here depicts Sacagawea and her infant son. The diameter of the coin is 26.5 mm, and the thickness is 2.00 mm. Find the following, rounding your answers to the nearest hundredth. Use 3.14 for π .
- The circumference of the coin.
 - The area of one face of the coin.
 - The volume of the coin.



- 58. Geometry of a Coin** The Susan B. Anthony dollar shown here has a radius of 0.52 inches and a thickness of 0.0079 inches. Find the following, rounding your answers to the nearest ten thousandth, if necessary. Use 3.14 for π .
- The circumference of the coin.
 - The area of one face of the coin.
 - The volume of the coin.



- 59. Area of a Stamp** This stamp shows the Mexican artist Frida Kahlo. The image area of the stamp has a width of 0.84 inches and a length of 1.41 inches. Find the area of the image. Round to the nearest hundredth.

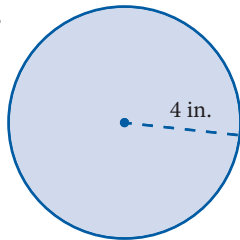


- 60. Area of a Stamp** This stamp was issued in 2001 to honor the Italian scientist Enrico Fermi. The image area of the stamp has a width of 21.4 millimeters and a length of 35.8 millimeters. Find the area of the image. Round to the nearest whole number.

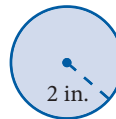


- C Circumference** Find the circumference and the area of each circle. Use 3.14 for π . [Examples 13–16]

61.



62.



- 63. Circumference** The radius of the earth is approximately 3,900 miles. Find the circumference of the earth at the equator. (The equator is a circle around the earth that divides the earth into two equal halves.)

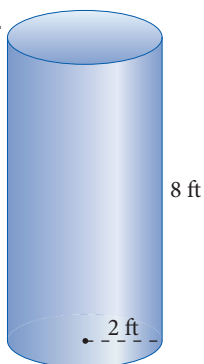
- 64. Circumference** The radius of the moon is approximately 1,100 miles. Find the circumference of the moon around its equator.

- 65. Bicycle Wheel** The wheel on a 26-inch bicycle is such that the distance from the center of the wheel to the outside of the tire is 26.75 inches. If you walk the bicycle so that the wheel turns through one complete revolution, how many inches did you walk? Round to the nearest inch.

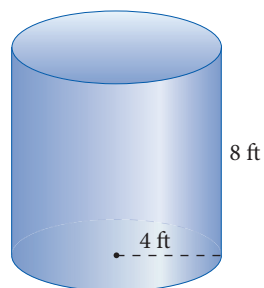
- 66. Model Plane** A model plane is flying in a circle with a radius of 40 feet. To the nearest foot, how far does it fly in one complete trip around the circle?

Find the volume of each right circular cylinder.

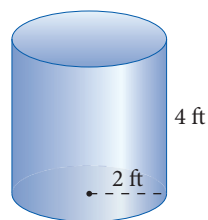
67.



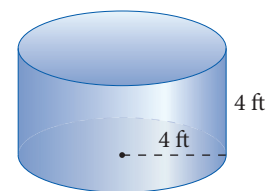
68.



69.



70.



Getting Ready for the Next Section

To get ready for the next section, which covers division with decimals, we will review division with whole numbers and fractions.

Simplify each of the following.

71. $3,758 \div 2$

72. $9,900 \div 22$

73. $50,032 \div 33$

74. $90,902 \div 5$

75. $20 \overline{)5,960}$

76. $30 \overline{)4,620}$

77. 4×8.7

78. 5×6.7

79. 27×1.848

80. 35×32.54

81. $38 \overline{)31,350}$

82. $25 \overline{)377,800}$

Maintaining Your Skills

83. Write the fractions in order from smallest to largest.

$$\frac{2}{5} \quad \frac{4}{5} \quad \frac{3}{10} \quad \frac{1}{2}$$

84. Write the fractions in order from smallest to largest.

$$\frac{4}{5} \quad \frac{1}{4} \quad \frac{1}{10} \quad \frac{17}{100}$$

85. Write the numbers in order from smallest to largest.

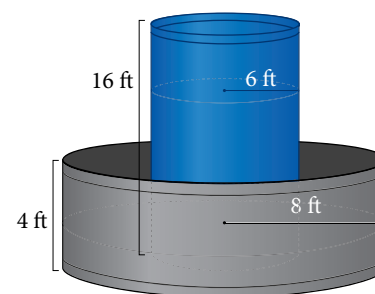
$$1\frac{5}{6} \quad \frac{3}{2} \quad 1\frac{2}{3} \quad \frac{25}{12}$$

86. Write the numbers in order from smallest to largest.

$$1\frac{11}{12} \quad \frac{19}{12} \quad \frac{4}{3} \quad 1\frac{1}{6}$$

Extending the Concepts

87. Containment System Holding tanks for hazardous liquids are often surrounded by containment tanks that will hold the hazardous liquid if the main tank begins to leak. We see that the center tank has a height of 16 feet and a radius of 6 feet. The outside containment tank has a height of 4 feet and a radius of 8 feet. If the center tank is full of heating fuel and develops a leak at the bottom, will the containment tank be able to hold all the heating fuel that leaks out?



Introduction . . .

The chart shows the top finishing times for the men's 400-meter freestyle swim during Sydney's Olympics. An Olympic pool is 50 meters long, so each swimmer will have to complete 8 lengths during a 400-meter race.

400-meter Freestyle Swimming
Final times for the 400-meter freestyle swim

Ian Thorpe	3:40.59
Massimiliano Rosolino	3:43.40
Klete Keller	3:47.00
Emiliano Brembilla	3:47.01

Source: espn.com

During the race, each swimmer keeps track of how long it takes him to complete each length. To find the time of a swimmer's average lap, we need to be able to divide with decimal numbers, which we will learn in this section.

A Dividing with Decimals

EXAMPLE 1

Divide: $5,974 \div 20$

SOLUTION

$$\begin{array}{r} 298 \\ 20 \overline{)5,974} \\ \underline{40} \\ 197 \\ \underline{180} \\ 174 \\ \underline{160} \\ 14 \end{array}$$

In the past we have written this answer as $298 \frac{14}{20}$ or, after reducing the fraction, $298 \frac{7}{10}$. Because $\frac{7}{10}$ can be written as 0.7, we could also write our answer as 298.7. This last form of our answer is exactly the same result we obtain if we write 5,974 as 5,974.0 and continue the division until we have no remainder. Here is how it looks:

$$\begin{array}{r} 298.7 \\ 20 \overline{)5,974.0} \\ \underline{40} \\ 197 \\ \underline{180} \\ 174 \\ \underline{160} \\ 140 \\ \underline{140} \\ 0 \end{array}$$

Notice that we place the decimal point in the answer directly above the decimal point in the problem

Let's try another division problem. This time one of the numbers in the problem will be a decimal.

Objectives

- A** Divide decimal numbers.
- B** Solve application problems involving decimals.

PRACTICE PROBLEMS

- Divide: $4,626 \div 30$

Note

We can estimate the answer to Example 1 by rounding 5,974 to 6,000 and dividing by 20:

$$\frac{6,000}{20} = 300$$

Note

We never need to make a mistake with division, because we can always check our results with multiplication.

Answer

- 154.2

2. Divide.
- $33.5 \div 5$
 - $34.5 \div 5$
 - $35.5 \div 5$

3. Divide.
- $47.448 \div 18$
 - $474.48 \div 18$

4. Divide.
- $1,138.5 \div 25$
 - $113.85 \div 25$

Answers

2. a. 6.7 b. 6.9 c. 7.1
 3. a. 2.636 b. 26.36
 4. a. 45.54 b. 4.554

Chapter 3 Decimals**EXAMPLE 2**Divide: $34.8 \div 4$

SOLUTION We can use the ideas from Example 1 and divide as usual. The decimal point in the answer will be placed directly above the decimal point in the problem.

$$\begin{array}{r} 8.7 \\ 4 \overline{)34.8} \\ \underline{32} \\ 28 \\ \underline{28} \\ 0 \end{array} \quad \text{Check: } \begin{array}{r} 8.7 \\ \times 4 \\ \hline 34.8 \end{array}$$

The answer is 8.7.

We can use these facts to write a rule for dividing decimal numbers.

Rule

To divide a decimal by a whole number, we do the usual long division as if there were no decimal point involved. The decimal point in the answer is placed directly above the decimal point in the problem.

Here are some more examples to illustrate the procedure.

EXAMPLE 3Divide: $49.896 \div 27$ **SOLUTION**

$$\begin{array}{r} 1.848 \\ 27 \overline{)49.896} \\ \underline{27} \\ 228 \\ \underline{216} \\ 129 \\ \underline{108} \\ 216 \\ \underline{216} \\ 0 \end{array} \quad \text{Check this result by multiplication:}$$

$$\begin{array}{r} 1.848 \\ \times 27 \\ \hline 12936 \\ 3696 \\ \hline 49.896 \end{array}$$

We can write as many zeros as we choose after the rightmost digit in a decimal number without changing the value of the number. For example,

$$6.91 = 6.910 = 6.9100 = 6.91000$$

There are times when this can be very useful, as Example 4 shows.

EXAMPLE 4Divide: $1,138.9 \div 35$ **SOLUTION**

$$\begin{array}{r} 32.54 \\ 35 \overline{)1,138.90} \\ \underline{105} \\ 88 \\ \underline{70} \\ 189 \\ \underline{175} \\ 140 \\ \underline{140} \\ 0 \end{array} \quad \begin{array}{l} \text{Write 0 after the 9. It doesn't} \\ \text{change the original number,} \\ \text{but it gives us another digit} \\ \text{to bring down.} \end{array}$$

$$\text{Check: } \begin{array}{r} 32.54 \\ \times 35 \\ \hline 16270 \\ 9762 \\ \hline 1,138.90 \end{array}$$

Until now we have considered only division by whole numbers. Extending division to include division by decimal numbers is a matter of knowing what to do about the decimal point in the divisor.

EXAMPLE 5Divide: $31.35 \div 3.8$

SOLUTION In fraction form, this problem is equivalent to

$$\frac{31.35}{3.8}$$

If we want to write the divisor as a whole number, we can multiply the numerator and the denominator of this fraction by 10:

$$\frac{31.35 \times 10}{3.8 \times 10} = \frac{313.5}{38}$$

So, since this fraction is equivalent to the original fraction, our original division problem is equivalent to

$$\begin{array}{r} 8.25 \\ 38 \overline{) 313.50} \\ \underline{304} \\ 95 \\ \underline{76} \\ 190 \\ \underline{190} \\ 0 \end{array} \quad \text{Put 0 after the last digit}$$

We can summarize division with decimal numbers by listing the following points, as illustrated by the first five examples.

Summary of Division with Decimals

1. We divide decimal numbers by the same process used in Chapter 1 to divide whole numbers. The decimal point in the answer is placed directly above the decimal point in the dividend.
2. We are free to write as many zeros after the last digit in a decimal number as we need.
3. If the divisor is a decimal, we can change it to a whole number by moving the decimal point to the right as many places as necessary so long as we move the decimal point in the dividend the same number of places.

EXAMPLE 6

Divide, and round the answer to the nearest hundredth:

$$0.3778 \div 0.25$$

SOLUTION First, we move the decimal point two places to the right:

$$\begin{array}{r} 0.25 \overline{) 37.78} \\ \underline{37} \\ 8 \\ \underline{75} \\ 10 \\ \underline{100} \\ 0 \end{array}$$

5. Divide.
- a. $13.23 \div 4.2$
 - b. $13.23 \div 0.42$

Note

We do not always use the rules for rounding numbers to make estimates. For example, to estimate the answer to Example 5, $31.35 \div 3.8$, we can get a rough estimate of the answer by reasoning that 3.8 is close to 4 and 31.35 is close to 32. Therefore, our answer will be approximately $32 \div 4 = 8$.

6. Divide, and round your answer to the nearest hundredth:
- $$0.4553 \div 0.32$$

Note

Moving the decimal point two places in both the divisor and the dividend is justified like this:

$$\frac{0.3778 \times 100}{0.25 \times 100} = \frac{37.78}{25}$$

Answers

5. a. 3.15 b. 31.5

Then we divide, using long division:

$$\begin{array}{r}
 1.5112 \\
 25 \overline{)37.7800} \\
 \underline{25} \\
 127 \\
 \underline{125} \\
 28 \\
 \underline{25} \\
 30 \\
 \underline{25} \\
 50 \\
 \underline{50} \\
 0
 \end{array}$$

Rounding to the nearest hundredth, we have 1.51. We actually did not need to have this many digits to round to the hundredths column. We could have stopped at the thousandths column and rounded off.

7. Divide, and round to the nearest tenth.

- a. $19 \div 0.06$
 b. $1.9 \div 0.06$

EXAMPLE 7

Divide, and round to the nearest tenth: $17 \div 0.03$

SOLUTION Because we are rounding to the nearest tenth, we will continue dividing until we have a digit in the hundredths column. We don't have to go any further to round to the tenths column.

$$\begin{array}{r}
 566.66 \\
 0.03 \overline{)17.00,00} \\
 \underline{15} \\
 20 \\
 \underline{18} \\
 20 \\
 \underline{18} \\
 20 \\
 \underline{18} \\
 20 \\
 \underline{18} \\
 2
 \end{array}$$

Rounding to the nearest tenth, we have 566.7.

B Applications

EXAMPLE 8

If a man earning \$7.26 an hour receives a paycheck for \$235.95, how many hours did he work?

SOLUTION To find the number of hours the man worked, we divide \$235.95 by \$7.26.

$$\begin{array}{r}
 32.5 \\
 7.26 \overline{)235.95,0} \\
 \underline{2178} \\
 1815 \\
 \underline{1452} \\
 3630 \\
 \underline{3630} \\
 0
 \end{array}$$

The man worked 32.5 hours.

8. A woman earning \$6.54 an hour receives a paycheck for \$186.39. How many hours did the woman work?

Answers

6. 1.42 7. a. 316.7 b. 31.7
 8. 28.5 hours

EXAMPLE 9

A telephone company charges \$0.43 for the first minute and then \$0.33 for each additional minute for a long-distance call. If a long-distance call costs \$3.07, how many minutes was the call?

SOLUTION To solve this problem we need to find the number of additional minutes for the call. To do so, we first subtract the cost of the first minute from the total cost, and then we divide the result by the cost of each additional minute. Without showing the actual arithmetic involved, the solution looks like this:

$$\text{The number of additional minutes} = \frac{\overset{\text{Total cost of the call}}{\downarrow} 3.07 - \overset{\text{Cost of the first minute}}{\swarrow} 0.43}{\underset{\text{Cost of each additional minute}}{\uparrow} 0.33} = \frac{2.64}{0.33} = 8$$

The call was 9 minutes long. (The number 8 is the number of additional minutes past the first minute.)

DESCRIPTIVE STATISTICS**Grade Point Average**

I have always been surprised by the number of my students who have difficulty calculating their grade point average (GPA). During her first semester in college, my daughter, Amy, earned the following grades:

Class	Units	Grade
Algebra	5	B
Chemistry	4	C
English	3	A
History	3	B

When her grades arrived in the mail, she told me she had a 3.0 grade point average, because the A and C grades averaged to a B. I told her that her GPA was a little less than a 3.0. What do you think? Can you calculate her GPA? If not, you will be able to after you finish this section.

When you calculate your grade point average (GPA), you are calculating what is called a *weighted average*. To calculate your grade point average, you must first calculate the number of grade points you have earned in each class that you have completed. The number of grade points for a class is the product of the number of units the class is worth times the value of the grade received. The table below shows the value that is assigned to each grade.

Grade	Value
A	4
B	3
C	2
D	1
F	0

If you earn a B in a 4-unit class, you earn $4 \times 3 = 12$ grade points. A grade of C in the same class gives you $4 \times 2 = 8$ grade points. To find your grade point average for one term (a semester or quarter), you must add your grade points and divide that total by the number of units. Round your answer to the nearest hundredth.

9. If the phone company in Example 9 charged \$4.39 for a call, how long was the call?

Answer

9. 13 minutes

10. If Amy had earned a B in chemistry, instead of a C, what grade point average would she have?

Chapter 3 Decimals

EXAMPLE 10

Calculate Amy's grade point average using the information above.

SOLUTION We begin by writing in two more columns, one for the value of each grade (4 for an A, 3 for a B, 2 for a C, 1 for a D, and 0 for an F), and another for the grade points earned for each class. To fill in the grade points column, we multiply the number of units by the value of the grade:

Class	Units	Grade	Value	Grade Points
Algebra	5	B	3	$5 \times 3 = 15$
Chemistry	4	C	2	$4 \times 2 = 8$
English	3	A	4	$3 \times 4 = 12$
History	3	B	3	$3 \times 3 = 9$
Total Units	15			Total Grade Points: 44

To find her grade point average, we divide 44 by 15 and round (if necessary) to the nearest hundredth:

$$\text{Grade point average} = \frac{44}{15} = 2.93$$

STUDY SKILLS**Pay Attention to Instructions**

Taking a test is not like doing homework. On a test, the problems will be varied. When you do your homework, you usually work a number of similar problems. I have some students who do very well on their homework but become confused when they see the same problems on a test. The reason for their confusion is that they have not paid attention to the instructions on their homework. If a test problem asks for the *mean* of some numbers, then you must know the definition of the word *mean*. Likewise, if a test problem asks you to find a *sum* and then to *round* your answer to the nearest hundred, then you must know that the word *sum* indicates addition, and after you have added, you must round your answer as indicated.

Getting Ready for Class

After reading through the preceding section, respond in your own words and in complete sentences.

1. The answer to the division problem in Example 1 is $298 \frac{14}{20}$. Write this number in decimal notation.
2. In Example 4 we place a 0 at the end of a number without changing the value of the number. Why is the placement of this 0 helpful?
3. The expression $0.3778 \div 0.25$ is equivalent to the expression $37.78 \div 25$ because each number was multiplied by what?
4. Round 372.1675 to the nearest tenth.

Answer

10. 3.20

Problem Set 3.4

A Perform each of the following divisions. [Examples 1–5]

1. $394 \div 20$

2. $486 \div 30$

3. $248 \div 40$

4. $372 \div 80$

5. $5 \overline{)26}$

6. $8 \overline{)36}$

7. $25 \overline{)276}$

8. $50 \overline{)276}$

9. $28.8 \div 6$

10. $15.5 \div 5$

11. $77.6 \div 8$

12. $31.48 \div 4$

13. $35 \overline{)92.05}$

14. $26 \overline{)146.38}$

15. $45 \overline{)190.8}$

16. $55 \overline{)342.1}$

17. $86.7 \div 34$

18. $411.4 \div 44$

19. $29.7 \div 22$

20. $488.4 \div 88$

21. $4.5 \overline{)29.25}$

22. $3.3 \overline{)21.978}$

23. $0.11 \overline{)1.089}$

24. $0.75 \overline{)2.40}$

25. $2.3 \overline{)0.115}$

26. $6.6 \overline{)0.198}$

27. $0.012 \overline{)1.068}$

28. $0.052 \overline{)0.23712}$

29. $1.1 \overline{)2.42}$

30. $2.2 \overline{)7.26}$

Carry out each of the following divisions only so far as needed to round the results to the nearest hundredth. [Examples 6, 7]

31. $26\overline{)35}$

32. $18\overline{)47}$

33. $3.3\overline{)56}$

34. $4.4\overline{)75}$

35. $0.1234 \div 0.5$

36. $0.543 \div 2.1$

37. $19 \div 7$

38. $16 \div 6$

39. $0.059\overline{)0.69}$

40. $0.048\overline{)0.49}$

41. $1.99 \div 0.5$

42. $0.99 \div 0.5$

43. $2.99 \div 0.5$

44. $3.99 \div 0.5$

Calculator Problems Work each of the following problems on your calculator. If rounding is necessary, round to the nearest hundred thousandth.

45. $7 \div 9$

46. $11 \div 13$

47. $243 \div 0.791$

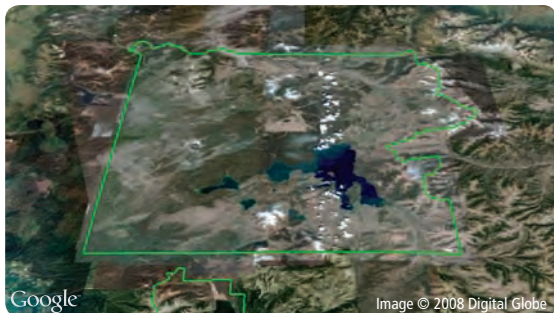
48. $67.8 \div 37.92$

49. $0.0503 \div 0.0709$

50. $429.87 \div 16.925$

B Applying the Concepts [Examples 8–10]

51. **Google Earth** The Google Earth map shows Yellowstone National Park. There is an average of 2.3 moose per square mile. If there are about 7,986 moose in Yellowstone, how many square miles does Yellowstone cover? Round to the nearest square mile.



52. **Google Earth** The Google Earth image shows a corn field. A farmer harvests 29,952 bushels of corn. If the farmer harvested 130 bushels per acre, how many acres does the field cover?



53. **Hot Air Balloon** Since the pilot of a hot air balloon can only control the balloon's altitude, he relies on the winds for travel. To ride on the jet streams, a hot air balloon must rise as high as 12 kilometers. Convert this to miles by dividing by 1.61. Round your answer to the nearest tenth of a mile.
54. **Hot Air Balloon** December and January are the best times for traveling in a hot-air balloon because the jet streams in the Northern Hemisphere are the strongest. They reach speeds of 400 kilometers per hour. Convert this to miles per hour by dividing by 1.61. Round to the nearest whole number.
55. **Wages** If a woman earns \$39.90 for working 6 hours, how much does she earn per hour?
56. **Wages** How many hours does a person making \$6.78 per hour have to work in order to earn \$257.64?
57. **Gas Mileage** If a car travels 336 miles on 15 gallons of gas, how far will the car travel on 1 gallon of gas?
58. **Gas Mileage** If a car travels 392 miles on 16 gallons of gas, how far will the car travel on 1 gallon of gas?

59. Wages Suppose a woman earns \$6.78 an hour for the first 36 hours she works in a week and then \$10.17 an hour in overtime pay for each additional hour she works in the same week. If she makes \$294.93 in one week, how many hours did she work overtime?

60. Wages Suppose a woman makes \$286.08 in one week. If she is paid \$5.96 an hour for the first 36 hours she works and then \$8.94 an hour in overtime pay for each additional hour she works in the same week, how many hours did she work overtime that week?

61. Phone Bill Suppose a telephone company charges \$0.41 for the first minute and then \$0.32 for each additional minute for a long-distance call. If a long-distance call costs \$2.33, how many minutes was the call?

62. Phone Bill Suppose a telephone company charges \$0.45 for the first three minutes and then \$0.29 for each additional minute for a long-distance call. If a long-distance call costs \$2.77, how many minutes was the call?

63. Women's Golf The table gives the top five money earners for the Ladies' Professional Golf Association (LPGA) in 2008, through June 1. Fill in the last column of the table by finding the average earnings per event for each golfer. Round your answers to the nearest dollar.

Rank	Name	Number of Events	Total Earnings	Average per Event
1.	Lorena Ochoa	25	\$1,838,616	
2.	Annika Sorenstam	13	\$1,295,585	
3.	Paula Creamer	24	\$891,804	
4.	Seon Hwa Lee	28	\$656,313	
5.	Jeong Jang	27	\$642,320	

64. Men's Golf The table gives the top five money earners for the men's Professional Golf Association (PGA) in 2008, through June 1. Fill in the last column of the table by finding the average earnings per event for each golfer. Round your answers to the nearest dollar.

Rank	Name	Number of Events	Total Earnings	Average per Event
1.	Tiger Woods	5	\$4,425,000	
2.	Phil Mickelson	13	\$3,872,270	
3.	Geoff Ogilvy	13	\$2,584,685	
4.	Stewart Cink	13	\$2,516,512	
5.	Kenny Perry	15	\$2,437,655	

Grade Point Average The following grades were earned by Steve during his first term in college. Use these data to answer Problems 65–68.

Class	Units	Grade
Basic mathematics	3	A
Health	2	B
History	3	B
English	3	C
Chemistry	4	C

65. Calculate Steve's GPA.

66. If his grade in chemistry had been a B instead of a C, by how much would his GPA have increased?

67. If his grade in health had been a C instead of a B, by how much would his grade point average have dropped?

68. If his grades in both English and chemistry had been B's, what would his GPA have been?

■ Getting Ready for the Next Section

In the next section we will consider the relationship between fractions and decimals in more detail. The problems below review some of the material that is necessary to make a successful start in the next section.

Reduce to lowest terms.

69. $\frac{75}{100}$

70. $\frac{220}{1,000}$

71. $\frac{12}{18}$

72. $\frac{15}{30}$

73. $\frac{75}{200}$

74. $\frac{220}{2,000}$

75. $\frac{38}{100}$

76. $\frac{75}{1,000}$

Write each fraction as an equivalent fraction with denominator 10.

77. $\frac{3}{5}$

78. $\frac{1}{2}$

Write each fraction as an equivalent fraction with denominator 100.

79. $\frac{3}{5}$

80. $\frac{17}{20}$

Write each fraction as an equivalent fraction with denominator 15.

81. $\frac{4}{5}$

82. $\frac{2}{3}$

83. $\frac{4}{1}$

84. $\frac{2}{1}$

85. $\frac{6}{5}$

86. $\frac{7}{3}$

Divide.

87. $3 \div 4$

88. $3 \div 5$

89. $7 \div 8$

90. $3 \div 8$

■ Maintaining Your Skills

Simplify.

91. $15\left(\frac{2}{3} + \frac{3}{5}\right)$

92. $15\left(\frac{4}{5} - \frac{1}{3}\right)$

93. $4\left(\frac{1}{2} + \frac{1}{4}\right)$

94. $6\left(\frac{1}{3} + \frac{1}{2}\right)$

Fractions and Decimals, and the Volume of a Sphere

3.5

Introduction . . .

If you are shopping for clothes and a store has a sale advertising $\frac{1}{3}$ off the regular price, how much can you expect to pay for a pair of pants that normally sells for \$31.95? If the sale price of the pants is \$22.30, have they really been marked down by $\frac{1}{3}$? To answer questions like these, we need to know how to solve problems that involve fractions and decimals together.

We begin this section by showing how to convert back and forth between fractions and decimals.


A Converting Fractions to Decimals

You may recall that the notation we use for fractions can be interpreted as implying division. That is, the fraction $\frac{3}{4}$ can be thought of as meaning “3 divided by 4.” We can use this idea to convert fractions to decimals.

EXAMPLE 1 Write $\frac{3}{4}$ as a decimal.

SOLUTION Dividing 3 by 4, we have

$$\begin{array}{r} .75 \\ 4 \overline{)3.00} \\ \underline{28} \\ 20 \\ \underline{20} \\ 0 \end{array}$$

The fraction $\frac{3}{4}$ is equal to the decimal 0.75. 

EXAMPLE 2 Write $\frac{7}{12}$ as a decimal correct to the thousandths column.

SOLUTION Because we want the decimal to be rounded to the thousandths column, we divide to the ten thousandths column and round off to the thousandths column:

$$\begin{array}{r} .5833 \\ 12 \overline{)7.0000} \\ \underline{60} \\ 100 \\ \underline{96} \\ 40 \\ \underline{36} \\ 40 \\ \underline{36} \\ 4 \end{array}$$

Rounding off to the thousandths column, we have 0.583. Because $\frac{7}{12}$ is not exactly the same as 0.583, we write

$$\frac{7}{12} \approx 0.583$$

where the symbol \approx is read “is approximately.” 

Objectives

- A** Convert fractions to decimals.
- B** Convert decimals to fractions.
- C** Simplify expressions containing fractions and decimals.
- D** Solve applications involving fractions and decimals.

PRACTICE PROBLEMS

1. Write as a decimal.
 - a. $\frac{2}{5}$
 - b. $\frac{3}{5}$
 - c. $\frac{4}{5}$

2. Write as a decimal correct to the thousandths column.
 - a. $\frac{11}{12}$
 - b. $\frac{12}{13}$

Answers

1. a. 0.4 b. 0.6 c. 0.8
2. a. 0.917 b. 0.923

If we wrote more zeros after 7.0000 in Example 2, the pattern of 3's would continue for as many places as we could want. When we get a sequence of digits that repeat like this, $0.58333 \dots$, we can indicate the repetition by writing

$$0.58\overline{3} \quad \text{The bar over the 3 indicates that the 3 repeats from there on}$$

3. Write $\frac{5}{11}$ as a decimal.

EXAMPLE 3

Write $\frac{3}{11}$ as a decimal.

SOLUTION Dividing 3 by 11, we have

$$\begin{array}{r} .272727 \\ 11 \overline{) 3.000000} \\ \underline{22} \\ 80 \\ \underline{77} \\ 30 \\ \underline{22} \\ 80 \\ \underline{77} \\ 30 \\ \underline{22} \\ 80 \\ \underline{77} \\ 3 \end{array}$$

No matter how long we continue the division, the remainder will never be 0, and the pattern will continue. We write the decimal form of $\frac{3}{11}$ as $0.\overline{27}$, where

$$0.\overline{27} = 0.272727 \dots \quad \text{The dots mean "and so on"}$$

Note

The bar over the 2 and the 7 in $0.\overline{27}$ is used to indicate that the pattern repeats itself indefinitely.

B Converting Decimals to Fractions

To convert decimals to fractions, we take advantage of the place values we assigned to the digits to the right of the decimal point.

EXAMPLE 4

Write 0.38 as a fraction in lowest terms.

SOLUTION 0.38 is 38 hundredths, or

$$\begin{aligned} 0.38 &= \frac{38}{100} \\ &= \frac{19}{50} \quad \text{Divide the numerator and the denominator by 2 to reduce to lowest terms} \end{aligned}$$

The decimal 0.38 is equal to the fraction $\frac{19}{50}$.

We could check our work here by converting $\frac{19}{50}$ back to a decimal. We do this by dividing 19 by 50. That is,

$$\begin{array}{r} .38 \\ 50 \overline{) 19.00} \\ \underline{150} \\ 400 \\ \underline{400} \\ 0 \end{array}$$

4. Write as a fraction in lowest terms.
 a. 0.48
 b. 0.048

Answers

3. $0.\overline{45}$ 4. a. $\frac{12}{25}$ b. $\frac{6}{125}$

EXAMPLE 5

Convert 0.075 to a fraction.

SOLUTION We have 75 thousandths, or

$$\begin{aligned} 0.075 &= \frac{75}{1,000} \\ &= \frac{3}{40} \end{aligned}$$

Divide the numerator and the denominator
by 25 to reduce to lowest terms

EXAMPLE 6

Write 15.6 as a mixed number.

SOLUTION Converting 0.6 to a fraction, we have

$$0.6 = \frac{6}{10} = \frac{3}{5} \quad \text{Reduce to lowest terms}$$

Since $0.6 = \frac{3}{5}$, we have $15.6 = 15\frac{3}{5}$.**C Problems Containing Both Fractions and Decimals**

We continue this section by working some problems that involve both fractions and decimals.

EXAMPLE 7Simplify: $\frac{19}{50}(1.32 + 0.48)$ **SOLUTION** In Example 4, we found that $0.38 = \frac{19}{50}$. Therefore we can rewrite the problem as

$$\begin{aligned} \frac{19}{50}(1.32 + 0.48) &= 0.38(1.32 + 0.48) && \text{Convert all numbers to decimals} \\ &= 0.38(1.80) && \text{Add: } 1.32 + 0.48 \\ &= 0.684 && \text{Multiply: } 0.38 \times 1.80 \end{aligned}$$

EXAMPLE 8Simplify: $\frac{1}{2} + (0.75)\left(\frac{2}{5}\right)$ **SOLUTION** We could do this problem one of two different ways. First, we could convert all fractions to decimals and then simplify:

$$\begin{aligned} \frac{1}{2} + (0.75)\left(\frac{2}{5}\right) &= 0.5 + 0.75(0.4) && \text{Convert to decimals} \\ &= 0.5 + 0.300 && \text{Multiply: } 0.75 \times 0.4 \\ &= 0.8 && \text{Add} \end{aligned}$$

Or, we could convert 0.75 to $\frac{3}{4}$ and then simplify:

$$\begin{aligned} \frac{1}{2} + 0.75\left(\frac{2}{5}\right) &= \frac{1}{2} + \frac{3}{4}\left(\frac{2}{5}\right) && \text{Convert decimals to fractions} \\ &= \frac{1}{2} + \frac{3}{10} && \text{Multiply: } \frac{3}{4} \times \frac{2}{5} \\ &= \frac{5}{10} + \frac{3}{10} && \text{The common denominator is 10} \\ &= \frac{8}{10} && \text{Add numerators} \\ &= \frac{4}{5} && \text{Reduce to lowest terms} \end{aligned}$$

The answers are equivalent. That is, $0.8 = \frac{8}{10} = \frac{4}{5}$. Either method can be used with problems of this type.

5. Convert 0.025 to a fraction.

6. Write 12.8 as a mixed number.

7. Simplify: $\frac{14}{25}(2.43 + 0.27)$ 8. Simplify: $\frac{1}{4} + 0.25\left(\frac{3}{5}\right)$ **Answers**5. $\frac{1}{40}$ 6. $12\frac{4}{5}$ 7. 1.5128. $\frac{2}{5}$, or 0.4

9. Simplify: $\left(\frac{1}{3}\right)^3(5.4) + \left(\frac{1}{5}\right)^2(2.5)$

10. A shirt that normally sells for \$35.50 is on sale for $\frac{1}{4}$ off. What is the sale price of the shirt? (Round to the nearest cent.)

11. Find the area of the stamp in Example 11 if
Base = 6.6 centimeters,
height = 3.3 centimeters

EXAMPLE 9

Simplify: $\left(\frac{1}{2}\right)^3(2.4) + \left(\frac{1}{4}\right)^2(3.2)$

SOLUTION This expression can be simplified without any conversions between fractions and decimals. To begin, we evaluate all numbers that contain exponents. Then we multiply. After that, we add.

$$\begin{aligned} \left(\frac{1}{2}\right)^3(2.4) + \left(\frac{1}{4}\right)^2(3.2) &= \frac{1}{8}(2.4) + \frac{1}{16}(3.2) && \text{Evaluate exponents} \\ &= 0.3 + 0.2 && \text{Multiply by } \frac{1}{8} \text{ and } \frac{1}{16} \\ &= 0.5 && \text{Add} \end{aligned}$$

D Applications**EXAMPLE 10**

If a shirt that normally sells for \$27.99 is on sale for $\frac{1}{3}$ off, what is the sale price of the shirt?

SOLUTION To find out how much the shirt is marked down, we must find $\frac{1}{3}$ of 27.99. That is, we multiply $\frac{1}{3}$ and 27.99, which is the same as dividing 27.99 by 3.

$$\frac{1}{3}(27.99) = \frac{27.99}{3} = 9.33$$

The shirt is marked down \$9.33. The sale price is the original price less the amount it is marked down:

$$\text{Sale price} = 27.99 - 9.33 = 18.66$$

The sale price is \$18.66. We also could have solved this problem by simply multiplying the original price by $\frac{2}{3}$, since, if the shirt is marked $\frac{1}{3}$ off, then the sale price must be $\frac{2}{3}$ of the original price. Multiplying by $\frac{2}{3}$ is the same as dividing by 3 and then multiplying by 2. The answer would be the same.

EXAMPLE 11

Find the area of the stamp.

Write your answer as a decimal, rounded to the nearest hundredth.



$$\text{Base} = 2\frac{5}{8} \text{ inches}$$

$$\text{Height} = 1\frac{1}{4} \text{ inches}$$

SOLUTION We can work the problem using fractions and then convert the answer to a decimal.

$$A = \frac{1}{2}bh = \frac{1}{2}\left(2\frac{5}{8}\right)\left(1\frac{1}{4}\right) = \frac{1}{2} \cdot \frac{21}{8} \cdot \frac{5}{4} = \frac{105}{64} \approx 1.64 \text{ in}^2$$

Or, we can convert the fractions to decimals and then work the problem.

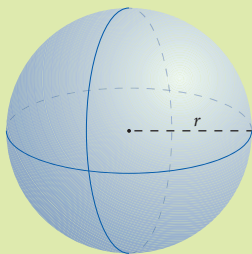
$$A = \frac{1}{2}bh = .5(2.625)(1.25) \approx 1.64 \text{ in}^2$$

Answers

9. 0.3 10. \$26.63 11. 10.89 cm²

FACTS FROM GEOMETRY The Volume of a Sphere

Figure 1 shows a sphere and the formula for its volume. Because the formula contains both the fraction $\frac{4}{3}$ and the number π , and we have been using 3.14 for π , we can think of the formula as containing both a fraction and a decimal.



$$\begin{aligned}\text{Volume} &= \frac{4}{3}\pi(\text{radius})^3 \\ &= \frac{4}{3}\pi r^3\end{aligned}$$

FIGURE 1 Sphere

EXAMPLE 12

Figure 2 is composed of a right circular cylinder with half a sphere on top. (A half-sphere is called a *hemisphere*.) To the nearest tenth, find the total volume enclosed by the figure.

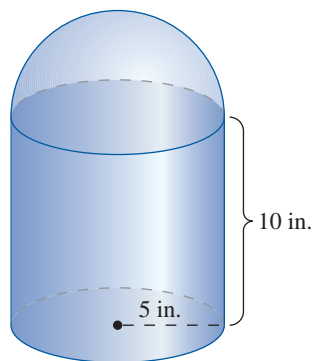


FIGURE 2

SOLUTION The total volume is found by adding the volume of the cylinder to the volume of the hemisphere.

$$V = \text{volume of cylinder} + \text{volume of hemisphere}$$

$$= \pi r^2 h + \frac{1}{2} \cdot \frac{4}{3} \pi r^3$$

$$= (3.14)(5)^2(10) + \frac{1}{2} \cdot \frac{4}{3} (3.14)(5)^3$$

$$= (3.14)(25)(10) + \frac{1}{2} \cdot \frac{4}{3} (3.14)(125)$$

$$= 785 + \frac{2}{3}(392.5) \quad \text{Multiply: } \frac{1}{2} \cdot \frac{4}{3} = \frac{4}{6} = \frac{2}{3}$$

$$= 785 + \frac{785}{3} \quad \text{Multiply: } 2(392.5) = 785$$

$$\approx 785 + 261.7 \quad \text{Divide 785 by 3, and round to the nearest tenth}$$

$$= 1,046.7 \text{ in}^3$$

12. If the radius in Figure 2 is doubled so that it becomes 10 inches instead of 5 inches, what is the new volume of the figure? Round your answer to the nearest tenth.

Answer

12. 5,233.3 in³

Getting Ready for Class

After reading through the preceding section, respond in your own words and in complete sentences.

1. To convert fractions to decimals, do we multiply or divide the numerator by the denominator?
2. The decimal 0.13 is equivalent to what fraction?
3. Write 36 thousandths in decimal form and in fraction form.
4. Explain how to write the fraction $\frac{84}{1,000}$ in lowest terms.

B Write each decimal as a fraction in lowest terms. [Examples 4–6]

23. 0.15

24. 0.45

25. 0.08

26. 0.06

27. 0.375

28. 0.475

B Write each decimal as a mixed number. [Examples 6]

29. 5.6

30. 8.4

31. 5.06

32. 8.04

33. 1.22

34. 2.11

C Simplify each of the following as much as possible, and write all answers as decimals. [Examples 7–9]

35. $\frac{1}{2}(2.3 + 2.5)$

36. $\frac{3}{4}(1.8 + 7.6)$

37. $\frac{1.99}{\frac{1}{2}}$

38. $\frac{2.99}{\frac{1}{2}}$

39. $3.4 - \frac{1}{2}(0.76)$

40. $6.7 - \frac{1}{5}(0.45)$

41. $\frac{2}{5}(0.3) + \frac{3}{5}(0.3)$

42. $\frac{1}{8}(0.7) + \frac{3}{8}(0.7)$

43. $6\left(\frac{3}{5}\right)(0.02)$

44. $8\left(\frac{4}{5}\right)(0.03)$

45. $\frac{5}{8} + 0.35\left(\frac{1}{2}\right)$

46. $\frac{7}{8} + 0.45\left(\frac{3}{4}\right)$

47. $\left(\frac{1}{3}\right)^2(5.4) + \left(\frac{1}{2}\right)^3(3.2)$

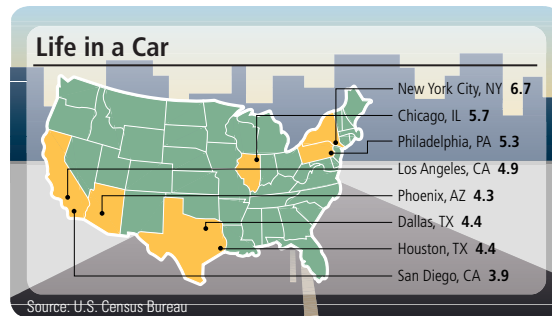
48. $\left(\frac{1}{5}\right)^2(7.5) + \left(\frac{1}{4}\right)^2(6.4)$

49. $(0.25)^2 + \left(\frac{1}{4}\right)^2(3)$

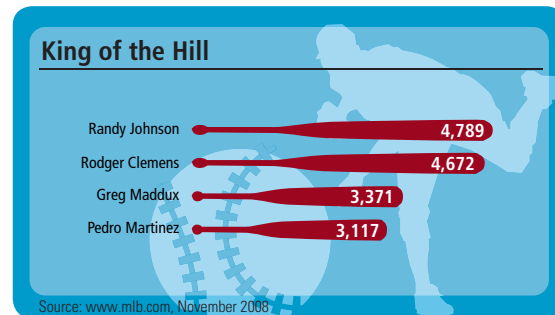
50. $(0.75)^2 + \left(\frac{1}{4}\right)^2(7)$

D Applying the Concepts [Examples 10–12]


51. **Commuting** The map shows the average number of days spent commuting per year in the United States' largest cities. Change the data for Houston to a mixed number.



52. **Pitchers** The chart shows the major league pitchers with the most career strikeouts. To compute the number of strikeouts per nine-inning game, divide by the total innings pitched and then multiply by 9. If Pedro Martinez had pitched 2,783 innings, write his strikeouts per game as a mixed number.



53. **Price of Beef** If each pound of beef costs \$4.99, how much does $3\frac{1}{4}$ pounds cost?
54. **Price of Gasoline** What does it cost to fill a $15\frac{1}{2}$ -gallon gas tank if the gasoline is priced at 429.9¢ per gallon?
55. **Sale Price** A dress that costs \$78.99 is on sale for $\frac{1}{3}$ off. What is the sale price of the dress?
56. **Sale Price** A suit that normally sells for \$221 is on sale for $\frac{1}{4}$ off. What is the sale price of the suit?
57. **Perimeter of the Sierpinski Triangle** The diagram below shows one stage of what is known as the Sierpinski triangle. Each triangle in the diagram has three equal sides. The large triangle is made up of 4 smaller triangles. If each side of the large triangle is 2 inches, and each side of the smaller triangles is 1 inch, what is the perimeter of the shaded region?



- 59. Average Gain in Stock Price** The table below shows the amount of gain each day of one week in 2008 for the price of an Internet company specializing in distance learning for college students. Complete the table by converting each fraction to a decimal, rounding to the nearest hundredth if necessary.

CHANGE IN STOCK PRICE		
Date	Gain (\$)	As a Decimal (\$) (To the Nearest hundredth)
Monday, March 6, 2008	$\frac{3}{4}$	
Tuesday, March 7, 2008	$\frac{9}{16}$	
Wednesday, March 8, 2008	$\frac{3}{32}$	
Thursday, March 9, 2008	$\frac{7}{32}$	
Friday, March 10, 2008	$\frac{1}{16}$	

- 60. Average Gain in Stock Price** The table below shows the amount of gain each day of one week in 2008 for the stock price of amazon.com, an online bookstore. Complete the table by converting each fraction to a decimal, rounding to the nearest hundredth, if necessary.

CHANGE IN STOCK PRICE		
Date	Gain	As a Decimal (\$) (To the Nearest Hundredth)
Monday, March 6, 2008	$\frac{1}{16}$	
Tuesday, March 7, 2008	$1\frac{3}{8}$	
Wednesday, March 8, 2008	$\frac{3}{8}$	
Thursday, March 9, 2008	$5\frac{13}{16}$	
Friday, March 10, 2008	$\frac{3}{8}$	

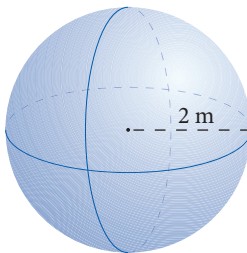
- 61. Nutrition** If 1 ounce of ground beef contains 50.75 calories and 1 ounce of halibut contains 27.5 calories, what is the difference in calories between a $4\frac{1}{2}$ -ounce serving of ground beef and a $4\frac{1}{2}$ -ounce serving of halibut?
- 62. Nutrition** If a 1-ounce serving of baked potato contains 48.3 calories and a 1-ounce serving of chicken contains 24.6 calories, how many calories are in a meal of $5\frac{1}{4}$ ounces of chicken and a $3\frac{1}{3}$ -ounce baked potato?

Taxi Ride Recently, the Texas Junior College Teachers Association annual conference was held in Austin. At that time a taxi ride in Austin was \$1.25 for the first $\frac{1}{5}$ of a mile and \$0.25 for each additional $\frac{1}{5}$ of a mile. The charge for a taxi to wait is \$12.00 per hour. Use this information for Problems 63 through 66.

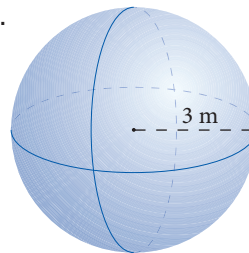
63. If the distance from one of the convention hotels to the airport is 7.5 miles, how much will it cost to take a taxi from that hotel to the airport?
64. If you were to tip the driver of the taxi in Problem 63 \$1.50, how much would it cost to take a taxi from the hotel to the airport?
65. Suppose the distance from one of the hotels to one of the western dance clubs in Austin is 12.4 miles. If the fare meter in the taxi gives the charge for that trip as \$16.50, is the meter working correctly?
66. Suppose that the distance from a hotel to the airport is 8.2 miles, and the ride takes 20 minutes. Is it more expensive to take a taxi to the airport or to just sit in the taxi?

Volume Find the volume of each sphere. Round to the nearest hundredth. Use 3.14 for π . [Example 12]

67.

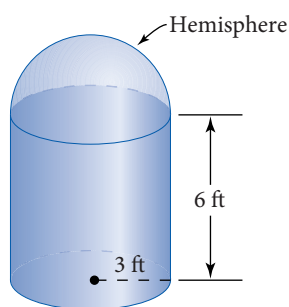


68.

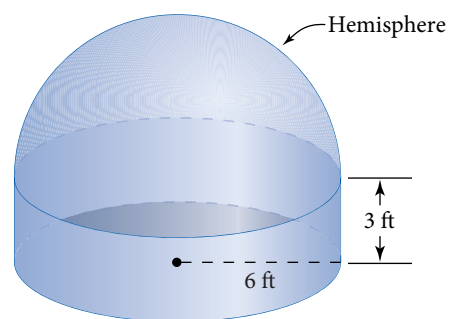


Volume Find the volume of each figure. Round to the nearest tenth. Use 3.14 for π . [Example 12]

69.

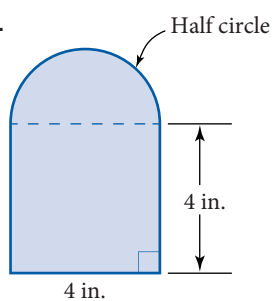


70.

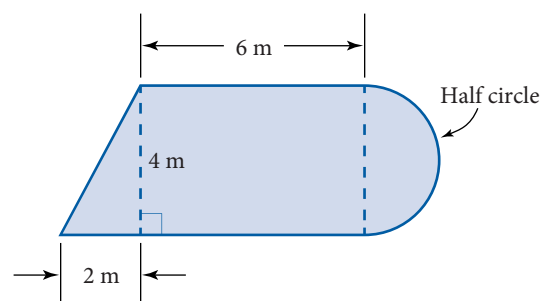


Area Find the total area enclosed by each figure below. Use 3.14 for π .

71.



72.



■ Maintaining Your Skills

73. Find the sum of 827 and 25.

74. Find the difference of 827 and 25.

75. Find the product of 827 and 25.

76. Find the quotient of 827 and 25.

Chapter 3 Summary

Place Value [3.1]

The place values for the first five places to the right of the decimal point are

Decimal Point	Tenths	Hundredths	Thousandths	Ten Thousandths	Hundred Thousandths
.	$\frac{1}{10}$	$\frac{1}{100}$	$\frac{1}{1,000}$	$\frac{1}{10,000}$	$\frac{1}{100,000}$

Rounding Decimals [3.1]

If the digit in the column to the right of the one we are rounding to is 5 or more, we add 1 to the digit in the column we are rounding to; otherwise, we leave it alone. We then replace all digits to the right of the column we are rounding to with zeros if they are to the left of the decimal point; otherwise, we simply delete them.

Addition and Subtraction with Decimals [3.2]

To add (or subtract) decimal numbers, we align the decimal points and add (or subtract) as if we were adding (or subtracting) whole numbers. The decimal point in the answer goes directly below the decimal points in the problem.

Multiplication with Decimals [3.3]

To multiply two decimal numbers, we multiply as if the decimal points were not there. The decimal point in the product has as many digits to the right as there are total digits to the right of the decimal points in the two original numbers.

Division with Decimals [3.4]

To begin a division problem with decimals, we make sure that the divisor is a whole number. If it is not, we move the decimal point in the divisor to the right as many places as it takes to make it a whole number. We must then be sure to move the decimal point in the dividend the same number of places to the right. Once the divisor is a whole number, we divide as usual. The decimal point in the answer is placed directly above the decimal point in the dividend.

EXAMPLES

- The number 4.123 in words is "four and one hundred twenty-three thousandths."

- 357.753 rounded to the nearest Tenth: 357.8
Ten: 360

- $$\begin{array}{r} 3.400 \\ 25.060 \\ + 0.347 \\ \hline 28.807 \end{array}$$

- If we multiply 3.49×5.863 , there will be a total of $2 + 3 = 5$ digits to the right of the decimal point in the answer.

- $$\begin{array}{r} 1.39 \\ 2.5 \overline{)3.475} \\ \underline{25} \\ 97 \\ \underline{75} \\ 225 \\ \underline{225} \\ 0 \end{array}$$

6. $\frac{4}{15} = 0.2\overline{6}$ because

$$\begin{array}{r} .266 \\ 15 \overline{)4.000} \\ \underline{30} \\ 100 \\ \underline{90} \\ 100 \\ \underline{90} \\ 10 \end{array}$$

7. $0.781 = \frac{781}{1,000}$

Changing Fractions to Decimals [3.5]

To change a fraction to a decimal, we divide the numerator by the denominator.

Changing Decimals to Fractions [3.5]

To change a decimal to a fraction, we write the digits to the right of the decimal point over the appropriate power of 10.

Chapter 3 Review

Give the place value of the 7 in each of the following numbers. [3.1]

1. 36.007

2. 121.379

Write each of the following as a decimal number. [3.1]

3. Thirty-seven and forty-two ten thousandths

4. One hundred and two hundred two hundred thousandths

Round 98.7654 to the nearest: [3.1]

5. hundredth

6. hundred

Perform the following operations. [3.2, 3.3, 3.4]

7. $3.78 + 2.036$

8. $11.076 - 3.297$

9. 6.7×5.43

10. $0.89(24.24)$

11. $29.07 \div 3.8$

12. $0.7134 \div 0.58$

13. $65 \overline{)460.85}$

14. $(0.25)^3$

15. $13.27 - 7.541$

16. $8.52 + 5.4$

17. $0.24(4.2)$

18. $42.5 \div 3.4$

19. $6.5 \overline{)221.65}$

20. $(0.42)^2$

21. 2.6×1.6

22. $5.7 \div 0.15$

Write as a decimal. [3.5]

23. $\frac{7}{8}$

24. $\frac{3}{16}$

Write as a fraction in lowest terms. [3.5]

25. 0.705

26. 0.246

Write as a mixed number. [3.5]

27. 14.125

28. 5.05

Simplify each of the following expressions as much as possible. [3.5]

29. $3.3 - 4(0.22)$

30. $54.987 - 2(3.05 + 0.151)$

31. $125\left(\frac{3}{5}\right) + 4$

32. $\frac{3}{5}(0.9) + \frac{2}{5}(0.4)$

33. $0.3(1.7)(2.4)$

34. $3.6(1.4 - 0.5)$

35. $4(1.2 - 0.7) - 1.6$

Chapter 3 Cumulative Review

Simplify.

1. $3,781 + 298$

2. $903 - 576$

3. $56(287)$

4. $2.106 - 1.79$

5. $24\overline{)149.28}$

6. $\frac{2}{7} + \frac{3}{5}$

7. $4.3(12.96)$

8. $1,292 \div 17$

9. $\frac{5}{14} \div \frac{15}{21}$

10. Round 463,612 to the nearest thousand.

11. Change $\frac{63}{4}$ to a mixed number.

12. Change $2\frac{1}{5}$ to an improper fraction.

13. Find the product of $2\frac{1}{2}$ and 8.

14. Change each decimal into a fraction.

Decimal	Fraction
0.125	
0.250	
0.375	
0.500	
0.625	
0.750	
0.875	
1	

15. Give the quotient of 72 and 8.

16. Identify the property or properties used in the following: $2 \cdot (x \cdot 3) = (2 \cdot 3) \cdot x$

17. Translate into symbols, then simplify: Three times the sum of 13 and 4 is 51.

18. Reduce $\frac{120}{70}$.

19. **True or False?** Adding the same number to the numerator and denominator of a fraction produces an equivalent fraction.

Simplify.

20. $6(4)^2 - 8(2)^3$

21. $\frac{6 + 2(4)}{8 + 10}$

22. $10\left(\frac{1}{2}\right) + 6\left(\frac{2}{3}\right)$

23. $\frac{2}{3}(0.45) + \frac{4}{5}(0.8)$

24. $\left(\frac{1}{2}\right)^3 + \left(\frac{1}{4}\right)^2$

25. $\left(3\frac{1}{3} - \frac{1}{2}\right)\left(4\frac{1}{2} + \frac{3}{4}\right)$

26. **Average Score** Lorena has scores of 83, 85, 79, 93, and 80 on her first five math tests. What is her average score for these five tests?

27. **Recipe** A muffin recipe calls for $2\frac{3}{4}$ cups of flour. If the recipe is tripled, how many cups of flour will be needed?

28. **Hourly Wage** If you earn \$384 for working 40 hours, what is your hourly wage?

Use the following illustration to answer problem 29.

U.S. Open	
The longest 18-hole golf courses to hold the U.S. Open	
7,214 yds	Bethpage State Park (NY) Black Course (2002)
7,214 yds	Pinehurst (NC) No. 2 Course (2005)
7,213 yds	Congressional C.C. (MD) Blue Course (1997)
7,195 yds	Medinah C.C. (IL)
7,191 yds	Bellerive C.C. (MO) (1965)

29. If each U.S. Open golf course has 18 holes, how long is the average hole for the Bellerive golf course?

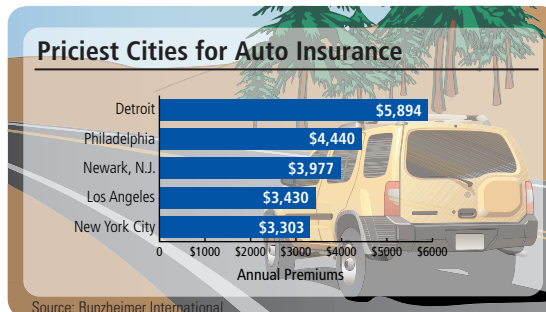
Chapter 3 Test

- Write the decimal number 5.053 in words.
- Give the place value of the 4 in the number 53.0543.
- Write seventeen and four hundred six ten thousandths as a decimal number.
- Round 46.7549 to the nearest hundredth.

Perform the following operations.

- $7 + 0.6 + 0.58$
- $12.032 - 5.976$
- $5.7(6.24)$
- $22.672 \div (2.6)$
- $4.3 + 7.06$
- $14.32 - 5.413$
- $0.4(2.8)(1.4)$
- $10.224 \div 42.6$
- Write $\frac{23}{25}$ as a decimal.
- Write 0.56 as a fraction in lowest terms.
- $5.2(2.8 + 0.02)$
- $5.2 - 3(0.17)$
- $23.852 - 3(2.01 + 0.231)$
- $\frac{3}{5}(0.6) - \frac{2}{3}(0.15)$
- $14.2 - 4(4.03 - 2.1)$
- $\frac{4}{5}(0.23) + 5(4.02 - 1.9)$
- A person purchases \$8.47 worth of goods at a drug-store. If a \$20 bill is used to pay for the purchases, how much change is received?
- If coffee sells for \$6.99 per pound, how much will 3.5 pounds of coffee cost?
- If a person earns \$262 for working 40 hours, what is the person's hourly wage?

The following illustration shows the average annual premiums for auto insurance in several U.S. cities. Use the data to answer problem 24.



- What is the monthly premium for someone living in Los Angeles? Round to the nearest cent.

Chapter 3 Projects

DECIMALS

GROUP PROJECT

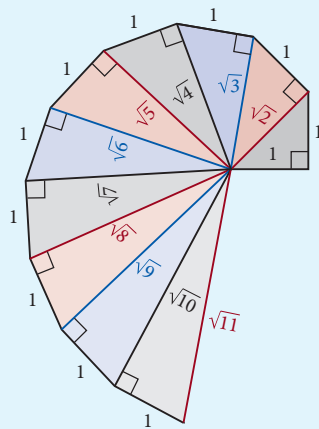
Unwinding the Spiral of Roots

Number of People 2–3

Time Needed 8–12 minutes


Equipment Pencil, ruler, graph paper, scissors, and tape

Background The diagram below is called the Spiral of Roots. We can use the Spiral of Roots to visualize square roots of whole numbers.



PhotoDisc/Getty Images

- Procedure**
1. Carefully cut out each triangle from the Spiral of Roots above.
 2. Line up the triangles horizontally on the coordinate system shown here so that the side of length 1 is on the x -axis and the hypotenuse is on the left. Note that the first triangle is shown in place, and the outline of the second triangle is next to it. The 1-unit side of each triangle should fit in each of the 1-unit spaces on the x -axis.
 3. On the coordinate system, plot a point at the tip of each triangle. Then, connect these points to create a line graph. Each vertical line has a length that is represented by the square root of one of the first 10 counting numbers.



RESEARCH PROJECT

The Wizard of Oz

In the 1939 movie *The Wizard of Oz*, the Scarecrow (played by Ray Bolger) sings “If I only had a brain.” Upon receiving a diploma from the great Oz, he rapidly recites a math theorem in an attempt to display his new knowl-

edge. Unfortunately, the Scarecrow’s inability to recite the Pythagorean Theorem might lead one to doubt the effectiveness of his diploma. Watch this scene in the movie. Write down the Scarecrow’s speech and explain the errors.



The Kobal Collection

A Glimpse of Algebra

In the beginning of this chapter and in Chapter 1, we wrote numbers in expanded form. If we were to write the number 345 in expanded form and then in terms of powers of 10, it would look like this:

$$\begin{aligned}345 &= 300 + 40 + 5 \\ &= 3 \cdot 100 + 4 \cdot 10 + 5 \\ &= 3 \cdot 10^2 + 4 \cdot 10 + 5\end{aligned}$$

If we replace the 10's with x 's in this last expression, we get what is called a *polynomial*. It looks like this:

$$3x^2 + 4x + 5$$

Polynomials are to algebra what whole numbers written in expanded form in terms of powers of 10 are to arithmetic. As in other expressions in algebra, we can use any variable we choose. Here are some other examples of polynomials:

$$4x - 5 \quad a^2 + 5a + 6 \quad y^3 + 3y^2 + 3y + 1$$

When we add two whole numbers, we add in columns. That is, if we add 345 and 234, we write one number under the other and add the numbers in the ones column, then the numbers in the tens column, and finally the numbers in the hundreds column. Here is how it looks.

$$\begin{array}{r}345 \\ 234 \\ \hline 579\end{array} \quad \text{or} \quad \begin{array}{r}3 \cdot 10^2 + 4 \cdot 10 + 5 \\ 2 \cdot 10^2 + 3 \cdot 10 + 4 \\ \hline 5 \cdot 10^2 + 7 \cdot 10 + 9\end{array}$$

We add polynomials in the same manner. If we want to add $3x^2 + 4x + 5$ and $2x^2 + 3x + 4$, we write one polynomial under the other, and then add in columns:

$$\begin{array}{r}3x^2 + 4x + 5 \\ 2x^2 + 3x + 4 \\ \hline 5x^2 + 7x + 9\end{array}$$

The sum of the two polynomials is the polynomial $5x^2 + 7x + 9$. We add only the digits. Notice that the variable parts (the letters) stay the same (just as the powers of 10 did when we added 345 and 234).

Here are some more examples.

EXAMPLE 1

Add $3x^2 + 2x + 6$ and $4x^2 + 7x + 3$.

SOLUTION We write one polynomial under the other and add in columns:

$$\begin{array}{r}3x^2 + 2x + 6 \\ 4x^2 + 7x + 3 \\ \hline 7x^2 + 9x + 9\end{array}$$

The sum of the two polynomials is $7x^2 + 9x + 9$. ■

PRACTICE PROBLEMS

1. Add $2x^2 + 4x + 2$ and $4x^2 + 3x + 5$.

Answers

1. $6x^2 + 7x + 7$

2. Add $3a + 7$ and $2a + 6$.

3. Add $2x^3 + 5x^2 + 3x + 6$,
 $3x^3 + 4x^2 + 9x + 8$, and
 $4x^3 + 2x^2 + 3x + 2$.

4. Add $3y^2 + 4y + 6$ and $6y^2 + 2$.

5. Add $5x^3 + 7x^2 + 3x + 1$ and
 $2x^2 + 4x + 1$.

EXAMPLE 2

Add $4a + 2$ and $5a + 9$.

SOLUTION We write one polynomial under the other and add in columns:

$$\begin{array}{r} 4a + 2 \\ 5a + 9 \\ \hline 9a + 11 \end{array}$$

EXAMPLE 3

Add $4x^3 + 2x^2 + 4x + 1$, $2x^3 + 3x^2 + 9x + 6$,
and $2x^3 + 2x^2 + 2x + 2$.

SOLUTION We add three polynomials the same way we add two of them. We write them one under the other and add in columns:

$$\begin{array}{r} 4x^3 + 2x^2 + 4x + 1 \\ 2x^3 + 3x^2 + 9x + 6 \\ 2x^3 + 2x^2 + 2x + 2 \\ \hline 8x^3 + 7x^2 + 15x + 9 \end{array}$$

EXAMPLE 4

Add $5y^2 + 3y + 6$ and $2y^2 + 3$.

SOLUTION We write one polynomial under the other, so that the terms with y^2 line up, and the terms without any y 's line up:

$$\begin{array}{r} 5y^2 + 3y + 6 \\ 2y^2 + 3 \\ \hline 7y^2 + 3y + 9 \end{array}$$

EXAMPLE 5

Add $2x^3 + 4x^2 + 2x + 6$ and $3x^2 + 2x + 1$.

SOLUTION Again, we line up terms with the same variable part and add:

$$\begin{array}{r} 2x^3 + 4x^2 + 2x + 6 \\ 3x^2 + 2x + 1 \\ \hline 2x^3 + 7x^2 + 4x + 7 \end{array}$$

Answers

2. $5a + 13$
3. $9x^3 + 11x^2 + 15x + 16$
4. $9y^2 + 4y + 8$
5. $5x^3 + 9x^2 + 7x + 2$

A Glimpse of Algebra Problems

In each case, add the polynomials.

1.
$$\begin{array}{r} 4x^2 + 2x + 3 \\ 2x^2 + 7x + 5 \\ \hline \end{array}$$

2.
$$\begin{array}{r} 3x^2 + 4x + 5 \\ 5x^2 + 4x + 3 \\ \hline \end{array}$$

3.
$$\begin{array}{r} 2a + 3 \\ 3a + 5 \\ \hline \end{array}$$

4.
$$\begin{array}{r} 5a + 2 \\ 2a + 1 \\ \hline \end{array}$$

5.
$$\begin{array}{r} 3x + 4 \\ 2x + 1 \\ 4x + 1 \\ \hline \end{array}$$

6.
$$\begin{array}{r} 2x + 1 \\ 3x + 2 \\ 4x + 3 \\ \hline \end{array}$$

7.
$$\begin{array}{r} 2y^3 + 3y^2 + 4y + 5 \\ 3y^3 + 2y^2 + 5y + 2 \\ \hline \end{array}$$

8.
$$\begin{array}{r} 4y^3 + 2y^2 + 6y + 7 \\ 5y^3 + 6y^2 + 2y + 8 \\ \hline \end{array}$$

9. Add $3x^2 + 4x + 3$ and $3x^2 + 2$.

10. Add $5x^2 + 6x + 7$ and $4x^2 + 2$.

11. Add $3a^2 + 4$ and $7a + 2$.

12. Add $2a^2 + 5$ and $4a + 3$.

13. Add $5x^3 + 4x^2 + 7x + 3$ and $3x^2 + 9x + 10$.

14. Add $2x^3 + 7x^2 + 3x + 1$ and $4x^2 + 3x + 8$.

Ratio and Proportion

4



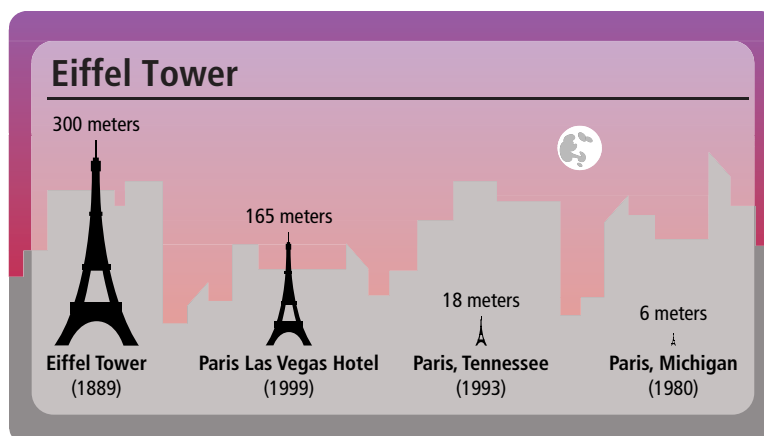
Chapter Outline

- 4.1 Ratios
- 4.2 Rates and Unit Pricing
- 4.3 Solving Equations by Division
- 4.4 Proportions
- 4.5 Applications of Proportions
- 4.6 Similar Figures

Introduction

The Eiffel Tower in Paris, France, is one of the most recognizable structures in the world. It was built in 1889 on the Champ de Mars beside the Seine River and named after its designer, engineer Gustave Eiffel. At that time it was the world's tallest tower, measuring 300 meters. Today it remains the tallest building in Paris.

This structure has inspired many reproductions, that is, towers built as replicas of the original Eiffel tower. The chart below shows the location and heights of some of these towers:



As you can see, these replicas are all different sizes. In mathematics, we can use ratios to compare those different size towers. For instance, we say the largest height and smallest height in the chart are in a ratio of 50 to 1. In this chapter, we study ratios like this one. As you will see, ratios are very closely related to fractions and decimals, which we have already studied.

Chapter Pretest

The Pretest below contains problems that are representative of the problems you will find in the chapter.

Express each ratio as a fraction in lowest terms.

1. 15 to 25

2. 400 to 150

3. $\frac{5}{4}$ to $\frac{7}{4}$

4. 3.2 to 4.6

5. A car travels 434 miles in 7 hours. What is the rate of the car in miles per hour?

6. A 16-ounce container of heavy whipping cream costs \$2.40. Find the price per ounce.

Solve each proportion.

7. $\frac{5}{6} = \frac{x}{12}$

8. $\frac{2}{y} = \frac{4}{10}$

9. $\frac{9}{7} = \frac{6}{x}$

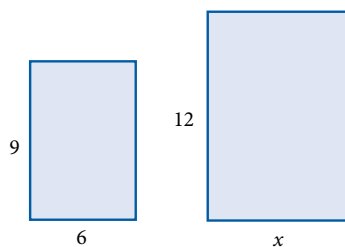
10. $\frac{n}{8} = \frac{\frac{1}{6}}{\frac{1}{9}}$

11. A trucker drives his rig 480 miles in 8 hours. At this rate, how far will he travel in 12 hours?

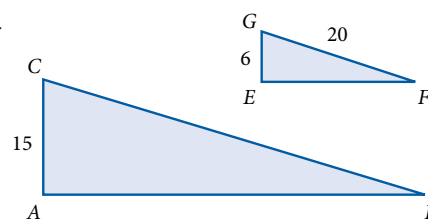
12. A company reimburses its employees 36.5¢ for every mile of business travel. If an employee drives 150 miles, how much will she be reimbursed?

Assume the figures presented are similar.

13. Find length x .



14. Find length BC .



Getting Ready for Chapter 4

The problems below review material covered previously that you need to know in order to be successful in Chapter 4.

Reduce to lowest terms.

1. $\frac{16}{48}$

2. $\frac{320}{160}$

Write as a decimal.

3. $\frac{1}{4}$

4. $\frac{1}{8}$

Multiply or divide as indicated.

5. $5 \cdot 13$

6. $3(0.4)$

7. $3.5(85)$

8. $\frac{2}{3} \cdot 6$

9. 0.08×100

10. 0.12×100

11. $125 \div 2$

12. $1.39 \div 2$

13. $\frac{1.99}{\frac{1}{2}}$

14. $\frac{\frac{2}{3}}{\frac{4}{9}}$

Divide. Round answers to the nearest tenth.

15. $48 \div 5.5$

16. $75 \div 11.5$

Introduction

The *ratio* of two numbers is a way of comparing them. If we say that the ratio of two numbers is 2 to 1, then the first number is twice as large as the second number. For example, if there are 10 men and 5 women enrolled in a math class, then the ratio of men to women is 10 to 5. Because 10 is twice as large as 5, we can also say that the ratio of men to women is 2 to 1.

We can define the ratio of two numbers in terms of fractions.

A Express Ratios as Fractions in Lowest Terms

Definition

A **ratio** is a comparison between two numbers and is represented as a fraction, where the first number in the ratio is the numerator and the second number in the ratio is the denominator. *In symbols:*

If a and b are any two numbers,
then the ratio of a to b is $\frac{a}{b}$. ($b \neq 0$)

We handle ratios the same way we handle fractions. For example, when we said that the ratio of 10 men to 5 women was the same as the ratio 2 to 1, we were actually saying

$$\frac{10}{5} = \frac{2}{1} \quad \text{Reducing to lowest terms}$$


Because we have already studied fractions in detail, much of the introductory material on ratios will seem like review.

EXAMPLE 1

Express the ratio of 16 to 48 as a fraction in lowest terms.

SOLUTION Because the ratio is 16 to 48, the numerator of the fraction is 16 and the denominator is 48:

$$\frac{16}{48} = \frac{1}{3} \quad \text{In lowest terms}$$

Notice that the first number in the ratio becomes the numerator of the fraction, and the second number in the ratio becomes the denominator. 

STUDY SKILLS

Continue to Set and Keep a Schedule

Sometimes I find students do well at first and then become overconfident. They begin to put in less time with their homework. Don't do it. Keep to the same schedule.

Objectives

- A** Express ratios as fractions in lowest terms.
- B** Use ratios to solve application problems.

PRACTICE PROBLEMS

1. **a.** Express the ratio of 32 to 48 as a fraction in lowest terms.
- b.** Express the ratio of 3.2 to 4.8 as a fraction in lowest terms.
- c.** Express the ratio of 0.32 to 0.48 as a fraction in lowest terms.

Answer

1. All are $\frac{2}{3}$

2. a. Give the ratio of $\frac{3}{5}$ to $\frac{9}{10}$ as a fraction in lowest terms.
 b. Give the ratio of 0.6 to 0.9 as a fraction in lowest terms.

3. a. Write the ratio of 0.06 to 0.12 as a fraction in lowest terms.
 b. Write the ratio of 600 to 1200 as a fraction in lowest terms.

Note

Another symbol used to denote ratio is the colon (:). The ratio of, say, 5 to 4 can be written as 5:4. Although we will not use it here, this notation is fairly common.

EXAMPLE 2

Give the ratio of $\frac{2}{3}$ to $\frac{4}{9}$ as a fraction in lowest terms.

SOLUTION We begin by writing the ratio of $\frac{2}{3}$ to $\frac{4}{9}$ as a complex fraction. The numerator is $\frac{2}{3}$, and the denominator is $\frac{4}{9}$. Then we simplify.

$$\begin{aligned} \frac{\frac{2}{3}}{\frac{4}{9}} &= \frac{2}{3} \cdot \frac{9}{4} && \text{Division by } \frac{4}{9} \text{ is the same as multiplication by } \frac{9}{4} \\ &= \frac{18}{12} && \text{Multiply} \\ &= \frac{3}{2} && \text{Reduce to lowest terms} \end{aligned}$$

EXAMPLE 3

Write the ratio of 0.08 to 0.12 as a fraction in lowest terms.

SOLUTION When the ratio is in reduced form, it is customary to write it with whole numbers and not decimals. For this reason we multiply the numerator and the denominator of the ratio by 100 to clear it of decimals. Then we reduce to lowest terms.

$$\begin{aligned} \frac{0.08}{0.12} &= \frac{0.08 \times 100}{0.12 \times 100} && \text{Multiply the numerator and the denominator by 100 to clear the ratio of decimals} \\ &= \frac{8}{12} && \text{Multiply} \\ &= \frac{2}{3} && \text{Reduce to lowest terms} \end{aligned}$$

Table 1 shows several more ratios and their fractional equivalents. Notice that in each case the fraction has been reduced to lowest terms. Also, the ratio that contains decimals has been rewritten as a fraction that does not contain decimals.

TABLE 1

Ratio	Fraction	Fraction In Lowest Terms
25 to 35	$\frac{25}{35}$	$\frac{5}{7}$
35 to 25	$\frac{35}{25}$	$\frac{7}{5}$
8 to 2	$\frac{8}{2}$	$\frac{4}{1}$ We can also write this as just 4.
$\frac{1}{4}$ to $\frac{3}{4}$	$\frac{\frac{1}{4}}{\frac{3}{4}}$	$\frac{1}{3}$ because $\frac{\frac{1}{4}}{\frac{3}{4}} = \frac{1}{4} \cdot \frac{4}{3} = \frac{1}{3}$
0.6 to 1.7	$\frac{0.6}{1.7}$	$\frac{6}{17}$ because $\frac{0.6 \times 10}{1.7 \times 10} = \frac{6}{17}$

B Applications of Ratios**EXAMPLE 4**

During a game, a basketball player makes 12 out of the 18 free throws he attempts. Write the ratio of the number of free throws he makes to the number of free throws he attempts as a fraction in lowest terms.

SOLUTION Because he makes 12 out of 18, we want the ratio 12 to 18, or

$$\frac{12}{18} = \frac{2}{3}$$

Because the ratio is 2 to 3, we can say that, in this particular game, he made 2 out of every 3 free throws he attempted.

Answers

2. Both are $\frac{2}{3}$ 3. Both are $\frac{1}{2}$
 4. $\frac{3}{4}$

EXAMPLE 5

A solution of alcohol and water contains 15 milliliters of water and 5 milliliters of alcohol. Find the ratio of alcohol to water, water to alcohol, water to total solution, and alcohol to total solution. Write each ratio as a fraction and reduce to lowest terms.

SOLUTION There are 5 milliliters of alcohol and 15 milliliters of water, so there are 20 milliliters of solution (alcohol + water). The ratios are as follows:

The ratio of alcohol to water is 5 to 15, or

$$\frac{5}{15} = \frac{1}{3} \quad \text{In lowest terms}$$

The ratio of water to alcohol is 15 to 5, or

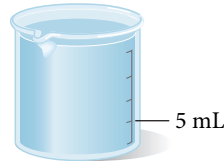
$$\frac{15}{5} = \frac{3}{1} \quad \text{In lowest terms}$$

The ratio of water to total solution is 15 to 20, or

$$\frac{15}{20} = \frac{3}{4} \quad \text{In lowest terms}$$

The ratio of alcohol to total solution is 5 to 20, or

$$\frac{5}{20} = \frac{1}{4} \quad \text{In lowest terms}$$

**Getting Ready for Class**

After reading through the preceding section, respond in your own words and in complete sentences.

1. In your own words, write a definition for the ratio of two numbers.
2. What does a ratio compare?
3. What are some different ways of using mathematics to write the ratio of a to b ?
4. When will the ratio of two numbers be a complex fraction?

5. A solution of alcohol and water contains 12 milliliters of water and 4 milliliters of alcohol. Find the ratio of alcohol to water, water to alcohol, and water to total solution. Write each ratio as a fraction and reduce to lowest terms.

Answer

5. $\frac{1}{3}, \frac{3}{1}, \frac{3}{4}$

Problem Set 4.1

A Write each of the following ratios as a fraction in lowest terms. None of the answers should contain decimals.

[Examples 1–3]

1. 8 to 6

2. 6 to 8

3. 64 to 12

4. 12 to 64

5. 100 to 250

6. 250 to 100

7. 13 to 26

8. 36 to 18

9. $\frac{3}{4}$ to $\frac{1}{4}$

10. $\frac{5}{8}$ to $\frac{3}{8}$

11. $\frac{7}{3}$ to $\frac{6}{3}$

12. $\frac{9}{5}$ to $\frac{11}{5}$

13. $\frac{6}{5}$ to $\frac{6}{7}$

14. $\frac{5}{3}$ to $\frac{1}{3}$

15. $2\frac{1}{2}$ to $3\frac{1}{2}$

16. $5\frac{1}{4}$ to $1\frac{3}{4}$

17. $2\frac{2}{3}$ to $\frac{5}{3}$

18. $\frac{1}{2}$ to $3\frac{1}{2}$

19. 0.05 to 0.15

20. 0.21 to 0.03

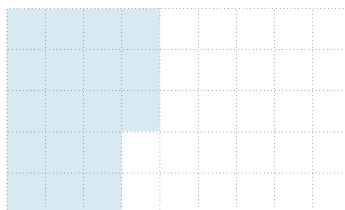
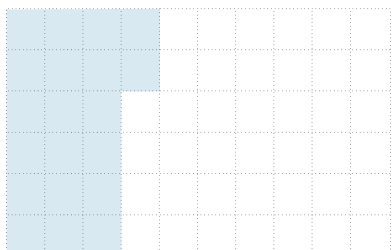
21. 0.3 to 3

22. 0.5 to 10

23. 1.2 to 10

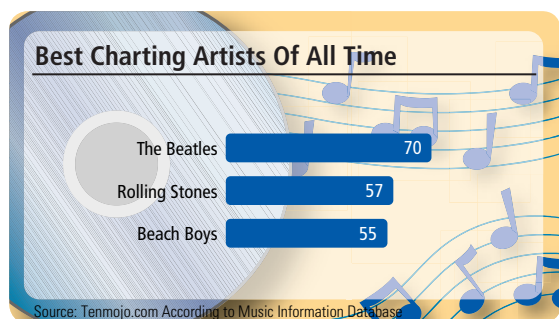
24. 6.4 to 0.8

25. a. What is the ratio of shaded squares to nonshaded squares?
b. What is the ratio of shaded squares to total squares?
c. What is the ratio of nonshaded squares to total squares?
26. a. What is the ratio of shaded squares to nonshaded squares?
b. What is the ratio of shaded squares to total squares?
c. What is the ratio of nonshaded squares to total squares?



B Applying the Concepts [Examples 4, 5]

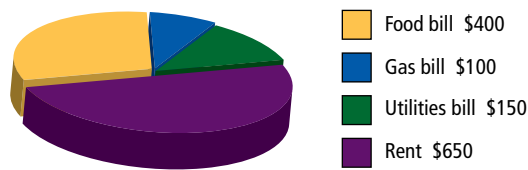
27. **Biggest Hits** The chart shows the number of hits for the three best charting artists in the United States. Use the information to find the ratio of hits the Beach Boys had to hits the Beatles had.
28. **Google Earth** The Google Earth image shows Crater Lake National Park in Oregon. The park covers 266 square miles and the lake covers 20 square miles. What is the ratio of the park's area to the lake's area?



Write each of the following ratios as a fraction in lowest terms. None of the answers should contain decimals.

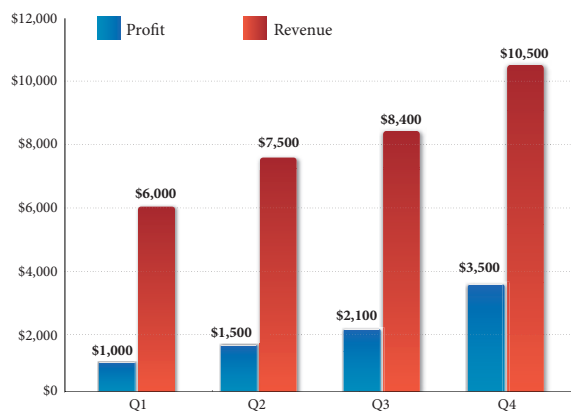
29. 100 mg to 5 mL
30. 25 g to 1 L
31. 375 mg to 10 mL
32. 450 mg to 20 mL

- 33. Family Budget** A family of four budgeted the following amounts for some of their monthly bills:



- What is the ratio of the rent to the food bill?
- What is the ratio of the gas bill to the food bill?
- What is the ratio of the utilities bill to the food bill?
- What is the ratio of the rent to the utilities bill?

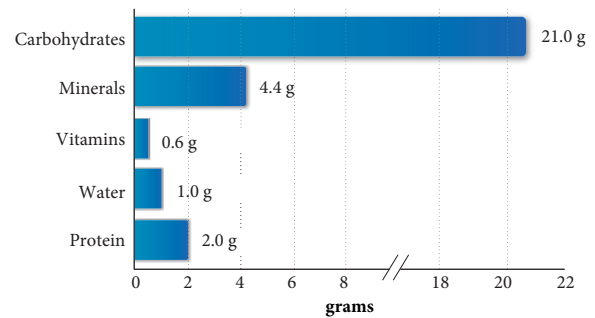
- 35. Profit and Revenue** The following bar chart shows the profit and revenue of the Baby Steps Shoe Company each quarter for one year.



Find the ratio of revenue to profit for each of the following quarters. Write your answer in lowest terms.

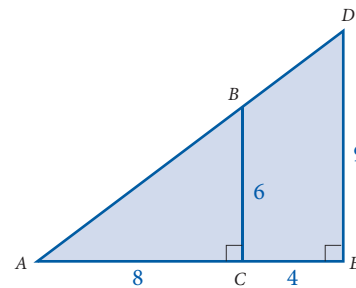
- Q1
 - Q2
 - Q3
 - Q4
- e. Find the ratio of revenue to profit for the entire year.

- 34. Nutrition** One cup of breakfast cereal was found to contain the following nutrients:



- Find the ratio of water to protein.
- Find the ratio of carbohydrates to protein.
- Find the ratio of vitamins to minerals.
- Find the ratio of protein to vitamins and minerals.

- 36. Geometry** Regarding the diagram below, AC represents the length of the line segment that starts at A and ends at C . From the diagram we see that $AC = 8$.



- Find the ratio of BC to AC .
- What is the length AE ?
- Find the ratio of DE to AE .

37. Major League Baseball The following table shows the number of games won during the 2007 baseball season by several National League teams.

Team	Number of Wins
New York Mets	88
Atlanta Braves	84
Washington Nationals	73
St. Louis Cardinals	78
Houston Astros	73
Arizona Diamondbacks	90
Cincinnati Reds	72

- What is the ratio of wins of the New York Mets to the St. Louis Cardinals?
- What is the ratio of wins of the Washington Nationals to the Houston Astros?
- What is the ratio of wins of the Cincinnati Reds to the Atlanta Braves?

38. Buying an iPod™ The hard drive of an Apple iPod determines how many songs you will be able to store and carry around with you. The table below compares the size of the hard-drive, song capacity and cost of three popular iPods.

iPod Type	Hard-Drive Size	Number of Songs	Cost
Shuffle	2 GB	500 songs	\$69.00
Nano	4 GB	1000 songs	\$149.00
Classic	80 GB	20,000 songs	\$249.00

- What is the ratio of hard-drive size between the Shuffle and the Nano? Between the Shuffle and the Classic?
- What is the ratio of number of songs between the Shuffle and the Nano? Between the Shuffle and the Classic?

Getting Ready for the Next Section

The following problems review material from a previous section. Reviewing these problems will help you with the next section.

Write as a decimal.

39. $\frac{90}{5}$

40. $\frac{120}{3}$

41. $\frac{125}{2}$

42. $\frac{2}{10}$

43. $\frac{1.23}{2}$

44. $\frac{1.39}{2}$

45. $\frac{88}{0.5}$

46. $\frac{1.99}{0.5}$

47. $\frac{46}{0.25}$

48. $\frac{92}{0.25}$

Divide. Round answers to the nearest thousandth.

49. $0.48 \div 5.5$

50. $0.75 \div 11.5$

51. $2.19 \div 46$

52. $1.25 \div 50$

Maintaining Your Skills

Multiply and divide as indicated.

53. $\frac{3}{4} \cdot \frac{5}{6}$

54. $\frac{7}{8} \cdot 32$

55. $\frac{11}{16} \div \frac{1}{8}$

56. $13 \div \frac{1}{3}$

57. $\frac{65}{72} \cdot \frac{108}{273}$

58. $\frac{165}{84} \cdot \frac{24}{195}$

59. $\frac{3}{4} \div \frac{1}{8} \cdot 16$

60. $\frac{1}{4} \div \frac{1}{12} \cdot 6$

Rates and Unit Pricing

4.2

Objectives

- A Express rates as ratios.
- B Use ratios to write a unit price.

Here is the first paragraph of an article that appeared in *USA Today* in 2003.

Culture Clash

Dannon recently shrank its 8-ounce cup of yogurt by 25% to 6 ounces—but cut its suggested retail price by only 20% from 89 cents to 71 cents, which would raise the unit price a penny an ounce—9%—to 12 cents. At the Hoboken store, which charges more than Dannon's suggested prices, the unit price went from 12 cents to 13 cents with the size change.

DANNON YOGURT		
	Old	New
Size	8 ounces	6 ounces
Container cost	89 cents	71 cents
Price per ounce	11 cents	12 cents
Price difference per ounce: 9%		

In this section we cover material that will give you a better understanding of the information in this article. We start this section with a discussion of rates, then we move on to unit pricing.

A Rates

Whenever a ratio compares two quantities that have different units (and neither unit can be converted to the other), then the ratio is called a *rate*. For example, if we were to travel 120 miles in 3 hours, then our average rate of speed expressed as the ratio of miles to hours would be

$$\frac{120 \text{ miles}}{3 \text{ hours}} = \frac{40 \text{ miles}}{1 \text{ hour}} \quad \text{Divide the numerator and the denominator by 3 to reduce to lowest terms}$$

The ratio $\frac{40 \text{ miles}}{1 \text{ hour}}$ can be expressed as

$$40 \frac{\text{miles}}{\text{hour}} \quad \text{or} \quad 40 \text{ miles/hour} \quad \text{or} \quad 40 \text{ miles per hour}$$

A rate is expressed in simplest form when the numerical part of the denominator is 1. To accomplish this we use division.

EXAMPLE 1

A train travels 125 miles in 2 hours. What is the train's rate in miles per hour?

SOLUTION The ratio of miles to hours is

$$\begin{aligned} \frac{125 \text{ miles}}{2 \text{ hours}} &= 62.5 \frac{\text{miles}}{\text{hour}} && \text{Divide 125 by 2} \\ &= 62.5 \text{ miles per hour} \end{aligned}$$

If the train travels 125 miles in 2 hours, then its average rate of speed is 62.5 miles per hour. ■

EXAMPLE 2

A car travels 90 miles on 5 gallons of gas. Give the ratio of miles to gallons as a rate in miles per gallon.

SOLUTION The ratio of miles to gallons is

$$\begin{aligned} \frac{90 \text{ miles}}{5 \text{ gallons}} &= 18 \frac{\text{miles}}{\text{gallon}} && \text{Divide 90 by 5} \\ &= 18 \text{ miles/gallon} \end{aligned}$$

The gas mileage of the car is 18 miles per gallon. ■

PRACTICE PROBLEMS

1. A car travels 107 miles in 2 hours. What is the car's rate in miles per hour?
2. A car travels 192 miles on 6 gallons of gas. Give the ratio of miles to gallons as a rate in miles per gallon.

Answers

1. 53.5 miles/hour
2. 32 miles/gallon

B Unit Pricing

One kind of rate that is very common is *unit pricing*. Unit pricing is the ratio of price to quantity when the quantity is one unit. Suppose a 1-liter bottle of a certain soft drink costs \$1.19, whereas a 2-liter bottle of the same drink costs \$1.39. Which is the better buy? That is, which has the lower price per liter?

$$\frac{\$1.19}{1 \text{ liter}} = \$1.19 \text{ per liter}$$

$$\frac{\$1.39}{2 \text{ liter}} = \$0.695 \text{ per liter}$$

The unit price for the 1-liter bottle is \$1.19 per liter, whereas the unit price for the 2-liter bottle is 69.5¢ per liter. The 2-liter bottle is a better buy.

EXAMPLE 3

A supermarket sells low-fat milk in three different containers at the following prices:

1 gallon	\$3.59	
$\frac{1}{2}$ gallon	\$1.99	
1 quart	\$1.29	(1 quart = $\frac{1}{4}$ gallon)



\$3.59



\$1.99



\$1.29

3. A supermarket sells vegetable juice in three different containers at the following prices:

5.5 ounces, 48¢

11.5 ounces, 75¢

46 ounces, \$2.19

Give the unit price in cents per ounce for each one. Round to the nearest tenth of a cent, if necessary.

Give the unit price in dollars per gallon for each one.

SOLUTION Because 1 quart = $\frac{1}{4}$ gallon, we have

$$\text{1-gallon container} \quad \frac{\$3.59}{1 \text{ gallon}} = \frac{\$3.59}{1 \text{ gallon}} = \$3.59 \text{ per gallon}$$

$$\frac{1}{2}\text{-gallon container} \quad \frac{\$1.99}{\frac{1}{2} \text{ gallon}} = \frac{\$1.99}{0.5 \text{ gallon}} = \$3.98 \text{ per gallon}$$

$$\text{1-quart container} \quad \frac{\$1.29}{1 \text{ quart}} = \frac{\$1.29}{0.25 \text{ gallon}} = \$5.16 \text{ per gallon}$$

The 1-gallon container has the lowest unit price, whereas the 1-quart container has the highest unit price.

Getting Ready for Class

After reading through the preceding section, respond in your own words and in complete sentences.

1. A rate is a special type of ratio. In your own words, explain what a rate is.
2. When is a rate written in simplest terms?
3. What is *unit pricing*?
4. Give some examples of rates *not* found in your textbook.

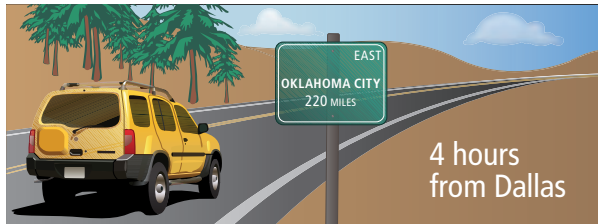
Answer

3. 8.7¢/ounce, 6.5¢/ounce, 4.8¢/ounce

Problem Set 4.2

A Express each of the following rates as a ratio with the given units. [Examples 1, 2]

1. **Miles/Hour** A car travels 220 miles in 4 hours. What is the rate of the car in miles per hour?



2. **Miles/Hour** A train travels 360 miles in 5 hours. What is the rate of the train in miles per hour?

3. **Kilometers/Hour** It takes a car 3 hours to travel 252 kilometers. What is the rate in kilometers per hour?

4. **Kilometers/Hour** In 6 hours an airplane travels 4,200 kilometers. What is the rate of the airplane in kilometers per hour?

5. **Gallons/Second** The flow of water from a water faucet can fill a 3-gallon container in 15 seconds. Give the ratio of gallons to seconds as a rate in gallons per second.

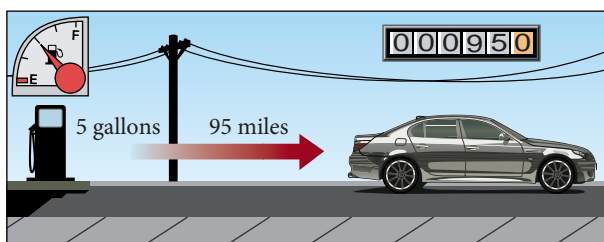
6. **Gallons/Minute** A 225-gallon drum is filled in 3 minutes. What is the rate in gallons per minute?

7. **Liters/Minute** It takes 4 minutes to fill a 56-liter gas tank. What is the rate in liters per minute?

8. **Liters/Hour** The gas tank on a car holds 60 liters of gas. At the beginning of a 6-hour trip, the tank is full. At the end of the trip, it contains only 12 liters. What is the rate at which the car uses gas in liters per hour?

9. **Miles/Gallon** A car travels 95 miles on 5 gallons of gas. Give the ratio of miles to gallons as a rate in miles per gallon.

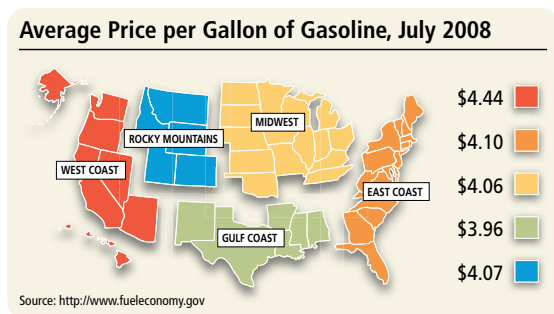
10. **Miles/Gallon** On a 384-mile trip, an economy car uses 8 gallons of gas. Give this as a rate in miles per gallon.



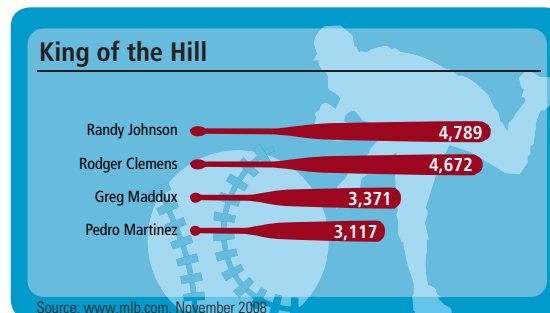
11. **Miles/Liter** The gas tank on a car has a capacity of 75 liters. On a full tank of gas, the car travels 325 miles. What is the gas mileage in miles per liter?

12. **Miles/Liter** A car pulling a trailer can travel 105 miles on 70 liters of gas. What is the gas mileage in miles per liter?

13. **Gas Prices** The snapshot shows the gas prices for the different regions of the United States. If a man bought 12 gallons of gas for \$48.72, where might he live?



14. **Pitchers** The chart shows the major league pitchers with the most career strikeouts. If Pedro Martinez pitched 2,783 innings, how many strikeouts does he throw per inning? Round to the nearest hundredth.




Nursing Intravenous (IV) infusions are often ordered in either milliliters per hour or milliliters per minute.

15. What was the infusion rate in milliliters per hour if it took 5 hours to administer 2,400 mL?
16. What was the infusion rate in milliliters per minute if 42 milliliters were administered in 6 minutes?

A Unit Pricing [Example 3]

17. **Cents/Ounce** A 20-ounce package of frozen peas is priced at 99¢. Give the unit price in cents per ounce.
18. **Dollars/Pound** A 4-pound bag of cat food costs \$8.12. Give the unit price in dollars per pound.

19. **Best Buy** Find the unit price in cents per diaper for each of the packages shown here. Which is the better buy? Round to the nearest tenth of a cent.



36 disposable diapers
\$12.49




38 disposable diapers
\$11.99

20. **Best Buy** Find the unit price in cents per pill for each of the packages shown here. Which is the better buy? Round to the nearest tenth of a cent.



100 pills
\$5.99



225 pills
\$13.96

Currency Conversions There are a number of online calculators that will show what the money in one country is worth in another country. One such converter, the XE Universal Currency Converter®, uses live, up-to-the-minute currency rates. Use the information shown here to determine what the equivalent to one U.S. dollar for each of the following denominations. Round to the nearest thousandth, where necessary.

21. \$100.00 U.S. dollars are equivalent to 64.582 euros
22. \$50.00 U.S. dollars are equivalent to \$51.0775 Canadian dollars
23. \$40.00 U.S. dollars are equivalent to 20.3765 British pounds
24. \$25.00 U.S. dollars are equivalent to 2704.0125 Japanese yen

25. **Food Prices** Using unit rates is a way to compare prices of different sized packages to see which price is really the best deal. Suppose we compare the cost of a box of Cheerios sold at three different stores for the following prices:

Store	Size	Cost
A	11.3 ounce box	\$4.00
B	18 ounce box	\$4.99
C	180 ounce case	\$52.90

Which size is the best buy? Give the cost per ounce for that size.

26. **Cell Phone Plans** All cell phone plans are not created equal. The number of minutes and the monthly charges can vary greatly. The table shows four plans presented by four different cell phone providers.

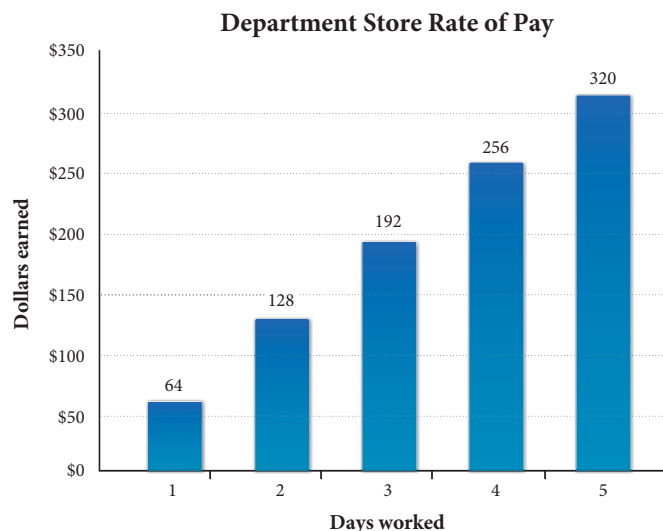
Carrier	AT&T	Sprint	T-Mobile	Verizon
Plan name	Nation 450	Sprint Basic	Individual Value	Nationwide Basic
Monthly minutes	450	200	600	450
Monthly cost	\$39.99	\$29.99	\$39.99	\$39.99
Plan cost per minute				

Find the cost per minute for each plan. Based on your results, which plan should you go with?

27. **Miles/Hour** A car travels 675.4 miles in $12\frac{1}{2}$ hours. Give the rate in miles per hour to the nearest hundredth.
28. **Miles/Hour** At the beginning of a trip, the odometer on a car read 32,567.2 miles. At the end of the trip, it read 32,741.8 miles. If the trip took $4\frac{1}{4}$ hours, what was the rate of the car in miles per hour to the nearest tenth?
29. **Miles/Gallon** If a truck travels 128.4 miles on 13.8 gallons of gas, what is the gas mileage in miles per gallon? (Round to the nearest tenth.)
30. **Cents/Day** If a 15-day supply of vitamins costs \$1.62, what is the price in cents per day?

Hourly Wages Jane has a job at the local Marcy's department store. The graph shows how much Jane earns for working 8 hours per day for 5 days.

31. What is her daily rate of pay? (Assume she works 8 hours per day.)
32. What is her weekly rate of pay? (Assume she works 5 days per week.)
33. What is her annual rate of pay? (Assume she works 50 weeks per year.)
34. What is her hourly rate of pay? (Assume she works 8 hours per day.)



Getting Ready for the Next Section

Solve each equation by finding a number to replace n that will make the equation a true statement.

35. $2 \cdot n = 12$
36. $3 \cdot n = 27$
37. $6 \cdot n = 24$
38. $8 \cdot n = 16$
39. $20 = 5 \cdot n$
40. $35 = 7 \cdot n$
41. $650 = 10 \cdot n$
42. $630 = 7 \cdot n$

Maintaining Your Skills

Add and subtract as indicated.

43. $\frac{1}{2} + \frac{3}{8}$
44. $\frac{7}{6} - \frac{1}{3}$
45. $\frac{2}{5} - \frac{3}{8}$
46. $\frac{5}{8} + \frac{3}{4}$
47. $\frac{11}{12} - \frac{9}{10}$
48. $\frac{13}{15} + \frac{1}{10}$
49. $\frac{5}{6} - \frac{1}{3} + \frac{4}{3}$
50. $\frac{7}{8} + \frac{1}{8} - \frac{1}{16}$

Extending the Concepts

51. **Unit Pricing** The makers of Wisk liquid detergent cut the size of its popular midsize jug from 100 ounces (3.125 quarts) to 80 ounces (2.5 quarts). At the same time it lowered the price from \$6.99 to \$5.75. Fill in the table below and use your results to decide which of the two sizes is the better buy.

WISK LAUNDRY DETERGENT		
	Old	New
Size	100 ounces	80 ounces
Container cost	\$6.99	\$5.75
Price per quart		

Solving Equations by Division

4.3

Objectives

- A Divide expressions containing a variable.
- B Solve equations using division.

In Chapter 1 we solved equations like $3 \cdot n = 12$ by finding a number with which to replace n that would make the equation a true statement. The solution for the equation $3 \cdot n = 12$ is $n = 4$, because

$$\begin{array}{ll} \text{when} & n = 4 \\ \text{the equation} & 3 \cdot n = 12 \\ \text{becomes} & 3 \cdot 4 = 12 \\ \text{or} & 12 = 12 \end{array} \quad \text{A true statement}$$

The problem with this method of solving equations is that we have to guess at the solution and then check it in the equation to see if it works. In this section we will develop a method of solving equations like $3 \cdot n = 12$ that does not require any guessing.

In Chapter 2 we simplified expressions such as

$$\frac{2 \cdot 2 \cdot 3 \cdot 5 \cdot 7}{2 \cdot 5}$$

by dividing out any factors common to the numerator and the denominator. For example:

$$\frac{2 \cdot 2 \cdot 3 \cdot 5 \cdot 7}{2 \cdot 5} = 2 \cdot 3 \cdot 7 = 42$$

The same process works with expressions that have variables for some of their factors. For example, the expression

$$\frac{2 \cdot n \cdot 7 \cdot 11}{n \cdot 11}$$

can be simplified by dividing out the factors common to the numerator and the denominator—namely, n and 11:

$$\frac{2 \cdot n \cdot 7 \cdot 11}{n \cdot 11} = 2 \cdot 7 = 14$$

A Dividing Expressions Containing a Variable

EXAMPLE 1

Divide the expression $5 \cdot n$ by 5.

SOLUTION Applying the method above, we have:

$$5 \cdot n \text{ divided by } 5 \text{ is } \frac{5 \cdot n}{5} = n$$

If you are having trouble understanding this process because there is a variable involved, consider what happens when we divide 6 by 2 and when we divide 6 by 3. Because $6 = 2 \cdot 3$, when we divide by 2 we get 3. Like this:

$$\frac{6}{2} = \frac{2 \cdot 3}{2} = 3$$

When we divide by 3, we get 2:

$$\frac{6}{3} = \frac{2 \cdot 3}{3} = 2$$

EXAMPLE 2

Divide $7 \cdot y$ by 7.

SOLUTION Dividing by 7, we have:

$$7 \cdot y \text{ divided by } 7 \text{ is } \frac{7 \cdot y}{7} = y$$

PRACTICE PROBLEMS

1. Divide the expression $8 \cdot n$ by 8.

2. Divide $3 \cdot y$ by 3.

Answers

1. n 2. y

Note

The choice of the letter we use for the variable is not important.

The process works just as well with y as it does with n . The letters used for variables in equations are most often the letters a, n, x, y , or z .

Note

In the last chapter of this book, we will devote a lot of time to solving equations. For now, we are concerned only with equations that can be solved by division.

3. Solve the equation $8 \cdot n = 40$ by dividing both sides by 8.

4. Solve for a : $35 = 7 \cdot a$

Answers
3. 5 4. 5

Chapter 4 Ratio and Proportion

We can use division to solve equations such as $3 \cdot n = 12$. Notice that the left side of the equation is $3 \cdot n$. The equation is solved when we have just n , instead of $3 \cdot n$, on the left side and a number on the right side. That is, we have solved the equation when we have rewritten it as

$$n = \text{a number}$$

We can accomplish this by dividing *both* sides of the equation by 3:

$$\frac{3 \cdot n}{3} = \frac{12}{3} \quad \text{Divide both sides by 3}$$

$$n = 4$$

Because 12 divided by 3 is 4, the solution to the equation is $n = 4$, which we know to be correct from our discussion at the beginning of this section. Notice that it would be incorrect to divide just the left side by 3 and not the right side also. *Whenever we divide one side of an equation by a number, we must also divide the other side by the same number.*

B Solving Equations**EXAMPLE 3**

Solve the equation $7 \cdot y = 42$ for y by dividing both sides by 7.

SOLUTION Dividing both sides by 7, we have:

$$\frac{7 \cdot y}{7} = \frac{42}{7}$$

$$y = 6$$

We can check our solution by replacing y with 6 in the original equation:

when	$y = 6$	
the equation	$7 \cdot y = 42$	
becomes	$7 \cdot 6 = 42$	
or	$42 = 42$	A true statement

EXAMPLE 4

Solve for a : $30 = 5 \cdot a$

SOLUTION Our method of solving equations by division works regardless of which side the variable is on. In this case, the right side is $5 \cdot a$, and we would like it to be just a . Dividing both sides by 5, we have:

$$\frac{30}{5} = \frac{5 \cdot a}{5}$$

$$6 = a$$

The solution is $a = 6$. (If 6 is a , then a is 6.)

We can write our solutions as improper fractions, mixed numbers, or decimals. Let's agree to write our answers as either whole numbers, proper fractions, or mixed numbers unless otherwise stated.

Getting Ready for Class

After reading through the preceding section, respond in your own words and in complete sentences.

1. In your own words, explain what a solution to an equation is.
2. What number results when you simplify $\frac{2 \cdot n \cdot 7 \cdot 11}{n \cdot 11}$?
3. What is the result of dividing $7 \cdot y$ by 7?
4. Explain how division is used to solve the equation $30 = 5 \cdot a$.

Problem Set 4.3

A Simplify each of the following expressions by dividing out any factors common to the numerator and the denominator and then simplifying the result.

1. $\frac{3 \cdot 5 \cdot 5 \cdot 7}{3 \cdot 5}$

2. $\frac{2 \cdot 2 \cdot 3 \cdot 5 \cdot 7}{2 \cdot 5 \cdot 7}$

3. $\frac{2 \cdot n \cdot 3 \cdot 3 \cdot 5}{n \cdot 5}$

4. $\frac{3 \cdot 5 \cdot n \cdot 7 \cdot 7}{3 \cdot n \cdot 7}$

5. $\frac{2 \cdot 2 \cdot n \cdot 7 \cdot 11}{2 \cdot n \cdot 11}$

6. $\frac{3 \cdot n \cdot 7 \cdot 13 \cdot 17}{n \cdot 13 \cdot 17}$

7. $\frac{9 \cdot n}{9}$

8. $\frac{8 \cdot a}{8}$

9. $\frac{4 \cdot y}{4}$

10. $\frac{7 \cdot x}{7}$

B Solve each of the following equations by dividing both sides by the appropriate number. Be sure to show the division in each case.

11. $4 \cdot n = 8$

12. $2 \cdot n = 8$

13. $5 \cdot x = 35$

14. $7 \cdot x = 35$

15. $3 \cdot y = 21$

16. $7 \cdot y = 21$

17. $6 \cdot n = 48$

18. $16 \cdot n = 48$

19. $5 \cdot a = 40$

20. $10 \cdot a = 40$

21. $3 \cdot x = 6$

22. $8 \cdot x = 40$

23. $2 \cdot y = 2$

24. $2 \cdot y = 12$

25. $3 \cdot a = 18$

26. $4 \cdot a = 4$

27. $5 \cdot n = 25$

28. $9 \cdot n = 18$

29. $6 = 2 \cdot x$

30. $56 = 7 \cdot x$

31. $42 = 6 \cdot n$

32. $30 = 5 \cdot n$

33. $4 = 4 \cdot y$

34. $90 = 9 \cdot y$

35. $63 = 7 \cdot y$

36. $3 = 3 \cdot y$

37. $2 \cdot n = 7$

38. $4 \cdot n = 10$

39. $6 \cdot x = 21$

40. $7 \cdot x = 8$

41. $5 \cdot a = 12$

42. $8 \cdot a = 13$

43. $4 = 7 \cdot y$

44. $3 = 9 \cdot y$

45. $10 = 13 \cdot y$

46. $9 = 11 \cdot y$

47. $12 \cdot x = 30$

48. $16 \cdot x = 56$

49. $21 = 14 \cdot n$

50. $48 = 20 \cdot n$

■ Getting Ready for the Next Section

Reduce.

51. $\frac{6}{8}$

52. $\frac{17}{34}$

Multiply.

53. $3(0.4)$

54. $\frac{2}{3} \cdot 6$

Divide.

55. $65 \div 10$

56. $1.2 \div 8$

■ Maintaining Your Skills

Write each fraction or mixed number as an equivalent decimal number.

57. $\frac{3}{4}$

58. $\frac{2}{5}$

59. $5\frac{1}{2}$

60. $8\frac{1}{4}$

61. $\frac{3}{100}$

62. $\frac{2}{50}$

63. $\frac{3}{8}$

64. $\frac{5}{8}$

Write each decimal as an equivalent proper fraction or mixed number.

65. 0.34

66. 0.08

67. 2.4

68. 5.05

69. 1.75

70. 3.125

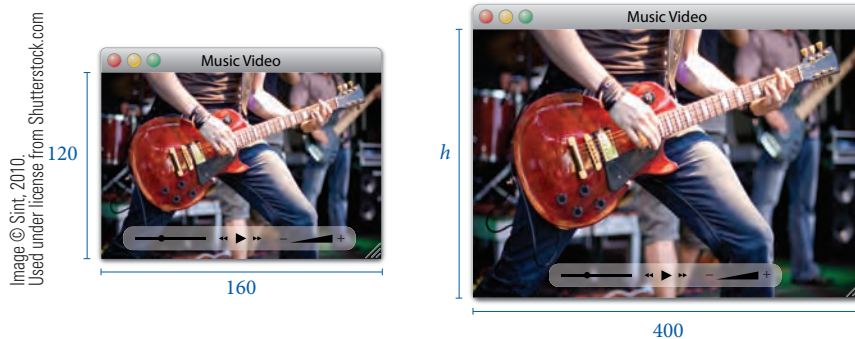
71. 0.875

72. 0.375

Objectives

- A** Name the terms in a proportion.
- B** Use the fundamental property of proportions to solve a proportion.

Millions of people are turning to the Internet to view music videos of their favorite musician. Many Web sites offer different sizes of video based on the speed of a user's Internet connection. Even though the figures below are not the same size, their sides are proportional. Later in this chapter we will use proportions to find the unknown height in the larger figure.



In this section we will solve problems using proportions. As you will see later in this chapter, proportions can model a number of everyday applications.

Definition

A statement that two ratios are equal is called a **proportion**. If $\frac{a}{b}$ and $\frac{c}{d}$ are two equal ratios, then the statement

$$\frac{a}{b} = \frac{c}{d}$$

is called a proportion.

A Terms of a Proportion

Each of the four numbers in a proportion is called a *term* of the proportion. We number the terms of a proportion as follows:

$$\begin{array}{l} \text{First term} \longrightarrow \frac{a}{b} = \frac{c}{d} \longleftarrow \text{Third term} \\ \text{Second term} \longrightarrow \frac{a}{b} = \frac{c}{d} \longleftarrow \text{Fourth term} \end{array}$$

The first and fourth terms of a proportion are called the *extremes*, and the second and third terms of a proportion are called the *means*.

$$\begin{array}{c} \text{Means} \longrightarrow \frac{a}{b} = \frac{c}{d} \longleftarrow \text{Extremes} \end{array}$$

EXAMPLE 1

In the proportion $\frac{3}{4} = \frac{6}{8}$, name the four terms, the means, and the extremes.

SOLUTION The terms are numbered as follows:

$$\begin{array}{ll} \text{First term} = 3 & \text{Third term} = 6 \\ \text{Second term} = 4 & \text{Fourth term} = 8 \end{array}$$

The means are 4 and 6; the extremes are 3 and 8.

PRACTICE PROBLEMS

- In the proportion $\frac{2}{3} = \frac{6}{9}$, name the four terms, the means, and the extremes.

Answer

- See solutions section.

The final thing we need to know about proportions is expressed in the following property.

B The Fundamental Property of Proportions

Fundamental Property of Proportions

In any proportion, the product of the extremes is equal to the product of the means. This property is also referred to as the means/extremes property, and in symbols, it looks like this:

$$\text{If } \frac{a}{b} = \frac{c}{d} \text{ then } ad = bc$$

2. Verify the fundamental property of proportions for the following proportions.

a. $\frac{5}{6} = \frac{15}{18}$

b. $\frac{13}{39} = \frac{1}{3}$

c. $\frac{\frac{2}{3}}{\frac{3}{5}} = \frac{2}{5}$

d. $\frac{0.12}{0.18} = \frac{2}{3}$

3. Find the missing term:

a. $\frac{3}{4} = \frac{9}{x}$

b. $\frac{5}{8} = \frac{3}{x}$

Note In some of these problems you will be able to see what the solution is just by looking the problem over. In those cases it is still best to show all the work involved in solving the proportion. It is good practice for the more difficult problems.

Answers

2. See solutions section.

EXAMPLE 2

Verify the fundamental property of proportions for the following proportions.

a. $\frac{3}{4} = \frac{6}{8}$ b. $\frac{17}{34} = \frac{1}{2}$

SOLUTION We verify the fundamental property by finding the product of the means and the product of the extremes in each case.

Proportion	Product of the Means	Product of the Extremes
a. $\frac{3}{4} = \frac{6}{8}$	$4 \cdot 6 = 24$	$3 \cdot 8 = 24$
b. $\frac{17}{34} = \frac{1}{2}$	$34 \cdot 1 = 34$	$17 \cdot 2 = 34$

For each proportion the product of the means is equal to the product of the extremes.

We can use the fundamental property of proportions to solve an equation that has the form of a proportion.

A NOTE ON MULTIPLICATION Previously, we have used a multiplication dot to indicate multiplication, both with whole numbers and with variables. A more compact form for multiplication involving variables is simply to leave out the dot.

That is, $5 \cdot y = 5y$ and $10 \cdot x \cdot y = 10xy$.

EXAMPLE 3

Solve for x .

$$\frac{2}{3} = \frac{4}{x}$$

SOLUTION Applying the fundamental property of proportions, we have

$$\text{If } \frac{2}{3} = \frac{4}{x}$$

$$\text{then } 2 \cdot x = 3 \cdot 4$$

$$2x = 12$$

The product of the extremes equals the product of the means

Multiply

The result is an equation. We know from Section 4.3 that we can divide both sides of an equation by the same nonzero number without changing the solution to the equation. In this case we divide both sides by 2 to solve for x :

$$2x = 12$$

$$\frac{2x}{2} = \frac{12}{2} \quad \text{Divide both sides by 2}$$

$$x = 6 \quad \text{Simplify each side}$$

The solution is 6. We can check our work by using the fundamental property of proportions:

$$\begin{array}{ccc} & \frac{2}{3} & \frac{4}{6} \\ & \swarrow & \searrow \\ 12 & & 12 \\ \text{Product of} & & \text{Product of} \\ \text{the means} & & \text{the extremes} \end{array}$$

Because the product of the means and the product of the extremes are equal, our work is correct. ■

EXAMPLE 4 Solve for y : $\frac{5}{y} = \frac{10}{13}$

SOLUTION We apply the fundamental property and solve as we did in Example 3:

$$\begin{array}{ll} \text{If} & \frac{5}{y} = \frac{10}{13} \\ \text{then} & 5 \cdot 13 = y \cdot 10 \quad \text{The product of the extremes equals} \\ & \quad \quad \quad \text{the product of the means} \\ & 65 = 10y \quad \text{Multiply } 5 \cdot 13 \\ & \frac{65}{10} = \frac{10y}{10} \quad \text{Divide both sides by 10} \\ & 6.5 = y \quad \quad \quad 65 \div 10 = 6.5 \end{array}$$

The solution is 6.5. We could check our result by substituting 6.5 for y in the original proportion and then finding the product of the means and the product of the extremes. ■

EXAMPLE 5 Find n if $\frac{n}{3} = \frac{0.4}{8}$.

SOLUTION We proceed as we did in the previous two examples:

$$\begin{array}{ll} \text{If} & \frac{n}{3} = \frac{0.4}{8} \\ \text{then} & n \cdot 8 = 3(0.4) \quad \text{The product of the extremes equals} \\ & \quad \quad \quad \text{the product of the means} \\ & 8n = 1.2 \quad \quad \quad 3(0.4) = 1.2 \\ & \frac{8n}{8} = \frac{1.2}{8} \quad \quad \quad \text{Divide both sides by 8} \\ & n = 0.15 \quad \quad \quad 1.2 \div 8 = 0.15 \end{array}$$

The missing term is 0.15. ■

4. Solve for y : $\frac{2}{y} = \frac{8}{19}$

5. Find n

a. $\frac{n}{6} = \frac{0.3}{15}$
 b. $\frac{0.35}{n} = \frac{7}{100}$

Answers

3. a. 12 b. 4.8 4. 4.75
 5. a. 0.12 b. 5

6. Solve for x :

a. $\frac{3}{4} = \frac{x}{8}$

b. $\frac{6}{3} = \frac{15}{x}$

7. Solve $\frac{b}{18} = 0.5$

Chapter 4 Ratio and Proportion

EXAMPLE 6

Solve for x : $\frac{2}{3} = \frac{x}{6}$

SOLUTION We begin by multiplying the means and multiplying the extremes:

$$\begin{aligned} \text{If } \frac{2}{3} &= \frac{x}{6} \\ \text{then } \frac{2}{3} \cdot 6 &= 5 \cdot x && \text{The product of the extremes equals} \\ &&& \text{the product of the means} \\ 4 &= 5 \cdot x && \frac{2}{3} \cdot 6 = 4 \\ \frac{4}{5} &= \frac{5 \cdot x}{5} && \text{Divide both sides by 5} \\ \frac{4}{5} &= x \end{aligned}$$

The missing term is $\frac{4}{5}$, or 0.8.**EXAMPLE 7**

Solve $\frac{b}{15} = 2$.

SOLUTION Since the number 2 can be written as the ratio of 2 to 1, we can write this equation as a proportion, and then solve as we have in the examples above.

$$\begin{aligned} \frac{b}{15} &= 2 \\ \frac{b}{15} &= \frac{2}{1} && \text{Write 2 as a ratio} \\ b \cdot 1 &= 15 \cdot 2 && \text{Product of the extremes equals} \\ &&& \text{Product of the means} \\ b &= 30 \end{aligned}$$

The procedure for finding a missing term in a proportion is always the same. We first apply the fundamental property of proportions to find the product of the extremes and the product of the means. Then we solve the resulting equation.

STUDY SKILLS**Continue to List Difficult problems**

You should continue to list and rework the problems that give you the most difficulty. It is this list that you will use to study for the next exam. Your goal is to go into the next exam knowing that you can successfully work any problem from your list of difficult problems.

Getting Ready for Class

After reading through the preceding section, respond in your own words and in complete sentences.

1. In your own words, give a definition of a *proportion*.
2. In the proportion $\frac{2}{5} = \frac{4}{x}$, name the means and the extremes.
3. State the Fundamental Property of Proportions in words and in symbols.
4. For the proportion $\frac{2}{5} = \frac{4}{x}$, find the product of the means and the product of the extremes.

Answers6. a. $\frac{6}{7}$ b. $\frac{3}{2}$ 7. 9

Problem Set 4.4

A For each of the following proportions, name the means, name the extremes, and show that the product of the means is equal to the product of the extremes. [Examples 1, 2]

1. $\frac{1}{3} = \frac{5}{15}$

2. $\frac{6}{12} = \frac{1}{2}$

3. $\frac{10}{25} = \frac{2}{5}$

4. $\frac{5}{8} = \frac{10}{16}$

5. $\frac{\frac{1}{3}}{\frac{1}{2}} = \frac{4}{6}$

6. $\frac{2}{\frac{1}{4}} = \frac{4}{\frac{1}{2}}$

7. $\frac{0.5}{5} = \frac{1}{10}$

8. $\frac{0.3}{1.2} = \frac{1}{4}$

B Find the missing term in each of the following proportions. Set up each problem like the examples in this section. Write your answers as fractions in lowest terms. [Examples 3–7]

9. $\frac{2}{5} = \frac{4}{x}$

10. $\frac{3}{8} = \frac{9}{x}$

11. $\frac{1}{y} = \frac{5}{12}$

12. $\frac{2}{y} = \frac{6}{10}$

13. $\frac{x}{4} = \frac{3}{8}$

14. $\frac{x}{5} = \frac{7}{10}$

15. $\frac{5}{9} = \frac{x}{2}$

16. $\frac{3}{7} = \frac{x}{3}$

17. $\frac{3}{7} = \frac{3}{x}$

18. $\frac{2}{9} = \frac{2}{x}$

19. $\frac{x}{2} = 7$

20. $\frac{x}{3} = 10$

21. $\frac{\frac{1}{2}}{y} = \frac{\frac{1}{3}}{12}$

22. $\frac{\frac{2}{3}}{y} = \frac{\frac{1}{3}}{5}$

23. $\frac{n}{12} = \frac{\frac{1}{4}}{\frac{1}{2}}$

24. $\frac{n}{10} = \frac{\frac{3}{5}}{\frac{3}{8}}$

25. $\frac{10}{20} = \frac{20}{n}$

26. $\frac{8}{4} = \frac{4}{n}$

27. $\frac{x}{10} = \frac{10}{2}$

28. $\frac{x}{12} = \frac{12}{48}$

29. $\frac{y}{12} = 9$

30. $\frac{y}{16} = 0.75$

31. $\frac{0.4}{1.2} = \frac{1}{x}$

32. $\frac{5}{0.5} = \frac{20}{x}$

33. $\frac{0.3}{0.12} = \frac{n}{0.16}$

34. $\frac{0.01}{0.1} = \frac{n}{10}$

35. $\frac{0.5}{x} = \frac{1.4}{0.7}$

36. $\frac{0.3}{x} = \frac{2.4}{0.8}$

37. $\frac{168}{324} = \frac{56}{x}$

38. $\frac{280}{530} = \frac{112}{x}$

39. $\frac{429}{y} = \frac{858}{130}$

40. $\frac{573}{y} = \frac{2,292}{316}$

41. $\frac{n}{39} = \frac{533}{507}$

42. $\frac{n}{47} = \frac{1,003}{799}$

43. $\frac{756}{903} = \frac{x}{129}$

44. $\frac{321}{1,128} = \frac{x}{376}$

■ Getting Ready for the Next Section

Divide.

45. $360 \div 18$

46. $2,700 \div 6$

Multiply.

47. $3.5(85)$

48. $4.75(105)$

Solve each equation.

49. $\frac{x}{10} = \frac{270}{6}$

50. $\frac{x}{45} = \frac{8}{18}$

51. $\frac{x}{25} = \frac{4}{20}$

52. $\frac{x}{3.5} = \frac{85}{1}$

■ Maintaining Your Skills

Give the place value of the 5 in each number.

53. 250.14

54. 2.5014

Add or subtract as indicated.

55. $2.3 + 0.18 + 24.036$

56. $5 + 0.03 + 1.9$

57. $3.18 - 2.79$

58. $3.4 - 1.975$

Applications of Proportions

4.5

Objectives

- A** Use proportions to solve application problems.

Proportions can be used to solve a variety of word problems. The examples that follow show some of these word problems. In each case we will translate the word problem into a proportion and then solve the proportion using the method developed in this chapter.

A Applications

EXAMPLE 1

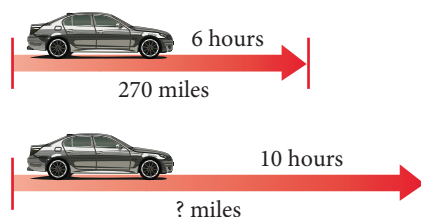
A woman drives her car 270 miles in 6 hours. If she continues at the same rate, how far will she travel in 10 hours?

SOLUTION We let x represent the distance traveled in 10 hours. Using x , we translate the problem into the following proportion:

$$\begin{array}{l} \text{Miles} \rightarrow \frac{x}{10} = \frac{270}{6} \leftarrow \text{Miles} \\ \text{Hours} \rightarrow \end{array}$$

Notice that the two ratios in the proportion compare the same quantities.

That is, both ratios compare miles to hours. In words this proportion says:



x miles is to 10 hours as 270 miles is to 6 hours

$$\frac{x}{10} = \frac{270}{6}$$

Next, we solve the proportion.

$$\begin{aligned} x \cdot 6 &= 10 \cdot 270 \\ x \cdot 6 &= 2,700 \\ \frac{x \cdot 6}{6} &= \frac{2,700}{6} \\ x &= 450 \text{ miles} \end{aligned}$$

If the woman continues at the same rate, she will travel 450 miles in 10 hours. ■

EXAMPLE 2

A baseball player gets 8 hits in the first 18 games of the season. If he continues at the same rate, how many hits will he get in 45 games?


SOLUTION We let x represent the number of hits he will get in 45 games. Then

$$\begin{array}{l} x \text{ is to } 45 \text{ as } 8 \text{ is to } 18 \\ \text{Hits} \rightarrow \frac{x}{45} = \frac{8}{18} \leftarrow \text{Hits} \\ \text{Games} \rightarrow \end{array}$$

Notice again that the two ratios are comparing the same quantities, hits to games. We solve the proportion as follows:

$$\begin{aligned} 18x &= 360 & 45 \cdot 8 &= 360 \\ \frac{18x}{18} &= \frac{360}{18} & \text{Divide both sides by } 18 & \\ x &= 20 & 360 \div 18 &= 20 \end{aligned}$$

If he continues to hit at the rate of 8 hits in 18 games, he will get 20 hits in 45 games. ■



PRACTICE PROBLEMS

- A man drives his car 288 miles in 6 hours. If he continues at the same rate, how far will he travel in:
 - 10 hours
 - 11 hours
- A softball player gets 10 hits in the first 18 games of the season. If she continues at the same rate, how many hits will she get in:
 - 54 games
 - 27 games

Answers

- a. 480 miles b. 528 miles
- a. 30 hits b. 15 hits

3. A solution contains 8 milliliters of alcohol and 20 milliliters of water. If another solution is to have the same ratio of milliliters of alcohol to milliliters of water and must contain 35 milliliters of water, how much alcohol should it contain?

EXAMPLE 3

A solution contains 4 milliliters of alcohol and 20 milliliters of water. If another solution is to have the same ratio of milliliters of alcohol to milliliters of water and must contain 25 milliliters of water, how much alcohol should it contain?

SOLUTION We let x represent the number of milliliters of alcohol in the second solution. The problem translates to

x milliliters is to 25 milliliters as 4 milliliters is to 20 milliliters

$$\begin{array}{l} \text{Alcohol} \rightarrow \frac{x}{25} = \frac{4}{20} \leftarrow \text{Alcohol} \\ \text{Water} \rightarrow \frac{25}{20} = \frac{100}{100} \leftarrow \text{Water} \end{array}$$

$$20x = 100 \quad 25 \cdot 4 = 100$$

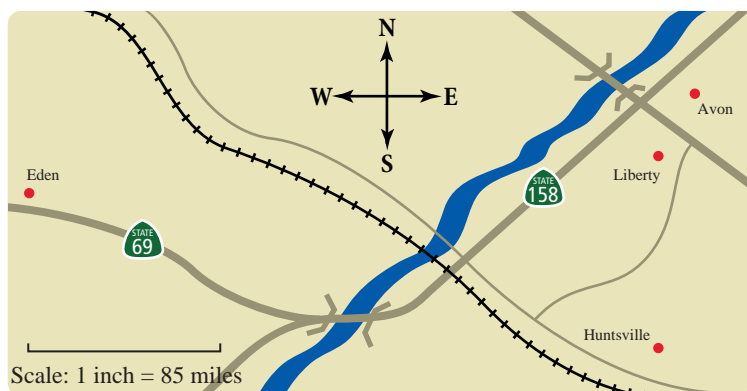
$$\frac{20x}{20} = \frac{100}{20} \quad \text{Divide both sides by 20}$$

$$x = 5 \text{ milliliters of alcohol} \quad 100 \div 20 = 5$$

4. The scale on a map indicates that 1 inch on the map corresponds to an actual distance of 105 miles. Two cities are 4.75 inches apart on the map. What is the actual distance between the two cities?

EXAMPLE 4

The scale on a map indicates that 1 inch on the map corresponds to an actual distance of 85 miles. Two cities are 3.5 inches apart on the map. What is the actual distance between the two cities?



SOLUTION We let x represent the actual distance between the two cities. The proportion is

$$\begin{array}{l} \text{Miles} \rightarrow \frac{x}{3.5} = \frac{85}{1} \leftarrow \text{Miles} \\ \text{Inches} \rightarrow \frac{3.5}{1} = \frac{85}{85} \leftarrow \text{Inches} \end{array}$$

$$x \cdot 1 = 3.5(85)$$

$$x = 297.5 \text{ miles}$$

Getting Ready for Class

After reading through the preceding section, respond in your own words and in complete sentences.

1. Give an example, not found in the book, of a proportion problem you may encounter.
2. Write a word problem for the proportion $\frac{2}{5} = \frac{4}{x}$.
3. What does it mean to translate a word problem into a proportion?
4. Name some jobs that may frequently require solving proportion problems.

Answers

3. 14 mL 4. 498.75 mi

Problem Set 4.5

A Solve each of the following word problems by translating the statement into a proportion. Be sure to show the proportion used in each case. [Examples 1–4]

- 1. Distance** A woman drives her car 235 miles in 5 hours. At this rate how far will she travel in 7 hours?
- 2. Distance** An airplane flies 1,260 miles in 3 hours. How far will it fly in 5 hours?
- 3. Basketball** A basketball player scores 162 points in 9 games. At this rate how many points will he score in 20 games?
- 4. Football** In the first 4 games of the season, a football team scores a total of 68 points. At this rate how many points will the team score in 11 games?
- 5. Mixture** A solution contains 8 pints of antifreeze and 5 pints of water. How many pints of water must be added to 24 pints of antifreeze to get a solution with the same concentration?
- 6. Nutrition** If 10 ounces of a certain breakfast cereal contain 3 ounces of sugar, how many ounces of sugar do 25 ounces of the same cereal contain?
- 7. Map Reading** The scale on a map indicates that 1 inch corresponds to an actual distance of 95 miles. Two cities are 4.5 inches apart on the map. What is the actual distance between the two cities?
- 8. Map Reading** A map is drawn so that every 2.5 inches on the map corresponds to an actual distance of 100 miles. If the actual distance between two cities is 350 miles, how far apart are they on the map?
- 9. Farming** A farmer knows that of every 50 eggs his chickens lay, only 45 will be marketable. If his chickens lay 1,000 eggs in a week, how many of them will be marketable?
- 10. Manufacturing** Of every 17 parts manufactured by a certain machine, only 1 will be defective. How many parts were manufactured by the machine if 8 defective parts were found?
- 11. Nursing** A patient is given a prescription of 10 pills. The total prescription contains 355 milligrams. How many milligrams is contained in each pill?
- 12. Nursing** A child is given a prescription for 9 mg of a drug. If she has to take 3 chewable tablets, what is the strength of each tablet?
- 13. Nursing** An oral medication has a dosage strength of 275 mg/5 mL. If a patient takes a dosage of 300 mg, how many milliliters does he take? Round to the nearest tenth.
- 14. Nursing** An atropine sulfate injection has a dosage strength of 0.1 mg/mL. If 4.5 mL was given to the patient, how many milligrams did she receive?

- 15. Nursing** A tablet has a strength of 45 mg. If a patient is prescribed a dose of 112.5 mg, how many tablets does he take?
- 16. Nursing** A tablet has a dosage strength of 35 mg. What was the prescribed dosage if the patient was told to take 1.5 tablets?

Model Trains The size of a model train relative to an actual train is referred to as its scale. Each scale is associated with a ratio as shown in the table. For example, an HO model train has a ratio of 1 to 87, meaning it is $\frac{1}{87}$ as large as an actual train.

- 17. Length of a Boxcar** How long is an actual boxcar that has an HO scale model 5 inches long? Give your answer in inches, then divide by 12 to give the answer in feet.

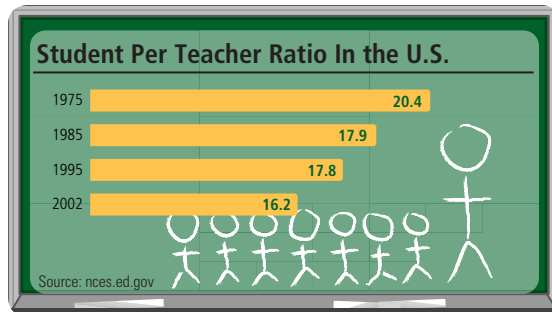
Scale	Ratio
LGB	1 to 22.5
#1	1 to 32
O	1 to 43.5
S	1 to 64
HO	1 to 87
TT	1 to 120




- 18. Length of a Flatcar** How long is an actual flatcar that has an LGB scale model 24 inches long? Give your answer in feet.

- 19. Travel Expenses** A traveling salesman figures it costs 55¢ for every mile he drives his car. How much does it cost him a week to drive his car if he travels 570 miles a week?
- 20. Travel Expenses** A family plans to drive their car during their annual vacation. The car can go 350 miles on a tank of gas, which is 18 gallons of gas. The vacation they have planned will cover 1,785 miles. How many gallons of gas will that take?
- 21. Nutrition** A 9-ounce serving of pasta contains 159 grams of carbohydrates. How many grams of carbohydrates do 15 ounces of this pasta contain?
- 22. Nutrition** If 100 grams of ice cream contains 13 grams of fat, how much fat is in 250 grams of ice cream?
- 23. Travel Expenses** If a car travels 378.9 miles on 50 liters of gas, how many liters of gas will it take to go 692 miles if the car travels at the same rate? (Round to the nearest tenth.)
- 24. Nutrition** If 125 grams of peas contain 26 grams of carbohydrates, how many grams of carbohydrates do 375 grams of peas contain?
- 25. Elections** During a recent election, 47 of every 100 registered voters in a certain city voted. If there were 127,900 registered voters in that city, how many people voted?
- 26. Map Reading** The scale on a map is drawn so that 4.5 inches corresponds to an actual distance of 250 miles. If two cities are 7.25 inches apart on the map, how many miles apart are they? (Round to the nearest tenth.)

- 27. Students to Teachers** The chart shows the student to teacher ratio in the United States from 1975 to 2002. If a school had 1,400 students in 1985, how many teachers does the school have? Round to the nearest teacher.



- 28. Skyscrapers** The chart shows the heights of the three tallest buildings in the world. The ratio of feet to meters is given by $3.28/1$. Using this information, convert the height of the Petronas Towers to meters. Round to the nearest hundredth.



- 29. Google Earth** The Google Earth image shows the western side of The Mall in Washington, D.C. If the scale indicates that one inch is 800 meters and the distance between the Lincoln Memorial and the World War II memorial is $\frac{17}{16}$ inches, what is the actual distance between the two landmarks?



- 30. Google Earth** The Google Earth image shows Disney World in Florida. A scale indicates that one inch is 200 meters. If the distance between Splash Mountain and the Jungle Cruise is 190 meters, what is the distance on the map in inches?



Nursing Liquid medication is usually given in milligrams per milliliter. Use the information to find the amount a patient should take for a prescribed dosage.

- 31.** A patient is prescribed a dosage of Ceclor[®] of 561 mg. The dosage strength is 187 mg per 5 mL. How many milliliters should he take?
- 32.** A brand of amoxicillin has a dosage strength of 125 mg/5 mL. If a patient is prescribed a dosage of 25 mg, how many milliliters should she take?

Nursing For children, the amount of medicine prescribed is often determined by the child's mass. Usually it is calculated from the milligrams per kilogram per day listed on the medication's box.

- 33.** How much should an 18 kg child be given a day if the dosage is 50 mg/kg/day?
- 34.** How much should a 13 kg child be given a day if the dosage is 24 mg/kg/day?

Getting Ready for the Next Section

Simplify.

35. $\frac{320}{160}$

36. $21 \cdot 105$

37. $2,205 \div 15$

38. $\frac{48}{24}$

Solve each equation.

39. $\frac{x}{5} = \frac{28}{7}$

40. $\frac{x}{4} = \frac{6}{3}$

41. $\frac{x}{21} = \frac{105}{15}$

42. $\frac{b}{15} = 2$

Maintaining Your Skills

The problems below are a review of some of the concepts we covered previously.

Find the following products. (Multiply.)

43. 2.7×0.5

44. $(0.7)^2$

45. 3.18×1.2

46. $(0.3)^4$

Find the following quotients. (Divide.)

47. $2.8 \div 0.7$

48. $0.042 \div 0.21$

49. $24 \div 0.15$

50. $6.99 \div 2.33$

Divide and round answers to the nearest hundredth.

51. $5,679 \div 30.9$

52. $4,070 \div 64.2$

Similar Figures

4.6

This 8-foot-high bronze sculpture “Cellarman” in Napa, California, is an exact replica of the smaller, 12-inch sculpture. Both pieces are the product of artist Tim Lloyd of Arroyo Grande, California.



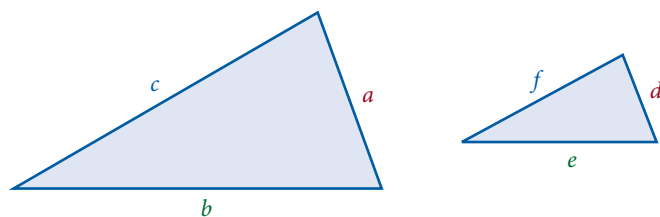
Courtesy of Timothy Lloyd Sculpture

In mathematics, when two or more objects have the same shape, but are different sizes, we say they are similar. If two figures are similar, then their corresponding sides are proportional.

In order to give more details on what we mean by corresponding sides of similar figures, it will be helpful to introduce a simple way to label the parts of a triangle.

A Similar Triangles

Two triangles that have the same shape are similar when their corresponding sides are proportional, or have the same ratio. The triangles below are similar.



Corresponding Sides

side a corresponds with side d

side b corresponds with side e

side c corresponds with side f

Ratio

$$\frac{a}{d}$$

$$\frac{b}{e}$$

$$\frac{c}{f}$$

Because their corresponding sides are proportional, we write

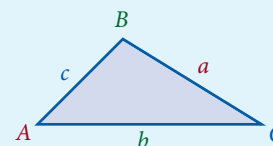
$$\frac{a}{d} = \frac{b}{e} = \frac{c}{f}$$

Objectives

- A** Use proportions to find the lengths of sides of similar triangles.
- B** Use proportions to find the lengths of sides of other similar figures.
- C** Draw a figure similar to a given figure, given the length of one side.
- D** Use similar figures to solve application problems.

LABELING TRIANGLES

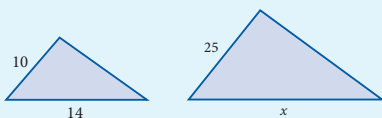
One way to label the important parts of a triangle is to label the vertices with capital letters and the sides with lower-case letters.



Notice that side a is opposite vertex A , side b is opposite vertex B , and side c is opposite vertex C . Also, because each vertex is the vertex of one of the angles of the triangle, we refer to the three interior angles as A , B , and C .

PRACTICE PROBLEMS

1. The two triangles below are similar. Find the missing side, x .



2. Find the height, h , in pixels of a video clip proportional to those in Example 2 with a width of 360 pixels.

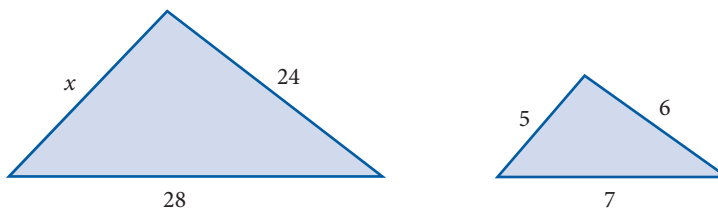
Note

A pixel is the smallest dot made on a computer monitor. Many computer monitors have a width of 800 pixels and a height of 600 pixels.

Chapter 4 Ratio and Proportion

EXAMPLE 1

The two triangles below are similar. Find side x .



SOLUTION To find the length x , we set up a proportion of equal ratios. The ratio of x to 5 is equal to the ratio of 24 to 6 and to the ratio of 28 to 7. Algebraically we have

$$\frac{x}{5} = \frac{24}{6} \quad \text{and} \quad \frac{x}{5} = \frac{28}{7}$$

We can solve either proportion to get our answer. The first gives us

$$\begin{aligned} \frac{x}{5} &= 4 & \frac{24}{6} &= 4 \\ x &= 4 \cdot 5 & \text{Multiply both sides by 5} \\ x &= 20 & \text{Simplify} \end{aligned}$$

B Other Similar Figures

When one shape or figure is either a reduced or enlarged copy of the same shape or figure, we consider them similar. For example, video viewed over the Internet was once confined to a small “postage stamp” size. Now it is common to see larger video over the Internet. Although the width and height have increased, the shape of the video has not changed.

EXAMPLE 2

The width and height of the two video clips are proportional. Find the height, h , in pixels of the larger video window.



SOLUTION We write our proportion as the ratio of the height of the new video to the height of the old video is equal to the ratio of the width of the new video to the width of the old video:

$$\begin{aligned} \frac{h}{120} &= \frac{320}{160} \\ \frac{h}{120} &= 2 \\ h &= 2 \cdot 120 \\ h &= 240 \end{aligned}$$

The height of the larger video is 240 pixels.

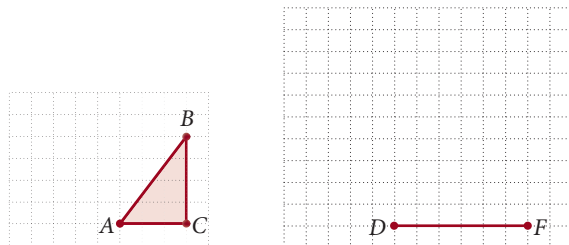
Answers

1. 35 2. 270 pixels

C Drawing Similar Figures

EXAMPLE 3

Draw a triangle similar to triangle ABC , if AC is proportional to DF . Make E the third vertex of the new triangle.



SOLUTION We see that AC is 3 units in length and BC has a length of 4 units. Since AC is proportional to DF , which has a length of 6 units, we set up a proportion to find the length EF .

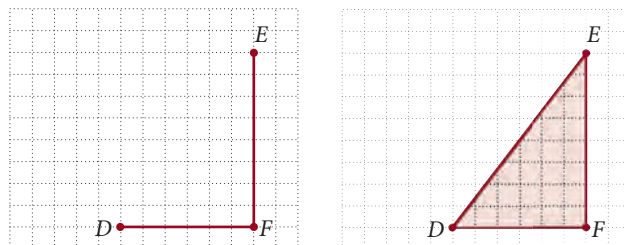
$$\frac{EF}{BC} = \frac{DF}{AC}$$

$$\frac{EF}{4} = \frac{6}{3}$$

$$\frac{EF}{4} = 2$$

$$EF = 8$$

Now we can draw EF with a length of 8 units, then complete the triangle by drawing line DE .

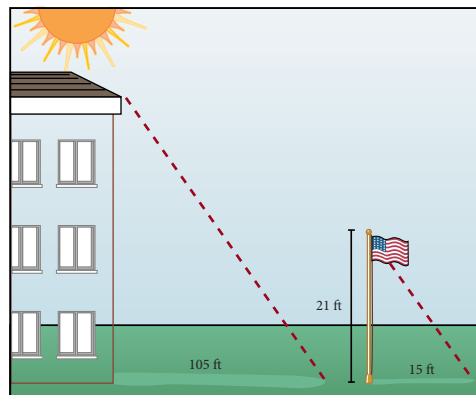


We have drawn triangle DEF similar to triangle ABC .

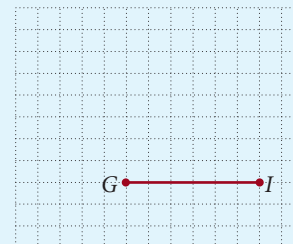
D Applications

EXAMPLE 4

A building casts a shadow of 105 feet while a 21-foot flagpole casts a shadow that is 15 feet. Find the height of the building.



3. Draw a triangle similar to triangle ABC , if AC is proportional to GI .



4. A building casts a shadow of 42 feet, while an 18-foot flagpole casts a shadow that is 12 feet. Find the height of the building.

Answer

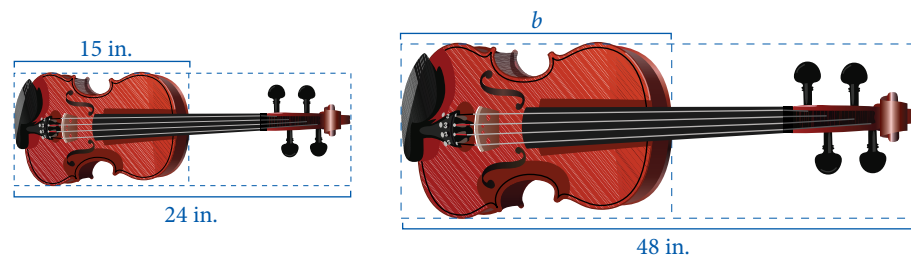
3. See solutions section.

SOLUTION The figure shows both the building and the flagpole, along with their respective shadows. From the figure it is apparent that we have two similar triangles. Letting x = the height of the building, we have

$$\begin{aligned}\frac{x}{21} &= \frac{105}{15} \\ 15x &= 2205 && \text{Extremes/means property} \\ x &= 147 && \text{Divide both sides by 15}\end{aligned}$$

The height of the building is 147 feet. ■

THE VIOLIN FAMILY The instruments in the violin family include the bass, cello, viola, and violin. These instruments can be considered similar figures because the entire length of each instrument is proportional to its body length.

**Note**

These numbers are whole number approximations used to simplify our calculations.

5. Find the body length of an instrument proportional to the violin family that has a total length of 32 inches.

EXAMPLE 5

The entire length of a violin is 24 inches, while the body length is 15 inches. Find the body length of a cello if the entire length is 48 inches.

SOLUTION Let b equal the body length of the cello, and set up the proportion.

$$\begin{aligned}\frac{b}{15} &= \frac{48}{24} \\ \frac{b}{15} &= 2 \\ b &= 2 \cdot 15 \\ b &= 30\end{aligned}$$

The body length of a cello is 30 inches. ■

Getting Ready for Class

After reading through the preceding section, respond in your own words and in complete sentences.

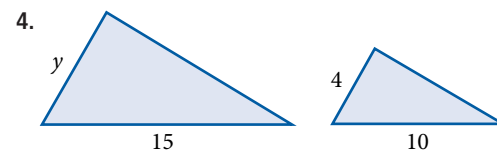
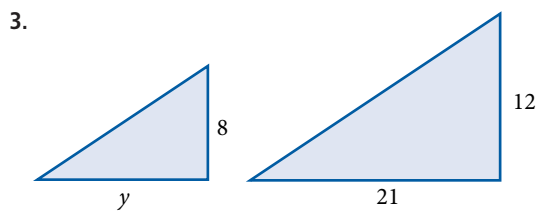
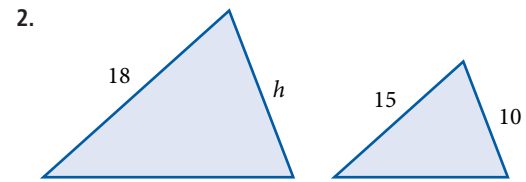
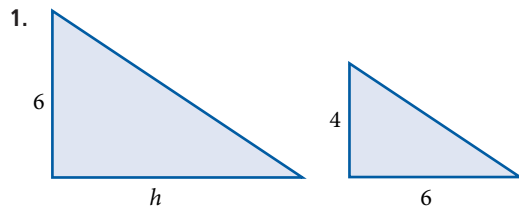
1. What are similar figures?
2. How do we know if corresponding sides of two triangles are proportional?
3. When labeling a triangle ABC , how do we label the sides?
4. How are proportions used when working with similar figures?

Answers

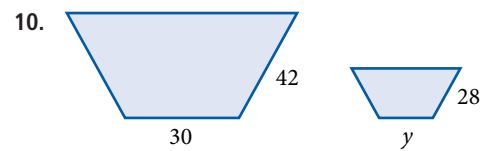
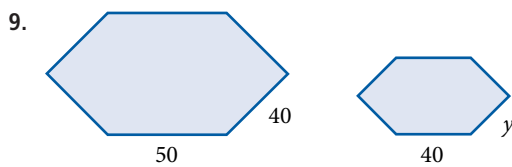
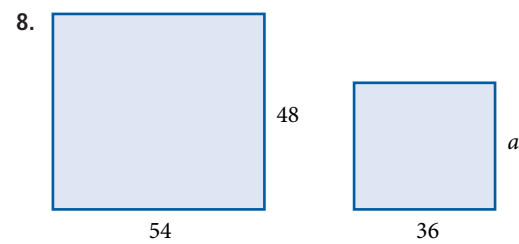
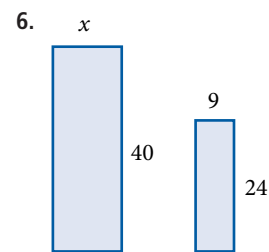
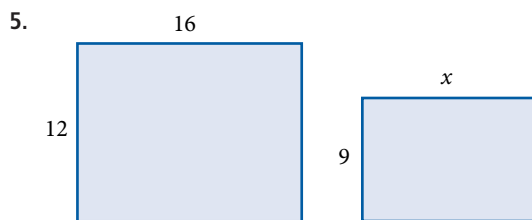
4. 63 ft 5. 20 in.

Problem Set 4.6

A In problems 1–4, for each pair of similar triangles, set up a proportion in order to find the unknown. [Example 1]

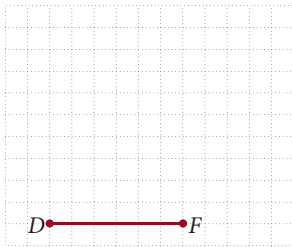
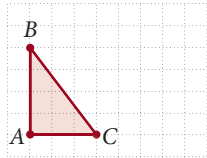


B In problems 5–10, for each pair of similar figures, set up a proportion in order to find the unknown. [Example 2]

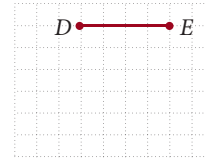
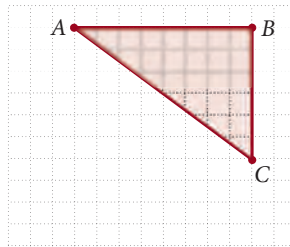


C For each problem, draw a figure on the grid on the right that is similar to the given figure. [Example 3]

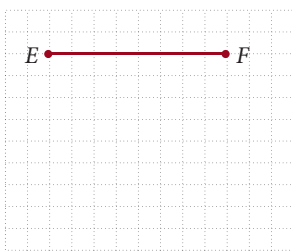
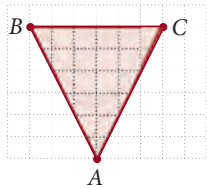
11. AC is proportional to DF .



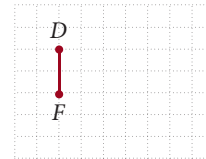
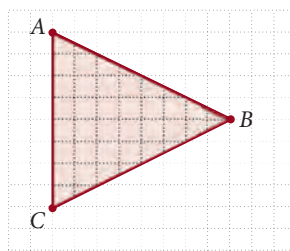
12. AB is proportional to DE .



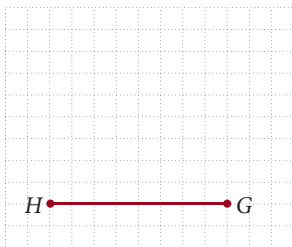
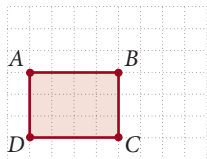
13. BC is proportional to EF .



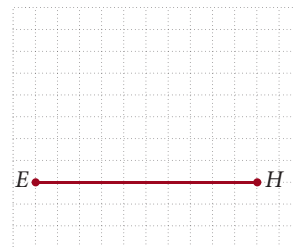
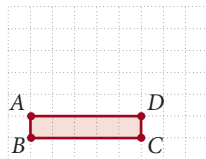
14. AC is proportional to DF .



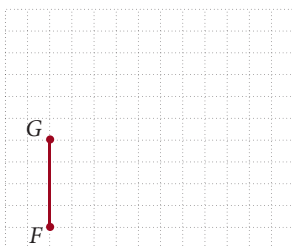
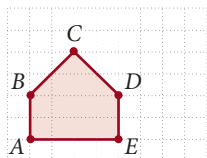
15. DC is proportional to HG .



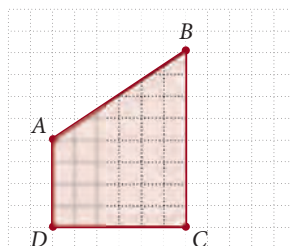
16. AD is proportional to EH .



17. AB is proportional to FG .

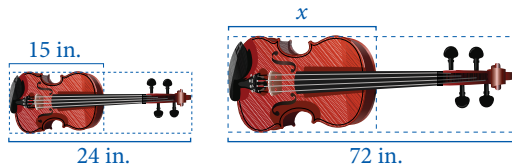


18. BC is proportional to FG .

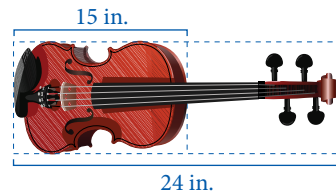


D Applying the Concepts [Examples 4, 5]

19. **Length of a Bass** The entire length of a violin is 24 inches, while its body length is 15 inches. The bass is an instrument proportional to the violin. If the total length of a bass is 72 inches, find its body length.

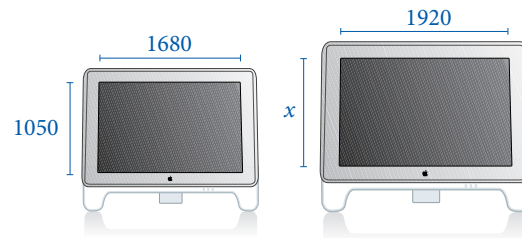


20. **Length of an Instrument** The entire length of a violin is 24 inches, while the body length is 15 inches. Another instrument proportional to the violin has a body length of 25 inches. What is the total length of this instrument?



21. **Video Resolution** A new graphics card can increase the resolution of a computer's monitor. Suppose a monitor has a horizontal resolution of 800 pixels and a vertical resolution of 600 pixels. By adding a new graphics card, the resolutions remain in the same proportions, but the horizontal resolution increases to 1,280 pixels. What is the new vertical resolution?

22. **Screen Resolution** The display of a 20" computer monitor is proportional to that of a 23" monitor. A 20" monitor has a horizontal resolution of 1,680 pixels and a vertical resolution of 1,050 pixels. If a 23" monitor has a horizontal resolution of 1,920 pixels, what is its vertical resolution?

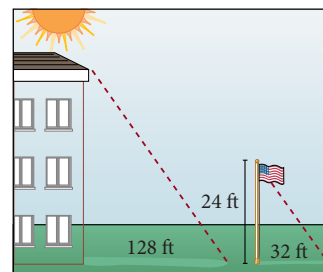
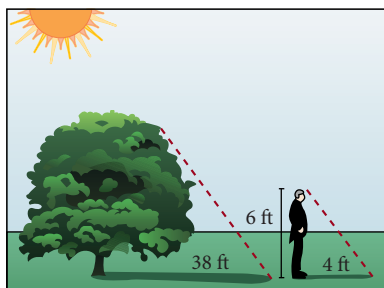


23. **Screen Resolution** The display of a 20" computer monitor is proportional to that of a 17" monitor. A 20" monitor has a horizontal resolution of 1,680 pixels and a vertical resolution of 1,050 pixels. If a 17" monitor has a vertical resolution of 900 pixels, what is its horizontal resolution?

24. **Video Resolution** A new graphics card can increase the resolution of a computer's monitor. Suppose a monitor has a horizontal resolution of 640 pixels and a vertical resolution of 480 pixels. By adding a new graphics card, the resolutions remain in the same proportions, but the vertical resolution increases to 786 pixels. What is the new horizontal resolution?

25. **Height of a Tree** A tree casts a shadow 38 feet long, while a 6-foot man casts a shadow 4 feet long. How tall is the tree?

26. **Height of a Building** A building casts a shadow 128 feet long, while a 24-foot flagpole casts a shadow 32 feet long. How tall is the building?



- 27. Eiffel Tower** At the Paris Las Vegas Hotel is a replica of the Eiffel Tower in France. The heights of the tower in Las Vegas and the tower in France are 460 feet and 1,063 feet respectively. The base of the Eiffel Tower in France is 410 feet wide. What is the width of the base of the tower in Las Vegas? Round to the nearest foot.
- 28. Pyramids** The Luxor Hotel in Las Vegas is almost an exact model of the pyramid of Khafre, the second largest Egyptian pyramid. The heights of the Luxor hotel and the pyramid of Khafre are 350 feet and 470 feet respectively. If the base of the pyramid in Khafre was 705 feet wide, what is the width of the base of the Luxor Hotel?



Maintaining Your Skills

The problems below are a review of the four basic operations with fractions and decimals.

Add.

29. $2.03 + 11.958 + 0.002$

30. $\frac{3}{4} + \frac{1}{6} + \frac{5}{8}$

Subtract.

31. $65.002 - 24.003$

32. $5\frac{1}{8} - 2\frac{5}{8}$

Multiply.

33. 42.18×0.0025

34. $7\frac{1}{7} \times 2\frac{1}{3}$

Divide.

35. $378.9 \div 21.05$

36. $12.25 \div \frac{3}{4}$

37. Find the sum of $2\frac{2}{3}$ and $1\frac{1}{2}$.

38. Find the difference of $2\frac{2}{3}$ and $1\frac{1}{2}$.


39. Find the product of $2\frac{2}{3}$ and $1\frac{1}{2}$.

40. Find the quotient of $2\frac{2}{3}$ and $1\frac{1}{2}$.


Extending the Concepts

41. The rectangles shown here are similar, with similar rectangles within.

- a. In the smaller figure, what is the ratio of the shaded to nonshaded rectangles?



- b. Shade the larger rectangle such that the ratio of shaded to nonshaded rectangles is $\frac{1}{2}$.



- c. For each of the figures, what is the ratio of the shaded rectangles to total rectangles?

Chapter 4 Summary

Ratio [4.1]

The ratio of a to b is $\frac{a}{b}$. The ratio of two numbers is a way of comparing them using fraction notation.

EXAMPLES

- The ratio of 6 to 8 is $\frac{6}{8}$ which can be reduced to $\frac{3}{4}$

Rates [4.2]

Whenever a ratio compares two quantities that have different units (and neither unit can be converted to the other), then the ratio is called a *rate*.

- If a car travels 150 miles in 3 hours, then the ratio of miles to hours is considered a rate:

$$\frac{150 \text{ miles}}{3 \text{ hours}} = 50 \frac{\text{miles}}{\text{hour}} = 50 \text{ miles per hour}$$

Unit Pricing [4.2]

The unit price of an item is the ratio of price to quantity when the quantity is one unit.

- If a 10-ounce package of frozen peas costs 69¢, then the price per ounce, or unit price, is

$$\frac{69 \text{ cents}}{10 \text{ ounces}} = 6.9 \frac{\text{cents}}{\text{ounce}} = 6.9 \text{ cents per ounce}$$

Solving Equations by Division [4.3]

Dividing both sides of an equation by the same number will not change the solution to the equation. For example, the equation $5 \cdot x = 40$ can be solved by dividing both sides by 5.

- Solve: $5 \cdot x = 40$

$$\begin{aligned} 5 \cdot x &= 40 \\ \frac{5 \cdot x}{5} &= \frac{40}{5} && \text{Divide both sides by 5} \\ x &= 8 && 40 \div 5 = 8 \end{aligned}$$

Proportion [4.4]

A proportion is an equation that indicates that two ratios are equal.

The numbers in a proportion are called *terms* and are numbered as follows:

$$\begin{array}{l} \text{First term} \longrightarrow \frac{a}{b} = \frac{c}{d} \longleftarrow \text{Third term} \\ \text{Second term} \longrightarrow \frac{a}{b} = \frac{c}{d} \longleftarrow \text{Fourth term} \end{array}$$

The first and fourth terms are called the *extremes*. The second and third terms are called the *means*.

$$\text{Means} \longrightarrow \frac{a}{b} = \frac{c}{d} \longleftarrow \text{Extremes}$$

- The following is a proportion:

$$\frac{6}{8} = \frac{3}{4}$$

Fundamental Property of Proportions [4.4]

In any proportion the product of the extremes is equal to the product of the means. In symbols,

$$\text{If } \frac{a}{b} = \frac{c}{d} \quad \text{then} \quad ad = bc$$

6. Find x : $\frac{2}{5} = \frac{8}{x}$

$$2 \cdot x = 5 \cdot 8$$

$$2 \cdot x = 40$$

$$\frac{2 \cdot x}{2} = \frac{40}{2}$$

$$x = 20$$

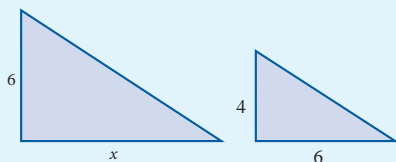
Finding an Unknown Term in a Proportion [4.4]

To find the unknown term in a proportion, we apply the fundamental property of proportions and solve the equation that results by dividing both sides by the number that is multiplied by the unknown. For instance, if we want to find the unknown in the proportion

$$\frac{2}{5} = \frac{8}{x}$$

we use the fundamental property of proportions to set the product of the extremes equal to the product of the means.

7. Find x .



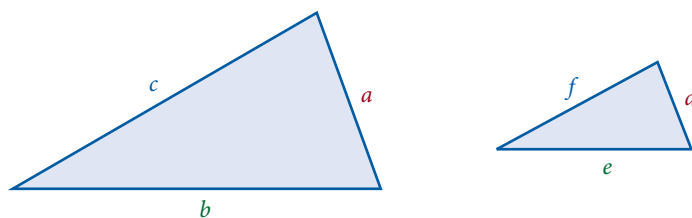
$$\frac{4}{6} = \frac{6}{x}$$

$$36 = 4x$$

$$9 = x$$

Using Proportions to Find Unknown Length with Similar Figures [4.6]

Two triangles that have the same shape are similar when their corresponding sides are proportional, or have the same ratio. The triangles below are similar.



Corresponding Sides

side a corresponds with side d

side b corresponds with side e

side c corresponds with side f

Ratio

$$\frac{a}{d}$$

$$\frac{b}{e}$$

$$\frac{c}{f}$$

Because their corresponding sides are proportional, we write

$$\frac{a}{d} = \frac{b}{e} = \frac{c}{f}$$

COMMON MISTAKES

A common mistake when working with ratios is to write the numbers in the wrong order when writing the ratio as a fraction. For example, the ratio 3 to 5 is equivalent to the fraction $\frac{3}{5}$. It cannot be written as $\frac{5}{3}$.

Chapter 4 Review

Write each of the following ratios as a fraction in lowest terms. [4.1]

1. 9 to 30

2. 30 to 9

3. $\frac{3}{7}$ to $\frac{4}{7}$

4. $\frac{8}{5}$ to $\frac{8}{9}$

5. $2\frac{1}{3}$ to $1\frac{2}{3}$

6. 3 to $2\frac{3}{4}$

7. 0.6 to 1.2

8. 0.03 to 0.24

9. $\frac{1}{5}$ to $\frac{3}{5}$

10. $\frac{2}{7}$ to $\frac{3}{7}$

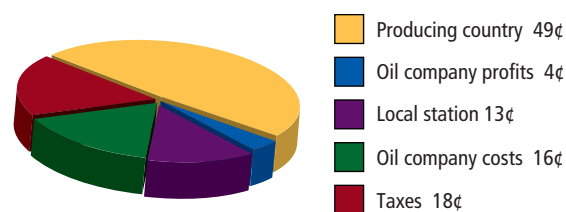
The chart shows where each dollar spent on gasoline in the United States goes. Use the chart for problems 11–14. [4.1]

11. **Ratio** Find the ratio of money paid for taxes to money that goes to oil company profits.

12. **Ratio** What is the ratio of the number of cents spent on oil company costs to the number of cents that goes to local stations?

13. **Ratio** Give the ratio of oil company profits to oil company costs.

14. **Ratio** Give the ratio of taxes to oil company costs and profits.



15. **Gas Mileage** A car travels 285 miles on 15 gallons of gas. What is the rate of gas mileage in miles per gallon? [4.2]

16. **Speed of Sound** If it takes 2.5 seconds for sound to travel 2,750 feet, what is the speed of sound in feet per second? [4.2]

17. **Unit Price** A certain brand of ice cream comes in two different-sized cartons with prices marked as shown. Give the unit price for each carton, and indicate which is the better buy. [4.2]

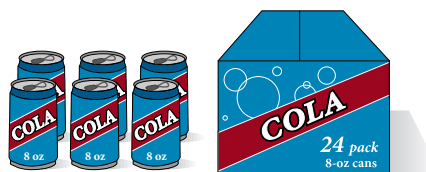


64-ounce carton
\$5.79



32-ounce carton
\$2.69

18. **Unit Price** A 6-pack of store-brand soda is \$1.25, while a 24-pack of name-brand soda is \$5.99. Find the price per soda for each, and determine which is less expensive. [4.2]



Find the missing term in each of the following proportions. [4.4]

19. $\frac{5}{7} = \frac{35}{x}$

20. $\frac{n}{18} = \frac{18}{54}$

21. $\frac{\frac{1}{2}}{10} = \frac{y}{2}$

22. $\frac{x}{1.8} = \frac{5}{1.5}$

23. **Chemistry** Suppose every 2,000 milliliters of a solution contains 24 milliliters of a certain drug. How many milliliters of solution are required to obtain 18 milliliters of the drug? [4.5]

24. **Nutrition** If $\frac{1}{2}$ cup of breakfast cereal contains 8 milligrams of calcium, how much calcium does $1\frac{1}{2}$ cups of the cereal contain? [4.5]

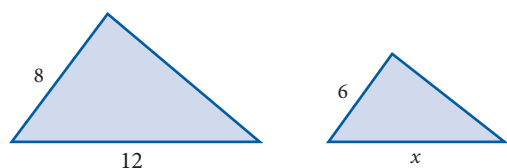
25. **Weight Loss** A man loses 8 pounds during the first 2 weeks of a diet. If he continues losing weight at the same rate, how long will it take him to lose 20 pounds? [4.5]

26. **Men and Women** If the ratio of men to women in a math class is 2 to 3, and there are 12 men in the class, how many women are in the class? [4.5]


27. **Nursing** A patient received a dosage of 7.5 mg of a certain medication. How many tablets must he take if the tablet strength is 2.5 mg?

28. **Nursing** A patient is told to take 300 mg of a certain medication daily. If he takes it in two sittings, how many milligrams is he taking each time he takes the medication?

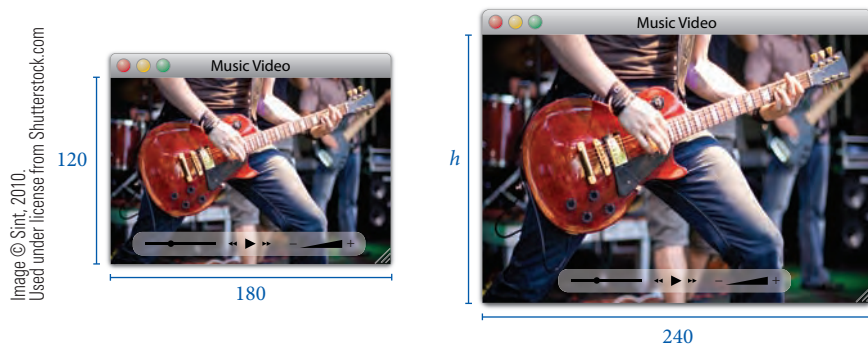
29. **Similar Triangles** The triangles below are similar figures. Find x . [4.6]



30. Find x if the two rectangles are similar.



31. **Video Size** The width and height of the two video clips are proportional. Find the height, h , in pixels of the larger video window.



Chapter 4 Cumulative Review

Simplify.

1.
$$\begin{array}{r} 8359 \\ 401 \\ +1762 \\ \hline \end{array}$$

3. $\frac{378}{21}$

5. $31\overline{)15,689}$

7. $6 \cdot 2^3 - 1$

9. $56 + 18$

11. $(11 - 2) + (403 - 102)$

13. $83.6 - 12.12$

15. $30.6 \div 6.8$

17. $5 \div \left(\frac{1}{4}\right)^2$

19. $5 \div \left(14 \div 1\frac{2}{3}\right)$

2. $3011 - 1032$

4. $(3 \cdot 8) \cdot 2$

6. 5^3

8. $135 \div 15$

10. $\frac{76}{4}$

12. $(3.6)(7.1)$

14. $6.4 + 3.12 + 5.07$

16. $\left(\frac{1}{3}\right)^2 \left(\frac{1}{2}\right)^3$

18. $\frac{1}{6} + \frac{2}{9}$

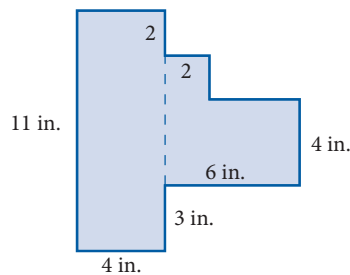
20. $12 - 5\frac{1}{4}$

Solve.

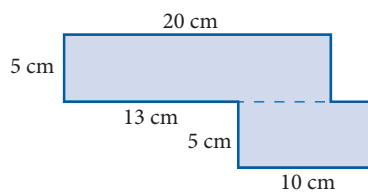
21. $\frac{x}{20} = \frac{5}{4}$

22. $\frac{9}{10} = \frac{18}{x}$

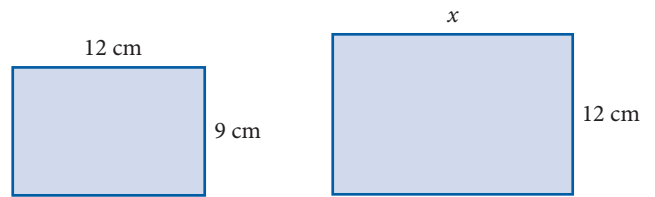
23. Find the perimeter and area of the figure below.



24. Find the perimeter and area of the figure below.



25. Find x if the two rectangles are similar.



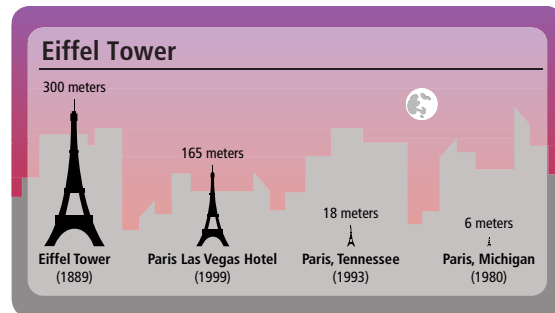
26. **Ratio** If the ratio of men to women in a self-defense class is 3 to 4, and there are 15 men in the class, how many women are in the class?

27. **Surfboard Length** A surfing company decides that a surfboard would be more efficient if its length were reduced by $3\frac{5}{8}$ inches. If the original length was 7 feet $\frac{3}{16}$ inches, what will be the new length of the board (in inches)?

28. **Average Distance** A bicyclist on a cross-country trip travels 72 miles the first day, 113 miles the second day, 108 miles the third day, and 95 miles the fourth day. What is her average distance traveled during the four days?

29. **Teaching** A teacher lectures on five sections in two class periods. If she continues at the same rate, on how many sections can the teacher lecture in 60 class periods?

Use the illustration to answer problems 30 and 31.



30. **Ratio** What is the ratio of the height of the Eiffel Tower in Las Vegas, Nevada to the height of the tower in Paris, France?

31. **Ratio** What is the ratio of the height of the Eiffel tower in Paris, Michigan to the height of the Eiffel tower in Paris, Tennessee?

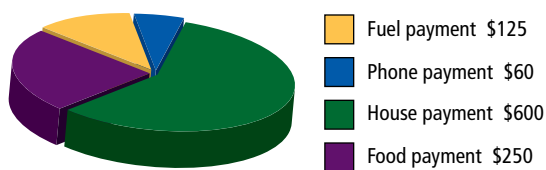
Chapter 4 Test

Write each ratio as a fraction in lowest terms.

1. 24 to 18
2. $\frac{3}{4}$ to $\frac{5}{6}$
3. 5 to $3\frac{1}{3}$
4. 0.18 to 0.6
5. $\frac{3}{11}$ to $\frac{5}{11}$

A family of three budgeted the following amounts for some of their monthly bills:

Family Budget



6. **Ratio** Find the ratio of house payment to fuel payment.
7. **Ratio** Find the ratio of phone payment to food payment.
8. **Gas Mileage** A car travels 414 miles on 18 gallons of gas. What is the rate of gas mileage in miles per gallon?
9. **Unit Price** A certain brand of frozen orange juice comes in two different-sized cans with prices marked as shown. Give the unit price for each can, and indicate which is the better buy.



16-ounce can
\$2.59



12-ounce can
\$1.89

Find the unknown term in each proportion.

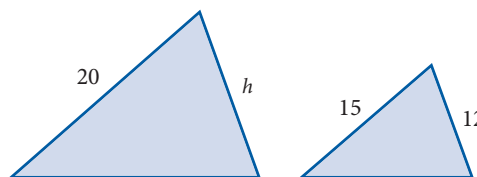
10. $\frac{5}{6} = \frac{30}{x}$

11. $\frac{1.8}{6} = \frac{2.4}{x}$

12. **Baseball** A baseball player gets 9 hits in his first 21 games of the season. If he continues at the same rate, how many hits will he get in 56 games?

13. **Map Reading** The scale on a map indicates that 1 inch on the map corresponds to an actual distance of 60 miles. Two cities are $2\frac{1}{4}$ inches apart on the map. What is the actual distance between the two cities?

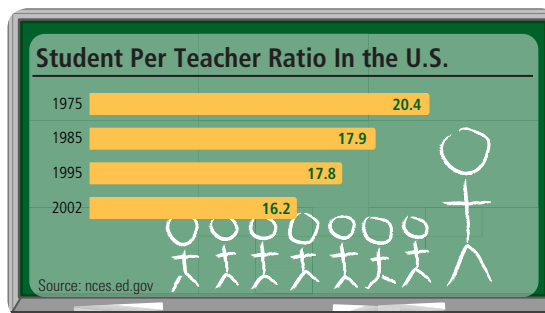
14. The triangles below are similar figures. Find h .



Nursing Sometimes body surface area is used to calculate the necessary dosage for a patient.

15. The dosage for a drug is 15 mg/m^2 . If an adult has a BSA of 1.8 m^2 , what dosage should he take?
16. Find the dosage an adult should take if her BSA is 1.3 m^2 and the dosage strength is 25.5 mg/m^2 .

Use the illustration to answer problem 17.



17. If a school in 2002 had 65 teachers, how many students are enrolled

Chapter 4 Projects

RATIO AND PROPORTION

GROUP PROJECT

Soil Texture

Number of People 2–3

Time Needed 8–12 minutes

Equipment Paper and pencil

Background Soil texture is defined as the relative proportions of sand, silt, and clay. The figure shows the relative sizes of each of these soil particles. People who study soil science, or work with soil, become very familiar with ratios.

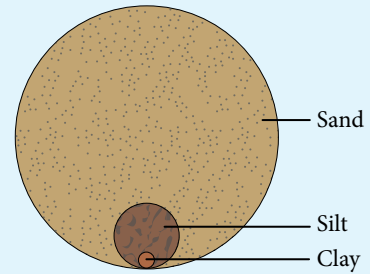


FIGURE 1 Relative sizes of sand, silt, and clay

Procedure A certain type of soil is one part silt, two parts clay, and three parts sand. Use your understanding of ratios and proportions to find the following ratios. Write these ratios as fractions.

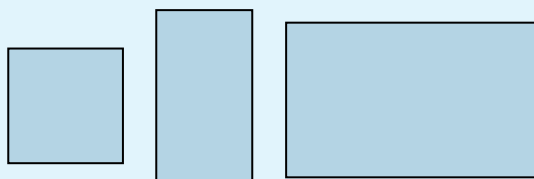
1. Sand to total soil
2. Silt to total soil
3. Clay to total soil

4. What is the sum of the three fractions given in questions 1–3?
5. Let the 48 parts of the rectangle below each represent one cubic yard of the soil mixture above. Label each of the squares with either S (for sand), C (for clay), or T (for silt) based on the amount of each in 48 cubic yards of this soil.

RESEARCH PROJECT

The Golden Ratio

If you were going to design something with a rectangular shape—a television screen, a pool, or a house, for example—would one shape be more pleasing to the eye than another?



For many people, the most pleasing rectangles are rectangles in which the ratio of length to width is a number called the *golden ratio*, which we have written below.

$$\text{Golden Ratio} = \frac{\sqrt{5} + 1}{2} \approx 1.6180339 \dots$$




Kevin Schaefer/Corbis

Research the golden ratio in mathematics and give examples of where it is used in architecture and art. Then measure the length and width of some rectangles around you (TV/computer monitor screen, picture frame, math book, calculator, a dollar, notebook paper, etc.). Calculate the ratio of length to width and indicate which are close to the golden ratio.

A Glimpse of Algebra

In “A Glimpse of Algebra” in Chapter 3, we spent some time adding polynomials. Now we can use the formula for the area of a rectangle developed in Chapter 1, $A = lw$, to multiply some polynomials.

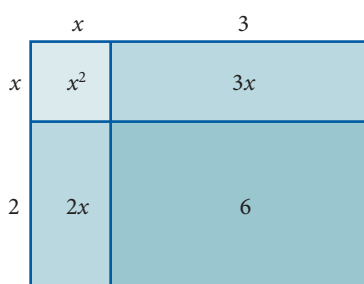
Suppose we have a rectangle with length $x + 3$ and width $x + 2$. Remember, the letter x is used to represent a number, so $x + 3$ and $x + 2$ are just numbers. Here is a diagram:



The area of the whole rectangle is the length times the width, or

$$\text{Total area} = (x + 3)(x + 2)$$

But we can also find the total area by first finding the area of each smaller rectangle, and then adding these smaller areas together. The area of each rectangle is its length times its width, as shown in the following diagram:



Because the total area $(x + 3)(x + 2)$ must be the same as the sum of the smaller areas, we have:

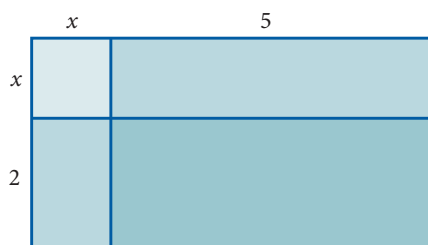
$$\begin{aligned} (x + 3)(x + 2) &= x^2 + 2x + 3x + 6 \\ &= x^2 + 5x + 6 \quad \text{Add } 2x \text{ and } 3x \text{ to get } 5x \end{aligned}$$

The polynomial $x^2 + 5x + 6$ is the product of the two polynomials $x + 3$ and $x + 2$.

Here are some more examples.


EXAMPLE 1

Find the product of $x + 5$ and $x + 2$ by using the following diagram:

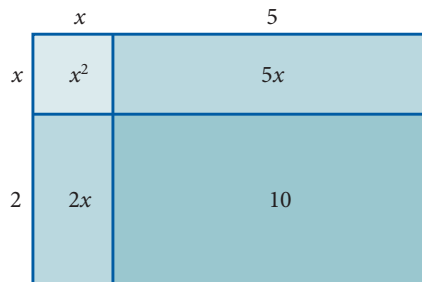


PRACTICE PROBLEMS

1. Find the product of $x + 4$ and $x + 2$ by using the following diagram:




SOLUTION The total area is given by $(x + 5)(x + 2)$. We can fill in the smaller areas by multiplying length times width in each case:



The product of $(x + 5)$ and $(x + 2)$ is

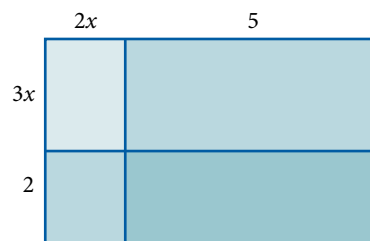
$$\begin{aligned}(x + 5)(x + 2) &= x^2 + 2x + 5x + 10 \\ &= x^2 + 7x + 10\end{aligned}$$

2. Find the product of $3x + 7$ and $2x + 5$ by using the following diagram:

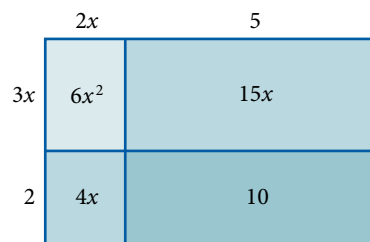


EXAMPLE 2

Find the product of $2x + 5$ and $3x + 2$ by using the following diagram:



SOLUTION We fill in each of the smaller rectangles by multiplying length times width in each case:



Using the information from the diagram, we have:

$$\begin{aligned}(2x + 5)(3x + 2) &= 6x^2 + 4x + 15x + 10 \\ &= 6x^2 + 19x + 10\end{aligned}$$

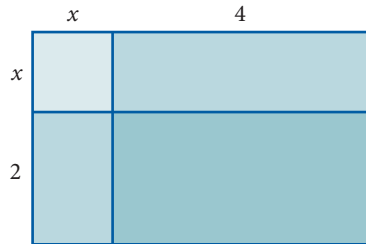
Answers

- $x^2 + 6x + 8$
- $6x^2 + 29x + 35$

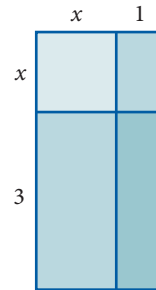
A Glimpse of Algebra Problems

Use the diagram in each problem to help multiply the polynomials.

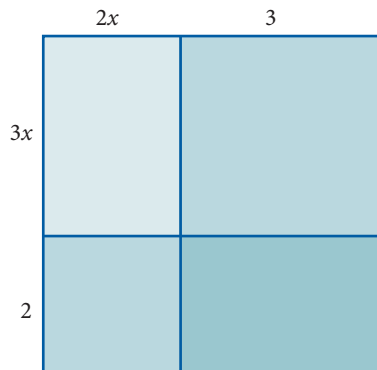
1. $(x + 4)(x + 2)$



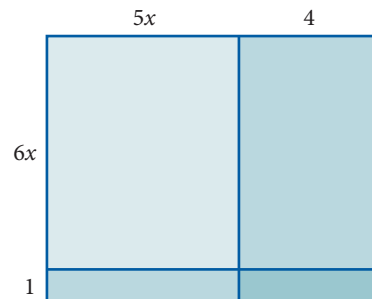
2. $(x + 1)(x + 3)$



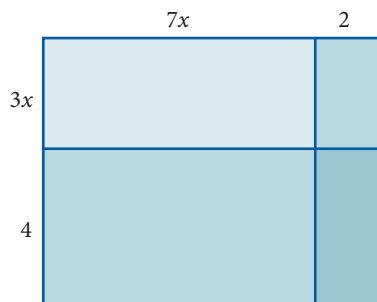
3. $(2x + 3)(3x + 2)$



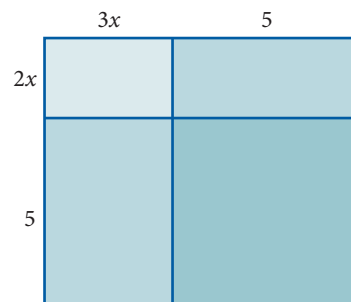
4. $(5x + 4)(6x + 1)$



5. $(7x + 2)(3x + 4)$



6. $(3x + 5)(2x + 5)$



Multiply each of the following pairs of polynomials. You may draw a rectangle to assist you, but you don't have to.

7. $(x + 2)(x + 5)$

8. $(x + 3)(x + 6)$

9. $(2x + 3)(x + 4)$

10. $(2x + 4)(x + 3)$

11. $(7x + 3)(2x + 5)$

12. $(5x + 4)(3x + 3)$

13. $(3x + 2)(3x + 2)$

14. $(2x + 3)(2x + 3)$

15. $(4a + 5)(a + 1)$

16. $(5a + 7)(a + 2)$

17. $(7y + 8)(6y + 9)$

18. $(9y + 3)(2y + 8)$

19. $(4 + 6x)(2 + 3x)$

20. $(5 + 3x)(2 + 5x)$

Percent

5



Chapter Outline

- 5.1 Percents, Decimals, and Fractions
- 5.2 Basic Percent Problems
- 5.3 General Applications of Percent
- 5.4 Sales Tax and Commission
- 5.5 Percent Increase or Decrease and Discount
- 5.6 Interest

Introduction

The eruption of Mount St. Helens in 1980 was the most catastrophic volcanic eruption in American history. The volcano is located in the state of Washington about 100 miles south of Seattle. Its eruption caused dozens of deaths, and destroyed almost 230 acres of forest, along with more than 200 homes. The effects on the carrying capacity of nearby rivers were devastating as well. As the rivers filled with debris and sediment, surrounding lands flooded, more vegetation was lost, and the fish population was greatly reduced.

	Carrying Capacity of the Cowlitz River (cubic feet per second)	Channel Depth of Columbia River
Prior to 1980	76,000	40 feet
After 1980 Eruption	15,000	14 feet
Percent Decrease	80%	65%

Source: US Forest Service

In this chapter we will work with fractions, decimals, and percents. We will see how percents are used in everyday applications, including volcanoes.

Chapter Pretest

The pretest below contains problems that are representative of the problems you will find in the chapter. Change each percent to a decimal.

1. 68%

2. 2%

3. 21.5%

Change each decimal to a percent.

4. 0.39

5. 0.386

6. 3.98

Change each percent to a fraction or mixed number in lowest terms.

7. 33%

8. 45%

9. 8.5%

Change each fraction or mixed number to a percent.

10. $\frac{67}{100}$

11. $\frac{4}{5}$

12. $2\frac{1}{4}$

13. What number is 5% of 24?

14. What percent of 40 is 6?

15. 12 is 24% of what number?

Getting Ready for Chapter 5

The problems below review material covered previously that you need to know in order to be successful in Chapter 5. If you have any difficulty with the problems here, you need to go back and review before going on to Chapter 5.

Perform the indicated operations.

1. $136 + 5.44$

2. $300 - 75$

3. $1,793,000 - 315,568$

4. $\frac{65}{2} \times \frac{1}{100}$

5. 0.2×100

6. 4.89×100

7. $0.15 \cdot 63$

8. $\frac{35.2}{100}$

9. $3.62 \div 100$

10. $\frac{34}{0.29}$ (Round to the nearest tenth.)

11. $600 \times 0.04 \times \frac{60}{360}$

Reduce.

12. $\frac{36}{100}$

13. $\frac{45}{1000}$

14. Change $32\frac{1}{2}$ to an improper fraction.

Change each fraction or mixed number to a decimal.

15. $\frac{3}{8}$

16. $\frac{5}{12}$

17. $2\frac{1}{2}$

Solve

18. $25 = 0.40 \cdot n$

19. $0.12n = 1,836$

20. $1.075x = 3,200$ (Round to the nearest hundredth.)

Percents, Decimals, and Fractions

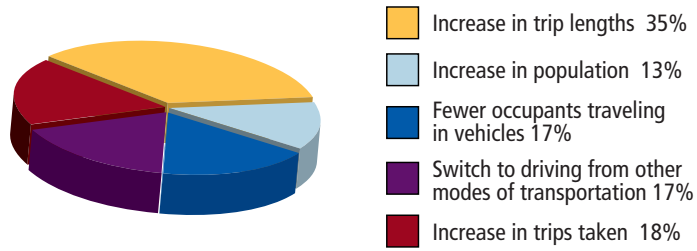
5.1

Introduction . . .

The sizes of categories in the pie chart below are given as percents. The whole pie chart is represented by 100%. In general, 100% of something is the whole thing.

In this section we will look at the meaning of percent. To begin, we learn to change decimals to percents and percents to decimals.

Factors Producing More Traffic Today



A The Meaning of Percent

Percent means “per hundred.” Writing a number as a percent is a way of comparing the number with 100. For example, the number 42% (the % symbol is read “percent”) is the same as 42 one-hundredths. That is:

$$42\% = \frac{42}{100}$$

Percents are really fractions (or ratios) with denominator 100.

Here are some examples that show the meaning of percent.

EXAMPLE 1

$$50\% = \frac{50}{100}$$

EXAMPLE 2

$$75\% = \frac{75}{100}$$

EXAMPLE 3

$$25\% = \frac{25}{100}$$

EXAMPLE 4

$$33\% = \frac{33}{100}$$

EXAMPLE 5

$$6\% = \frac{6}{100}$$

EXAMPLE 6

$$160\% = \frac{160}{100}$$

Objectives

- A Change percents to fractions.
- B Change percents to decimals.
- C Change decimals to percents.
- D Change percents to fractions in lowest terms.
- E Change fractions to percents.

PRACTICE PROBLEMS

Write each number as an equivalent fraction without the % symbol.

1. 40%

2. 80%

3. 15%

4. 37%

5. 8%

6. 150%

Answers

1. $\frac{40}{100}$ 2. $\frac{80}{100}$ 3. $\frac{15}{100}$

4. $\frac{37}{100}$ 5. $\frac{8}{100}$ 6. $\frac{150}{100}$

B Changing Percents to Decimals

To change a percent to a decimal number, we simply use the meaning of percent.

EXAMPLE 7

Change 35.2% to a decimal.

SOLUTION We drop the % symbol and write 35.2 over 100.

$$\begin{aligned} 35.2\% &= \frac{35.2}{100} && \text{Use the meaning of \% to convert to} \\ & && \text{a fraction with denominator 100} \\ &= 0.352 && \text{Divide 35.2 by 100} \end{aligned}$$

We see from Example 7 that 35.2% is the same as the decimal 0.352. The result is that the % symbol has been dropped and the decimal point has been moved two places to the *left*. Because % always means “per hundred,” we will always end up moving the decimal point two places to the left when we change percents to decimals. Because of this, we can write the following rule.

Rule

To change a percent to a decimal, drop the % symbol and move the decimal point two places to the *left*, inserting zeros as placeholders if needed.

Here are some examples to illustrate how to use this rule.

EXAMPLE 8

$$25\% = 0.25$$

EXAMPLE 9

$$75\% = 0.75$$

Notice that the results in Examples 8, 9, and 10 are consistent with the results in Examples 1, 2, and 3

EXAMPLE 10

$$50\% = 0.50$$

EXAMPLE 11

$$6.8\% = 0.068$$

Notice here that we put a 0 in front of the 6 so we can move the decimal point two places to the left

EXAMPLE 12

$$3.62\% = 0.0362$$

EXAMPLE 13

$$0.4\% = 0.004$$

This time we put two 0s in front of the 4 in order to be able to move the decimal point two places to the left

EXAMPLE 14

Cortisone cream is 0.5% hydrocortisone. Writing this number as a decimal, we have

$$0.5\% = 0.005$$

7. Change to a decimal.

a. 25.2%

b. 2.52%

Change each percent to a decimal.

8. 40%

9. 80%

10. 15%

11. 5.6%

12. 4.86%

13. 0.6%

14. 0.58%

Answers

7. a. 0.252 b. 0.0252 8. 0.40

9. 0.80 10. 0.15 11. 0.056

12. 0.0486 13. 0.006 14. 0.0058

C Changing Decimals to Percents

Now we want to do the opposite of what we just did in Examples 7–14. We want to change decimals to percents. We know that 42% written as a decimal is 0.42, which means that in order to change 0.42 back to a percent, we must move the decimal point two places to the *right* and use the % symbol:

$$0.42 = 42\% \quad \text{Notice that we don't show the new decimal point if it is at the end of the number}$$

Rule

To change a decimal to a percent, we move the decimal point two places to the *right* and use the % symbol.

Examples 15–20 show how we use this rule.

EXAMPLE 15

$$0.27 = 27\%$$

EXAMPLE 16

$$4.89 = 489\%$$

EXAMPLE 17

$$0.2 = 0.20 = 20\%$$

Notice here that we put a 0 after the 2 so we can move the decimal point two places to the right

EXAMPLE 18

$$0.09 = 09\% = 9\%$$

Notice that we can drop the 0 at the left without changing the value of the number

EXAMPLE 19

$$25 = 25.00 = 2,500\%$$

Here, we put two 0s after the 5 so that we can move the decimal point two places to the right

EXAMPLE 20

A softball player has a batting average of 0.650. As a percent, this number is $0.650 = 65.0\%$.



Eyewire/Getty Images

As you can see from the examples above, percent is just a way of comparing numbers to 100. To multiply decimals by 100, we move the decimal point two places to the right. To divide by 100, we move the decimal point two places to the left. Because of this, it is a fairly simple procedure to change percents to decimals and decimals to percents.

Write each decimal as a percent.

15. 0.35

16. 5.77

17. 0.4

18. 0.03

19. 45

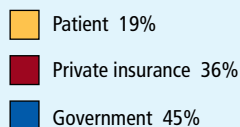
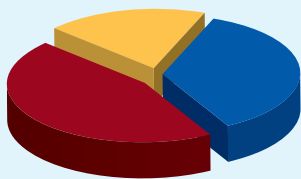
20. 0.69

Answers

15. 35% 16. 577% 17. 40%

18. 3% 19. 4,500% 20. 69%

Who Pays Health Care Bills



21. Change 82% to a fraction in lowest terms.
22. Change 6.5% to a fraction in lowest terms.

23. Change $42\frac{1}{2}\%$ to a fraction in lowest terms.

Answers

21. $\frac{41}{50}$ 22. $\frac{13}{200}$ 23. $\frac{17}{40}$

D Changing Percents to Fractions

To change a percent to a fraction, drop the % symbol and write the original number over 100.

EXAMPLE 21

The pie chart in the margin shows who pays health care bills. Change each percent to a fraction.

SOLUTION In each case, we drop the percent symbol and write the number over 100. Then we reduce to lowest terms if possible.

$$19\% = \frac{19}{100} \qquad 45\% = \frac{45}{100} = \frac{9}{20} \qquad 36\% = \frac{36}{100} = \frac{9}{25}$$

↑
↑
↑

reduce
reduce

EXAMPLE 22

Change 4.5% to a fraction in lowest terms.

SOLUTION We begin by writing 4.5 over 100:

$$4.5\% = \frac{4.5}{100}$$

We now multiply the numerator and the denominator by 10 so the numerator will be a whole number:

$$\begin{aligned} \frac{4.5}{100} &= \frac{4.5 \times 10}{100 \times 10} && \text{Multiply the numerator and} \\ & && \text{the denominator by 10} \\ &= \frac{45}{1,000} \\ &= \frac{9}{200} && \text{Reduce to lowest terms} \end{aligned}$$

EXAMPLE 23

Change $32\frac{1}{2}\%$ to a fraction in lowest terms.

SOLUTION Writing $32\frac{1}{2}\%$ over 100 produces a complex fraction. We change $32\frac{1}{2}$ to an improper fraction and simplify:

$$\begin{aligned} 32\frac{1}{2}\% &= \frac{32\frac{1}{2}}{100} \\ &= \frac{65}{200} && \text{Change } 32\frac{1}{2} \text{ to the improper fraction } \frac{65}{2} \\ &= \frac{65}{2} \times \frac{1}{100} && \text{Dividing by 100 is the same as multiplying by } \frac{1}{100} \\ &= \frac{5 \cdot 13 \cdot 1}{2 \cdot 5 \cdot 20} && \text{Multiplication} \\ &= \frac{13}{40} && \text{Reduce to lowest terms} \end{aligned}$$

Note that we could have changed our original mixed number to a decimal first and then changed to a fraction:

$$32\frac{1}{2}\% = 32.5\% = \frac{32.5}{100} = \frac{32.5 \times 10}{100 \times 10} = \frac{325}{1000} = \frac{5 \cdot 5 \cdot 13}{5 \cdot 5 \cdot 40} = \frac{13}{40}$$

The result is the same in both cases.


E Changing Fractions to Percents

To change a fraction to a percent, we can change the fraction to a decimal and then change the decimal to a percent.

EXAMPLE 24 Suppose the price your bookstore pays for your textbook is $\frac{7}{10}$ of the price you pay for your textbook. Write $\frac{7}{10}$ as a percent.

SOLUTION We can change $\frac{7}{10}$ to a decimal by dividing 7 by 10:

$$\begin{array}{r} 0.7 \\ 10 \overline{)7.0} \\ \underline{70} \\ 0 \end{array}$$



We then change the decimal 0.7 to a percent by moving the decimal point two places to the *right* and using the % symbol:

$$0.7 = 70\%$$

You may have noticed that we could have saved some time in Example 24 by simply writing $\frac{7}{10}$ as an equivalent fraction with denominator 100. That is:

$$\frac{7}{10} = \frac{7 \cdot 10}{10 \cdot 10} = \frac{70}{100} = 70\%$$

This is a good way to convert fractions like $\frac{7}{10}$ to percents. It works well for fractions with denominators of 2, 4, 5, 10, 20, 25, and 50, because they are easy to change to fractions with denominators of 100.

EXAMPLE 25 Change $\frac{3}{8}$ to a percent.

SOLUTION We write $\frac{3}{8}$ as a decimal by dividing 3 by 8. We then change the decimal to a percent by moving the decimal point two places to the right and using the % symbol.

$$\frac{3}{8} = 0.375 = 37.5\%$$

$$\begin{array}{r} .375 \\ 8 \overline{)3.000} \\ \underline{24} \\ 60 \\ \underline{56} \\ 40 \\ \underline{40} \\ 0 \end{array}$$

EXAMPLE 26 Change $\frac{5}{12}$ to a percent.

SOLUTION We begin by dividing 5 by 12:

$$\begin{array}{r} .4166 \\ 12 \overline{)5.0000} \\ \underline{48} \\ 20 \\ \underline{12} \\ 80 \\ \underline{72} \\ 80 \\ \underline{72} \end{array}$$

24. Change to a percent.

- a. $\frac{9}{10}$
b. $\frac{9}{20}$

25. Change to a percent.

- a. $\frac{5}{8}$
b. $\frac{9}{8}$

26. Change to a percent.

- a. $\frac{7}{12}$
b. $\frac{13}{12}$

Answers

24. a. 90% b. 45%
25. a. 62.5% b. 112.5%

Note

When rounding off, let's agree to round off to the nearest thousandth and then move the decimal point. Our answers in percent form will then be accurate to the nearest tenth of a percent, as in Example 26.

27. Change to a percent.

- a. $3\frac{3}{4}$
b. $3\frac{7}{8}$

Answers

26. a. $58\frac{1}{3}\% \approx 58.3\%$
b. $108\frac{1}{3}\% \approx 108.3\%$
27. a. 375% b. 387.5%

Chapter 5 Percent

Because the 6s repeat indefinitely, we can use mixed number notation to write

$$\frac{5}{12} = 0.41\overline{6} = 41\frac{2}{3}\%$$

Or, rounding, we can write

$$\frac{5}{12} = 41.7\% \quad \text{To the nearest tenth of a percent}$$

EXAMPLE 27

Change $2\frac{1}{2}$ to a percent.

SOLUTION We first change to a decimal and then to a percent:

$$\begin{aligned} 2\frac{1}{2} &= 2.5 \\ &= 250\% \end{aligned}$$

Table 1 lists some of the most commonly used fractions and decimals and their equivalent percents.

Fraction	Decimal	Percent
$\frac{1}{2}$	0.5	50%
$\frac{1}{4}$	0.25	25%
$\frac{3}{4}$	0.75	75%
$\frac{1}{3}$	0.3	$33\frac{1}{3}\%$
$\frac{2}{3}$	0.6	$66\frac{2}{3}\%$
$\frac{1}{5}$	0.2	20%
$\frac{2}{5}$	0.4	40%
$\frac{3}{5}$	0.6	60%
$\frac{4}{5}$	0.8	80%

Getting Ready for Class

After reading through the preceding section, respond in your own words and in complete sentences.

1. What is the relationship between the word *percent* and the number 100?
2. Explain in words how you would change 25% to a decimal.
3. Explain in words how you would change 25% to a fraction.
4. After reading this section you know that $\frac{1}{2}$, 0.5, and 50% are equivalent. Show mathematically why this is true.

Problem Set 5.1

A Write each percent as a fraction with denominator 100. [Examples 1–6]

1. 20%

2. 40%

3. 60%

4. 80%

5. 24%

6. 48%

7. 65%

8. 35%

B Change each percent to a decimal. [Examples 7–14]

9. 23%

10. 34%

11. 92%

12. 87%

13. 9%

14. 7%

15. 3.4%

16. 5.8%

17. 6.34%

18. 7.25%

19. 0.9%

20. 0.6%

C Change each decimal to a percent. [Examples 15–20]

21. 0.23

22. 0.34

23. 0.92

24. 0.87

25. 0.45

26. 0.54

27. 0.03

28. 0.04

29. 0.6

30. 0.9

31. 0.8

32. 0.5

33. 0.27

34. 0.62

35. 1.23

36. 2.34

D Change each percent to a fraction in lowest terms. [Examples 21–23]

37. 60%

38. 40%

39. 75%

40. 25%

41. 4%

42. 2%

43. 26.5%

44. 34.2%

45. 71.87%

46. 63.6%

47. 0.75%

48. 0.45%

49. $6\frac{1}{4}\%$

50. $5\frac{1}{4}\%$

51. $33\frac{1}{3}\%$

52. $66\frac{2}{3}\%$

E Change each fraction or mixed number to a percent. [Examples 24–27]

53. $\frac{1}{2}$

54. $\frac{1}{4}$

55. $\frac{3}{4}$

56. $\frac{2}{3}$

57. $\frac{1}{3}$

58. $\frac{1}{5}$

59. $\frac{4}{5}$

60. $\frac{1}{6}$

61. $\frac{7}{8}$

62. $\frac{1}{8}$

63. $\frac{7}{50}$

64. $\frac{9}{25}$

65. $3\frac{1}{4}$

66. $2\frac{1}{8}$

67. $1\frac{1}{2}$

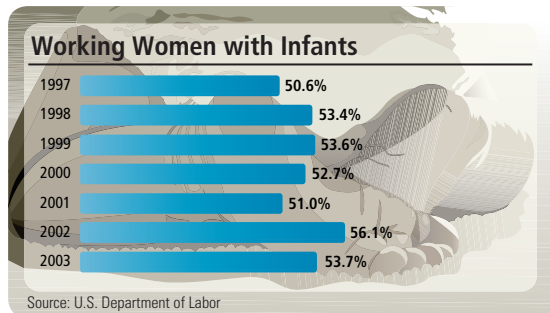
68. $1\frac{3}{4}$

69. $\frac{21}{43}$ to the nearest tenth of a percent

70. $\frac{36}{49}$ to the nearest tenth of a percent

Applying the Concepts

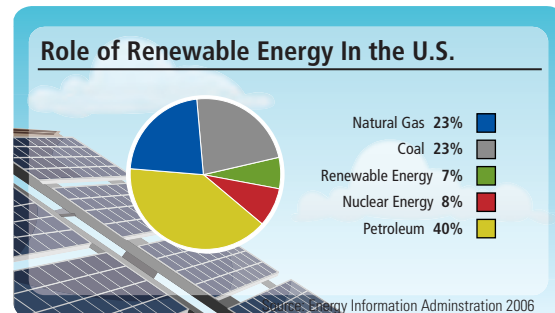
71. **Mothers** The chart shows the percentage of women who continue working after having a baby.



Using the chart, convert the percentage for the following years to a decimal.

- 1997
- 2000
- 2003

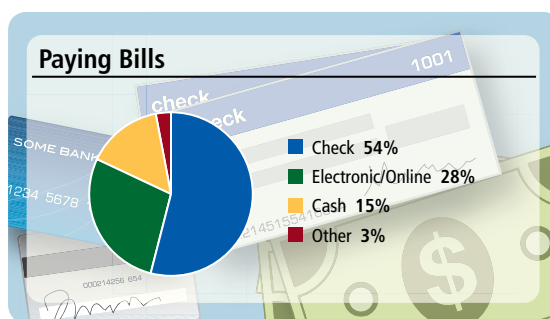
72. **U.S. Energy** The pie chart shows where Americans get their energy.



Using the chart, convert the percentage to a fraction for the following types of energy. Reduce to lowest terms.

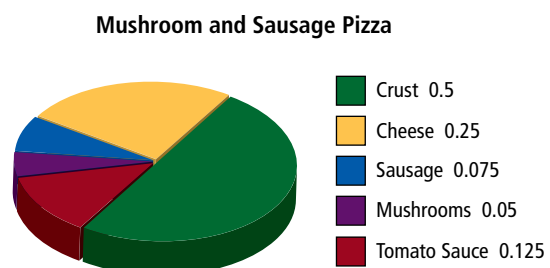
- Natural Gas
- Nuclear Energy
- Petroleum

73. **Paying Bills** According to Pew Research, a non-political organization that provides information on the issues, attitudes and trends shaping America, most people still pay their monthly bills by check.



- Convert each percent to a fraction.
- Convert each percent to a decimal.
- About how many times more likely are you to pay a bill with a check than by electronic or online methods?

74. **Pizza Ingredients** The pie chart below shows the decimal representation of each ingredient by weight that is used to make a sausage and mushroom pizza. We see that half of the pizza's weight comes from the crust. Change each decimal to a percent.



Calculator Problems

Use a calculator to write each fraction as a decimal, and then change the decimal to a percent. Round all answers to the nearest tenth of a percent.

75. $\frac{29}{37}$

76. $\frac{18}{83}$

77. $\frac{6}{51}$

78. $\frac{8}{95}$

79. $\frac{236}{327}$

80. $\frac{568}{732}$

Getting Ready for the Next Section

Multiply.

81. $0.25(74)$

82. $0.15(63)$

83. $0.435(25)$

84. $0.635(45)$

Divide. Round the answers to the nearest thousandth, if necessary.

85. $\frac{21}{42}$

86. $\frac{21}{84}$

87. $\frac{25}{0.4}$

88. $\frac{31.9}{78}$

Solve for n .

89. $42n = 21$

90. $25 = 0.40n$

Maintaining Your Skills

Write as a decimal.

91. $\frac{1}{8}$

92. $\frac{3}{8}$

93. $\frac{5}{8}$

94. $\frac{7}{8}$

95. $\frac{1}{16}$

96. $\frac{3}{16}$

97. $\frac{5}{16}$

98. $\frac{7}{16}$

Divide.

99. $\frac{1}{8} \div \frac{1}{16}$

100. $\frac{3}{8} \div \frac{3}{16}$

101. $\frac{5}{8} \div \frac{5}{16}$

102. $\frac{7}{8} \div \frac{7}{16}$

103. $0.125 \div 0.0625$

104. $0.375 \div 0.1875$

105. $0.625 \div 0.3125$

106. $0.875 \div 0.4375$

Objectives

- A** Solve the three types of percent problems.
- B** Solve percent problems involving food labels.
- C** Solve percent problems using proportions.

Introduction . . .

The American Dietetic Association (ADA) recommends eating foods in which the number of calories from fat is less than 30% of the total number of calories. Foods that satisfy this requirement are considered healthy foods. Is the nutrition label shown below from a food that the ADA would consider healthy? This is the type of question we will be able to answer after we have worked through the examples in this section.

Nutrition Facts	
Serving Size 1/2 cup (65g)	
Servings Per Container: 8	
Amount Per Serving	
Calories 150	Calories from fat 90
% Daily Value*	
Total Fat 10g	16%
Saturated Fat 6g	32%
Cholesterol 35mg	12%
Sodium 30mg	1%
Total Carbohydrate 14g	5%
Dietary Fiber 0g	0%
Sugars 11g	
Protein 2g	
Vitamin A 6%	• Vitamin C 0%
Calcium 6%	• Iron 0%
*Percent Daily Values are based on a 2,000 calorie diet.	

FIGURE 1 Nutrition label from vanilla ice cream

This section is concerned with three kinds of word problems that are associated with percents. Here is an example of each type:

Type A: What number is 15% of 63?

Type B: What percent of 42 is 21?

Type C: 25 is 40% of what number?

A Solving Percent Problems Using Equations

The first method we use to solve all three types of problems involves translating the sentences into equations and then solving the equations. The following translations are used to write the sentences as equations:

English	Mathematics
is	=
of	· (multiply)
a number	n
what number	n
what percent	n

The word *is* always translates to an = sign. The word *of* almost always means multiply. The number we are looking for can be represented with a letter, such as n or x .

PRACTICE PROBLEMS

1. a. What number is 25% of 74?
b. What number is 50% of 74?

2. a. What percent of 84 is 21?
b. What percent of 84 is 42?

3. a. 35 is 40% of what number?
b. 70 is 40% of what number?

Answers

1. a. 18.5 b. 37
2. a. 25% b. 50%
3. a. 87.5 b. 175

Chapter 5 Percent

EXAMPLE 1

What number is 15% of 63?

SOLUTION We translate the sentence into an equation as follows:

$$\begin{array}{c} \text{What number is 15\% of 63?} \\ \downarrow \downarrow \downarrow \downarrow \downarrow \\ n = 0.15 \cdot 63 \end{array}$$

To do arithmetic with percents, we have to change to decimals. That is why 15% is rewritten as 0.15. Solving the equation, we have

$$\begin{aligned} n &= 0.15 \cdot 63 \\ n &= 9.45 \end{aligned}$$

$$\boxed{15\% \text{ of } 63 \text{ is } 9.45}$$

EXAMPLE 2

What percent of 42 is 21?

SOLUTION We translate the sentence as follows:

$$\begin{array}{c} \text{What percent of 42 is 21?} \\ \downarrow \downarrow \downarrow \downarrow \downarrow \\ n \cdot 42 = 21 \end{array}$$

We solve for n by dividing both sides by 42.

$$\begin{aligned} \frac{n \cdot 42}{42} &= \frac{21}{42} \\ n &= \frac{21}{42} \\ n &= 0.50 \end{aligned}$$

Because the original problem asked for a percent, we change 0.50 to a percent:

$$n = 50\%$$

$$\boxed{21 \text{ is } 50\% \text{ of } 42}$$

EXAMPLE 3

25 is 40% of what number?

SOLUTION Following the procedure from the first two examples, we have

$$\begin{array}{c} 25 \text{ is } 40\% \text{ of what number?} \\ \downarrow \downarrow \downarrow \downarrow \downarrow \\ 25 = 0.40 \cdot n \end{array}$$

Again, we changed 40% to 0.40 so we can do the arithmetic involved in the problem. Dividing both sides of the equation by 0.40, we have

$$\begin{aligned} \frac{25}{0.40} &= \frac{0.40 \cdot n}{0.40} \\ \frac{25}{0.40} &= n \\ 62.5 &= n \end{aligned}$$

$$\boxed{25 \text{ is } 40\% \text{ of } 62.5}$$

As you can see, all three types of percent problems are solved in a similar manner. We write *is* as =, *of* as ·, and *what number* as n . The resulting equation is then solved to obtain the answer to the original question.

EXAMPLE 4

What number is 43.5% of 25?

$$n = 0.435 \cdot 25$$

$$n = 10.9$$

Rounded to the nearest tenth

10.9 is 43.5% of 25

EXAMPLE 5

What percent of 78 is 31.9?

$$n \cdot 78 = 31.9$$

$$\frac{n \cdot 78}{78} = \frac{31.9}{78}$$

$$n = \frac{31.9}{78}$$

 $n = 0.409$ Rounded to the nearest thousandth $n = 40.9\%$

40.9% of 78 is 31.9

EXAMPLE 6

34 is 29% of what number?

$$34 = 0.29 \cdot n$$

$$\frac{34}{0.29} = \frac{0.29 \cdot n}{0.29}$$

$$\frac{34}{0.29} = n$$

 $117.2 = n$ Rounded to the nearest tenth

34 is 29% of 117.2

B Food Labels**EXAMPLE 7**

As we mentioned in the introduction to this section, the American Dietetic Association recommends eating foods in which the number of calories from fat is less than 30% of the total number of calories. According to the nutrition label below, what percent of the total number of calories is fat calories?

Nutrition Facts	
Serving Size 1/2 cup (65g)	
Servings Per Container: 8	
Amount Per Serving	
Calories 150	Calories from fat 90
% Daily Value*	
Total Fat 10g	16%
Saturated Fat 6g	32%
Cholesterol 35mg	12%
Sodium 30mg	1%
Total Carbohydrate 14g	5%
Dietary Fiber 0g	0%
Sugars 11g	
Protein 2g	
Vitamin A 6%	Vitamin C 0%
Calcium 6%	Iron 0%
*Percent Daily Values are based on a 2,000 calorie diet.	

FIGURE 2 Nutrition label from vanilla ice cream

4. What number is 63.5% of 45?
(Round to the nearest tenth.)

5. What percent of 85 is 11.9?

6. 62 is 39% of what number?
(Round to the nearest tenth.)

7. The nutrition label below is from a package of vanilla frozen yogurt. What percent of the total number of calories is fat calories? Round your answer to the nearest tenth of a percent.

Nutrition Facts	
Serving Size 1/2 cup (98g)	
Servings Per Container: 4	
Amount Per Serving	
Calories 160	Calories from fat 25
% Daily Value*	
Total Fat 2.5g	4%
Saturated Fat 1.5g	7%
Cholesterol 45mg	15%
Sodium 55mg	2%
Total Carbohydrate 26g	9%
Dietary Fiber 0g	0%
Sugars 19g	
Protein 8g	
Vitamin A 0%	Vitamin C 0%
Calcium 25%	Iron 0%
*Percent Daily Values are based on a 2,000 calorie diet.	

Answers

4. 28.6 5. 14% 6. 159.0

SOLUTION To solve this problem, we must write the question in the form of one of the three basic percent problems shown in Examples 1–6. Because there are 90 calories from fat and a total of 150 calories, we can write the question this way: 90 is what percent of 150?

Now that we have written the question in the form of one of the basic percent problems, we simply translate it into an equation. Then we solve the equation.

$$\begin{array}{l}
 90 \text{ is what percent of } 150? \\
 \downarrow \downarrow \downarrow \swarrow \swarrow \\
 90 = n \cdot 150 \\
 \frac{90}{150} = n \\
 n = 0.60 = 60\%
 \end{array}$$

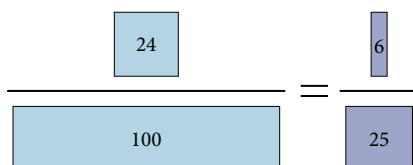
The number of calories from fat in this package of ice cream is 60% of the total number of calories. Thus the ADA would not consider this to be a healthy food.

C Solving Percent Problems Using Proportions

We can look at percent problems in terms of proportions also. For example, we know that 24% is the same as $\frac{24}{100}$, which reduces to $\frac{6}{25}$. That is

$$\begin{array}{ccc}
 \frac{24}{100} & = & \frac{6}{25} \\
 \uparrow & \uparrow & \uparrow \\
 \underbrace{24 \text{ is to } 100} & \text{as} & \underbrace{6 \text{ is to } 25}
 \end{array}$$

We can illustrate this visually with boxes of proportional lengths:



In general, we say

$$\begin{array}{ccc}
 \frac{\text{Percent}}{100} & = & \frac{\text{Amount}}{\text{Base}} \\
 \uparrow & \uparrow & \uparrow \\
 \underbrace{\text{Percent is to } 100} & \text{as} & \underbrace{\text{Amount is to Base}}
 \end{array}$$

Answers

7. 15.6% of the calories are from fat. (So far as fat content is concerned, the frozen yogurt is a healthier choice than the ice cream.)

EXAMPLE 8

What number is 15% of 63?

SOLUTION This is the same problem we worked in Example 1. We let n be the number in question. We reason that n will be smaller than 63 because it is only 15% of 63. The base is 63 and the amount is n . We compare n to 63 as we compare 15 to 100. Our proportion sets up as follows:

$$\begin{array}{ccc} \underbrace{15 \text{ is to } 100} & \text{as} & \underbrace{n \text{ is to } 63} \\ \downarrow & & \downarrow \\ \frac{15}{100} & = & \frac{n}{63} \end{array}$$

Solving the proportion, we have

$$\begin{array}{ll} 15 \cdot 63 = 100n & \text{Extremes/means property} \\ 945 = 100n & \text{Simplify the left side} \\ 9.45 = n & \text{Divide each side by 100} \end{array}$$

This gives us the same result we obtained in Example 1.

EXAMPLE 9

What percent of 42 is 21?

SOLUTION This is the same problem we worked in Example 2. We let n be the percent in question. The amount is 21 and the base is 42. We compare n to 100 as we compare 21 to 42. Here is our reasoning and proportion:

$$\begin{array}{ccc} \underbrace{n \text{ is to } 100} & \text{as} & \underbrace{21 \text{ is to } 42} \\ \downarrow & & \downarrow \\ \frac{n}{100} & = & \frac{21}{42} \end{array}$$

Solving the proportion, we have

$$\begin{array}{ll} 42n = 21 \cdot 100 & \text{Extremes/means property} \\ 42n = 2,100 & \text{Simplify the right side} \\ n = 50 & \text{Divide each side by 42} \end{array}$$

Since n is a percent, our answer is 50%, giving us the same result we obtained in Example 2.

8. Rework Practice Problem 1 using proportions.

9. Rework Practice Problem 2 using proportions.

Answers

8. a. 18.5 b. 37
9. a. 25% b. 50%

10. Rework Practice Problem 3 using proportions.



Note When you work the problems in the problem set, use whichever method you like, unless your instructor indicates that you are to use one method instead of the other.

EXAMPLE 10

25 is 40% of what number?

SOLUTION This is the same problem we worked in Example 3. We let n be the number in question. The base is n and the amount is 25. We compare 25 to n as we compare 40 to 100. Our proportion sets up as follows:

$$\begin{array}{ccc} \underbrace{40 \text{ is to } 100} & \text{as} & \underbrace{25 \text{ is to } n} \\ \downarrow & & \downarrow \\ \frac{40}{100} & = & \frac{25}{n} \\ \\ \boxed{40} & & \boxed{25} \\ \hline \boxed{100} & = & \boxed{n} \end{array}$$

Solving the proportion, we have

$$\begin{array}{ll} 40 \cdot n = 25 \cdot 100 & \text{Extremes/means property} \\ 40 \cdot n = 2,500 & \text{Simplify the right side} \\ n = 62.5 & \text{Divide each side by 40} \end{array}$$

So, 25 is 40% of 62.5, which is the same result we obtained in Example 3. ■

Getting Ready for Class

After reading through the preceding section, respond in your own words and in complete sentences.

- When we translate a sentence such as "What number is 15% of 63?" into symbols, what does each of the following translate to?
 - is*
 - of*
 - what number*
- Look at Example 1 in your text and answer the question below.

The number 9.45 is what percent of 63?

- Show that the answer to the question below is the same as the answer to the question in Example 2 of your text.

The number 21 is what percent of 42?

- If 21 is 50% of 42, then 21 is what percent of 84?

Answer

10. a. 87.5 b. 175

Problem Set 5.2

A C Solve each of the following problems. [Examples 1–6]

1. What number is 25% of 32?
2. What number is 10% of 80?
3. What number is 20% of 120?
4. What number is 15% of 75?
5. What number is 54% of 38?
6. What number is 72% of 200?
7. What number is 11% of 67?
8. What number is 2% of 49?
9. What percent of 24 is 12?
10. What percent of 80 is 20?
11. What percent of 50 is 5?
12. What percent of 20 is 4?
13. What percent of 36 is 9?
14. What percent of 70 is 14?
15. What percent of 8 is 6?
16. What percent of 16 is 9?
17. 32 is 50% of what number?
18. 16 is 20% of what number?
19. 10 is 20% of what number?
20. 11 is 25% of what number?
21. 37 is 4% of what number?
22. 90 is 80% of what number?
23. 8 is 2% of what number?
24. 6 is 3% of what number?

A C The following problems can be solved by the same method you used in Problems 1–24. [Examples 1–6]

25. What is 6.4% of 87?
26. What is 10% of 102?
27. 25% of what number is 30?
28. 10% of what number is 22?
29. 28% of 49 is what number?
30. 97% of 28 is what number?
31. 27 is 120% of what number?
32. 24 is 150% of what number?
33. 65 is what percent of 130?
34. 26 is what percent of 78?
35. What is 0.4% of 235,671?
36. What is 0.8% of 721,423?
37. 4.89% of 2,000 is what number?
38. 3.75% of 4,000 is what number?
39. Write a basic percent problem, the solution to which can be found by solving the equation $n = 0.25(350)$.
40. Write a basic percent problem, the solution to which can be found by solving the equation $n = 0.35(250)$.
41. Write a basic percent problem, the solution to which can be found by solving the equation $n \cdot 24 = 16$.
42. Write a basic percent problem, the solution to which can be found by solving the equation $n \cdot 16 = 24$.
43. Write a basic percent problem, the solution to which can be found by solving the equation $46 = 0.75 \cdot n$.
44. Write a basic percent problem, the solution to which can be found by solving the equation $75 = 0.46 \cdot n$.

B Applying the Concepts [Example 7]

Nutrition For each nutrition label in Problems 45–48, find what percent of the total number of calories comes from fat calories. Then indicate whether the label is from a food considered healthy by the American Dietetic Association. Round to the nearest tenth of a percent if necessary.

45. Spaghetti

Nutrition Facts	
Serving Size 2 oz. (56g per 1/8 of pkg) dry	
Servings Per Container: 8	
Amount Per Serving	
Calories 210	Calories from fat 10
% Daily Value*	
Total Fat 1g	2%
Saturated Fat 0g	0%
Polyunsaturated Fat 0.5g	
Monounsaturated Fat 0g	
Cholesterol 0mg	0%
Sodium 0mg	0%
Total Carbohydrate 42g	14%
Dietary Fiber 2g	7%
Sugars 3g	
Protein 7g	
Vitamin A 0%	• Vitamin C 0%
Calcium 0%	• Iron 10%
Thiamin 30%	• Riboflavin 10%
Niacin 15%	•
*Percent Daily Values are based on a 2,000 calorie diet	

46. Canned Italian tomatoes

Nutrition Facts	
Serving Size 1/2 cup (121g)	
Servings Per Container: about 3 1/2	
Amount Per Serving	
Calories 25	Calories from fat 0
% Daily Value*	
Total Fat 0g	0%
Saturated Fat 0g	0%
Cholesterol 0mg	0%
Sodium 300mg	12%
Potassium 145mg	4%
Total Carbohydrate 4g	2%
Dietary Fiber 1g	4%
Sugars 4g	
Protein 1g	
Vitamin A 20%	• Vitamin C 15%
Calcium 4%	• Iron 15%
*Percent Daily Values are based on a 2,000 calorie diet.	

47. Shredded Romano cheese

Nutrition Facts	
Serving Size 2 tsp (5g)	
Servings Per Container: 34	
Amount Per Serving	
Calories 20	Calories from fat 10
% Daily Value*	
Total Fat 1.5g	2%
Saturated Fat 1g	5%
Cholesterol 5mg	2%
Sodium 70mg	3%
Total Carbohydrate 0g	0%
Fiber 0g	0%
Sugars 0g	
Protein 2g	
Vitamin A 0%	• Vitamin C 0%
Calcium 4%	• Iron 0%
*Percent Daily Values are based on a 2,000 calorie diet.	

48. Tortilla chips

Nutrition Facts	
Serving Size 1 oz (28g/About 12 chips)	
Servings Per Container: about 2	
Amount Per Serving	
Calories 140	Calories from fat 60
% Daily Value*	
Total Fat 7g	1%
Saturated Fat 1g	6%
Cholesterol 0mg	0%
Sodium 170mg	7%
Total Carbohydrate 18g	6%
Dietary Fiber 1g	4%
Sugars less than 1g	
Protein 2g	
Vitamin A 0%	• Vitamin C 0%
Calcium 4%	• Iron 2%
*Percent Daily Values are based on a 2,000 calorie diet.	

Getting Ready for the Next Section

Solve each equation.

49. $96 = n \cdot 120$

50. $2,400 = 0.48 \cdot n$

51. $114 = 150n$

52. $3,360 = 0.42n$

53. What number is 80% of 60?

54. What number is 25% of 300?

Maintaining Your Skills

Multiply.

55. 2×0.125

56. 3×0.125

57. 4×0.125

58. 5×0.125

59. The sequence below is an arithmetic sequence in which each term is found by adding $\frac{1}{8}$ to the previous term. Find the next three numbers in the sequence.

$$\frac{1}{4}, \frac{3}{8}, \frac{1}{2}, \dots$$

60. The sequence below is an arithmetic sequence in which each term is found by adding $\frac{1}{16}$ to the previous term. Find the next three numbers in the sequence.

$$\frac{1}{8}, \frac{3}{16}, \frac{1}{4}, \dots$$

Simplify.

61. $\frac{1}{4} - \frac{1}{8} + \frac{1}{2} - \frac{3}{8}$

62. $\frac{7}{8} - \frac{3}{4} + \frac{5}{8} - \frac{1}{2}$

Write as a decimal.

63. $\frac{2}{8}$

64. $\frac{4}{8}$

65. $\frac{6}{8}$

66. $\frac{8}{8}$

67. $\frac{2}{16}$

68. $\frac{4}{16}$

69. $\frac{6}{16}$

70. $\frac{8}{16}$

Write in order from smallest to largest.

71. $\frac{3}{8}, \frac{1}{4}, \frac{5}{8}, \frac{1}{8}, \frac{1}{2}, \frac{3}{4}, \frac{7}{8}$

72. $\frac{3}{16}, \frac{1}{8}, \frac{1}{4}, \frac{3}{8}, \frac{7}{16}, \frac{1}{16}, \frac{1}{2}, \frac{5}{16}$

General Applications of Percent

5.3

Objectives

- A** Solve application problems involving percent.

Introduction . . .

As you know from watching television and reading the newspaper, we encounter percents in many situations in everyday life. A recent newspaper article discussing the effects of a cholesterol-lowering drug stated that the drug in question “lowered levels of LDL cholesterol by an average of 35%.” As we progress through this chapter, we will become more and more familiar with percent. As a result, we will be better equipped to understand statements like the one above concerning cholesterol.

In this section we continue our study of percent by doing more of the translations that were introduced in Section 5.2. The better you are at working the problems in Section 5.2, the easier it will be for you to get started on the problems in this section.

A Applications Involving Percent

EXAMPLE 1

On a 120-question test, a student answered 96 correctly. What percent of the problems did the student work correctly?

SOLUTION We have 96 correct answers out of a possible 120. The problem can be restated as

$$\begin{aligned} & 96 \text{ is what percent of } 120? \\ & \downarrow \downarrow \downarrow \swarrow \searrow \\ & 96 = n \cdot 120 \\ & \frac{96}{120} = \frac{n \cdot 120}{120} && \text{Divide both sides by } 120 \\ & n = \frac{96}{120} && \text{Switch the left and right} \\ & && \text{sides of the equation} \\ & n = 0.80 && \text{Divide } 96 \text{ by } 120 \\ & = 80\% && \text{Rewrite as a percent} \end{aligned}$$

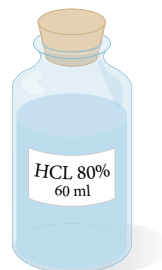
When we write a test score as a percent, we are comparing the original score to an equivalent score on a 100-question test. That is, 96 correct out of 120 is the same as 80 correct out of 100. ■

EXAMPLE 2

How much HCl (hydrochloric acid) is in a 60-milliliter bottle that is marked 80% HCl?

SOLUTION If the bottle is marked 80% HCl, that means 80% of the solution is HCl and the rest is water. Because the bottle contains 60 milliliters, we can restate the question as:

$$\begin{aligned} & \text{What is } 80\% \text{ of } 60? \\ & \downarrow \downarrow \downarrow \downarrow \downarrow \\ & n = 0.80 \cdot 60 \\ & n = 48 \end{aligned}$$



There are 48 milliliters of HCl in 60 milliliters of 80% HCl solution. ■

PRACTICE PROBLEMS

1. On a 150-question test, a student answered 114 correctly. What percent of the problems did the student work correctly?

2. How much HCl is in a 40-milliliter bottle that is marked 75% HCl?

Answers

1. 76%
2. 30 milliliters

3. If 42% of the students in a certain college are female and there are 3,360 female students, what is the total number of students in the college?

4. Suppose in Example 4 that 35% of the students receive a grade of A. How many of the 300 students is that?

EXAMPLE 3

If 48% of the students in a certain college are female and there are 2,400 female students, what is the total number of students in the college?

SOLUTION We restate the problem as:

2,400 is 48% of what number?

$$\begin{array}{ccccccc} 2,400 & \text{is} & 48\% & \text{of} & \text{what} & \text{number?} \\ \downarrow & & \downarrow & & \downarrow & & \downarrow \\ 2,400 & = & 0.48 & \cdot & n & & \end{array}$$

$$\frac{2,400}{0.48} = \frac{0.48 \cdot n}{0.48} \quad \text{Divide both sides by 0.48}$$

$$n = \frac{2,400}{0.48} \quad \text{Switch the left and right sides of the equation}$$

$$n = 5,000$$

There are 5,000 students. ■

EXAMPLE 4

If 25% of the students in elementary algebra courses receive a grade of A, and there are 300 students enrolled in elementary algebra this year, how many students will receive A's?

SOLUTION After reading the question a few times, we find that it is the same as this question:

What number is 25% of 300?

$$\begin{array}{ccccccc} & \downarrow & \downarrow & \downarrow & \downarrow & \downarrow & \\ & n & = & 0.25 & \cdot & 300 & \\ & n & = & 75 & & & \end{array}$$

Thus, 75 students will receive A's in elementary algebra. ■

Almost all application problems involving percents can be restated as one of the three basic percent problems we listed in Section 5.2. It takes some practice before the restating of application problems becomes automatic. You may have to review Section 5.2 and Examples 1–4 above several times before you can translate word problems into mathematical expressions yourself.

Getting Ready for Class

After reading through the preceding section, respond in your own words and in complete sentences.

1. On the test mentioned in Example 1, how many questions would the student have answered correctly if she answered 40% of the questions correctly?
2. If the bottle in Example 2 contained 30 milliliters instead of 60, what would the answer be?
3. In Example 3, how many of the students were male?
4. How many of the students mentioned in Example 4 received a grade lower than A?

Answers

3. 8,000 students 4. 105 students

Problem Set 5.3

A Solve each of the following problems by first restating it as one of the three basic percent problems of Section 5.2. In each case, be sure to show the equation. [Examples 1–4]

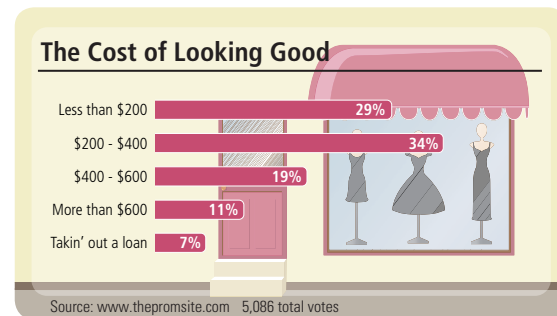
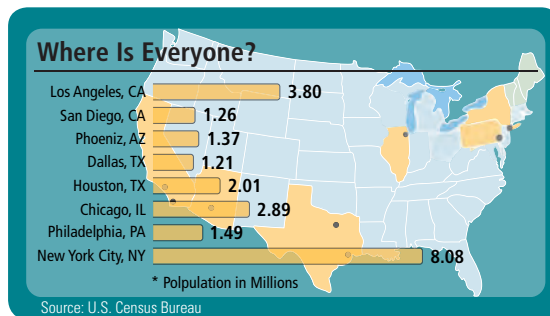
- 1. Test Scores** On a 120-question test a student answered 84 correctly. What percent of the problems did the student work correctly?
- 2. Test Scores** An engineering student answered 81 questions correctly on a 90-question trigonometry test. What percent of the questions did she answer correctly? What percent were answered incorrectly?
- 3. Basketball** A basketball player made 63 out of 75 free throws. What percent is this?
- 4. Family Budget** A family spends \$450 every month on food. If the family's income each month is \$1,800, what percent of the family's income is spent on food?
- 5. Chemistry** How much HCl (hydrochloric acid) is in a 60-milliliter bottle that is marked 75% HCl?
- 6. Chemistry** How much acetic acid is in a 5-liter container of acetic acid and water that is marked 80% acetic acid? How much is water?
- 7. Farming** A farmer owns 28 acres of land. Of the 28 acres, only 65% can be farmed. How many acres are available for farming? How many are not available for farming?
- 8. Number of Students** Of the 420 students enrolled in a basic math class, only 30% are first-year students. How many are first-year students? How many are not?
- 9. Determining a Tip** Servers and wait staff are often paid minimum wage and depend on tips for much of their income. It is common for tips to be 15% to 20% of the bill. After dinner at a local restaurant the total bill is \$56.00. Since your service was above average you decide to give a 20% tip. Determine the amount of the tip you leave for your server.
- 10. Determining a Tip** Suppose you decide to leave a 15% tip for services after your dinner out in the preceding problem. How much of a tip did you leave your server? How much smaller was the tip?
- 11. Voting** In the 2004 Presidential election, George Bush received 53.25% of the total electoral votes and John Kerry received 46.75% of the total electoral votes. If there were 537 total votes cast by the Electoral College how many electoral votes did each candidate receive? Round to the nearest vote.
- 12. Census Data** According to the U.S. Census Bureau, national population estimates grouped by age and gender for July, 2006, approximately 7.4% of the 147,512,152 males in our population are between the ages of 15 and 19 years old. How many males are in this age group? Round to the nearest person.

- 13. Bachelors** According to the U.S. Census Bureau data for the number of marriages in 2004 approximately 31.2% of the 109,830,000 males age 15 years or older have never been married. How many males age 15 years or older have never been married?
- 14. Bachelorettes** According to the U.S. Census Bureau data for the number of marriages in 2004, approximately 25.8% of the 117,677,000 females age 15 years or older have never been married. How many females age 15 years or older have never been married?
- 15. Number of Students** If 48% of the students in a certain college are female and there are 1,440 female students, what is the total number of students in the college?
- 16. Mixture Problem** A solution of alcohol and water is 80% alcohol. The solution is found to contain 32 milliliters of alcohol. How many milliliters total (both alcohol and water) are in the solution?
- 17. Number of Graduates** Suppose 60% of the graduating class in a certain high school goes on to college. If 240 students from this graduating class are going on to college, how many students are there in the graduating class?
- 18. Defective Parts** In a shipment of airplane parts, 3% are known to be defective. If 15 parts are found to be defective, how many parts are in the shipment?
- 19. Number of Students** There are 3,200 students at our school. If 52% of them are female, how many female students are there at our school?
- 20. Number of Students** In a certain school, 75% of the students in first-year chemistry have had algebra. If there are 300 students in first-year chemistry, how many of them have had algebra?
- 21. Population** In a city of 32,000 people, there are 10,000 people under 25 years of age. What percent of the population is under 25 years of age?
- 22. Number of Students** If 45 people enrolled in a psychology course but only 35 completed it, what percent of the students completed the course? (Round to the nearest tenth of a percent.)

Calculator Problems

The following problems are similar to Problems 1–22. They should be set up the same way. Then the actual calculations should be done on a calculator.

- 23. Number of People** Of 7,892 people attending an outdoor concert in Los Angeles, 3,972 are over 18 years of age. What percent is this? (Round to the nearest whole-number percent.)
- 24. Manufacturing** A car manufacturer estimates that 25% of the new cars sold in one city have defective engine mounts. If 2,136 new cars are sold in that city, how many will have defective engine mounts?
- 25. Population** The map shows the most populated cities in the United States. If the population of New York City is about 42% of the state's population, what is the approximate population of the state?
- 26. Prom** The graph shows how much girls plan to spend on the prom. If 5,086 girls were surveyed, how many are planning on spending less than \$200 on the prom? Round to the nearest whole number.



Getting Ready for the Next Section

Multiply.

27. $0.06(550)$ 28. $0.06(625)$ 29. $0.03(289,500)$ 30. $0.03(115,900)$

Divide. Write your answers as decimals.

31. $5.44 \div 0.04$ 32. $4.35 \div 0.03$ 33. $19.80 \div 396$ 34. $11.82 \div 197$

35. $\frac{1,836}{0.12}$

36. $\frac{115}{0.1}$

37. $\frac{90}{600}$

38. $\frac{105}{750}$

Maintaining Your Skills

The problems below review multiplication with fractions and mixed numbers.

Multiply.

39. $\frac{1}{2} \cdot \frac{2}{5}$

40. $\frac{3}{4} \cdot \frac{1}{3}$

41. $\frac{3}{4} \cdot \frac{5}{9}$

42. $\frac{5}{6} \cdot \frac{12}{13}$

43. $2 \cdot \frac{3}{8}$

44. $3 \cdot \frac{5}{12}$

45. $1\frac{1}{4} \cdot \frac{8}{15}$

46. $2\frac{1}{3} \cdot \frac{9}{10}$

Extending the Concepts: Batting Averages


Batting averages in baseball are given as decimal numbers, rounded to the nearest thousandth. For example, at the end of June 2008, Milton Bradley had the highest batting average in the American League. At that time, he had 76 hits in 235 times at bat. His batting average was .323, which is found by dividing the number of hits by the number of times he was at bat and then rounding to the nearest thousandth.

$$\text{Batting average} = \frac{\text{number of hits}}{\text{number of times at bat}} = \frac{76}{235} = 0.323$$

Because we can write any decimal number as a percent, we can convert batting averages to percents and use our knowledge of percent to solve problems. Looking at Milton Bradley's batting average as a percent, we can say that he will get a hit 32.3% of the times he is at bat.

Each of the following problems can be solved by converting batting averages to percents and translating the problem into one of our three basic percent problems. (All numbers are from the end of June 2008.)

47. Chipper Jones had the highest batting average in the National League with 100 hits in 254 times at bat. What percent of the time Chipper Jones is at bat can we expect him to get a hit?
48. Sammy Sosa had 104 hits in 412 times at bat. What percent of the time can we expect Sosa to get a hit?
49. Barry Bonds was batting .276. If he had been at bat 340 times, how many hits did he have? (Remember his batting average has been rounded to the nearest thousandth.)
50. Joe Mauer was batting .321. If he had been at bat 265 times, how many hits did he have? (Remember, his batting average has been rounded to the nearest thousandth.)
51. How many hits must Milton Bradley have in his next 50 times at bat to maintain a batting average of at least .323?
52. How many hits must Chipper Jones have in his next 50 times at bat to maintain a batting average of at least .394?



Sales Tax and Commission

5.4

To solve the problems in this section, we will first restate them in terms of the problems we have already learned how to solve.

A Sales Tax

EXAMPLE 1

Suppose the sales tax rate in Mississippi is 6% of the purchase price. If the price of a refrigerator is \$550, how much sales tax must be paid?

SOLUTION Because the sales tax is 6% of the purchase price, and the purchase price is \$550, the problem can be restated as:

What is 6% of \$550?

We solve this problem, as we did in Section 5.2, by translating it into an equation:

$$\begin{array}{l} \text{What is 6\% of \$550?} \\ \downarrow \downarrow \downarrow \downarrow \downarrow \\ n = 0.06 \cdot 550 \\ n = 33 \end{array}$$

The sales tax is \$33. The total price of the refrigerator would be

$$\begin{array}{rcccl} \text{Purchase price} & & \text{Sales tax} & & \text{Total price} \\ \downarrow & & \downarrow & & \downarrow \\ \$550 & + & \$33 & = & \$583 \end{array}$$

EXAMPLE 2

Suppose the sales tax rate is 4%. If the sales tax on a 10-speed bicycle is \$5.44, what is the purchase price, and what is the total price of the bicycle?

SOLUTION We know that 4% of the purchase price is \$5.44. We find the purchase price first by restating the problem as:

$$\begin{array}{l} \$5.44 \text{ is 4\% of what number?} \\ \downarrow \downarrow \downarrow \downarrow \downarrow \\ 5.44 = 0.04 \cdot n \end{array}$$

We solve the equation by dividing both sides by 0.04:

$$\begin{array}{l} \frac{5.44}{0.04} = \frac{0.04 \cdot n}{0.04} \quad \text{Divide both sides by 0.04} \\ n = \frac{5.44}{0.04} \quad \text{Switch the left and right sides of the equation} \\ n = 136 \quad \text{Divide} \end{array}$$

The purchase price is \$136. The total price is the sum of the purchase price and the sales tax.

$$\begin{array}{r} \text{Purchase price} = \$136.00 \\ \text{Sales tax} \quad \quad = + 5.44 \\ \hline \text{Total price} \quad \quad = \$141.44 \end{array}$$

Objectives

- A** Solve application problems involving sales tax.
- B** Solve application problems involving commission.

PRACTICE PROBLEMS

1. What is the sales tax on a new washing machine if the machine is purchased for \$625 and the sales tax rate is 6%?



Note In Example 1, the sales tax rate is 6%, and the sales tax is \$33. In most everyday communications, people say "The sales tax is 6%," which is incorrect. The 6% is the tax rate, and the \$33 is the actual tax.

2. Suppose the sales tax rate is 3%. If the sales tax on a 10-speed bicycle is \$4.35, what is the purchase price, and what is the total price of the bicycle?

Answers

1. \$37.50
2. \$145; \$149.35

3. Suppose the purchase price of two speakers is \$197 and the sales tax is \$11.82. What is the sales tax rate?

4. A real estate agent gets 3% of the price of each house she sells. If she sells a house for \$115,000, how much money does she earn?

5. An appliance salesperson's commission rate is 10%. If the commission on one of the ovens is \$115, what is the purchase price of the oven?

EXAMPLE 3

Suppose the purchase price of a stereo system is \$396 and the sales tax is \$19.80. What is the sales tax rate?

SOLUTION We restate the problem as:

$$\begin{array}{l} \$19.80 \text{ is what percent of } \$396? \\ \downarrow \quad \downarrow \quad \downarrow \quad \swarrow \\ 19.80 = n \cdot 396 \end{array}$$

To solve this equation, we divide both sides by 396:

$$\frac{19.80}{396} = \frac{n \cdot 396}{396} \quad \text{Divide both sides by 396}$$

$$n = \frac{19.80}{396} \quad \text{Switch the left and right sides of the equation}$$

$$n = 0.05 \quad \text{Divide}$$

$$n = 5\% \quad 0.05 = 5\%$$

The sales tax rate is 5%. ■

B Commission

Many salespeople work on a *commission* basis. That is, their earnings are a percentage of the amount they sell. The *commission rate* is a percent, and the actual commission they receive is a dollar amount.

EXAMPLE 4

A real estate agent gets 3% of the price of each house she sells. If she sells a house for \$289,500, how much money does she earn?

SOLUTION The commission is 3% of the price of the house, which is \$289,500. We restate the problem as:

$$\begin{array}{l} \text{What is 3\% of } \$289,500? \\ \downarrow \downarrow \downarrow \downarrow \downarrow \\ n = 0.03 \cdot 289,500 \\ n = 8,685 \end{array}$$

The commission is \$8,685. ■

EXAMPLE 5

Suppose a car salesperson's commission rate is 12%. If the commission on one of the cars is \$1,836, what is the purchase price of the car?

SOLUTION 12% of the sales price is \$1,836. The problem can be restated as:

$$\begin{array}{l} 12\% \text{ of what number is } \$1,836? \\ \swarrow \quad \searrow \quad \swarrow \quad \searrow \\ 0.12 \cdot n = 1,836 \\ \frac{0.12 \cdot n}{0.12} = \frac{1,836}{0.12} \quad \text{Divide both sides by 0.12} \\ n = 15,300 \end{array}$$

The car sells for \$15,300. ■

Answers

3. 6% 4. \$3,450 5. \$1,150

EXAMPLE 6

If the commission on a \$600 dining room set is \$90, what is the commission rate?

SOLUTION The commission rate is a percentage of the selling price. What we want to know is:

\$90 is what percent of \$600?

$$90 = n \cdot 600$$

$$\frac{90}{600} = \frac{n \cdot \cancel{600}}{\cancel{600}} \quad \text{Divide both sides by 600}$$

$$n = \frac{90}{600} \quad \text{Switch the left and right sides of the equation}$$

$$n = 0.15 \quad \text{Divide}$$

$$n = 15\% \quad \text{Change to a percent}$$

The commission rate is 15%. ■

Getting Ready for Class

After reading through the preceding section, respond in your own words and in complete sentences.

1. Explain the difference between the sales tax and the sales tax rate.
2. Rework Example 1 using a sales tax rate of 7% instead of 6%.
3. Suppose the bicycle in Example 2 was purchased in California, where the sales tax rate in 2008 was 7.25%. How much more would the bicycle have cost?
4. Suppose the car salesperson in Example 5 receives a commission of \$3,672. Assuming the same commission rate of 12%, how much does this car sell for?

6. If the commission on a \$750 sofa is \$105, what is the commission rate?

Answer

6. 14%

Problem Set 5.4

A These problems should be solved by the method shown in this section. In each case show the equation needed to solve the problem. Write neatly, and show your work. [Examples 1–3]

- Sales Tax** Suppose the sales tax rate in Mississippi is 7% of the purchase price. If a new food processor sells for \$750, how much is the sales tax?
- Sales Tax** If the sales tax rate is 5% of the purchase price, how much sales tax is paid on a television that sells for \$980?
- Sales Tax and Purchase Price** Suppose the sales tax rate in Michigan is 6%. How much is the sales tax on a \$45 concert ticket? What is the total price?
- Sales Tax and Purchase Price** Suppose the sales tax rate in Hawaii is 4%. How much tax is charged on a new car if the purchase price is \$16,400? What is the total price?
- Total Price** The sales tax rate is 4%. If the sales tax on a 10-speed bicycle is \$6, what is the purchase price? What is the total price?
- Total Price** The sales tax on a new microwave oven is \$30. If the sales tax rate is 5%, what is the purchase price? What is the total price?

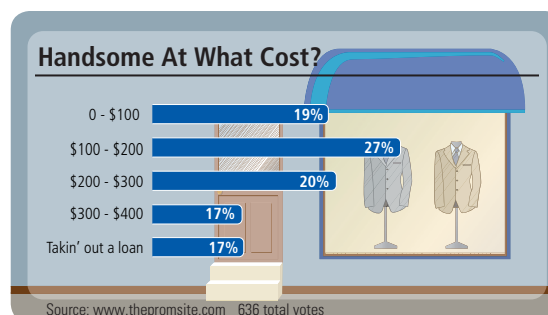
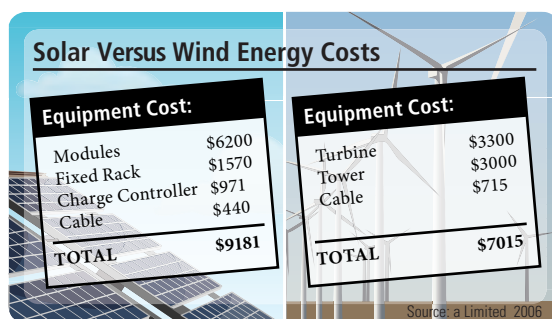
- Tax Rate** Suppose the purchase price of a dining room set is \$450. If the sales tax is \$22.50, what is the sales tax rate?

FURNITURE PLUS	
RECEIPT	
Dining Room Set	\$450.00
Tax Rate	? %
Tax	\$22.50
TOTAL	\$472.50
Receipt #1007 07/18/08 4:15PM	

- Tax Rate** If the purchase price of a bottle of California wine is \$24 and the sales tax is \$1.50, what is the sales tax rate?

OAKS WINERY	
RECEIPT	
California wine	\$24.00
Tax Rate	? %
Tax	\$1.50
TOTAL	\$25.50
Receipt #128 07/30/08 2:32PM	

- Energy** The chart shows the cost to install either solar panels or a wind turbine. A farmer is installing the equipment to generate energy from the wind. If he lives in a state that has a 6% sales tax rate, how much did the farmer pay in sales tax on the total equipment cost?
- Prom** The graph shows how much guys plan to spend on prom. The sum of the tax on all the expenses a guy had for prom was \$15.75. If he lived in a state that has a sales tax rate of 7.5%, what spending bracket would he have been in?



B [Examples 4–6]

- 11. Commission** A real estate agent has a commission rate of 3%. If a piece of property sells for \$94,000, what is her commission?
- 12. Commission** A tire salesperson has a 12% commission rate. If he sells a set of radial tires for \$400, what is his commission?
- 13. Commission and Purchase Price** Suppose a salesperson gets a commission rate of 12% on the lawnmowers she sells. If the commission on one of the mowers is \$24, what is the purchase price of the lawnmower?
- 14. Commission and Purchase Price** If an appliance salesperson gets 9% commission on all the appliances she sells, what is the price of a refrigerator if her commission is \$67.50?
- 15. Commission Rate** If the commission on an \$800 washer is \$112, what is the commission rate?
- 16. Commission Rate** A realtor makes a commission of \$11,400 on a \$190,000 house he sells. What is his commission rate?
- 17. Phone Bill** You recently received your monthly phone bill for service in your local area. The total of the bill was \$53.35. You pay \$14.36 in surcharges and federal and local taxes. What percent of your phone bill is made up of surcharges and taxes? Round your answer to the nearest tenth of a percent.
- 18. Wireless Phone Bill** You recently received your Verizon wireless phone bill for the month. The total monthly bill is \$70.52. Included in that total is \$13.27 in surcharges and taxes. What percent of your wireless bill goes towards surcharges and taxes? Round your answer to the nearest tenth of a percent.
- 19. Gasoline Tax** New York state has one of the highest gasoline taxes in the country. If gas is currently selling at \$4.27 for a gallon of regular gas and the tax rate is 14.7%, how much of the price of a gallon of gas goes towards taxes?
- 20. Cigarette Tax** In an effort to encourage people to quit smoking, many states place a high tax on a pack of cigarettes. Nine states place a tax of \$2.00 or more on a pack of cigarettes, with New Jersey being the highest at \$2.575 per pack. If this is 39% of the cost of a pack of cigarettes in New Jersey, how much does a single pack cost?
- 21. Salary Plus Commission** A computer salesperson earns a salary of \$425 a week and a 6% commission on all sales over \$4000 each week. Suppose she was able to sell \$6,250 in computer parts and accessories one week. What was her salary for the week?
- 22. Salary Plus Bonus** The manager for a computer store is paid a weekly salary of \$650 plus a bonus amounting to 1.5% of the net earnings of the store each week. Find her total salary for the week when earnings for the store are \$26,875.56. Round your answer to the nearest cent.

Calculator Problems

The following problems are similar to Problems 1–22. Set them up in the same way, but use a calculator for the calculations.

- 23. Sales Tax** The sales tax rate on a certain item is 5.5%. If the purchase price is \$216.95, how much is the sales tax? (Round to the nearest cent.)
- 24. Purchase Price** If the sales tax rate is 4.75% and the sales tax is \$18.95, what is the purchase price? What is the total price? (Both answers should be rounded to the nearest cent.)
- 25. Tax Rate** The purchase price for a new suit is \$229.50. If the sales tax is \$10.33, what is the sales tax rate? (Round to the nearest tenth of a percent.)
- 26. Commission** If the commission rate for a mobile home salesperson is 11%, what is the commission on the sale of a \$15,794 mobile home?
- 27. Selling Price** Suppose the commission rate on the sale of used cars is 13%. If the commission on one of the cars is \$519.35, what did the car sell for?
- 28. Commission Rate** If the commission on the sale of \$79.40 worth of clothes is \$14.29, what is the commission rate? (Round to the nearest percent.)

Getting Ready for the Next Section

Multiply.

29. $0.05(22,000)$

30. $0.176(1,793,000)$

31. $0.25(300)$

32. $0.12(450)$

Divide. Write your answers as decimals.

33. $4 \div 25$

34. $7 \div 35$

Subtract

35. $25 - 21$

36. $1,793,000 - 315,568$

37. $450 - 54$

38. $300 - 75$

Add.

39. $396 + 19.8$

40. $22,000 + 1,100$

■ Maintaining Your Skills

The problems below review some basic concepts of division with fractions and mixed numbers.

Divide.

41. $\frac{1}{3} \div \frac{2}{3}$

42. $\frac{2}{3} \div \frac{1}{3}$

43. $2 \div \frac{3}{4}$

44. $3 \div \frac{1}{2}$

45. $\frac{3}{8} \div \frac{1}{4}$

46. $\frac{5}{9} \div \frac{2}{3}$

47. $2\frac{1}{4} \div \frac{1}{2}$

48. $1\frac{1}{4} \div 2\frac{1}{2}$

Percent Increase or Decrease and Discount

5.5

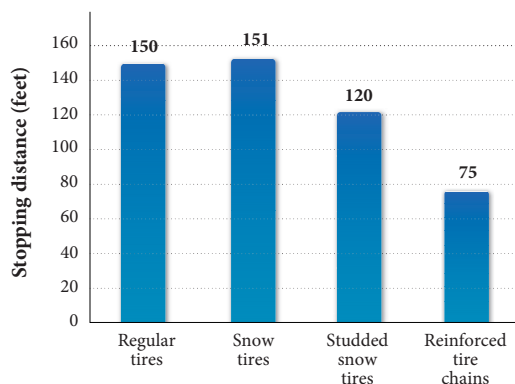
Objectives

- A** Find the percent increase.
- B** Find the percent decrease.
- C** Solve application problems involving the rate of discount.

The table and bar chart below show some statistics compiled by insurance companies regarding stopping distances for automobiles traveling at 20 miles per hour on ice.

	Stopping Distance	Percent Decrease
Regular tires	150 ft	0
Snow tires	151 ft	-1%
Studded snow tires	120 ft	20%
Reinforced tire chains	75 ft	50%

Source: Copyrighted table courtesy of *The Casualty Adjuster's Guide*



Many times it is more effective to state increases or decreases as percents, rather than the actual number, because with percent we are comparing everything to 100.

A Percent Increase

EXAMPLE 1

If a person earns \$22,000 a year and gets a 5% increase in salary, what is the new salary?

SOLUTION We can find the dollar amount of the salary increase by finding 5% of \$22,000:

$$0.05 \times 22,000 = 1,100$$

The increase in salary is \$1,100. The new salary is the old salary plus the raise:

$$\begin{array}{r} \$22,000 \text{ Old salary} \\ + \quad 1,100 \text{ Raise (5\% of \$22,000)} \\ \hline \$23,100 \text{ New salary} \end{array}$$

PRACTICE PROBLEMS

1. A person earning \$18,000 a year gets a 7% increase in salary. What is the new salary?

Answer

1. \$19,260

2. In 1986, there were approximately 271,000 drunk drivers under correctional supervision (prison, jail, or probation). By 1997, that number had increased 89%. How many drunk drivers were under correctional supervision in 1997? Round to the nearest thousand.

3. Shoes that usually sell for \$35 are on sale for \$28. What is the percent decrease in price?

4. During a sale, a microwave oven that usually sells for \$550 is marked "15% off." What is the discount? What is the sale price?

Answers

2. 512,000 3. 20%

B Percent Decrease**EXAMPLE 2**

In 1986, there were approximately 1,793,000 arrests for driving under the influence of alcohol or drugs (DUI) in the United States. By 1997, the number of arrests for DUI had decreased 17.6% from the 1986 number. How many people were arrested for DUI in 1997? Round the answer to the nearest thousand.

SOLUTION The decrease in the number of arrests is 17.6% of 1,793,000, or

$$0.176 \times 1,793,000 = 315,568$$

Subtracting this number from 1,793,000, we have the number of DUI arrests in 1997.

$$\begin{array}{r} 1,793,000 \quad \text{Number of arrests in 1986} \\ - \quad 315,568 \quad \text{Decrease of 17.6\%} \\ \hline 1,477,432 \quad \text{Number of arrests in 1997} \end{array}$$

To the nearest thousand, there were approximately 1,477,000 arrests for DUI in 1997.

EXAMPLE 3

Shoes that usually sell for \$25 are on sale for \$21. What is the percent decrease in price?

SOLUTION We must first find the decrease in price. Subtracting the sale price from the original price, we have

$$\$25 - \$21 = \$4$$

The decrease is \$4. To find the percent decrease (from the original price), we have

\$4 is what percent of \$25?

$$4 = n \cdot 25$$

$$\frac{4}{25} = \frac{n \cdot 25}{25} \quad \text{Divide both sides by 25}$$

$$n = \frac{4}{25} \quad \text{Switch the left and right sides of the equation}$$

$$n = 0.16 \quad \text{Divide}$$

$$n = 16\% \quad \text{Change to a percent}$$

The shoes that sold for \$25 have been reduced by 16% to \$21. In a problem like this, \$25 is the *original* (or *marked*) price, \$21 is the *sale price*, \$4 is the *discount*, and 16% is the *rate of discount*.

C Discount Rate**EXAMPLE 4**

During a clearance sale, a suit that usually sells for \$300 is marked "25% off." What is the discount? What is the sale price?

SOLUTION To find the discount, we restate the problem as:

What is 25% of 300?

$$\begin{array}{l} \downarrow \downarrow \downarrow \downarrow \downarrow \\ n = 0.25 \cdot 300 \\ n = 75 \end{array}$$

The discount is \$75. The sale price is the original price less the discount:

$$\begin{array}{r} \$300 \quad \text{Original price} \\ - \quad 75 \quad \text{Less the discount (25\% of \$300)} \\ \hline \$225 \quad \text{Sale price} \end{array}$$

EXAMPLE 5

A man buys a washing machine on sale. The machine usually sells for \$450, but it is on sale at 12% off. If the sales tax rate is 5%, how much is the total bill for the washer?

SOLUTION First we have to find the sale price of the washing machine, and we begin by finding the discount:

$$\begin{array}{l} \text{What is 12\% of \$450?} \\ \downarrow \downarrow \downarrow \downarrow \downarrow \\ n = 0.12 \cdot 450 \\ n = 54 \end{array}$$



The washing machine is marked down \$54. The sale price is

$$\begin{array}{r} \$450 \quad \text{Original price} \\ - \quad 54 \quad \text{Discount (12\% of \$450)} \\ \hline \$396 \quad \text{Sale price} \end{array}$$

Because the sales tax rate is 5%, we find the sales tax as follows:

$$\begin{array}{l} \text{What is 5\% of 396?} \\ \downarrow \downarrow \downarrow \downarrow \downarrow \\ n = 0.05 \cdot 396 \\ n = 19.80 \end{array}$$

The sales tax is \$19.80. The total price the man pays for the washing machine is

$$\begin{array}{r} \$396.00 \quad \text{Sale price} \\ + \quad 19.80 \quad \text{Sales tax} \\ \hline \$415.80 \quad \text{Total price} \end{array}$$

Getting Ready for Class

After reading through the preceding section, respond in your own words and in complete sentences.

1. Suppose the person mentioned in Example 1 was earning \$32,000 per year and received the same percent increase in salary. How much more would the raise have been?
2. Suppose the shoes mentioned in Example 3 were on sale for \$20, instead of \$21. Calculate the new percent decrease in price.
3. Suppose a store owner pays \$225 for a suit, and then marks it up \$75, to \$300. Find the percent increase in price.
4. Compare your answer to Problem 3 above with the problem given in Example 4 of your text. Do you think it is generally true that a 25% discount is equivalent to a $33\frac{1}{3}\%$ markup?

5. A woman buys a new coat on sale. The coat usually sells for \$45, but it is on sale at 15% off. If the sales tax rate is 5%, how much is the total bill for the coat?

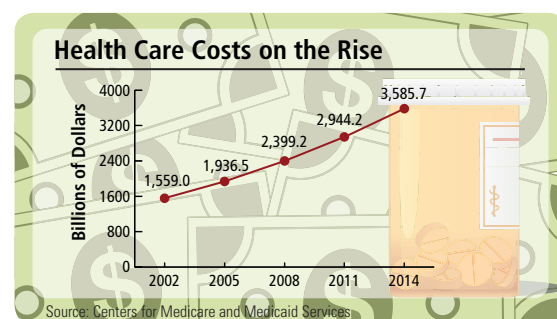
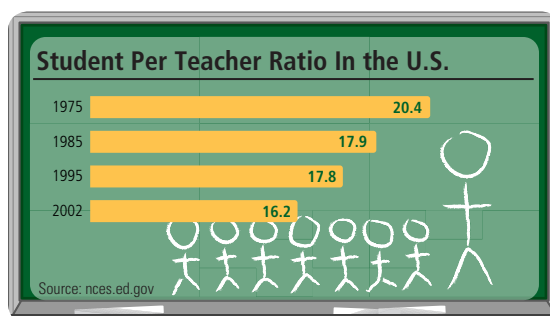
Answers

4. \$82.50; \$467.50 5. \$40.16

Problem Set 5.5

A B Solve each of these problems using the method developed in this section. [Examples 1–3]

- Salary Increase** If a person earns \$23,000 a year and gets a 7% increase in salary, what is the new salary?
- Salary Increase** A computer programmer's yearly income of \$57,000 is increased by 8%. What is the dollar amount of the increase, and what is her new salary?
- Tuition Increase** The yearly tuition at a college is presently \$6,000. Next year it is expected to increase by 17%. What will the tuition at this school be next year?
- Price Increase** A market increased the price of cheese selling for \$4.98 per pound by 3%. What is the new price for a pound of cheese? (Round to the nearest cent.)
- Car Value** In one year a new car decreased in value by 20%. If it sold for \$16,500 when it was new, what was it worth after 1 year?
- Calorie Content** A certain light beer has 20% fewer calories than the regular beer. If the regular beer has 120 calories per bottle, how many calories are in the same-sized bottle of the light beer?
- Salary Increase** A person earning \$3,500 a month gets a raise of \$350 per month. What is the percent increase in salary?
- Rate Increase** A student reader is making \$6.50 per hour and gets a \$0.70 raise. What is the percent increase? (Round to the nearest tenth of a percent.)
- Shoe Sale** Shoes that usually sell for \$25 are on sale for \$20. What is the percent decrease in price?
- Enrollment Decrease** The enrollment in a certain elementary school was 410 in 2007. In 2008, the enrollment in the same school was 328. Find the percent decrease in enrollment from 2007 to 2008.
- Students to Teachers** The chart shows the student to teacher ratio in the United States from 1975 to 2002. What is the percent decrease in student to teacher ratio from 1975 to 2002? Round to the nearest percent.
- Health Care** The graph shows the rising cost of health care. What is the projected percent increase in health care costs from 2002 to 2014?



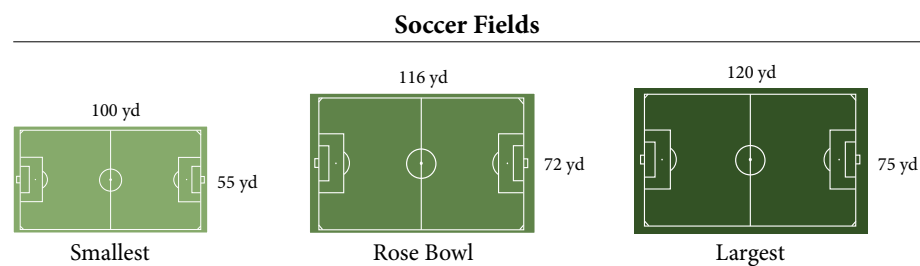
C [Examples 4, 5]

- 13. Discount** During a clearance sale, a three-piece suit that usually sells for \$300 is marked “15% off.” What is the discount? What is the sale price?
- 14. Sale Price** On opening day, a new music store offers a 12% discount on all electric guitars. If the regular price on a guitar is \$550, what is the sale price?
- 15. Total Price** A man buys a washing machine that is on sale. The washing machine usually sells for \$450 but is on sale at 20% off. If the sales tax rate in his state is 6%, how much is the total bill for the washer?
- 16. Total Price** A bedroom set that normally sells for \$1,450 is on sale for 10% off. If the sales tax rate is 5%, what is the total price of the bedroom set if it is bought while on sale?
- 17. Real Estate Market** In 2006 the average price of a home began to fall in most real estate markets across the country. The median price of a single family home in the U.S. was \$227,000 in 2006. The median price is now \$195,500. By what percent did the median price of a single family home drop? Round your answer to the nearest tenth of a percent.
- 18. Deep Discount** When buying some of today’s newest electronic gadgets, good things come to those who wait. When Apple released its new iPhone in the summer of 2007, an 8GB model sold for \$499. In July 2008, Apple released its new iPhone 3G. The 8GB model sells for \$199. What is the percent decrease in price for this new model? Round your answer to the nearest tenth of a percent.
- 19. Losing Weight** According to the Centers for Disease Control and Prevention (CDC), more than 60% of U.S. adults are overweight, and about 15% of children and adolescents ages 6 to 19 are overweight. Your friend decides to go on a diet and goes from 155 pounds to 130 pounds over a 4 month period. What was her percentage weight loss? Round your answer to the nearest percent.
- 20. Ordering Online** You are in the market for a new laptop. The model that you wish to purchase is \$1,500 in a local store. However, you decide to buy the computer over the Internet for \$1200, plus shipping charges. Taking into account shipping charges of \$59, what percentage do you save by ordering it online? Round your answer to the nearest tenth of a percent.
- 21. Product Error** When manufacturing a product, a certain amount of variation (or error) can occur in the process and still create a part or product that is useable. For one particular company, a 3% error is acceptable for their machine parts to be used safely. If the part they are manufacturing is 22.5 in. long, what is the range of measures that are acceptable for this part?
- 22. Home Remodeling** You have decided to update your house by laying a new wood floor in your living room. Your floor has an area of 440 sq ft. You decide to buy enough flooring to allow for a certain amount of waste so you purchase 470 sq ft of wood flooring materials. Express your waste allowance as a percent. Round your result to the nearest percent.

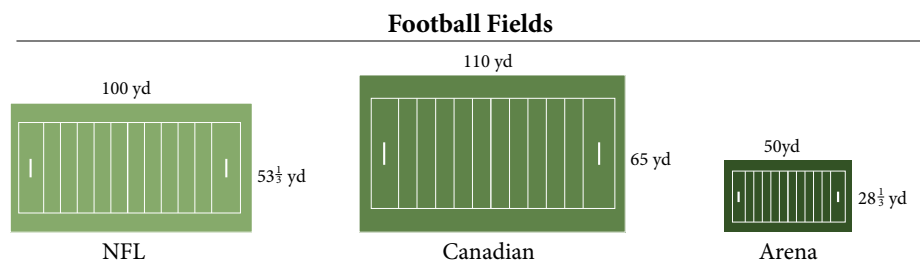
Calculator Problems

Set up the following problems the same way you set up Problems 1–22. Then use a calculator to do the calculations.

- 23. Salary Increase** A teacher making \$43,752 per year gets a 6.5% raise. What is the new salary?
- 24. Utility Increase** A homeowner had a \$95.90 electric bill in December. In January the bill was \$107.40. Find the percent increase in the electric bill from December to January. (Round to the nearest whole number.)
- 25. Soccer** The rules for soccer state that the playing field must be from 100 to 120 yards long and 55 to 75 yards wide. The 1999 Women's World Cup was played at the Rose Bowl on a playing field 116 yards long and 72 yards wide. The diagram below shows the smallest possible soccer field, the largest possible soccer field, and the soccer field at the Rose Bowl.



- a. Percent Increase** A team plays on the smallest field, then plays in the Rose Bowl. What is the percent increase in the area of the playing field from the smallest field to the Rose Bowl? Round to the nearest tenth of a percent.
- b. Percent Increase** A team plays a soccer game in the Rose Bowl. The next game is on a field with the largest dimensions. What is the percent increase in the area of the playing field from the Rose Bowl to the largest field? Round to the nearest tenth of a percent.
- 26. Football** The diagrams below show the dimensions of playing fields for the National Football League (NFL), the Canadian Football League (CFL), and Arena Football.



- a. Percent Increase** In 1999 Kurt Warner made a successful transition from Arena Football to the NFL, winning the Most Valuable Player award. What was the percent increase in the area of the fields he played on in moving from Arena Football to the NFL? Round to the nearest percent.
- b. Percent Decrease** Doug Flutie played in the Canadian Football League before moving to the NFL. What was the percent decrease in the area of the fields he played on in moving from the CFL to the NFL? Round to the nearest tenth of a percent.

Getting Ready for the Next Section

Multiply. Round to nearest hundredth if necessary.

27. $0.07(2,000)$

28. $0.12(8,000)$

29. $600(0.04)\left(\frac{1}{6}\right)$

30. $900(0.06)\left(\frac{1}{4}\right)$

31. $10,150(0.06)\left(\frac{1}{4}\right)$

32. $10,302.25(0.06)\left(\frac{1}{4}\right)$

Add.

33. $3,210 + 224.7$

34. $900 + 13.50$

35. $10,000 + 150$

36. $10,150 + 152.25$

37. $10,302.25 + 154.53$

38. $10,456.78 + 156.85$

Simplify.

39. $2,000 + 0.07(2,000)$

40. $8,000 + 0.12(8,000)$

41. $3,000 + 0.07(3,000)$

42. $9,000 + 0.12(9,000)$

Maintaining Your Skills

The problems below review some basic concepts of addition of fractions and mixed numbers.

Add each of the following and reduce all answers to lowest terms.

43. $\frac{1}{3} + \frac{2}{3}$

44. $\frac{3}{8} + \frac{1}{8}$

45. $\frac{1}{2} + \frac{1}{4}$

46. $\frac{1}{5} + \frac{3}{10}$

47. $\frac{3}{4} + \frac{2}{3}$

48. $\frac{3}{8} + \frac{1}{6}$

49. $2\frac{1}{2} + 3\frac{1}{2}$

50. $3\frac{1}{4} + 2\frac{1}{8}$

Anyone who has borrowed money from a bank or other lending institution, or who has invested money in a savings account, is aware of *interest*. Interest is the amount of money paid for the use of money. If we put \$500 in a savings account that pays 6% annually, the interest will be 6% of \$500, or $0.06(500) = \$30$. The amount we invest (\$500) is called the *principal*, the percent (6%) is the *interest rate*, and the money earned (\$30) is the *interest*.

EXAMPLE 1

A man invests \$2,000 in a savings plan that pays 7% per year. How much money will be in the account at the end of 1 year?

SOLUTION We first find the interest by taking 7% of the principal, \$2,000:

$$\begin{aligned}\text{Interest} &= 0.07(\$2,000) \\ &= \$140\end{aligned}$$

The interest earned in 1 year is \$140. The total amount of money in the account at the end of a year is the original amount plus the \$140 interest:

$$\begin{array}{r} \$2,000 \quad \text{Original investment (principal)} \\ + \quad 140 \quad \text{Interest (7\% of \$2,000)} \\ \hline \$2,140 \quad \text{Amount after 1 year} \end{array}$$

The amount in the account after 1 year is \$2,140. ■

EXAMPLE 2

A farmer borrows \$8,000 from his local bank at 12%. How much does he pay back to the bank at the end of the year to pay off the loan?

SOLUTION The interest he pays on the \$8,000 is

$$\begin{aligned}\text{Interest} &= 0.12(\$8,000) \\ &= \$960\end{aligned}$$

At the end of the year, he must pay back the original amount he borrowed (\$8,000) plus the interest at 12%:

$$\begin{array}{r} \$8,000 \quad \text{Amount borrowed (principal)} \\ + \quad 960 \quad \text{Interest at 12\%} \\ \hline \$8,960 \quad \text{Total amount to pay back} \end{array}$$

The total amount that the farmer pays back is \$8,960. ■

A Simple Interest

There are many situations in which interest on a loan is figured on other than a yearly basis. Many short-term loans are for only 30 or 60 days. In these cases we can use a formula to calculate the interest that has accumulated. This type of interest is called *simple interest*. The formula is

$$I = P \cdot R \cdot T$$

where

I = Interest

P = Principal

R = Interest rate (this is the percent)

T = Time (in years, 1 year = 360 days)

Objectives

- A** Solve simple interest problems.
B Solve compound interest problems.

PRACTICE PROBLEMS

1. A man invests \$3,000 in a savings plan that pays 8% per year. How much money will be in the account at the end of 1 year?
2. If a woman borrows \$7,500 from her local bank at 12% interest, how much does she pay back to the bank if she pays off the loan in 1 year?

Answers

1. \$3,240 2. \$8,400

3. Another student takes out a loan like the one in Example 3. This loan is for \$700 at 4%. How much interest does this student pay if the loan is paid back in 90 days?

4. Suppose \$1,200 is deposited in an account that pays 9.5% interest per year. If all the money is withdrawn after 120 days, how much money is withdrawn?

5. If \$5,000 is put into an account that pays 6% compounded annually, how much money is in the account at the end of 2 years?

Answers

3. \$7 4. \$1,238

We could have used this formula to find the interest in Examples 1 and 2. In those two cases, T is 1. When the length of time is in days rather than years, it is common practice to use 360 days for 1 year, and we write T as a fraction. Examples 3 and 4 illustrate this procedure.

EXAMPLE 3

A student takes out an emergency loan for tuition, books, and supplies. The loan is for \$600 at an interest rate of 4%. How much interest does the student pay if the loan is paid back in 60 days?

SOLUTION The principal P is \$600, the rate R is $4\% = 0.04$, and the time T is $\frac{60}{360}$. Notice that T must be given in years, and $60 \text{ days} = \frac{60}{360} \text{ year}$. Applying the formula, we have

$$\begin{aligned} I &= P \cdot R \cdot T \\ I &= 600 \times 0.04 \times \frac{60}{360} \\ I &= 600 \times 0.04 \times \frac{1}{6} && \frac{60}{360} = \frac{1}{6} \\ I &= 4 && \text{Multiplication} \end{aligned}$$

The interest is \$4.

EXAMPLE 4

A woman deposits \$900 in an account that pays 6% annually. If she withdraws all the money in the account after 90 days, how much does she withdraw?

SOLUTION We have $P = \$900$, $R = 0.06$, and $T = 90 \text{ days} = \frac{90}{360} \text{ year}$. Using these numbers in the formula, we have

$$\begin{aligned} I &= P \cdot R \cdot T \\ I &= 900 \times 0.06 \times \frac{90}{360} \\ I &= 900 \times 0.06 \times \frac{1}{4} && \frac{90}{360} = \frac{1}{4} \\ I &= 13.5 && \text{Multiplication} \end{aligned}$$

The interest earned in 90 days is \$13.50. If the woman withdraws all the money in her account, she will withdraw

$$\begin{array}{r} \$900.00 \text{ Original amount (principal)} \\ + \quad 13.50 \text{ Interest for 90 days} \\ \hline \$913.50 \text{ Total amount withdrawn} \end{array}$$

The woman will withdraw \$913.50.

B Compound Interest

A second common kind of interest is *compound interest*. Compound interest includes interest paid on interest. We can use what we know about simple interest to help us solve problems involving compound interest.

EXAMPLE 5

A homemaker puts \$3,000 into a savings account that pays 7% compounded annually. How much money is in the account at the end of 2 years?

SOLUTION Because the account pays 7% annually, the simple interest at the end of 1 year is 7% of \$3,000:

$$\begin{aligned}\text{Interest after 1 year} &= 0.07(\$3,000) \\ &= \$210\end{aligned}$$

Because the interest is paid annually, at the end of 1 year the total amount of money in the account is

$$\begin{array}{r} \$3,000 \quad \text{Original amount} \\ + \quad 210 \quad \text{Interest for 1 year} \\ \hline \$3,210 \quad \text{Total in account after 1 year} \end{array}$$

The interest paid for the second year is 7% of this new total, or

$$\begin{aligned}\text{Interest paid the second year} &= 0.07(\$3,210) \\ &= \$224.70\end{aligned}$$

At the end of 2 years, the total in the account is

$$\begin{array}{r} \$3,210.00 \quad \text{Amount at the beginning of year 2} \\ + \quad 224.70 \quad \text{Interest paid for year 2} \\ \hline \$3,434.70 \quad \text{Account after 2 years} \end{array}$$

At the end of 2 years, the account totals \$3,434.70. The total interest earned during this 2-year period is \$210 (first year) + \$224.70 (second year) = \$434.70. ■

You may have heard of savings and loan companies that offer interest rates that are compounded quarterly. If the interest rate is, say, 6% and it is compounded quarterly, then after every 90 days ($\frac{1}{4}$ of a year) the interest is added to the account. If it is compounded semiannually, then the interest is added to the account every 6 months. Most accounts have interest rates that are compounded daily, which means the simple interest is computed daily and added to the account.

EXAMPLE 6

If \$10,000 is invested in a savings account that pays 6% compounded quarterly, how much is in the account at the end of a year?

SOLUTION The interest for the first quarter ($\frac{1}{4}$ of a year) is calculated using the formula for simple interest:

$$\begin{aligned}I &= P \cdot R \cdot T \\ I &= \$10,000 \times 0.06 \times \frac{1}{4} \quad \text{First quarter} \\ I &= \$150\end{aligned}$$

At the end of the first quarter, this interest is added to the original principal. The new principal is \$10,000 + \$150 = \$10,150. Again we apply the formula to calculate the interest for the second quarter:

$$\begin{aligned}I &= \$10,150 \times 0.06 \times \frac{1}{4} \quad \text{Second quarter} \\ I &= \$152.25\end{aligned}$$

The principal at the end of the second quarter is \$10,150 + \$152.25 = \$10,302.25. The interest earned during the third quarter is

$$\begin{aligned}I &= \$10,302.25 \times 0.06 \times \frac{1}{4} \quad \text{Third quarter} \\ I &= \$154.53 \quad \text{To the nearest cent}\end{aligned}$$



Note If the interest earned in Example 5 were calculated using the formula for simple interest, $I = P \cdot R \cdot T$, the amount of money in the account at the end of two years would be \$3,420.00.

6. If \$20,000 is invested in an account that pays 8% compounded quarterly, how much is in the account at the end of a year?

Answer

5. \$5,618

The new principal is $\$10,302.25 + \$154.53 = \$10,456.78$. Interest for the fourth quarter is

$$I = \$10,456.78 \times 0.06 \times \frac{1}{4} \quad \text{Fourth quarter}$$

$$I = \$156.85 \quad \text{To the nearest cent}$$

The total amount of money in this account at the end of 1 year is

$$\$10,456.78 + \$156.85 = \$10,613.63$$

USING TECHNOLOGY

Compound Interest from a Formula

We can summarize the work above with a formula that allows us to calculate compound interest for any interest rate and any number of compounding periods. If we invest P dollars at an annual interest rate r , compounded n times a year, then the amount of money in the account after t years is given by the formula

$$A = P \left(1 + \frac{r}{n} \right)^{nt}$$

Using numbers from Example 6 to illustrate, we have

$$P = \text{Principal} = \$10,000$$

$$r = \text{annual interest rate} = 0.06$$

$$n = \text{number of compounding periods} = 4 \quad (\text{interest is compounded quarterly})$$

$$t = \text{number of years} = 1$$

Substituting these numbers into the formula above, we have

$$\begin{aligned} A &= 10,000 \left(1 + \frac{0.06}{4} \right)^{4 \times 1} \\ &= 10,000(1 + 0.015)^4 \\ &= 10,000(1.015)^4 \end{aligned}$$

To simplify this last expression on a calculator, we have

$$\text{Scientific calculator: } 10,000 \times 1.015 \text{ } y^x \text{ } 4 \text{ } =$$

$$\text{Graphing calculator: } 10,000 \times 1.015 \text{ } ^ \wedge \text{ } 4 \text{ } \text{ENTER}$$

In either case, the answer is $\$10,613.63551$, which rounds to $\$10,613.64$.

Note

The reason that this answer is different from the result we obtained in Example 6 is that, in Example 6, we rounded each calculation as we did it. The calculator will keep all the digits in all of the intermediate calculations.

Answer

6. $\$21,648.64$

Getting Ready for Class

After reading through the preceding section, respond in your own words and in complete sentences.

1. Suppose the man in Example 1 invested $\$3,000$, instead of $\$2,000$, in the savings plan. How much more interest would he have earned?
2. How much does the student in Example 3 pay back if the loan is paid off after a year, instead of after 60 days?
3. Suppose the homemaker mentioned in Example 5 invests $\$3,000$ in an account that pays only $3\frac{1}{2}\%$ compounded annually. How much is in the account at the end of 2 years?
4. In Example 6, how much money would the account contain at the end of 1 year if it were compounded annually, instead of quarterly?

Problem Set 5.6

A These problems are similar to the examples found in this section. They should be set up and solved in the same way. (Problems 1–12 involve simple interest.) [Examples 1–4]

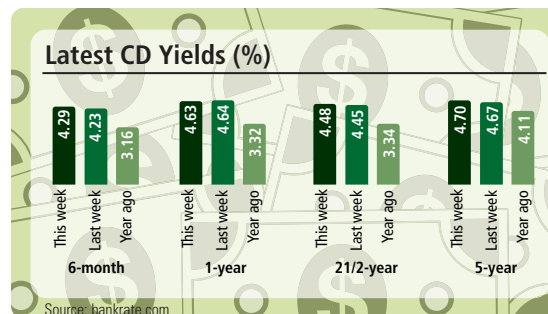
- 1. Savings Account** A man invests \$2,000 in a savings plan that pays 8% per year. How much money will be in the account at the end of 1 year?
- 2. Savings Account** How much simple interest is earned on \$5,000 if it is invested for 1 year at 5%?
- 3. Savings Account** A savings account pays 7% per year. How much interest will \$9,500 invested in such an account earn in a year?
- 4. Savings Account** A local bank pays 5.5% annual interest on all savings accounts. If \$600 is invested in this type of account, how much will be in the account at the end of a year?
- 5. Bank Loan** A farmer borrows \$8,000 from his local bank at 7%. How much does he pay back to the bank at the end of the year when he pays off the loan?
- 6. Bank Loan** If \$400 is borrowed at a rate of 12% for 1 year, how much is the interest?
- 7. Bank Loan** A bank lends one of its customers \$2,000 at 8% for 1 year. If the customer pays the loan back at the end of the year, how much does he pay the bank?
- 8. Bank Loan** If a loan of \$2,000 at 20% for 1 year is to be paid back in one payment at the end of the year, how much does the borrower pay the bank?
- 9. Student Loan** A student takes out an emergency loan for tuition, books, and supplies. The loan is for \$600 with an annual interest rate of 5%. How much interest does the student pay if the loan is paid back in 60 days?
- 10. Short-Term Loan** If a loan of \$1,200 at 9% is paid off in 90 days, what is the interest?
- 11. Savings Account** A woman deposits \$800 in a savings account that pays 5%. If she withdraws all the money in the account after 120 days, how much does she withdraw?
- 12. Savings Account** \$1,800 is deposited in a savings account that pays 6%. If the money is withdrawn at the end of 30 days, how much interest is earned?

B The problems that follow involve compound interest. [Examples 5, 6]

Compound Interest The chart shows the interest rates for various CD accounts.

13. Last year Samuel invested \$400 in a 6-month CD. If the interest is compounded quarterly, how much was in the account at the end of 6 months? Round to the nearest cent.

14. If Alice deposited \$200 in a $2\frac{1}{2}$ year CD account earlier this week, what will the account make at the end of its term if interest is compounded quarterly. Use the compound interest formula and round to the nearest cent.



15. **Compound Interest** A woman puts \$5,000 into a savings account that pays 6% compounded annually. How much money is in the account at the end of 2 years?

16. **Compound Interest** A savings account pays 5% compounded annually. If \$10,000 is deposited in the account, how much is in the account after 2 years?

17. **Compound Interest** If \$8,000 is invested in a savings account that pays 5% compounded quarterly, how much is in the account at the end of a year?

18. **Compound Interest** Suppose \$1,200 is invested in a savings account that pays 6% compounded semiannually. How much is in the account at the end of $1\frac{1}{2}$ years?

Calculator Problems

The following problems should be set up in the same way in which Problems 1–18 have been set up. Then the calculations should be done on a calculator.

19. **Savings Account** A woman invests \$917.26 in a savings account that pays 6.25% annually. How much is in the account at the end of a year?

20. **Business Loan** The owner of a clothing store borrows \$6,210 for 1 year at 11.5% interest. If he pays the loan back at the end of the year, how much does he pay back?

21. **Compound Interest** Suppose \$10,000 is invested in each account below. In each case find the amount of money in the account at the end of 5 years.

- Annual interest rate = 6%, compounded quarterly
- Annual interest rate = 6%, compounded monthly
- Annual interest rate = 5%, compounded quarterly
- Annual interest rate = 5%, compounded monthly

22. **Compound Interest** Suppose \$5,000 is invested in each account below. In each case find the amount of money in the account at the end of 10 years.

- Annual interest rate = 5%, compounded quarterly
- Annual interest rate = 6%, compounded quarterly
- Annual interest rate = 7%, compounded quarterly
- Annual interest rate = 8%, compounded quarterly

■ Getting Ready for the Next Section

Change to percent.

23. $\frac{75}{250}$

24. $\frac{150}{250}$

25. $\frac{400}{2,400}$

26. $\frac{200}{2,400}$

Multiply.

27. $0.3(360)$

28. $0.4(360)$

29. $0.45(360)$

30. $0.15(360)$

Divide.

31. $40 \div 5$

32. $45 \div 5$

33. $15 \div 5$

34. $5 \div 5$

■ Maintaining Your Skills

The problems below will allow you to review subtraction of fractions and mixed numbers.

35. $\frac{3}{4} - \frac{1}{4}$

36. $\frac{9}{10} - \frac{7}{10}$

37. $\frac{5}{8} - \frac{1}{4}$

38. $\frac{7}{10} - \frac{1}{5}$

39. $2 - \frac{4}{3}$

40. $2 + \frac{4}{3}$

41. $1 + \frac{1}{2}$

42. $1 - \frac{1}{2}$

43. $\frac{1}{3} - \frac{1}{4}$

44. $\frac{9}{12} - \frac{1}{5}$

45. $3\frac{1}{4} - 2$

46. $5\frac{1}{6} - 3\frac{1}{4}$

47. Find the sum of $\frac{8}{15}$ and $\frac{8}{35}$.

48. Find the difference of $\frac{8}{15}$ and $\frac{8}{35}$.

49. Find the product of $\frac{8}{15}$ and $\frac{8}{35}$.

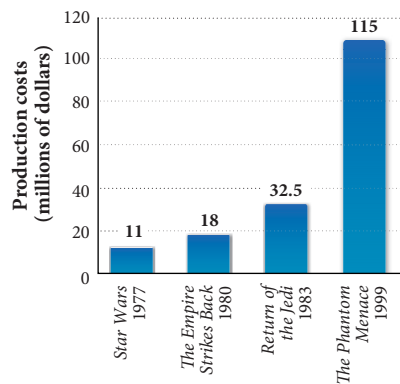
50. Find the quotient of $\frac{8}{15}$ and $\frac{8}{35}$.

■ Extending the Concepts

The following problems are percent problems. Use any of the methods developed in this chapter to solve them.

- 51. Credit Card Debt** Student credit-card debt is at an all-time high. Consolidated Credit Counseling Services Inc. reports that 20% of all college freshman got their first credit card in high school and nearly 40% sign up for one in their first year at college. Suppose your credit card company charges 1.3% in finance charges per month on the average daily balance in your credit card account. If your average daily balance for this month is \$2,367.90 determine the finance charge for the month.
- 52. Finding Your Interest Rate** In early January, your bank sent out a form called a 1099-INT, which summarizes the amount of interest you have received on a savings account for the previous year. If you received \$72 interest for the year on an account in which you started with \$1,200, determine the annual interest rate paid by your bank.

- 53. Movie Making** The bar chart below shows the production costs for each of the first four *Star Wars* movies. Find the percent increase in production costs from each *Star Wars* movie to the next. Round your results to the nearest tenth.



- 54. Movie Making** The table below shows how much money each of the first four *Star Wars* movies brought in during the first weekend they were shown. Find the percent increase in opening weekend income from each *Star Wars* movie to the next. Round to the nearest percent.

Opening Weekend Income

<i>Star Wars</i> (1977)	\$1,554,000
<i>The Empire Strikes Back</i> (1980)	\$6,415,000
<i>Return of the Jedi</i> (1983)	\$30,490,000
<i>The Phantom Menace</i> (1999)	\$64,810,000

Chapter 5 Summary

■ The Meaning of Percent [5.1]

Percent means “per hundred.” It is a way of comparing numbers to the number 100.

EXAMPLES

1. 42% means 42 per hundred or $\frac{42}{100}$.

■ Changing Percents to Decimals [5.1]

To change a percent to a decimal, drop the percent symbol (%), and move the decimal point two places to the *left*.

2. $75\% = 0.75$

■ Changing Decimals to Percents [5.1]

To change a decimal to a percent, move the decimal point two places to the *right*, and use the % symbol.

3. $0.25 = 25\%$

■ Changing Percents to Fractions [5.1]

To change a percent to a fraction, drop the % symbol, and use a denominator of 100. Reduce the resulting fraction to lowest terms if necessary.

4. $6\% = \frac{6}{100} = \frac{3}{50}$

■ Changing Fractions to Percents [5.1]

To change a fraction to a percent, either write the fraction as a decimal and then change the decimal to a percent, or write the fraction as an equivalent fraction with denominator 100, drop the 100, and use the % symbol.

5. $\frac{3}{4} = 0.75 = 75\%$
or
 $\frac{9}{10} = \frac{90}{100} = 90\%$

■ Basic Word Problems Involving Percents [5.2]

There are three basic types of word problems:

Type A: What number is 14% of 68?

Type B: What percent of 75 is 25?

Type C: 25 is 40% of what number?

To solve them, we write *is* as =, *of* as \cdot (multiply), and *what number* or *what percent* as n . We then solve the resulting equation to find the answer to the original question.

6. Translating to equations, we have:
Type A: $n = 0.14(68)$
Type B: $75n = 25$
Type C: $25 = 0.40n$

Applications of Percent [5.3, 5.4, 5.5, 5.6]

There are many different kinds of application problems involving percent. They include problems on income tax, sales tax, commission, discount, percent increase and decrease, and interest. Generally, to solve these problems, we restate them as an equivalent problem of Type A, B, or C from the previous page. Problems involving simple interest can be solved using the formula

$$I = P \cdot R \cdot T$$

where I = interest, P = principal, R = interest rate, and T = time (in years). It is standard procedure with simple interest problems to use $360 \text{ days} = 1 \text{ year}$.

COMMON MISTAKES

1. A common mistake is forgetting to change a percent to a decimal when working problems that involve percents in the calculations. We always change percents to decimals before doing any calculations.
2. Moving the decimal point in the wrong direction when converting percents to decimals or decimals to percents is another common mistake. Remember, *percent* means “per hundred.” Rewriting a number expressed as a percent as a decimal will make the numerical part smaller.

$$25\% = 0.25$$

Chapter 5 Review

Write each percent as a decimal. [5.1]

1. 35%

2. 17.8%

3. 5%

4. 0.2%

Write each decimal as a percent. [5.1]

5. 0.95

6. 0.8

7. 0.495

8. 1.65

Write each percent as a fraction or mixed number in lowest terms. [5.1]

9. 75%

10. 4%

11. 145%

12. 2.5%

Write each fraction or mixed number as a percent. [5.1]

13. $\frac{3}{10}$

14. $\frac{5}{8}$

15. $\frac{2}{3}$

16. $4\frac{3}{4}$

Solve the following problems. [5.2]

17. What number is 60% of 28?

18. What number is 122% of 55?

19. What percent of 38 is 19?

20. What percent of 19 is 38?

21. 24 is 30% of what number?

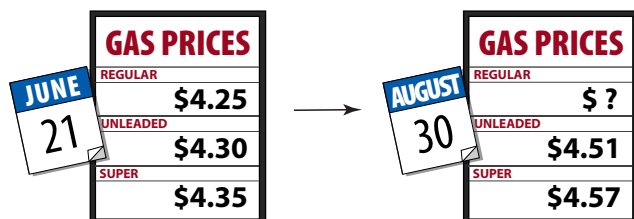
22. 16 is 8% of what number?

23. **Survey** Suppose 45 out of 60 people surveyed believe a college education will increase a person's earning potential. What percent believe this? [5.3]

24. **Discount** A lawnmower that usually sells for \$175 is marked down to \$140. What is the discount? What is the discount rate? [5.5]



25. **Total Price** A sewing machine that normally sells for \$600 is on sale for 25% off. If the sales tax rate is 6%, what is the total price of the sewing machine if it is purchased during the sale? [5.4, 5.5]
26. **Home Mortgage** If the interest rate on a home mortgage is 9%, then each month you pay 0.75% of the unpaid balance in interest. If the unpaid balance on one such loan is \$60,000 at the beginning of a month, how much interest must be paid that month? [5.6]
27. **Percent Increase** At the beginning of the summer, the price for a gallon of regular gasoline is \$4.25. By the end of summer, the price has increased 16%. What is the new price of a gallon of regular gasoline? Round to the nearest cent. [5.5]
28. **Percent Decrease** A gallon of regular gasoline is selling for \$1.45 in September. If the price decreases 14% in October, what is the new price for a gallon of regular gasoline? Round to the nearest cent. [5.5]



29. **Medical Costs** The table shows the average yearly cost of visits to the doctor, as reported in *USA Today*. What is the percent increase in cost from 1990 to 2000? Round to the nearest tenth of a percent. [5.5]
30. **Commission** A real estate agent gets a commission of 6% on all houses he sells. If his total sales for December are \$420,000, how much money does he make? [5.4]

MEDICAL COSTS	
Year	Average Annual Cost
1990	\$583
1995	\$739
2000	\$906
2005	\$1,172

31. **Discount** A washing machine that usually sells for \$300 is marked down to \$240. What is the discount? What is the discount rate? [5.5]
32. **Total Price** A tennis racket that normally sells for \$240 is on sale for 25% off. If the sales tax rate is 5%, what is the total price of the tennis racket if it is purchased during the sale? [5.4]



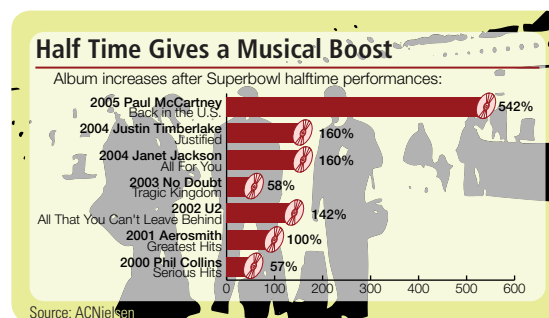
Chapter 5 Cumulative Review

Simplify.

- $$\begin{array}{r} 6,801 \\ 539 \\ + 374 \\ \hline \end{array}$$
- $$\begin{array}{r} 5,038 \\ - 2,769 \\ \hline \end{array}$$
- $52(867)$
- $1,023 \div 15$
- $4.73 \overline{)156.09}$
- $\frac{7}{8} - \frac{5}{8}$
- $\left(\frac{5}{6}\right)^3$
- $4.551 + 3.08$
- $5 - 3.678$
- $1.2(0.21)$
- $\frac{7}{15} \cdot \frac{5}{14}$
- $\frac{8}{27} \div \frac{20}{63}$
- $\frac{3}{8} + \frac{7}{12}$
- $8\frac{1}{5} - 5\frac{7}{10}$
- $9 \cdot 4\frac{2}{3}$
- Subtract $5\frac{3}{8}$ from 10.375.
- Find the quotient of $1\frac{1}{2}$ and $\frac{1}{4}$.
- Translate into symbols, and then simplify: Twice the sum of 2 and 9.
- Write the ratio of 3 to 12 as a fraction in lowest terms.
- If 1 mile is 5,280 feet, how many feet are there in 2.5 miles?
- If 1 square yard is 1,296 square inches, how many square inches are in $\frac{1}{2}$ square yard?
- Write $\frac{1}{8}$ as a percent.
- Convert 46% to a fraction.
- Solve the equation $\frac{2}{x} = \frac{5}{8}$
- $3 \cdot 5^2 + 2 \cdot 4^2 - 5 \cdot 2^3$
- What number is 5% of 32?
- 55 is what percent of 275?
- 8.8 is 15% of what number?
- Unit Pricing** If a six-pack of Coke costs \$2.79, what is the price per can to the nearest cent?

- Unit Pricing** A quart of 2% reduced-fat milk contains four 1-cup servings. If the quart costs \$1.61, find the price per serving to the nearest cent.
- Temperature** Use the formula $C = \frac{5(F - 32)}{9}$ to find the temperature in degrees Celsius when the Fahrenheit temperature is 212°F.
- Percent Increase** Kendra is earning \$1,600 a month when she receives a raise to \$1,800 a month. What is the percent increase in her monthly salary?
- Driving Distance** If Ethan drives his car 230 miles in 4 hours, how far will he drive in 6 hours if he drives at the same rate?
- Movie Tickets** A movie theater has a total of 250 seats. If they have a sellout crowd for a matinee and each ticket costs \$7.25, how much money will ticket sales bring in that afternoon?
- Geometry** Find the perimeter and area of a square with side 8.5 inches.
- Average** If a basketball team has scores of 64, 76, 98, 55, and 102 in their first five games, find the mean score.
- Hourly Pay** Jean tutors in the math lab and earns \$56 in one week. If she works 8 hours that week, what is her hourly pay?

Use the illustration to answer problem 38.



- If Paul McCartney had sold 1.7 million albums before the Superbowl, what was the total numbers of albums sold before and after the Superbowl?

Chapter 5 Test

Write each percent as a decimal.

1. 18% 2. 4% 3. 0.5%

Write each decimal as a percent.

4. 0.45 5. 0.7 6. 1.35

Write each percent as a fraction or a mixed number in lowest terms.

7. 65% 8. 146% 9. 3.5%

Write each number as a percent.

10. $\frac{7}{20}$ 11. $\frac{3}{8}$ 12. $1\frac{3}{4}$

13. What number is 75% of 60?

14. What percent of 40 is 18?

15. 16 is 20% of what number?

16. **Driver's Test** On a 25-question driver's test, a student answered 23 questions correctly. What percent of the questions did the student answer correctly?

17. **Commission** A salesperson gets an 8% commission rate on all computers she sells. If she sells \$12,000 in computers in 1 day, what is her commission?

18. **Discount** A washing machine that usually sells for \$250 is marked down to \$210. What is the discount? What is the discount rate?



19. **Total Price** A tennis racket that normally sells for \$280 is on sale for 25% off. If the sales tax rate is 5%, what is the total price of the tennis racket if it is purchased during the sale?

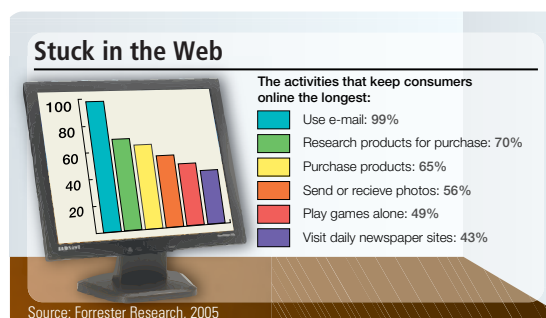


20. **Simple Interest** If \$5,000 is invested at 8% simple interest for 3 months, how much interest is earned?

21. **Compound Interest** How much interest will be earned on a savings account that pays 10% compounded annually, if \$12,000 is invested for 2 years?

22. **Percent Increase** A driver gets into a car accident and his insurance increases by 12%. If he paid \$950 before the accident, how much is he paying now?

Use the illustration to answer problem 23.



23. How many people said they like to play games if 6,000 people were surveyed.

Chapter 5 Projects

PERCENT

GROUP PROJECT

Group Project

- Number of People** 2
- Time Needed** 5 minutes
- Equipment** Pencil, paper, and calculator.
- Background** All of us spend time buying clothes and eating meals at restaurants. In all of these situations, it is good practice to check receipts. This project is intended to give you practice creating receipts of your own.
- Procedure** Fill in the missing parts of each receipt.

SALES RECEIPT

Jeans	29.99
<hr/>	
Sales Tax (7.75%)	
<hr/>	
Total	
<hr/>	
<hr/>	

SALES RECEIPT

2 Buffet Dinners @ 9.99	19.98
<hr/>	
Discount (10%)	
<hr/>	
Total	
<hr/>	
<hr/>	

SALES RECEIPT

Computer	400.00
<hr/>	
Discount: 30% off	
<hr/>	
Discounted Price	
<hr/>	
Sales Tax (6%)	
<hr/>	
Total	
<hr/>	

SALES RECEIPT

Couch	
<hr/>	
Sales Tax (7%)	
<hr/>	
Total	588.50
<hr/>	
<hr/>	

RESEARCH PROJECT

Credit-Card Debt

Credit-card companies are now offering credit-cards to college students who would not be able to get a card under normal credit-card criteria (due to lack of credit history and low income). The credit-card industry sees young people as a valuable market because research shows that they remain loyal to their first cards as they grow older. Nellie Mae, the student loan agency, found that 78% of college students had credit cards in 2000. For many of these students, lack of financial experience or education leads to serious debt. According to Nellie Mae, undergraduates with credit-cards carried an average balance of \$2,748 in 2000. Half of credit-card-carrying college students don't pay their balances in full every month. Choose a credit-card and find out the minimum monthly payment and the APR (annual percentage rate). Compute the minimum monthly payment and interest charges for a balance of \$2,748.



Stockbyte/SuperStock

A Glimpse of Algebra

There is really no direct extension of percent to algebra. Because that is the case, we will go back to some of the algebraic expressions we have encountered previously and evaluate them.

To evaluate an expression, such as $5x + 4$, when we know that x is 7, we simply substitute 7 for x in the expression $5x + 4$ and then simplify the result.

$$\begin{aligned} \text{When } x &= 7 \\ \text{the expression } &5x + 4 \\ \text{becomes } &5(7) + 4 \\ \text{or } &35 + 4 \\ &= 39 \end{aligned}$$


Here are some examples.

EXAMPLE 1

Find the value of the expression $4x + 3x - 8$ when x is 2.

SOLUTION Substituting 2 for x in the expression, we have:

$$\begin{aligned} 4(\mathbf{2}) + 3(\mathbf{2}) - 8 &= 8 + 6 - 8 \\ &= 14 - 8 \\ &= 6 \end{aligned}$$

We say that $4x + 3x - 8$ becomes 6 when x is 2. 

EXAMPLE 2

Find the value of the following expression when a is 5:

$$\frac{4a + 8}{3a - 8}$$

SOLUTION Replacing a with 5 in the expression, we have:

$$\begin{aligned} \frac{4(\mathbf{5}) + 8}{3(\mathbf{5}) - 8} &= \frac{20 + 8}{15 - 8} \\ &= \frac{28}{7} \\ &= 4 \end{aligned}$$

EXAMPLE 3

Find the value of $x^2 + 5x + 6$ when x is 4.

SOLUTION When x is 4, the expression $x^2 + 5x + 6$ becomes

$$\begin{aligned} (\mathbf{4})^2 + 5(\mathbf{4}) + 6 &= 16 + 20 + 6 \\ &= 42 \end{aligned}$$

PRACTICE PROBLEMS

1. Find the value of the expression $6x + 3x - 10$ when x is 3.

2. Find the value of the following expression when a is 10:

$$\frac{4a + 20}{5a - 20}$$

3. Find the value of $x^2 + 6x + 8$ when x is 3.

Answers

1. 17 2. 2 3. 35

4. Find the value of the following expression when x is 10 and y is 4:

$$\frac{3x + y}{3x - y}$$

5. Find the value of $(4x + 1)(4x - 1)$ when x is 2.

6. Find the value of the following expression when x is 5.

$$\frac{x^3 + 8}{x + 2}$$

Chapter 5 Percent

EXAMPLE 4

Find the value of $\frac{4x + y}{4x - y}$ when x is 5 and y is 2:

SOLUTION This time we have two different variables. We replace x with 5 and y with 2 to get

$$\begin{aligned} \frac{4(\mathbf{5}) + \mathbf{2}}{4(\mathbf{5}) - \mathbf{2}} &= \frac{20 + 2}{20 - 2} \\ &= \frac{22}{18} \\ &= \frac{11}{9} \end{aligned}$$

EXAMPLE 5

Find the value of $(2x + 3)(2x - 3)$ when x is 4.

SOLUTION Replacing x with 4 in the expression, we have:

$$\begin{aligned} (2 \cdot \mathbf{4} + 3)(2 \cdot \mathbf{4} - 3) &= (8 + 3)(8 - 3) \\ &= (11)(5) \\ &= 55 \end{aligned}$$

EXAMPLE 6

Find the value of $\frac{x^3 - 8}{x - 2}$ when x is 5:

SOLUTION We substitute 5 for x and then simplify:

$$\begin{aligned} \frac{\mathbf{5}^3 - 8}{\mathbf{5} - 2} &= \frac{125 - 8}{3} \\ &= \frac{117}{3} \\ &= 39 \end{aligned}$$

Answers

4. $\frac{17}{13}$ 5. 63 6. 19

A Glimpse of Algebra Problems

Find the value of each of the following expressions for the given values of the variables.

1. $6x + 2x - 7$ when x is 2

2. $8x + 10x - 5$ when x is 3

3. $4x + 6x + 8x$ when x is 10

4. $9x + 2x + 20x$ when x is 5

5. $\frac{4a + 20}{5a - 20}$ when a is 5

6. $\frac{4a + 8}{3a - 8}$ when a is 8

7. $\frac{2a + 3a + 1}{4a + 5a + 3}$ when a is 3

8. $\frac{7a + a + 4}{6a + 2a + 3}$ when a is 10

9. $x^2 + 5x + 6$ when x is 2

10. $x^2 + 6x + 8$ when x is 6

11. $x^2 + 10x + 25$ when x is 1

12. $x^2 + 10x + 25$ when x is 0

13. $\frac{3x + y}{3x - y}$ when x is 5 and y is 2

14. $\frac{5x - y}{5x + y}$ when x is 10 and y is 5

15. $\frac{4x + 6y}{6x + 4y}$ when x is 5 and y is 4

16. $\frac{8x - 3y}{3x + 8y}$ when x is 5 and y is 10

17. $(3x + 2)(3x - 2)$ when x is 4

18. $(5x + 4)(5x - 4)$ when x is 2

19. $(2x + 3)^2$ when x is 1

20. $(2x + 3)^3$ when x is 2

21. $\frac{x^3 + 1}{x + 1}$ when x is 2

22. $\frac{x^3 - 1}{x - 1}$ when x is 4

23. $\frac{x^3 - 8}{x^2 + 2x + 4}$ when x is 3

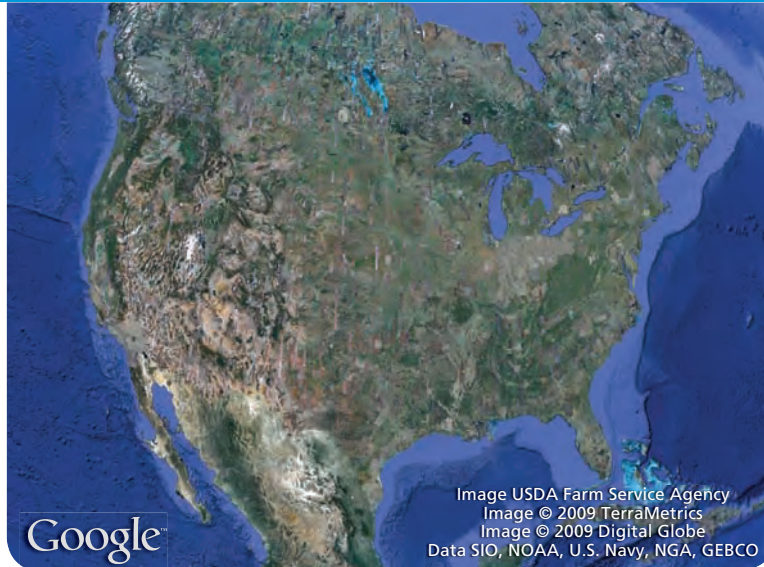
24. $\frac{x^3 + 8}{x^2 - 2x + 4}$ when x is 3

25. $\frac{x^4 - 16}{x^2 + 4}$ when x is 5

26. $\frac{x^4 - 16}{x + 2}$ when x is 3

Descriptive Statistics

6

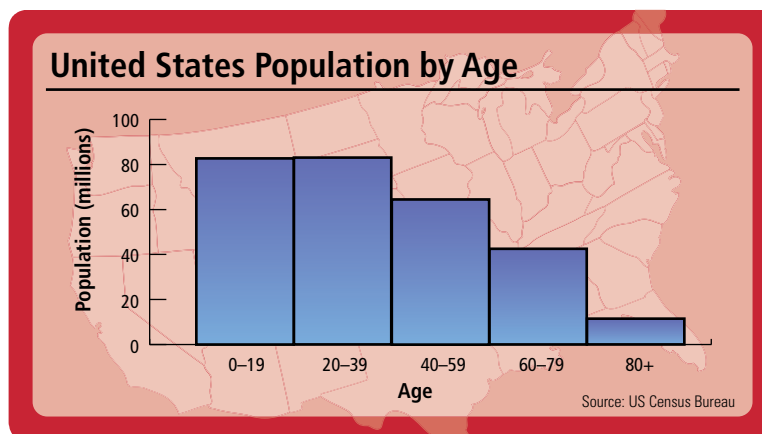


Chapter Outline

- 6.1 Mean, Median, and Mode
- 6.2 Displaying Information
- 6.3 Pie Charts
- 6.4 Introduction to Probability

Introduction

The United States is home to more than 300 million people of all ages, races, colors and creeds. You can group people by any number of factors: height, weight, education level, state of residence, race or, like we do below, by age. The *histrogram* or *bar chart* pictured below shows the U.S. population grouped into five different age ranges. Histograms are an excellent way of presenting data in a way that is quick and easy to understand.



In this chapter we will continue the work you have done previously with averages, bar charts, line graphs and pie charts. You will also create some charts of your own. You will see how averages look when placed in a chart, and you will learn to make estimates and predictions from line charts you create.

Chapter Pretest

Find the mean and median of each set.

1. 5, 6, 9, 4, 11

2. 35, 27, 39, 31

3. 14, 8, 17, 31

Find the mode and range of each set.

4. 3, 6, 8, 6, 12

5. 1, 9, 13, 1, 7

6. 5, 6, 13, 7, 24

7. Create a stem-and-leaf diagram with the following data.

17, 31, 16, 28, 4, 27, 19, 23

8. Create a histogram with 4 bins with the following data.

10, 14, 28, 21, 7, 16, 25, 34

Getting Ready for Chapter 6

Simplify.

1. $9.3 - 7.2$

2. $10.2 - 5.3$

3. $12 - 4.1$

4. $17 - 2.8$

5. $5,478 - 309$

6. $7,541 - 206$

7. $270 + 63 + 4 + 9.3 + 0.9$

8. $120 + 40 + 12.8 + 7.1 + 2.3$

9. $18,464 + 1,733 + 2,929$

10. $14,721 + 1,988 + 1,234$

11. $0.6(360)$

12. $0.25(360)$

13. $347.2 \div 4$

14. $182.2 \div 5$

15. $23,126 \div 8$

16. $17,943 \div 5$

Change to a percent.

17. $\frac{150}{250}$

18. $\frac{600}{2,400}$

19. $\frac{5}{400}$

20. $\frac{6}{400}$

Mean, Median, and Mode

6.1

Sets and Data


You will recall that previously we have worked with collections of data called sets. We defined a set as a collection of objects or things, with the objects in the set called elements or members of the set. More formally, we said:

$x \in A$ is read “ x is an element (member) of set A ”

If we let n represent the number of elements in a set, then we can use subscripts to write set A as follows:

$$A = \{x_1, x_2, x_3, \dots, x_n\}$$

Many times we want to reduce the set to a single value called an *average*. Here is the definition from the Merriam-Webster online dictionary:



av · er · age *noun* 1 a : a single value (as a mean, mode, or median) that summarizes or represents the general significance of a set of unequal values . . .

In statistics we refer to the mean and median as *measures of central tendency*. In everyday language the word *average* can refer to the mean, the median, or the mode.

A Mean

The mean is probably the most common measure of central tendency and it refers to the arithmetic average for a set of numbers. It is typically used to describe data such as test scores, salary, and various averages having to do with sports.

Definition

The **mean** for a set of values is the sum of the values divided by the number of values.

Algebraically: mean $\bar{x} = \frac{\{x_1 + x_2 + x_3 + \dots + x_n\}}{n}$

EXAMPLE 1

An instructor at a community college earned the following salaries for the first five years of teaching. Find the mean of these salaries.



\$35,344 \$38,290 \$39,199 \$40,346 \$42,866

Objectives

- A** Find the mean given a set of numbers.
- B** Find the median given a set of numbers.
- C** Find the mode given a set of numbers.
- D** Find the range given a set of numbers.

PRACTICE PROBLEMS

1. A woman traveled the following distances on a 5-day business trip: 187 miles, 273 miles, 150 miles, 173 miles, and 227 miles. What was the mean distance the woman traveled each day?

SOLUTION We add the five salaries and then divide by 5, the number of values in the set.

$$\text{Mean} = \frac{35,344 + 38,290 + 39,199 + 40,346 + 42,866}{5} = \frac{196,045}{5} = 39,209$$

The instructor's mean salary for the first five years of work is \$39,209 per year.

B Median

The median for a set of numbers is the number in the middle of the data, meaning half the numbers in the set have a value less than the median, and half the numbers in the set have a value greater than the median. Housing prices are frequently described by using a median.

Definition

The **median** of a set of numbers is the number in the middle when the set is written from least to greatest. If the set contains an even number of elements, the median is the mean of the two middle numbers.

EXAMPLE 2

Find the median of the numbers given in Example 1.

SOLUTION The numbers in Example 1 are already written from smallest to largest. Because there are an odd number of numbers in the set, the median is the middle number.

$$35,344 \quad 38,290 \quad 39,199 \quad 40,346 \quad 42,866$$

↑
median

The instructor's median salary for the first five years of teaching is \$39,199.

EXAMPLE 3

The selling prices of four recently sold houses in a certain neighborhood are given below.

$$\$351,890 \quad \$253,745 \quad \$155,601 \quad \$157,412$$

Find the mean and the median for the four salaries.

SOLUTION To find the mean, we add the four numbers and then divide by 4:

$$\frac{351,890 + 253,745 + 155,601 + 157,412}{4} = \frac{918,648}{4} = 229,662$$

To find the median, we write the numbers in order from smallest to largest. Then, because there is an even number of numbers, we average the middle two numbers to obtain the median.

$$155,601 \quad \underbrace{157,412 \quad 253,745}_{\text{median}} \quad 351,890$$

$$\downarrow$$

$$\frac{157,412 + 253,745}{2} = 205,578.5$$

The mean is \$229,662, and the median is \$205,578.50.

2. Find the median for the distances in Practice Problem 1.


3. The selling prices of four homes are given below. Find the median.
\$140,763 \$242,635 \$244,475
\$146,320

Answers

1. 202 miles 2. 187 miles
3. \$194,477.50

C Mode

The mode is best used when we are looking for the most common eye color in a group of people, the most popular breed of dog in the United States, or the movie that was seen the most often. When we have a set of numbers in which one number occurs more often than the rest, that number is the mode. For example, consider this set of iPods:



Given the set of iPods, the most popular color is red. We call this the mode.

Definition

The **mode** for a set of numbers is the number that occurs most frequently. If all the numbers in the set occur the same number of times, there is no mode.

EXAMPLE 4

A math class with 18 students had the grades shown below on their first test. Find the mean, the median, and the mode.

77 87 100 65 79 87
79 85 87 95 56 87
56 75 79 93 97 92

SOLUTION To find the mean, we add all the numbers and divide by 18:

$$\begin{aligned}\text{mean} &= \frac{77+87+100+65+79+87+79+85+87+95+56+87+56+75+79+93+97+92}{18} \\ &= \frac{1,476}{18} = 82\end{aligned}$$

To find the median, we must put the test scores in order from smallest to largest; then, because there are an even number of test scores, we must find the mean of the middle two scores.

56 56 65 75 77 79 79 79 85 87 87 87 87 92 93 95 97 100

$$\text{Median} = \frac{85 + 87}{2} = 86$$

The mode is the most frequently occurring score. Because 87 occurs 4 times, and no other scores occur that many times, 87 is the mode.

The mean is 82, the median is 86, and the mode is 87. ■

More Vocabulary


When we used the word *average* in the beginning of this section, we used it as a noun. It can also be used as an adjective and a verb. The following is the definition of the word *average* when it is used as a verb.

4. The students in a small math class have the following scores on their final exam. Find the mode.

56 89 74 68 97 74 68
74 88 45

Answer

4. 74

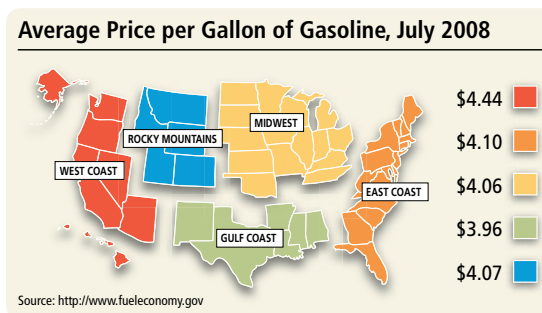


av · er · age *verb* . . . 2 : to find the arithmetic mean of (a series of unequal quantities) . . .

If you are asked for the *average* of a set of numbers, the word *average* can represent the mean, the median, or the mode. When used in this way, the word *average* is a noun. However, if you are asked to *average* a set of numbers, then the word *average* is a verb, and you are being asked to find the mean of the numbers.

D Range

The range of a set of data is the difference between the least and greatest. While the range of scores on the latest math test may be high, the difference between the highest and lowest gas prices around town will be much smaller.



From the information on average gas prices around the country, we see that the lowest average price was found in Gulf Coast states at \$3.96 per gallon with the highest prices being paid on the West Coast at \$4.44 per gallon. The range of this set of data is the difference between these two numbers:

$$\$4.44 - \$3.96 = \$0.48$$

We say the gas prices in July of 2008 had a range of \$0.48.

Definition

The **range** for a set of numbers is the difference between the largest number and the smallest number in the sample.

EXAMPLE 5

Find the range of the test scores given in Example 4.

SOLUTION The highest score is 100, and the lowest score is 56. The range is $100 - 56 = 44$.

Getting Ready for Class

After reading through the preceding section, respond in your own words and in complete sentences.

1. The word *average* can refer to what three mathematical concepts?
2. What is the median for a set of numbers?
3. What is the mode for a set of numbers?
4. What number must we use for x , if the average of 6, 8, and x is to be 8?

5. Find the range of the exam scores given in Practice Problem 4.

Answer
5. 52

Problem Set 6.1

A Find the mean for each set of numbers. [Examples 1, 3]

1. 1, 2, 3, 4, 5

2. 2, 4, 6, 8, 10

3. 1, 3, 9, 11

4. 5, 7, 9, 12, 12

5. 29,500, 10,650, 8,900, 15,120, 16,800

6. 8,040, 5,505, 4,121, 9,910

7. 12.5, 8.2, 1.8

8. 4.1, 6.9, 2.2, 3.6

B Find the median for each set of numbers. [Examples 2, 3]

9. 5, 9, 11, 13, 15

10. 42, 48, 50, 64

11. 10, 20, 50, 90, 100

12. 500, 800, 1200, 1300

13. 900, 700, 1100

14. 850, 100, 225, 480

15. 1.0, 6.5, 3.2, 1.7, 2.1, 4.6, 3.9

16. 2.7, 3.4, 1.8, 1.1, 2.3, 3.0

C Find the mode for each set of numbers. [Example 4]

17. 14, 18, 27, 36, 18, 73

18. 11, 27, 18, 11, 72, 11

19. 98, 87, 65, 73, 82, 87, 65, 97, 87, 77

20. 3.0, 3.2, 2.5, 4.0, 3.1, 3.1, 2.6, 1.9, 1.8, 3.4, 3.1, 2.0

21. 1, 1, 2, 3, 1, 3, 3, 2, 1, 2, 2, 3, 1

22. 5, 8, 9, 9, 6, 6, 7, 7, 5, 8, 6, 8, 9, 5, 8, 8, 9

D Determine the range of the given data. [Example 5]

23. 15, 34, 12, 25, 27

24. 2.6, 4.1, 5.4, 3.9, 0.6

25. 1.0, 3.9, 2.1, 3.6, 2.9, 3.8

26. 12,000, 13,500, 10,120, 14,250, 11,490

27. 52, 69, 84, 81, 79, 46, 81, 73, 68

28. 4080, 2900, 1650, 1800, 1925, 690

■ Applying the Concepts


29. **Test Average** A student's scores for four exams in a basic math class were 79, 62, 87, and 90. What is the student's mean and median test score?



30. **Test Scores** A first-year math student had grades of 79, 64, 78, and 95 on the first four tests. What is the student's mean and median test grade?

31. **Average Salary** Over a 3-year period a woman's annual salaries were \$28,000, \$31,000, and \$34,000. What was her mean annual salary and median annual salary for this 3-year period?

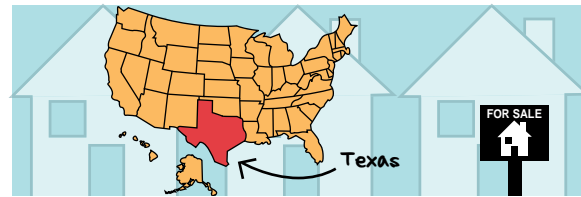
32. **Bowling** If a person has scores of 205, 222, 174, 236, 185, and 215 for six games of bowling, what is the median score for the six games?



33. Average If a basketball team has scores of 64, 76, 98, 55, 76, and 102 in their first six games, find:

- the mean score
- the median score
- the mode of the scores

34. Home Sales Below are listed the prices paid for 10 homes that sold during the month of February in a city in Texas.



\$210,000 \$139,000 \$122,000 \$145,000 \$120,000
\$540,000 \$167,000 \$125,000 \$125,000 \$950,000

- Find the mean housing price for the month.
- Find the median housing price for the month.
- Find the mode of the housing prices for the month.
- Which measure of “average” best describes the average housing price for the month? Explain your answer.

35. Cost of College The average cost of tuition for a 4-year public college varies by region. In 2008, the cost of tuition for different regions of the United States were the following:

\$8,602, \$7,785, \$7,565, \$6,421, \$5,428, and \$5,412

What was the mean and median national cost to attend college? Round to the nearest cent.

36. Cost of College The net cost of tuition is the cost that students actually pay when financial aid is taken into account. If the net cost for a 4-year public college for four different years was \$2,260, \$2,210, \$2,130, and \$2,850, what was the mean and median net cost? Round to the nearest cent.

37. Financial Aid The following are the amounts of federal grants (in millions) that were given out from 2004 to 2008: \$19,788, \$20,304, \$19,416, \$19,472, \$20,946. What was the mean and median amount given out in federal grants? Round to the nearest dollar.

38. Financial Aid The following are the amounts of all financial aid distributed, this includes all grants, loans, and scholarships, from 2004 to 2008: \$132,839, \$143,694, \$149,668, \$154,044, \$162,501. What was the mean and median amount of financial aid from 2004 to 2008. Round to the nearest cent.

- 39. Bowling** Find the range of the bowling scores given in Problem 32.
- 40. Basketball** Find the range of the basketball game scores given in Problem 33.
- 41. Cost of College** Find the range of the average costs of tuition given in Problem 35.
- 42. Cost of College** Find the range of the net costs of tuition given in Problem 36.
- 43. Financial Aid** Find the range of the amounts of federal grants given in Problem 37.
- 44. Financial Aid** Find the range of the amounts of financial aid given in Problem 38.

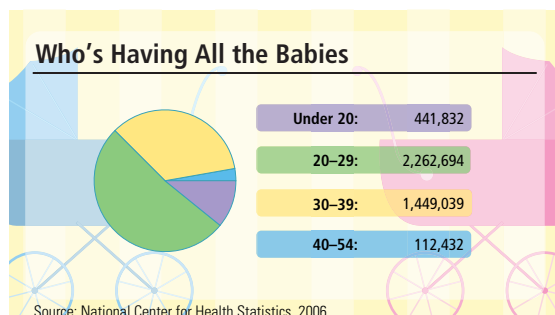
■ Extending the Concepts

- 45.** An internet company wants to sell ad space on their web site to generate revenue, but they need to average 5,000 visitors each day for a week. Here is the data for the first six days of the week:
- | Day | Visitors |
|-----------|----------|
| Monday | 4,432 |
| Tuesday | 5,340 |
| Wednesday | 5,895 |
| Thursday | 6,003 |
| Friday | 5,486 |
| Saturday | 4,789 |
- a.** How many visitors do they need on Sunday?
- b.** What type of average is this; a mean, a median, or a mode?
- 46.** Luke's test scores are 84, 65, 91, 75, and 92 points out of 100. He has one more test in the semester.
- a.** What score does he need on the last test to average an 83 on all six tests?
- b.** If the teacher drops the lowest score, is it possible for Luke to average 90?
- 47.** The mean of a set of numbers is 234, and the sum of the numbers in the set is 1,638. How many numbers are in the set?
- 48.** The mean of a set of numbers is 0.68, and the sum of the numbers in the set is 5.44. How many numbers are in the set?

Displaying Information

6.2

The figure below shows the number of births to mothers of different ages in the United States in the year 2006.



The data does not show the age of every mother, but rather a range of ages. By grouping the ages into different categories, the data becomes easier to analyze. For example, we can see right away that about half the babies born were born to mothers in their twenties.

In the previous section we worked with data in sets, but the sets were small enough that they didn't need to be organized before we used them. For larger sets of data, organization is very important. In this section we will study methods of organization for larger sets of data.

A Stem-and-Leaf Diagrams

Many times we will want to organize data as it is being collected. A stem-and-leaf diagram or plot is commonly used for this purpose. A stem-and-leaf diagram is a two-column display with the stems on the left and the leaves on the right. When the data is all two-digit numbers, the stems are the first digits and the leaves are the second digits. Here is an example.

EXAMPLE 1

A class of 35 students agreed to have a push-up contest. Use a stem-and-leaf diagram to display the results of the contest shown here.

25, 11, 15, 64, 33, 52, 40, 31, 23, 49, 16, 22, 20, 46, 14, 43, 51, 42,
37, 93, 61, 35, 27, 39, 48, 55, 47, 26, 58, 41, 67, 34, 30, 54, 43

SOLUTION By observing the data, we see that the values range from 11 to 93. Our stems will be the digits in the tens column, and our leaves will be the digits in the ones column.

Stem	Leaf
1	1, 5, 6, 4
2	5, 3, 2, 0, 7, 6
3	3, 1, 7, 5, 9, 4, 0
4	0, 9, 6, 3, 2, 8, 7, 1, 3
5	2, 1, 5, 8, 4
6	4, 1, 7
7	
8	
9	3

When the same data is organized and viewed in the stem-and-leaf diagram, it's clear that 11 is the least and that 93 is the greatest number of push-ups completed. The data also seems to have a shape to it, as it seems to peak in the 40's.

Objectives

- A Construct stem and leaf diagrams.
- B Construct frequency tables.
- C Construct histograms.
- D Find the quartiles of a data set.
- E Construct box-and-whisker plots.

PRACTICE PROBLEMS

1. Use a stem-and-leaf diagram to display the data below.

14, 25, 7, 28, 36, 25, 17, 46, 9,
12, 16, 21, 26, 32, 38

Answer

1. See solutions section.

In the stem-and-leaf plot in the previous example, the 93 seems out of place, because there is no other data close to it. We call a data point that is not near other data points an *outlier*. Sometimes an outlier is significant, and sometimes it is caused by human error. Either way, an outlier is a piece of data that does not occur frequently.

B Frequency Tables

Frequency tables allow us to record data by how often it occurs, but without keeping track of each individual piece of data. Instead, a frequency table groups the data in intervals. Data is grouped into intervals by first deciding the number of intervals, then dividing the range of data by the number of intervals to get the range for each interval.

EXAMPLE 2

The data below was collected from a survey asking 20 high school students to estimate the number of hours they spend on the internet each week. Construct a frequency table from the data.

11, 5, 8, 0, 12, 7, 9, 10, 22, 15, 13, 16, 5, 20, 8, 12, 16, 7, 25, 18

SOLUTION The solution will consist of 6 steps. In step 1 we find the range. In step 2 we determine the length of the intervals. In step 3, we find the starting points of the intervals, and in step 4 we find the ending points of the intervals. In step 5 we tally the data and compute the frequencies. Finally, in step 6 we compute the relative frequencies.

Step 1: By examining the data, we see that the lowest value is 0 and the highest value is 25. Thus, the range is $25 - 0 = 25$.

Step 2: We decide to use 6 intervals. (In the Problem Set you will be told how many intervals to use.) We divide the range, 25, by 6 to get $4.1\bar{6}$. We round this up to the next whole number to get 5. Each interval will be 5 units.

Step 3: We start with the lowest value, 0, and add 5 each time to get the starting point of the next interval. The intervals will start at 0, $0 + 5 = 5$, $5 + 5 = 10$, $10 + 5 = 15$, $15 + 5 = 20$, and $20 + 5 = 25$. We also compute $25 + 5 = 30$ to use in the next step.

Step 4: We subtract 1 from the starting points to get the end points: $5 - 1 = 4$, $10 - 1 = 9$, $15 - 1 = 14$, $20 - 1 = 19$, $25 - 1 = 24$, and $30 - 1 = 29$. The intervals are 0 to 4, 5 to 9, 10 to 14, 15 to 19, 20 to 24, and 25 to 29. We place these in the first column of our frequency table.

Step 5: For the next column in our frequency table, we make a tally of the number of data points in each interval. Then, for the third column, we count the tallies to compute the frequencies.

Step 6: The relative frequencies, shown in the fourth column of our table, are found by dividing the frequencies by the total number of pieces of data collected, in this case 20, and expressing the result as a decimal.

Interval	Tally	Frequency	Relative Freq.
0–4		1	$\frac{1}{20} = 0.05$
5–9		7	$\frac{7}{20} = 0.35$
10–14		5	$\frac{5}{20} = 0.25$
15–19		4	$\frac{4}{20} = 0.20$
20–24		2	$\frac{2}{20} = 0.10$
25–29		1	$\frac{1}{20} = 0.05$


2. Construct a frequency table from the data in Example 2, but using 5 intervals.

Answer

2. See solutions section.

C Histograms

Histograms offer a graphical view of data which, like with frequency tables, is grouped in intervals. Although a histogram looks like a bar chart, it is not the same. Histograms illustrate data that has been put into intervals or bins. These bins can be different widths, and therefore the areas of the rectangles in a histogram are used to measure the frequency of the data rather than the heights of the bars as in a bar chart.



his · to · gram *noun* a representation of a frequency distribution by means of rectangles whose widths represent class intervals and whose areas are proportional to the corresponding frequencies

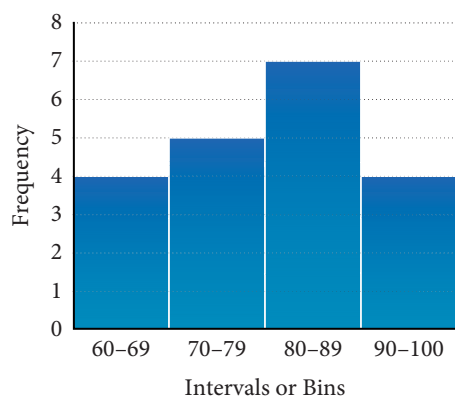
EXAMPLE 3

The data here show the grades for a class of 20 students on a recent algebra test. Construct a histogram from the data.

94, 65, 83, 82, 72, 98, 68, 79, 86, 62,
75, 83, 85, 92, 77, 61, 88, 79, 84, 92

SOLUTION Because these are test scores, it makes sense to have the bins cover the same intervals as a grading scale. Next, we make a frequency table without the last column to organize the data. Then, we draw the histogram with the bins along the horizontal axis and the frequencies along the vertical axis.

Interval	Frequency
60–69	4
70–79	5
80–89	7
90–100	4



D Quartiles

Quartiles are the data points that are used to sort a set of data into fourths, or quarters, hence the name quartile. The second quartile, or Q_2 , is the median of the data. The first quartile, or Q_1 , is the median of the data below the second quartile, and the third quartile, or Q_3 , is the midpoint of all the data above the median.

3. Use 4 intervals to create a histogram from the following data.

9, 16, 3, 27, 36, 21, 11, 10, 17, 8,
29, 30, 20, 28, 12, 23

Answer

3. See solutions section.

4. Find the first, second, and third quartiles for the data in Practice Problem 3.

Rule How to find the quartiles of a data set

Step 1: Put the set in order from least to greatest.

Step 2: Find the median of the data set. This is Q_2 .

Step 3: Find the median of the values less than (not including) the second quartile. This is Q_1 .

Step 4: Find the median of the values greater than (not including) the second quartile. This is Q_3 .

EXAMPLE 4

A math class with 18 students had the grades shown below on their first test. Find the first, second, and third quartiles.

77 87 100 65 79 87 79 85 87
95 56 87 56 75 79 93 97 92

SOLUTION We find the quartiles by using steps 1 through 4.

Step 1: We rewrite the set in order from least to greatest;

56, 56, 65, 75, 77, 79, 79, 79, 85, 87, 87, 87, 87, 92, 93, 95, 97, 100

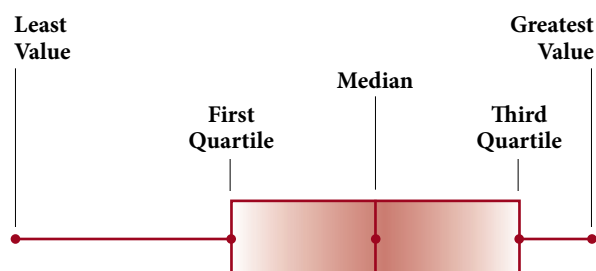
Step 2: Median $\frac{85 + 87}{2} = 86$ $Q_2 = 86$

Step 3: There are nine scores below the median score ranging from 56 to 85, with 77 as the median. $Q_1 = 77$.

Step 4: There are nine scores greater the median score ranging from 87 to 100, with 92 as the median. $Q_3 = 92$

E Box-and-Whisker Plots

Box-and-whisker plots are a visual representation of the three quartiles along with the two values, the least and the greatest, we used to find the range.



These five values are sometimes referred to as the *five-number summary*. In a box-and-whisker plot, the whiskers are the end points and the box is found from the quartiles.

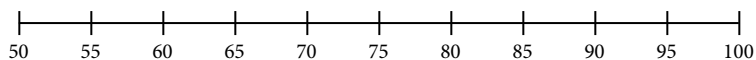
Answer

4. 10.5, 18.5, 27.5

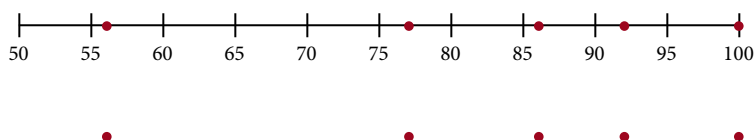
EXAMPLE 5

Construct a box-and-whisker plot from the data in Example 4.

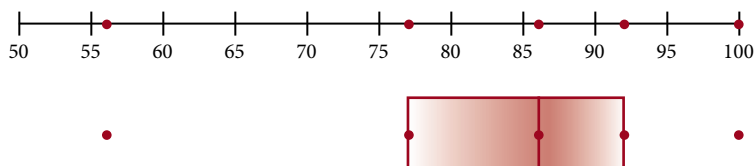
SOLUTION To construct a box-and-whisker plot, we start with a number line which covers the range of the data.



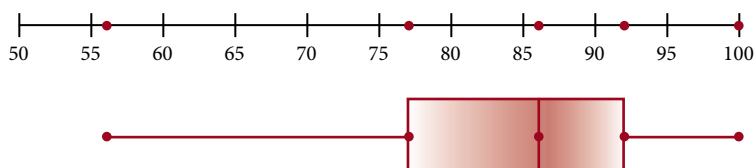
From Example 4, our five-number summary is 56, 77, 86, 92, 100. We use these points on the number line as markers for our box-and-whisker plot.



We draw vertical lines at the first and third quartiles and use these to draw a box. We draw another vertical line for the median (second quartile).



The whiskers are made by drawing horizontal lines from the box to the smallest and largest values.

**Getting Ready for Class**

After reading through the preceding section, respond in your own words and in complete sentences.

1. When is a stem-and-leaf diagram a useful tool for displaying data?
2. What do we call a data point that is not close to other data points?
3. How are frequency tables and histograms related?
4. What is the relationship between quartiles and a box-and-whisker plot?

5. Construct a box-and-whisker plot from the data in Practice Problem 3.

Answer

5. See solutions section.

Problem Set 6.2

A Solve. [Example 1]

- 1. Test Scores** Create a stem-and-leaf diagram with the following scores students received on the ACT.

32 24 19 30 27 22 30
31 29 18 20 34 26

Stem	Leaf

- 2. Relay Race** At a 24-hour relay, these were the number of laps around a several-mile course each team completed. Create a stem-and-leaf diagram from the data.

29 34 74 55 36 51 62 98 56 67 69
73 57 78 62 82 63 84 76 88 61 99

Stem	Leaf

- 3. Art Show** The college art club hosted an art show for a fundraiser. The following are the prices different works of art sold for. Create a stem-and-leaf diagram from the data.

16 34 85 67 84 52 94 35 72 58 46
98 83 76 51 27 29 48 73 51 35 86

Stem	Leaf

- 4. Auction** A local club held an auction. The final bids on several equally valued prizes were as follows. Create a stem-and-leaf diagram.

35 64 58 63 71 68 52
39 46 63 43 59 53 65

Stem	Leaf

- 5. Temperature** The following are the average daytime temperatures for the month of December for a coastal town. Use the data to create a stem-and-leaf diagram.

60 61 58 54 52 47 53 54 63 53 47
59 41 40 39 35 58 43 48 60 56 52
50 45 64 46 40 42 34 43 36

Stem	Leaf

- 6. Art Classes** A community center starts offering art classes. These are the ages of the students in the art class. Use this data to create a stem-and-leaf diagram.

16 34 14 32 57 65 53 61 52
58 64 38 46 35 66 73 58 64
56 53 51 43 62 43 36 24

Stem	Leaf

B [Example 2]

7. **Basketball** The college basketball team just finished their season. These were their game scores. Use the data to make a frequency table with five intervals.

76 58 82 47 73 76 81 93 68 76
72 84 64 59 67 74 80 69 84 76

Interval	Tally	Frequency	Relative Freq.

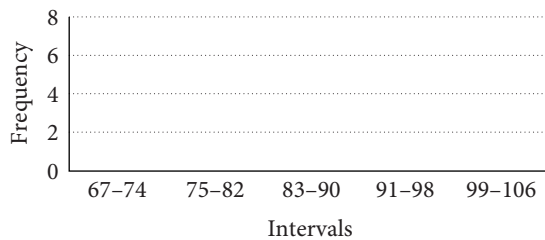
8. **Incomes** The data shows the annual incomes in thousands of a group of engineers. Use the data to create a frequency table. Use five intervals.

63 75 63 58 74 72 77 54
67 62 58 59 66 68 76

Interval	Tally	Frequency	Relative Freq.

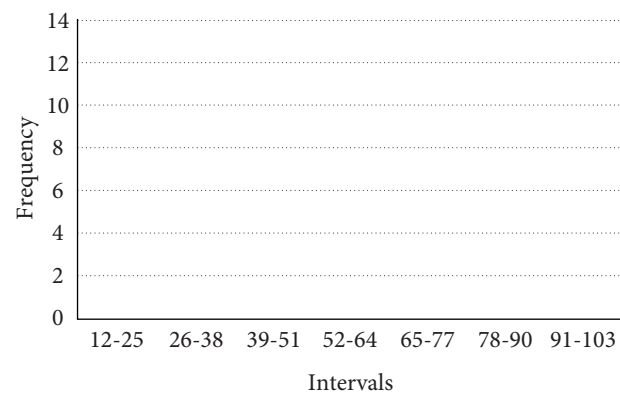
9. **Golf Scores** The local golf course hosted a fundraiser tournament to raise money for a local school. The data set is the final scores of each of the participants. Use the data to create a histogram with five intervals.

69 72 76 85 67 73 78 86 81 96 103
87 96 84 100 79 84 72 79 97 84 86



10. **Oil Prices** The data shows the price per barrel of oil rounded to the nearest dollar over the last 20 years. Use the data to construct a histogram with seven intervals.

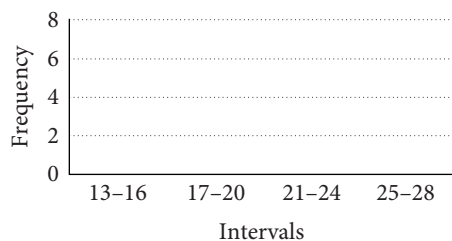
18 23 20 19 17 16 17 20 19 12
17 27 23 22 28 38 50 58 64 98

**C** [Example 3]

11. **Candy** The frequency table shows the number of M&M's® in a bag of peanut M&M's®. Use the table to work the following problems.

Interval	Frequency
13-16	4
17-20	6
21-24	7
25-28	5

- a. Create a histogram from the frequency table.



- b. What is the relative frequency of bags containing 17 to 20 M&M's®?
c. What is the relative frequency of bags containing 21 to 28 M&M's®?

12. **Test Scores** The following stem-and-leaf diagram shows test scores. Use the diagram to answer the questions.

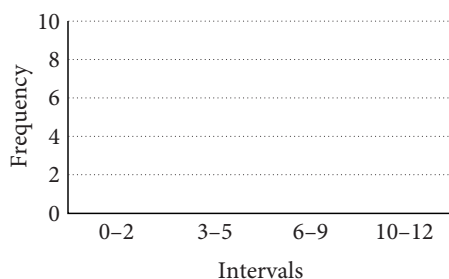
Stem	Leaf
1	9
2	
3	
4	3, 8
5	
6	
7	8, 6, 4, 2
8	3, 4, 6, 6, 7, 8
9	1, 7, 6, 9, 3

- a. What was the lowest test score?
b. What was the highest test score?
c. What was the median test score?
d. What is the range of the scores?

- 13. Watching TV** The frequency table shows the hours per week that each person in a class watches television. Use the table to work the following problems.

Interval	Frequency
0-2	2
3-5	10
6-9	7
10-12	2

- a. Create a histogram from the frequency table.



- b. How many students are in the class?
- c. What is the relative frequency of students that watch 3 to 5 hours of television?
- d. What is the relative frequency of students that watch 6 hours of television or more?

- 15. Graduate Students** The stem-and-leaf diagram shows the age of students in a graduate class. Use the diagram to answer the following questions.

Stem	Leaf
2	2, 6, 7, 8
3	3, 4, 6, 7, 9
4	1, 3, 5
5	1

- a. What is the range of their ages?
- b. What is the median of their ages?

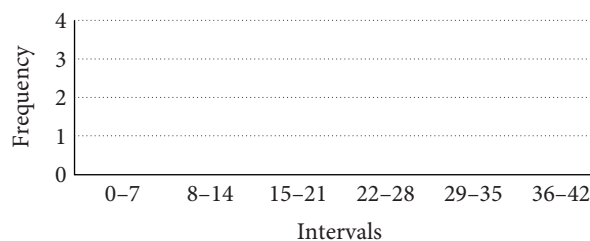
- 14. Midterm Scores** The stem-and-leaf diagram shows the scores for a midterm. Use the diagram to answer the following questions.

Stem	Leaf
1	6
2	3
3	3, 7
4	
5	
6	
7	2, 6, 3, 6
8	5, 4, 3, 6, 9
9	4, 8, 9

- a. What is the range of the test scores?
- b. What is the mode?
- c. What is the median of the test scores?

- 16. Football Scores** The stem-and-leaf diagram shows the football scores for a school's football team. Use the stem-and-leaf diagram to create a six-interval histogram.

Stem	Leaf
0	7
1	0, 9
2	1, 8, 6
3	3, 1, 5, 4
4	2, 0



- D** Name the first, second, and third quartiles of each data set. [Example 4]

17. 16, 24, 36, 20, 19, 32, 18, 23, 26

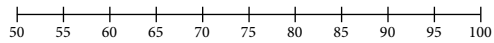
18. 10, 16, 24, 23, 27, 30, 21

19. 1.3, 4.5, 0.9, 3.6, 2.8, 1.9

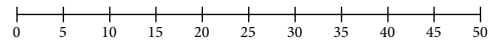
20. 49, 39, 46, 52, 61, 39, 51, 42

E Use the data to create a box-and-whisker plot. [Example 5]

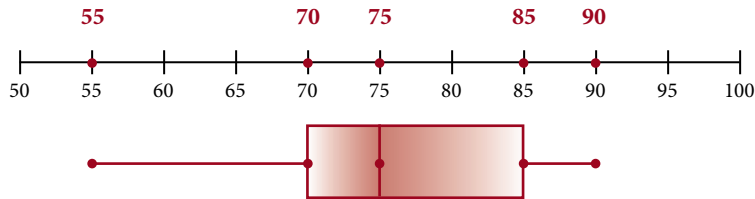
21. 78, 64, 91, 83, 64, 85



22. 34, 25, 16, 41, 21, 36, 27, 39



Given the box-and-whisker plot, answer the following questions.



23. Write an inequality that shows where half the data numbers lie.

24. Write an inequality that shows where the top fourth of the data lies.

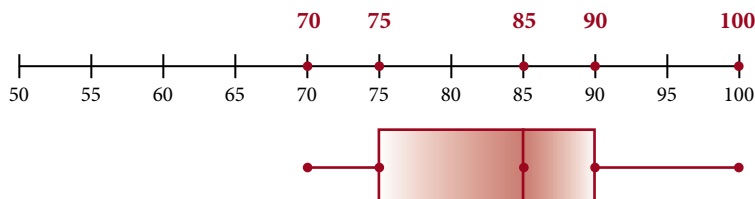
25. One quarter of the data numbers are less than what number?

26. Three quarters of the data numbers are less than what number?

27. Half of the data numbers are greater than what number?

28. One quarter of the data numbers are greater than what number?

Given the box-and-whisker plot, answer the following questions.



29. Write an inequality that shows where half the data numbers lie.

30. Write an inequality that shows where the top fourth of the data lies.

31. One quarter of the data numbers are less than what number?

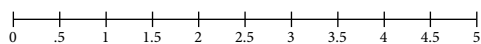
32. Three quarters of the data numbers are less than what number?

33. Half of the data numbers are greater than what number?

34. One quarter of the data numbers are greater than what number?

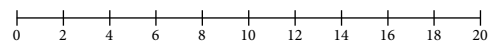
35. **Quiz Scores** The following data are the class scores on a 5-point quiz. Use the data to build a box-and-whisker plot.

5, 4.5, 3.5, 3, 2, 5, 4.5, 4, 1.5, 1, 5, 4.5, 4.5, 3.5, 3, 3.5, 2.5, 1, 1.5, 2, 2, 5



36. **Shoe Sizes** The following data are the sizes of shoes that each person in class wears. Use the data to build a box-and-whisker plot.

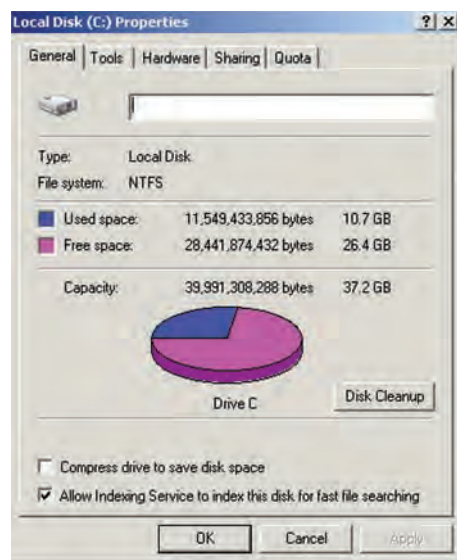
5.5, 6, 12, 6.5, 10, 10.5, 7.5, 7.5, 13.5, 5, 10, 6, 8.5, 13, 6.5, 11.5, 9.5, 9, 8.5, 11, 7, 8, 5.5, 9, 7.5, 8.5, 10, 6.5, 7, 5.5, 5



Objectives

- A** Read a pie chart.
B Construct a pie chart.

Pie charts are another way in which to visualize numerical information. They lend themselves well to information that adds up to 100% and are very common in the world around us. In fact, it is hard to pick up a newspaper or magazine without seeing a pie chart. As the diagram below shows, even a computer will represent the amount of free space and used space on one of its disks by using a pie chart.

**A** Reading a Pie Chart

Some of this introductory material will be review. We want to begin our study of pie charts by reading information from pie charts.

EXAMPLE 1

The pie chart shows the class rank of the members of a drama club. Use the pie chart to answer the following questions.

- Find the total membership of the club.
- Find the ratio of freshmen to total number of members.
- Find the ratio of seniors to juniors.

SOLUTION

- a.** To find the total membership in the club, we add the numbers in all sections of the pie chart.

$$9 + 11 + 15 + 10 = 45 \text{ members}$$

- b.** The ratio of freshmen to total members is

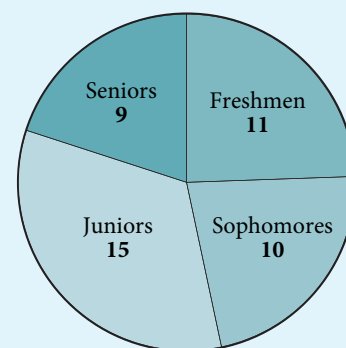
$$\frac{\text{number of freshmen}}{\text{total number of members}} = \frac{11}{45}$$

- c.** The ratio of seniors to juniors is

$$\frac{\text{number of seniors}}{\text{number of juniors}} = \frac{9}{15} = \frac{3}{5}$$

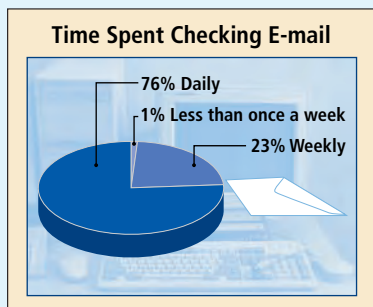
PRACTICE PROBLEMS

1. Work Example 1 again if one more junior joins the club.

**Answer**

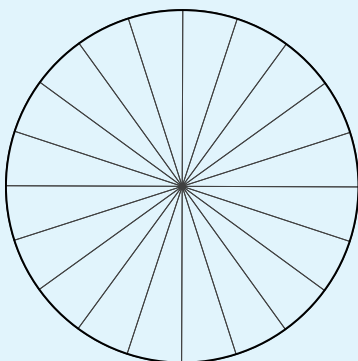
1. **a.** 46 **b.** $\frac{11}{46}$ **c.** $\frac{9}{16}$

2. Work Example 2 again if 600 people responded to the survey.



Source: UCLA Center for Communication Policy

3. Construct a pie chart that shows the used space and free space on a 256-MB flash memory stick that contains 102 MB of data.



PIE CHART TEMPLATE Each slice is 5% of the area of the circle.

Answer

2. a. 456 people b. 144 people

EXAMPLE 2

The pie chart shows the results of a survey on how often people check their e-mail. Use the pie chart to answer the following questions. Suppose 500 people participated in the survey.

- a. How many people in the survey check their e-mail daily?
b. How many people check their e-mail once a week or less often?

SOLUTION

- a. To find out how many people in the survey check their e-mail daily, we need to find 76% of 500.

$$0.76(500) = 380 \text{ of the people surveyed check their e-mail daily.}$$

- b. The people checking their e-mail weekly or less often account for $23\% + 1\% = 24\%$. To find out how many of the 500 people are in this category, we must find 24% of 500.

$$0.24(500) = 120 \text{ of the people surveyed check their e-mail weekly or less often.}$$

B Constructing Pie Charts

EXAMPLE 3

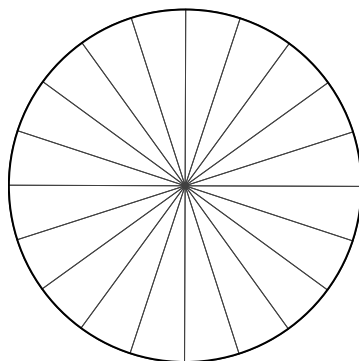
Construct a pie chart that shows the free space and used space for a 256-MB flash memory stick that contains 77 MB of data.



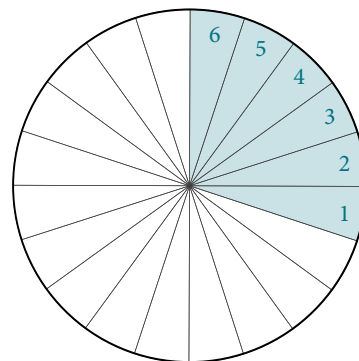
SOLUTION 1 Using a Template As mentioned previously, pie charts are constructed with percents. Therefore we must first convert data to percents. To find the percent of used space, we divide the amount of used space by the amount of total space. We have

$$\frac{77}{256} \approx 0.30078 \text{ which is } 30\% \text{ to the nearest percent}$$

The area of each section of the template on the lower left is 5% of the area of the whole circle. If we shade 6 sections of the template, we will have shaded 30% of the area of the whole circle.



PIE CHART TEMPLATE Each slice is 5% of the area of the circle.



CREATING A PIE CHART To shade 30% of the circle, we shade 6 sections of the template.

The shaded area represents 30%, which is the amount of used disk space. The rest of the circle must represent the 70% free space on the disk. Shading each area with a different color and labeling each, we have our pie chart.

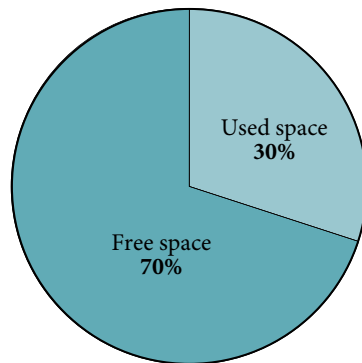


FIGURE 1

SOLUTION 2 Using a Protractor Since a pie chart is a circle, and a circle contains 360° , we must now convert our data to degrees. We do this by multiplying our percents in decimal form by 360. We have

$$(0.30)360^\circ = 108^\circ$$

Now we place a protractor on top of a circle. First we draw a line from the center of the circle to 0° as shown in Figure 2. Now we measure and mark 108° from our starting point, as shown in Figure 3.

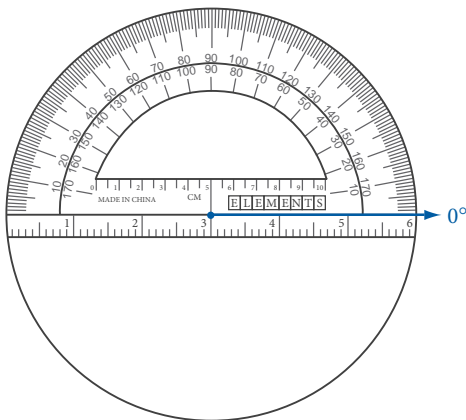


FIGURE 2

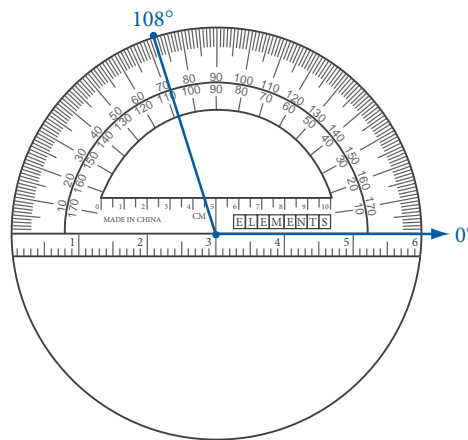


FIGURE 3

Finally we draw a line from the center of the circle to this mark, as shown in Figure 4. Then we shade and label the two regions as shown in Figure 5.

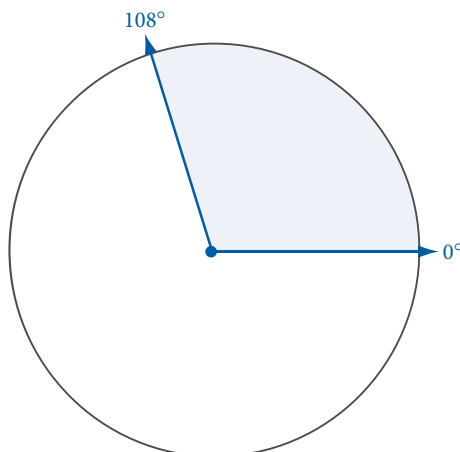


FIGURE 4

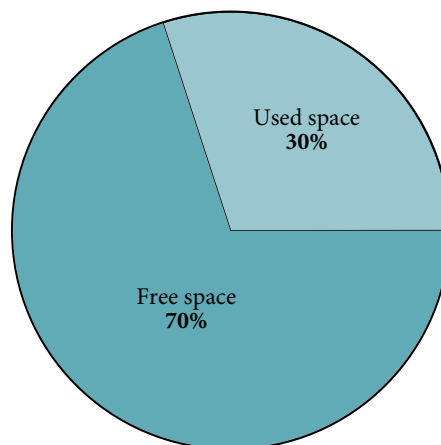


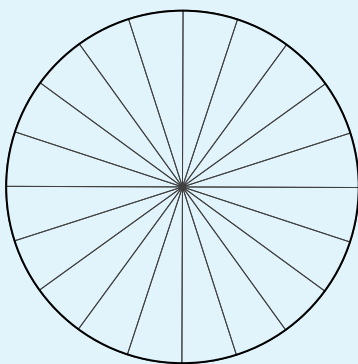
FIGURE 5

Answer

3. See solutions section.

4. The table below shows how the expenses for a paperback novel are divided. Use the information in the table to construct a pie chart.

Expense	Percent of Price
Bookstore	45%
Publisher	50%
Author	5%



PIE CHART TEMPLATE Each slice is 5% of the area of the circle.

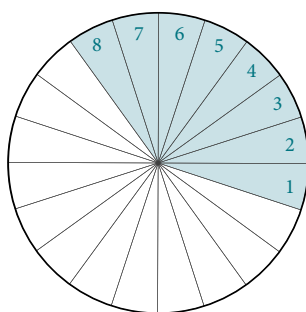
EXAMPLE 4

Construct a pie chart from the information in the following table.

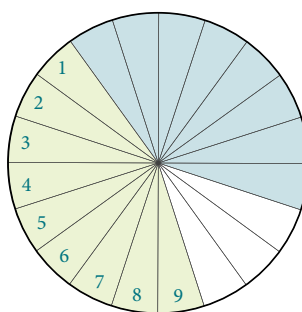
WHERE DOES YOUR TEXTBOOK MONEY GO?

Expense	Percent of Price
Bookstore	40%
Publisher	45%
Author	15%

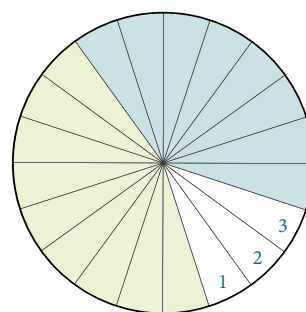
SOLUTION Since our template uses sections that each represent 5% of the circle, we shade 8 sections, representing 40%, for the bookstore's share. Then we shade 9 sections, representing 45% for the publisher's share. We should have 3 sections remaining, which represent the 15% share going to the author.



CREATING A PIE CHART

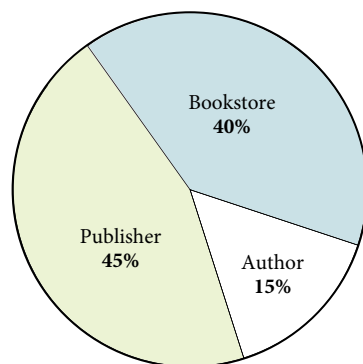


To shade 45% of the circle, we shade 9 sections of the template.



We are left with 3 sections. This represents the 15% share going to the author.

We label each section with the appropriate information, and our pie chart is complete.

**Answer**

4. See solutions section.

Getting Ready for Class

After reading through the preceding section, respond in your own words and in complete sentences.

1. If a circle is divided into 20 equal slices, then each of the slices is what percent of the total area enclosed by the circle?
2. If a 250 MB computer drive contains 75 MB of data, then how much of the drive is free space?
3. If a 250 MB computer drive contains 75 MB of data, then what percent of the drive contains data?
4. Explain how you would construct a pie chart of monthly expenses for a person who spends \$700 on rent, \$200 on food, and \$100 on entertainment.

Problem Set 6.3

A [Examples 1, 2]

1. High School Seniors with Jobs The pie chart shows the results of surveying 200 high school seniors to find out how many hours they worked per week at a job.

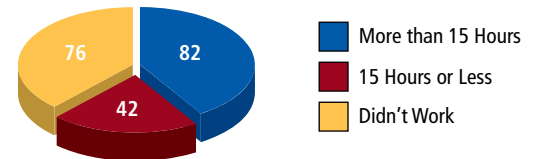
a. Find the ratio of students who work more than 15 hours a week to total students.

b. Find the ratio of students who don't have a job to students who work more than 15 hours a week.

c. Find the ratio of students with jobs to total students.

d. Find the ratio of students with jobs to students without jobs.

High School Seniors with Jobs



2. Favorite Dip Flavor The pie chart shows the results of a survey on favorite dip flavor.

a. What is the most preferred dip flavor?

b. Which dip flavor is preferred second most?

c. Which dip flavor is least preferred?

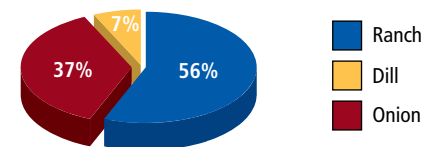
d. What percentage of people preferred ranch?

e. What percentage of people preferred onion or dill?

f. If 50 people responded to the survey, how many people preferred ranch?

g. If 50 people responded to the survey, how many people preferred dill? (Round your answer to the nearest whole number.)

Favorite Dip Flavor



3. Food Dropped on the Floor The pie chart shows the results of a survey about eating food that has been dropped on the floor. Participants were asked whether they eat food that has been on the floor for 3, 5, or 10 seconds.

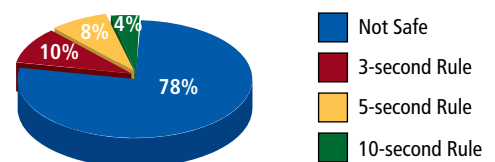
a. What percentage of people say it is not safe to eat food dropped on the floor?

b. What percentage of people believe the "three-second rule"?

c. What percentage of people will eat food that stays on the floor for five seconds or less?

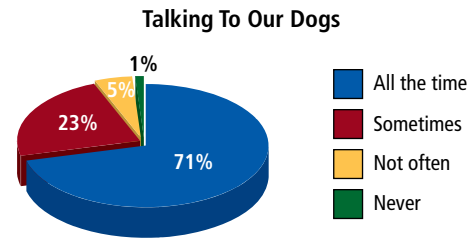
d. What percentage of people will eat food that stays on the floor for ten seconds or less?

Food Dropped On the Floor



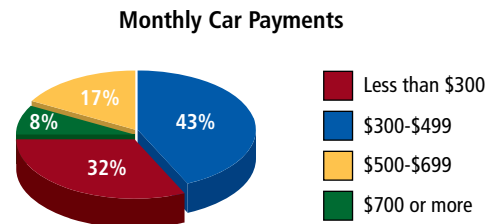
4. **Talking to Our Dogs** A survey showed that most dog owners talk to their dogs.

- What percentage of dog owners say they never talk to their dogs?
- What percentage of dog owners say they talk to their dogs all the time?
- What percentage of dog owners say they talk to their dogs sometimes or not often?



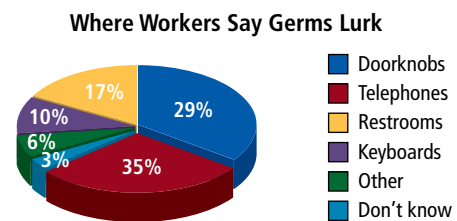
5. **Monthly Car Payments** Suppose 3,000 people responded to a survey on car loan payments, the results of which are shown in the pie chart. Find the number of people whose monthly payments would be the following:

- \$700 or more
- Less than \$300
- \$500 or more
- \$300 to \$699



6. **Where Workers Say Germs Lurk** A survey asked workers where they thought the most germ-contaminated spot in the workplace was. Suppose the survey took place at a large company with 4,200 employees. Use the pie chart to determine the number of employees who would vote for each of the following as the most germ-contaminated areas.

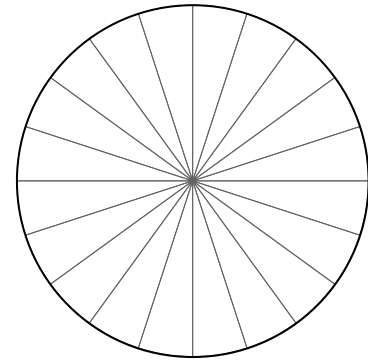
- Keyboards
- Doorknobs
- Restrooms or other
- Telephones or doorknobs



B [Examples 3, 4]

7. **Grade Distribution** Student scores, for a class of 20, on a recent math test are shown in the table below. Construct a pie chart that shows the number of A's, B's, and C's earned on the test. Use the template provided here or use a protractor.

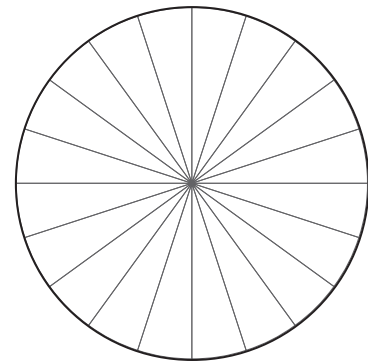
GRADE DISTRIBUTION	
Grade	Number
A	5
B	8
C	7
Total	20



PIE CHART TEMPLATE Each slice is 5% of the area of the circle.

8. **Building Sizes** The Lean and Mean Gym Company recently ran a promotion for their four locations in the county. The table shows the locations along with the amount of square feet at each location. Use the information in the table to construct a pie chart, using the template provided here or using a protractor.

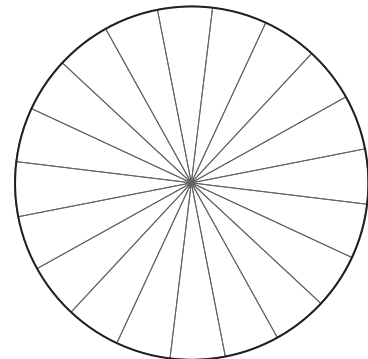
GYM LOCATION AND SIZE	
Location	Square Feet
Downtown	35,000
Uptown	85,000
Lakeside	25,000
Mall	75,000
Total	220,000



PIE CHART TEMPLATE Each slice is 5% of the area of the circle.

9. **Room Sizes** Scott and Amy are building their dream house. The size of the house will be 2,400 square feet. The table below shows the size of each room. Use the information in the table to construct a pie chart, using the template provided here or using a protractor.

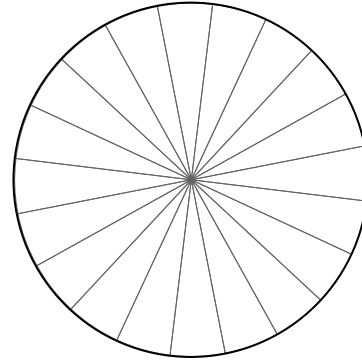
ROOM SIZES	
Room	Square Feet
Kitchen	400
Dining room	310
Bedrooms	890
Living room	600
Bathrooms	200
Total	2,400



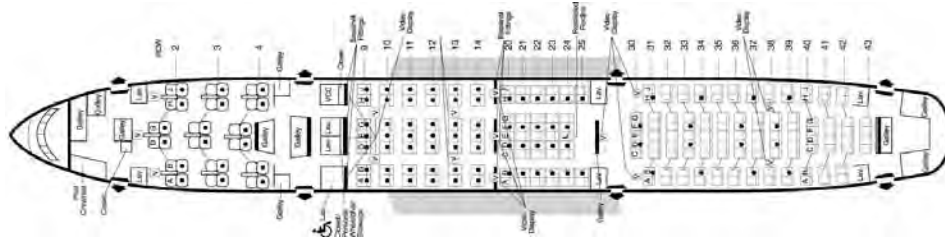
PIE CHART TEMPLATE Each slice is 5% of the area of the circle.

10. **Airline Seating** The table below gives the number of seats in each of the three classes of seating on an American Airlines Boeing 777 airliner. Create a pie chart from the information in the table.

AIRLINE SEATING	
Seating Class	Number Of Seats
First	18
Business	42
Coach	163



PIE CHART TEMPLATE Each slice is 5% of the area of the circle.



Maintaining Your Skills

Multiply.

11. $8 \cdot \frac{1}{3}$

12. $9 \cdot \frac{1}{3}$

13. $25 \cdot \frac{1}{1,000}$

14. $25 \cdot \frac{1}{100}$

15. $36.5 \cdot \frac{1}{100} \cdot 10$

16. $36.5 \cdot \frac{1}{1,000} \cdot 100$

17. $248 \cdot \frac{1}{10} \cdot \frac{1}{10}$

18. $969 \cdot \frac{1}{10} \cdot \frac{1}{10}$

19. $48 \cdot \frac{1}{12} \cdot \frac{1}{3}$

20. $56 \cdot \frac{1}{12} \cdot \frac{1}{2}$

You know that your chances of winning the Lottery jackpot are slim. In fact, if you were to assign a probability to winning the lottery you would say it was close to 0. You have an intuitive sense of probabilities already. In this section we want to extend what you know about probabilities and lay the foundation for a systematic study of the topic.



A Sample Space for an Experiment

Definition

When working with probabilities, an **experiment** is an activity for which the outcome is unknown. The **sample space** for an experiment is the set of all possible outcomes. An **event** is a subset of the sample space.

EXAMPLE 1

You toss a coin in the air and observe the side facing up when it lands. Give the sample space.

SOLUTION The sample space is the set of all possible outcomes.

Experiment:

Toss a coin and observe the side facing up when it comes to rest.



Outcomes:

Heads (H) or tails (T)

Sample Space = {H, T}

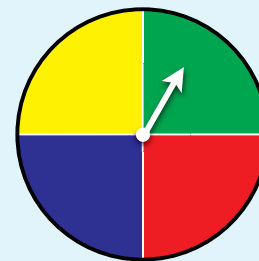


Objectives

- A** Find the sample space for an experiment.
- B** Compute theoretical probabilities when the outcomes are equally likely.
- C** Compute observed probabilities

PRACTICE PROBLEMS

- What is the sample space of spinning the spinner below?



B Equally Likely Outcomes

When each outcome of an experiment is just as likely to occur as any other outcome, then we say we are working with *equally likely outcomes*. In the coin-toss experiment above, each outcome, heads and tails, is just as likely to occur as the other, so they are equally likely outcomes. Likewise, if we roll a six-sided die and observe the number showing on the top side when it comes to rest, the possible outcomes (the numbers 1 through 6) are equally likely outcomes.

Answer

- $S = \{R, G, B, Y\}$

2. What is the sample space of rolling a 12-sided die?

EXAMPLE 2

You roll a regular six-sided die and observe the number showing on the top side of the die when it comes to rest. Give the sample space.


SOLUTION The sample space is the set of all possible outcomes.

Experiment:

Roll a six-sided die and observe the number facing up when it comes to rest.

Outcomes:

Sample Space = $S = \{1, 2, 3, 4, 5, 6\}$.



Theoretical Probabilities

We can associate a number with the likelihood that an event will occur. Intuitively we know that heads is just as likely to occur as tails in the coin-toss experiment. That is, if we repeat this experiment many times, we will expect to see a head $\frac{1}{2}$ of the time and a tail $\frac{1}{2}$ of the time. We use an uppercase P to represent probability. Here are the probabilities associated with the coin-toss experiment:

$$P(H) = \frac{1}{2} \text{ and } P(T) = \frac{1}{2}$$

Definition

For an experiment with equally likely outcomes, the probability that event A occurs is the number of outcomes in A divided by the total number of outcomes. In symbols:

$$P(A) = \frac{\text{Number of outcomes in } A}{\text{Total number of outcomes}}$$

EXAMPLE 3

You roll a die and observe the number showing on the top side when the die comes to rest. What is the probability of observing

3. You roll a 12-sided die. What is the probability of observing
- a number greater than 7?
 - an odd number?
 - a multiple of 3?

- a 4?
- an even number?
- a number other than 4?

SOLUTION The sample space is $S = \{1, 2, 3, 4, 5, 6\}$.

- a. There is only one outcome that is a 4, so

$$P(4) = \frac{\text{Number of 4's}}{\text{Total number of outcomes}} = \frac{1}{6}$$

- b. Event A is rolling an even number, so $A = \{2, 4, 6\}$.

$$P(A) = \frac{\text{Number of even numbers}}{\text{Total number of outcomes}} = \frac{3}{6} = \frac{1}{2}$$

- c. Of the six outcomes in the sample space, five are not 4.

$$P(\text{not } 4) = \frac{\text{Number of non 4's}}{\text{Total number of outcomes}} = \frac{5}{6}$$

Answer

2. $S = \{1, 2, 3, 4, 5, 6, 7, 8, 9, 10, 11, 12\}$

Rule Probability Rule 1

If A is an event, then the probability that A will occur is denoted $P(A)$ and will always satisfy the condition

$$0 \leq P(A) \leq 1$$

If $P(A) = 0$, then A will never occur. If $P(A) = 1$, then A is certain to occur. Events with probabilities closer to 1 are more likely to occur than events with probabilities closer to 0. The closer a probability is to 1, the more likely it is to occur. Likewise, the closer a probability is to 0, the less likely it is to occur.

EXAMPLE 4

A box contains five iPods, three of which are blue and two of which are red.



Without looking, you reach in the box and take out an iPod. What is the probability that

- a. it is blue? b. it is red? c. it is black?

SOLUTION

- a. $P(\text{blue}) = \frac{\text{Number of blue iPods}}{\text{Total number of iPods}} = \frac{3}{5}$
 b. $P(\text{red}) = \frac{\text{Number of red iPods}}{\text{Total number of iPods}} = \frac{2}{5}$
 c. $P(\text{black}) = \frac{\text{Number of black iPods}}{\text{Total number of iPods}} = \frac{0}{5} = 0$

EXAMPLE 5

Two dice are rolled at the same time and the numbers showing are observed. Find the following.

- a. The sample space
 b. $P(\text{sum} = 7)$
 c. $P(\text{sum} = 12)$
 d. $P(\text{the sum is an even number})$
 e. $P(\text{both dice show the same number})$

SOLUTION

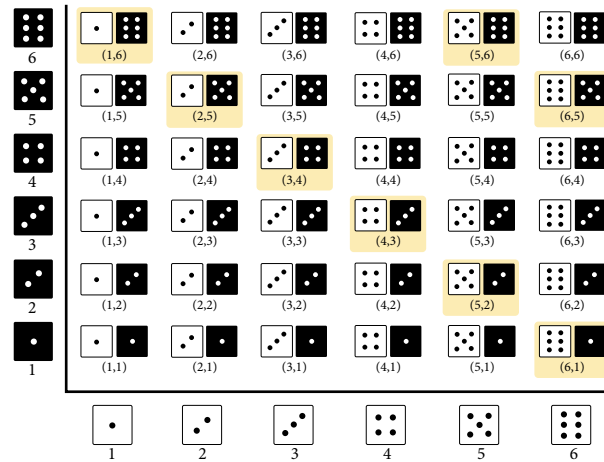
- a. Assuming the first die is white and the second die is black, we can draw a diagram of the sample space. Notice how we can list the outcomes in the diagram by using ordered pairs, where the first number is the outcome of the white die, and the second number is the outcome of the black die.

4. If another blue iPod is added to the box in Example 4, what is the new probability that the iPod you choose is
- blue?
 - red?
 - blue or red?

5. Two dice are rolled as in Example 5. Find,
- $P(\text{sum} \geq 7)$.
 - $P(\text{sum} = 9)$.
 - $P(\text{both show an even number})$.

Answers

3. a. $\frac{5}{12}$ b. $\frac{1}{2}$ c. $\frac{1}{3}$
 4. a. $\frac{2}{3}$ b. $\frac{1}{3}$ c. 1



- b. We can obtain a sum of 7 in six different ways: (1, 6), (6, 1), (2, 5), (5, 2), (3, 4), (4, 3).

$$P(A) = \frac{\text{Number of ways to get a sum of 7}}{\text{Total number of outcomes}} = \frac{6}{36} = \frac{1}{6}$$

- c. We can obtain a sum of 12 in only one way: (6, 6).

$$P(A) = \frac{\text{Number of ways to get a sum of 12}}{\text{Total number of outcomes}} = \frac{1}{36}$$

- d. We go to the table and count the numbers of ways an even sum can occur.

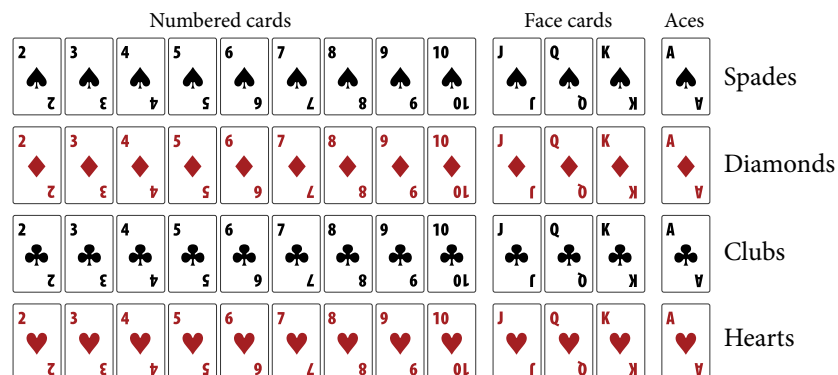
$$P(A) = \frac{\text{Number of ways to get an even sum}}{\text{Total number of outcomes}} = \frac{18}{36} = \frac{1}{2}$$

- e. Both dice show the same number (i.e., doubles are rolled) for the outcomes (1, 1), (2, 2), (3, 3), (4, 4), (5, 5), and (6, 6).

$$P(A) = \frac{\text{Number of ways to roll doubles}}{\text{Total number of outcomes}} = \frac{6}{36} = \frac{1}{6}$$

Playing Cards

A regular deck of cards contains 52 cards in four suits: hearts (♥), clubs (♣), diamonds (♦), and spades (♠). The numbered cards are numbered 2 through 10. The face cards are jacks, queens, and kings. There are four aces.



Answer

5. a. $\frac{5}{12}$ b. $\frac{1}{9}$ c. $\frac{1}{4}$

EXAMPLE 6

One card is drawn from a regular deck of 52 cards. Find the probabilities associated with the following events.

- The card is an ace.
- The card is a face card.
- The card is a heart.
- The card is not an ace.

SOLUTION

- a. Since there are four aces in the deck we have

$$P(\text{ace}) = \frac{\text{Number of aces}}{\text{Total number of cards}} = \frac{4}{52} = \frac{1}{13}$$

- b. Since there are 12 face cards in the deck we have

$$P(\text{face card}) = \frac{\text{Number of face cards}}{\text{Total number of cards}} = \frac{12}{52} = \frac{3}{13}$$

- c. Since there are 13 hearts in the deck we have

$$P(\text{heart}) = \frac{\text{Number of hearts}}{\text{Total number of cards}} = \frac{13}{52} = \frac{1}{4}$$

- d. Since there are four aces in the deck, there must be $52 - 4 = 48$ cards that are not aces.

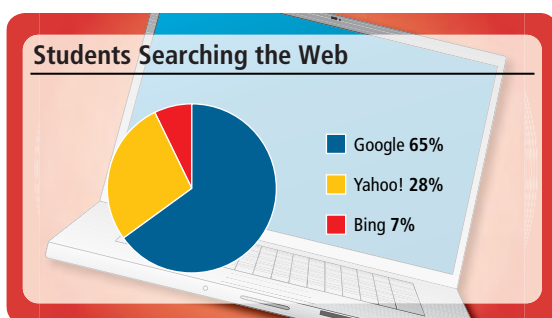
$$P(\text{not ace}) = \frac{\text{Number of non-aces}}{\text{Total number of cards}} = \frac{48}{52} = \frac{12}{13}$$

C Observed Probabilities


The probabilities we have discussed above are all theoretical probabilities. *Observed probabilities* are taken from actual data. For example, if you toss a coin 100 times, would you expect to get 50 heads and 50 tails? Probably not. If you repeated the experiment over and over again, you would get an overall probability that was close to $\frac{1}{2}$ for either heads or tails. But for any experiment of tossing a coin 100 times, you wouldn't expect exactly 50 heads and 50 tails.

EXAMPLE 7

The pie chart shows the percent of college students who prefer Google, Yahoo!, or Bing, to search the Internet. According to these results, if a college student was chosen at random, answer the questions below.



- What is the probability of using Google for Internet searches?
- What is the probability of using Yahoo! or Google for Internet searches?
- What is the probability of not using Google for Internet searches?



- If one card is drawn from a deck of 52 cards, find the probability that the card is
 - black.
 - an even number.
 - a king or an ace.

- Using the chart from Example 7, what is the probability of
 - using Bing for Internet searches?
 - using Bing or Yahoo! for Internet searches?
 - not using Bing for Internet searches?

Answers

6. a. $\frac{1}{2}$ b. $\frac{5}{13}$ c. $\frac{2}{13}$

8. Use the table from Example 8 to find the probability that a student
- is undecided or has nothing planned.
 - plans to join the military.
 - isn't going to go to a 2-year college.

SOLUTION Since percent means per hundred, we can write these percents as decimals or fractions for the probabilities.

$$\text{a. } P(\text{Google}) = 0.65 = \frac{65}{100}$$

$$\text{b. } P(\text{Yahoo!} + \text{Google}) = 0.28 + 0.65 = 0.93 = \frac{93}{100}$$

- c. Since we know that Google has a 0.65 probability, we subtract 0.65 from 1, which is our sample space, to find $P(\text{not Google})$:

$$P(\text{not Google}) = 1.00 - 0.65 = 0.35 = \frac{35}{100}$$

EXAMPLE 8

The following table shows the future plans for a graduating class of 300 high school seniors.

Plan	Number of Students
4-year College	259
2-year College	11
Technical/Vocational School	9
Military	13
Undecided	7
Nothing	1

If a senior from the high school is selected at random, find the probabilities of the following events. Give your answers as both reduced fractions and decimals.

- The student plans to attend a 4-year college.
- The student plans to attend a 2-year college or technical/vocational school.

SOLUTION

- a. Of the 300 students, 259 plan to attend a 4-year college. The probability is

$$P(\text{4-year college}) = \frac{259}{300} \approx 0.86$$

- b. Since 11 students plan to attend a 2-year college and 9 students plan to attend technical or vocational school, the probability is

$$P(\text{2-year college or technical/vocational school})$$

$$= \frac{11 + 9}{300} = \frac{20}{300} = \frac{1}{15} \approx 0.07$$

Getting Ready for Class

After reading through the preceding section, respond in your own words and in complete sentences.

- How do we explain an event when working with probability?
- Give an example, other than a coin toss, of an equally likely outcome.
- How are theoretical probabilities different from observed probabilities?
- When you roll a set of dice 50 times and then calculate the results, are you computing a theoretical or an observed probability?

Answers

7. a. $\frac{7}{100}$ b. $\frac{35}{100}$ c. $\frac{93}{100}$
 8. a. 0.027 b. 0.04 c. 0.96

Problem Set 6.4

B [Examples 3–6]

- Rolling Dice** You roll a six-sided die and observe the number showing on the top side when the die comes to rest. What is the probability of observing

 - an odd number?
 - a number greater than 6?
 - a number less than 7?
 - a prime number?
- Rolling Dice** Two dice are rolled at the same time and the numbers showing are observed. Find the following.

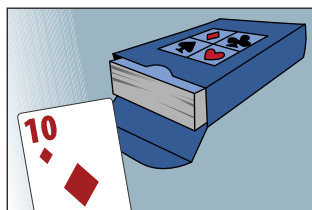

 - $P(\text{sum} = 2)$
 - $P(\text{sum} = 11)$
 - $P(\text{sum is an odd number})$
 - $P(\text{the two dice show different numbers})$
- Rolling Dice** The figure shows a die with 12 sides. Each side has one of the numbers from 1 to 12. If the die is as likely to land on one side as another, find the probabilities for the following events.

 - Observing an even number
 - Observing a number less than 5
 - Observing a number greater than 5
 - Observing a 5
- Rolling Dice** Two dice are rolled at the same time and the numbers showing are observed. Find the probabilities for the following events.

 - The sum is 4.
 - The sum is 3 or 10.
 - The sum is less than 12.
 - One or both dice show a 5.
- Card Deck** One card is drawn from a regular deck of 52 cards. Find the probabilities associated with the following events.

 - The card is a 10.
 - The card is a diamond.
 - The card is not a queen.
 - The card is not a face card.
- Card Deck** One card is drawn from a regular deck of 52 cards. Find the following.

 - $P(\text{a black card})$
 - $P(\text{a king or a 3})$
 - $P(\text{a red jack})$
 - $P(\text{a spade or a diamond})$



Board Game The spinner on the game board shown here spins, and when it comes to a stop, the color and number it is pointing to are noted.

7. Find the following.

- $P(8)$
- $P(\text{red})$
- $P(\text{blue})$
- $P(2)$



8. Find the probabilities of the following events.

- Spinning an odd number
- Spinning a blue or an 8
- Spinning a number less than 7
- Spinning a number greater than or equal to 1

C [Examples 7–8]

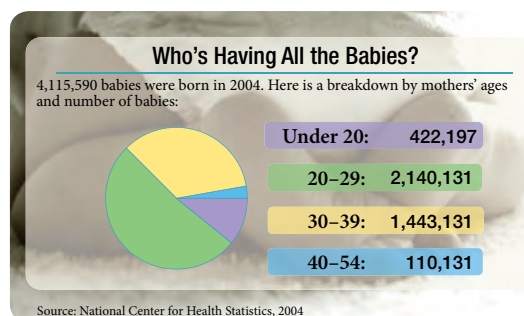
9. **Ice Cream Flavors** A third-grade teacher surveyed her class to see which flavor of ice cream they wanted for their end-of-year party. The results of the survey are shown in the following table.

Flavor	Number of Votes
Vanilla	15
Chocolate	10
Strawberry	5

If a student from the class is selected at random, find the probability that the student voted for

- chocolate.
- vanilla.
- chocolate or strawberry.
- vanilla or chocolate.

10. **Births** The chart shows the number of babies born to women in different age groups in 2004.



If a baby born in 2004 is selected at random, find the probabilities of the following events to the nearest hundredth.

- the mother is under 20 years of age
- $20 \leq \text{mother's age} \leq 29$
- mother's age ≤ 29
- mother's age > 29

11. **iPods** A box contains 7 iPods, 4 of which are green and 3 of which are blue.



You select one iPod at random. Find the following probabilities.

- $P(\text{green})$
 - $P(\text{blue})$
 - $P(\text{green or blue})$
 - $P(\text{orange})$
13. **YouTube** Approximately 80% of the videos on YouTube.com consist of amateur content. If you randomly select a YouTube video, what is the probability it is an amateur video? Write your answer as a decimal and as a reduced fraction.

15. **Student Ages** Recently, Mr. McKeague taught a college algebra class that started the semester with 36 students having the following characteristics.

Age	Men	Women
18	3	5
19	2	3
20	6	2
21+	7	8

What is the probability that a student selected at random from this class is

- male?
- 19 years old?
- 20 or older?
- under 20 years of age?

12. **Marbles** A jar contains 4 white marbles, 6 black marbles, and 2 red marbles. If one marble is drawn at random, find the probability that the marble is:

- red.
- not white.
- black or white.
- yellow.

14. **Voting** In the presidential election of November 2004, 64 percent of the voting-age citizens voted. If a citizen who was of voting age during the election is chosen at random, find the probability that he or she voted. Give the answer as a decimal and as a fraction.

16. **Class Grades** Recently, Mr. McKeague taught a college algebra class that started the semester with 36 students. At the end of the semester the following grades were given. (W is for withdrew and dropped the class.)

Grade	Men	Women
A	2	2
B	2	3
C	5	7
D	1	0
F	2	1
W	6	5

What is the probability that a student selected at random from this class

- is female?
- received a grade of B?
- received a grade above D?
- withdrew from the class?

Chapter 6 Summary

Mean [6.1]

To find the *mean* for a set of numbers, we add all the numbers and then divide the sum by the number of numbers in the set. The mean is sometimes called the *arithmetic mean*.

EXAMPLES

1. Find the mean for test scores of 74, 63, 74, 80, 83, 88.
We add the numbers and divide by 6:
$$\frac{74 + 63 + 74 + 80 + 83 + 88}{6}$$
$$= \frac{462}{6} = 77$$

Median [6.1]

To find the *median* for a set of numbers, we write the numbers in order from smallest to largest. If there is an odd number of numbers, the median is the middle number. If there is an even number of numbers, then the median is the mean of the two numbers in the middle.

2. The median for the test scores in Example 1 will be halfway between 74 and 80.

$$\text{Median} = \frac{74 + 80}{2} = 77$$

Mode [6.1]

The *mode* for a set of numbers is the number that occurs most frequently. If all the numbers in the set occur the same number of times, there is no mode.

3. The mode for the test scores in Example 1 will be the most frequently occurring score, which is 74.

Range [6.1]

The *range* for a set of numbers is the difference between the largest number and the smallest number in the sample.

4. The range for the test scores in Example 1 will be the difference between 88 and 63.
Range = $88 - 63 = 25$

Stem-and-Leaf Diagrams [6.2]

A stem-and-leaf diagram is a way to organize data into two columns. For a collection of two-digit numbers, the first column, or stem, is the tens digit, while the second column, or leaf, is the ones digit.

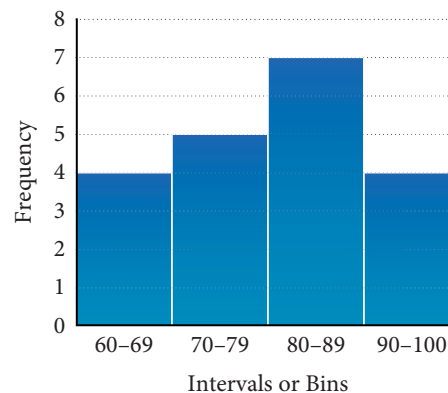
5. A stem-and-leaf diagram for the data 32, 15, 20, 26, 39, 11, 27 is shown below

Stem	Leaf
1	1, 5
2	0, 6, 7
3	2, 9

Frequency Tables and Histograms [6.2]

A *frequency table* shows how often data within certain intervals occurs. A *histogram* is a graph of a frequency table.

Interval	Frequency
60–69	4
70–79	5
80–89	7
90–100	4



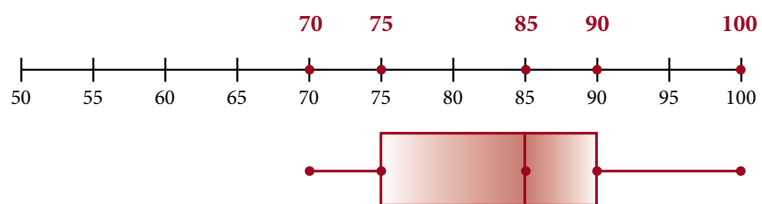
6. For the data
3, 4, 6, 7, 8, 9, 11
 $Q_2 = 7$, $Q_1 = 4$, $Q_3 = 9$

Quartiles [6.2]

The quartiles of a data set are used to sort the data into fourths. The second quartile, Q_2 , is the median of the data. The first quartile, Q_1 , is the median of the values less than Q_2 . The third quartile, Q_3 , is the median of the data greater than Q_2 .

Box-and-Whisker Plots [6.2]

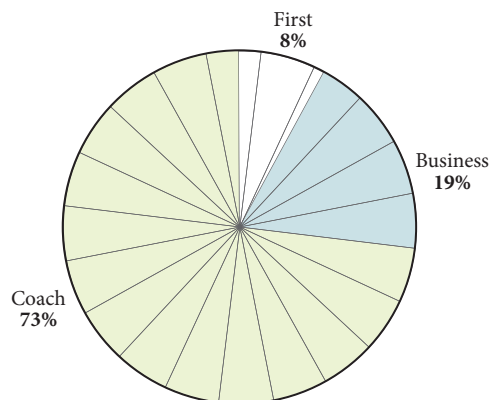
A box-and-whisker plot creates a visual representation of our data by graphing the three quartiles and the least and the greatest value.



■ Pie Charts [6.3]

A pie chart is another way to give a visual representation of the information in a table.

Seating Class	Number Of Seats
First	18
Business	42
Coach	163



■ Equally Likely Outcomes [6.4]

In an experiment where all the outcomes are equally likely to happen, the probability that event A occurs is the number of outcomes in A divided by the total number of outcomes.

7. The probability of rolling a number less than 4 on a six-sided die is

$$P(< 4) = \frac{3}{6} = \frac{1}{2}$$

■ Probability Rule 1 [6.4]

If A is an event, then the probability that A will occur, denoted $P(A)$, will always satisfy the condition:

$$0 \leq P(A) \leq 1$$

■ Observed Probabilities [6.4]

Observed probabilities are taken from actual data.

8. In an algebra class, 86% of the students passed the first exam. If a student is selected at random from the class, the probability that he or she passed is $0.86 = \frac{86}{100} = \frac{43}{50}$.

Chapter 6 Review

1. **Coffee Prices** The table below shows the unit price of some popular coffees.

- To the nearest tenth, find the mean of the unit prices listed in the table. [6.1]
- Find the median unit price of the items listed in the table. [6.1]
- What is the range of unit prices for the items listed in the table? [6.1]

Coffee	Price (cents/cup)
Green Mountain Kona Estate	32
Gevalia Kaffe Select	17
Dunkin' Donuts Original	11
Brothers Gourmet	10
Trader Joe's Colombian	7
Yuban Colombian	6
Folgers Classic	5

2. **Value of a Painting** A painting is purchased in 1990 for \$125. The table below shows what the painting is worth at various times, if it doubles in value every 5 years.

- What is the range of values for the painting? [6.1]
- What is the mean value of the painting to the nearest dollar? [6.1]
- What is the median value of the painting? [6.1]

Year	Value
1990	\$125
1995	\$250
2000	\$500
2005	\$1,000
2010	\$2,000

Find the mode for each set of numbers. [6.1]

3. 3, 2, 6, 2, 1, 2, 3, 1, 5

4. 16, 24, 31, 24, 19, 31, 32, 17, 24

Use the data to create a stem-and-leaf diagram. [6.2]

5. 16, 28, 32, 21, 19, 20

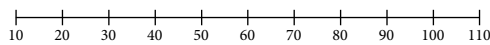
Stem	Leaf

6. 89, 99, 100, 95, 72, 90, 93

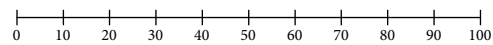
Stem	Leaf

Use the data to create a box-and-whisker plot. [6.2]

7. 19, 32, 53, 40, 56, 45, 68, 20, 70, 56, 64



8. 20, 21, 36, 41, 5, 17, 81, 45, 36, 41, 24



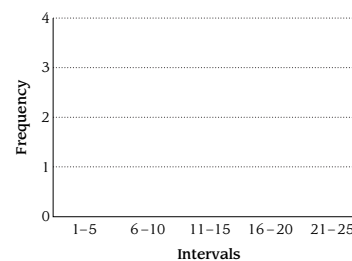
9. Create a frequency table with 5 intervals from the data below [6.2]

21 36 27 42 19 57 23 32
48 35 17 24 29 21 30

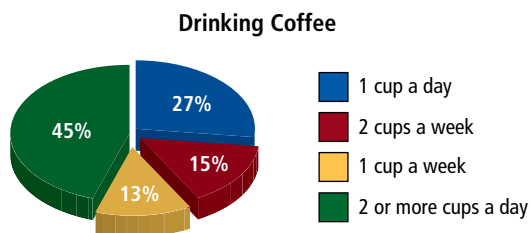
Interval	Tally	Frequency	Relative Freq.

10. Use the data to create a histogram with 5 bins. [6.2]

6, 5, 11, 7, 12, 21, 15, 13, 25



11. **Drinking Coffee** The pie chart shows the results of surveying 200 people to find out how much coffee they drink. [6.3]



- What percentage of people drink 1 or more cup a day?
- How many people said they drink 1 cup a day?
- What percentage of people drink 1 or 2 cups a week?

12. **Airline Seating** The table below gives the number of seats in each of the three classes of seating on a United Airlines Boeing 777 airliner. Create a pie chart from the information in the table. [6.3]

Seating Class	Ticket Price
First	12
Business	49
Coach	215

Solve the following probability problems [6.4]

- What is the probability of drawing a card less than 4 from a deck of 52 cards? (Ace is low.)
- What is the probability of rolling a 12-sided die and it landing on a number greater than 3 or an even number?
- What is the probability of drawing a red king or a diamond from a deck of 52 cards?
- What is the probability of rolling a 12-sided die and it landing on a prime number or an odd number?



17. The chart shows how people surveyed feel about dogs and cats.

Opinion	Number of People
Like both	60
Like only dogs	29
Like only cats	4
Dislike both	2

If someone from the survey is selected, what is the probability they

- like either only cats or only dogs?
- dislike both?
- like both or only cats?

18. A group of friends voted on what genre of movie they wanted to watch. The results are shown in the table below.

Genre	Number of Votes
Action	9
Comedy	6
Horror	3
Romance	2

If someone from the group is selected, what is the probability they wanted to watch

- an action or horror movie?
- a comedy or romance?
- anything but romance?

Chapter 6 Cumulative Review

Simplify.

- $265.02 \div 6.31$
- $\frac{5}{9} + \frac{1}{9}$
- $\frac{2}{7} \cdot \frac{3}{8}$
- $\left(\frac{2}{3}\right)^3$
- $5 \cdot 3\frac{1}{2}$
- $6 - 2.15$
- $4.8(2.01)$
- $3\frac{1}{4} - 1\frac{1}{2}$
- $\frac{9}{28} \div \frac{3}{16}$
- $\frac{1}{4} - \frac{1}{5}$
- $6.237 + 1.38$
- Divide $3\frac{1}{4}$ by $\frac{1}{2}$
- Find the difference of 7 and 2.35.
- Translate into symbols, and then simplify: Three more than the product of 6 and 4.
- Write the ratio 25 to 20 as a fraction in lowest terms.
- Solve the equation $\frac{5}{x} = \frac{4}{7}$.
- 3.2 is 20% of what number?
- What number is 4% of 15?
- Percent Decrease** A \$20 sweater is on sale for 15% off. Find the sale price of the sweater.
- Sales Tax** The sales tax on a \$25 purchase is \$1.75. What is the sales tax rate?
- Lemonade Stand** Some kids sell 32 cups of lemonade for 75¢ each. How much money do they take in?
- Geometry** Find the perimeter and area of a 6.2 inch by 5 inch rectangle.
- Number Problem** The quotient of 9 and 3 is how much smaller than the difference of 9 and 3?
- Miles/Hour** An athlete jogs 10 miles in 1.6 hours. What is the rate the athlete jogs in miles per hour?
- Recipe** A recipe calls for 3 tablespoons of oil and 2 cups of flour. If the recipe is increased to 5 cups of flour, how many tablespoons of oil should be used?
- Unit Price** A 5-pound sack of store-brand flour is \$0.99. A 2-pound sack of name-brand flour is \$1.39. Give the unit price for each sack, and indicate which is the better buy.

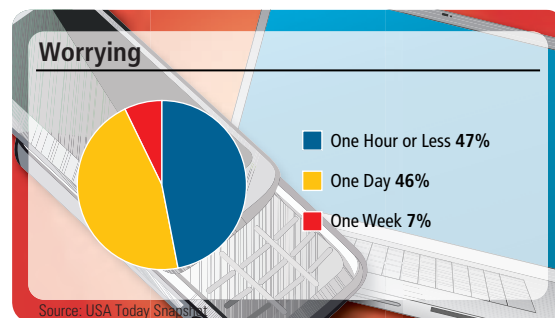


5 LBS FOR \$0.99



2 LBS FOR \$1.39

- Model Car** A toy company offers a $\frac{1}{24}$ scale model of a Checker Cab. If the length of the model is 8.5 inches, what is the length of the actual Checker Cab? Write your answer in inches, then divide by 12 to give the answer in feet.
- Worrying** The snapshot shows how long it takes for people to start worrying about checking their phone, email, instant messaging, or public networking sites for messaging. If 2,914 people said they start worrying in one hour or less, how many people were surveyed?



Suppose you draw a card from a deck of 52 cards. What is the probability of drawing

- an ace?
- a king or a spade?

Chapter 6 Test

1. **Car Speeds** The table below gives the number of seconds it takes various sport-utility vehicles to accelerate from 0 miles per hour to 60 miles per hour.

Car	Time (Seconds)
Chevrolet Blazer	9.1
Ford Explorer	10.7
Isuzu Trooper	10.9
Jeep Cherokee	9.7
Nissan Pathfinder	12.3
Toyota 4Runner	15.7

- What is the range of acceleration times?
 - What is the mean acceleration time?
 - What is the median of the acceleration times?
2. **Airline Ticket Prices** The table below shows a number of different ticket prices for a round trip ticket from Los Angeles to New York City in June 2002.

Seating Class	Ticket Price
Coach	261
Coach	335
Coach	1,525
Coach	2,443
Business	2,643
Business	3,637
First	1,211
First	2,443
First	3,825

- Find the mean ticket price to the nearest dollar.
- Find the median for the ticket prices.
- What is the mode for the ticket prices?
- What is the range of ticket prices?

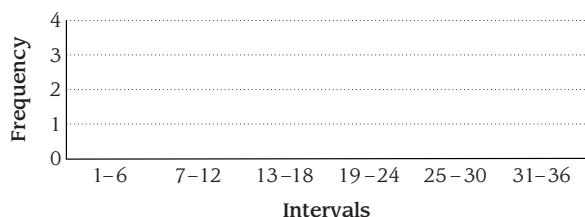
Use the data to create a stem-and-leaf diagram.

3. 9, 4, 3, 6, 19, 20, 16, 24, 30, 12

Stem	Leaf

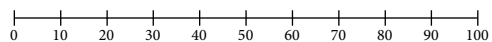
Use the data to make a histogram with 6 bins.

4. 9, 3, 25, 36, 17, 14, 27, 17, 21, 23

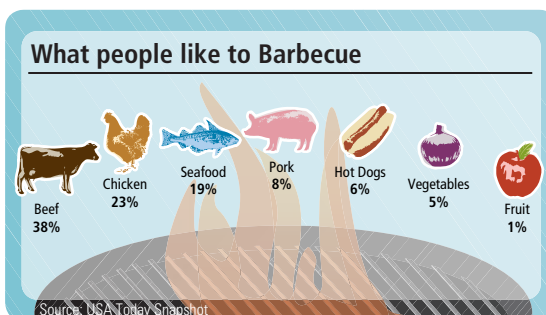


Use the data to create a box-and-whisker plot.

5. 36, 45, 12, 90, 62, 52, 34, 15, 17, 26, 38



6. **Barbecue** The chart shows what foods people like to barbecue. Use the illustration to create a pie chart.



- What is the probability of drawing a diamond from a deck of 52 cards?
- What is the probability of drawing a two or an even card from a deck of 52 cards?

Board Game Use the board game spinner to answer the following questions.



- Find the probability of spinning a number greater than 3.
- Find the probability of spinning a 7 or a yellow.

A survey was taken to determine the most popular color for club T-Shirts. Use the results to answer the questions.

Color	Number of Votes
blue	19
black	24
red	16
white	7
green	14

- Find the probability someone chose a red or a black shirt.
- Find the probability someone chose a white shirt.

Chapter 6 Projects

DESCRIPTIVE STATISTICS

GROUP PROJECT

Nutrition Labels

- Number of People** 2–3
- Time Needed** 15–20 minutes
- Equipment** Pencil, paper, and protractor
- Background** If you take a basic course in nutrition, you will find that all the calories we consume come from three different sources: fat, carbohydrates, and proteins. One gram of any carbohydrate or any protein contains 4 calories, whereas every gram of fat contains 9 calories. We can use this information, along with our ability to construct pie charts, to get a visual comparison of the carbohydrate, protein, and fat calories in different foods.

Procedure We want to calculate the percent of total calories in 1 serving of food that come from each of the three sources: protein, carbohydrate, and fat. We will begin by completing the table below

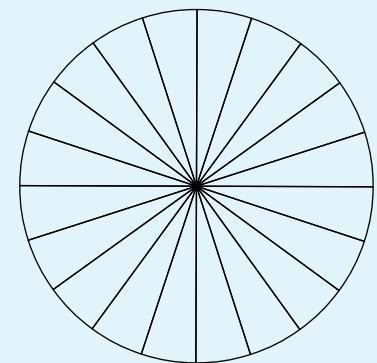
	Grams	Calories	Percent of Total Calories
Protein	2		
Carbohydrate	18		
Fat	7		
	Total Calories		100%

1. Multiply the number of grams of protein and the number of grams of carbohydrate by 4, and the number of grams of fat by 9, to fill in the calories column.
2. For protein, fill in the percent column by dividing the number of calories from protein by the total number of calories, and then changing the result to a percent. Do the same for carbohydrate and fat.

TORTILLA CHIPS

Nutrition Facts	
Serving Size 1 oz. (28g/About 12 chips)	
Servings Per Container About 2	
Amount Per Serving	
Calories 140	Calories from fat 60
% Daily Value*	
Total Fat 7g	11%
Saturated Fat 1g	6%
Cholesterol 0mg	0%
Sodium 170mg	7%
Total Carbohydrate 18g	6%
Dietary Fiber 1g	4%
Sugars less than 1g	
Protein 2g	
Vitamin A 0%	• Vitamin C 0%
Calcium 4%	• Iron 2%
*Percent Daily Values are based on a 2,000 calorie diet	

for the nutrition label above. Notice that the number of grams of protein, carbohydrate, and fat from the nutrition label have already been placed in the table.



Pie Chart Template Each slice is 5% of the area of the circle.

3. Use the template to construct a pie chart that shows the percent of the calories that come from the three sources: protein, carbohydrates, and fat.

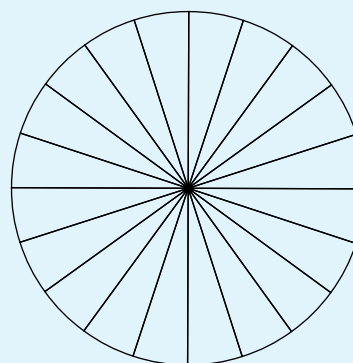
- Follow the same procedure to create a pie chart for the nutrition label that follows.

SPAGHETTI

Nutrition Facts	
Serving Size 2 oz. (56g/1/8 of pkg) dry	
Servings Per Container: 8	
Amount Per Serving	
Calories 210	Calories from fat 10
% Daily Value*	
Total Fat 1g	2%
Saturated Fat 0g	0%
Poly unsaturated Fat 0.5g	
Monounsaturated Fat 0g	
Cholesterol 0mg	0%
Sodium 0mg	0%
Total Carbohydrate 42g	14%
Dietary Fiber 2g	7%
Sugars 3g	
Protein 7g	
Vitamin A 0%	Vitamin C 0%
Calcium 0%	Iron 10%

*Percent Daily Values are based on a 2,000 calorie diet

Grams	Calories	Percent of Total Calories
Protein		
Carbohydrate		
Fat		
Total Calories		100%

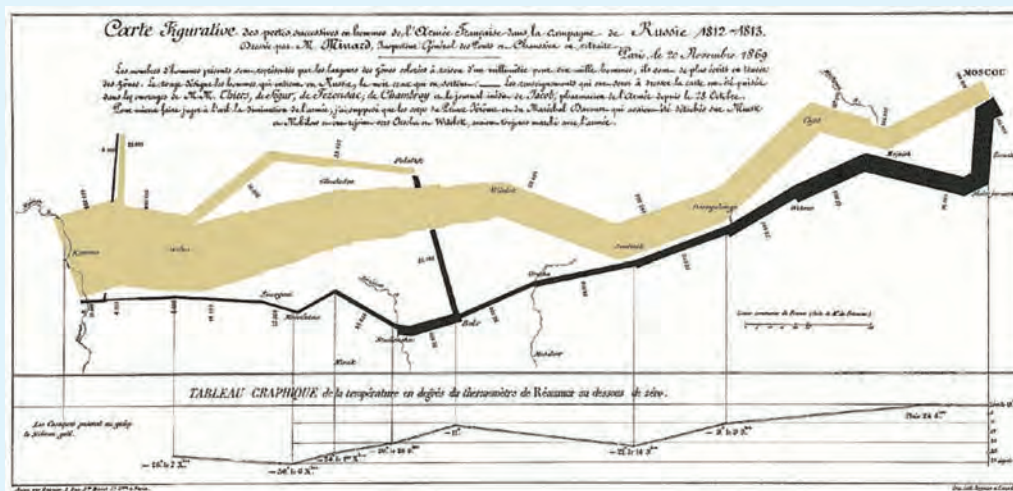


Pie Chart Template

RESEARCH PROJECT

Displaying Information Visually

In this chapter we have worked with a number of diagrams and charts that help us visualize information. There are many other types of displays that we have not considered. The graphic below was created by the French engineer Charles Minard (1781–1870) in 1861. It shows the losses to Napoleon’s Army during the Russian campaign of 1812. The graphic is described by Edward Tufte in his book *The Visual Display of Quantitative Information* as possibly “the best statistical graphic ever drawn.” Write an essay on the life of Charles Minard and include information as to why this particular graphic is held in such high regard.



Measurement

7



Chapter Outline

- 7.1 Unit Analysis I: Length
- 7.2 Unit Analysis II: Area and Volume
- 7.3 Unit Analysis III: Weight
- 7.4 Converting Between the U.S. and Metric Systems and Temperature
- 7.5 Operations with Time and Mixed Units

Introduction

The Google Earth image here shows the Nile River in Africa. The Nile is the longest river in the world, measuring 4,160 miles and stretching across ten different countries. Rivers across the world serve as important means of transportation, particularly in less developed countries, like those in Africa.

Nile River		
	English Units	Metric Units
Length	4,160 mi	6,698 km
Nile Delta Area	1,004 mi ²	2,601 ha
Flow Rate (monsoon season)	285,829 ft ³ /s	8,100 m ³ /s
Average Summer Temperature	86°F	30°C

Source: <http://www.worldwildlife.org>

In this chapter we look at the process we use to convert from one set of units, such as miles per hour, to another set of units, such as kilometers per hour. You will be interested to know that regardless of the units in question, the method we use is the same in all cases. The method is called *unit analysis* and it is the foundation of this chapter.

Chapter Pretest

The pretest below contains problems that are representative of the problems you will find in the chapter.

Make the following conversions.

- 8 ft to inches
- 90 in. to yards
- 32 m to centimeters
- 61 mm to centimeters
- 30 yd² to square feet
- 432 in² to square feet
- 3,840 acres to square miles
- 1.4 m² to square centimeters
- 3 gallons to quarts
- 72 pints to gallons
- 251 mL to liters
- 4 lb to ounces
- 2,142 mg to grams
- 9 m to yards
- 3 gal to liters
- 104°F to degrees Celsius
- The speed limit on a certain road is 45 miles/hour. Convert this to feet/second.
- If meat costs \$3.05 per pound, how much will 2 lb 4 oz cost?

Getting Ready for Chapter 7

The problems below review material covered previously that you need to know in order to be successful in Chapter 7. If you have any difficulty with the problems here, you need to go back and review before going on to Chapter 7.

Write each of the following ratios as a fraction in lowest terms.

- 12 to 30
- 5,280 to 1,320

Simplify.

- 12×16
- 50×250
- $75 \times 43,560$
- $100 \times 3 \times 12$
- 2.49×3.75
- $5 \times 28 \times 1.36$
- $8 \times \frac{1}{3}$
- $25 \times \frac{1}{1000}$
- $\frac{1800}{4}$
- $256 \div 640$
- $\frac{80.5}{1.61}$
- $\frac{36.5 \times 10}{100}$
- $\frac{1100 \times 60 \times 60}{5280}$
- $10 \cdot \frac{12}{5}$
- $\frac{2 \times 1000}{16.39}$ (Round to the nearest whole number.)
- $\frac{5(102 - 32)}{9}$ (Round to the nearest tenth.)
- Convert $\frac{12}{16}$ to a decimal.
- Find the perimeter and area of a 24 in. \times 36 in. poster.

Introduction . . .

In this section we will become more familiar with the units used to measure length. We will look at the U.S. system of measurement and the metric system of measurement.

A U.S. Units of Length

Measuring the length of an object is done by assigning a number to its length. To let other people know what that number represents, we include with it a unit of measure. The most common units used to represent length in the U.S. system are inches, feet, yards, and miles. The basic unit of length is the foot. The other units are defined in terms of feet, as Table 1 shows.

TABLE 1

12 inches (in.) =	1 foot (ft)
1 yard (yd) =	3 feet
1 mile (mi) =	5,280 feet



As you can see from the table, the abbreviations for inches, feet, yards, and miles are in., ft, yd, and mi, respectively. What we haven't indicated, even though you may not have realized it, is what 1 foot represents. We have defined all our units associated with length in terms of feet, but we haven't said what a foot is.

There is a long history of the evolution of what is now called a foot. At different times in the past, a foot has represented different arbitrary lengths. Currently, a foot is defined to be exactly 0.3048 meter (the basic measure of length in the metric system), where a meter is 1,650,763.73 wavelengths of the orange-red line in the spectrum of krypton-86 in a vacuum (this doesn't mean much to me either). The reason a foot and a meter are defined this way is that we always want them to measure the same length. Because the wavelength of the orange-red line in the spectrum of krypton-86 will always remain the same, so will the length that a foot represents.

Now that we have said what we mean by 1 foot (even though we may not understand the technical definition), we can go on and look at some examples that involve converting from one kind of unit to another.

EXAMPLE 1

Convert 5 feet to inches.

SOLUTION Because 1 foot = 12 inches, we can multiply 5 by 12 inches to get

$$\begin{aligned} 5 \text{ feet} &= 5 \times 12 \text{ inches} \\ &= 60 \text{ inches} \end{aligned}$$

This method of converting from feet to inches probably seems fairly simple. But as we go further in this chapter, the conversions from one kind of unit to another will become more complicated. For these more complicated problems, we need another way to show conversions so that we can be certain to end them with the correct unit of measure. For example, since $1 \text{ ft} = 12 \text{ in.}$, we can say that there are 12 in. per 1 ft or 1 ft per 12 in. That is:

$$\frac{12 \text{ in.}}{1 \text{ ft}} \longleftarrow \text{Per} \quad \text{or} \quad \frac{1 \text{ ft}}{12 \text{ in.}} \longleftarrow \text{Per}$$

Objectives

- A** Convert between lengths in the U.S. system.
- B** Convert between lengths in the metric system.
- C** Solve application problems involving unit analysis.

PRACTICE PROBLEMS

- Convert 8 feet to inches.

Answers

- 96 in.

We call the expressions $\frac{12 \text{ in.}}{1 \text{ ft}}$ and $\frac{1 \text{ ft}}{12 \text{ in.}}$ *conversion factors*. The fraction bar is read as “per.” Both these conversion factors are really just the number 1. That is:

$$\frac{12 \text{ in.}}{1 \text{ ft}} = \frac{12 \text{ in.}}{12 \text{ in.}} = 1$$

We already know that multiplying a number by 1 leaves the number unchanged. So, to convert from one unit to the other, we can multiply by one of the conversion factors without changing value. Both the conversion factors above say the same thing about the units feet and inches. They both indicate that there are 12 inches in every foot. The one we choose to multiply by depends on what units we are starting with and what units we want to end up with. If we start with feet and we want to end up with inches, we multiply by the conversion factor

$$\frac{12 \text{ in.}}{1 \text{ ft}}$$

The units of feet will divide out and leave us with inches.

$$\begin{aligned} 5 \text{ feet} &= 5 \text{ ft} \times \frac{12 \text{ in.}}{1 \text{ ft}} \\ &= 5 \times 12 \text{ in.} \\ &= 60 \text{ in.} \end{aligned}$$

The key to this method of conversion lies in setting the problem up so that the correct units divide out to simplify the expression. We are treating units such as feet in the same way we treated factors when reducing fractions. If a factor is common to the numerator and the denominator, we can divide it out and simplify the fraction. The same idea holds for units such as feet.

We can rewrite Table 1 so that it shows the conversion factors associated with units of length, as shown in Table 2.

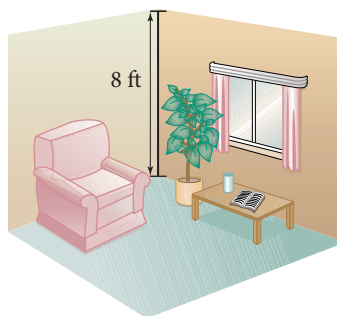
TABLE 2

UNITS OF LENGTH IN THE U.S. SYSTEM

The Relationship Between	Is	To Convert From One To The Other, Multiply By
feet and inches	12 in. = 1 ft	$\frac{12 \text{ in.}}{1 \text{ ft}}$ or $\frac{1 \text{ ft}}{12 \text{ in.}}$
feet and yards	1 yd = 3 ft	$\frac{3 \text{ ft}}{1 \text{ yd}}$ or $\frac{1 \text{ yd}}{3 \text{ ft}}$
feet and miles	1 mi = 5,280 ft	$\frac{5,280 \text{ ft}}{1 \text{ mi}}$ or $\frac{1 \text{ mi}}{5,280 \text{ ft}}$

EXAMPLE 2

The most common ceiling height in houses is 8 feet. How many yards is this?



Note

We will use this method of converting from one kind of unit to another throughout the rest of this chapter. You should practice using it until you are comfortable with it and can use it correctly. However, it is not the only method of converting units. You may see shortcuts that will allow you to get results more quickly. Use shortcuts if you wish, so long as you can consistently get correct answers and are not using your shortcuts because you don't understand our method of conversion. Use the method of conversion as given here until you are good at it; then use shortcuts if you want to.

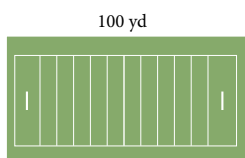
2. The roof of a two-story house is 26 feet above the ground. How many yards is this?

SOLUTION To convert 8 feet to yards, we multiply by the conversion factor $\frac{1 \text{ yd}}{3 \text{ ft}}$ so that feet will divide out and we will be left with yards.

$$\begin{aligned} 8 \text{ ft} &= 8 \text{ ft} \times \frac{1 \text{ yd}}{3 \text{ ft}} && \text{Multiply by correct conversion factor} \\ &= \frac{8}{3} \text{ yd} && 8 \times \frac{1}{3} = \frac{8}{3} \\ &= 2\frac{2}{3} \text{ yd} && \text{Or } 2.67 \text{ yd to the nearest hundredth} \end{aligned}$$

EXAMPLE 3

A football field is 100 yards long. How many inches long is a football field?



SOLUTION In this example we must convert yards to feet and then feet to inches. (To make this example more interesting, we are pretending we don't know that there are 36 inches in a yard.) We choose the conversion factors that will allow all the units except inches to divide out.

$$\begin{aligned} 100 \text{ yd} &= 100 \text{ yd} \times \frac{3 \text{ ft}}{1 \text{ yd}} \times \frac{12 \text{ in.}}{1 \text{ ft}} \\ &= 100 \times 3 \times 12 \text{ in.} \\ &= 3,600 \text{ in.} \end{aligned}$$

B Metric Units of Length

In the metric system the standard unit of length is a meter. A meter is a little longer than a yard (about 3.4 inches longer). The other units of length in the metric system are written in terms of a meter. The metric system uses prefixes to indicate what part of the basic unit of measure is being used. For example, in *millimeter* the prefix *milli* means “one thousandth” of a meter. Table 3 gives the meanings of the most common metric prefixes.

TABLE 3

THE MEANING OF METRIC PREFIXES

Prefix	Meaning
milli	0.001
centi	0.01
deci	0.1
deka	10
hecto	100
kilo	1,000

We can use these prefixes to write the other units of length and conversion factors for the metric system, as given in Table 4.

3. How many inches are in 220 yards?

Answers

2. $8\frac{2}{3}$ yd, or 8.67 yd
3. 7,920 in.

TABLE 4

METRIC UNITS OF LENGTH

The Relationship Between	Is	To Convert From One To The Other, Multiply By
millimeters (mm) and meters (m)	1,000 mm = 1 m	$\frac{1,000 \text{ mm}}{1 \text{ m}}$ or $\frac{1 \text{ m}}{1,000 \text{ mm}}$
centimeters (cm) and meters	100 cm = 1 m	$\frac{100 \text{ cm}}{1 \text{ m}}$ or $\frac{1 \text{ m}}{100 \text{ cm}}$
decimeters (dm) and meters	10 dm = 1 m	$\frac{10 \text{ dm}}{1 \text{ m}}$ or $\frac{1 \text{ m}}{10 \text{ dm}}$
dekameters (dam) and meters	1 dam = 10 m	$\frac{10 \text{ m}}{1 \text{ dam}}$ or $\frac{1 \text{ dam}}{10 \text{ m}}$
hectometers (hm) and meters	1 hm = 100 m	$\frac{100 \text{ m}}{1 \text{ hm}}$ or $\frac{1 \text{ hm}}{100 \text{ m}}$
kilometers (km) and meters	1 km = 1,000 m	$\frac{1,000 \text{ m}}{1 \text{ km}}$ or $\frac{1 \text{ km}}{1,000 \text{ m}}$

We use the same method to convert between units in the metric system as we did with the U.S. system. We choose the conversion factor that will allow the units we start with to divide out, leaving the units we want to end up with.

EXAMPLE 4

Convert 25 millimeters to meters.

SOLUTION To convert from millimeters to meters, we multiply by the conversion factor $\frac{1 \text{ m}}{1,000 \text{ mm}}$:

$$\begin{aligned} 25 \text{ mm} &= 25 \text{ mm} \times \frac{1 \text{ m}}{1,000 \text{ mm}} \\ &= \frac{25 \text{ m}}{1,000} \\ &= 0.025 \text{ m} \end{aligned}$$

EXAMPLE 5

Convert 36.5 centimeters to decimeters.

SOLUTION We convert centimeters to meters and then meters to decimeters:

$$\begin{aligned} 36.5 \text{ cm} &= 36.5 \text{ cm} \times \frac{1 \text{ m}}{100 \text{ cm}} \times \frac{10 \text{ dm}}{1 \text{ m}} \\ &= \frac{36.5 \times 10}{100} \text{ dm} \\ &= 3.65 \text{ dm} \end{aligned}$$

The most common units of length in the metric system are millimeters, centimeters, meters, and kilometers. The other units of length we have listed in our table of metric lengths are not as widely used. The method we have used to convert from one unit of length to another in Examples 2–5 is called *unit analysis*. If you take a chemistry class, you will see it used many times. The same is true of many other science classes as well.

4. Convert 67 centimeters to meters.

5. Convert 78.4 mm to decimeters.

Answers

4. 0.67 m 5. 0.784 dm

We can summarize the procedure used in unit analysis with the following steps:

Strategy Unit Analysis

Step 1: Identify the units you are starting with.

Step 2: Identify the units you want to end with.

Step 3: Find conversion factors that will bridge the starting units and the ending units.

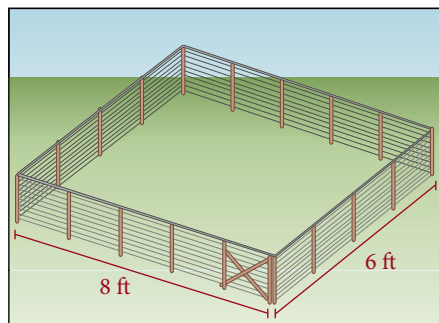
Step 4: Set up the multiplication problem so that all units except the units you want to end with will divide out.

C Applications

EXAMPLE 6

A sheep rancher is making new lambing pens for the upcoming lambing season. Each pen is a rectangle 6 feet wide and 8 feet long. The fencing material he wants to use sells for \$1.36 per foot. If he is planning to build five separate lambing pens (they are separate because he wants a walkway between them), how much will he have to spend for fencing material?

SOLUTION To find the amount of fencing material he needs for one pen, we find the perimeter of a pen.



$$\text{Perimeter} = 6 + 6 + 8 + 8 = 28 \text{ feet}$$

We set up the solution to the problem using unit analysis. Our starting unit is *pens* and our ending unit is *dollars*. Here are the conversion factors that will form a bridge between pens and dollars:

$$\begin{aligned} 1 \text{ pen} &= 28 \text{ feet of fencing} \\ 1 \text{ foot of fencing} &= 1.36 \text{ dollars} \end{aligned}$$

Next we write the multiplication problem, using the conversion factors, that will allow all the units except dollars to divide out:


$$\begin{aligned} 5 \text{ pens} &= 5 \text{ pens} \times \frac{28 \text{ feet of fencing}}{1 \text{ pen}} \times \frac{1.36 \text{ dollars}}{1 \text{ foot of fencing}} \\ &= 5 \times 28 \times 1.36 \text{ dollars} \\ &= \$190.40 \end{aligned}$$

6. The rancher in Example 6 decides to build six pens instead of five and upgrades his fencing material so that it costs \$1.72 per foot. How much does it cost him to build the six pens?

Answer

6. \$288.96

7. Assume that the mistake in the advertisement is that feet per second should read feet per minute. Is 1,100 feet per minute a reasonable speed for a chair lift?



Answer

7. 12.5 mi/hr is a reasonable speed for a chair lift.

EXAMPLE 7

A number of years ago, a ski resort in Vermont advertised their new high-speed chair lift as “the world’s fastest chair lift, with a speed of 1,100 feet per second.” Show why the speed cannot be correct.

SOLUTION To solve this problem, we can convert feet per second into miles per hour, a unit of measure we are more familiar with on an intuitive level. Here are the conversion factors we will use:

$$1 \text{ mile} = 5,280 \text{ feet}$$

$$1 \text{ hour} = 60 \text{ minutes}$$

$$1 \text{ minute} = 60 \text{ seconds}$$

$$\begin{aligned} 1,100 \text{ ft/second} &= \frac{1,100 \text{ feet}}{1 \text{ second}} \times \frac{1 \text{ mile}}{5,280 \text{ feet}} \times \frac{60 \text{ seconds}}{1 \text{ minute}} \times \frac{60 \text{ minutes}}{1 \text{ hour}} \\ &= \frac{1,100 \times 60 \times 60 \text{ miles}}{5,280 \text{ hours}} \\ &= 750 \text{ miles/hour} \end{aligned}$$

Getting Ready for Class

After reading through the preceding section, respond in your own words and in complete sentences.

1. Write the relationship between feet and miles. That is, write an equality that shows how many feet are in every mile.
2. Give the metric prefix that means “one hundredth.”
3. Give the metric prefix that is equivalent to 1,000.
4. As you know from reading the section in the text, conversion factors are ratios. Write the conversion factor that will allow you to convert from inches to feet. That is, if we wanted to convert 27 inches to feet, what conversion factor would we use?

Problem Set 7.1

A Make the following conversions in the U.S. system by multiplying by the appropriate conversion factor. Write your answers as whole numbers or mixed numbers. [Examples 1–3]

1. 5 ft to inches
2. 9 ft to inches
3. 10 ft to inches
4. 20 ft to inches

5. 2 yd to feet
6. 8 yd to feet
7. 4.5 yd to inches
8. 9.5 yd to inches

9. 27 in. to feet
10. 36 in. to feet
11. 2.5 mi to feet
12. 6.75 mi to feet

13. 48 in. to yards
14. 56 in. to yards

B Make the following conversions in the metric system by multiplying by the appropriate conversion factor. Write your answers as whole numbers or decimals. [Examples 4, 5]

15. 18 m to centimeters
16. 18 m to millimeters
17. 4.8 km to meters
18. 8.9 km to meters

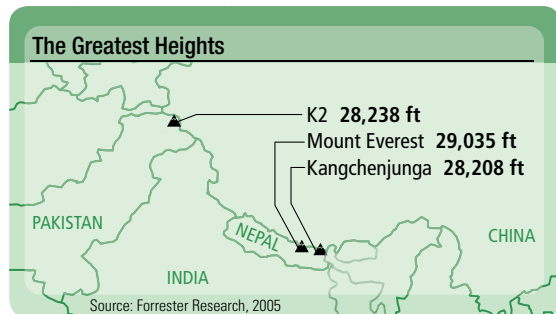
19. 5 dm to centimeters
20. 12 dm to millimeters
21. 248 m to kilometers
22. 969 m to kilometers

23. 67 cm to millimeters
24. 67 mm to centimeters
25. 3,498 cm to meters
26. 4,388 dm to meters

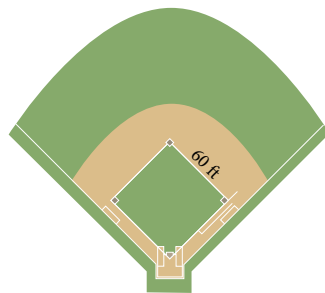
27. 63.4 cm to decimeters
28. 89.5 cm to decimeters

C Applying the Concepts [Examples 6, 7]

29. **Mountains** The map shows the heights of the tallest mountains in the world. According to the map, K2 is 28,238 ft. Convert this to miles. Round to the nearest tenth of a mile.



31. **Softball** If the distance between first and second base in softball is 60 feet, how many yards is it from first to second base?



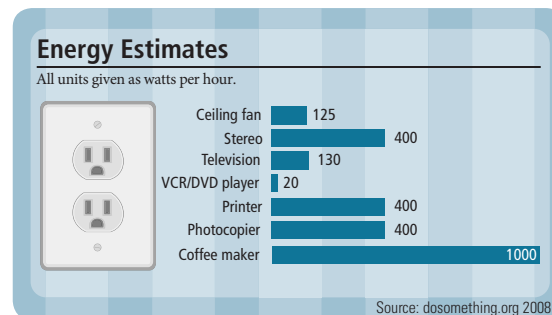
33. **High Jump** If a person high jumps 6 feet 8 inches, how many inches is the jump?

35. **Ceiling Height** Suppose the ceiling of a home is 2.44 meters above the floor. Express the height of the ceiling in centimeters.

37. **Surveying** A unit of measure sometimes used in surveying is the *chain*. There are 80 chains in 1 mile. How many chains are in 37 miles?

39. **Metric System** A very small unit of measure in the metric system is the *micron* (abbreviated μm). There are 1,000 μm in 1 millimeter. How many microns are in 12 centimeters?

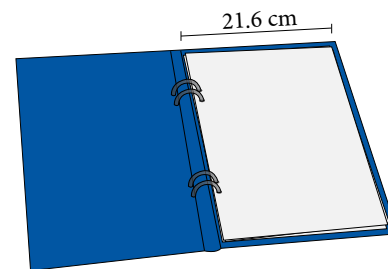
30. **Classroom Energy** The chart shows how much energy is wasted in the classroom by leaving appliances on.



Convert the the wattage of the following appliances to kilowatts.

- Ceiling fan
- VCR/DVD player
- Coffee maker

32. **Notebook Width** Standard-sized notebook paper is 21.6 centimeters wide. Express this width in millimeters.



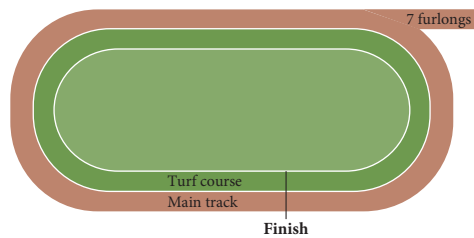
34. **Desk Width** A desk is 48 inches wide. What is the width in yards?

36. **Tower Height** A transmitting tower is 100 feet tall. How many inches is that?

38. **Surveying** Another unit of measure used in surveying is a *link*; 1 link is about 8 inches. About how many links are there in 5 feet?

40. **Metric System** Another very small unit of measure in the metric system is the *angstrom* (abbreviated \AA). There are 10,000,000 \AA in 1 millimeter. How many angstroms are in 15 decimeters?

41. **Horse Racing** In horse racing, 1 *furlong* is 220 yards. How many feet are in 12 furlongs?



43. **Speed Limit** The maximum speed limit on part of Highway 101 in California is 55 miles/hour. Convert 55 miles/hour to feet/second. (Round to the nearest tenth.)
45. **Track and Field** A person who runs the 100-yard dash in 10.5 seconds has an average speed of 9.52 yards/second. Convert 9.52 yards/second to miles/hour. (Round to the nearest tenth.)
47. **Speed of a Bullet** The bullet from a rifle leaves the barrel traveling 1,500 feet/second. Convert 1,500 feet/second to miles/hour. (Round to the nearest whole number.)

42. **Speed of a Bullet** A bullet from a machine gun on a B-17 Flying Fortress in World War II had a muzzle speed of 1,750 feet/second. Convert 1,750 feet/second to miles/hour. (Round to the nearest whole number.)



44. **Speed Limit** The maximum speed limit on part of Highway 5 in California is 65 miles/hour. Convert 65 miles/hour to feet/second. (Round to the nearest tenth.)
46. **Track and Field** A person who runs a mile in 8 minutes has an average speed of 0.125 miles/minute. Convert 0.125 miles/minute to miles/hour.
48. **Sailing** A *fathom* is 6 feet. How many yards are in 19 fathoms?

Calculator Problems

Set up the following conversions as you have been doing. Then perform the calculations on a calculator.

49. Change 751 miles to feet.
50. Change 639.87 centimeters to meters.
51. Change 4,982 yards to inches.
52. Change 379 millimeters to kilometers.
53. Mount Whitney is the highest point in California. It is 14,494 feet above sea level. Give its height in miles to the nearest tenth.
54. The tallest mountain in the United States is Mount McKinley in Alaska. It is 20,320 feet tall. Give its height in miles to the nearest tenth.
55. California has 3,427 miles of shoreline. How many feet is this?
56. The tip of the TV tower at the top of the Empire State Building in New York City is 1,472 feet above the ground. Express this height in miles to the nearest hundredth.

Getting Ready for the Next Section

Perform the indicated operations.

57. 12×12

58. 36×24

59. $1 \times 4 \times 2$

60. $5 \times 4 \times 2$

61. $10 \times 10 \times 10$

62. $100 \times 100 \times 100$

63. $75 \times 43,560$

64. $55 \times 43,560$

65. $864 \div 144$

66. $1,728 \div 144$

67. $256 \div 640$

68. $960 \div 240$

69. $45 \times \frac{9}{1}$

70. $36 \times \frac{9}{1}$

71. $1,800 \times \frac{1}{4}$

72. $2,000 \times \frac{1}{4} \times \frac{1}{10}$

73. 1.5×30

74. 1.5×45

75. $2.2 \times 1,000$

76. $3.5 \times 1,000$

77. 67.5×9

78. 43.5×9

Maintaining Your Skills

Write your answers as whole numbers, proper fractions, or mixed numbers.

Find each product. (Multiply.)

79. $\frac{2}{3} \cdot \frac{1}{2}$

80. $\frac{7}{9} \cdot \frac{3}{14}$

81. $8 \cdot \frac{3}{4}$

82. $12 \cdot \frac{1}{3}$

83. $1\frac{1}{2} \cdot 2\frac{1}{3}$

84. $\frac{1}{6} \cdot 4\frac{2}{3}$

Find each quotient. (Divide.)

85. $\frac{3}{4} \div \frac{1}{8}$

86. $\frac{3}{5} \div \frac{6}{25}$

87. $4 \div \frac{2}{3}$

88. $1 \div \frac{1}{3}$

89. $1\frac{3}{4} \div 2\frac{1}{2}$

90. $\frac{9}{8} \div 1\frac{7}{8}$

Extending the Concepts

91. **Fitness Walking** The guidelines for fitness now indicate that a person who walks 10,000 steps daily is physically fit. According to *The Walking Site* on the Internet, "The average person's stride length is approximately 2.5 feet long. That means it takes just over 2,000 steps to walk one mile, and 10,000 steps is close to 5 miles." Use your knowledge of unit analysis to determine if these facts are correct.

Unit Analysis II: Area and Volume

7.2

Figure 1 below gives a summary of the geometric objects we have worked with in previous chapters, along with the formulas for finding the area of each object.

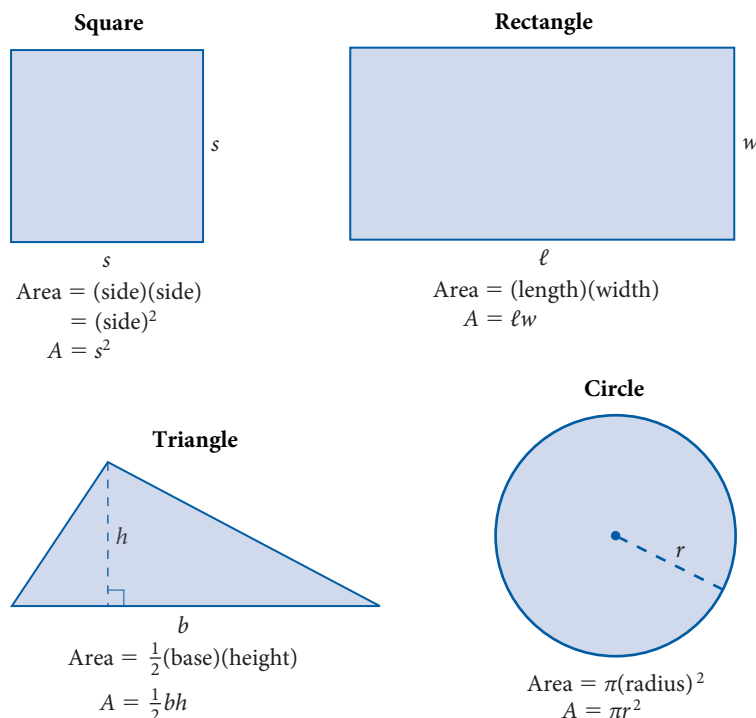


FIGURE 1 AREAS OF COMMON GEOMETRIC SHAPES

A Conversion Factors in the U.S. System

EXAMPLE 1

Find the number of square inches in 1 square foot.

SOLUTION We can think of 1 square foot as $1 \text{ ft}^2 = 1 \text{ ft} \times 1 \text{ ft}$. To convert from feet to inches, we use the conversion factor 1 foot = 12 inches. Because the unit foot appears twice in 1 ft^2 , we multiply by our conversion factor twice.

$$1 \text{ ft}^2 = 1 \text{ ft} \times 1 \text{ ft} \times \frac{12 \text{ in.}}{1 \text{ ft}} \times \frac{12 \text{ in.}}{1 \text{ ft}} = 12 \text{ in.} \times 12 \text{ in.} = 144 \text{ in}^2$$

Now that we know that 1 ft^2 is the same as 144 in^2 , we can use this fact as a conversion factor to convert between square feet and square inches. Depending on which units we are converting from, we would use either

$$\frac{144 \text{ in}^2}{1 \text{ ft}^2} \quad \text{or} \quad \frac{1 \text{ ft}^2}{144 \text{ in}^2}$$

Objectives

- A** Convert between areas using the U.S. system.
- B** Convert between areas using the metric system.
- C** Convert between volumes using the U.S. system.
- D** Convert between volumes using the metric system.

PRACTICE PROBLEMS

- Find the number of square feet in 1 square yard.

Answer

- $1 \text{ yd}^2 = 9 \text{ ft}^2$

2. If the poster in Example 2 is surrounded by a frame 6 inches wide, find the number of square feet of wall space covered by the framed poster.

EXAMPLE 2

A rectangular poster measures 36 inches by 24 inches. How many square feet of wall space will the poster cover?

SOLUTION One way to work this problem is to find the number of square inches the poster covers, and then convert square inches to square feet.

$$\text{Area of poster} = \text{length} \times \text{width} = 36 \text{ in.} \times 24 \text{ in.} = 864 \text{ in}^2$$

To finish the problem, we convert square inches to square feet:

$$\begin{aligned} 864 \text{ in}^2 &= 864 \text{ in}^2 \times \frac{1 \text{ ft}^2}{144 \text{ in}^2} \\ &= \frac{864}{144} \text{ ft}^2 \\ &= 6 \text{ ft}^2 \end{aligned}$$




Table 1 gives the most common units of area in the U.S. system of measurement, along with the corresponding conversion factors.

TABLE 1

U.S. UNITS OF AREA

The Relationship Between	Is	To Convert From One To The Other, Multiply By
square inches and square feet	$144 \text{ in}^2 = 1 \text{ ft}^2$	$\frac{144 \text{ in}^2}{1 \text{ ft}^2}$ or $\frac{1 \text{ ft}^2}{144 \text{ in}^2}$
square yards and square feet	$9 \text{ ft}^2 = 1 \text{ yd}^2$	$\frac{9 \text{ ft}^2}{1 \text{ yd}^2}$ or $\frac{1 \text{ yd}^2}{9 \text{ ft}^2}$
acres and square feet	$1 \text{ acre} = 43,560 \text{ ft}^2$	$\frac{43,560 \text{ ft}^2}{1 \text{ acre}}$ or $\frac{1 \text{ acre}}{43,560 \text{ ft}^2}$
acres and square miles	$640 \text{ acres} = 1 \text{ mi}^2$	$\frac{640 \text{ acres}}{1 \text{ mi}^2}$ or $\frac{1 \text{ mi}^2}{640 \text{ acres}}$

EXAMPLE 3

A dressmaker orders a bolt of material that is 1.5 yards wide and 30 yards long. How many square feet of material were ordered?

SOLUTION The area of the material in square yards is

$$\begin{aligned} A &= 1.5 \text{ yd} \times 30 \text{ yd} \\ &= 45 \text{ yd}^2 \end{aligned}$$

Converting this to square feet, we have

$$\begin{aligned} 45 \text{ yd}^2 &= 45 \text{ yd}^2 \times \frac{9 \text{ ft}^2}{1 \text{ yd}^2} \\ &= 405 \text{ ft}^2 \end{aligned}$$

Answers


2. 12 ft^2 3. 607.5 ft^2

EXAMPLE 4

A farmer has 75 acres of land. How many square feet of land does the farmer have?

SOLUTION Changing acres to square feet, we have

$$\begin{aligned} 75 \text{ acres} &= 75 \text{ acres} \times \frac{43,560 \text{ ft}^2}{1 \text{ acre}} \\ &= 75 \times 43,560 \text{ ft}^2 \\ &= 3,267,000 \text{ ft}^2 \end{aligned}$$

**EXAMPLE 5**

A new shopping center is to be constructed on 256 acres of land. How many square miles is this?

SOLUTION Multiplying by the conversion factor that will allow acres to divide out, we have

$$\begin{aligned} 256 \text{ acres} &= 256 \text{ acres} \times \frac{1 \text{ mi}^2}{640 \text{ acres}} \\ &= \frac{256}{640} \text{ mi}^2 \\ &= 0.4 \text{ mi}^2 \end{aligned}$$

B Area: The Metric System

Units of area in the metric system are considerably simpler than those in the U.S. system because metric units are given in terms of powers of 10. Table 2 lists the conversion factors that are most commonly used.

TABLE 2

METRIC UNITS OF AREA		
The Relationship Between	Is	To Convert From One To The Other, Multiply By
square millimeters and square centimeters	$1 \text{ cm}^2 = 100 \text{ mm}^2$	$\frac{100 \text{ mm}^2}{1 \text{ cm}^2}$ or $\frac{1 \text{ cm}^2}{100 \text{ mm}^2}$
square centimeters and square decimeters	$1 \text{ dm}^2 = 100 \text{ cm}^2$	$\frac{100 \text{ cm}^2}{1 \text{ dm}^2}$ or $\frac{1 \text{ dm}^2}{100 \text{ cm}^2}$
square decimeters and square meters	$1 \text{ m}^2 = 100 \text{ dm}^2$	$\frac{100 \text{ dm}^2}{1 \text{ m}^2}$ or $\frac{1 \text{ m}^2}{100 \text{ dm}^2}$
square meters and ares (a)	$1 \text{ a} = 100 \text{ m}^2$	$\frac{100 \text{ m}^2}{1 \text{ a}}$ or $\frac{1 \text{ a}}{100 \text{ m}^2}$
ares and hectares (ha)	$1 \text{ ha} = 100 \text{ a}$	$\frac{100 \text{ a}}{1 \text{ ha}}$ or $\frac{1 \text{ ha}}{100 \text{ a}}$

4. A farmer has 55 acres of land. How many square feet of land does the farmer have?

5. A school is to be constructed on 960 acres of land. How many square miles is this?

Answers

4. 2,395,800 ft²
5. 1.5 mi²

6. How many square centimeters are in 1 square meter?

EXAMPLE 6

How many square millimeters are in 1 square meter?

SOLUTION We start with 1 m^2 and end up with square millimeters:

$$\begin{aligned} 1 \text{ m}^2 &= 1 \text{ m}^2 \times \frac{100 \text{ dm}^2}{1 \text{ m}^2} \times \frac{100 \text{ cm}^2}{1 \text{ dm}^2} \times \frac{100 \text{ mm}^2}{1 \text{ cm}^2} \\ &= 100 \times 100 \times 100 \text{ mm}^2 \\ &= 1,000,000 \text{ mm}^2 \end{aligned}$$

C Volume: The U.S. System

Table 3 lists the units of volume in the U.S. system and their conversion factors.

TABLE 3

UNITS OF VOLUME IN THE U.S. SYSTEM

The Relationship Between	Is	To Convert From One To The Other, Multiply By
cubic inches (in^3) and cubic feet (ft^3)	$1 \text{ ft}^3 = 1,728 \text{ in}^3$	$\frac{1,728 \text{ in}^3}{1 \text{ ft}^3}$ or $\frac{1 \text{ ft}^3}{1,728 \text{ in}^3}$
cubic feet and cubic yards (yd^3)	$1 \text{ yd}^3 = 27 \text{ ft}^3$	$\frac{27 \text{ ft}^3}{1 \text{ yd}^3}$ or $\frac{1 \text{ yd}^3}{27 \text{ ft}^3}$
fluid ounces (fl oz) and pints (pt)	$1 \text{ pt} = 16 \text{ fl oz}$	$\frac{16 \text{ fl oz}}{1 \text{ pt}}$ or $\frac{1 \text{ pt}}{16 \text{ fl oz}}$
pints and quarts (qt)	$1 \text{ qt} = 2 \text{ pt}$	$\frac{2 \text{ pt}}{1 \text{ qt}}$ or $\frac{1 \text{ qt}}{2 \text{ pt}}$
quarts and gallons (gal)	$1 \text{ gal} = 4 \text{ qt}$	$\frac{4 \text{ qt}}{1 \text{ gal}}$ or $\frac{1 \text{ gal}}{4 \text{ qt}}$

EXAMPLE 7

What is the capacity (volume) in pints of a 1-gallon container of milk?

SOLUTION We change from gallons to quarts and then quarts to pints by multiplying by the appropriate conversion factors as given in Table 3.

$$\begin{aligned} 1 \text{ gal} &= 1 \text{ gal} \times \frac{4 \text{ qt}}{1 \text{ gal}} \times \frac{2 \text{ pt}}{1 \text{ qt}} \\ &= 1 \times 4 \times 2 \text{ pt} \\ &= 8 \text{ pt} \end{aligned}$$



A 1-gallon container has the same capacity as 8 one-pint containers.

Answers

6. $10,000 \text{ cm}^2$ 7. 40 pt

EXAMPLE 8

A dairy herd produces 1,800 quarts of milk each day. How many gallons is this equivalent to?

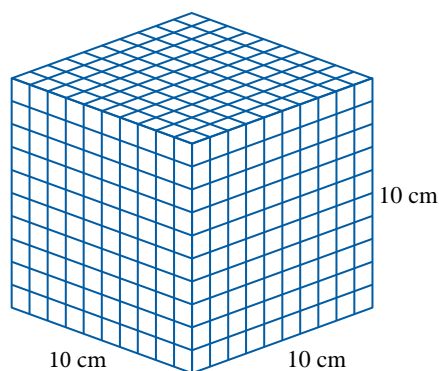
SOLUTION Converting 1,800 quarts to gallons, we have

$$\begin{aligned} 1,800 \text{ qt} &= 1,800 \text{ qt} \times \frac{1 \text{ gal}}{4 \text{ qt}} \\ &= \frac{1,800}{4} \text{ gal} \\ &= 450 \text{ gal} \end{aligned}$$

We see that 1,800 quarts is equivalent to 450 gallons. ■

D Volume: The Metric System

In the metric system the basic unit of measure for volume is the liter. A liter is the volume enclosed by a cube that is 10 cm on each edge, as shown in Figure 2. We can see that a liter is equivalent to $1,000 \text{ cm}^3$.



$$\begin{aligned} 1 \text{ liter} &= 10 \text{ cm} \times 10 \text{ cm} \times 10 \text{ cm} \\ &= 1,000 \text{ cm}^3 \end{aligned}$$

FIGURE 2

The other units of volume in the metric system use the same prefixes we encountered previously. The units with prefixes centi, deci, and deka are not as common as the others, so in Table 4 we include only liters, milliliters, hectoliters, and kiloliters.

TABLE 4

METRIC UNITS OF VOLUME		
The Relationship Between	Is	To Convert From One To The Other, Multiply By
milliliters (mL) and liters	1 liter (L) = 1,000 mL	$\frac{1,000 \text{ mL}}{1 \text{ liter}}$ or $\frac{1 \text{ liter}}{1,000 \text{ mL}}$
hectoliters (hL) and liters	100 liters = 1 hL	$\frac{100 \text{ liters}}{1 \text{ hL}}$ or $\frac{1 \text{ hL}}{100 \text{ liters}}$
kiloliters (kL) and liters	1,000 liters (L) = 1 kL	$\frac{1,000 \text{ liters}}{1 \text{ kL}}$ or $\frac{1 \text{ kL}}{1,000 \text{ liters}}$

Note As you can see from the table and the discussion above, a cubic centimeter (cm^3) and a milliliter (mL) are equal. Both are one thousandth of a liter. It is also common in some fields (like medicine) to abbreviate the term cubic centimeter as cc. Although we will use the notation mL when discussing volume in the metric system, you should be aware that $1 \text{ mL} = 1 \text{ cm}^3 = 1 \text{ cc}$.

Answer

8. 50 containers

8. A dairy herd produces 2,000 quarts of milk each day. How many 10-gallon containers will this milk fill?

9. A 3.5-liter engine will have a volume of how many milliliters?

Chapter 7 Measurement

Here is an example of conversion from one unit of volume to another in the metric system.

EXAMPLE 9

A sports car has a 2.2-liter engine. What is the displacement (volume) of the engine in milliliters?

SOLUTION Using the appropriate conversion factor from Table 4, we have

$$\begin{aligned} 2.2 \text{ liters} &= 2.2 \text{ liters} \times \frac{1,000 \text{ mL}}{1 \text{ liter}} \\ &= 2.2 \times 1,000 \text{ mL} \\ &= 2,200 \text{ mL} \end{aligned}$$

Getting Ready for Class

After reading through the preceding section, respond in your own words and in complete sentences.

- Write the formula for the area of each of the following:
 - a square of side s .
 - a rectangle with length l and width w .
- What is the relationship between square feet and square inches?
- Fill in the numerators below so that each conversion factor is equal to 1.

a. $\frac{\text{qt}}{1 \text{ gal}}$ b. $\frac{\text{mL}}{1 \text{ liter}}$ c. $\frac{\text{acres}}{1 \text{ mi}^2}$

- Write the conversion factor that will allow us to convert from square yards to square feet.

Answer

9. 3,500 mL

Problem Set 7.2

A Use the tables given in this section to make the following conversions. Be sure to show the conversion factor used in each case. [Examples 1–5]

1. 3 ft^2 to square inches
2. 5 ft^2 to square inches
3. 288 in^2 to square feet
4. 720 in^2 to square feet
5. 30 acres to square feet
6. 92 acres to square feet
7. 2 mi^2 to acres
8. 7 mi^2 to acres
9. 1,920 acres to square miles
10. 3,200 acres to square miles
11. 12 yd^2 to square feet
12. 20 yd^2 to square feet

B [Example 6]

13. 17 cm^2 to square millimeters
14. 150 mm^2 to square centimeters
15. 2.8 m^2 to square centimeters
16. 10 dm^2 to square millimeters
17. $1,200 \text{ mm}^2$ to square meters
18. 19.79 cm^2 to square meters
19. 5 a to square meters
20. 12 a to square centimeters
21. 7 ha to ares
22. 3.6 ha to ares
23. 342 a to hectares
24. 986 a to hectares

Make the following conversions using the conversion factors given in Tables 3 and 4.

C [Examples 7, 8]

25. 5 yd³ to cubic feet

26. 3.8 yd³ to cubic feet

27. 3 pt to fluid ounces

28. 8 pt to fluid ounces

29. 2 gal to quarts

30. 12 gal to quarts

31. 2.5 gal to pints

32. 7 gal to pints

33. 15 qt to fluid ounces

34. 5.9 qt to fluid ounces

35. 64 pt to gallons

36. 256 pt to gallons

37. 12 pt to quarts

38. 18 pt to quarts

39. 243 ft³ to cubic yards

40. 864 ft³ to cubic yards

D [Example 9]

41. 5 L to milliliters

42. 9.6 L to milliliters

43. 127 mL to liters

44. 93.8 mL to liters

45. 4 kL to milliliters

46. 3 kL to milliliters

47. 14.92 kL to liters


48. 4.71 kL to liters

■ Applying the Concepts

49. **Google Earth** The Google Earth map shows Yellowstone National Park. If the area of the park is roughly 3,402 square miles, how many acres does the park cover?



50. **Google Earth** The Google Earth image shows an aerial view of a crop circle found near Wroughton, England. If the crop circle has a radius of about 59 meters, how many acres does it cover? Round to the nearest acre.



51. **Swimming Pool** A public swimming pool measures 100 meters by 30 meters and is rectangular. What is the area of the pool in acres?
52. **Construction** A family decides to put tiles in the entryway of their home. The entryway has an area of 6 square meters. If each tile is 5 centimeters by 5 centimeters, how many tiles will it take to cover the entryway?
53. **Landscaping** A landscaper is putting in a brick patio. The area of the patio is 110 square meters. If the bricks measure 10 centimeters by 20 centimeters, how many bricks will it take to make the patio? Assume no space between bricks.
54. **Sewing** A dressmaker is using a pattern that requires 2 square yards of material. If the material is on a bolt that is 54 inches wide, how long a piece of material must be cut from the bolt to be sure there is enough material for the pattern?
55. **Filling Coffee Cups** If a regular-size coffee cup holds about $\frac{1}{2}$ pint, about how many cups can be filled from a 1-gallon coffee maker?
56. **Filling Glasses** If a regular-size drinking glass holds about 0.25 liter of liquid, how many glasses can be filled from a 750-milliliter container?
57. **Capacity of a Refrigerator** A refrigerator has a capacity of 20 cubic feet. What is the capacity of the refrigerator in cubic inches?
58. **Volume of a Tank** The gasoline tank on a car holds 18 gallons of gas. What is the volume of the tank in quarts?
59. **Filling Glasses** How many 8-fluid-ounce glasses of water will it take to fill a 3-gallon aquarium?
60. **Filling a Container** How many 5-milliliter test tubes filled with water will it take to fill a 1-liter container?

Calculator Problems

Set up the following problems as you have been doing. Then use a calculator to perform the actual calculations. Round answers to two decimal places where appropriate.

- 61. Geography** Lake Superior is the largest of the Great Lakes. It covers 31,700 square miles of area. What is the area of Lake Superior in acres?
- 62. Geography** The state of California consists of 156,360 square miles of land and 2,330 square miles of water. Write the total area (both land and water) in acres.
- 63. Geography** Death Valley National Monument contains 2,067,795 acres of land. How many square miles is this?
- 64. Geography** The Badlands National Monument in South Dakota was established in 1929. It covers 243,302 acres of land. What is the area in square miles?
- 65.** Convert 93.4 qt to gallons.
- 66.** Convert 7,362 fl oz to gallons.
- 67.** How many cubic feet are contained in 796 cubic yards?
- 68.** The engine of a car has a displacement of 440 cubic inches. What is the displacement in cubic feet?

Getting Ready for the Next Section

Perform the indicated operations.

- 69.** 12×16 **70.** 15×16 **71.** $3 \times 2,000$ **72.** $5 \times 2,000$
- 73.** $3 \times 1,000 \times 100$ **74.** $5 \times 1,000 \times 100$ **75.** $12,500 \times \frac{1}{1,000}$ **76.** $15,000 \times \frac{1}{1,000}$

Maintaining Your Skills

The following problems review addition and subtraction with fractions and mixed numbers.

- 77.** $\frac{3}{8} + \frac{1}{4}$ **78.** $\frac{1}{2} + \frac{1}{4}$ **79.** $3\frac{1}{2} + 5\frac{1}{2}$ **80.** $6\frac{7}{8} + 1\frac{5}{8}$
- 81.** $\frac{7}{15} - \frac{2}{15}$ **82.** $\frac{5}{8} - \frac{1}{4}$ **83.** $\frac{5}{36} - \frac{1}{48}$ **84.** $\frac{7}{39} - \frac{2}{65}$

Unit Analysis III: Weight

7.3

A Weights: The U.S. System

The most common units of weight in the U.S. system are ounces, pounds, and tons. The relationships among these units are given in Table 1.

The Relationship Between	Is	To Convert From One To The Other, Multiply By
ounces (oz) and pounds (lb)	1 lb = 16 oz	$\frac{16 \text{ oz}}{1 \text{ lb}}$ or $\frac{1 \text{ lb}}{16 \text{ oz}}$
pounds and tons (T)	1 T = 2,000 lb	$\frac{2,000 \text{ lb}}{1 \text{ T}}$ or $\frac{1 \text{ T}}{2,000 \text{ lb}}$

EXAMPLE 1

Convert 12 pounds to ounces.

SOLUTION Using the conversion factor from the table, and applying the method we have been using, we have

$$\begin{aligned} 12 \text{ lb} &= 12 \text{ lb} \times \frac{16 \text{ oz}}{1 \text{ lb}} \\ &= 12 \times 16 \text{ oz} \\ &= 192 \text{ oz} \end{aligned}$$

12 pounds is equivalent to 192 ounces. ■

EXAMPLE 2

Convert 3 tons to pounds.

SOLUTION We use the conversion factor from the table. We have

$$\begin{aligned} 3 \text{ T} &= 3 \text{ T} \times \frac{2,000 \text{ lb}}{1 \text{ T}} \\ &= 6,000 \text{ lb} \end{aligned}$$

6,000 pounds is the equivalent of 3 tons. ■

B Weights: The Metric System

In the metric system the basic unit of weight is a gram. We use the same prefixes we have already used to write the other units of weight in terms of grams. Table 2 lists the most common metric units of weight and their conversion factors.

The Relationship Between	Is	To Convert From One To The Other, Multiply By
milligrams (mg) and grams (g)	1 g = 1,000 mg	$\frac{1,000 \text{ mg}}{1 \text{ g}}$ or $\frac{1 \text{ g}}{1,000 \text{ mg}}$
centigrams (cg) and grams	1 g = 100 cg	$\frac{100 \text{ cg}}{1 \text{ g}}$ or $\frac{1 \text{ g}}{100 \text{ cg}}$
kilograms (kg) and grams	1,000 g = 1 kg	$\frac{1,000 \text{ g}}{1 \text{ kg}}$ or $\frac{1 \text{ kg}}{1,000 \text{ g}}$
metric tons (t) and kilograms	1,000 kg = 1 t	$\frac{1,000 \text{ kg}}{1 \text{ t}}$ or $\frac{1 \text{ t}}{1,000 \text{ kg}}$

Objectives

- A** Convert between weights using the U.S. system.
- B** Convert between weights using the metric system.

PRACTICE PROBLEMS

- Convert 15 pounds to ounces.
- Convert 5 tons to pounds.

Answers

- 240 oz
- 10,000 lb

3. Convert 5 kilograms to milligrams.

4. A bottle of vitamin C contains 75 tablets. If each tablet contains 200 milligrams of vitamin C, what is the total number of grams of vitamin C in the bottle?

EXAMPLE 3

Convert 3 kilograms to centigrams.

SOLUTION We convert kilograms to grams and then grams to centigrams:

$$\begin{aligned} 3 \text{ kg} &= 3 \text{ kg} \times \frac{1,000 \text{ g}}{1 \text{ kg}} \times \frac{100 \text{ cg}}{1 \text{ g}} \\ &= 3 \times 1,000 \times 100 \text{ cg} \\ &= 300,000 \text{ cg} \end{aligned}$$

EXAMPLE 4

A bottle of vitamin C contains 50 tablets. Each tablet contains 250 milligrams of vitamin C. What is the total number of grams of vitamin C in the bottle?

SOLUTION We begin by finding the total number of milligrams of vitamin C in the bottle. Since there are 50 tablets, and each contains 250 mg of vitamin C, we can multiply 50 by 250 to get the total number of milligrams of vitamin C:

$$\begin{aligned} \text{Milligrams of vitamin C} &= 50 \times 250 \text{ mg} \\ &= 12,500 \text{ mg} \end{aligned}$$

Next we convert 12,500 mg to grams:

$$\begin{aligned} 12,500 \text{ mg} &= 12,500 \text{ mg} \times \frac{1 \text{ g}}{1,000 \text{ mg}} \\ &= \frac{12,500}{1,000} \text{ g} \\ &= 12.5 \text{ g} \end{aligned}$$



The bottle contains 12.5 g of vitamin C.

Getting Ready for Class

After reading through the preceding section, respond in your own words and in complete sentences.

1. What is the relationship between pounds and ounces?
2. Write the conversion factor used to convert from pounds to ounces.
3. Write the conversion factor used to convert from milligrams to grams.
4. What is the relationship between grams and kilograms?

Answers

3. 5,000,000 mg 4. 15 g

Problem Set 7.3

Use the conversion factors in Tables 1 and 2 to make the following conversions.

A [Examples 1, 2]

1. 8 lb to ounces
2. 5 lb to ounces
3. 2 T to pounds
4. 5 T to pounds
5. 192 oz to pounds
6. 176 oz to pounds
7. 1,800 lb to tons
8. 10,200 lb to tons
9. 1 T to ounces
10. 3 T to ounces
11. $3\frac{1}{2}$ lb to ounces
12. $5\frac{1}{4}$ lb to ounces
13. $6\frac{1}{2}$ T to pounds
14. $4\frac{1}{5}$ T to pounds

B [Examples 3, 4]

15. 2 kg to grams
16. 5 kg to grams
17. 4 cg to milligrams
18. 3 cg to milligrams
19. 2 kg to centigrams
20. 5 kg to centigrams
21. 5.08 g to centigrams
22. 7.14 g to centigrams
23. 450 cg to grams
24. 979 cg to grams
25. 478.95 mg to centigrams
26. 659.43 mg to centigrams
27. 1,578 mg to grams
28. 1,979 mg to grams
29. 42,000 cg to kilograms
30. 97,000 cg to kilograms

Applying the Concepts

31. Fish Oil A bottle of fish oil contains 60 soft gels, each containing 800 mg of the omega-3 fatty acid. How many total grams of the omega-3 fatty acid are in this bottle?

32. Fish Oil A bottle of fish oil contains 50 soft gels, each containing 300 mg of the omega-6 fatty acid. How many total grams of the omega-6 fatty acid are in this bottle?



33. B-Complex A certain B-complex vitamin supplement contains 50 mg of riboflavin, or vitamin B₂. A bottle contains 80 vitamins. How many total grams of riboflavin are in this bottle?



34. B-Complex A certain B-complex vitamin supplement contains 30 mg of thiamine, or vitamin B₁. A bottle contains 80 vitamins. How many total grams of thiamine are in this bottle?

35. Aspirin A bottle of low-strength aspirin contains 120 tablets. Each tablet contains 81 mg of aspirin. How many total grams of aspirin are in this bottle?

36. Aspirin A bottle of maximum-strength aspirin contains 90 tablets. Each tablet contains 500 mg of aspirin. How many total grams of aspirin are in this bottle?



37. Vitamin C A certain brand of vitamin C contains 500 mg per tablet. A bottle contains 240 tablets. How many total grams of vitamin C are in this bottle?



38. Vitamin C A certain brand of vitamin C contains 600 mg per tablet. A bottle contains 150 vitamins. How many total grams of vitamin C are in this bottle?

Coca-Cola Bottles The soft drink Coke is sold throughout the world. Although the size of the bottle varies between different countries, a “six-pack” is sold everywhere. For each of the problems below, find the number of liters in a “6-pack” from the given bottle size.

Country	Bottle size	Liters in a 6-pack
39. Estonia	500 mL	
40. Israel	350 mL	
41. Jordan	250 mL	
42. Kenya	300 mL	

Paul A. Souders/Corbis



- 43. Nursing** A patient is prescribed a dosage of Ceclor® of 561 mg. How many grams is the dosage?
- 44. Nursing** A patient is prescribed a dosage of 425 mg. How many grams is the dosage?
- 45. Nursing** Dilatrate®-SR comes in 40 milligram capsules. Use this information to determine how many capsules should be given for the prescribed dosages.
- a. 120 mg
b. 40 mg
c. 80 mg
- 46. Nursing** A brand of methyldopa comes in 250 milligram tablets. Use this information to determine how many capsules should be given for the prescribed dosages.
- a. 0.125 gram
b. 750 milligrams
c. 0.5 gram

■ Getting Ready for the Next Section

Perform the indicated operations.

47. 8×2.54

48. 9×3.28

49. $3 \times 1.06 \times 2$

50. $3 \times 5 \times 3.79$

51. $80.5 \div 1.61$

52. $96.6 \div 1.61$

53. $125 \div 2.50$

54. $165 \div 2.20$

55. $2,000 \div 16.39$

(Round your answer to the nearest whole number.)

56. $2,200 \div 16.39$

(Round your answer to the nearest whole number.)

57. $\frac{9}{5}(120) + 32$

58. $\frac{9}{5}(40) + 32$

59. $\frac{5(102 - 30)}{9}$

60. $\frac{5(105 - 42)}{9}$

Maintaining Your Skills

Write each decimal as an equivalent proper fraction or mixed number.

61. 0.18

62. 0.04

63. 0.09

64. 0.045

65. 0.8

66. 0.08

67. 1.75

68. 3.125

Write each fraction or mixed number as a decimal.

69. $\frac{3}{4}$

70. $\frac{9}{10}$

71. $\frac{17}{20}$

72. $\frac{1}{8}$

73. $\frac{3}{5}$

74. $\frac{7}{8}$

75. $3\frac{5}{8}$

76. $1\frac{1}{16}$

Use the definition of exponents to simplify each expression.

77. $\left(\frac{1}{2}\right)^3$

78. $\left(\frac{5}{9}\right)^2$

79. $\left(2\frac{1}{2}\right)^2$

80. $\left(\frac{1}{3}\right)^4$

81. $(0.5)^3$

82. $(0.05)^3$

83. $(2.5)^2$

84. $(0.5)^4$

Converting Between the U.S. and Metric Systems and Temperature

7.4

Objectives

- A** Convert between the U.S. and Metric systems.
- B** Convert temperatures between the Fahrenheit and Celsius scales.

A Converting Between the U.S. and Metric Systems

Because most of us have always used the U.S. system of measurement in our everyday lives, we are much more familiar with it on an intuitive level than we are with the metric system. We have an intuitive idea of how long feet and inches are, how much a pound weighs, and what a square yard of material looks like. The metric system is actually much easier to use than the U.S. system. The reason some of us have such a hard time with the metric system is that we don't have the feel for it that we do for the U.S. system. We have trouble visualizing how long a meter is or how much a gram weighs. The following list is intended to give you something to associate with each basic unit of measurement in the metric system:

1. A meter is just a little longer than a yard.
2. The length of the edge of a sugar cube is about 1 centimeter.
3. A liter is just a little larger than a quart.
4. A sugar cube has a volume of approximately 1 milliliter.
5. A paper clip weighs about 1 gram.
6. A 2-pound can of coffee weighs about 1 kilogram.

TABLE 1

ACTUAL CONVERSION FACTORS BETWEEN THE METRIC AND U.S. SYSTEMS OF MEASUREMENT

The Relationship Between	Is	To Convert From One To The Other, Multiply By
Length		
inches and centimeters	$2.54 \text{ cm} = 1 \text{ in.}$	$\frac{2.54 \text{ cm}}{1 \text{ in.}}$ or $\frac{1 \text{ in.}}{2.54 \text{ cm}}$
feet and meters	$1 \text{ m} = 3.28 \text{ ft}$	$\frac{3.28 \text{ ft}}{1 \text{ m}}$ or $\frac{1 \text{ m}}{3.28 \text{ ft}}$
miles and kilometers	$1.61 \text{ km} = 1 \text{ mi}$	$\frac{1.61 \text{ km}}{1 \text{ mi}}$ or $\frac{1 \text{ mi}}{1.61 \text{ km}}$
Area		
square inches and square centimeters	$6.45 \text{ cm}^2 = 1 \text{ in}^2$	$\frac{6.45 \text{ cm}^2}{1 \text{ in}^2}$ or $\frac{1 \text{ in}^2}{6.45 \text{ cm}^2}$
square meters and square yards	$1.196 \text{ yd}^2 = 1 \text{ m}^2$	$\frac{1.196 \text{ yd}^2}{1 \text{ m}^2}$ or $\frac{1 \text{ m}^2}{1.196 \text{ yd}^2}$
acres and hectares	$1 \text{ ha} = 2.47 \text{ acres}$	$\frac{2.47 \text{ acres}}{1 \text{ ha}}$ or $\frac{1 \text{ ha}}{2.47 \text{ acres}}$
Volume		
cubic inches and milliliters	$16.39 \text{ mL} = 1 \text{ in}^3$	$\frac{16.39 \text{ mL}}{1 \text{ in}^3}$ or $\frac{1 \text{ in}^3}{16.39 \text{ mL}}$
liters and quarts	$1.06 \text{ qt} = 1 \text{ liter}$	$\frac{1.06 \text{ qt}}{1 \text{ liter}}$ or $\frac{1 \text{ liter}}{1.06 \text{ qt}}$
gallons and liters	$3.79 \text{ liters} = 1 \text{ gal}$	$\frac{3.79 \text{ liters}}{1 \text{ gal}}$ or $\frac{1 \text{ gal}}{3.79 \text{ liters}}$
Weight		
ounces and grams	$28.3 \text{ g} = 1 \text{ oz}$	$\frac{28.3 \text{ g}}{1 \text{ oz}}$ or $\frac{1 \text{ oz}}{28.3 \text{ g}}$
kilograms and pounds	$2.20 \text{ lb} = 1 \text{ kg}$	$\frac{2.20 \text{ lb}}{1 \text{ kg}}$ or $\frac{1 \text{ kg}}{2.20 \text{ lb}}$

There are many other conversion factors that we could have included in Table 1. We have listed only the most common ones. Almost all of them are approximations. That is, most of the conversion factors are decimals that have been rounded to the nearest hundredth. If we want more accuracy, we obtain a table that has more digits in the conversion factors.

PRACTICE PROBLEMS

- Convert 10 inches to centimeters.
- Convert 16.4 feet to meters.
- Convert 10 liters to gallons. Round to the nearest hundredth.
- The engine in a car has a 2.2-liter displacement. What is the displacement in cubic inches (to the nearest cubic inch)?

Answers

1. 25.4 cm 2. 5 m
3. 2.64 gal 4. 134 in³

EXAMPLE 1

Convert 8 inches to centimeters.

SOLUTION Choosing the appropriate conversion factor from Table 1, we have

$$\begin{aligned} 8 \text{ in.} &= 8 \text{ in.} \times \frac{2.54 \text{ cm}}{1 \text{ in.}} \\ &= 8 \times 2.54 \text{ cm} \\ &= 20.32 \text{ cm} \end{aligned}$$

EXAMPLE 2

Convert 80.5 kilometers to miles.

SOLUTION Using the conversion factor that takes us from kilometers to miles, we have

$$\begin{aligned} 80.5 \text{ km} &= 80.5 \text{ km} \times \frac{1 \text{ mi}}{1.61 \text{ km}} \\ &= \frac{80.5}{1.61} \text{ mi} \\ &= 50 \text{ mi} \end{aligned}$$

So 50 miles is equivalent to 80.5 kilometers. If we travel at 50 miles per hour in a car, we are moving at the rate of 80.5 kilometers per hour.

EXAMPLE 3

Convert 3 liters to pints.

SOLUTION Because Table 1 doesn't list a conversion factor that will take us directly from liters to pints, we first convert liters to quarts, and then convert quarts to pints.

$$\begin{aligned} 3 \text{ liters} &= 3 \text{ liters} \times \frac{1.06 \text{ qt}}{1 \text{ liter}} \times \frac{2 \text{ pt}}{1 \text{ qt}} \\ &= 3 \times 1.06 \times 2 \text{ pt} \\ &= 6.36 \text{ pt} \end{aligned}$$

EXAMPLE 4

The engine in a car has a 2-liter displacement. What is the displacement in cubic inches?

SOLUTION We convert liters to milliliters and then milliliters to cubic inches:

$$\begin{aligned} 2 \text{ liters} &= 2 \text{ liters} \times \frac{1,000 \text{ mL}}{1 \text{ liter}} \times \frac{1 \text{ in}^3}{16.39 \text{ mL}} \\ &= \frac{2 \times 1,000}{16.39} \text{ in}^3 && \text{This calculation should be done on a calculator} \\ &= 122 \text{ in}^3 && \text{To the nearest cubic inch} \end{aligned}$$

EXAMPLE 5

If a person weighs 125 pounds, what is her weight in kilograms?

SOLUTION Converting from pounds to kilograms, we have

$$\begin{aligned} 125 \text{ lb} &= 125 \text{ lb} \times \frac{1 \text{ kg}}{2.20 \text{ lb}} \\ &= \frac{125}{2.20} \text{ kg} \\ &= 56.8 \text{ kg} \quad \text{To the nearest tenth} \end{aligned}$$

**B Temperature**

We end this section with a discussion of temperature in both systems of measurement.

In the U.S. system we measure temperature on the Fahrenheit scale. On this scale, water boils at 212 degrees and freezes at 32 degrees. When we write 32 degrees measured on the Fahrenheit scale, we use the notation

32°F (read, “32 degrees Fahrenheit.”)

In the metric system the scale we use to measure temperature is the Celsius scale (formerly called the centigrade scale). On this scale, water boils at 100 degrees and freezes at 0 degrees. When we write 100 degrees measured on the Celsius scale, we use the notation

100°C (read, “100 degrees Celsius.”)

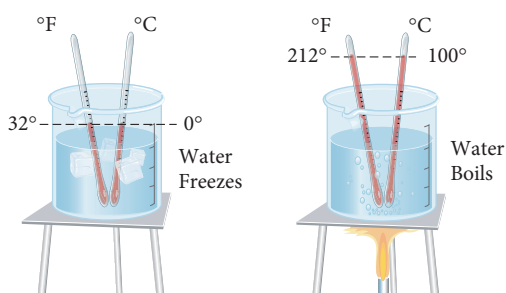


Table 2 is intended to give you a feel for the relationship between the two temperature scales. Table 3 gives the formulas, in both symbols and words, that are used to convert between the two scales.

TABLE 2

Situation	Temperature Fahrenheit	Temperature Celsius
Water freezes	32°F	0°C
Room temperature	68°F	20°C
Normal body temperature	98.6°F	37°C
Water boils	212°F	100°C
Bake cookies	350°F	176.7°C
Broil meat	554°F	290°C

5. A person who weighs 165 pounds weighs how many kilograms?

Answer
5. 75 kg

TABLE 3

To Convert From	Formula In Symbols	Formula In Words
Fahrenheit to Celsius	$C = \frac{5(F - 32)}{9}$	Subtract 32, multiply by 5, and then divide by 9.
Celsius to Fahrenheit	$F = \frac{9}{5}C + 32$	Multiply by $\frac{9}{5}$, and then add 32.

The following examples show how we use the formulas given in Table 3.

EXAMPLE 6

Convert 120°C to degrees Fahrenheit.

SOLUTION We use the formula

$$F = \frac{9}{5}C + 32$$

and replace C with 120:

$$\begin{aligned} \text{When} \quad C &= 120 \\ \text{the formula} \quad F &= \frac{9}{5}C + 32 \\ \text{becomes} \quad F &= \frac{9}{5}(120) + 32 \\ &= 216 + 32 \\ &= 248 \end{aligned}$$

We see that 120°C is equivalent to 248°F ; they both mean the same temperature.

EXAMPLE 7

A man with the flu has a temperature of 102°F . What is his temperature on the Celsius scale?

SOLUTION When $F = 102$

$$\begin{aligned} \text{the formula} \quad C &= \frac{5(F - 32)}{9} \\ \text{becomes} \quad C &= \frac{5(102 - 32)}{9} \\ &= \frac{5(70)}{9} \\ C &= 38.9 \end{aligned}$$

Rounded to the nearest tenth

The man's temperature, rounded to the nearest tenth, is 38.9°C on the Celsius scale.

Getting Ready for Class

After reading through the preceding section, respond in your own words and in complete sentences.

- Write the equality that gives the relationship between centimeters and inches.
- Write the equality that gives the relationship between grams and ounces.
- Fill in the numerators below so that each conversion factor is equal to 1.

$$\text{a. } \frac{\text{ft}}{1 \text{ meter}} \quad \text{b. } \frac{\text{qt}}{1 \text{ liter}} \quad \text{c. } \frac{\text{lb}}{1 \text{ kg}}$$

- Is it a hot day if the temperature outside is 37°C ?

- Convert 40°C to degrees Fahrenheit.

- A child is running a temperature of 101.6°F . What is her temperature, to the nearest tenth of a degree, on the Celsius scale?

Answers

6. 104°F 7. 38.7°C


Problem Set 7.4

A B Use Tables 1 and 3 to make the following conversions. [Examples 1–7]

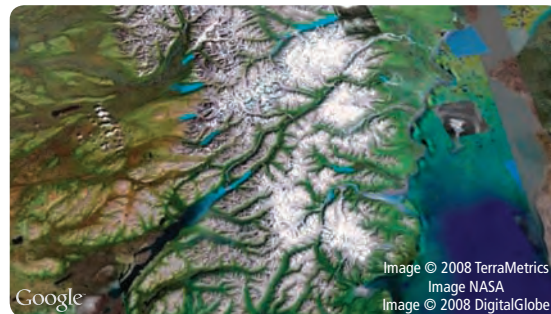
- 6 in. to centimeters
- 1 ft to centimeters
- 4 m to feet
- 2 km to feet
- 6 m to yards
- 15 mi to kilometers
- 20 mi to meters (round to the nearest hundred meters)
- 600 m to yards
- 5 m² to square yards (round to the nearest hundredth)
- 2 in² to square centimeters (round to the nearest tenth)
- 10 ha to acres
- 50 a to acres
- 500 in³ to milliliters
- 400 in³ to liters
- 2 L to quarts
- 15 L to quarts
- 20 gal to liters
- 15 gal to liters
- 12 oz to grams
- 1 lb to grams (round to the nearest 10 grams)
- 15 kg to pounds
- 10 kg to ounces
- 185°C to degrees Fahrenheit
- 20°C to degrees Fahrenheit
- 86°F to degrees Celsius
- 122°F to degrees Celsius

Applying the Concepts

27. **Temperature** The chart shows the temperatures for some of the world's hottest places. Convert the temperature in Al'Aziziyah to Celsius.



28. **Google Earth** The Google Earth image is of Lake Clark National Park in Alaska. Lake Clark has an average temperature of 40 degrees Fahrenheit. What is its average temperature in Celsius to the nearest degree?



Nursing Liquid medication is usually given in milligrams per milliliter. Use the information to find the amount a patient should take for a prescribed dosage.

29. Vantin® has a dosage strength of 100 mg/5 mL. If a patient is prescribed a dosage of 150 mg, how many milliliters should she take?
30. A brand of amoxicillin has a dosage strength of 125 mg/5 mL. If a patient is prescribed a dosage of 25 mg, how many milliliters should she take?

Calculator Problems

Set up the following problems as we have set up the examples in this section. Then use a calculator for the calculations and round your answers to the nearest hundredth.

31. 10 cm to inches
32. 100 mi to kilometers
33. 25 ft to meters
34. 400 mL to cubic inches
35. 49 qt to liters
36. 65 L to gallons
37. 500 g to ounces
38. 100 lb to kilograms

- 39. Weight** Give your weight in kilograms.
- 40. Height** Give your height in meters and centimeters.
- 41. Sports** The 100-yard dash is a popular race in track. How far is 100 yards in meters?
- 42. Engine Displacement** A 351-cubic-inch engine has a displacement of how many liters?
- 43. Sewing** 25 square yards of material is how many square meters?
- 44. Weight** How many grams does a 5 lb 4 oz roast weigh?
- 45. Speed** 55 miles per hour is equivalent to how many kilometers per hour?
- 46. Capacity** A 1-quart container holds how many liters?
- 47. Sports** A high jumper jumps 6 ft 8 in. How many meters is this?
- 48. Farming** A farmer owns 57 acres of land. How many hectares is that?
- 49. Body Temperature** A person has a temperature of 101°F . What is the person's temperature, to the nearest tenth, on the Celsius scale?
- 50. Air Temperature** If the temperature outside is 30°C , is it a better day for water skiing or for snow skiing?

■ Getting Ready for the Next Section

Perform the indicated operations.

51. $15 + 60$

52. $25 + 60$

53.
$$\begin{array}{r} 37 \\ + 45 \\ \hline \end{array}$$

54.
$$\begin{array}{r} 27 \\ + 46 \\ \hline \end{array}$$

55. $3 + 0.25$

56. $2 + 0.75$

57. $82 - 60$

58. $73 - 60$

59.
$$\begin{array}{r} 75 \\ - 34 \\ \hline \end{array}$$

60.
$$\begin{array}{r} 85 \\ - 42 \\ \hline \end{array}$$

61. 12×4

62. 8×4

63. $3 \times 60 + 15$

64. $2 \times 65 + 45$

65. $3 + 17 \times \frac{1}{65}$

66. $2 + 45 \times \frac{1}{60}$

- 67.** If fish costs \$6.00 per pound, find the cost of 15 pounds.
- 68.** If fish costs \$5.00 per pound, find the cost of 14 pounds.

■ Maintaining Your Skills

Find the mean and the range for each set of numbers.

69. 5, 7, 9, 11

70. 6, 8, 10, 12

71. 1, 4, 5, 10, 10

72. 2, 4, 4, 6, 9

Find the median and the range for each set of numbers.

73. 15, 18, 21, 24, 29

74. 20, 30, 35, 45, 50

75. 32, 38, 42, 48

76. 53, 61, 67, 75

Find the mode and the range for each set of numbers.

77. 20, 15, 14, 13, 14, 18

78. 17, 31, 31, 26, 31, 29

79. A student has quiz scores of 65, 72, 70, 88, 70, and 73.

Find each of the following:

a. mean score

b. median score

c. mode of the scores

d. range of scores

80. A person has bowling scores of 207, 224, 195, 207, 185, and 182. Find each of the following:

a. mean score

b. median score

c. mode of the scores

d. range of scores

■ Extending the Concepts


Nursing For children, the amount of medicine prescribed is often determined by the child's weight. Usually, it is calculated from the milligrams per kilogram per day listed on the medication's box.

81. Ceclor[®] has a dosage strength of 250 mg/mL. How much should a 42 lb child be given a day if the dosage is 20 mg/kg/day? How many milliliters is that?

Operations with Time and Mixed Units

7.5

Many occupations require the use of a time card. A time card records the number of hours and minutes at work. At the end of a work week the hours and minutes are totaled separately, and then the minutes are converted to hours.



In this section we will perform operations with mixed units of measure. Mixed units are used when we use 2 hours 30 minutes, rather than two and a half hours, or 5 feet 9 inches, rather than five and three-quarter feet. As you will see, many of these types of problems arise in everyday life.

A Converting Time to Single Units

The Relationship Between	is	To Convert from One to the Other, Multiply by
minutes and seconds	1 min = 60 sec	$\frac{1 \text{ min}}{60 \text{ sec}}$ or $\frac{60 \text{ sec}}{1 \text{ min}}$
hours and minutes	1 hr = 60 min	$\frac{1 \text{ hr}}{60 \text{ min}}$ or $\frac{60 \text{ min}}{1 \text{ hr}}$

EXAMPLE 1

Convert 3 hours 15 minutes to

- a. Minutes b. Hours

SOLUTION a. To convert to minutes, we multiply the hours by the conversion factor and then add minutes:

$$\begin{aligned} 3 \text{ hr } 15 \text{ min} &= 3 \text{ hr} \times \frac{60 \text{ min}}{1 \text{ hr}} + 15 \text{ min} \\ &= 180 \text{ min} + 15 \text{ min} \\ &= 195 \text{ min} \end{aligned}$$

b. To convert to hours, we multiply the minutes by the conversion factor and then add hours:

$$\begin{aligned} 3 \text{ hr } 15 \text{ min} &= 3 \text{ hr} + 15 \text{ min} \times \frac{1 \text{ hr}}{60 \text{ min}} \\ &= 3 \text{ hr} + 0.25 \text{ hr} \\ &= 3.25 \text{ hr} \end{aligned}$$

B Addition and Subtraction with Mixed Units

EXAMPLE 2

Add 5 minutes 37 seconds and 7 minutes 45 seconds.

SOLUTION First, we align the units properly

$$\begin{array}{r} 5 \text{ min } 37 \text{ sec} \\ + 7 \text{ min } 45 \text{ sec} \\ \hline 12 \text{ min } 82 \text{ sec} \end{array}$$

Since there are 60 seconds in every minute, we write 82 seconds as 1 minute 22 seconds. We have

$$\begin{aligned} 12 \text{ min } 82 \text{ sec} &= 12 \text{ min} + 1 \text{ min } 22 \text{ sec} \\ &= 13 \text{ min } 22 \text{ sec} \end{aligned}$$

Objectives

- A** Convert mixed units to a single unit.
- B** Add and subtract mixed units.
- C** Use multiplication with mixed units.

PRACTICE PROBLEMS

1. Convert 2 hours 45 minutes to
a. Minutes b. Hours

2. Add 4 min. 27 sec. and 8 min. 46 sec.

Answers

1. a. 165 minutes b. 2.75 hours
2. 13 min 13 sec

3. Subtract 42 min from 6 hr 25 min.

4. Rob is purchasing 4 halibut. The fish cost \$5.00 per pound, and each weighs 3 lb 8 oz. What is the cost of the fish?

The idea of adding the units separately is similar to adding mixed fractions. That is, we align the whole numbers with the whole numbers and the fractions with the fractions.

Similarly, when we subtract units of time, we “borrow” 60 seconds from the minutes column, or 60 minutes from the hours column.

EXAMPLE 3

Subtract 34 minutes from 8 hours 15 minutes.

SOLUTION Again, we first line up the numbers in the hours column, and then the numbers in the minutes column:

$$\begin{array}{r} 8 \text{ hr} \quad 15 \text{ min} \\ - \quad \quad 34 \text{ min} \\ \hline 7 \text{ hr} \quad 75 \text{ min} \\ - \quad \quad 34 \text{ min} \\ \hline 7 \text{ hr} \quad 41 \text{ min} \end{array}$$

C Multiplication with Mixed Units

Next we see how to multiply and divide using units of measure.

EXAMPLE 4

Jake purchases 4 halibut. The fish cost \$6.00 per pound, and each weighs 3 lb 12 oz. What is the cost of the fish?

SOLUTION First, we multiply each unit by 4, the number of halibut purchased:

$$\begin{array}{r} 3 \text{ lb} \quad 12 \text{ oz} \\ \times \quad \quad 4 \\ \hline 12 \text{ lb} \quad 48 \text{ oz} \end{array}$$

To convert the 48 ounces to pounds, we multiply the ounces by the conversion factor.

$$\begin{aligned} 12 \text{ lb } 48 \text{ oz} &= 12 \text{ lb} + 48 \text{ oz} \times \frac{1 \text{ lb}}{16 \text{ oz}} \\ &= 12 \text{ lb} + 3 \text{ lb} \\ &= 15 \text{ lb} \end{aligned}$$

Finally, we multiply the 15 lb and \$6.00/lb for a total price of \$90.00

Getting Ready for Class

After reading through the preceding section, respond in your own words and in complete sentences.

1. Explain the difference between saying *two and a half hours* and saying *2 hours and 30 minutes*.
2. How are operations with mixed units of measure similar to operations with mixed numbers?
3. Why do we borrow a 60 from the minutes column for the seconds column when subtracting in Example 3?
4. Give an example of when you may have to use multiplication with mixed units of measure.

Answers

3. 5 hr 43 min 4. \$70

Problem Set 7.5

A Use the tables of conversion factors given in this section and other sections in this chapter to make the following conversions. (Round your answers to the nearest hundredth.) [Example 1]

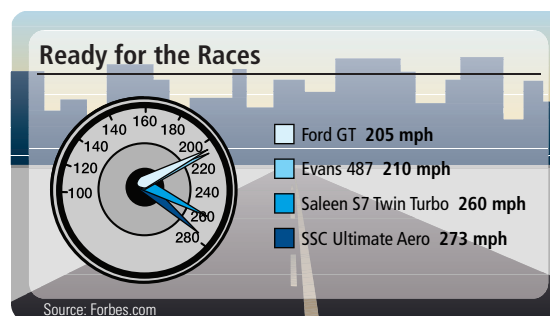
1. 4 hours 30 minutes to
 - a. Minutes
 - b. Hours
2. 2 hours 45 minutes to
 - a. Minutes
 - b. Hours
3. 5 hours 20 minutes to
 - a. Minutes
 - b. Hours
4. 4 hours 40 minutes to
 - a. Minutes
 - b. Hours
5. 6 minutes 30 seconds to
 - a. Seconds
 - b. Minutes
6. 8 minutes 45 seconds to
 - a. Seconds
 - b. Minutes
7. 5 minutes 20 seconds to
 - a. Seconds
 - b. Minutes
8. 4 minutes 40 seconds to
 - a. Seconds
 - b. Minutes
9. 2 pounds 8 ounces to
 - a. Ounces
 - b. Pounds
10. 3 pounds 4 ounces to
 - a. Ounces
 - b. Pounds
11. 4 pounds 12 ounces to
 - a. Ounces
 - b. Pounds
12. 5 pounds 16 ounces to
 - a. Ounces
 - b. Pounds
13. 4 feet 6 inches to
 - a. Inches
 - b. Feet
14. 3 feet 3 inches to
 - a. Inches
 - b. Feet
15. 5 feet 9 inches to
 - a. Inches
 - b. Feet
16. 3 feet 4 inches to
 - a. Inches
 - b. Feet
17. 2 gallons 1 quart
 - a. Quarts
 - b. Gallons
18. 3 gallons 2 quarts
 - a. Quarts
 - b. Gallons

B Perform the indicated operation. Again, remember to use the appropriate conversion factor. [Examples 2, 3]

19. Add 4 hours 47 minutes and 6 hours 13 minutes. 20. Add 5 hours 39 minutes and 2 hours 21 minutes.
21. Add 8 feet 10 inches and 13 feet 6 inches 22. Add 16 feet 7 inches and 7 feet 9 inches.
23. Add 4 pounds 12 ounces and 6 pounds 4 ounces. 24. Add 11 pounds 9 ounces and 3 pounds 7 ounces.
25. Subtract 2 hours 35 minutes from 8 hours 15 minutes. 26. Subtract 3 hours 47 minutes from 5 hours 33 minutes.
27. Subtract 3 hours 43 minutes from 7 hours 30 minutes. 28. Subtract 1 hour 44 minutes from 6 hours 22 minutes.
29. Subtract 4 hours 17 minutes from 5 hours 9 minutes. 30. Subtract 2 hours 54 minutes from 3 hours 7 minutes.

■ Applying the Concepts

31. **Fifth Avenue Mile** The chart shows the times of the five fastest runners for 2005's Continental Airlines Fifth Avenue Mile. How much faster was Craig Mottram than Rui Silva?
32. **Cars** The chart shows the fastest cars in America. Convert the speed of the Ford GT to feet per second. Round to the nearest tenth.



Triathlon The Ironman Triathlon World Championship, held each October in Kona on the island of Hawaii, consists of three parts: a 2.4-mile ocean swim, a 112-mile bike race, and a 26.2-mile marathon. The table shows the results from the 2003 event.

Triathlete	Swim Time (Hr:Min:Sec)	Bike Time (Hr:Min:Sec)	Run Time (Hr:Min:Sec)	Total Time (Hr:Min:Sec)
Peter Reid	0:50:36	4:40:04	2:47:38	
Lori Bowden	0:56:51	5:09:00	3:02:10	



33. Fill in the total time column.

34. How much faster was Peter's total time than Lori's?

35. How much faster was Peter than Lori in the swim?

36. How much faster was Peter than Lori in the run?

C [Example 4]

37. **Cost of Fish** Fredrick is purchasing four whole salmon. The fish cost \$4.00 per pound, and each weighs 6 lb 8 oz. What is the cost of the fish?

38. **Cost of Steak** Mike is purchasing eight top sirloin steaks. The meat costs \$4.00 per pound, and each steak weighs 1 lb 4 oz. What is the total cost of the steaks?

39. **Stationary Bike** Maggie rides a stationary bike for 1 hour and 15 minutes, 4 days a week. After 2 weeks, how many hours has she spent riding the stationary bike?

40. **Gardening** Scott works in his garden for 1 hour and 5 minutes, 3 days a week. After 4 weeks, how many hours has Scott spent gardening?

41. **Cost of Fabric** Allison is making a quilt. She buys 3 yards and 1 foot each of six different fabrics. The fabrics cost \$7.50 a yard. How much will Allison spend?

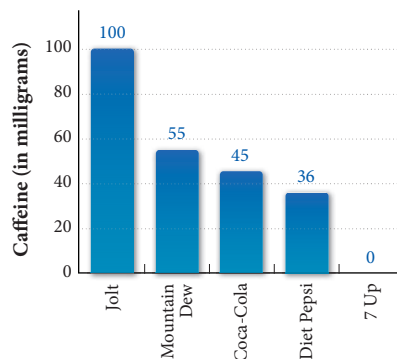
42. **Cost of Lumber** Trish is building a fence. She buys six fence posts at the lumberyard, each measuring 5 ft 4 in. The lumber costs \$3 per foot. How much will Trish spend?

43. **Cost of Avocados** Jacqueline is buying six avocados. Each avocado weighs 8 oz. How much will they cost her if avocados cost \$2.00 a pound?

44. **Cost of Apples** Mary is purchasing 12 apples. Each apple weighs 4 oz. If the cost of the apples is \$1.50 a pound, how much will Mary pay?

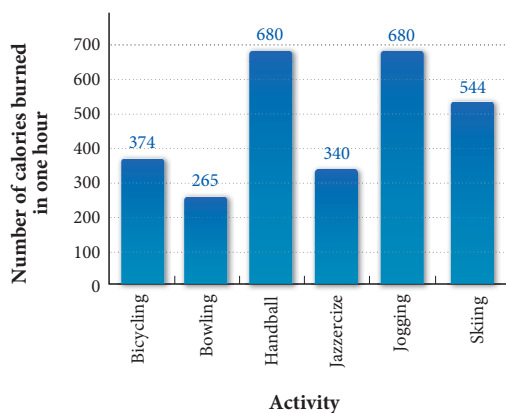
Maintaining Your Skills

45. **Caffeine Content** The following bar chart shows the amount of caffeine in five different soft drinks. Use the information in the bar chart to fill in the table.



CAFFEINE CONTENT IN SOFT DRINKS	
Drink	Caffeine (In Milligrams)
Jolt	_____
Mountain Dew	_____
Coca-Cola	_____
Diet Pepsi	_____
7 Up	_____

46. **Exercise** The following bar chart shows the number of calories burned in 1 hour of exercise by a person who weighs 150 pounds. Use the information in the bar chart to fill in the table.



CALORIES BURNED BY A 150-POUND PERSON IN ONE HOUR	
Activity	Calories
Bicycling	_____
Bowling	_____
Handball	_____
Jazzercise	_____
Jogging	_____
Skiing	_____

Extending the Concepts

47. In 2003, the horse Funny Cide won the Kentucky Derby with a time of 2:01.19, or two minutes and 1.19 seconds. The record time for the Kentucky Derby is still held by Secretariat, who won the race with a time of 1:59.40 in 1973. How much faster did Secretariat run than Funny Cide 30 years later?
48. In 2003, the horse Empire Maker won the Belmont Stakes with a time of 2:28.20, or two minutes and 28.2 seconds. The record time for the Belmont Stakes is still held by Secretariat, who won the race with a time of 2:24.00 in 1973. How much faster did Secretariat run in 1973 than Empire Maker 30 years later?



Chapter 7 Summary

Conversion Factors [7.1, 7.2, 7.3, 7.4, 7.5]

To convert from one kind of unit to another, we choose an appropriate conversion factor from one of the tables given in this chapter. For example, if we want to convert 5 feet to inches, we look for conversion factors that give the relationship between feet and inches. There are two conversion factors for feet and inches:

$$\frac{12 \text{ in}}{1 \text{ ft}} \quad \text{and} \quad \frac{1 \text{ ft}}{12 \text{ in}}$$

Length [7.1]

U.S. SYSTEM		
The Relationship Between	Is	To Convert From One To The Other, Multiply By
feet and inches	12 in. = 1 ft	$\frac{12 \text{ in.}}{1 \text{ ft}}$ or $\frac{1 \text{ ft}}{12 \text{ in.}}$
feet and yards	1 yd = 3 ft	$\frac{3 \text{ ft}}{1 \text{ yd}}$ or $\frac{1 \text{ yd}}{3 \text{ ft}}$
feet and miles	1 mi = 5,280 ft	$\frac{5,280 \text{ ft}}{1 \text{ mi}}$ or $\frac{1 \text{ mi}}{5,280 \text{ ft}}$

METRIC SYSTEM		
The Relationship Between	Is	To Convert From One To The Other, Multiply By
millimeters (mm) and meters (m)	1,000 mm = 1 m	$\frac{1,000 \text{ mm}}{1 \text{ m}}$ or $\frac{1 \text{ m}}{1,000 \text{ mm}}$
centimeters (cm) and meters	100 cm = 1 m	$\frac{100 \text{ cm}}{1 \text{ m}}$ or $\frac{1 \text{ m}}{100 \text{ cm}}$
decimeters (dm) and meters	10 dm = 1 m	$\frac{10 \text{ dm}}{1 \text{ m}}$ or $\frac{1 \text{ m}}{10 \text{ dm}}$
dekameters (dam) and meters	1 dam = 10 m	$\frac{10 \text{ m}}{1 \text{ dam}}$ or $\frac{1 \text{ dam}}{10 \text{ m}}$
hectometers (hm) and meters	1 hm = 100 m	$\frac{100 \text{ m}}{1 \text{ hm}}$ or $\frac{1 \text{ hm}}{100 \text{ m}}$
kilometers (km) and meters	1 km = 1,000 m	$\frac{1,000 \text{ m}}{1 \text{ km}}$ or $\frac{1 \text{ km}}{1,000 \text{ m}}$

EXAMPLES

1. Convert 5 feet to inches.

$$\begin{aligned} 5 \text{ ft} &= 5 \text{ ft} \times \frac{12 \text{ in.}}{1 \text{ ft}} \\ &= 5 \times 12 \text{ in.} \\ &= 60 \text{ in.} \end{aligned}$$

2. Convert 8 feet to yards.

$$\begin{aligned} 8 \text{ ft} &= 8 \text{ ft} \times \frac{1 \text{ yd}}{3 \text{ ft}} \\ &= \frac{8}{3} \text{ yd} \\ &= 2\frac{2}{3} \text{ yd} \end{aligned}$$

3. Convert 25 millimeters to meters.

$$\begin{aligned} 25 \text{ mm} &= 25 \text{ mm} \times \frac{1 \text{ m}}{1,000 \text{ mm}} \\ &= \frac{25 \text{ m}}{1,000} \\ &= 0.025 \text{ m} \end{aligned}$$

4. Convert 256 acres to square miles.

$$\begin{aligned} 256 \text{ acres} &= 256 \text{ acres} \times \frac{1 \text{ mi}^2}{640 \text{ acres}} \\ &= \frac{256}{640} \text{ mi}^2 \\ &= 0.4 \text{ mi}^2 \end{aligned}$$

Area [7.2]

U.S. SYSTEM		
The Relationship Between	Is	To Convert From One To The Other, Multiply By
square inches and square feet	$144 \text{ in}^2 = 1 \text{ ft}^2$	$\frac{144 \text{ in}^2}{1 \text{ ft}^2}$ or $\frac{1 \text{ ft}^2}{144 \text{ in}^2}$
square yards and square feet	$9 \text{ ft}^2 = 1 \text{ yd}^2$	$\frac{9 \text{ ft}^2}{1 \text{ yd}^2}$ or $\frac{1 \text{ yd}^2}{9 \text{ ft}^2}$
acres and square feet	$1 \text{ acre} = 43,560 \text{ ft}^2$	$\frac{43,560 \text{ ft}^2}{1 \text{ acre}}$ or $\frac{1 \text{ acre}}{43,560 \text{ ft}^2}$
acres and square miles	$640 \text{ acres} = 1 \text{ mi}^2$	$\frac{640 \text{ acres}}{1 \text{ mi}^2}$ or $\frac{1 \text{ mi}^2}{640 \text{ acres}}$

METRIC SYSTEM		
The Relationship Between	Is	To Convert From One To The Other, Multiply By
square millimeters and square centimeters	$1 \text{ cm}^2 = 100 \text{ mm}^2$	$\frac{100 \text{ mm}^2}{1 \text{ cm}^2}$ or $\frac{1 \text{ cm}^2}{100 \text{ mm}^2}$
square centimeters and square decimeters	$1 \text{ dm}^2 = 100 \text{ cm}^2$	$\frac{100 \text{ cm}^2}{1 \text{ dm}^2}$ or $\frac{1 \text{ dm}^2}{100 \text{ cm}^2}$
square decimeters and square meters	$1 \text{ m}^2 = 100 \text{ dm}^2$	$\frac{100 \text{ dm}^2}{1 \text{ m}^2}$ or $\frac{1 \text{ m}^2}{100 \text{ dm}^2}$
square meters and ares (a)	$1 \text{ a} = 100 \text{ m}^2$	$\frac{100 \text{ m}^2}{1 \text{ a}}$ or $\frac{1 \text{ a}}{100 \text{ m}^2}$
ares and hectares (ha)	$1 \text{ ha} = 100 \text{ a}$	$\frac{100 \text{ a}}{1 \text{ ha}}$ or $\frac{1 \text{ ha}}{100 \text{ a}}$

Volume [7.2]

U.S. SYSTEM		
The Relationship Between	Is	To Convert From One To The Other, Multiply By
cubic inches (in^3) and cubic feet (ft^3)	$1 \text{ ft}^3 = 1,728 \text{ in}^3$	$\frac{1,728 \text{ in}^3}{1 \text{ ft}^3}$ or $\frac{1 \text{ ft}^3}{1,728 \text{ in}^3}$
cubic feet and cubic yards (yd^3)	$1 \text{ yd}^3 = 27 \text{ ft}^3$	$\frac{27 \text{ ft}^3}{1 \text{ yd}^3}$ or $\frac{1 \text{ yd}^3}{27 \text{ ft}^3}$
fluid ounces (fl oz) and pints (pt)	$1 \text{ pt} = 16 \text{ fl oz}$	$\frac{16 \text{ fl oz}}{1 \text{ pt}}$ or $\frac{1 \text{ pt}}{16 \text{ fl oz}}$
pints and quarts (qt)	$1 \text{ qt} = 2 \text{ pt}$	$\frac{2 \text{ pt}}{1 \text{ qt}}$ or $\frac{1 \text{ qt}}{2 \text{ pt}}$
quarts and gallons (gal)	$1 \text{ gal} = 4 \text{ qt}$	$\frac{4 \text{ qt}}{1 \text{ gal}}$ or $\frac{1 \text{ gal}}{4 \text{ qt}}$

METRIC SYSTEM		
The Relationship Between	Is	To Convert From One To The Other, Multiply By
milliliters (mL) and liters	1 liter (L) = 1,000 mL	$\frac{1,000 \text{ mL}}{1 \text{ liter}}$ or $\frac{1 \text{ liter}}{1,000 \text{ mL}}$
hectoliters (hL) and liters	100 liters = 1 hL	$\frac{100 \text{ liters}}{1 \text{ hL}}$ or $\frac{1 \text{ hL}}{100 \text{ liters}}$
kiloliters (kL) and liters	1,000 liters (L) = 1 kL	$\frac{1,000 \text{ liters}}{1 \text{ kL}}$ or $\frac{1 \text{ kL}}{1,000 \text{ liters}}$

Weight [7.3]

U.S. SYSTEM		
The Relationship Between	Is	To Convert From One To The Other, Multiply By
ounces (oz) and pounds (lb)	1 lb = 16 oz	$\frac{16 \text{ oz}}{1 \text{ lb}}$ or $\frac{1 \text{ lb}}{16 \text{ oz}}$
pounds and tons (T)	1 T = 2,000 lb	$\frac{2,000 \text{ lb}}{1 \text{ T}}$ or $\frac{1 \text{ T}}{2,000 \text{ lb}}$

METRIC SYSTEM		
The Relationship Between	Is	To Convert From One To The Other, Multiply By
milligrams (mg) and grams (g)	1 g = 1,000 mg	$\frac{1,000 \text{ mg}}{1 \text{ g}}$ or $\frac{1 \text{ g}}{1,000 \text{ mg}}$
centigrams (cg) and grams	1 g = 100 cg	$\frac{100 \text{ cg}}{1 \text{ g}}$ or $\frac{1 \text{ g}}{100 \text{ cg}}$
kilograms (kg) and grams	1,000 g = 1 kg	$\frac{1,000 \text{ g}}{1 \text{ kg}}$ or $\frac{1 \text{ kg}}{1,000 \text{ g}}$
metric tons (t) and kilograms	1,000 kg = 1 t	$\frac{1,000 \text{ kg}}{1 \text{ t}}$ or $\frac{1 \text{ t}}{1,000 \text{ kg}}$

5. Convert 2.2 liters to milliliters.

$$\begin{aligned} 2.2 \text{ liters} &= 2.2 \text{ liters} \times \frac{1,000 \text{ mL}}{1 \text{ liter}} \\ &= 2.2 \times 1,000 \text{ mL} \\ &= 2,200 \text{ mL} \end{aligned}$$

6. Convert 12 pounds to ounces.

$$\begin{aligned} 12 \text{ lb} &= 12 \text{ lb} \times \frac{16 \text{ oz}}{1 \text{ lb}} \\ &= 12 \times 16 \text{ oz} \\ &= 192 \text{ oz} \end{aligned}$$

7. Convert 3 kilograms to centigrams.

$$\begin{aligned} 3 \text{ kg} &= 3 \text{ kg} \times \frac{1,000 \text{ g}}{1 \text{ kg}} \times \frac{100 \text{ cg}}{1 \text{ g}} \\ &= 3 \times 1,000 \times 100 \text{ cg} \\ &= 300,000 \text{ cg} \end{aligned}$$

8. Convert 8 inches to centimeters.

$$\begin{aligned}
 8 \text{ in.} &= 8 \text{ in.} \times \frac{2.54 \text{ cm}}{1 \text{ in.}} \\
 &= 8 \times 2.54 \text{ cm} \\
 &= 20.32 \text{ cm}
 \end{aligned}$$

Converting Between the U.S. and Metric Systems [7.4]

CONVERSION FACTORS		
The Relationship Between	Is	To Convert From One To The Other, Multiply By
Length		
inches and centimeters	2.54 cm = 1 in.	$\frac{2.54 \text{ cm}}{1 \text{ in.}}$ or $\frac{1 \text{ in.}}{2.54 \text{ cm}}$
feet and meters	1 m = 3.28 ft	$\frac{3.28 \text{ ft}}{1 \text{ m}}$ or $\frac{1 \text{ m}}{3.28 \text{ ft}}$
miles and kilometers	1.61 km = 1 mi	$\frac{1.61 \text{ km}}{1 \text{ mi}}$ or $\frac{1 \text{ mi}}{1.61 \text{ km}}$
Area		
square inches and square centimeters	6.45 cm ² = 1 in ²	$\frac{6.45 \text{ cm}^2}{1 \text{ in}^2}$ or $\frac{1 \text{ in}^2}{6.45 \text{ cm}^2}$
square meters and square yards	1.196 yd ² = 1 m ²	$\frac{1.196 \text{ yd}^2}{1 \text{ m}^2}$ or $\frac{1 \text{ m}^2}{1.196 \text{ yd}^2}$
acres and hectares	1 ha = 2.47 acres	$\frac{2.47 \text{ acres}}{1 \text{ ha}}$ or $\frac{1 \text{ ha}}{2.47 \text{ acres}}$
Volume		
cubic inches and milliliters	16.39 mL = 1 in ³	$\frac{16.39 \text{ mL}}{1 \text{ in}^3}$ or $\frac{1 \text{ in}^3}{16.39 \text{ mL}}$
liters and quarts	1.06 qt = 1 liter	$\frac{1.06 \text{ qt}}{1 \text{ liter}}$ or $\frac{1 \text{ liter}}{1.06 \text{ qt}}$
gallons and liters	3.79 liters = 1 gal	$\frac{3.79 \text{ liters}}{1 \text{ gal}}$ or $\frac{1 \text{ gal}}{3.79 \text{ liters}}$
Weight		
ounces and grams	28.3 g = 1 oz	$\frac{28.3 \text{ g}}{1 \text{ oz}}$ or $\frac{1 \text{ oz}}{28.3 \text{ g}}$
kilograms and pounds	2.20 lb = 1 kg	$\frac{2.20 \text{ lb}}{1 \text{ kg}}$ or $\frac{1 \text{ kg}}{2.20 \text{ lb}}$

9. Convert 120°C to degrees Fahrenheit.

$$F = \frac{9}{5}C + 32$$

$$F = \frac{9}{5}(120) + 32$$

$$F = 216 + 32$$

$$F = 248 \text{ }^\circ\text{F}$$

Temperature [7.4]

To Convert From	Formula In Symbols	Formula In Words
Fahrenheit to Celsius	$C = \frac{5(F - 32)}{9}$	Subtract 32, multiply by 5, and then divide by 9.
Celsius to Fahrenheit	$F = \frac{9}{5}C + 32$	Multiply by $\frac{9}{5}$, and then add 32.

10. Convert 3 hours 45 minutes to minutes.

$$= 3 \text{ hr} \times \frac{60 \text{ min}}{1 \text{ hr}} + 45 \text{ min}$$

$$= 180 \text{ min} + 45 \text{ min}$$

$$= 225 \text{ min}$$

Time [7.5]

The Relationship Between	Is	To Convert From One To The Other, Multiply By
minutes and seconds	1 min = 60 sec	$\frac{1 \text{ min}}{60 \text{ sec}}$ or $\frac{60 \text{ sec}}{1 \text{ min}}$
hours and minutes	1 hr = 60 min	$\frac{1 \text{ hr}}{60 \text{ min}}$ or $\frac{60 \text{ min}}{1 \text{ hr}}$

Chapter 7 Review

Use the tables given in this chapter to make the following conversions. [7.1-7.4]

1. 12 ft to inches
2. 18 ft to yards
3. 49 cm to meters
4. 2 km to decimeters

5. 10 acres to square feet
6. 7,800 m² to ares
7. 4 ft² to square inches
8. 7 qt to pints

9. 24 qt to gallons
10. 5 L to milliliters
11. 8 lb to ounces
12. 2 lb 4 oz to ounces

13. 5 kg to grams
14. 5 t to kilograms
15. 4 in. to centimeters
16. 7 mi to kilometers

17. 7 L to quarts
18. 5 gal to liters
19. 5 oz to grams
20. 9 kg to pounds

21. 120°C to degrees Fahrenheit
22. 122°F to degrees Celsius

Work the following problems. Round answers to the nearest hundredth where necessary.

23. A case of soft drinks holds 24 cans. If each can holds 355 ml, how many liters are there in the whole case? [7.2]
24. Change 862 mi to feet. [7.1]
25. Glacier Bay National Monument covers 2,805,269 acres. What is the area in square miles? [7.2]
26. How many ounces does a 134-lb person weigh? [7.3]
27. Change 250 mi to kilometers. [7.1]
28. How many grams is 7 lb 8 oz? [7.4]
29. **Construction** A 12-square-meter patio is to be built using bricks that measure 10 centimeters by 20 centimeters. How many bricks will be needed to cover the patio? [7.2]
30. **Capacity** If a regular drinking glass holds 0.25 liter of liquid, how many glasses can be filled from a 6.5-liter container? [7.2]
31. **Filling an Aquarium** How many 8-fluid-ounce glasses of water will it take to fill a 5-gallon aquarium? [7.2]
32. **Comparing Area** On April 3, 2000, *USA Today* changed the size of its paper. Previous to this date, each page of the paper was $13\frac{1}{2}$ inches wide and $22\frac{1}{4}$ inches long, giving each page an area of $300\frac{3}{8}$ in². Convert this area to square feet. [7.2]
33. **Speed** The instrument display below shows a speed of 188 kilometers per hour. What is the speed in miles per hour? Round to the nearest whole number. [7.4]



34. **Volcanoes** Pyroclastic flows are high speed avalanches of volcanic gases and ash that accompany some volcano eruptions. Pyroclastic flows have been known to travel at more than 80 kilometers per hour.



USGS

- a. Convert 80 km/hr to miles per hour. Round to the nearest whole number.
- b. Could you outrun a pyroclastic flow on foot, on a bicycle, or in a car?

35. **Speed** A race car is traveling at 200 miles per hour. What is the speed in kilometers per hour? [7.4]
36. 4 hours 45 minutes to [7.5]
- a. Minutes
- b. Hours
37. Add 4 pounds 4 ounces and 8 pounds 12 ounces. [7.5]
38. **Cost of Fish.** Mark is purchasing two whole salmon. The fish cost \$5.00 per pound, and each weighs 12 lb 8 oz. What is the cost of the fish? [7.5]

Chapter 7 Cumulative Review

Simplify:

$$\begin{array}{r} 1. \quad 7,520 \\ \quad 599 \\ +8,640 \\ \hline \end{array}$$

3. $156 \div 13$

5. $64 \overline{)31,362}$

7. $12 + 81 \div 3^2$

9. $25 + 13$

11. $\frac{39}{3}$

13. $5.4 + 2.58 + 3.09$

15. $2.5 \overline{)40.5}$

17. $17 \div \left(\frac{1}{3}\right)^2$

19. $\left(16 \div 1\frac{1}{4}\right) \div 2$

21. $\frac{3}{8}(2.4) - \frac{3}{5}(0.25)$

23. $13 + \frac{3}{14} \div \frac{5}{42}$

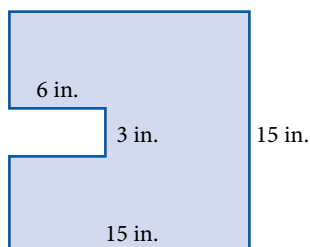
Solve.

24. $2 \cdot x = 15$

26. $\frac{2}{3} = \frac{12}{x}$

Solve.

27. Find the perimeter and area of the figure below.



2. $\begin{array}{r} 6,000 \\ -3,999 \\ \hline \end{array}$

4. $9(7 \cdot 2)$

6. 2^8

8. $\frac{329}{47}$

10. $(10 + 4) + (212 - 100)$

12. $10.5(2.7)$

14. $45.7 - 2.86$

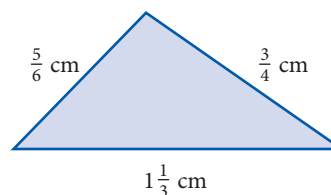
16. $\left(\frac{1}{4}\right)^3 \left(\frac{1}{2}\right)^2$

18. $\frac{8}{25} + \frac{7}{50}$

20. $15 - 3\frac{1}{2}$

22. $\frac{5}{6}(3.6) - \frac{3}{4}(3.2)$

28. Find the perimeter of the figure below.



29. Find the difference between 62 and 15.

30. If a car travels 142 miles in $2\frac{1}{2}$ hours, what is its rate in miles per hour?

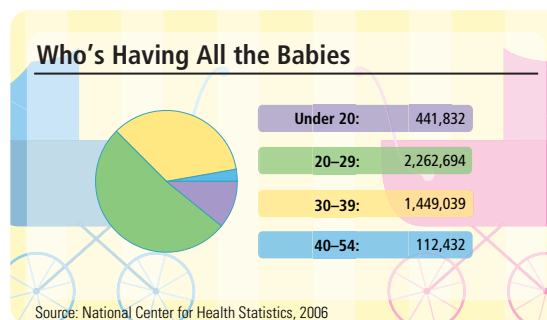
31. What number is 24% of 7,450?

32. Factor 126 into a product of prime factors.

33. Find $\frac{2}{3}$ of the product of 7 and 9.

34. If 5,280 feet = 1 mile, convert 3,432 feet to miles.

Use the illustration to answer problem 35.



35. What percentage of babies were born to mothers who were between the ages of 20 and 39. Round to the nearest percentage.

Chapter 7 Test

Use the tables in the chapter to make the following conversions.


- 7 yd to feet
- 750 m to kilometers
- 3 acres to square feet
- 432 in² to square feet
- 10 L to milliliters
- 5 mi to kilometers
- 10 L to quarts
- 80°F to degrees Celsius (round to the nearest tenth)
- 1.2 T to pounds
- 144 oz to pounds
- 504 in² to square feet
- 4.5 a to square meters
- 175.5 ft³ to cubic yards
- 40°C to degrees Fahrenheit

Work the following problems. Round answers to the nearest hundredth.

- How many gallons are there in a 1-liter bottle of cola?
- Change 579 yd to inches.
- A car engine has a displacement of 409 in³. What is the displacement in cubic feet?
- Change 75 qt to liters.

- Change 245 ft to meters.
- How many liters are contained in an 8-quart container?
- 16 cm to inches
- 5 mi to kilometers
- 17 in² to square centimeters
- 7 ha to acres
- 5 qt to liters
- 17 lb to kilograms
- Construction** A 40-square-foot pantry floor is to be tiled using tiles that measure 8 inches by 8 inches. How many tiles will be needed to cover the pantry floor?
- Filling an Aquarium** How many 12-fluid-ounce glasses of water will it take to fill a 6-gallon aquarium?
- 5 hours 30 minutes to
 - Minutes
 - Hours
- Add 3 pounds 4 ounces and 7 pounds 12 ounces.

Use the illustration to answer problem 31.



- Convert the height of the Taipei 101 tower to kilometers. Round to the nearest hundredth.

Chapter 7 Projects

MEASUREMENT

GROUP PROJECT

Body Mass Index

- Number of People** 2
- Time Needed** 25 minutes
- Equipment** Pencil, paper, and calculator
- Background** Body mass index (BMI) is computed by using a mathematical formula in which one's weight in kilograms is divided by the square of one's

height in meters. According to the Centers for Disease Control and Prevention, a healthy BMI for adults is between 18.5 and 24.9. Children aged 2–20 have a healthy BMI if they are in the 5th to 84th percentile for their age and sex. A high BMI is predictive of cardiovascular disease.

Height	4'10"	5'2"	5'9"	6'1"
Weight (lbs)				
100				
120				
140				
200				

Procedure Complete the given BMI chart using the following conversion factors.

$$1 \text{ inch} = 2.54 \text{ cm}, 1 \text{ meter} = 100 \text{ cm}, 1 \text{ kg} = 2.2 \text{ lb}$$

Example 5'4", 120 lbs

1. Convert height to inches.

$$5 \text{ feet} \times \frac{12 \text{ in.}}{1 \text{ ft}} = 60 \text{ in.}$$

$$5'4" = 64 \text{ in.}$$

Then, convert height to meters.

$$64 \text{ in.} \times \frac{2.54 \text{ cm}}{1 \text{ in.}} = 162.56 \text{ cm}$$

$$162.56 \text{ cm} \times \frac{1 \text{ m}}{100 \text{ cm}} = 1.6256 \text{ m}$$

2. Convert weight to kilograms.

$$120 \text{ lbs} \times \frac{1 \text{ kg}}{2.2 \text{ lbs}} \approx 54.5 \text{ kg}$$

3. Compute $\frac{\text{weight in kg}}{(\text{height in m})^2}$.

$$\frac{54.5}{(1.6256)^2} \approx 21$$

RESEARCH PROJECT

Richard Alfred Tapia

Richard A. Tapia is a mathematician and professor at Rice University in Houston, Texas, where he is Noah Harding Professor of Computational and Applied Mathematics. His parents immigrated from Mexico, separately, as teenagers to provide better educational opportunities for themselves and future generations. Born in Los Angeles, Tapia was the first in his family to attend college. In addition to being internationally known for his research, Tapia has helped his department at Rice become a national leader in awarding Ph.D. degrees to women and minority recipients. Research the life and work of Dr. Tapia. Summarize your results in an essay.



Courtesy of Rice University

Geometry

8

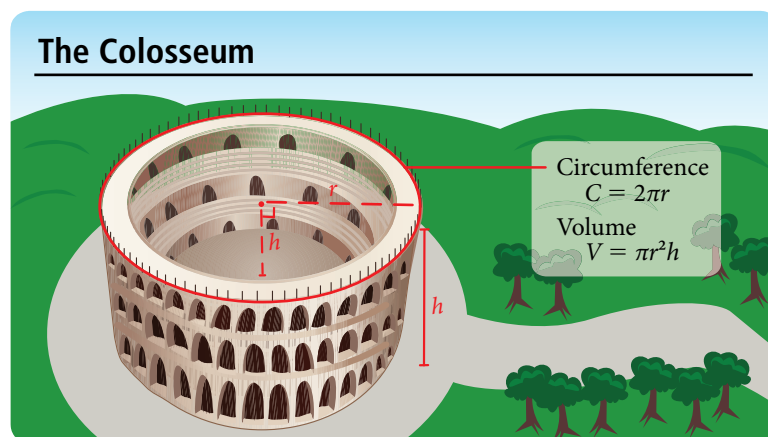


Chapter Outline

- 8.1 Perimeter and Circumference
- 8.2 Area
- 8.3 Surface Area
- 8.4 Volume
- 8.5 Square Roots and the Pythagorean Theorem

Introduction

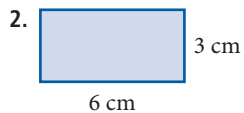
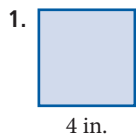
The Colosseum at Rome is one of the iconic structures of the ancient world. Construction began around 70 A.D. under the Emperor Vespasian and was completed 10 years later by his son, Emperor Titus. Vespasian's younger son, Emperor Domitian, added the tunnels beneath the structure to hold animals and slaves, and added a gallery to the top of the structure to increase the seating capacity.



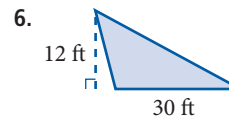
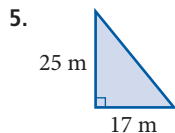
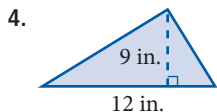
In this chapter you will see a variety of simple geometric shapes and the common characteristics we use to describe them. You will learn about perimeter, circumference, area and volume of a variety of shapes in both two and three dimensions.

Chapter Pretest

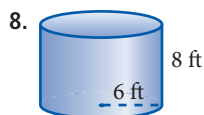
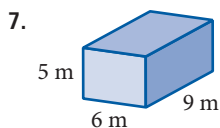
Find the area and the perimeter or circumference of each figure.



Find the area of each figure.



Find the volume and surface area of each figure.



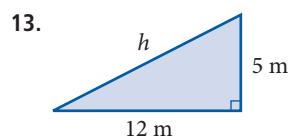
Simplify each expression.

10. $\sqrt{81}$

11. $\sqrt{\frac{16}{49}}$

12. $\sqrt{49} - \sqrt{169}$

Find h .



Getting Ready for Chapter 8

Simplify each of the following.

1. $4(35)$

2. $3.14(4)$

3. $3.14(23.25)$

4. $2(3.14)(0.52)$

5. $2(8) + 2(5)$

6. $2(3)(4) + 2(3)(5)$

7. $\frac{1}{2}(6)(3)$

8. $\frac{1}{2}\left(2\frac{5}{8}\right)\left(1\frac{1}{4}\right)$

9. $2\frac{3}{8} + 1\frac{5}{8} + 4$

10. $2\frac{5}{8} + 1\frac{7}{8} + 1\frac{7}{8}$

11. $\frac{22}{7}(2)^2$

12. $\frac{22}{7}(7)^2$

13. $\left(\frac{1}{2} \cdot 27\right)^2$

14. $144 - 36(3.14)$

15. $2(1.56) + 2(0.99)$

16. $2(21.4) + 2(35.8)$

17. $4(3.14)6^2$

18. $\frac{4}{3}(3.14)2^3$

19. $4\left(\frac{22}{7}\right)6^2$

20. $\frac{4}{3}\left(\frac{22}{7}\right)2^3$

Divide and round to the nearest whole number.

21. $24,900 \div 3.14$

22. $\frac{6,790}{3.14}$

Perimeter and Circumference

8.1

Introduction . . .

The world around us is filled with things that can be described in mathematical terms using perimeter and circumference. Here are a few of the items we will use to explore perimeter and circumference.



A Perimeter

We begin this section by reviewing the definition of a polygon and the definition of perimeter.

Definition

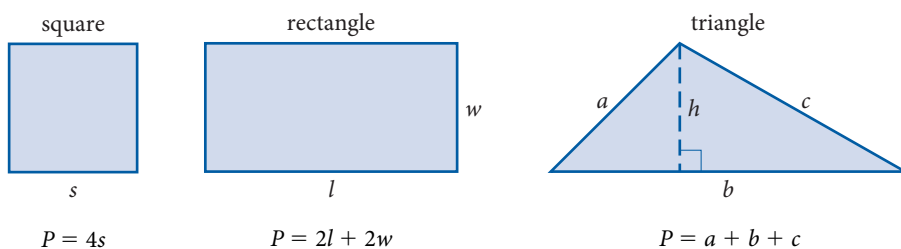
A **polygon** is a closed geometric figure, with at least three sides, in which each side is a straight line segment.

The most common polygons are squares, rectangles, and triangles.

Definition

The **perimeter** of any polygon is the sum of the lengths of the sides, and it is denoted with the letter P .

To find the perimeter of a polygon we add all the lengths of the sides together. Here are the most common polygons, along with the formula for the perimeter of each.



We can justify our formulas as follows. If each side of a square is s units long, then the perimeter is found by adding all four sides together:

$$\text{Perimeter} = P = s + s + s + s = 4s$$

Likewise, if a rectangle has a length of l and a width of w , then to find the perimeter we add all four sides together:

$$\text{Perimeter} = P = l + l + w + w = 2l + 2w$$

Objectives

- A Find the perimeter of a polygon.
- B Find the circumference of a circle.

PRACTICE PROBLEMS

1. Find the perimeter of the rectangle in Example 1 if the length and width are each increased by 1 yard.

2. Find the perimeter of each stamp in Example 2 from the dimensions given below.

a. Each side is 1.38 inches

b. Base = 6.6 centimeters, other two sides = 4.7 centimeters

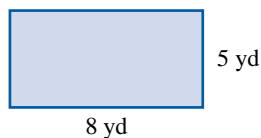
c. Length = 39.6 millimeters, width = 25.1 millimeters

Answers

1. 30 yards
2. a. 5.52 in. b. 16 cm
c. 129.4 mm

EXAMPLE 1

Find the perimeter of the given rectangle.



SOLUTION The given rectangle has a width of 5 yards and a length of 8 yards. We can use the formula for $P = 2l + 2w$ to find the perimeter.

$$\begin{aligned} \text{We have: } P &= 2(8) + 2(5) \\ &= 16 + 10 \\ &= 26 \text{ yards} \end{aligned}$$

EXAMPLE 2

Find the perimeter of each of the following stamps. Write your answer as a decimal, rounded to the nearest tenth if necessary.

- a. Each side is 35.0 millimeters



- b. Base = $2\frac{5}{8}$ inches
Other two sides = $1\frac{7}{8}$ inches



- c. Length = 1.56 inches
Width = 0.99 inches



Peanuts: © United Feature Syndicate, Inc.

SOLUTION We can add all the sides together, or we can apply our formulas. Let's apply the formulas.

a. $P = 4s = 4 \cdot 35 = 140$ mm

b. $P = a + b + c = 2\frac{5}{8} + 1\frac{7}{8} + 1\frac{7}{8} = 6\frac{3}{8} \approx 6.4$ in.

c. $P = 2l + 2w = 2(1.56) + 2(0.99) = 5.1$ in.

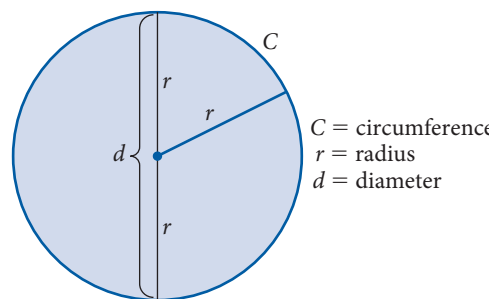
B Circumference

The *circumference* of a circle is the distance around the outside, just as the perimeter of a polygon is the distance around the outside. The circumference of a circle can be found by measuring its radius or diameter and then using the appropriate

formula. The *radius* of a circle is the distance from the center of the circle to the circle itself. The radius is denoted by the letter r . The *diameter* of a circle is the distance from one side to the other, through the center. The diameter is denoted by the letter d . In the figure below we can see that the diameter is twice the radius, or

$$d = 2r$$

The relationship between the circumference and the diameter or radius is not as obvious. As a matter of fact, it takes some fairly complicated mathematics to show just what the relationship between the circumference and the diameter is.



If you took a string and actually measured the circumference of a circle by wrapping the string around the circle and then measured the diameter of the same circle, you would find that the ratio of the circumference to the diameter, C/d , would be approximately equal to 3.14. The actual ratio of C to d in any circle is an irrational number. It can't be written in decimal form. We use the symbol π (Greek p) to represent this ratio. In symbols, the relationship between the circumference and the diameter in any circle is

$$\frac{C}{d} = \pi$$

Knowing what we do about the relationship between division and multiplication, we can rewrite this formula as

$$C = \pi d$$

This is the formula for the circumference of a circle. When we do the actual calculations, we will use the approximation 3.14 for π .

Because $d = 2r$, the same formula written in terms of the radius is

$$C = 2\pi r$$

EXAMPLE 3

Find the circumference of each coin.

- a. 1 Euro coin (Round to the nearest whole number.)



Diameter = 23.25 millimeters

- b. Susan B. Anthony dollar (Round to the nearest hundredth.)



Radius = 0.52 inch

3. Find the circumference for each coin in Example 3 from the dimensions given below. Round answers to the nearest hundredth.
- Diameter = 0.92 inches
 - Radius = 13.20 millimeters

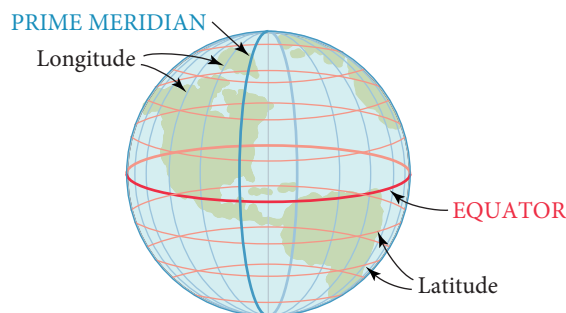
SOLUTION Applying our formulas for circumference we have:

a. $C = \pi d \approx (3.14)(23.25) \approx 73$ mm

b. $C = 2\pi r \approx 2(3.14)(0.52) \approx 3.27$ in.

Circles and the Earth

There are many circles found on the surface of the earth. The most familiar are the latitude and longitude lines. Of these circles, the ones with the largest circumference are called *great circles*. All of the longitude lines are great circles. Of the latitude lines, only the equator is a great circle.



4. The circumference of the moon at the equator is 6,790 miles. To the nearest 10 miles, find the diameter of the moon

EXAMPLE 4

If the circumference of the earth is approximately 24,900 miles at the equator, what is the diameter of the earth to the nearest 10 miles?

SOLUTION We substitute 24,900 for C in the formula $C = \pi d$, and then we solve for d .

$$24,900 = \pi d$$

$$24,900 \approx 3.14d \quad \text{Substitute 3.14 for } \pi$$

$$d \approx \frac{24,900}{3.14} \quad \text{Divide each side by 3.14}$$

$$d \approx 7,930 \text{ miles}$$

Getting Ready for Class

After reading through the preceding section, respond in your own words and in complete sentences.

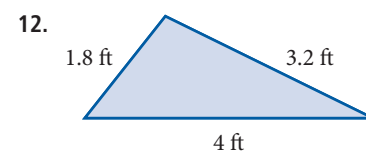
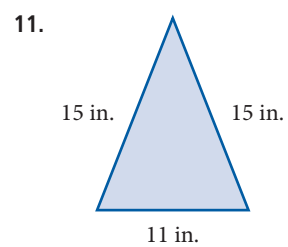
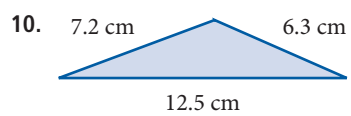
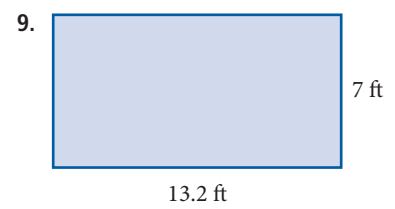
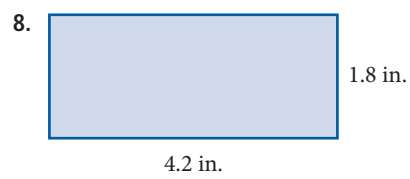
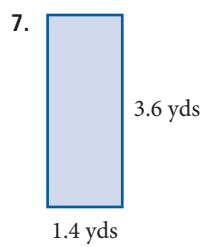
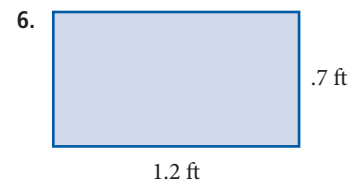
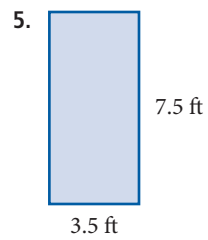
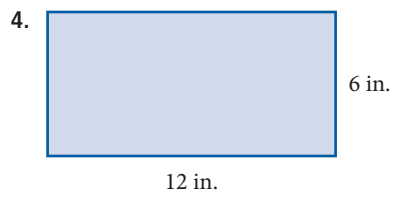
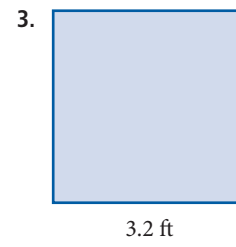
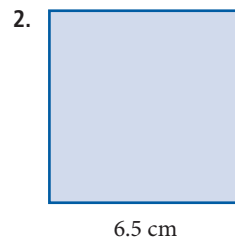
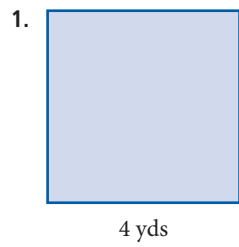
1. What is the perimeter of a polygon?
2. How are perimeter and circumference related?
3. How do you find the perimeter of a square if each side is 15 inches long?
4. A rectangle has a width of 24 feet and a length of 37 feet. How do you find the perimeter?

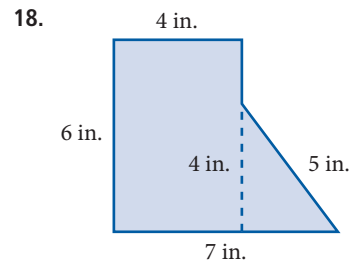
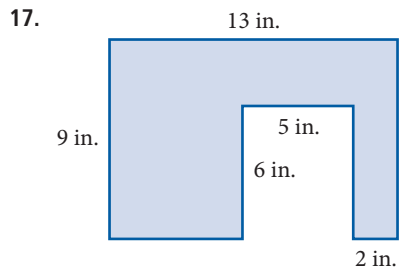
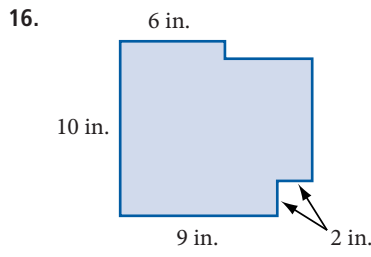
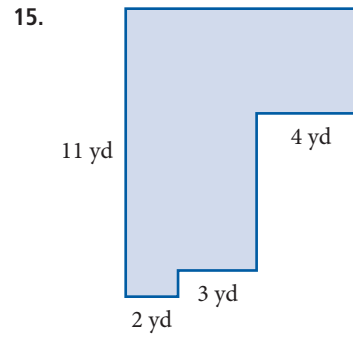
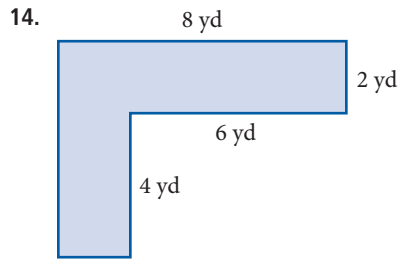
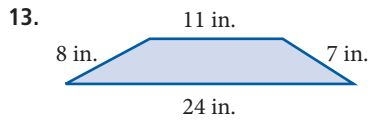
Answers

3. a. 2.89 in. b. 82.90 mm
4. Approximately 2,160 miles

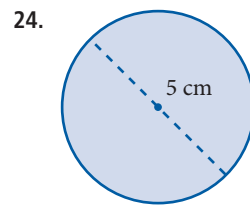
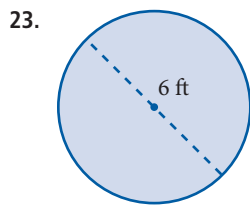
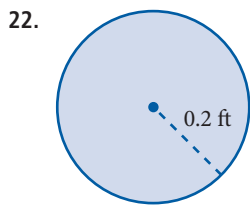
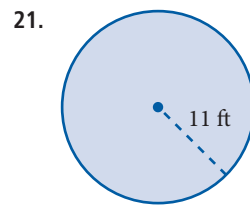
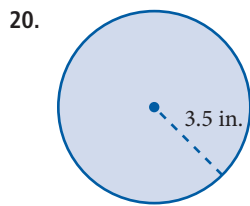
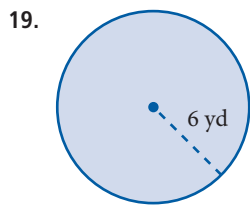
Problem Set 8.1

A Find the perimeter of each figure. [Examples 1, 2]



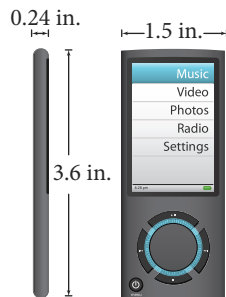


B Find the circumference of each circle. [Example 3]



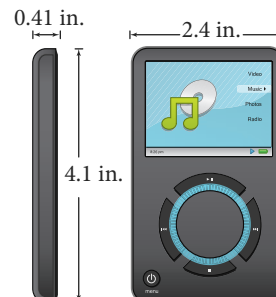
■ Applying the Concepts

25. **Perimeter of an MP3 Player** The MP3 player below is the smallest of all MP3 players.



- Find the perimeter of the face of the MP3 player.
- Find the perimeter of the side of the MP3 player.

26. **Perimeter of an MP3 Player** The MP3 player below can hold up to 30,000 songs.



- Find the perimeter of the face of the MP3 player.
- Find the perimeter of the side of the MP3 player.

27. **Circumference of a Logo** The diameter of the corporate logo here is 12.4 millimeters, find the circumference.



28. **Circumference of a Logo** The diameter of the corporate logo here is 9.2 millimeters, find the circumference.



29. **Perimeter of a TV** A normal TV has a 4:3 ratio between its length and width. If the diameter (measured from one corner to the opposite corner) is 35 inches, what is the perimeter of the TV?

30. **Perimeter of a TV** A normal TV has a 4:3 ratio between its length and width. If the diameter (measured from one corner to the opposite corner) is 30 inches, what is the perimeter of the TV?

31. **Perimeter of a Football Field** A standard football field has a length of 100 yards, plus two 10 yard end zones, and have a width of 160 feet. What is the perimeter of the football field in feet?

32. **Perimeter of a Track** Some football fields, like the one seen in this Google Earth image, have a track surrounding them. Assuming both ends are perfect semicircles that start at the end of each end zone, and the track is 10 yards away from the sidelines on each side, what is the perimeter of the inside part of the track in feet?



33. **Geometry** If a rectangle has a perimeter of 20 feet, is it possible for the rectangle to be a square? Explain your answer.
34. **Geometry** If a rectangle has a perimeter of 10 feet, is it possible for the rectangle to be a square? Explain your answer.
35. **Geometry** A rectangle has a perimeter of 9.5 inches. If the length is 2.75 inches, find the width.
36. **Geometry** A rectangle has a perimeter of 11 inches. If the width is 2.5 inches, find the length.

Getting Ready for the Next Section

Simplify each expression. Round your answers to the nearest hundredth.

37. $\frac{1}{2} \cdot 6 \cdot 3$

38. $\frac{1}{2} \cdot 4 \cdot 2$

39. $\frac{1}{2} \left(2\frac{5}{8} \right) \left(1\frac{1}{4} \right)$

40. $\frac{1}{2} (6.6)(3.3)$

41. $3.14(14.5)^2$

42. $3.14(5)^2$

43. $144 - 36(3.14)$

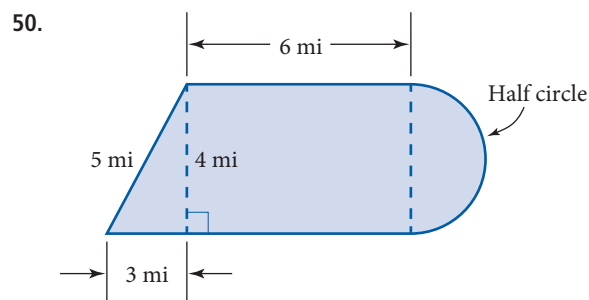
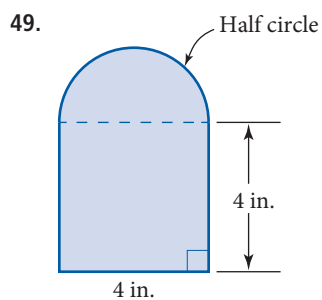
44. $100 - 25(3.14)$

Maintaining Your Skills

45. Convert 100 yards to meters. Round to the nearest tenth.
46. Convert 5,280 feet to kilometers.
47. Convert to inches. Round to the nearest hundredth
- 16 centimeters
 - 129.4 millimeters
48. Convert to millimeters. Round to the nearest whole number.
- 5.52 inches
 - 2.89 inches

Extending the Concepts

Find the perimeter of each figure. Use 3.14 for π .

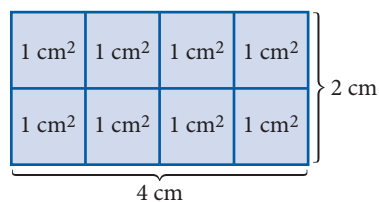


Objectives

- A** Find the area of a polygon.
B Find the area of a circle.

Introduction . . .

Recall that the area of a flat object is a measure of the amount of surface the object has. The area of the rectangle below is 8 square centimeters, because it takes 8 square centimeters to cover it.

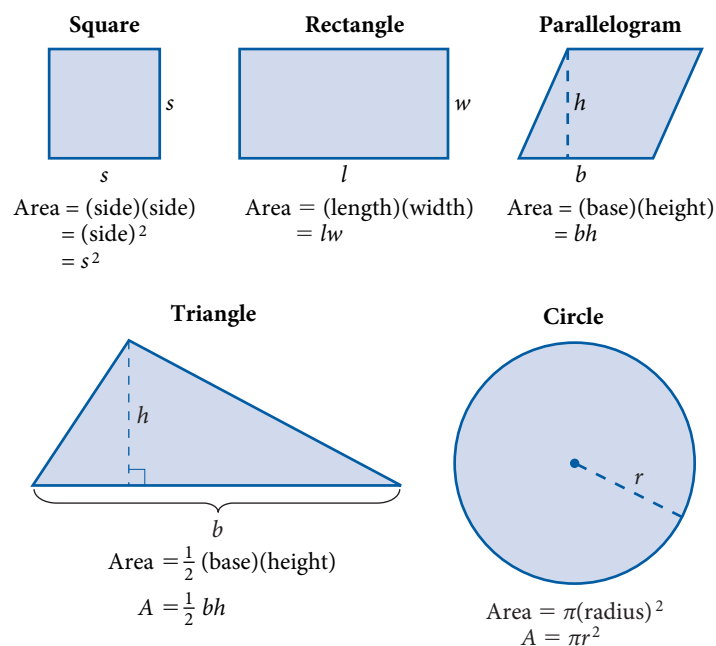


As we have noted previously, the area of this rectangle can also be found by multiplying the length and the width.

$$\begin{aligned} \text{Area} &= (\text{length}) \cdot (\text{width}) \\ &= (4 \text{ centimeters}) \cdot (2 \text{ centimeters}) \\ &= (4 \cdot 2) \cdot (\text{centimeters} \cdot \text{centimeters}) \\ &= 8 \text{ square centimeters} \end{aligned}$$

From this example, and others, we conclude that the area of any rectangle is the product of the length and width.

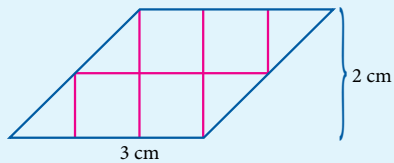
Here are the most common geometric figures along with the formula for the area of each one. The only formulas that are new to us are the ones that accompany the parallelogram and the circle.



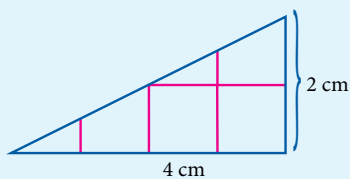
A Area of a Polygon

PRACTICE PROBLEMS

1. Find the area.



2. Find the area.

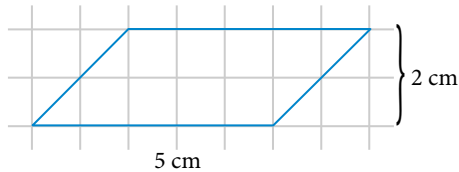


Answers

1. 6 cm^2 2. 4 cm^2

EXAMPLE 1

The parallelogram below has a base of 5 centimeters and a height of 2 centimeters. Find the area.

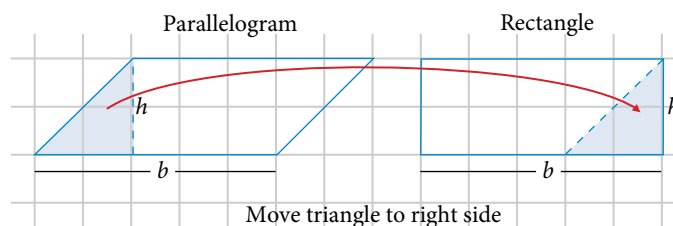


SOLUTION If we apply our formula we have

$$\begin{aligned} \text{Area} &= (\text{base})(\text{height}) \\ A &= bh \\ &= 5 \cdot 2 \\ &= 10 \text{ cm}^2 \end{aligned}$$

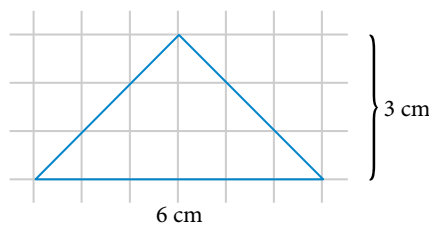
Or, we could simply count the number of square centimeters it takes to cover the object. There are 8 complete squares and 4 half-squares, giving a total of 10 squares for an area of 10 square centimeters. Counting the squares in this manner helps us see why the formula for the area of a parallelogram is the product of the base and the height.

To justify our formula in general, we simply rearrange the parts to form a rectangle.



EXAMPLE 2

The triangle below has a base of 6 centimeters and a height of 3 centimeters. Find the area.



SOLUTION If we apply our formula we have

$$\begin{aligned} \text{Area} &= \frac{1}{2} (\text{base})(\text{height}) \\ A &= \frac{1}{2} bh \\ &= \frac{1}{2} \cdot 6 \cdot 3 \\ &= 9 \text{ cm}^2 \end{aligned}$$

As was the case in Example 1, we can also count the number of square centimeters it takes to cover the triangle. There are 6 complete squares and 6 half-squares, giving a total of 9 squares for an area of 9 square centimeters.

EXAMPLE 3

Find the area of each of the following stamps.

- a. Each side is 35.0 millimeters.



- b. Write your answer as a decimal, rounded to the nearest hundredth.

$$\begin{aligned} \text{Base} &= 2\frac{5}{8} \text{ inches} \\ \text{Height} &= 1\frac{1}{4} \text{ inches} \end{aligned}$$



- c. Round to the nearest hundred

$$\begin{aligned} \text{Length} &= 1.56 \text{ inches} \\ \text{Width} &= 0.99 \text{ inches} \end{aligned}$$



Peanuts: © United Feature Syndicate, Inc.

SOLUTION Applying our formulas for area we have

a. $A = s^2 = (35 \text{ mm})^2 = 1,225 \text{ mm}^2$

b. $A = \frac{1}{2}bh = \frac{1}{2}\left(2\frac{5}{8} \text{ in.}\right)\left(1\frac{1}{4} \text{ in.}\right) = \frac{1}{2} \cdot \frac{21}{8} \cdot \frac{5}{4} \text{ in}^2 \approx 1.64 \text{ in}^2$

c. $A = lw = (1.56 \text{ in.})(0.99 \text{ in.}) \approx 1.54 \text{ in}^2$

B Area of a Circle**EXAMPLE 4**

The circle shown in the stamp in Example 3a has a radius of 14.5 millimeters. Find the area of the circle to the nearest whole number.

SOLUTION Using our formula for the area of a circle, and using 3.14 for π , we have

$$\begin{aligned} A &= \pi r^2 \\ &\approx 3.14(14.5)^2 \\ &= 3.14(210.25) \\ &= 660.185 \text{ mm}^2 \\ &\approx 660 \text{ mm}^2 \end{aligned}$$

Formula for area
Substitute in values
Square 14.5
Multiply
Round to the nearest whole number

3. Find the area of each stamp in Example 3 from the dimensions given below. Round answers to the nearest hundredth.
- a. Each side is 1.38 inches

- b. Base = 6.6 centimeters,
height = 3.3 centimeters

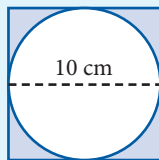
- c. Length = 39.6 millimeters,
width = 25.1 millimeters

4. A circle has a radius of 5 feet.
Find the area.

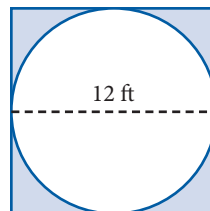
Answers

3. a. 1.90 in^2 b. 10.89 cm^2
c. 993.96 mm^2
4. 78.5 ft^2

5. Find the area of the shaded portion of this figure.

**EXAMPLE 5**

Find the area of the shaded portion of this figure.



SOLUTION We have a circle inscribed in a square. We notice the diameter of the circle is the same length as one side of the square. To find the area of the shaded region, we subtract the area of the circle from the area of the square as follows:

$$\begin{aligned} A &= 12^2 - 6^2\pi \\ &= 144 - 36\pi \\ &\approx 30.96 \text{ ft}^2 \end{aligned}$$

Getting Ready for Class

After reading through the preceding section, respond in your own words and in complete sentences.

1. Suppose a rectangle is 8 inches long and 3 inches wide. How many square inches will it take to cover the rectangle?
2. A rectangle measures 4 feet by 6 feet. What units will you assign to the perimeter and to the area?
3. What does π represent?
4. How do you find the area of a circle?

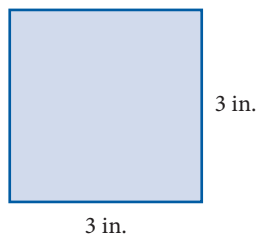
Answers

5. 21.5 cm^2 to the nearest tenth

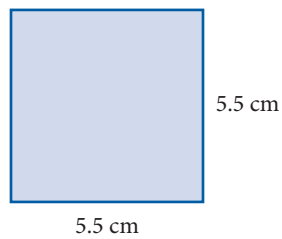
Problem Set 8.2

A B Find the area enclosed by each figure. [Examples 1–4]

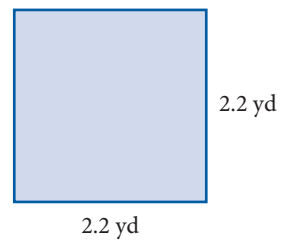
1.



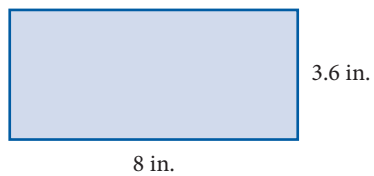
2.



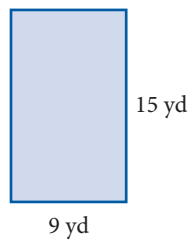
3.



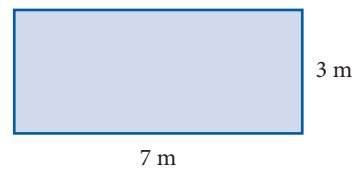
4.



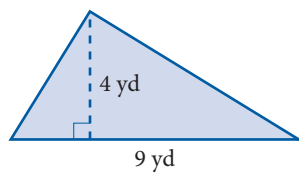
5.



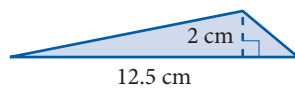
6.



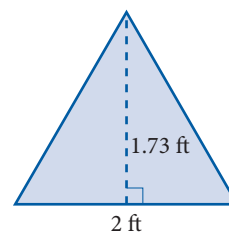
7.



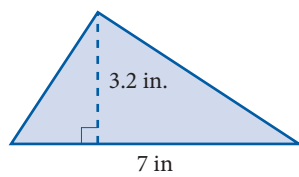
8.



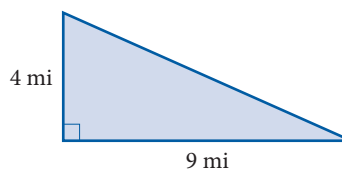
9.



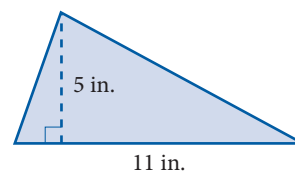
10.



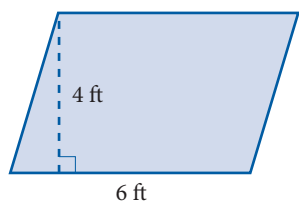
11.



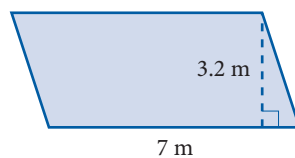
12.



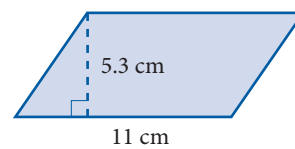
13.



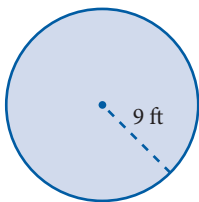
14.



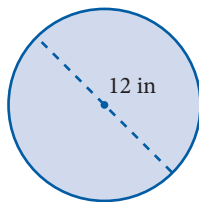
15.



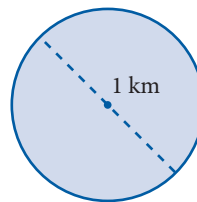
16.



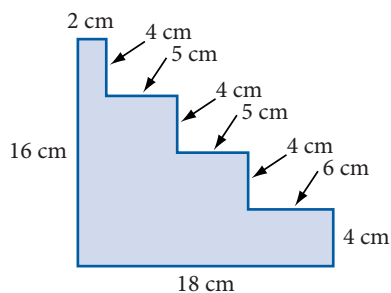
17.



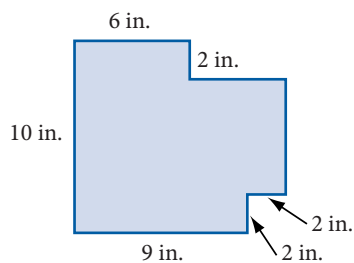
18.



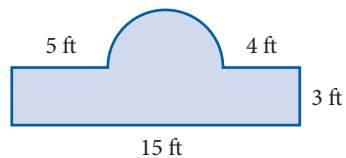
19.



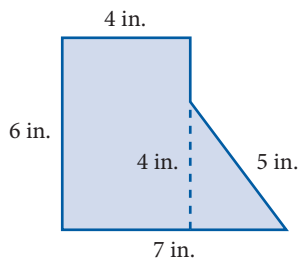
20.



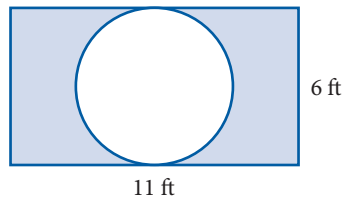
21.



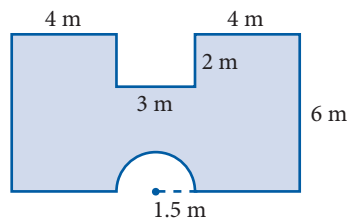
22.



23.

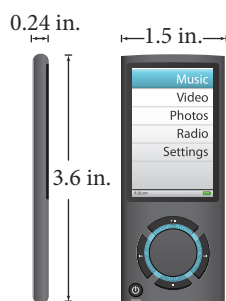


24.



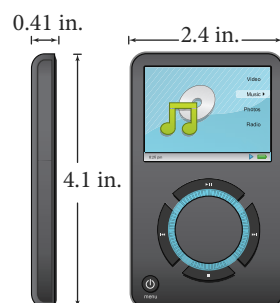
Applying the Concepts

25. **Area of an MP3 Player** The MP3 player below is the smallest of all MP3 players.



- Find the area of the face of the MP3 player.
- Find the area of the side of the MP3 player.

26. **Area of an MP3 Player** The MP3 player below can hold up to 30,000 songs.



- Find the area of the face of the MP3 player.
- Find the area of the side of the MP3 player.

27. **Area of a Logo** The diameter of the corporate logo here is 12.4 millimeters, find the area.



28. **Area of a Logo** The diameter of the corporate logo here is 9.2 millimeters, find the area.



29. **Area of a TV** A normal TV has a 4:3 ratio between its length and width. If the diameter (measured from one corner to the opposite corner) is 35 inches, what is the area of the TV?

30. **Area of a TV** A normal TV has a 4:3 ratio between its length and width. If the diameter (measured from one corner to the opposite corner) is 30 inches, what is the area of the TV?

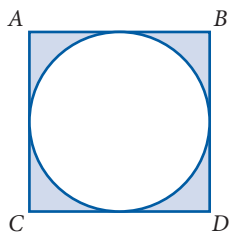
31. **Area to Perimeter Ratio** The perimeter of each of the following shapes is 28. Find the area of each.

- Rectangle with length 12, width 2.
- Rectangle with length 10, width 4.
- Rectangle with length 8, width 6.
- Square with side length 7.
- Circle with radius $\frac{14}{\pi}$.
- Which shape has the greatest area to perimeter ratio?

32. **Area to Perimeter Ratio** The perimeter of each of the following shapes is 14. Find the area of each.

- Rectangle with length 20, width 8.
- Rectangle with length 18, width 10.
- Rectangle with length 16, width 12.
- Square with side length 14.
- Circle with radius $\frac{28}{\pi}$.
- Which shape has the greatest area to perimeter ratio?

33. The circle here is said to be *inscribed* in the square. If the area of the circle is 64π square centimeters, find the length of one of the sides of the square.



34. The painting below is from the Getty Museum. Find the diameter, circumference, and area of the circle that is inside of the square.



Getting Ready for the Next Section

Simplify.

35. $2 \cdot 3 \cdot 4$

36. $2(12)(15)$

37. $12 + 20 + 40$

38. $54 + 40 + 46$

39. $2(3.14)(0.125)(6)$

40. $314 \div 2$

41. $78.5 + 311.5 + 157$

42. $\frac{1}{2}[4(3.14)(100)]$

Maintaining Your Skills

43. A home has 1,800 square feet of living space. How many square yards is this?

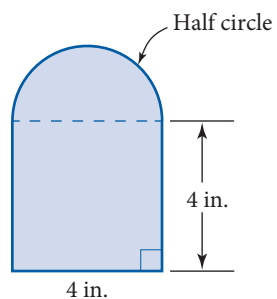
44. A city covers 10 square miles of land. How many acres is this?

45. A fire burns 3,200 acres. How many square miles are burned?

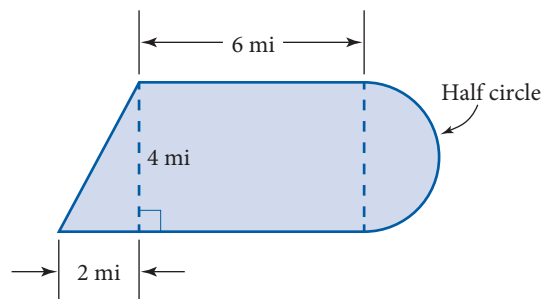
46. A square is 1 meter on each side. What is the area in square centimeters?

Find the area enclosed by each figure.

47.



48.



Introduction . . .

You have probably heard that 70% of the Earth's surface is water and only 30% is land. In this section we will learn how to compute the surface area of any sphere, such as a planet, given its radius. We will also find the surface area of three dimensional shapes, such as cubes and cylinders.

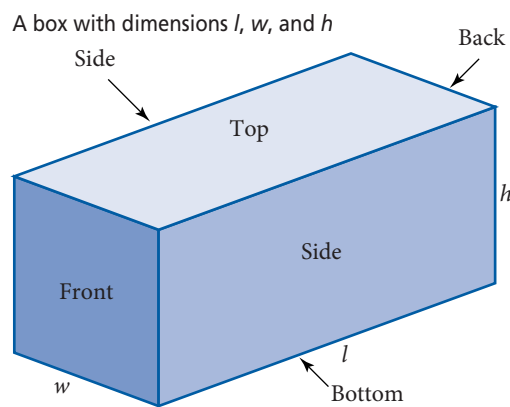


Objectives

- A** Find the surface area of a rectangular solid.
- B** Find the surface area of a cylinder.
- C** Find the surface area of a sphere.

A Surface Area of a Rectangular Solid

The figure below shows a closed box with length l , width w , and height h . The surfaces of the box are labeled as sides, top, bottom, front, and back. A box like this is called a *rectangular solid*. In general, a rectangular solid is a closed figure in which all sides are rectangles that meet at right angles.



$$S = 2lh + 2hw + 2lw$$

To find the *surface area* of the box, we add the areas of each of the six surfaces that are labeled in the figure.

$$\begin{aligned} \text{Surface area} &= \text{side} + \text{side} + \text{front} + \text{back} + \text{top} + \text{bottom} \\ S &= l \cdot h + l \cdot h + h \cdot w + h \cdot w + l \cdot w + l \cdot w \\ &= 2lh + 2hw + 2lw \end{aligned}$$

PRACTICE PROBLEMS

- A family is painting a dining room that is 12 feet wide and 15 feet long.
 - If the ceiling is 8 feet high, find the surface area of the walls and the ceiling, but not the floor.
 - If a gallon of paint will cover 400 square feet, how many gallons should they buy to paint the walls and the ceiling?

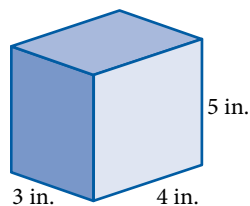
- Find the surface area of the straw pictured in Example 2 if the radius is doubled.

Answers

- 612 ft²
 - 2 gallons will cover everything with some paint left over.
- 9.42 in²

EXAMPLE 1

Find the surface area of the box shown here.



SOLUTION To find the surface area we find the area of each surface individually, and then we add them together:

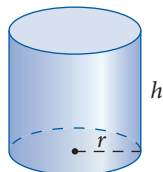
$$\begin{aligned}\text{Surface area} &= 2(3 \text{ in.})(4 \text{ in.}) + 2(3 \text{ in.})(5 \text{ in.}) + 2(4 \text{ in.})(5 \text{ in.}) \\ &= 24 \text{ in}^2 + 30 \text{ in}^2 + 40 \text{ in}^2 \\ &= 94 \text{ in}^2\end{aligned}$$

The total surface area is 94 square inches.

B Surface Area of a Cylinder

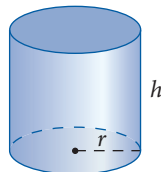
Here are the formulas for the surface area of some right circular cylinders. A *right circular cylinder* is a cylinder whose base is a circle and whose sides are perpendicular to the base.

Open at both ends



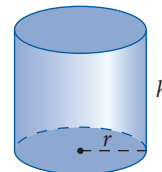
$$S = 2\pi rh$$

Closed at one end



$$S = \pi r^2 + 2\pi rh$$

Closed at both ends

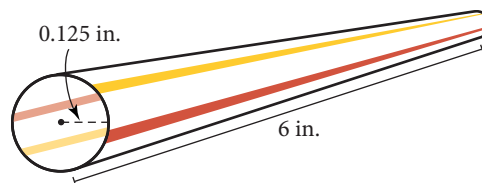


$$S = 2\pi r^2 + 2\pi rh$$

EXAMPLE 2

The drinking straw shown below has a radius of 0.125 inch and a length of 6 inches. How much material was used to make the straw?

SOLUTION A straw is a cylinder that is open at both ends. We find the amount of material needed to make the straw by calculating the surface area.

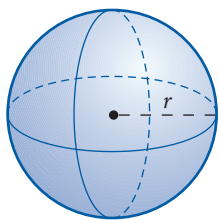


$$\begin{aligned}S &= 2\pi rh \\ &\approx 2(3.14)(0.125)(6) \\ &= 4.71 \text{ in}^2\end{aligned}$$

It takes 4.71 square inches of material to make the straw.

C Surface Area of a Sphere

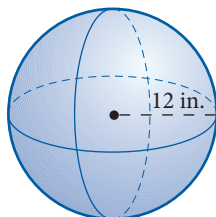
The figure below shows a sphere and the formula for its surface area.



$$\begin{aligned}\text{Surface Area} &= 4\pi(\text{radius})^2 \\ S &= 4\pi r^2\end{aligned}$$

EXAMPLE 3

Find the surface area of the given sphere.



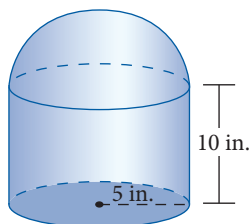
SOLUTION The surface area is

$$\begin{aligned}S &= 4\pi r^2 \\ &\approx 4(3.14)(12)^2 \\ &= 1,808.64 \text{ in}^2\end{aligned}$$

The surface area is 1,808.64 square inches. ■

EXAMPLE 4

The figure below is composed of a right circular cylinder with half a sphere on top. (A half-sphere is called a hemisphere.) Find the surface area of the figure assuming it is closed on the bottom.



SOLUTION The total surface area is found by adding the surface area of the cylinder to the surface area of the hemisphere.

$$\begin{aligned}S &= \text{surface area of bottom of cylinder} + \text{surface area of side of cylinder} + \text{surface area of hemisphere} \\ &= \pi r^2 + 2\pi rh + \frac{1}{2}(4\pi r^2) \\ &\approx (3.14)(5)^2 + 2(3.14)(5)(10) + \frac{1}{2}[4(3.14)(5^2)] \\ &= 78.5 + 314 + 157 \\ &= 549.5 \text{ in}^2\end{aligned}$$

The total surface area is 549.5 square inches. ■

3. Find the surface area of the sphere in Example 3 if the radius is halved.

4. If the radius is doubled so that it becomes 10 inches instead of 5 inches, what is the new surface area of the figure?

Answers

3. 452.16 in²
4. 1,570 in²

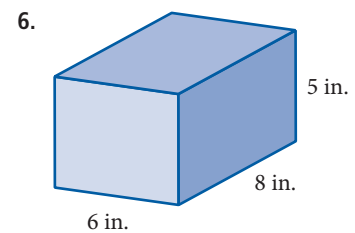
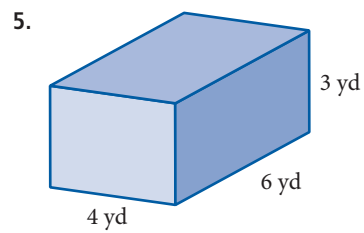
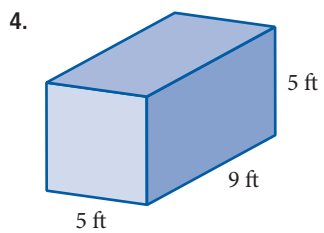
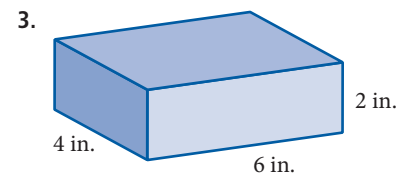
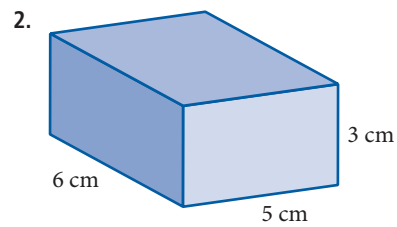
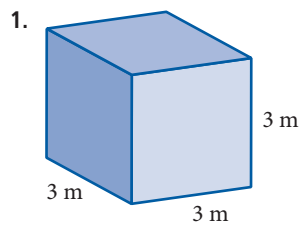
Getting Ready for Class

After reading through the preceding section, respond in your own words and in complete sentences.

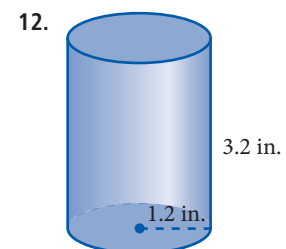
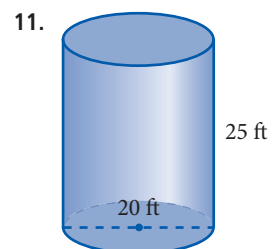
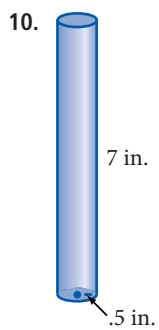
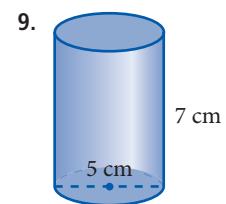
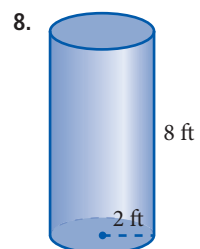
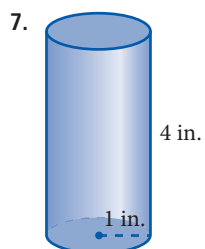
1. What is a rectangular solid?
2. How do the formulas for a cylinder open at both ends and a cylinder closed at both ends differ?
3. What is a hemisphere?
4. How are a circle and a sphere related?

Problem Set 8.3

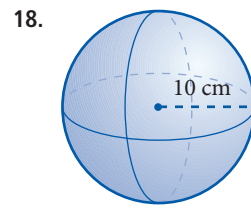
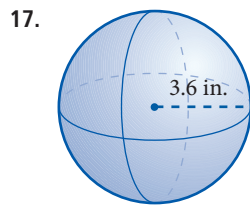
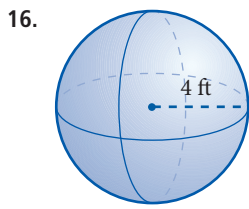
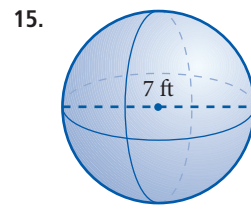
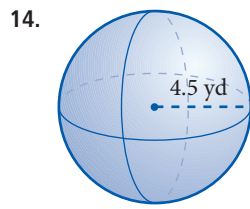
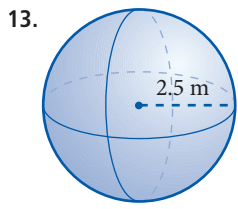
A Find the surface area of each rectangular solid. [Example 1]



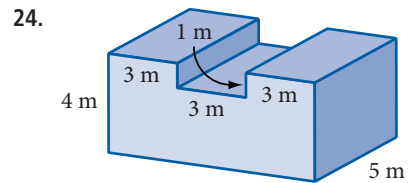
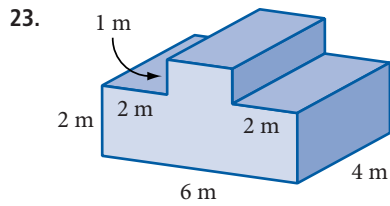
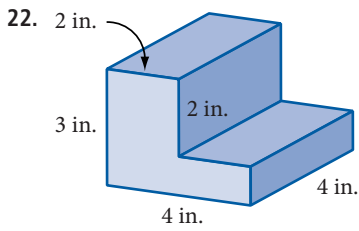
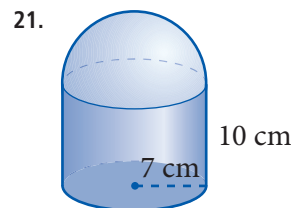
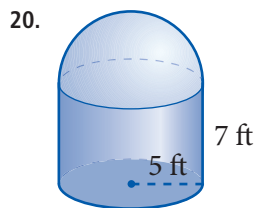
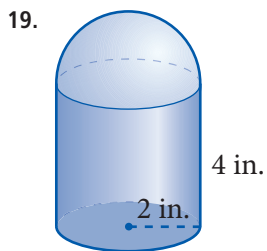
B Find the surface area of each cylinder (assume each cylinder is closed at both ends). [Example 2]



C Find the surface area of each sphere. [Example 3]

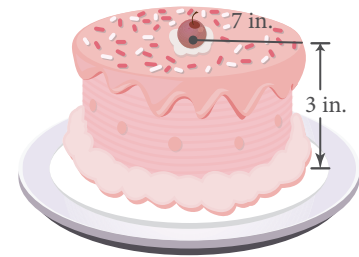


Find the surface area of each figure. [Example 4]



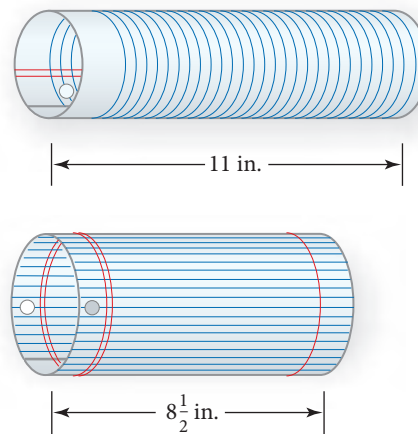
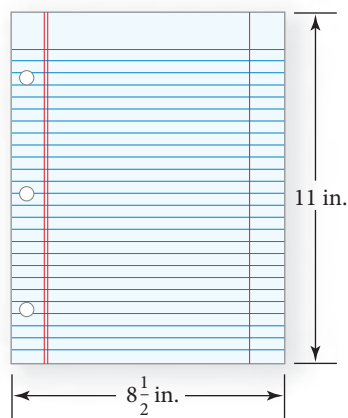
■ Applying the Concepts

25. **Surface Area of a Cake** The cake shown here is a wonder cake and has a radius of 7 inches. If the thickness of the cake is 3 inches, what is the surface area of the whole cake (including the bottom)?



26. **Surface Area of a Cake** If they stacked another cake of the same size on top of the cake, what would the new surface area be?

Making a Cylinder. Make an $8\frac{1}{2}$ by 11 inch piece of notebook paper into a cylinder as shown. Use the diagrams to help with Problems 27 and 28.

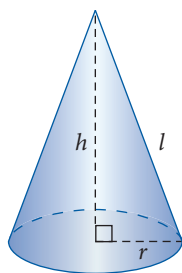


27. a. If the length of the cylinder is 11 inches, what is the largest possible radius? Round to the nearest thousandth.
- b. Using the radius from Part a, and the formula for the surface area of a cylinder, find the surface area of the rolled piece of notebook paper. Round to the nearest tenth.
- c. Find the area of the original piece of notebook paper by multiplying length by width. Does this area match the area you found in Part b?
28. a. If the length of the cylinder is $8\frac{1}{2}$ inches, what is the largest possible radius? Round to the nearest thousandth.
- b. Using the radius from Part a, and the formula for the surface area of a cylinder, find the surface area of the rolled piece of notebook paper. Round to the nearest tenth.
- c. Find the area of the original piece of notebook paper by multiplying length by width. Does this area match the area you found in Part b?
29. A living room is 10 feet long and 8 feet wide. If the ceiling is 8 feet high, what is the total surface area of the four walls?
30. A family room is 12 feet wide and 14 feet long. If the ceiling is 8 feet high, what is the total surface area of the four walls?

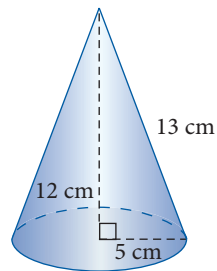
Extending the Concepts

31. The surface of the earth is 70% water. If the diameter of the earth is 8,000 miles, how many square miles of the earth are covered by land?
32. The surface of the earth is 70% water. How many square kilometers of the earth are covered by land if the diameter is 12,874 kilometers?

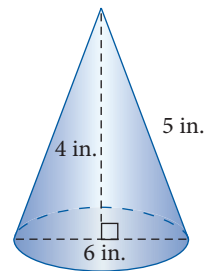
Surface Area of a Cone. The surface area of a cone is given by the formula $S = \pi r^2 + \pi r l$ where l is called the slant height. We can use the Pythagorean Theorem to find the slant height (see left figure). Using the formula, find the surface area of the following cones.



33.



34.



Getting Ready for the Next Section

Simplify each expression.

35. 3^3

36. $15 \cdot 3 \cdot 5$

37. $\frac{1}{2} \cdot \frac{4}{3}$

38. 0.125^2

Simplify each expression. Round to the nearest thousandth.

39. $3.14(0.125)^2(6)$

40. $\frac{2}{3}(392.6)$

41. $3.14(25)(10)$

42. $785 \div 3$

Maintaining Your Skills

43. How many cubic inches are in 1 cubic foot?

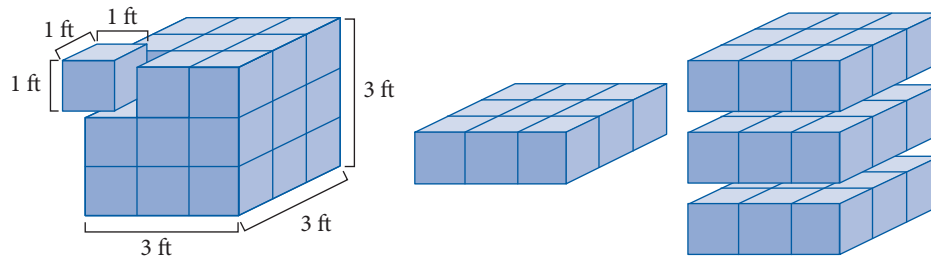
44. Convert 12 pints to quarts.

45. Convert 12 pints to gallons.

46. A bottle holds 12 fluid ounces. Is this more or less than a pint?

Introduction . . .

Next, we move up one dimension and consider what is called volume. Volume is the measure of the space enclosed by a solid. For instance, if each edge of a cube is 3 feet long, then we can think of the cube as being made up of a number of smaller cubes, each of which is 1 foot long, 1 foot wide, and 1 foot high. Each of these smaller cubes is called a cubic foot. To count the number of them in the larger cube, think of the large cube as having three layers. You can see that the top layer contains 9 cubic feet. Because there are three layers, the total number of cubic feet in the large cube is $9 \cdot 3 = 27$.

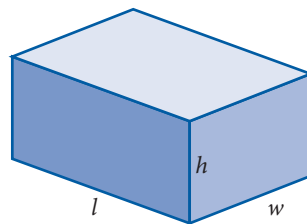


On the other hand, if we multiply the length, the width, and the height of the cube, we have the same result:

$$\begin{aligned}\text{Volume} &= (3 \text{ feet})(3 \text{ feet})(3 \text{ feet}) \\ &= (3 \cdot 3 \cdot 3)(\text{feet} \cdot \text{feet} \cdot \text{feet}) \\ &= 27 \text{ cubic feet}\end{aligned}$$

A Volume of a Rectangular Solid

For the present we will confine our discussion of volume to volumes of *rectangular solids*. Rectangular solids are the three-dimensional equivalents of rectangles: Opposite sides are parallel, and any two sides that meet, meet at right angles. A rectangular solid is shown below, along with the formula used to calculate its volume.



$$\begin{aligned}\text{Volume} &= (\text{length})(\text{width})(\text{height}) \\ V &= lwh\end{aligned}$$

EXAMPLE 1

Find the volume of a rectangular solid with length 15 inches, width 3 inches, and height 5 inches.

SOLUTION To find the volume we apply the formula shown above:

$$\begin{aligned}V &= l \cdot w \cdot h \\ &= (15 \text{ in.})(3 \text{ in.})(5 \text{ in.}) \\ &= 225 \text{ in}^3\end{aligned}$$

Objectives

- A Find the volume of a rectangular solid.
- B Find the volume of a cylinder.
- C Find the volume of a cone.
- D Find the volume of sphere.

PRACTICE PROBLEMS

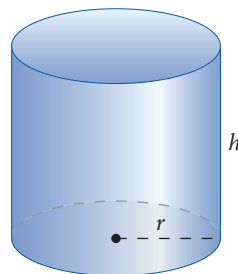
1. A home has a dining room that is 12 feet wide and 15 feet long. If the ceiling is 8 feet high, find the volume of the dining room.

Answer

1. 1,440 cubic feet

B Volume of a Cylinder

Here is the formula for the volume of a right circular cylinder, a cylinder whose base is a circle and whose sides are perpendicular to the base.



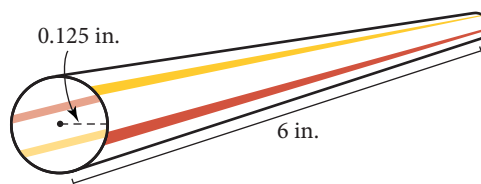
$$\text{Volume} = \pi(\text{radius})^2(\text{height})$$

$$V = \pi r^2 h$$

2. Find the volume of the straw in Example 2 if the radius is doubled. Round your answer to the nearest thousandth.

EXAMPLE 2

The drinking straw shown below has a radius of 0.125 inch and a length of 6 inches. To the nearest thousandth, find the volume of liquid that it will hold.

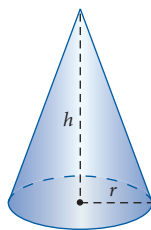


SOLUTION The total volume is found from the formula for the volume of a right circular cylinder. In this case, the radius is $r = 0.125$, and the height is $h = 6$. We approximate π with 3.14.

$$\begin{aligned} V &= \pi r^2 h \\ &\approx (3.14)(0.125)^2(6) \\ &= (3.14)(0.015625)(6) \\ &\approx 0.294 \text{ in}^3 \text{ to the nearest thousandth} \end{aligned}$$

C Volume of a Cone

Next, we have the formula for the volume of a cone. As you can see, the relevant dimensions of a cone are the radius of its circular base and its height. You will also notice that this formula involves both a fraction, the number $\frac{1}{3}$, and a decimal, the number π , for which we have been using 3.14.



$$\text{Volume} = \frac{1}{3} \pi(\text{radius})^2(\text{height})$$

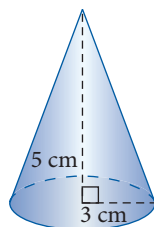
$$V = \frac{1}{3} \pi r^2 h$$

Answer

2. 1.178 in³

EXAMPLE 3

Find the volume of the given cone.

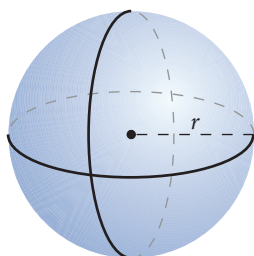


SOLUTION The volume is found by using the formula for the volume of a cone. In this case, the radius = 3 cm, and the height = 5 cm. Again, we use 3.14 for π .

$$\begin{aligned} V &= \frac{1}{3}\pi r^2 h \\ &\approx \frac{1}{3}(3.14)(3^2)(5) \\ &= \frac{1}{3}(3.14)(9)(5) \\ &= (3.14)(3)(5) \\ &= (3.14)(15) \\ &= 47.1 \text{ cm}^3 \end{aligned}$$

D Volume of a Sphere

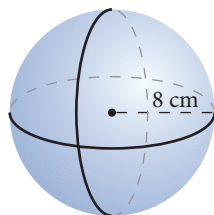
Next we have a sphere and the formula for its volume. Once again, the formula contains both the fraction $\frac{4}{3}$ and the number π .



$$\begin{aligned} \text{Volume} &= \frac{4}{3}\pi(\text{radius})^3 \\ &= \frac{4}{3}\pi r^3 \end{aligned}$$

EXAMPLE 4

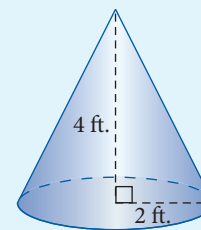
Find the volume of the given sphere. Round your answer to the nearest hundredth.



SOLUTION The volume is

$$\begin{aligned} V &= \frac{4}{3}\pi r^3 \\ &\approx \frac{4}{3}(3.14)(8)^3 \\ &\approx 2,143.57 \text{ cm}^3 \end{aligned}$$

3. Find the volume of the given cone. Round your answer to the nearest thousandth.



4. Find the volume of the sphere in Example 4 if the radius is halved. Round to the nearest hundredth.

Answers

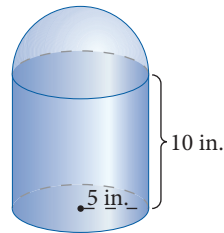
3. 16.747 ft³
4. 267.95 cm³

5. If the radius in the figure in example 4 is doubled so that it becomes 10 inches instead of 5 inches, what is the new volume of the figure? Round your answer to the nearest tenth.

Chapter 8 Geometry

EXAMPLE 5

The figure here is composed of a right circular cylinder with half a sphere on top. (A half-sphere is called a hemisphere.) To the nearest tenth, find the total volume enclosed by the figure.



SOLUTION The total volume is found by adding the volume of the cylinder to the volume of the hemisphere.

$$V = \text{volume of cylinder} + \text{volume of hemisphere}$$

$$= \pi r^2 h + \frac{1}{2} \cdot \frac{4}{3} \pi r^3$$

$$\approx (3.14)(5)^2(10) + \frac{1}{2} \cdot \frac{4}{3}(3.14)(5)^3$$

$$= (3.14)(25)(10) + \frac{1}{2} \cdot \frac{4}{3}(3.14)(125)$$

$$= 785 + \frac{2}{3}(392.5) \quad \text{Multiply: } \frac{1}{2} \cdot \frac{4}{3} = \frac{4}{6} = \frac{2}{3}$$

$$= 785 + \frac{785}{3} \quad \text{Multiply: } 2(392.5) = 785$$

$$= 785 + 261.7 \quad \text{Divide 785 by 3, and round to the nearest tenth}$$

$$= 1,046.7 \text{ in}^3$$

Getting Ready for Class

After reading through the preceding section, respond in your own words and in complete sentences.

1. If the dimensions of a rectangular solid are given in inches, what units will be associated with the volume?
2. What is the relationship between area and volume?
3. What formulas from this section involve both a fraction and a decimal?
4. State the volume formula for a cube, a cylinder, a cone, and a sphere.

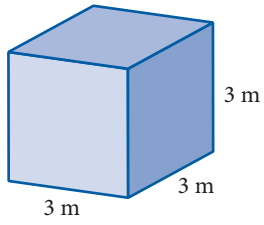
Answer

5. 5,233.3 in³

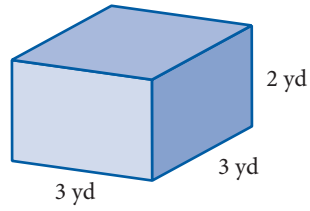
Problem Set 8.4

A Find the volume of each rectangular solid. Round to the nearest hundredth, if necessary. [Example 1]

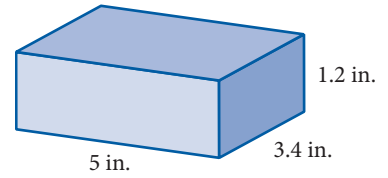
1.



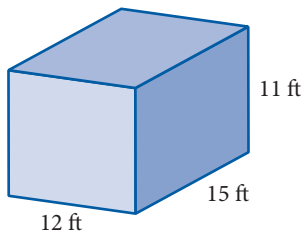
2.



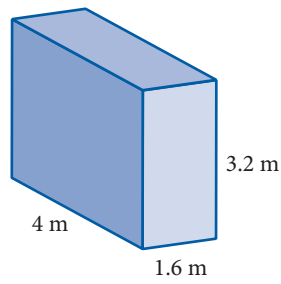
3.



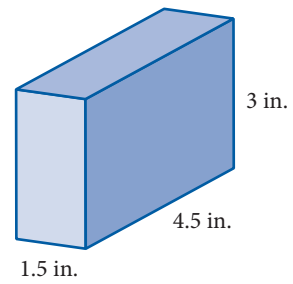
4.



5.

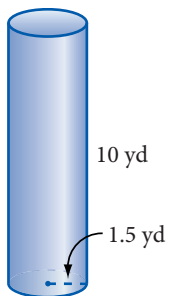


6.

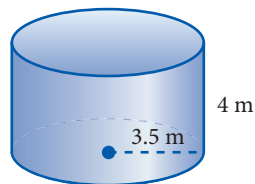


B Find the volume of each cylinder. Round to the nearest hundredth, if necessary. [Example 2]

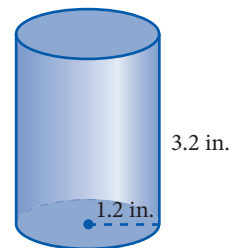
7.



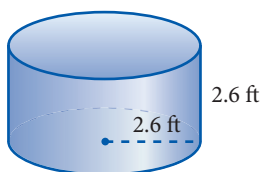
8.



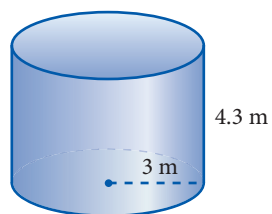
9.



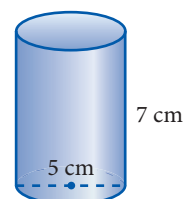
10.



11.

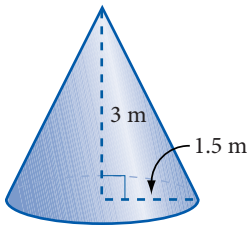


12.

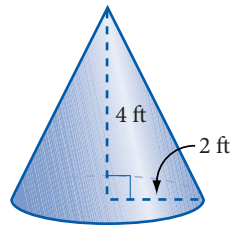


C Find the volume of each cone. Round to the nearest hundredth, if necessary. [Example 3]

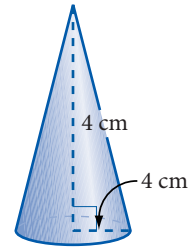
13.



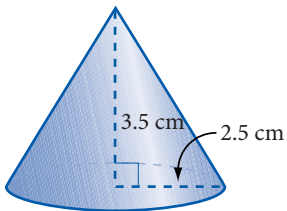
14.



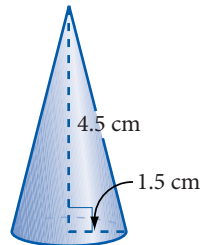
15.



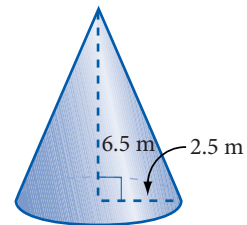
16.



17.

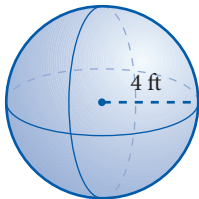


18.

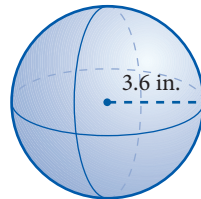


D Find the volume of each sphere. Round to the nearest hundredth, if necessary. [Example 4]

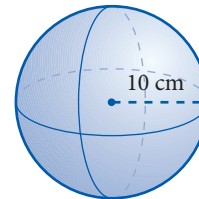
19.



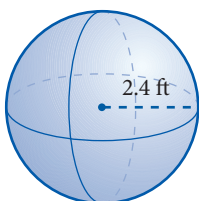
20.



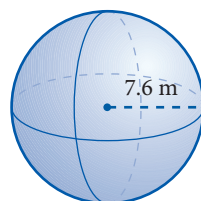
21.



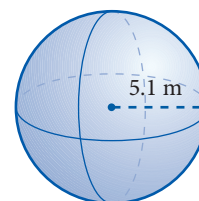
22.



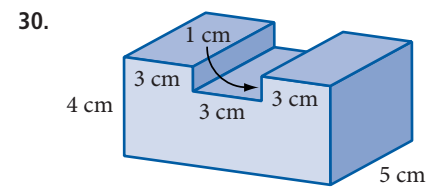
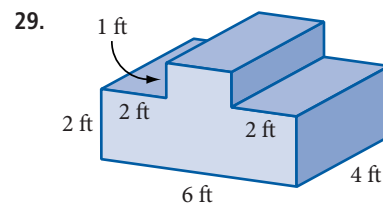
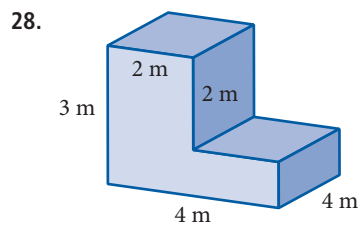
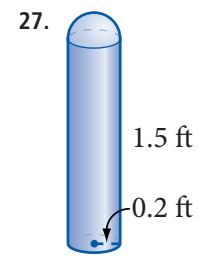
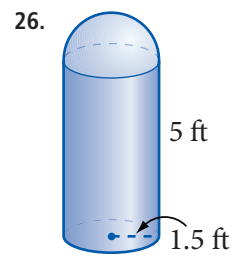
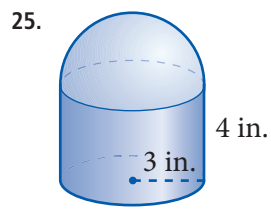
23.



24.

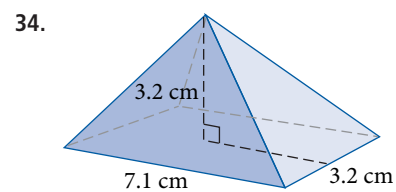
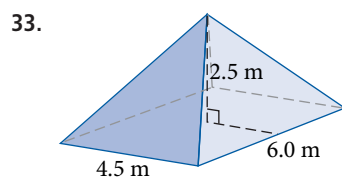
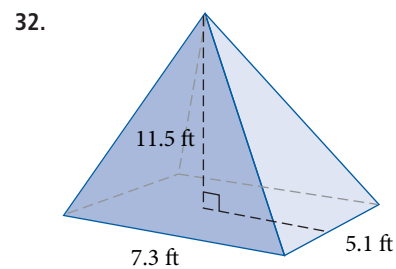
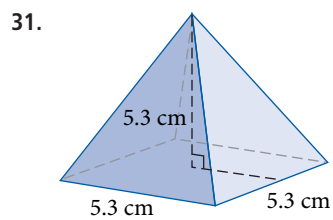


Find the volume of each figure. Round to the nearest hundredth, if necessary. [Example 5]



Triangular Pyramid. The formula for finding the volume of a triangular pyramid is one-third the area of the base times the height, or $V = \frac{1}{3} Bh$, where B = the area of the base.

Find the volume of each pyramid. Round to the nearest hundredth.



Getting Ready for the Next Section

The problems below review the material on exponents we have covered previously.

Expand and simplify.

35. $\left(\frac{1}{3}\right)^4$

36. $\left(\frac{3}{4}\right)^3$

37. $\left(\frac{5}{6}\right)^2$

38. $\left(\frac{3}{5}\right)^3$

39. $(0.5)^2$

40. $(0.1)^3$

41. $(1.2)^2$

42. $(2.1)^2$

43. $3^2 + 4^2$

44. $5^2 + 12^2$

45. $6^2 + 8^2$

46. $2^2 + 3^2$

Maintaining Your Skills

Divide each of the following and write your answers in lowest terms.

47. $\frac{2}{3} \div \frac{4}{9}$

48. $\frac{1}{6} \div \frac{2}{3}$

49. $\frac{4}{7} \div \frac{3}{14}$

50. $\frac{3}{4} \div \frac{9}{16}$

51. $\frac{7}{15} \div \frac{21}{30}$

52. $\frac{4}{9} \div \frac{12}{27}$

53. $\frac{4}{7} \div \frac{2}{3}$

54. $\frac{5}{12} \div \frac{7}{15}$

55. $\frac{36}{15} \div \frac{24}{10}$

56. $\frac{23}{56} \div \frac{2}{4}$

57. $\frac{48}{40} \div \frac{6}{8}$

58. $\frac{27}{20} \div \frac{9}{50}$

59. $\frac{2}{5} \div 2$

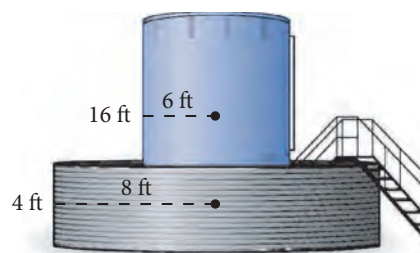
60. $\frac{3}{4} \div 21$

61. $\frac{5}{8} \div 10$

62. $\frac{4}{7} \div 2$

Extending the Concepts

63. **Containment System.** Holding tanks for hazardous liquids are often surrounded by containment tanks that will hold the hazardous liquid if the main tank begins to leak. In the graphic to the right, the center tank has a height of 16 feet and a radius of 6 feet. The outside containment tank has a height of 4 feet and a radius of 8 feet. If the center tank is full of heating fuel and develops a leak at the bottom, will the containment tank be able to hold all the heating fuel that leaks out?



Square Roots and the Pythagorean Theorem

8.5

Introduction . . .

Figure 1 shows the front view of the roof of a tool shed. How do we find the length d of the diagonal part of the roof? (Imagine that you are drawing the plans for the shed. Since the shed hasn't been built yet, you can't just measure the diagonal, but you need to know how long it will be so you can buy the correct amount of material to build the shed.)

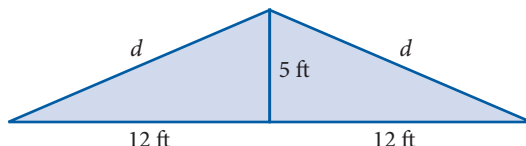


FIGURE 1

There is a formula from geometry that gives the length d :

$$d = \sqrt{12^2 + 5^2}$$

where $\sqrt{\quad}$ is called the *square root symbol*. If we simplify what is under the square root symbol, we have this:

$$\begin{aligned} d &= \sqrt{144 + 25} \\ &= \sqrt{169} \end{aligned}$$

The expression $\sqrt{169}$ stands for the number we *square* to get 169. Because $13 \cdot 13 = 169$, that number is 13. Therefore the length d in our original diagram is 13 feet.

A Square Roots

Here is a more detailed discussion of square roots. In Chapter 1, we did some work with exponents. In particular, we spent some time finding squares of numbers. For example, we considered expressions like this:

$$\begin{aligned} 5^2 &= 5 \cdot 5 = 25 \\ 7^2 &= 7 \cdot 7 = 49 \\ x^2 &= x \cdot x \end{aligned}$$

We say that “the square of 5 is 25” and “the square of 7 is 49.” To square a number, we multiply it by itself. When we ask for the *square root* of a given number, we want to know what number we *square* in order to obtain the given number. We say that the square root of 49 is 7, because 7 is the number we square to get 49. Likewise, the square root of 25 is 5, because $5^2 = 25$. The symbol we use to denote square root is $\sqrt{\quad}$, which is also called a *radical sign*. Here is the precise definition of square root.

Definition

The **square root** of a positive number a , written \sqrt{a} , is the number we square to get a . In symbols:

$$\text{If } \sqrt{a} = b \text{ then } b^2 = a.$$

We list some common square roots in Table 1.

Objectives

- A Find square roots of numbers.
- B Use decimals to approximate square roots.
- C Solve problems with the Pythagorean Theorem.

Note

The square root we are describing here is actually the principal square root. There is another square root that is a negative number. We won't see it in this book, but, if you go on to take an algebra course, you will see it there.

TABLE 1

Statement	In Words	Reason
$\sqrt{0} = 0$	The square root of 0 is 0	Because $0^2 = 0$
$\sqrt{1} = 1$	The square root of 1 is 1	Because $1^2 = 1$
$\sqrt{4} = 2$	The square root of 4 is 2	Because $2^2 = 4$
$\sqrt{9} = 3$	The square root of 9 is 3	Because $3^2 = 9$
$\sqrt{16} = 4$	The square root of 16 is 4	Because $4^2 = 16$
$\sqrt{25} = 5$	The square root of 25 is 5	Because $5^2 = 25$

Numbers like 1, 9, and 25, whose square roots are whole numbers, are called *perfect squares*. To find the square root of a perfect square, we look for the whole number that is squared to get the perfect square. The following examples involve square roots of perfect squares.

PRACTICE PROBLEMS

1. Simplify: $4\sqrt{25}$

2. Simplify: $\sqrt{36} + \sqrt{4}$

3. Simplify: $\sqrt{\frac{36}{100}}$

Simplify each expression as much as possible.

4. $14\sqrt{36}$

5. $\sqrt{81} - \sqrt{25}$

6. $\sqrt{\frac{64}{121}}$

Answers

1. 20 2. 8 3. $\frac{3}{5}$ 4. 84

5. 4 6. $\frac{8}{11}$

EXAMPLE 1

Simplify: $7\sqrt{64}$

SOLUTION The expression $7\sqrt{64}$ means 7 times $\sqrt{64}$. To simplify this expression, we write $\sqrt{64}$ as 8 and multiply:

$$7\sqrt{64} = 7 \cdot 8 = 56$$

We know $\sqrt{64} = 8$, because $8^2 = 64$.

EXAMPLE 2

Simplify: $\sqrt{9} + \sqrt{16}$

SOLUTION We write $\sqrt{9}$ as 3 and $\sqrt{16}$ as 4. Then we add:

$$\sqrt{9} + \sqrt{16} = 3 + 4 = 7$$

EXAMPLE 3

Simplify: $\sqrt{\frac{25}{81}}$

SOLUTION We are looking for the number we square (multiply times itself) to get $\frac{25}{81}$. We know that when we multiply two fractions, we multiply the numerators and multiply the denominators. Because $5 \cdot 5 = 25$ and $9 \cdot 9 = 81$, the square root of $\frac{25}{81}$ must be $\frac{5}{9}$.

$$\sqrt{\frac{25}{81}} = \frac{5}{9} \quad \text{because} \quad \left(\frac{5}{9}\right)^2 = \frac{5}{9} \cdot \frac{5}{9} = \frac{25}{81}$$

In Examples 4–6, we simplify each expression as much as possible.

EXAMPLE 4

Simplify: $12\sqrt{25} = 12 \cdot 5 = 60$

EXAMPLE 5

Simplify: $\sqrt{100} - \sqrt{36} = 10 - 6 = 4$

EXAMPLE 6

Simplify: $\sqrt{\frac{49}{121}} = \frac{7}{11}$ because $\left(\frac{7}{11}\right)^2 = \frac{7}{11} \cdot \frac{7}{11} = \frac{49}{121}$

B Approximating Square Roots

So far in this section we have been concerned only with square roots of perfect squares. The next question is, “What about square roots of numbers that are not perfect squares, like $\sqrt{7}$, for example?” We know that

$$\sqrt{4} = 2 \quad \text{and} \quad \sqrt{9} = 3$$

And because 7 is between 4 and 9, $\sqrt{7}$ should be between $\sqrt{4}$ and $\sqrt{9}$. That is, $\sqrt{7}$ should be between 2 and 3. But what is it exactly? The answer is, we cannot write it exactly in decimal or fraction form. Because of this, it is called an *irrational number*. We can approximate it with a decimal, but we can never write it exactly with a decimal. Table 2 gives some decimal approximations for $\sqrt{7}$. The decimal approximations were obtained by using a calculator. We could continue the list to any accuracy we desired. However, we would never reach a number in decimal form whose square was exactly 7.

TABLE 2

APPROXIMATIONS FOR THE SQUARE ROOT OF 7

Accurate to the Nearest	The Square Root of 7 is	Check by Squaring
Tenth	$\sqrt{7} = 2.6$	$(2.6)^2 = 6.76$
Hundredth	$\sqrt{7} = 2.65$	$(2.65)^2 = 7.0225$
Thousandth	$\sqrt{7} = 2.646$	$(2.646)^2 = 7.001316$
Ten thousandth	$\sqrt{7} = 2.6458$	$(2.6458)^2 = 7.00025764$

EXAMPLE 7

Give a decimal approximation for the expression $5\sqrt{12}$ that is accurate to the nearest ten thousandth.

SOLUTION Let's agree not to round to the nearest ten thousandth until we have first done all the calculations. Using a calculator, we find $\sqrt{12} \approx 3.4641016$. Therefore,

$$\begin{aligned} 5\sqrt{12} &\approx 5(3.4641016) && \sqrt{12} \text{ on calculator} \\ &= 17.320508 && \text{Multiplication} \\ &\approx 17.3205 && \text{To the nearest ten thousandth} \end{aligned}$$

EXAMPLE 8

Approximate $\sqrt{301} + \sqrt{137}$ to the nearest hundredth.

SOLUTION Using a calculator to approximate the square roots, we have

$$\sqrt{301} + \sqrt{137} \approx 17.349352 + 11.704700 = 29.054052$$

To the nearest hundredth, the answer is 29.05.

EXAMPLE 9

Approximate $\sqrt{\frac{7}{11}}$ to the nearest thousandth.

SOLUTION Because we are using calculators, we first change $\frac{7}{11}$ to a decimal and then find the square root:

$$\sqrt{\frac{7}{11}} \approx \sqrt{0.6363636} \approx 0.7977240$$

To the nearest thousandth, the answer is 0.798.

C The Pythagorean Theorem**FACTS FROM GEOMETRY** Perimeter

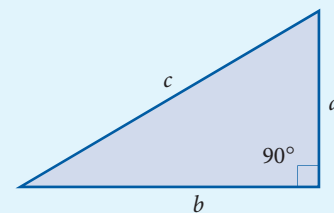
A *right triangle* is a triangle that contains a 90° (or right) angle. The longest side in a right triangle is called the *hypotenuse*, and we use the letter c to denote it. The two shorter sides are denoted by the letters a and b . The Pythagorean theorem states that the hypotenuse is the square root of the sum of the squares of the two shorter sides. In symbols:

$$c = \sqrt{a^2 + b^2}$$

7. Give a decimal approximation for the expression $5\sqrt{14}$ that is accurate to the nearest ten thousandth.

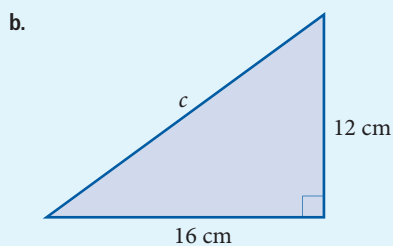
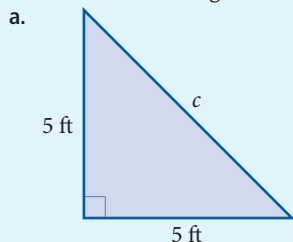
8. Approximate $\sqrt{405} + \sqrt{147}$ to the nearest hundredth.

9. Approximate $\sqrt{\frac{7}{12}}$ to the nearest thousandth.

**Answers**

7. 18.7083 8. 32.25 9. 0.764

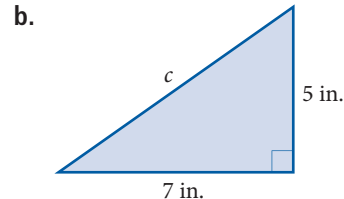
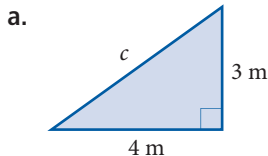
10. Find the length of the hypotenuse in each right triangle.



11. A wire from the top of a 12-foot pole is fastened to the ground by a stake that is 5 feet from the bottom of the pole. What is the length of the wire?

EXAMPLE 10

Find the length of the hypotenuse in each right triangle.



SOLUTION We apply the formula given above.

a. When $a = 3$ and $b = 4$:

$$\begin{aligned} c &= \sqrt{3^2 + 4^2} \\ &= \sqrt{9 + 16} \\ &= \sqrt{25} \\ c &= 5 \text{ meters} \end{aligned}$$

b. When $a = 5$ and $b = 7$:

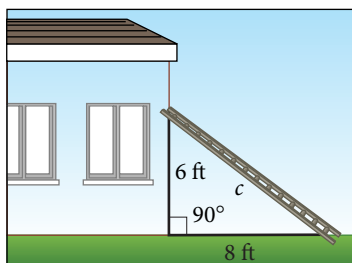
$$\begin{aligned} c &= \sqrt{5^2 + 7^2} \\ &= \sqrt{25 + 49} \\ &= \sqrt{74} \\ c &\approx 8.60 \text{ inches} \end{aligned}$$

In part a, the solution is a whole number, whereas in part b, we must use a calculator to get 8.60 as an approximation to $\sqrt{74}$.

EXAMPLE 11

A ladder is leaning against the top of a 6-foot wall. If the bottom of the ladder is 8 feet from the wall, how long is the ladder?

SOLUTION A picture of the situation is shown in Figure 2. We let c denote the length of the ladder. Applying the Pythagorean theorem, we have



$$\begin{aligned} c &= \sqrt{6^2 + 8^2} \\ &= \sqrt{36 + 64} \\ &= \sqrt{100} \\ &= 10 \text{ feet} \end{aligned}$$

The ladder is 10 feet long.

FIGURE 2

Getting Ready for Class

After reading through the preceding section, respond in your own words and in complete sentences.

1. Which number is larger, the square of 10 or the square root of 10?
2. Give a definition for the square root of a number.
3. What two numbers will the square root of 20 fall between?
4. What is the Pythagorean theorem?

Answers

10. a. approx. 7.07 ft b. 20 cm
11. 13 ft

Problem Set 8.5

A Find each of the following square roots without using a calculator. [Example 1]

1. $\sqrt{64}$

2. $\sqrt{100}$

3. $\sqrt{81}$

4. $\sqrt{49}$

5. $\sqrt{36}$

6. $\sqrt{144}$

7. $\sqrt{25}$

8. $\sqrt{169}$

A Simplify each of the following expressions without using a calculator. [Examples 1–6]

9. $3\sqrt{25}$

10. $9\sqrt{49}$

11. $6\sqrt{64}$

12. $11\sqrt{100}$

13. $15\sqrt{9}$

14. $8\sqrt{36}$

15. $16\sqrt{9}$

16. $9\sqrt{16}$

17. $\sqrt{49} + \sqrt{64}$

18. $\sqrt{1} + \sqrt{0}$

19. $\sqrt{16} - \sqrt{9}$

20. $\sqrt{25} - \sqrt{4}$

21. $3\sqrt{25} + 9\sqrt{49}$

22. $6\sqrt{64} + 11\sqrt{100}$

23. $15\sqrt{9} - 9\sqrt{16}$

24. $7\sqrt{49} - 2\sqrt{4}$

25. $\sqrt{\frac{16}{49}}$

26. $\sqrt{\frac{100}{121}}$

27. $\sqrt{\frac{36}{64}}$

28. $\sqrt{\frac{81}{144}}$

Indicate whether each of the statements in Problems 29–32 is *True* or *False*.

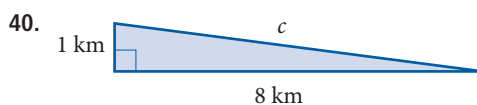
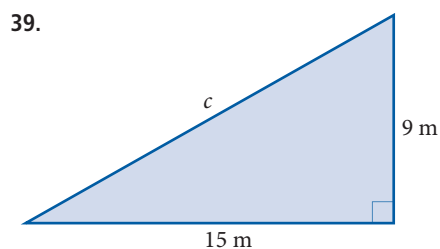
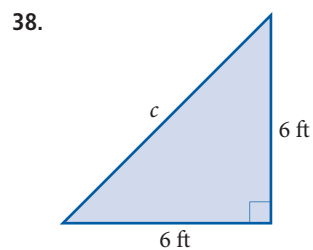
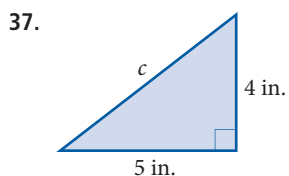
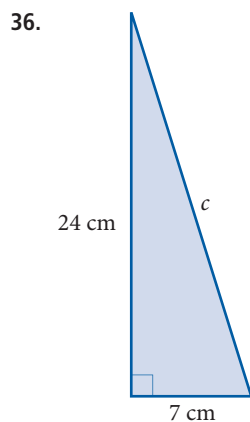
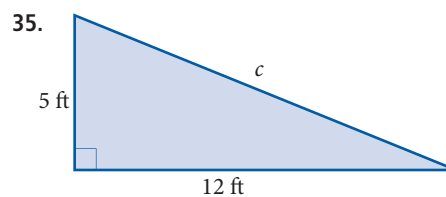
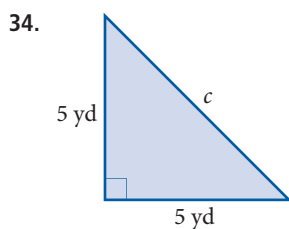
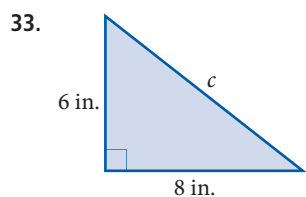
29. $\sqrt{4} + \sqrt{9} = \sqrt{4+9}$

30. $\sqrt{\frac{16}{25}} = \frac{\sqrt{16}}{\sqrt{25}}$

31. $\sqrt{25 \cdot 9} = \sqrt{25} \cdot \sqrt{9}$

32. $\sqrt{100} - \sqrt{36} = \sqrt{100-36}$

C Find the length of the hypotenuse in each right triangle. Round to the nearest hundredth, if necessary. [Examples 10, 11]



B Calculator Problems [Examples 7–9]

Use a calculator to work problems 41 through 60.

Approximate each of the following square roots to the nearest ten thousandth.

41. $\sqrt{1.25}$

42. $\sqrt{12.5}$

43. $\sqrt{125}$

44. $\sqrt{1250}$

Approximate each of the following expressions to the nearest hundredth.

45. $2\sqrt{3}$

46. $3\sqrt{2}$

47. $5\sqrt{5}$

48. $5\sqrt{3}$

49. $\frac{\sqrt{3}}{3}$

50. $\frac{\sqrt{2}}{2}$

51. $\sqrt{\frac{1}{3}}$

52. $\sqrt{\frac{1}{2}}$

Approximate each of the following expressions to the nearest thousandth.

53. $\sqrt{12} + \sqrt{75}$

54. $\sqrt{18} + \sqrt{50}$

55. $\sqrt{87}$

56. $\sqrt{68}$

57. $2\sqrt{3} + 5\sqrt{3}$

58. $3\sqrt{2} + 5\sqrt{2}$

59. $7\sqrt{3}$

60. $8\sqrt{2}$

Applying the Concepts

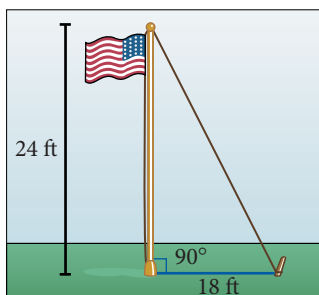
61. **Google Earth** The Google Earth image shows a right triangle between three cities in the Los Angeles area. If the distance between Pomona and Ontario is 5.7 miles, and the distance between Ontario and Upland is 3.6 miles, what is the distance between Pomona and Upland? Round to the nearest tenth of a mile.



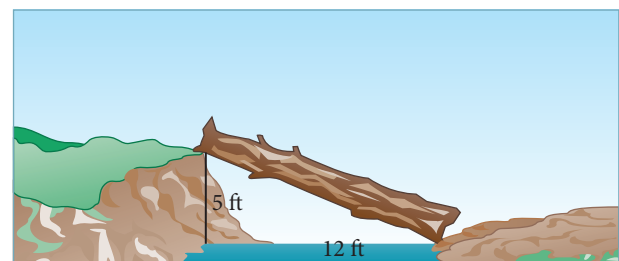
62. **Google Earth** The Google Earth image shows three cities in Colorado. If the distance between Denver and North Washington is 2.5 miles, and the distance between Edgewater and Denver is 4 miles, what is the distance between North Washington and Edgewater? Round to the nearest tenth.



63. **Geometry** One end of a wire is attached to the top of a 24-foot pole; the other end of the wire is anchored to the ground 18 feet from the bottom of the pole. If the pole makes an angle of 90° with the ground, find the length of the wire.



64. **Geometry** Two children are trying to cross a stream. They want to use a log that goes from one bank to the other. If the left bank is 5 feet higher than the right bank and the stream is 12 feet wide, how long must a log be to just barely reach?



65. **Geometry** A ladder is leaning against the top of a 15-foot wall. If the bottom of the ladder is 20 feet from the wall, how long is the ladder?

66. **Geometry** A wire from the top of a 24-foot pole is fastened to the ground by a stake that is 10 feet from the bottom of the pole. How long is the wire?

67. **Surveying** A surveying team wants to calculate the length of a straight tunnel through a mountain. They form a right angle by connecting lines from each end of the proposed tunnel. One of the connecting lines is 3 miles, and the other is 4 miles. What is the length of the proposed tunnel?

68. **Surveying** A surveying team wants to calculate the length of a straight tunnel through a mountain. They form a right angle by connecting lines from each end of the proposed tunnel. One of the connecting lines is 6 miles, and the other is 8 miles. What is the length of the proposed tunnel?

Factor each of the following numbers into the product of two numbers, one of which is a perfect square. (Remember from Chapter 1, a perfect square is 1, 4, 9, 16, 25, 36, . . . , etc.)

69. 32

70. 200

71. 75

72. 12

73. 50

74. 20

75. 40

76. 18

77. 32

78. 27

79. 98

80. 72

81. 48

82. 121

■ Maintaining Your Skills

The problems below review material involving fractions and mixed numbers. Perform the indicated operations. Write your answers as whole numbers, proper fractions, or mixed numbers.

83. $\frac{5}{7} \cdot \frac{14}{25}$

84. $1\frac{1}{4} \div 2\frac{1}{8}$

85. $4\frac{3}{10} + 5\frac{2}{100}$

86. $8\frac{1}{5} + 1\frac{1}{10}$

87. $3\frac{2}{10} \cdot 2\frac{5}{10}$

88. $6\frac{9}{10} \div 2\frac{3}{10}$

89. $7\frac{1}{10} - 4\frac{3}{10}$

90. $3\frac{7}{10} - 1\frac{97}{100}$

91. $\frac{\frac{3}{8}}{\frac{6}{7}}$

92. $\frac{\frac{3}{4}}{\frac{1}{2} + \frac{1}{4}}$

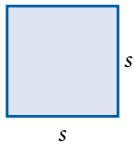
93. $\frac{\frac{2}{3} + \frac{3}{5}}{\frac{2}{3} - \frac{3}{5}}$

94. $\frac{\frac{4}{5} - \frac{1}{3}}{\frac{4}{5} + \frac{1}{3}}$

Chapter 8 Summary

Formulas for Perimeter and Area of Polygons [8.1, 8.2]

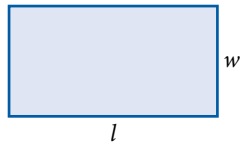
Square



$$P = 4s$$

$$A = s^2$$

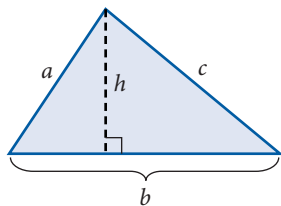
Rectangle



$$P = 2l + 2w$$

$$A = lw$$

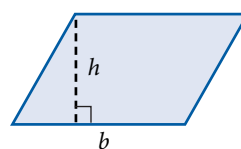
Triangle



$$P = a + b + c$$

$$A = \frac{1}{2}bh$$

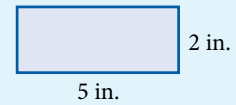
Parallelogram



$$A = bh$$

EXAMPLES

1. a. Find the perimeter and the area.



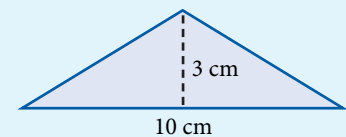
$$P = 2 \cdot 5 + 2 \cdot 2$$

$$= 14 \text{ in.}$$

$$A = 5 \cdot 2$$

$$= 10 \text{ in}^2$$

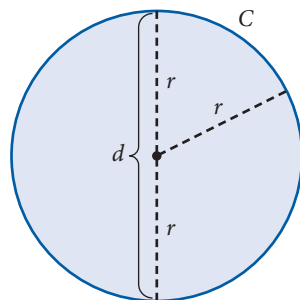
- b. Find the area.



$$A = \frac{1}{2}(10)(3)$$

$$= 15 \text{ cm}^2$$

Formulas for Diameter and Radius of a Circle [8.1, 8.2]



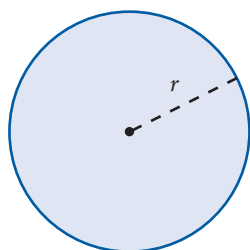
C = circumference
r = radius
d = diameter
 $d = 2r$
 $r = \frac{d}{2}$

2. If the radius of a circle is 5.7 feet, find the diameter.

$$d = 2(5.7)$$

$$= 11.4 \text{ ft}$$

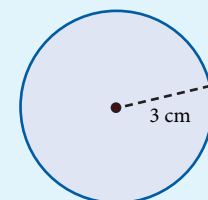
Formulas for Circumference and Area of a Circle [8.1, 8.2]



$$C = 2\pi r$$

$$A = \pi r^2$$

3. Find the circumference and the area.



$$C = 2(3.14)(3)$$

$$= 18.84 \text{ cm}$$

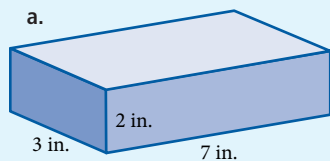
$$A = 3.14(3)^2$$

$$= 28.26 \text{ cm}^2$$

Formulas for Surface Area and Volume [8.3, 8.4]

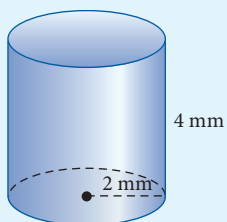
4. Find the volume and the surface area.

a.



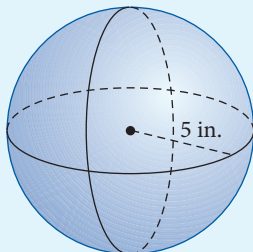
$$\begin{aligned} V &= 7 \cdot 3 \cdot 2 \\ &= 42 \text{ in}^3 \\ S &= 2(3)(2) + 2(3)(7) + 2(2)(7) \\ &= 12 + 42 + 28 \\ &= 82 \text{ in}^2 \end{aligned}$$

b.



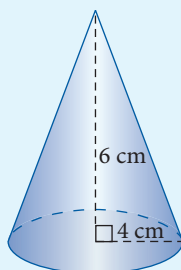
$$\begin{aligned} V &= (3.14)(2)^2 \cdot 4 \\ &= 50.24 \text{ mm}^3 \\ S &= 2(3.14)(2)^2 + 2(3.14)(2)(4) \\ &= 75.36 \text{ mm}^2 \end{aligned}$$

c.



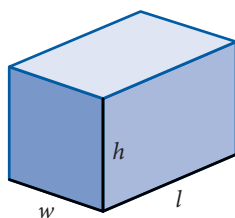
$$\begin{aligned} V &= \frac{4}{3}(3.14)5^3 \\ &= 523 \text{ in}^3, \text{ to the nearest} \\ &\quad \text{whole number} \\ S &= 4(3.14)5^2 \\ &= 314 \text{ in}^2 \end{aligned}$$

d. (Volume only.)



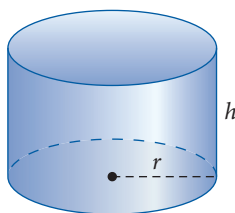
$$\begin{aligned} V &= \frac{1}{3}(3.14) \cdot 4^2(6) \\ &= 100.48 \text{ cm}^3 \end{aligned}$$

Rectangular Solid



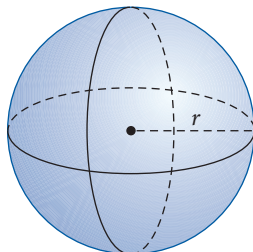
$$\begin{aligned} \text{Volume} &= lwh \\ \text{Surface Area} &= 2lh + 2hw + 2lw \end{aligned}$$

Cylinder



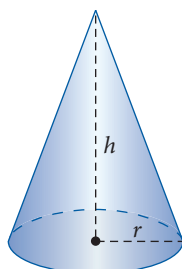
$$\begin{aligned} \text{Volume} &= \pi r^2 h \\ \text{Surface Area} &= 2\pi r^2 + 2\pi r h \\ &\text{(closed at both ends)} \end{aligned}$$

Sphere



$$\begin{aligned} \text{Volume} &= \frac{4}{3}\pi r^3 \\ \text{Surface Area} &= 4\pi r^2 \end{aligned}$$

Cone



$$\text{Volume} = \frac{1}{3}\pi r^2 h$$

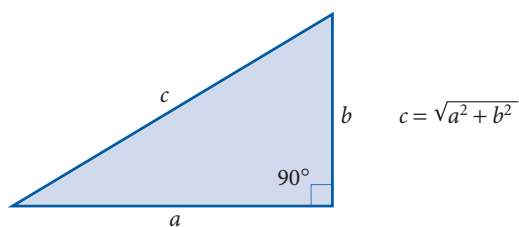
■ Square Roots [8.5]

The square root of a positive number a , written \sqrt{a} , is the number we square to get a .

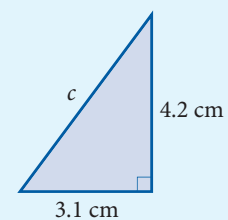
5. $\sqrt{49} = 7$ because
 $7^2 = 7 \cdot 7 = 49$

■ Pythagorean Theorem [8.5]

In any right triangle, the length of the longest side (the hypotenuse) is equal to the square root of the sum of the squares of the two shorter sides.



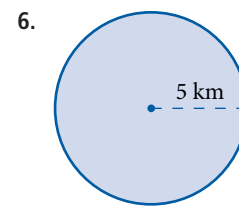
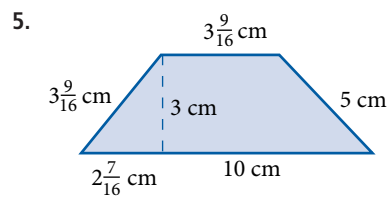
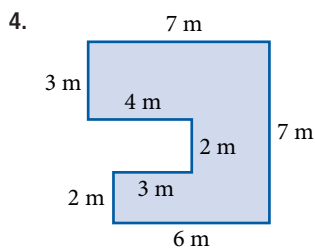
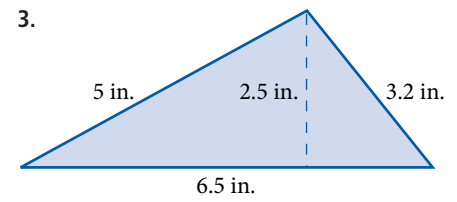
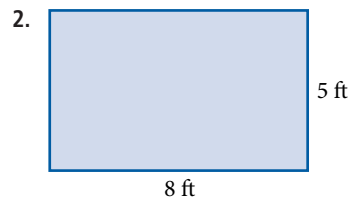
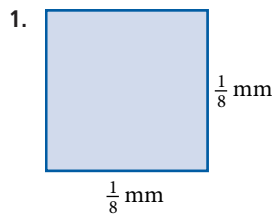
6. Find the length of the hypotenuse to the nearest tenth.



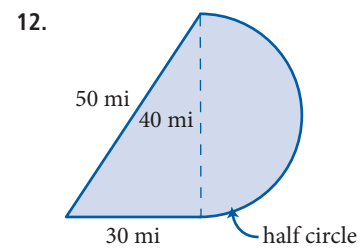
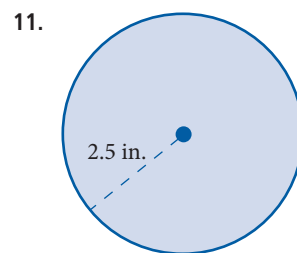
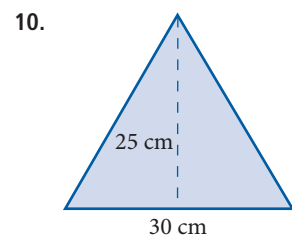
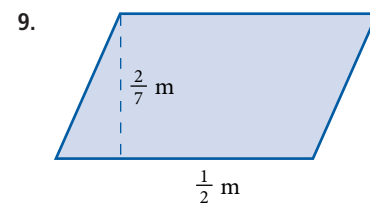
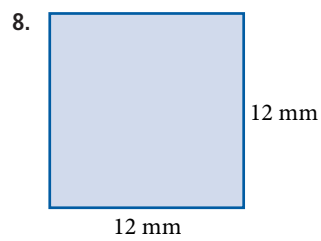
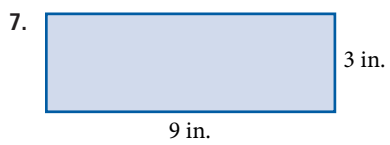
$$\begin{aligned} c &= \sqrt{3.1^2 + 4.2^2} \\ &= \sqrt{27.25} \\ &\approx 5.2 \text{ cm} \end{aligned}$$

Chapter 8 Review

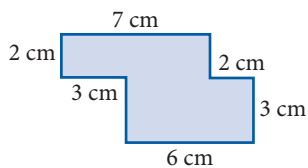
Find the perimeter of each figure.



Find the area enclosed by each figure.

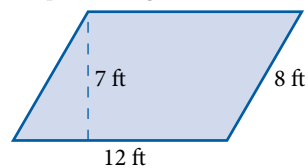


13.



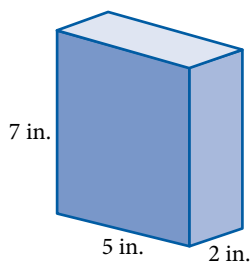
14. The base of a triangle is $\frac{5}{8}$ feet and the height is $\frac{3}{2}$ feet. Find the area.

15. Find the perimeter and the area of the parallelogram below.

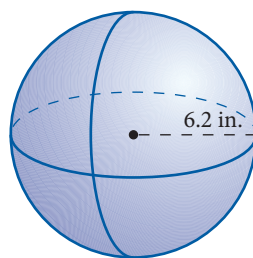


Find the volume and surface area of each figure. Round to the nearest hundredth, if necessary.

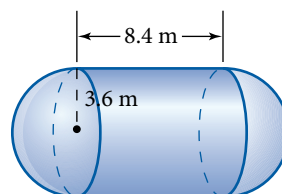
16.



17.

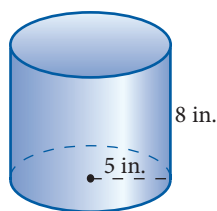


18.

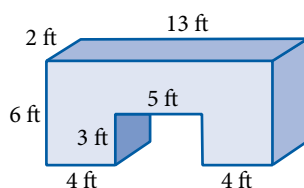


Find the volume of each figure. Round to the nearest hundredth, if necessary.

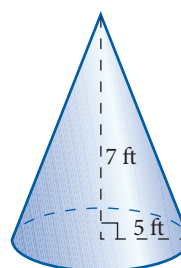
19.



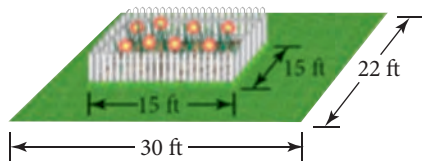
20.



21.



22. **Area of a Garden** A gardener with a yard that is 22 feet by 30 feet wants to plant a garden that is 15 feet by 15 feet. How much larger is the square footage of the yard than that of the garden?



23. **Spaceship Earth** Spaceship Earth is a geodesic sphere at Walt Disney World's Epcot Center in Florida. The inner sphere has a diameter of 165 feet, while the outer sphere is 180 feet in diameter. Find the difference in volume between the outer sphere and the inner sphere.



Chapter 8 Cumulative Review

Simplify.

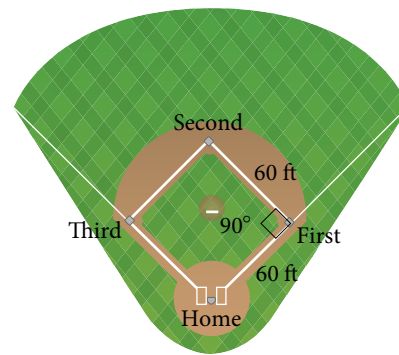
- $$\begin{array}{r} 8,340 \\ - 2,785 \\ \hline \end{array}$$
- $55(101)$
- $1845 \div 25$
- $0.25\overline{)1.845}$
- $\frac{15}{16} - \frac{7}{16}$
- $\left(\frac{4}{5}\right)^3$
- $3.846 + 5.09$
- $9 - 5.678$
- $3.4(0.34)$
- $\frac{8}{15} \cdot \frac{5}{16}$
- $\frac{7}{12} \div \frac{21}{4}$
- $\frac{5}{9} + \frac{2}{27}$
- $3\frac{1}{5} - 1\frac{1}{10}$
- Add $2\frac{1}{4}$ to 3.75.
- Find the product of $\frac{3}{4}$ and $1\frac{1}{2}$.
- Translate and simplify: The sum of twice 9 and 2.
- Write the ratio of 2 feet to 36 inches as a fraction in lowest terms.
- Convert 20 feet per second to miles per hour. Round to the nearest tenth.
- Convert 2.5 square miles to acres.
- Write $\frac{5}{8}$ as a percent.
- Convert 55% to a fraction.
- Solve the equation $\frac{3}{x} = \frac{6}{7}$.
- Write 30,405 in expanded form.
- What number is 30% of 700?
- 26 is what percent of 39?
- $\frac{3}{4}$ is 75% of what number?
- If 1 mile is 1.61 kilometers, convert 50 miles per hour to kilometers per hour.

- Textbook Prices** A used copy of a textbook sells for \$56.25, which is 75% of the price of a new book. What is the price of a new book?

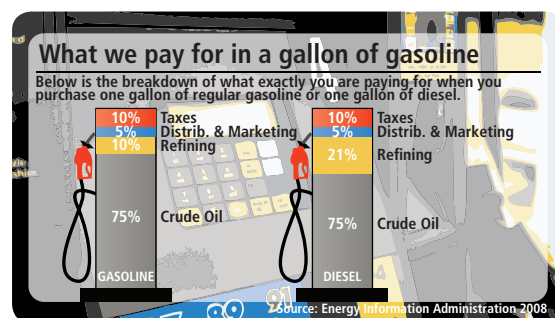
- Ratio and Areas** The figure here shows a circular image within a square postage stamp. If each side of the square is 35.0 millimeters and the radius of the circle is 14.5 millimeters, find the ratio of the area of the circle to the area of the square. Round to the nearest hundredth.



- Pythagorean Theorem** Use the Pythagorean theorem and the diagram of the square softball diamond to find the distance from third base to first base. Round to the nearest tenth.



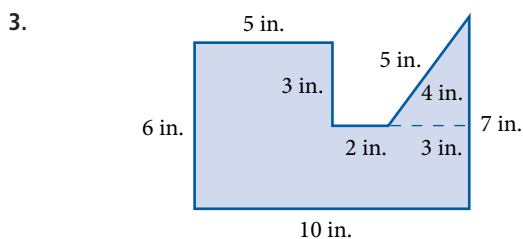
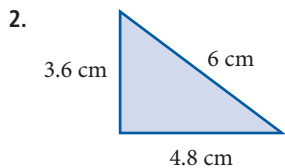
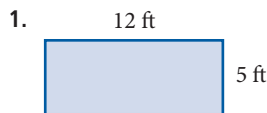
Use the illustration to answer problem 31.



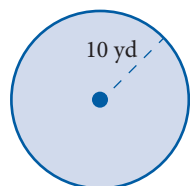
- Gas Prices** If you buy 16 gallons of gasoline at \$3.02 per gallon, how much did you pay for the crude oil and refining? Round to the nearest cent.

Chapter 8 Test

Find the perimeter of each figure.

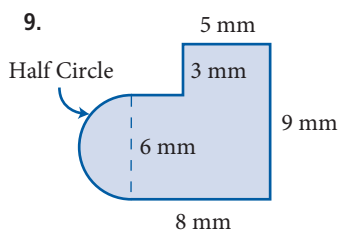
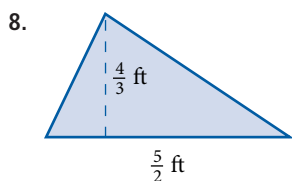
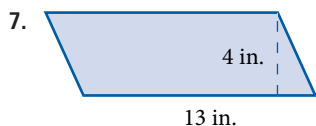
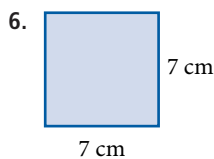


4. Find the circumference of the circle. Use 3.14 for π .



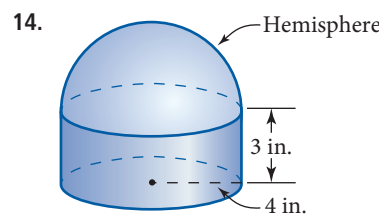
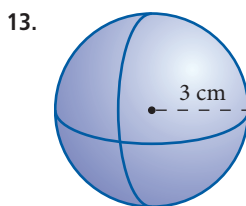
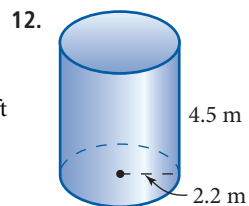
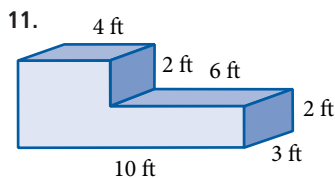
5. Find the perimeter of a square with side 6 meters.

Find the area enclosed by each figure.

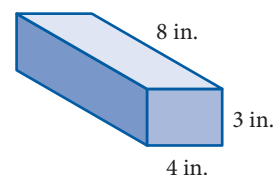


10. A circle has radius of 3 inches. Find its area. Round to the nearest whole number.

Find the volume of each figure



15. Find the volume and the surface area of the rectangular solid shown below.

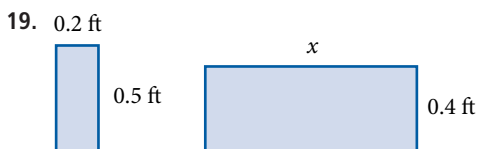
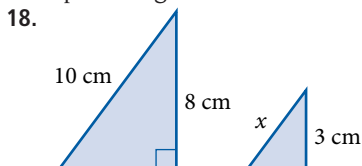


16. **Perimeter of a Garden** A rectangular garden is $20\frac{1}{2}$ feet long and 10 feet wide. What length of fence is needed to enclose the garden?

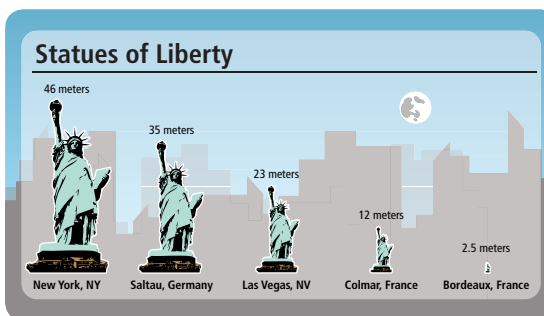
17. **Volume of a Coin** The 1 euro coin below has a diameter of 23.25 millimeters and a thickness of 2.33 millimeters. Find the volume of the coin, to the nearest whole number.



Each pair of figures are similar. In each case find x .



Use the illustration to answer problem 20.



20. If the length of the tablet of the Statue of Liberty in New York is about 7.2 meters, how long is the tablet of the Statue of liberty in Colmar, France? Figures are similar.

Chapter 8 Projects

GEOMETRY

GROUP PROJECT

Perimeter and Area

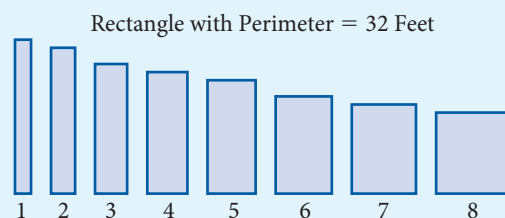
Number of People 3

Time Needed 10 minutes

Equipment Pencil and paper

Background This group project is intended to give you a more thorough understanding of the relationship between the perimeter and the area of a rectangle. It will answer this question: "If you have 32 feet of fencing that you are going to use to form a rectangle, will it always enclose the same amount of area?"

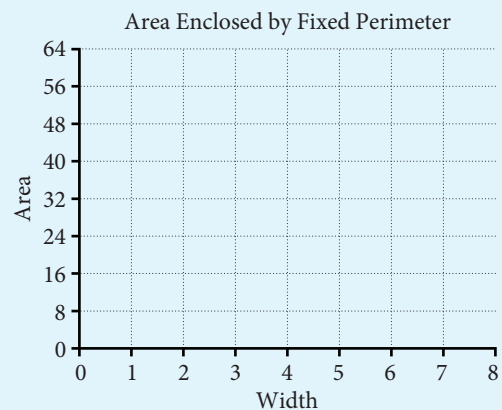
Procedure 1. The perimeter of each rectangle below is 32 feet. As you can see, the width of each rectangle is given. Use the fact that the perimeter is 32 feet to find the length of each rectangle.



2. Use the lengths you found in Step 1 to fill in the length column in the table.
3. Using the fact that the area of a rectangle is the product of the length and width, fill in the area column in the table.

Width (ft)	Length (ft)	Area (ft)
1		
2		
3		
4		
5		
6		
7		
8		

4. Use the information in the table to construct a line graph on the template below.



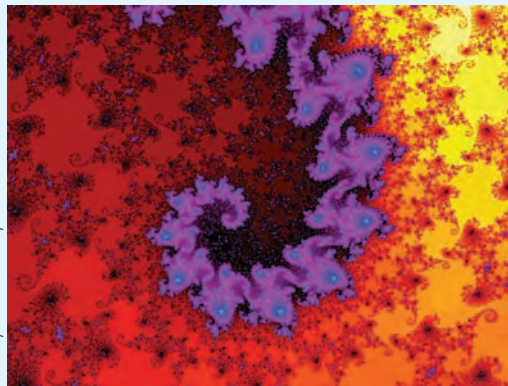
5. Make a conjecture about the type of rectangle to enclose the greatest area for a fixed perimeter.

RESEARCH PROJECT

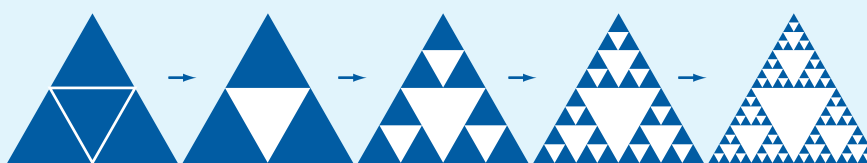
The image shown to the right is from the Mandelbrot Set, a fractal named after the Polish mathematician Benoit Mandelbrot. A fractal is a geometric shape with self-similarity: if you magnify part of it, the details will be similar to the whole.

Sierpinski's Triangle (below) is a fractal studied by the Polish mathematician Waclaw Sierpinski. It consists of three triangles, each of which consists of three smaller triangles, and so on.

One way to construct Sierpinski's Triangle is to start with an equilateral triangle, draw the triangle joining the midpoints of the three sides, and cut out this middle triangle. Then repeat this process on the three remaining triangles to get nine triangles. Repeat this process infinitely, and you get Sierpinski's triangle.




Courtesy of David Dewey



Introduction to Algebra

9

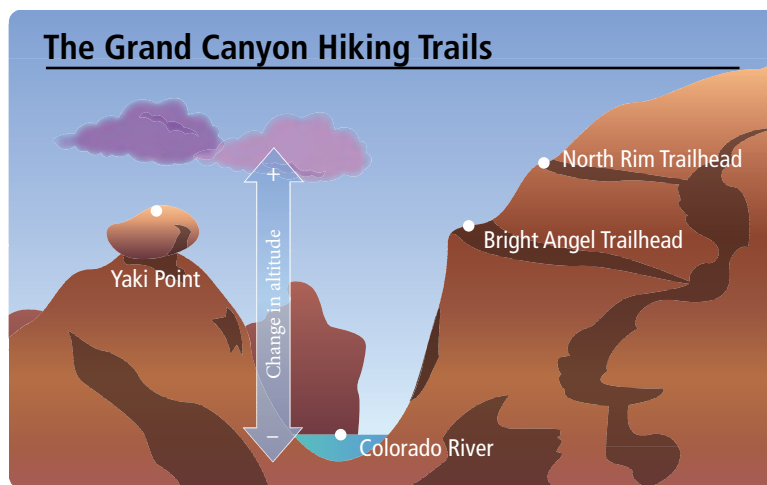


Chapter Outline

- 9.1 Positive and Negative Numbers
- 9.2 Addition with Negative Numbers
- 9.3 Subtraction with Negative Numbers
- 9.4 Multiplication with Negative Numbers
- 9.5 Division with Negative Numbers
- 9.6 Simplifying Algebraic Expressions

Introduction

The Grand Canyon, located in the state of Arizona, is a large gorge created by the Colorado River over millions of years. Much of the Grand Canyon is located in the Grand Canyon National Park, which receives over four million visitors per year. Visitors come to hike trails and view the magnificent rock formations.



Many of the hiking trails in the Grand Canyon have significant changes in altitude. We sometimes represent changes in altitude with negative numbers. In this chapter we will work problems which refer to some of the trails found in the Grand Canyon and which involve negative numbers.

Chapter Pretest

The pretest below contains problems that are representative of the problems you will find in the chapter.

Give the opposite of each number.

1. 10

2. -3

Place either $<$ or $>$ between the numbers so that the resulting statement is true.

3. $\frac{6}{5}$ $-\frac{5}{6}$

4. 2 $| -4 |$

Simplify each expression.

5. $-|-8|$

6. $-(-1)$

Perform the indicated operations.

7. $9 - 19$

8. $3.42 + (-6.89)$

9. $-\frac{3}{5} - \frac{2}{5}$

10. $\frac{1}{10} + \left(-\frac{4}{5}\right) + \left(-\frac{3}{20}\right)$

11. $-40 - (-7)$

12. $5(-4)$

13. $-\frac{2}{3} \left(-\frac{3}{5}\right)$

14. $21 \div (-7)$

15. $\frac{-40}{-5}$

16. $\frac{0}{-1}$

Simplify the following expressions as much as possible.

17. $(-2)^3$

18. $-10 + 2(1 - 3)$

19. $\frac{7 + 4(-1)}{2 - 3}$

20. $(3x + 4) + 9$

21. $5(3y - 2)$

22. $-4b + 3b$

23. On a certain day, the temperature reaches a high of 30° above 0 and a low of 5° below 0. What is the difference between the high and low temperatures for the day?

Getting Ready for Chapter 9

The problems below review material covered previously that you need to know in order to be successful in Chapter 9. If you have any difficulty with the problems here, you need to go back and review before going on to Chapter 9.

- Use the associative property to rewrite the expression: $5(3 \cdot 2)$
- Use the distributive property to rewrite the expression: $4 \cdot 7 - 4 \cdot 2$

Perform the indicated operation.

3. $60.3 + 49.8$

4. $9 - 0$

5. $0.4(0.8)$

6. $7 - 7$

7. 5^3

8. $\frac{1}{10} + \frac{4}{5}$

9. $14 - 8$

10. $6 \div 3$

11. $60 \div 20$

12. $8 \div 8$

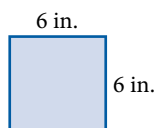
13. $\frac{7}{8} \cdot \frac{5}{14}$

14. $12\left(\frac{2}{3}\right)$

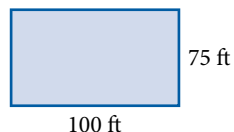
15. $12 \div 4$

16. $12 \div 3$

17. Find the perimeter of the square.



18. Find the area of the rectangle.

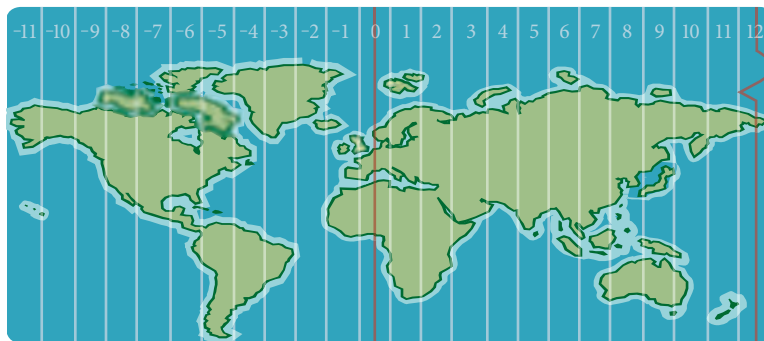


Positive and Negative Numbers

9.1

Introduction . . .

Before the late nineteenth century, time zones did not exist. Each town would set its clocks according to the motions of the Sun. It was not until the late 1800s that a system of worldwide time zones was developed. This system divides the earth into 24 time zones with Greenwich, England, designated as the center of the time zones (GMT). This location is assigned a value of zero. Each of the World Time Zones is assigned a number ranging from -12 to $+12$ depending on its position east or west of Greenwich, England.



If New York is 5 time zones to the left of GMT, this would be noted as $-5:00$ GMT.

A Comparing Numbers

To see the relationship between negative and positive numbers, we can extend the number line as shown in Figure 1. We first draw a straight line and label a convenient point with 0. This is called the *origin*, and it is usually in the middle of the line. We then label positive numbers to the right (as we have done previously), and negative numbers to the left.

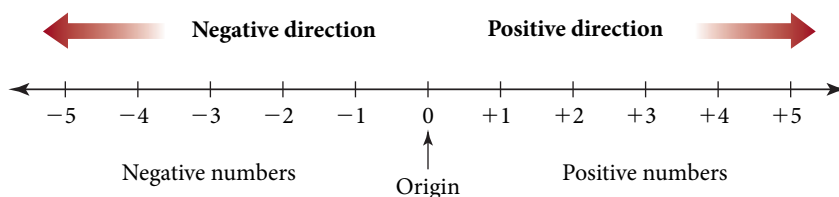


FIGURE 1

The numbers increase going from left to right. If we move to the right, we are moving in the positive direction. If we move to the left, we are moving in the negative direction. *Any number to the left of another number is considered to be less than the number to its right.*

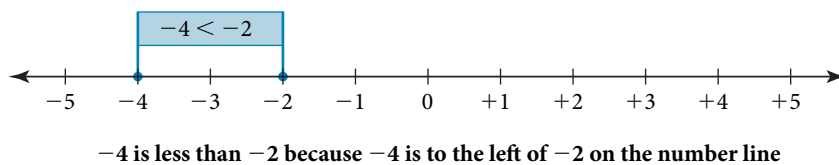


FIGURE 2

We see from the line that every negative number is less than every positive number.

Objectives

- A Use the number line and inequality symbols to compare numbers.
- B Find the absolute value of a number.
- C Find the opposite of a number.
- D Create displays with negative numbers.

Note A number, other than 0, with no sign (+ or -) in front of it is assumed to be positive. That is, $5 = +5$.

In algebra we can use inequality symbols when comparing numbers.

Notation

If a and b are any two numbers on the number line, then

$a < b$ is read “ a is less than b ”.

$a > b$ is read “ a is greater than b ”.

As you can see, the inequality symbols always point to the smaller of the two numbers being compared. Here are some examples that illustrate how we use the inequality symbols.

EXAMPLE 1

$3 < 5$ is read “3 is less than 5.” Note that it would also be correct to write $5 > 3$. Both statements, “3 is less than 5” and “5 is greater than 3,” have the same meaning. The inequality symbols always point to the smaller number.

EXAMPLE 2

$0 > 100$ is a false statement, because 0 is less than 100, not greater than 100. To write a true inequality statement using the numbers 0 and 100, we would have to write either $0 < 100$ or $100 > 0$.

EXAMPLE 3

$-3 < 5$ is a true statement, because -3 is to the left of 5 on the number line, and, therefore, it must be less than 5. Another statement that means the same thing is $5 > -3$.

EXAMPLE 4

$-5 < -2$ is a true statement, because -5 is to the left of -2 on the number line, meaning that -5 is less than -2 . Both statements $-5 < -2$ and $-2 > -5$ have the same meaning; they both say that -5 is a smaller number than -2 .

B Absolute Value

It is sometimes convenient to talk about only the numerical part of a number and disregard the sign (+ or -) in front of it. The following definition gives us a way of doing this.

Definition

The **absolute value** of a number is its distance from 0 on the number line. We denote the absolute value of a number with vertical lines. For example, the absolute value of -3 is written $|-3|$.

The absolute value of a number is never negative because it is a distance, and a distance is always measured in positive units (unless it happens to be 0).

Here are some examples of absolute value problems.

EXAMPLE 5

$|5| = 5$ The number 5 is 5 units from 0.

EXAMPLE 6

$|-3| = 3$ The number -3 is 3 units from 0.

PRACTICE PROBLEMS

Write each statement in words.

- $2 < 8$
- $5 > 10$ (Is this a true statement?)
- $-4 < 4$
- $-7 < -2$

Give the absolute value of each of the following.

- $|6|$
- $|-5|$

Answers

- 2 is less than 8.
- 5 is greater than 10. (No.)
- -4 is less than 4.
- -7 is less than -2 .
- 6 6. 5

EXAMPLE 7
 $| -7 | = 7$ The number -7 is 7 units from 0.
C Opposites**Definition**

Two numbers that are the same distance from 0 but in opposite directions from 0 are called **opposites**.* The notation for the opposite of a is $-a$.

EXAMPLE 8

Give the opposite of each of the following numbers:

5, 7, 1, -5 , -8

SOLUTION

The opposite of 5 is -5 .

The opposite of 7 is -7 .

The opposite of 1 is -1 .

The opposite of -5 is $-(-5)$, or 5.

The opposite of -8 is $-(-8)$, or 8.

We see from the previous example that the opposite of every positive number is a negative number, and likewise, the opposite of every negative number is a positive number. The last two parts of Example 8 illustrate the following property:

Property

If a represents any positive number, then it is always true that

$$-(-a) = a$$

In other words, this property states that the opposite of a negative number is a positive number.

It should be evident now that the symbols $+$ and $-$ can be used to indicate several different ideas in mathematics. In the past we have used them to indicate addition and subtraction. They can also be used to indicate the direction a number is from 0 on the number line. For instance, the number $+3$ (read “positive 3”) is the number that is 3 units from zero in the positive direction. On the other hand, the number -3 (read “negative 3”) is the number that is 3 units from 0 in the negative direction. The symbol $-$ can also be used to indicate the opposite of a number, as in $-(-2) = 2$. The interpretation of the symbols $+$ and $-$ depends on the situation in which they are used. For example:

$3 + 5$	The $+$ sign indicates addition.
$7 - 2$	The $-$ sign indicates subtraction.
-7	The $-$ sign is read “negative” 7.
$-(-5)$	The first $-$ sign is read “the opposite of.” The second $-$ sign is read “negative” 5.

This may seem confusing at first, but as you work through the problems in this chapter you will get used to the different interpretations of the symbols $+$ and $-$.

We should mention here that the set of whole numbers along with their opposites forms the set of *integers*. That is:

$$\text{Integers} = \{ \dots, -3, -2, -1, 0, 1, 2, 3, \dots \}$$

*In some books opposites are called *additive inverses*.

Give the absolute value.

7. $| -8 |$

8. Give the opposite of each of the following numbers: 8, 10, 0, -4 .

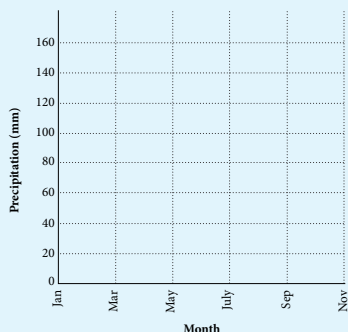
Answers

7. 8 8. $-8, -10, 0, 4$

9. Use the information in the table below to make both a scatter diagram and a line graph.

**AVERAGE MONTHLY
PRECIPITATION SAN LUIS
OBISPO, CALIFORNIA**

Month	Precipitation (mm)
Jan	134.1
Mar	113.8
May	11.9
July	0.8
Sept	11.2
Nov	55.1



DESCRIPTIVE STATISTICS

D Displaying Negative Numbers

In the table below, the temperatures below zero are represented by negative numbers.

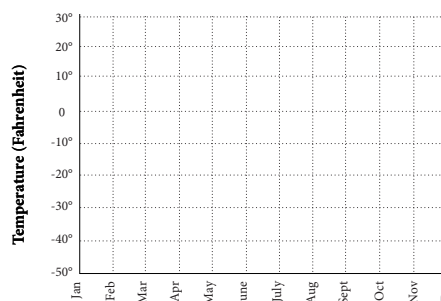
EXAMPLE 9

Use the information in Table 1 and the template below to draw a scatter diagram and a line graph representing the information in Table 1.

TABLE 1

**RECORD LOW TEMPERATURES
FOR JACKSON HOLE, WYOMING**

Month	Temperature
January	-50°F
February	-44°F
March	-32°F
April	-5°F
May	12°F
June	19°F
July	24°F
August	18°F
September	14°F
October	2°F
November	-27°F
December	-49°F



SOLUTION Notice that the vertical axis in the template looks like the number line we have been using. To produce the scatter diagram, we place a dot above each month, across from the temperature for that month. For example, the dot above July will be across from 24°. Doing the same for each of the months, we have the scatter diagram shown in Figure 3. To produce the line graph in Figure 4, we simply connect the dots in Figure 3 with line segments.

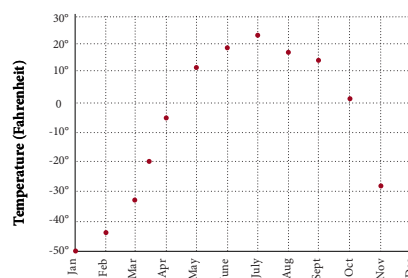


FIGURE 3 A scatter diagram of Table 1

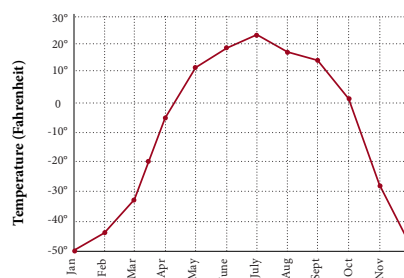


FIGURE 4 A line graph of Table 1

Getting Ready for Class

After reading through the preceding section, respond in your own words and in complete sentences.

1. Write the statement "3 is less than 5" in symbols.
2. What is the absolute value of a number?
3. Describe what we mean by numbers that are "opposites" of each other.
4. If you locate two different numbers on the number line, which one will be the smaller number?

Answer

9. See solutions section.

Problem Set 9.1

A Write each of the following in words. [Example 1]

1. $4 < 7$

2. $0 < 10$

3. $5 > -2$

4. $8 > -8$

5. $-10 < -3$

6. $-20 < -5$

7. $0 > -4$

8. $0 > -100$

Write each of the following in symbols.

9. 30 is greater than -30 .

10. -30 is less than 30.

11. -10 is less than 0.

12. 0 is greater than -10 .

13. -3 is greater than -15 .

14. -15 is less than -3 .

A Place either $<$ or $>$ between each of the following pairs of numbers so that the resulting statement is true. [Examples 2–4]

15. 3 7

16. 17 0

17. 7 -5

18. 2 -13

19. -6 0

20. -14 0

21. -12 -2

22. -20 -1

23. $-\frac{1}{2}$ $-\frac{3}{4}$

24. $-\frac{6}{7}$ $\frac{5}{6}$

25. -0.75 -0.25

26. -1 -3.5

27. -0.1 -0.01

28. -0.04 -0.4

29. -3 $|6|$

30. $|8|$ -2

31. 15 $|-4|$

32. 20 $|-6|$

33. $|-2|$ $|-7|$

34. $|-3|$ $|-1|$

B Find each of the following absolute values. [Examples 5–7]

35. $|2|$

36. $|7|$

37. $|100|$

38. $|10,000|$

39. $|-8|$

40. $|-9|$

41. $|-231|$

42. $|-457|$

43. $\left|-\frac{3}{4}\right|$

44. $\left|-\frac{1}{10}\right|$

45. $|-200|$

46. $|-350|$

47. $|8|$

48. $|9|$

49. $|231|$

50. $|457|$

C Give the opposite of each of the following numbers. [Example 8]

51. 3

52. -5

53. -2

54. 15

55. 75

56. -32

57. 0

58. 1

59. -0.123

60. -3.45

61. $\frac{7}{8}$

62. $\frac{1}{100}$

Simplify each of the following.

63. $-(-2)$

64. $-(-5)$

65. $-(-8)$

66. $-(-3)$

67. $-|-2|$

68. $-|-5|$

69. $-|-8|$

70. $-|-3|$

71. What number is its own opposite?

72. Is $|a| = a$ always a true statement?

73. If n is a negative number, is $-n$ positive or negative?

74. If n is a positive number, is $-n$ positive or negative?

■ Estimating

Work Problems 75–80 mentally, without pencil and paper or a calculator.

75. Is -60 closer to 0 or -100 ?

76. Is -20 closer to 0 or -30 ?

77. Is -10 closer to -20 or 20?

78. Is -20 closer to -40 or 10?

79. Is -362 closer to -360 or -370 ?


80. Is -368 closer to -360 or -370 ?

D Applying the Concepts [Example 9]

81. The London Eye has a height of 450 feet. Describe the location of someone standing on the ground in relation to someone at the top of the London Eye.



82. The Eiffel Tower has several levels visitors can walk around on. The first is 57 meters above the ground, the second is 115 meters high, and the third level is 276 meters high. What is the location of someone standing on the first level in relation to someone standing on the third level?



83. The Bright Angel trail at Grand Canyon National Park ends at Indian Garden, 3,060 feet below the trailhead. Write this as a negative number with respect to the trailhead.
84. The South Kaibab Trail at Grand Canyon National Park ends at Cedar Ridge, 1,140 feet below the trailhead. Write this as a negative number with respect to the trailhead.
85. **Car Depreciation** Depreciation refers to the decline in a car's market value during the time you own the car. According to sources such as Kelley Blue Book and Edmunds.com, not all cars depreciate at the same rate. Suppose you pay \$25,000 for a new car which has a high rate of depreciation. Your car loses about \$5,000 in value per year. Represent this loss in value as a negative number. A car with a low rate of depreciation loses about \$2,750 in value each year. Represent this loss as a negative number.
86. **Census Figures** In June, 2007 the U.S. Census Bureau released population estimates for the twenty-five cities with the largest population loss between July 1, 2005 and July 1, 2006. New Orleans had the largest population loss. The city's population fell by 228,782 people. Detroit, Michigan experienced a population loss of 12,344 people during the same time period. Represent the loss of population for New Orleans and for Detroit as a negative number.
87. **Temperature and Altitude** Yamina is flying from Phoenix to San Francisco on a Boeing 737 jet. When the plane reaches an altitude of 33,000 feet, the temperature outside the plane is 61 degrees below zero Fahrenheit. Represent this temperature with a negative number. If the temperature outside the plane gets warmer by 10 degrees, what will the new temperature be?
88. **Temperature Change** At 11:00 in the morning in Superior, Wisconsin, Jim notices the temperature is 15 degrees below zero Fahrenheit. Write this temperature as a negative number. At noon it has warmed up by 8 degrees. What is the temperature at noon?

- 89. Temperature Change** At 10:00 in the morning in White Bear Lake, Minnesota, Zach notices the temperature is 5 degrees below zero Fahrenheit. Write this temperature as a negative number. By noon the temperature has dropped another 10 degrees. What is the temperature at noon?
- 90. Snorkeling** Steve is snorkeling in the ocean near his home in Maui. At one point he is 6 feet below the surface. Represent this situation with a negative number. If he descends another 6 feet, what negative number will represent his new position?
- 91. Time Zones** New Orleans, Louisiana, is 1 time zone west of New York City. Represent this time zone as a negative number, as discussed in the introduction to this chapter.
- 92. Time Zones** Seattle, Washington, is 2 time zones west of New Orleans, Louisiana. Represent this time zone as a negative number, as discussed in the introduction to this chapter.

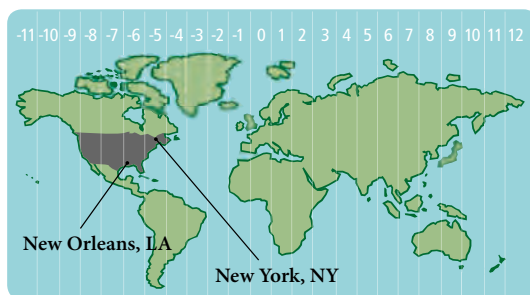


Table 2 lists various wind chill temperatures. The top row gives air temperature, while the first column gives wind speed in miles per hour. The numbers within the table indicate how cold the weather will feel. For example, if the thermometer reads 30°F and the wind is blowing at 15 miles per hour, the wind chill temperature is 9°F .

TABLE 2

WIND CHILL TEMPERATURES

Wind Speed	Air temperatures ($^{\circ}\text{F}$)							
	30°	25°	20°	15°	10°	5°	0°	-5°
10 mph	16°	10°	3°	-3°	-9°	-15°	-22°	-27°
15 mph	9°	2°	-5°	-11°	-18°	-25°	-31°	-38°
20 mph	4°	-3°	-10°	-17°	-24°	-31°	-39°	-46°
25 mph	1°	-7°	-15°	-22°	-29°	-36°	-44°	-51°
30 mph	-2°	-10°	-18°	-25°	-33°	-41°	-49°	-56°

- 93. Wind Chill** Find the wind chill temperature if the thermometer reads 25°F and the wind is blowing at 25 miles per hour.
- 94. Wind Chill** Find the wind chill temperature if the thermometer reads 10°F and the wind is blowing at 25 miles per hour.
- 95. Wind Chill** Which will feel colder: a day with an air temperature of 10°F and a 25-mph wind, or a day with an air temperature of -5°F and a 10-mph wind?
- 96. Wind Chill** Which will feel colder: a day with an air temperature of 15°F and a 20-mph wind, or a day with an air temperature of 5°F and a 10-mph wind?

Table 3 lists the record low temperatures for each month of the year for Lake Placid, New York. Table 4 lists the record high temperatures for the same city.

TABLE 3 RECORD LOW TEMPERATURES FOR LAKE PLACID, NEW YORK	
Month	Temperature
January	-36°F
February	-30°F
March	-14°F
April	-2°F
May	19°F
June	22°F
July	35°F
August	30°F
September	19°F
October	15°F
November	-11°F
December	-26°F

TABLE 4 RECORD HIGH TEMPERATURES FOR LAKE PLACID, NEW YORK	
Month	Temperature
January	54°F
February	59°F
March	69°F
April	82°F
May	90°F
June	93°F
July	97°F
August	93°F
September	90°F
October	87°F
November	67°F
December	60°F

97. **Temperature** Figure 5 is a bar chart of the information in Table 3. Use the template in Figure 6 to construct a scatter diagram of the same information. Then connect the dots in the scatter diagram to obtain a line graph of that same information. (Notice that we have used the numbers 1 through 12 to represent the months January through December.)

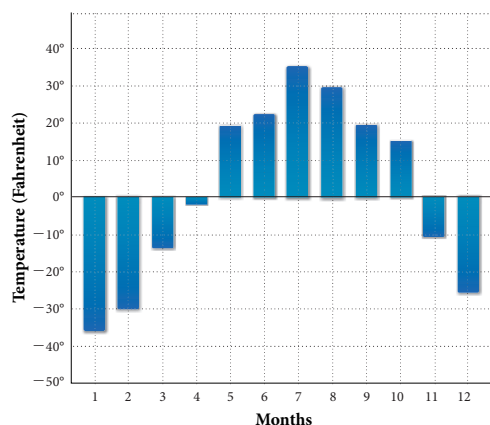


FIGURE 5 A bar chart of Table 3

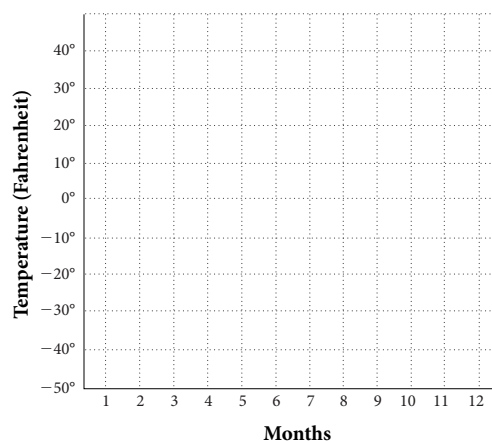


FIGURE 6 A scatter diagram, then line graph of Table 3

98. **Temperature** Figure 7 is a bar chart of the information in Table 4. Use the template in Figure 8 to construct a scatter diagram of the same information. Then connect the dots in the scatter diagram to obtain a line graph of that same information. (Again, we have used the numbers 1 through 12 to represent the months January through December.)

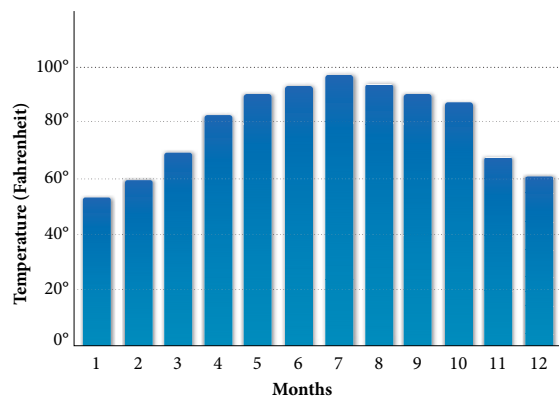


FIGURE 7 A bar chart of Table 4

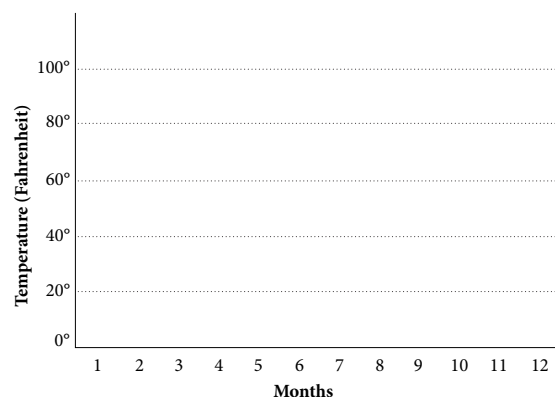


FIGURE 8 A scatter diagram, then line graph of Table 4

■ Getting Ready for the Next Section

Add or subtract.

99. $10 + 15$

100. $12 + 15$

101. $15 - 10$

102. $15 - 12$

103. $10 - 5 - 3 + 4$

104. $12 - 3 - 7 + 5$

105. $[3 + 10] + [8 - 2]$

106. $[2 + 12] + [7 - 5]$

107. $276 + 32 + 4,005$

108. $17 + 3 + 152 + 1,200$

109. $635 - 579$

110. $2,987 - 1,130$

■ Maintaining Your Skills

Complete each statement using the commutative property of addition.

111. $3 + 5 =$

112. $9 + x =$

Complete each statement using the associative property of addition.

113. $7 + (2 + 6) =$

114. $(x + 3) + 5 =$

Write each of the following in symbols.

115. The sum of x and 4116. The sum of x and 4 is 9.117. 5 more than y 118. x increased by 8

■ Extending the Concepts

119. There are two numbers that are 5 units from 2 on the number line. One of them is 7. What is the other one?

120. There are two numbers that are 5 units from -2 on the number line. One of them is 3. What is the other one?

121. In your own words and in complete sentences, explain what the opposite of a number is.

122. In your own words and in complete sentences, explain what the absolute value of a number is.

123. The expression $-(-3)$ is read "the opposite of negative 3," and it simplifies to just 3. Give a similar written description of the expression $-|-3|$, and then simplify it.124. Give written descriptions of the expressions $-(-4)$ and $-|-4|$ and then simplify each of them.

Addition with Negative Numbers

9.2

Objectives

- A Use the number line to add positive and negative numbers.
- B Add positive and negative numbers using a rule.

Introduction . . .

Suppose you are in Las Vegas playing blackjack and you lose \$3 on the first hand and then you lose \$5 on the next hand. If you represent winning with positive numbers and losing with negative numbers, how will you represent the results from your first two hands? Since you lost \$3 and \$5 for a total of \$8, one way to represent the situation is with addition of negative numbers:

$$(-\$3) + (-\$5) = -\$8$$

From this example we see that the sum of two negative numbers is a negative number. To generalize addition of positive and negative numbers, we can use the number line.



A Adding with a Number Line

We can think of each number on the number line as having two characteristics: (1) a *distance* from 0 (absolute value) and (2) a *direction* from 0 (positive or negative). The distance from 0 is represented by the numerical part of the number (like the 5 in the number -5), and its direction is represented by the $+$ or $-$ sign in front of the number.

We can visualize addition of numbers on the number line by thinking in terms of distance and direction from 0. Let's begin with a simple problem we know the answer to. We interpret the sum $3 + 5$ on the number line as follows:

1. The first number is 3, which tells us "start at the origin, and move 3 units in the positive direction."
2. The $+$ sign is read "and then move."
3. The 5 means "5 units in the positive direction."

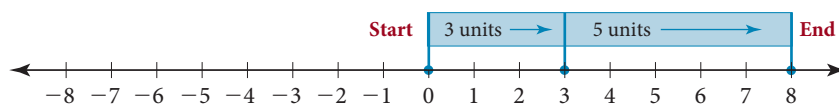


FIGURE 1

Figure 1 shows these steps. To summarize, $3 + 5$ means to start at the origin (0), move 3 units in the *positive* direction, and then move 5 units in the *positive* direction. We end up at 8, which is the sum we are looking for: $3 + 5 = 8$.

EXAMPLE 1

Add $3 + (-5)$ using the number line.

SOLUTION We start at the origin, move 3 units in the positive direction, and then move 5 units in the negative direction, as shown in Figure 2. The last arrow ends at -2 , which must be the sum of 3 and -5 . That is:

$$3 + (-5) = -2$$

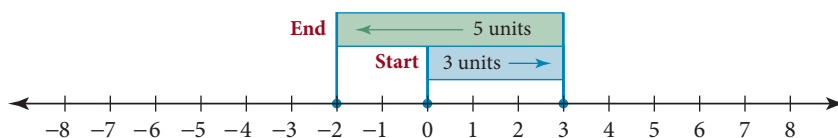


FIGURE 2

Note This method of adding numbers may seem a little complicated at first, but it will allow us to add numbers we couldn't otherwise add.

PRACTICE PROBLEMS

1. Add: $2 + (-5)$

Answer

1. -3

2. Add: $-2 + 5$ **EXAMPLE 2**Add $-3 + 5$ using the number line.

SOLUTION We start at the origin, move 3 units in the negative direction, and then move 5 units in the positive direction, as shown in Figure 3. We end up at 2, which is the sum of -3 and 5. That is:

$$-3 + 5 = 2$$

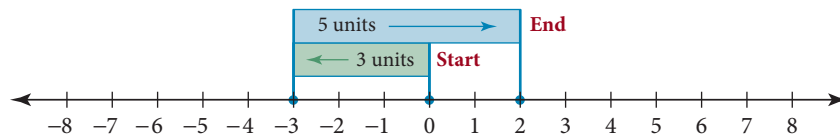


FIGURE 3

3. Add: $-2 + (-5)$ **EXAMPLE 3**Add $-3 + (-5)$ using the number line.

SOLUTION We start at the origin, move 3 units in the negative direction, and then move 5 more units in the negative direction. This is shown on the number line in Figure 4. As you can see, the last arrow ends at -8 . We must conclude that the sum of -3 and -5 is -8 . That is:

$$-3 + (-5) = -8$$

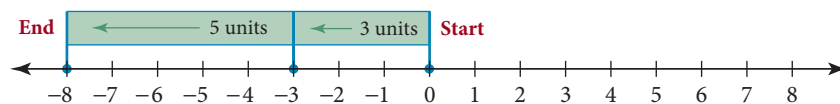
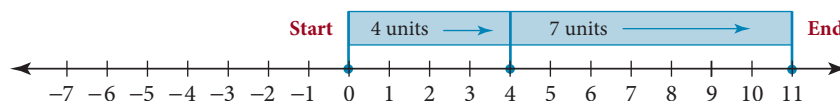


FIGURE 4

Adding numbers on the number line as we have done in these first three examples gives us a way of visualizing addition of positive and negative numbers. We eventually want to be able to write a rule for addition of positive and negative numbers that doesn't involve the number line. The number line is a way of justifying the rule we will eventually write. Here is a summary of the results we have so far:

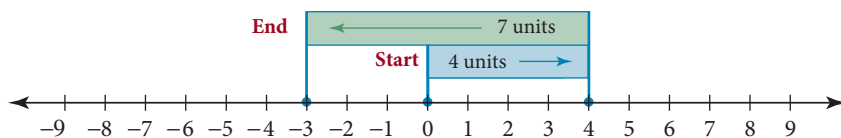
$$\begin{array}{ll} 3 + 5 = 8 & -3 + 5 = 2 \\ 3 + (-5) = -2 & -3 + (-5) = -8 \end{array}$$

Examine these results to see if you notice any pattern in the answers.

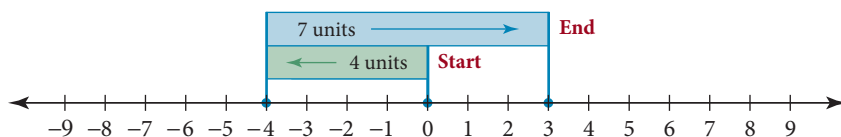
EXAMPLE 4 $4 + 7 = 11$ 4. Add: $2 + 6$ **Answers**2. 3 3. -7 4. 8

EXAMPLE 5

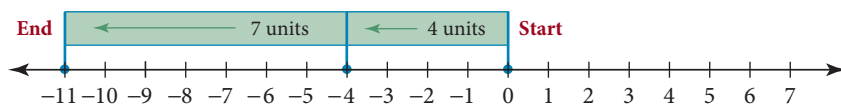
$4 + (-7) = -3$

**EXAMPLE 6**

$-4 + 7 = 3$

**EXAMPLE 7**

$-4 + (-7) = -11$

**B A Rule for Addition**

A summary of the results of these last four examples looks like this:

$$\begin{aligned} 4 + 7 &= 11 \\ 4 + (-7) &= -3 \\ -4 + 7 &= 3 \\ -4 + (-7) &= -11 \end{aligned}$$

Looking over all the examples in this section, and noticing how the results in the problems are related, we can write the following rule for adding any two numbers:

Rule

1. To add two numbers with the *same* sign: Simply add their absolute values, and use the common sign. If both numbers are positive, the answer is positive. If both numbers are negative, the answer is negative.
2. To add two numbers with *different* signs: Subtract the smaller absolute value from the larger absolute value. The answer will have the sign of the number with the larger absolute value.

5. Add: $2 + (-6)$

6. Add: $-2 + 6$

7. Add: $-2 + (-6)$

Note

This rule covers all possible addition problems involving positive and negative numbers. You *must* memorize it. After you have worked some problems, the rule will seem almost automatic.

Answers

- 5.
- -4
- 6.
- 4
- 7.
- -8

The following examples show how the rule is used. You will find that the rule for addition is consistent with all the results obtained using the number line.

8. Add all combinations of positive and negative 12 and 15.

EXAMPLE 8

Add all combinations of positive and negative 10 and 15.

SOLUTION

$$\begin{aligned} 10 + 15 &= 25 \\ 10 + (-15) &= -5 \\ -10 + 15 &= 5 \\ -10 + (-15) &= -25 \end{aligned}$$

Notice that when we add two numbers with the same sign, the answer also has that sign. When the signs are not the same, the answer has the sign of the number with the larger absolute value.

Once you have become familiar with the rule for adding positive and negative numbers, you can apply it to more complicated sums.

9. Simplify: $12 + (-3) + (-7) + 5$

EXAMPLE 9

Simplify: $10 + (-5) + (-3) + 4$

SOLUTION Adding left to right, we have:

$$\begin{aligned} 10 + (-5) + (-3) + 4 &= 5 + (-3) + 4 && 10 + (-5) = 5 \\ &= 2 + 4 && 5 + (-3) = 2 \\ &= 6 \end{aligned}$$

10. Simplify:
 $[-2 + (-12)] + [7 + (-5)]$

EXAMPLE 10

Simplify: $[-3 + (-10)] + [8 + (-2)]$

SOLUTION We begin by adding the numbers inside the brackets.

$$\begin{aligned} [-3 + (-10)] + [8 + (-2)] &= [-13] + [6] \\ &= -7 \end{aligned}$$

11. Add: $-5.76 + (-3.24)$

EXAMPLE 11

Add: $-4.75 + (-2.25)$

SOLUTION Because both signs are negative, we add absolute values. The answer will be negative.

$$-4.75 + (-2.25) = -7.00$$

12. Add: $6.88 + (-8.55)$

EXAMPLE 12

Add: $3.42 + (-6.89)$

SOLUTION The signs are different, so we subtract the smaller absolute value from the larger absolute value. The answer will be negative, because 6.89 is larger than 3.42 and the sign in front of 6.89 is $-$.

$$3.42 + (-6.89) = -3.47$$

13. Add: $\frac{5}{6} + \left(-\frac{2}{6}\right)$

EXAMPLE 13

Add: $\frac{3}{8} + \left(-\frac{1}{8}\right)$

SOLUTION We subtract absolute values. The answer will be positive, because $\frac{3}{8}$ is positive.

$$\begin{aligned} \frac{3}{8} + \left(-\frac{1}{8}\right) &= \frac{2}{8} \\ &= \frac{1}{4} \end{aligned}$$

Reduce to lowest terms

Answers

8. See solutions section.
9. 7 10. -12 11. -9.00
12. -1.67 13. $\frac{1}{2}$

EXAMPLE 14

Add: $\frac{1}{10} + \left(-\frac{4}{5}\right) + \left(-\frac{3}{20}\right)$

SOLUTION To begin, change each fraction to an equivalent fraction with an LCD of 20.

$$\begin{aligned} \frac{1}{10} + \left(-\frac{4}{5}\right) + \left(-\frac{3}{20}\right) &= \frac{1 \cdot 2}{10 \cdot 2} + \left(-\frac{4 \cdot 4}{5 \cdot 4}\right) + \left(-\frac{3}{20}\right) \\ &= \frac{2}{20} + \left(-\frac{16}{20}\right) + \left(-\frac{3}{20}\right) \\ &= -\frac{14}{20} + \left(-\frac{3}{20}\right) \\ &= -\frac{17}{20} \end{aligned}$$

USING TECHNOLOGY**Calculators**

There are a number of different ways in which calculators display negative numbers. Some calculators use a key labeled $\boxed{+/-}$, whereas others use a key labeled $\boxed{(-)}$. You will need to consult with the manual that came with your calculator to see how your calculator does the job.

Here are a couple of ways to find the sum $-10 + (-15)$ on a calculator:

Scientific Calculator: 10 $\boxed{+/-}$ $\boxed{+}$ 15 $\boxed{+/-}$ $\boxed{=}$

Graphing Calculator: $\boxed{(-)}$ 10 $\boxed{+}$ $\boxed{(-)}$ 15 \boxed{ENT}

Getting Ready for Class

After reading through the preceding section, respond in your own words and in complete sentences.

1. Explain how you would use the number line to add 3 and 5.
2. If two numbers are negative, such as -3 and -5 , what sign will their sum have?
3. If you add two numbers with different signs, how do you determine the sign of the answer?
4. With respect to addition with positive and negative numbers, does the phrase "two negatives make a positive" make any sense?

14. Add: $\frac{1}{2} + \left(-\frac{3}{4}\right) + \left(-\frac{5}{8}\right)$

Answer

14. $-\frac{7}{8}$

Problem Set 9.2

A Draw a number line from -10 to $+10$ and use it to add the following numbers. [Examples 1–7]

1. $2 + 3$ 2. $2 + (-3)$ 3. $-2 + 3$ 4. $-2 + (-3)$ 5. $5 + (-7)$ 6. $-5 + 7$
7. $-4 + (-2)$ 8. $-8 + (-2)$ 9. $10 + (-6)$ 10. $-9 + 3$ 11. $7 + (-3)$ 12. $-7 + 3$
13. $-4 + (-5)$ 14. $-2 + (-7)$

B Combine the following by using the rule for addition of positive and negative numbers. (Your goal is to be fast and accurate at addition, with the latter being more important.) [Example 8]

15. $7 + 8$ 16. $9 + 12$ 17. $5 + (-8)$ 18. $4 + (-11)$
19. $-6 + (-5)$ 20. $-7 + (-2)$ 21. $-10 + 3$ 22. $-14 + 7$
23. $-1 + (-2)$ 24. $-5 + (-4)$ 25. $-11 + (-5)$ 26. $-16 + (-10)$
27. $4 + (-12)$ 28. $9 + (-1)$ 29. $-85 + (-42)$ 30. $-96 + (-31)$
31. $-121 + 170$ 32. $-130 + 158$ 33. $-375 + 409$ 34. $-765 + 213$

Complete the following tables.

35.

First Number a	Second Number b	Their Sum $a+b$
5	-3	
5	-4	
5	-5	
5	-6	
5	-7	

36.

First Number a	Second Number b	Their Sum $a+b$
-5	3	
-5	4	
-5	5	
-5	6	
-5	7	

37.

First Number x	Second Number y	Their Sum $x+y$
-5	-3	
-5	-4	
-5	-5	
-5	-6	
-5	-7	

38.

First Number x	Second Number y	Their Sum $x+y$
30	-20	
-30	20	
-30	-20	
30	20	
-30	0	

B Add the following numbers left to right. [Example 9]

39. $24 + (-6) + (-8)$

40. $35 + (-5) + (-30)$

41. $-201 + (-143) + (-101)$

42. $-27 + (-56) + (-89)$

43. $-321 + 752 + (-324)$

44. $-571 + 437 + (-502)$

45. $-2 + (-5) + (-6) + (-7)$

46. $-8 + (-3) + (-4) + (-7)$

47. $15 + (-30) + 18 + (-20)$

48. $20 + (-15) + 30 + (-18)$

49. $-78 + (-42) + 57 + 13$

50. $-89 + (-51) + 65 + 17$

B Use the rule for order of operations to simplify each of the following. [Example 10]

51. $(-8 + 5) + (-6 + 2)$

52. $(-3 + 1) + (-9 + 4)$

53. $(-10 + 4) + (-3 + 12)$

54. $(-11 + 5) + (-3 + 2)$

55. $20 + (-30 + 50) + 10$

56. $30 + (-40 + 20) + 50$

57. $108 + (-456 + 275)$

58. $106 + (-512 + 318)$

59. $[5 + (-8)] + [3 + (-11)]$

60. $[8 + (-2)] + [5 + (-7)]$

61. $[57 + (-35)] + [19 + (-24)]$

62. $[63 + (-27)] + [18 + (-24)]$

B Use the rule for addition of numbers to add the following fractions and decimals. [Examples 11–14]

63. $-1.3 + (-2.5)$

64. $-9.1 + (-4.5)$

65. $24.8 + (-10.4)$

66. $29.5 + (-21.3)$

67. $-5.35 + 2.35 + (-6.89)$

68. $-9.48 + 5.48 + (-4.28)$

69. $-\frac{5}{6} + \left(-\frac{1}{6}\right)$

70. $-\frac{7}{9} + \left(-\frac{2}{9}\right)$

71. $\frac{3}{7} + \left(-\frac{5}{7}\right)$

72. $\frac{11}{13} + \left(-\frac{12}{13}\right)$

73. $-\frac{2}{5} + \frac{3}{5} + \left(-\frac{4}{5}\right)$

74. $-\frac{6}{7} + \frac{4}{7} + \left(-\frac{1}{7}\right)$

75. $-3.8 + 2.54 + 0.4$

76. $-9.6 + 5.15 + 0.8$

77. $-2.89 + (-1.4) + 0.09$

78. $-3.99 + (-1.42) + 0.06$

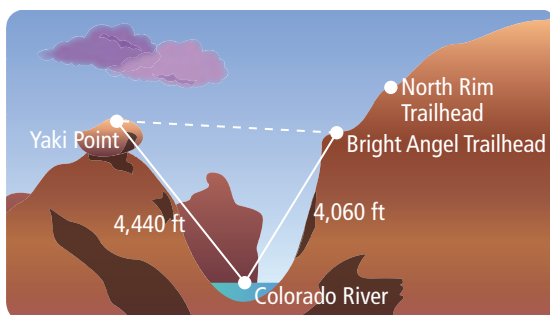
79. $\frac{1}{2} + \left(-\frac{3}{4}\right)$

80. $\frac{3}{5} + \left(-\frac{7}{10}\right)$


81. Find the sum of -8 , -10 , and -3 .82. Find the sum of -4 , 17 , and -6 .83. What number do you add to 8 to get 3 ?84. What number do you add to 10 to get 4 ?85. What number do you add to -3 to get -7 ?86. What number do you add to -5 to get -8 ?87. What number do you add to -4 to get 3 ?88. What number do you add to -7 to get 2 ?89. If the sum of -3 and 5 is increased by 8 , what number results?90. If the sum of -9 and -2 is increased by 10 , what number results?

■ Applying the Concepts

91. One of the trails at the Grand Canyon starts at Bright Angel Trailhead and then drops $4,060$ feet to the Colorado River and then climbs $4,440$ feet to Yaki Point. What is the trail's ending position in relation to the Bright Angel Trailhead? If the trail ends below the starting position write the answer as a negative number.



92. One of the trails in the Grand Canyon starts at the North Rim trailhead and drops $5,490$ feet to the Colorado River. The trail then climbs $4,060$ feet to the Bright Angel Trailhead. What is the Bright Angel Trailhead's position in relation to the North Rim Trailhead? If the trail ends below the starting position write the answer as a negative number.



93. Checkbook Balance Ethan has a balance of $-\$40$ in his checkbook. If he deposits $\$100$ and then writes a check for $\$50$, what is the new balance in his checkbook?

RECORD ALL CHARGES OR CREDITS THAT AFFECT YOUR ACCOUNT					
NUMBER	DATE	DESCRIPTION OF TRANSACTION	PAYMENT/DEBIT (-)	DEPOSIT/CREDIT (+)	BALANCE
					$-\$40.00$
	9/20	Deposit		$\$100.00$	
1502	9/24	Vons Market	$\$50.00$		

94. Checkbook Balance Kendra has a balance of $-\$20$ in her checkbook. If she deposits $\$45$ and then writes a check for $\$15$, what is the new balance in her checkbook?

RECORD ALL CHARGES OR CREDITS THAT AFFECT YOUR ACCOUNT					
NUMBER	DATE	DESCRIPTION OF TRANSACTION	PAYMENT/DEBIT (-)	DEPOSIT/CREDIT (+)	BALANCE
					$-\$20.00$
	9/25	Deposit		$\$45.00$	
1504	9/28	SLO Soccer	$\$15.00$		

Getting Ready for the Next Section

Give the opposite of each number.

95. 2 96. 3 97. -4 98. -5 99. $\frac{2}{5}$
100. $\frac{3}{8}$ 101. -30 102. -15 103. 60.3 104. 70.4
105. Subtract 3 from 5. 106. Subtract 2 from 8.
107. Find the difference of 7 and 4. 108. Find the difference of 8 and 6.

Maintaining Your Skills

The problems below review subtraction with whole numbers.

Subtract.

109. $763 - 159$ 110. $1,007 - 136$ 111. $465 - 462 - 3$ 112. $481 - 479 - 2$

Write each of the following statements in symbols.

113. The difference of 10 and x . 114. The difference of x and 10.
115. 17 subtracted from y . 116. y subtracted from 17.

Subtraction with Negative Numbers

9.3

Introduction . . .

How would we represent the final balance in a checkbook if the original balance was \$20 and we wrote a check for \$30? The final balance would be $-\$10$. We can summarize the whole situation with subtraction:

$$\$20 - \$30 = -\$10$$

RECORD ALL CHARGES OR CREDITS THAT AFFECT YOUR ACCOUNT					
NUMBER	DATE	DESCRIPTION OF TRANSACTION	PAYMENT/DEBIT (-)	DEPOSIT/CREDIT (+)	BALANCE
1501	9/15	Campus Bookstore	\$30 00		-\$10 00

From this we see that subtracting 30 from 20 gives us -10 . Another example that gives the same answer but involves addition is this:

$$20 + (-30) = -10$$

A Subtraction

From the two examples above, we find that subtracting 30 gives the same result as adding -30 . We use this kind of reasoning to give a definition for subtraction that will allow us to use the rules we developed for addition to do our subtraction problems. Here is that definition:

Definition

Subtraction If a and b represent any two numbers, then it is always true that

$$a - b = a + (-b)$$

To subtract b Add its opposite, $-b$

In words: Subtracting a number is equivalent to adding its opposite.

Let's see if this definition conflicts with what we already know to be true about subtraction.

EXAMPLE 1

Subtract: $5 - 2$

SOLUTION From previous experience we know that

$$5 - 2 = 3$$

We can get the same answer by using the definition we just gave for subtraction. Instead of subtracting 2, we can add its opposite, -2 . Here is how it looks:

$$\begin{aligned} 5 - 2 &= 5 + (-2) && \text{Change subtraction to} \\ & && \text{addition of the opposite} \\ &= 3 && \text{Apply the rule for addition of} \\ & && \text{positive and negative numbers} \end{aligned}$$

The result in Example 1 is the same whether we use our previous knowledge of subtraction or the new definition. The new definition is essential when the problems begin to get more complicated.

Objectives

- A Subtract numbers by thinking of subtraction as addition of the opposite.
- B Solve applications involving subtraction with positive and negative numbers.

Note

This definition of subtraction may seem a little strange at first. In Example 1 you will notice that using the definition gives us the same results we are used to getting with subtraction. As we progress further into the section, we will use the definition to subtract numbers we haven't been able to subtract before.

PRACTICE PROBLEMS

1. Subtract: $7 - 3$

Answer

1. 4

2. Subtract: $-7 - 3$

Note

A real-life analogy to Example 2 would be: "If the temperature were 7° below 0 and then it dropped another 2° , what would the temperature be then?"

3. Subtract: $-8 - 6$

4. Subtract: $10 - (-6)$

5. Subtract: $-10 - (-15)$

Note

Examples 4 and 5 may give results you are not used to getting. But you must realize that the results are correct. That is, $12 - (-6)$ is 18, and $-20 - (-30)$ is 10. If you think these results should be different, then you are not thinking of subtraction correctly.

6. Subtract each of the following.
- $8 - 5$
 - $-8 - 5$
 - $8 - (-5)$
 - $-8 - (-5)$
 - $12 - 10$
 - $-12 - 10$
 - $12 - (-10)$
 - $-12 - (-10)$

Answers

2. -10 3. -14 4. 16 5. 5
 6. a. 3 b. -13 c. 13 d. -3
 e. 2 f. -22 g. 22 h. -2

EXAMPLE 2

Subtract: $-7 - 2$

SOLUTION We have never subtracted a positive number from a negative number before. We must apply our definition of subtraction:

$$\begin{aligned} -7 - 2 &= -7 + (-2) && \text{Instead of subtracting 2,} \\ & && \text{we add its opposite, } -2 \\ &= -9 && \text{Apply the rule for addition} \end{aligned}$$

EXAMPLE 3

Subtract: $-10 - 5$

SOLUTION We apply the definition of subtraction (if you don't know the definition of subtraction yet, go back and read it) and add as usual.

$$\begin{aligned} -10 - 5 &= -10 + (-5) && \text{Definition of subtraction} \\ &= -15 && \text{Addition} \end{aligned}$$

EXAMPLE 4

Subtract: $12 - (-6)$

SOLUTION The first $-$ sign is read "subtract," and the second one is read "negative." The problem in words is "12 subtract negative 6." We can use the definition of subtraction to change this to the addition of positive 6:

$$\begin{aligned} 12 - (-6) &= 12 + 6 && \text{Subtracting } -6 \text{ is equivalent} \\ & && \text{to adding } +6 \\ &= 18 && \text{Addition} \end{aligned}$$

EXAMPLE 5

Subtract: $-20 - (-30)$

SOLUTION Instead of subtracting -30 , we can use the definition of subtraction to write the problem again as the addition of 30:

$$\begin{aligned} -20 - (-30) &= -20 + 30 && \text{Definition of subtraction} \\ &= 10 && \text{Addition} \end{aligned}$$

Examples 1–5 illustrate all the possible combinations of subtraction with positive and negative numbers. There are no new rules for subtraction. We apply the definition to change each subtraction problem into an equivalent addition problem. The rule for addition can then be used to obtain the correct answer.

EXAMPLE 6

The following table shows the relationship between subtraction and addition:

Subtraction	Addition of the Opposite	Answer
$7 - 9$	$7 + (-9)$	-2
$-7 - 9$	$-7 + (-9)$	-16
$7 - (-9)$	$7 + 9$	16
$-7 - (-9)$	$-7 + 9$	2
$15 - 10$	$15 + (-10)$	5
$-15 - 10$	$-15 + (-10)$	-25
$15 - (-10)$	$15 + 10$	25
$-15 - (-10)$	$-15 + 10$	-5

EXAMPLE 7Combine: $-3 + 6 - 2$

SOLUTION The first step is to change subtraction to addition of the opposite. After that has been done, we add from left to right.

$$\begin{aligned} -3 + 6 - 2 &= -3 + 6 + (-2) && \text{Subtracting 2 is equivalent} \\ & && \text{to adding } -2 \\ &= 3 + (-2) && \text{Add left to right} \\ &= 1 \end{aligned}$$

EXAMPLE 8Combine: $10 - (-4) - 8$

SOLUTION Changing subtraction to addition of the opposite, we have

$$\begin{aligned} 10 - (-4) - 8 &= 10 + 4 + (-8) \\ &= 14 + (-8) \\ &= 6 \end{aligned}$$

EXAMPLE 9Subtract 3 from -5 .

SOLUTION Subtracting 3 is equivalent to adding -3 .

$$-5 - 3 = -5 + (-3) = -8$$

Subtracting 3 from -5 gives us -8 .

EXAMPLE 10Subtract -4 from 9.

SOLUTION Subtracting -4 is the same as adding $+4$:

$$9 - (-4) = 9 + 4 = 13$$

Subtracting -4 from 9 gives us 13.

EXAMPLE 11Find the difference of -7 and -4 .

SOLUTION Subtracting -4 from -7 looks like this:

$$-7 - (-4) = -7 + 4 = -3$$

The difference of -7 and -4 is -3 .

EXAMPLE 12Subtract 60.3 from -49.8 .

SOLUTION $-49.8 - 60.3 = -49.8 + (-60.3)$
 $= -110.1$

EXAMPLE 13Find the difference of $-\frac{3}{5}$ and $\frac{2}{5}$.

SOLUTION $-\frac{3}{5} - \frac{2}{5} = -\frac{3}{5} + \left(-\frac{2}{5}\right)$
 $= -\frac{5}{5}$
 $= -1$

7. Combine: $-4 + 6 - 7$ 8. Combine: $15 - (-5) - 8$ 9. Subtract 2 from -8 .10. Subtract -5 from 7.11. Find the difference of -8 and -6 .

Subtract.

12. $-57.8 - 70.4$ 13. $-\frac{5}{8} - \frac{3}{8}$ **Answers**7. -5 8. 12 9. -10 10. 1211. -2 12. -128.2 13. -1

B Application

14. Suppose the temperature is 42°F at takeoff and then drops to -42°F when the plane reaches its cruising altitude. Find the difference in temperature at takeoff and at cruising altitude.

EXAMPLE 14

Many of the planes used by the United States during World War II were not pressurized or sealed from outside air. As a result, the temperature inside these planes was the same as the surrounding air temperature outside. Suppose the temperature inside a B-17 Flying Fortress is 50°F at takeoff and then drops to -30°F when the plane reaches its cruising altitude of 28,000 feet. Find the difference in temperature inside this plane at takeoff and at 28,000 feet.



Courtesy of the U.S. Air Force Museum

SOLUTION The temperature at takeoff is 50°F , whereas the temperature at 28,000 feet is -30°F . To find the difference we subtract, with the numbers in the same order as they are given in the problem:

$$50 - (-30) = 50 + 30 = 80$$

The difference in temperature is 80°F .

Subtraction and Taking Away

Some people may believe that the answer to $-5 - 9$ should be -4 or 4 , not -14 . If this is happening to you, you are probably thinking of subtraction in terms of taking one number away from another. Thinking of subtraction in this way works well with positive numbers if you always subtract the smaller number from the larger. In algebra, however, we encounter many situations other than this. The definition of subtraction, that $a - b = a + (-b)$ clearly indicates the correct way to use subtraction. That is, when working subtraction problems, you should think “addition of the opposite,” not “taking one number away from another.”

USING TECHNOLOGY

Calculators

Here is how we work the subtraction problem shown in Example 11 on a calculator.

Scientific Calculator: 7 $\boxed{+/-}$ $\boxed{-}$ 4 $\boxed{+/-}$ $\boxed{=}$

Graphing Calculator: $\boxed{(-)}$ 7 $\boxed{-}$ $\boxed{(-)}$ 4 $\boxed{\text{ENT}}$

Getting Ready for Class

After reading through the preceding section, respond in your own words and in complete sentences.

1. Write the subtraction problem $5 - 3$ as an equivalent addition problem.
2. Explain the process you would use to subtract 2 from -7 .
3. Write an addition problem that is equivalent to the subtraction problem $-20 - (-30)$.
4. To find the difference of -7 and -4 we subtract what number from -7 ?

Answer
14. 84°F

Problem Set 9.3

A Subtract. [Examples 1–5, 12, 13]

1. $7 - 5$

2. $5 - 7$

3. $8 - 6$

4. $6 - 8$

5. $-3 - 5$

6. $-5 - 3$

7. $-4 - 1$

8. $-1 - 4$

9. $5 - (-2)$

10. $2 - (-5)$

11. $3 - (-9)$

12. $9 - (-3)$

13. $-4 - (-7)$

14. $-7 - (-4)$

15. $-10 - (-3)$

16. $-3 - (-10)$

17. $15 - 18$

18. $20 - 32$

19. $100 - 113$

20. $121 - 21$

21. $-30 - 20$

22. $-50 - 60$

23. $-79 - 21$

24. $-86 - 31$

25. $156 - (-243)$

26. $292 - (-841)$

27. $-35 - (-14)$

28. $-29 - (-4)$

29. $-9.01 - 2.4$

30. $-8.23 - 5.4$

31. $-0.89 - 1.01$

32. $-0.42 - 2.04$

33. $-\frac{1}{6} - \frac{5}{6}$

34. $-\frac{4}{7} - \frac{3}{7}$

35. $\frac{5}{12} - \frac{5}{6}$

36. $\frac{7}{15} - \frac{4}{5}$

37. $-\frac{13}{70} - \frac{23}{42}$

38. $-\frac{17}{60} - \frac{17}{90}$

A Simplify as much as possible by first changing all subtractions to addition of the opposite and then adding left to right. [Examples 7, 8]

39. $4 - 5 - 6$

40. $7 - 3 - 2$

41. $-8 + 3 - 4$

42. $-10 - 1 + 16$

43. $-8 - 4 - 2$

44. $-7 - 3 - 6$

45. $12 - 30 - 47$

46. $-29 - 53 - 37$

47. $33 - (-22) - 66$

48. $44 - (-11) + 55$

49. $101 - (-95) + 6$

50. $-211 - (-207) + 3$

51. $-900 + 400 - (-100)$

52. $-300 + 600 - (-200)$

53. $-3.4 - 5.6 - 8.5$

54. $-2.1 - 3.1 - 4.1$

55. $\frac{1}{2} - \frac{1}{3} - \frac{1}{4}$

56. $\frac{1}{5} - \frac{1}{6} - \frac{1}{7}$

A Translate each of the following and simplify the result. [Examples 9–11]

57. Subtract -6 from 5 .58. Subtract 8 from -2 .59. Find the difference of -5 and -1 .60. Find the difference of -7 and -3 .61. Subtract -4 from the sum of -8 and 12 .62. Subtract -7 from the sum of 7 and -12 .63. What number do you subtract from -3 to get -9 ?64. What number do you subtract from 5 to get 8 ?

■ Estimating

Work Problems 65–70 mentally, without pencil and paper or a calculator.

65. The answer to the problem $52 - 49$ is closest to which of the following numbers?

- a. 100 b. 0 c. -100

66. The answer to the problem $-52 - 49$ is closest to which of the following numbers?

- a. 100 b. 0 c. -100

67. The answer to the problem $52 - (-49)$ is closest to which of the following numbers?

- a. 100 b. 0 c. -100

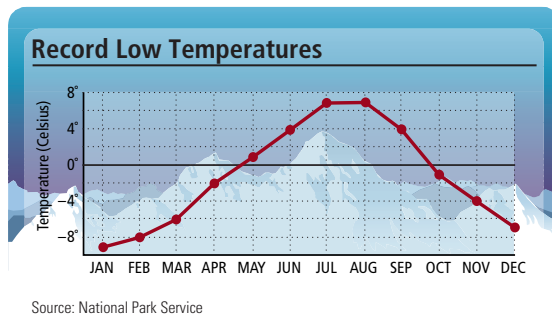
68. The answer to the problem $-52 - (-49)$ is closest to which of the following numbers?

- a. 100 b. 0 c. -100


69. Is $-161 - (-62)$ closer to -200 or -100 ?70. Is $-553 - 50$ closer to -600 or -500 ?

B Applying the Concepts [Example 14]

71. The graph shows the record low temperatures for the Grand Canyon. What is the temperature difference between January and July?



72. The graph shows the lowest and highest points in the Grand Canyon and Death Valley. What is the difference between the lowest point in the Grand Canyon and the lowest point in Death Valley?



73. The highest point in Grand Canyon National Park is at Point Imperial with an elevation of 8,803 feet. The lowest point in the park is at Lake Mead at 1,200 feet. What is the difference between the highest and the lowest points?

74. **Temperature** On Monday the temperature reached a high of 28° above 0. That night it dropped to 16° below 0. What is the difference between the high and the low temperatures for Monday?

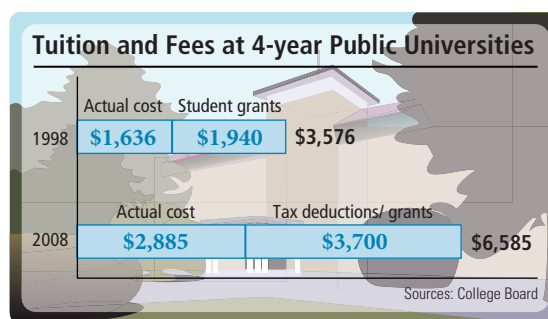
75. **Tracking Inventory** By definition, inventory is the total amount of goods contained in a store or warehouse at any given time. It is helpful for store owners to know the number of items they have available for sale in order to accommodate customer demand. This table shows the beginning inventory on May 1st and tracks the number of items bought and sold for one month. Determine the number of items in inventory at the end of the month.

Date	Transaction	Number of Units Available	Number of Units Sold
May 1	Beginning Inventory	400	
May 3	Purchase	100	
May 8	Sale		700
May 15	Purchase	600	
May 19	Purchase	200	
May 25	Sale		400
May 27	Sale		300
May 31	Ending Inventory		

76. **Profit and Loss** You own a small business which provides computer support to homeowners who wish to create their own in-house computer network. In addition to setting up the network you also maintain and troubleshoot home PCs. Business gets off to a slow start. You record a profit of \$2,298 during the first quarter of the year, a loss of \$2,854 during the second quarter, a profit of \$3,057 during the third quarter, and a profit of \$1,250 for the last quarter of the year. Do you end the year with a net profit or a net loss? Represent that profit or loss as a positive or negative value.

Tuition Cost The chart shows the cost of college tuition and fees at public four-year universities. Because of tax breaks, along with federal and state grants, the actual cost per student is much less than the total cost of tuition and fees. Use the information in this chart to answer Questions 77–80.

77. Find the difference in student grants in 1998 and student grants and tax deductions in 2008.
78. Find the difference in actual costs in 1998 and actual costs in 2008.
79. Find the difference in total costs in 1998 and total costs in 2008.



80. What has increased more from 1998 to 2008, student grants and tax deductions or actual student costs?

Repeated below is the table of wind chill temperatures that we used previously. Use it for Problems 81–84.

Wind speed	Air Temperature (°F)							
	30°	25°	20°	15°	10°	5°	0°	−5°
10 mph	16°	10°	3°	−3°	−9°	−15°	−22°	−27°
15 mph	9°	2°	−5°	−11°	−18°	−25°	−31°	−38°
20 mph	4°	−3°	−10°	−17°	−24°	−31°	−39°	−46°
25 mph	1°	−7°	−15°	−22°	−29°	−36°	−44°	−51°
30 mph	−2°	−10°	−18°	−25°	−33°	−41°	−49°	−56°

81. **Wind Chill** If the temperature outside is 15°F, what is the difference in wind chill temperature between a 15-mile-per-hour wind and a 25-mile-per-hour wind?
82. **Wind Chill** If the temperature outside is 0°F, what is the difference in wind chill temperature between a 15-mile-per-hour wind and a 25-mile-per-hour wind?
83. **Wind Chill** Find the difference in temperature between a day in which the air temperature is 20°F and the wind is blowing at 10 miles per hour and a day in which the air temperature is 10°F and the wind is blowing at 20 miles per hour.
84. **Wind Chill** Find the difference in temperature between a day in which the air temperature is 0°F and the wind is blowing at 10 miles per hour and a day in which the air temperature is −5°F and the wind is blowing at 20 miles per hour.

Use the tables below to work Problems 85–88.

RECORD LOW TEMPERATURES FOR LAKE PLACID, NEW YORK	
Month	Temperature
January	−36°F
February	−30°F
March	−14°F
April	−2°F
May	19°F
June	22°F
July	35°F
August	30°F
September	19°F
October	15°F
November	−11°F
December	−26°F

RECORD HIGH TEMPERATURES FOR LAKE PLACID, NEW YORK	
Month	Temperature
January	54°F
February	59°F
March	69°F
April	82°F
May	90°F
June	93°F
July	97°F
August	93°F
September	90°F
October	87°F
November	67°F
December	60°F

- 85. Temperature Difference** Find the difference between the record high temperature and the record low temperature for the month of December.
- 86. Temperature Difference** Find the difference between the record high temperature and the record low temperature for the month of March.
- 87. Temperature Difference** Find the difference between the record low temperatures of March and December.
- 88. Temperature Difference** Find the difference between the record high temperatures of March and December.

Getting Ready for the Next Section

Perform the indicated operations.

89. $3(2)(5)$

90. $5(2)(4)$

91. 6^2

92. 8^2

93. 4^3

94. 3^3

95. $6(3 + 5)$

96. $2(5 + 8)$

97. $3(9 - 2) + 4(7 - 2)$

98. $2(5 - 3) - 7(4 - 2)$

99. $(3 + 7)(6 - 2)$

100. $(6 + 1)(9 - 4)$

Simplify each of the following.

101. $2 + 3(4 + 1)$

102. $6 + 5(2 + 3)$

103. $(6 + 2)(6 - 2)$

104. $(7 + 1)(7 - 1)$

105. 5^2

106. 2^3

107. $2^3 \cdot 3^2$

108. $2^3 + 3^2$

■ Maintaining Your Skills

Write each of the following in symbols.

109. The product of 3 and 5.

110. The product of 5 and 3.

111. The product of 7 and x .

112. The product of 2 and y .

Rewrite the following using the commutative property of multiplication.

113. $3(5) =$

114. $7(x) =$

Rewrite the following using the associative property of multiplication.

115. $5(7 \cdot 8) =$

116. $4(6 \cdot y)$

Apply the distributive property to each expression and then simplify the result.

117. $2(3 + 4)$

118. $5(6 + 7)$

■ Extending the Concepts

119. Give an example that shows that subtraction is not a commutative operation.

120. Why is the expression “two negatives make a positive” not correct?

121. Give an example of an everyday situation that is modeled by the subtraction problem
 $\$10 - \$12 = -\$2$.

122. Give an example of an everyday situation that is modeled by the subtraction problem
 $-\$10 - \$12 = -\$22$.

In Chapter 2 we defined an arithmetic sequence as a sequence of numbers in which each number, after the first number, is obtained from the previous number by adding the same amount each time.

Find the next two numbers in each arithmetic sequence below.

123. 10, 5, 0, ...

124. 8, 3, -2, ...

125. -10, -6, -2, ...

126. -4, -1, 2, ...

Multiplication with Negative Numbers

9.4

Introduction . . .

Suppose you buy three shares of a certain stock on Monday, and by Friday the price per share has dropped \$5. How much money have you lost? The answer is \$15. Because it is a loss, we can express it as $-\$15$. The multiplication problem below can be used to describe the relationship among the numbers.



$$\begin{array}{ccc} 3 \text{ shares} & \text{each loses } \$5 & \text{for a total of } -\$15 \\ & \swarrow \quad \downarrow \quad \nwarrow & \\ & 3(-5) = -15 & \end{array}$$

From this we conclude that it is reasonable to say that the product of a positive number and a negative number is a negative number.

A Multiplication

In order to generalize multiplication with negative numbers, recall that we first defined multiplication by whole numbers to be repeated addition. That is:

$$\begin{array}{ccccccc} 3 \cdot 5 & = & 5 & + & 5 & + & 5 \\ & & \uparrow & & \uparrow & & \uparrow \\ & & \text{Multiplication} & & \text{Repeated addition} & & \end{array}$$

This concept is very helpful when it comes to developing the rule for multiplication problems that involve negative numbers. For the first example we look at what happens when we multiply a negative number by a positive number.

EXAMPLE 1

Multiply: $3(-5)$

SOLUTION Writing this product as repeated addition, we have

$$\begin{aligned} 3(-5) &= (-5) + (-5) + (-5) \\ &= -10 + (-5) \\ &= -15 \end{aligned}$$

The result, -15 , is obtained by adding the three negative 5's. ■

EXAMPLE 2

Multiply: $-3(5)$

SOLUTION In order to write this multiplication problem in terms of repeated addition, we will have to reverse the order of the two numbers. This is easily done, because multiplication is a commutative operation.

$$\begin{aligned} -3(5) &= 5(-3) && \text{Commutative property} \\ &= (-3) + (-3) + (-3) + (-3) + (-3) && \text{Repeated addition} \\ &= -15 && \text{Addition} \end{aligned}$$

The product of -3 and 5 is -15 . ■

EXAMPLE 3

Multiply: $-3(-5)$

SOLUTION It is impossible to write this product in terms of repeated addition. We will find the answer to $-3(-5)$ by solving a different problem. Look at the following problem:

$$-3[5 + (-5)] = -3[0] = 0$$

Objectives

- A Multiply positive and negative numbers.
- B Apply the rule for order of operations to expressions containing positive and negative numbers.

PRACTICE PROBLEMS

1. Multiply: $2(-6)$

2. Multiply: $-2(6)$

3. Multiply: $-2(-6)$

Answers

1. -12
2. -12

Note

The discussion here explains why $-3(-5) = 15$. We want to be able to justify everything we do in mathematics. The discussion tells *why* $-3(-5) = 15$.

Chapter 9 Introduction to Algebra

The result is 0, because multiplying by 0 always produces 0. Now we can work the same problem another way, and in the process find the answer to $-3(-5)$. Applying the distributive property to the same expression, we have

$$\begin{aligned} -3[5 + (-5)] &= -3(5) + (-3)(-5) && \text{Distributive property} \\ &= -15 + (?) && -3(5) = -15 \end{aligned}$$

The question mark must be +15, because we already know that the answer to the problem is 0, and +15 is the only number we can add to -15 to get 0. So, our problem is solved:

$$-3(-5) = +15$$

Table 1 gives a summary of what we have done so far in this section.

TABLE 1

Original Numbers Have	For Example	The Answer Is
Same signs	$3(5) = 15$	Positive
Different signs	$-3(5) = -15$	Negative
Different signs	$3(-5) = -15$	Negative
Same signs	$-3(-5) = 15$	Positive

From the examples we have done so far in this section and their summaries in Table 1, we write the following rule for multiplication of positive and negative numbers:

Rule

To multiply any two numbers, we multiply their absolute values.

1. The answer is *positive* if both the original numbers have the same sign. That is, the product of two numbers with the same sign is positive.
2. The answer is *negative* if the original two numbers have different signs. The product of two numbers with different signs is negative.

This rule should be memorized. By the time you have finished reading this section and working the problems at the end of the section, you should be fast and accurate at multiplication with positive and negative numbers.

EXAMPLE 4

$$2(4) = 8 \quad \text{Like signs; positive answer}$$

EXAMPLE 5

$$-2(-4) = 8 \quad \text{Like signs; positive answer}$$

EXAMPLE 6

$$2(-4) = -8 \quad \text{Unlike signs; negative answer}$$

EXAMPLE 7

$$-2(4) = -8 \quad \text{Unlike signs; negative answer}$$

EXAMPLE 8

$$7(-6) = -42 \quad \text{Unlike signs; negative answer}$$

EXAMPLE 9

$$-5(-8) = 40 \quad \text{Like signs; positive answer}$$

EXAMPLE 10

$$\begin{aligned} -3(2)(-5) &= -6(-5) && \text{Multiply } -3 \text{ and } 2 \text{ to get } -6 \\ &= 30 \end{aligned}$$

Multiply.

4. $3(2)$

5. $-3(-2)$

6. $3(-2)$

7. $-3(2)$

8. $8(-9)$

9. $-6(-4)$

10. $-5(2)(-4)$

Answers

3. 12 4. 6 5. 6 6. -6 7. -6

8. -72 9. 24 10. 40

EXAMPLE 11

Use the definition of exponents to expand each expression. Then simplify by multiplying.

- a. $(-6)^2 = (-6)(-6)$ Definition of exponents
 $= 36$ Multiply
- b. $-6^2 = -6 \cdot 6$ Definition of exponents
 $= -36$ Multiply
- c. $(-4)^3 = (-4)(-4)(-4)$ Definition of exponents
 $= -64$ Multiply
- d. $-4^3 = -4 \cdot 4 \cdot 4$ Definition of exponents
 $= -64$ Multiply

In Example 11, the base is a negative number in Parts a and c, but not in Parts b and d. We know this is true because of the use of parentheses.

B Order of Operations**EXAMPLE 12**

Simplify: $-6[3 + (-5)]$

SOLUTION We begin inside the brackets and work our way out:

$$\begin{aligned} -6[3 + (-5)] &= -6[-2] \\ &= 12 \end{aligned}$$

EXAMPLE 13

Simplify: $-4 + 5(-6 + 2)$

SOLUTION Simplifying inside the parentheses first, we have

$$\begin{aligned} -4 + 5(-6 + 2) &= -4 + 5(-4) && \text{Simplify inside parentheses} \\ &= -4 + (-20) && \text{Multiply} \\ &= -24 && \text{Add} \end{aligned}$$

EXAMPLE 14

Simplify: $-2(7) + 3(-6)$

SOLUTION Multiplying left to right before we add gives us

$$\begin{aligned} -2(7) + 3(-6) &= -14 + (-18) \\ &= -32 \end{aligned}$$

EXAMPLE 15

Simplify: $-3(2 - 9) + 4(-7 - 2)$

SOLUTION We begin by subtracting inside the parentheses:

$$\begin{aligned} -3(2 - 9) + 4(-7 - 2) &= -3(-7) + 4(-9) \\ &= 21 + (-36) \\ &= -15 \end{aligned}$$

EXAMPLE 16

Simplify: $(-3 - 7)(2 - 6)$

SOLUTION Again, we begin by simplifying inside the parentheses:

$$\begin{aligned} (-3 - 7)(2 - 6) &= (-10)(-4) \\ &= 40 \end{aligned}$$

11. Use the definition of exponents to expand each expression. Then simplify by multiplying.

- a. $(-8)^2$
- b. -8^2
- c. $(-3)^3$
- d. -3^3

12. Simplify: $-2[5 + (-8)]$

13. Simplify: $-3 + 4(-7 + 3)$

14. Simplify: $-3(5) + 4(-4)$

15. Simplify: $-2(3 - 5) - 7(-2 - 4)$

16. Simplify: $(-6 - 1)(4 - 9)$

Answers

11. a. 64 b. -64 c. -27 d. -27
 12. 6 13. -19 14. -31 15. 46
 16. 35

USING TECHNOLOGY**Calculators**

Here is how we work the problem shown in Example 16 on a calculator. (The \times key on the first line may, or may not, be necessary. Try your calculator without it and see.)

Scientific Calculator: $\boxed{3} \boxed{+/-} \boxed{7} \boxed{)} \boxed{\times} \boxed{(} \boxed{2} \boxed{-} \boxed{6} \boxed{)} \boxed{=}$

Graphing Calculator: $\boxed{(} \boxed{(-)} \boxed{3} \boxed{-} \boxed{7} \boxed{)} \boxed{(} \boxed{2} \boxed{-} \boxed{6} \boxed{)} \boxed{ENT}$

Here are a few more multiplication problems involving fractions and decimals.

17. $\frac{3}{4}\left(-\frac{4}{7}\right)$

18. $\left(-\frac{5}{6}\right)\left(-\frac{9}{20}\right)$

19. $(-3)(6.7)$

20. $(-0.6)(-0.5)$

EXAMPLE 17

$$\left(\frac{2}{3}\right)\left(-\frac{3}{5}\right) = -\frac{6}{15} = -\frac{2}{5}$$

The rule for multiplication also holds for fractions

EXAMPLE 18

$$\left(-\frac{7}{8}\right)\left(-\frac{5}{14}\right) = \frac{35}{112} = \frac{5}{16}$$

EXAMPLE 19

$$(-5)(3.4) = -17.0$$

The rule for multiplication also holds for decimals

EXAMPLE 20

$$(-0.4)(-0.8) = 0.32$$

Getting Ready for Class

After reading through the preceding section, respond in your own words and in complete sentences.

1. Write the multiplication problem $3(-5)$ as an addition problem.
2. Write the multiplication problem $2(4)$ as an addition problem.
3. If two numbers have the same sign, then their product will have what sign?
4. If two numbers have different signs, then their product will have what sign?

Answers

17. $-\frac{3}{7}$ 18. $\frac{3}{8}$ 19. -20.1

20. 0.30

Problem Set 9.4

A Find each of the following products. (Multiply.) [Examples 1–10, 17–20]

1. $7(-8)$

2. $-3(5)$

3. $-6(10)$

4. $4(-8)$

5. $-7(-8)$

6. $-4(-7)$

7. $-9(-9)$

8. $-6(-3)$

9. $-2.1(4.3)$

10. $-6.8(5.7)$

11. $-\frac{4}{5}\left(-\frac{15}{28}\right)$

12. $-\frac{8}{9}\left(-\frac{27}{32}\right)$

13. $-12\left(\frac{2}{3}\right)$

14. $-18\left(\frac{5}{6}\right)$

15. $3(-2)(4)$

16. $5(-1)(3)$

17. $-4(3)(-2)$

18. $-4(5)(-6)$

19. $-1(-2)(-3)$

20. $-2(-3)(-4)$

A Use the definition of exponents to expand each of the following expressions. Then multiply according to the rule for multiplication. [Example 11]

21. a. $(-4)^2$

22. a. $(-5)^2$

23. a. $(-5)^3$

24. a. $(-4)^3$

25. a. $(-2)^4$

26. a. $(-1)^4$

b. -4^2

b. -5^2

b. -5^3

b. -4^3

b. -2^4

b. -1^4

Complete the following tables. Remember, if $x = -5$, then $x^2 = (-5)^2 = 25$. [Example 11]

27.

Number x	Square x^2
-3	
-2	
-1	
0	
1	
2	
3	

28.

Number x	Cube x^3
-3	
-2	
-1	
0	
1	
2	
3	

29.

First Number x	Second Number y	Their Product xy
6	2	
6	1	
6	0	
6	-1	
6	-2	

30.

First Number a	Second Number b	Their Product ab
-5	3	
-5	2	
-5	1	
-5	0	
-5	-1	
-5	-2	
-5	-3	

B Use the rule for order of operations along with the rules for addition, subtraction, and multiplication to simplify each of the following expressions. [Examples 12–16]

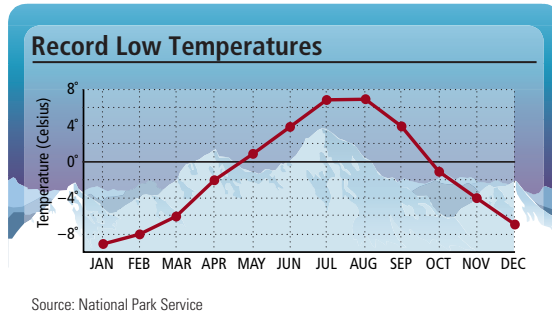
31. $4(-3 + 2)$ 32. $7(-6 + 3)$ 33. $-10(-2 - 3)$ 34. $-5(-6 - 2)$
35. $-3 + 2(5 - 3)$ 36. $-7 + 3(6 - 2)$ 37. $-7 + 2[-5 - 9]$ 38. $-8 + 3[-4 - 1]$
39. $2(-5) + 3(-4)$ 40. $6(-1) + 2(-7)$ 41. $3(-2)4 + 3(-2)$ 42. $2(-1)(-3) + 4(-6)$
43. $(8 - 3)(2 - 7)$ 44. $(9 - 3)(2 - 6)$ 45. $(2 - 5)(3 - 6)$ 46. $(3 - 7)(2 - 8)$
47. $3(5 - 8) + 4(6 - 7)$ 48. $2(3 - 7) + 3(5 - 6)$ 49. $-2(8 - 10) + 3(4 - 9)$ 50. $-3(6 - 9) + 2(3 - 8)$
51. $-3(4 - 7) - 2(-3 - 2)$ 52. $-5(-2 - 8) - 4(6 - 10)$ 53. $3(-2)(6 - 7)$ 54. $4(-3)(2 - 5)$
55. Find the product of -3 , -2 , and -1 . 56. Find the product of -7 , -1 , and 0 .
57. What number do you multiply by -3 to get 12 ? 58. What number do you multiply by -7 to get -21 ?
59. Subtract -3 from the product of -5 and 4 . 60. Subtract 5 from the product of -8 and 1 .

Work Problems 61–68 mentally, without pencil and paper or a calculator.

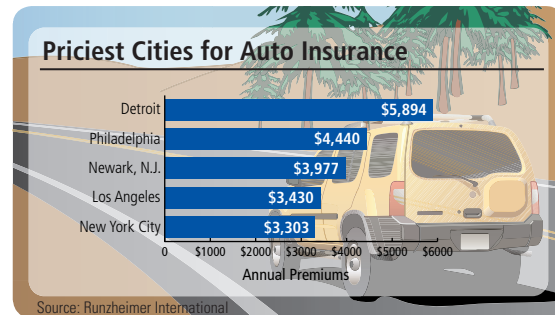
61. The product $-32(-522)$ is closest to which of the following numbers?
 a. 15,000 b. -500 c. $-1,500$ d. $-15,000$
62. The product $32(-522)$ is closest to which of the following numbers?
 a. 15,000 b. -500 c. $-1,500$ d. $-15,000$
63. The product $-47(470)$ is closest to which of the following numbers?
 a. 25,000 b. 420 c. $-2,500$ d. $-25,000$
64. The product $-47(-470)$ is closest to which of the following numbers?
 a. 25,000 b. 420 c. $-2,500$ d. $-25,000$
65. The product $-222(-987)$ is closest to which of the following numbers?
 a. 200,000 b. 800 c. -800 d. $-1,200$
66. The sum $-222 + (-987)$ is closest to which of the following numbers?
 a. 200,000 b. 800 c. -800 d. $-1,200$
67. The difference $-222 - (-987)$ is closest to which of the following numbers?
 a. 200,000 b. 800 c. -800 d. $-1,200$
68. The difference $-222 - 987$ is closest to which of the following numbers?
 a. 200,000 b. 800 c. -800 d. $-1,200$

■ Applying the Concepts

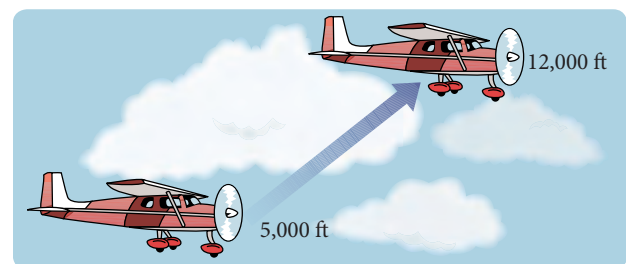
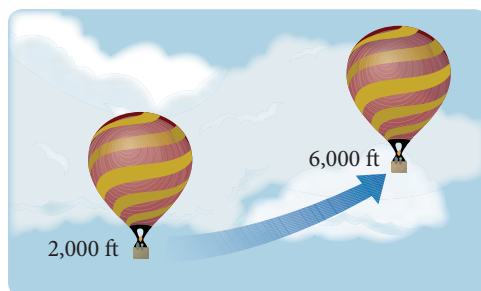
69. The chart shows the record low temperatures for Grand Canyon National Park, by month. Write the record low temperature for March.



70. The chart shows the cities with the highest annual insurance rates.



71. **Temperature Change** A hot-air balloon is rising to its cruising altitude. Suppose the air temperature around the balloon drops 4 degrees each time the balloon rises 1,000 feet. What is the net change in air temperature around the balloon as it rises from 2,000 feet to 6,000 feet?
72. **Temperature Change** A small airplane is rising to its cruising altitude. Suppose the air temperature around the plane drops 4 degrees each time the plane increases its altitude by 1,000 feet. What is the net change in air temperature around the plane as it rises from 5,000 feet to 12,000 feet?



73. **Expense Account** A business woman has a travel expense account of \$1,000. If she spends \$75 a week for 8 weeks what will the balance of her expense account be at the end of this time.
74. **Gas Prices** Two local gas stations offer different prices for a gallon of regular gasoline. The Exxon Mobil station is currently selling their gas at \$3.99 per gallon. The Getty station is currently selling their gas for \$3.85 per gallon. Represent the net savings to you on a purchase of 15 gallons of regular gas if you buy gas from the Getty gas station.

Getting Ready for the Next Section

Perform the indicated operations.

75. $35 \div 5$

76. $32 \div 4$

77. $\frac{20}{4}$

78. $\frac{30}{5}$

79. $12 - 17$

80. $7 - 11$

81. $(6 \cdot 3) \div 2$

82. $(8 \cdot 5) \div 4$

83. $80 \div 10 \div 2$

84. $80 \div 2 \div 10$

85. $15 + 5(4) \div 10$

86. $[20 + 6(2)] \div (11 - 7)$

87. $4(10^2) + 20 \div 4$

88. $3(4^2) + 10 \div 5$

Maintaining Your Skills

Write each of the following statements in symbols.

89. The quotient of 12 and 6

90. The quotient of x and 5

Rewrite each of the following multiplication problems as an equivalent division problem.

91. $2(3) = 6$

92. $5 \cdot 4 = 20$

Rewrite each of the following division problems as an equivalent multiplication problem.

93. $10 \div 5 = 2$

94. $\frac{63}{9} = 7$

Divide.

95. $4,984 \div 56$

96. $4,994 \div 56$

Extending the Concepts

In Chapter 1 we defined a geometric sequence to be a sequence of numbers in which each number, after the first number, is obtained from the previous number by multiplying by the same amount each time.

Find the next two terms in each of the following geometric sequences.

97. 2, -6, 18, ...

98. 1, -4, 16, ...

99. -2, 6, -18, ...

100. -1, 4, -16, ...

Simplify each of the following according to the rule for order of operations.

101. $5(-2)^2 - 3(-2)^3$

102. $8(-1)^3 - 6(-3)^2$

103. $7 - 3(4 - 8)$

104. $6 - 2(9 - 11)$

105. $5 - 2[3 - 4(6 - 8)]$

106. $7 - 4[6 - 3(2 - 9)]$

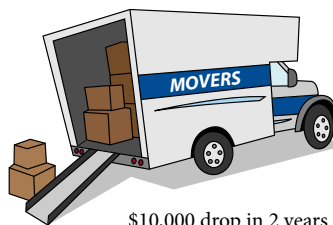
Division with Negative Numbers

9.5

Introduction . . .

Suppose four friends invest equal amounts of money in a moving truck to start a small business. After 2 years the truck has dropped \$10,000 in value. If we represent this change with the number $-\$10,000$, then the loss to each of the four partners can be found with division:

$$(-\$10,000) \div 4 = -\$2,500$$



From this example it seems reasonable to assume that a negative number divided by a positive number will give a negative answer.

To cover all the possible situations we can encounter with division of negative numbers, we use the relationship between multiplication and division. If we let n be the answer to the problem $12 \div (-2)$, then we know that

$$12 \div (-2) = n \quad \text{and} \quad -2(n) = 12$$

From our work with multiplication, we know that n must be -6 in the multiplication problem above, because -6 is the only number we can multiply -2 by to get 12. Because of the relationship between the two problems above, it must be true that 12 divided by -2 is -6 .

The following pairs of problems show more quotients of positive and negative numbers. In each case the multiplication problem on the right justifies the answer to the division problem on the left.

$$\begin{array}{lll} 6 \div 3 = 2 & \text{because} & 3(2) = 6 \\ 6 \div (-3) = -2 & \text{because} & -3(-2) = 6 \\ -6 \div 3 = -2 & \text{because} & 3(-2) = -6 \\ -6 \div (-3) = 2 & \text{because} & -3(2) = -6 \end{array}$$

The results given above can be used to write the rule for division with negative numbers.

A Division

Rule

To divide two numbers, we divide their absolute values.

1. The answer is *positive* if both the original numbers have the same sign. That is, the quotient of two numbers with the same signs is positive.
2. The answer is *negative* if the original two numbers have different signs. That is, the quotient of two numbers with different signs is negative.

EXAMPLE 1

$$-12 \div 4 = -3 \quad \text{Unlike signs, negative answer}$$

EXAMPLE 2

$$12 \div (-4) = -3 \quad \text{Unlike signs; negative answer}$$

EXAMPLE 3

$$-12 \div (-4) = 3 \quad \text{Like signs; positive answer}$$

EXAMPLE 4

$$\frac{12}{-4} = -3 \quad \text{Unlike signs; negative answer}$$

EXAMPLE 5

$$\frac{-20}{-4} = 5 \quad \text{Like signs; positive answer}$$

Objectives

- A Divide positive and negative numbers.
- B Apply the rule for order of operations to expressions that contain positive and negative numbers.

PRACTICE PROBLEMS

Divide.

1. $-8 \div 2$
2. $8 \div (-2)$
3. $-8 \div (-2)$
4. $\frac{20}{-5}$
5. $\frac{-30}{-5}$

Answers

1. -4
2. -4
3. 4
4. -4
5. 6

From the examples we have done so far, we can make the following generalization about quotients that contain negative signs:

If a and b are numbers and b is not equal to 0, then

$$-\frac{a}{b} = \frac{a}{-b} = \frac{-a}{b} \quad \text{and} \quad \frac{-a}{-b} = \frac{a}{b}$$

B Order of Operations

The last examples in this section involve more than one operation. We use the rules developed previously in this chapter and the rule for order of operations to simplify each.

6. Simplify: $\frac{8(-5)}{-4}$

7. Simplify: $\frac{-20 + 6(-2)}{7 - 11}$

8. Simplify: $-3(4^2) + 10 \div (-5)$

9. Simplify: $-80 \div 2 \div 10$

EXAMPLE 6

Simplify: $\frac{6(-3)}{-2}$

SOLUTION We begin by multiplying 6 and -3 :

$$\begin{aligned} \frac{6(-3)}{-2} &= \frac{-18}{-2} && \text{Multiplication; } 6(-3) = -18 \\ &= 9 && \text{Like signs; positive answer} \end{aligned}$$

EXAMPLE 7

Simplify: $\frac{-15 + 5(-4)}{12 - 17}$

SOLUTION Simplifying above and below the fraction bar, we have

$$\frac{-15 + 5(-4)}{12 - 17} = \frac{-15 + (-20)}{-5} = \frac{-35}{-5} = 7$$

EXAMPLE 8

Simplify: $-4(10^2) + 20 \div (-4)$

SOLUTION Applying the rule for order of operations, we have

$$\begin{aligned} -4(10^2) + 20 \div (-4) &= -4(100) + 20 \div (-4) && \text{Exponents first} \\ &= -400 + (-5) && \text{Multiply and divide} \\ &= -405 && \text{Add} \end{aligned}$$

EXAMPLE 9

Simplify: $-80 \div 10 \div 2$

SOLUTION In a situation like this, the rule for order of operations states that we are to divide left to right.

$$\begin{aligned} -80 \div 10 \div 2 &= -8 \div 2 && \text{Divide } -80 \text{ by } 10 \\ &= -4 \end{aligned}$$

Getting Ready for Class

After reading through the preceding section, respond in your own words and in complete sentences.

- Write a multiplication problem that is equivalent to the division problem $-12 \div 4 = -3$.
- Write a multiplication problem that is equivalent to the division problem $-12 \div (-4) = 3$.
- If two numbers have the same sign, then their quotient will have what sign?
- Dividing a negative number by 0 always results in what kind of expression?

Answers

6. 10 7. 8 8. -50 9. -4

Problem Set 9.5

A Find each of the following quotients. (Divide.) [Examples 1–5]

1. $-15 \div 5$

2. $15 \div (-3)$

3. $20 \div (-4)$

4. $-20 \div 4$

5. $-30 \div (-10)$

6. $-50 \div (-25)$

7. $\frac{-14}{-7}$

8. $\frac{-18}{-6}$

9. $\frac{12}{-3}$

10. $\frac{12}{-4}$

11. $-22 \div 11$

12. $-35 \div 7$

13. $\frac{0}{-3}$

14. $\frac{0}{-5}$

15. $125 \div (-25)$

16. $-144 \div (-9)$

Complete the following tables.

17.

First Number a	Second Number b	The Quotient of a and b $\frac{a}{b}$
100	-5	
100	-10	
100	-25	
100	-50	

18.

First Number a	Second Number b	The Quotient of a and b $\frac{a}{b}$
24	-4	
24	-3	
24	-2	
24	-1	

19.

First Number a	Second Number b	The Quotient of a and b $\frac{a}{b}$
-100	-5	
-100	5	
100	-5	
100	5	

20.

First Number a	Second Number b	The Quotient of a and b $\frac{a}{b}$
-24	-2	
-24	-4	
-24	-6	
-24	-8	

21. Find the quotient of -25 and 5 .

22. Find the quotient of -38 and -19 .

23. What number do you divide by -5 to get -7 ?

24. What number do you divide by 6 to get -7 ?

25. Subtract -3 from the quotient of 27 and 9 .

26. Subtract -7 from the quotient of -72 and -9 .

B Use any of the rules developed in this chapter and the rule for order of operations to simplify each of the following expressions as much as possible. [Examples 6–9]

27. $\frac{4(-7)}{-28}$

28. $\frac{6(-3)}{-18}$

29. $\frac{-3(-10)}{-5}$

30. $\frac{-4(-12)}{-6}$

31. $\frac{2(-3)}{6-3}$

32. $\frac{2(-3)}{3-6}$

33. $\frac{4-8}{8-4}$

34. $\frac{9-5}{5-9}$

35. $\frac{2(-3)+10}{-4}$

36. $\frac{7(-2)-6}{-10}$

37. $\frac{2+3(-6)}{4-12}$

38. $\frac{3+9(-1)}{5-7}$

39. $\frac{6(-7)+3(-2)}{20-4}$

40. $\frac{9(-8)+5(-1)}{12-1}$

41. $\frac{3(-7)(-4)}{6(-2)}$

42. $\frac{-2(4)(-8)}{(-2)(-2)}$

43. $(-5)^2 + 20 \div 4$

44. $6^2 + 36 \div 9$

45. $100 \div (-5)^2$

46. $400 \div (-4)^2$

47. $-100 \div 10 \div 2$

48. $-500 \div 50 \div 10$

49. $-100 \div (10 \div 2)$

50. $-500 \div (50 \div 10)$

51. $(-100 \div 10) \div 2$

52. $(-500 \div 50) \div 10$

Estimating

Work Problems 53–60 mentally, without pencil and paper or a calculator.

53. Is $397 \div (-401)$ closer to 1 or -1 ?

54. Is $-751 \div (-749)$ closer to 1 or -1 ?

55. The quotient $-121 \div 27$ is closest to which of the following numbers?

- a. -150 b. -100 c. -4 d. 6

56. The quotient $1,000 \div (-337)$ is closest to which of the following numbers?

- a. 663 b. -3 c. -30 d. -663

57. Which number is closest to the sum $-151 + (-49)$?

- a. -200 b. -100 c. 3 d. $7,500$

58. Which number is closest to $-151 - (-49)$?

- a. -200 b. -100 c. 3 d. $7,500$

59. Which number is closest to the product $-151(-49)$?

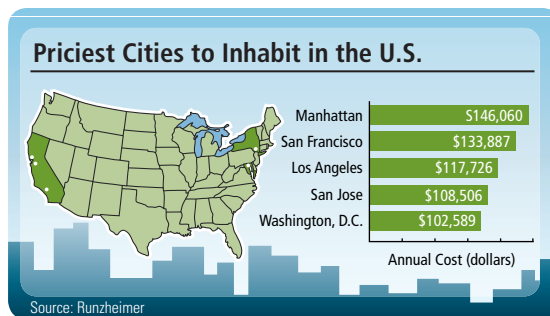
- a. -200 b. -100 c. 3 d. $7,500$

60. Which number is closest to the quotient $-151 \div (-49)$?

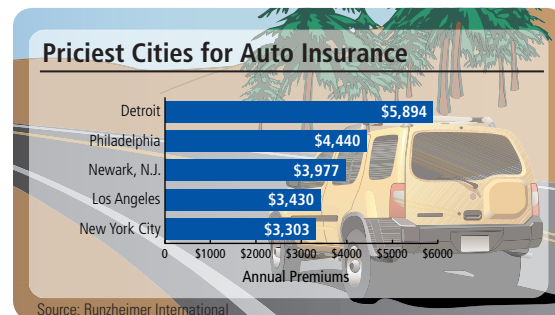
- a. -200 b. -100 c. 3 d. $7,500$

■ Applying the Concepts

61. The chart shows the most expensive cities to live in. Expenses can also be written as negative numbers. Find the monthly cost to live in Los Angeles. Use negative numbers.

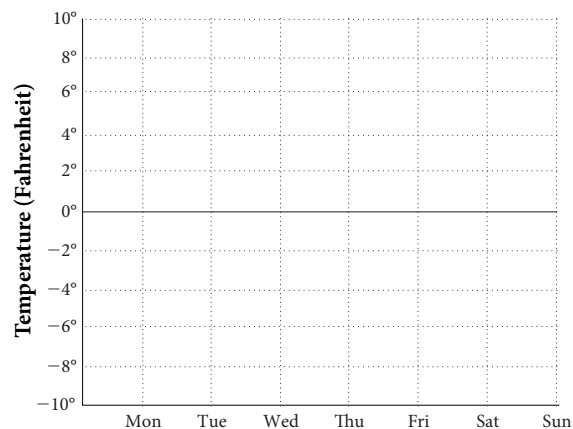


62. The chart shows the average annual premiums of the cities with the most expensive auto insurance. Because insurance is an expense, it can be written as a negative number. What is the monthly cost of insurance in New York City? Use negative numbers and round to the nearest cent.



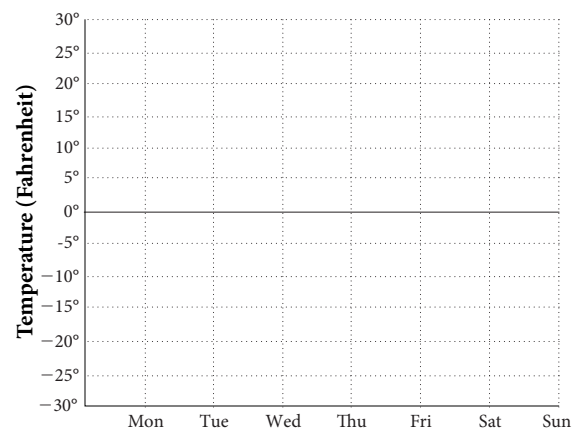
63. **Temperature Line Graph** The table below gives the low temperature for each day of one week in White Bear Lake, Minnesota. Use the diagram in the figure to draw a line graph of the information in the table.

LOW TEMPERATURES IN WHITE BEAR LAKE, MINNESOTA	
Day	Temperature
Monday	10 °F
Tuesday	8 °F
Wednesday	-5 °F
Thursday	-3 °F
Friday	-8 °F
Saturday	5 °F
Sunday	7 °F



64. **Temperature Line Graph** The table below gives the low temperature for each day of one week in Fairbanks, Alaska. Use the diagram in the figure to draw a line graph of the information in the table.

LOW TEMPERATURES IN FAIRBANKS, ALASKA	
Day	Temperature
Monday	-26 °F
Tuesday	-5 °F
Wednesday	9 °F
Thursday	12 °F
Friday	3 °F
Saturday	-15 °F
Sunday	-20 °F



■ Getting Ready for the Next Section

The problems below review some of the properties of addition and multiplication we covered in Chapter 1.

Rewrite each expression using the commutative property of addition or multiplication.

65. $3 + x$

66. $4y$

Rewrite each expression using the associative property of addition or multiplication.

67. $5 + (7 + a)$

68. $(x + 4) + 6$

69. $3(4y)$

70. $(3y)8$

Apply the distributive property to each expression.

71. $5(3 + 7)$

72. $8(4 + 2)$

Simplify.

73. 6^2

74. 12^2

75. 4^3

76. 5^2

77. $2(100) + 2(75)$

78. $2(100) + 2(53)$

79. $100(75)$

80. $100(53)$

■ Maintaining Your Skills

The problems below review addition, subtraction, multiplication, and division of positive and negative numbers, as covered in this chapter.

Perform the indicated operations.

81. $8 + (-4)$

82. $-8 + 4$

83. $-8 + (-4)$

84. $-8 - 4$

85. $8 - (-4)$

86. $-8 - (-4)$

87. $8(-4)$

88. $-8(4)$

89. $-8(-4)$

90. $8 \div (-4)$

91. $-8 \div 4$

92. $-8 \div (-4)$

■ Extending the Concepts

Find the next term in each sequence below.

93. $32, -16, 8, \dots$

94. $243, -81, 27, \dots$

95. $-32, 16, -8, \dots$

96. $-243, 81, -27, \dots$

Simplify each of the following expressions.

97. $\frac{6 - 3(2 - 11)}{6 - 3(2 + 11)}$

98. $\frac{8 + 4(3 - 5)}{8 - 4(3 + 5)}$

99. $\frac{6 - (3 - 4) - 3}{1 - 2 - 3}$

100. $\frac{7 - (3 - 6) - 4}{-1 - 2 - 3}$

Simplifying Algebraic Expressions

9.6

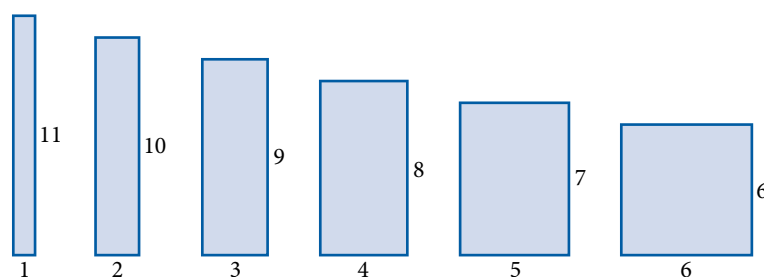
Introduction . . .

The woodcut shown here depicts Queen Dido of Carthage around 900 B.C., having an ox hide cut into small strips that will be tied together to make a long rope. The rope will be used to enclose her territory. The question is: what shape will enclose the largest territory? This has become known as the Queen Dido problem.



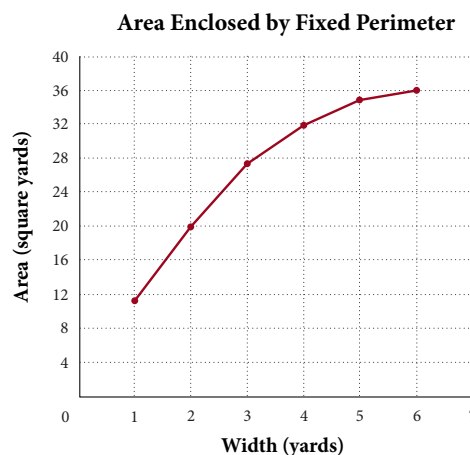
To translate the problem into something we are more familiar with, suppose we have 24 yards of fencing that we are to use to build a rectangular dog run. If we want the dog run to have the largest area possible then we want the rectangle, with perimeter 24 yards, that encloses the largest area. The diagram below shows six dog runs, each of which has a perimeter of 24 yards. Notice how the length decreases as the width increases.

Dog Runs with Perimeter = 24 yards



Since area is length times width, we can build a table and a line graph that show how the area changes as we change the width of the dog run.

AREA ENCLOSED BY RECTANGLE OF PERIMETER 24 YARDS	
Width (Yards)	Area (Square Yards)
1	11
2	20
3	27
4	32
5	35
6	36



Objectives

- A** Simplify expressions by using the associative property.
- B** Apply the distributive property to expressions containing numbers and variables.
- C** Use the distributive property to combine similar terms.
- D** Use the formulas for area and perimeter of squares and rectangles.



An algebraic expression does not contain an equal sign.

PRACTICE PROBLEMS

Multiply.

1. $5(7a)$

2. $-3(9x)$

3. $5(-8y)$

Simplify.

4. $6 + (9 + x)$

5. $(3x + 7) + 4$

Apply the distributive property.

6. $6(x + 4)$

Answers

1. $35a$ 2. $-27x$ 3. $-40y$
 4. $15 + x$ 5. $3x + 11$ 6. $6x + 24$

Chapter 9 Introduction to Algebra

In this section we want to simplify expressions containing variables—that is, algebraic expressions. An algebraic expression is a combination of constants and variables joined by arithmetic operations such as addition, subtraction, multiplication and division.

A Using the Associative Property

To begin let's review how we use the associative properties for addition and multiplication to simplify expressions.

Consider the expression $4(5x)$. We can apply the associative property of multiplication to this expression to change the grouping so that the 4 and the 5 are grouped together, instead of the 5 and the x . Here's how it looks:

$$\begin{aligned} 4(5x) &= (4 \cdot 5)x && \text{Associative property} \\ &= 20x && \text{Multiplication: } 4 \cdot 5 = 20 \end{aligned}$$

We have simplified the expression to $20x$, which in most cases in algebra will be easier to work with than the original expression.

Here are some more examples.

EXAMPLE 1

$$\begin{aligned} 7(3a) &= (7 \cdot 3)a && \text{Associative property} \\ &= 21a && \text{7 times 3 is 21} \end{aligned}$$

EXAMPLE 2

$$\begin{aligned} -2(5x) &= (-2 \cdot 5)x && \text{Associative property} \\ &= -10x && \text{The product of } -2 \text{ and } 5 \text{ is } -10 \end{aligned}$$

EXAMPLE 3

$$\begin{aligned} 3(-4y) &= [3(-4)]y && \text{Associative property} \\ &= -12y && \text{3 times } -4 \text{ is } -12 \end{aligned}$$

We can use the associative property of addition to simplify expressions also.

EXAMPLE 4

$$\begin{aligned} 3 + (8 + x) &= (3 + 8) + x && \text{Associative property} \\ &= 11 + x && \text{The sum of 3 and 8 is 11} \end{aligned}$$

EXAMPLE 5

$$\begin{aligned} (2x + 5) + 10 &= 2x + (5 + 10) && \text{Associative property} \\ &= 2x + 15 && \text{Addition} \end{aligned}$$

B Using the Distributive Property

In Chapter 1 we introduced the distributive property. In symbols it looks like this:

$$a(b + c) = ab + ac$$

Because subtraction is defined as addition of the opposite, the distributive property holds for subtraction as well as addition. That is,

$$a(b - c) = ab - ac$$

We say that multiplication distributes over addition and subtraction. Here are some examples that review how the distributive property is applied to expressions that contain variables.

EXAMPLE 6

$$\begin{aligned} 4(x + 5) &= 4(x) + 4(5) && \text{Distributive property} \\ &= 4x + 20 && \text{Multiplication} \end{aligned}$$

EXAMPLE 7

$$\begin{aligned} 2(a - 3) &= 2(a) - 2(3) && \text{Distributive property} \\ &= 2a - 6 && \text{Multiplication} \end{aligned}$$

In Examples 1–3 we simplified expressions such as $4(5x)$ by using the associative property. Here are some examples that use a combination of the associative property and the distributive property.

EXAMPLE 8

$$\begin{aligned} 4(5x + 3) &= 4(5x) + 4(3) && \text{Distributive property} \\ &= (4 \cdot 5)x + 4(3) && \text{Associative property} \\ &= 20x + 12 && \text{Multiplication} \end{aligned}$$

EXAMPLE 9

$$\begin{aligned} 7(3a - 6) &= 7(3a) - 7(6) && \text{Distributive property} \\ &= 21a - 42 && \text{Associative property and} \\ &&& \text{multiplication} \end{aligned}$$

EXAMPLE 10

$$\begin{aligned} 5(2x + 3y) &= 5(2x) + 5(3y) && \text{Distributive property} \\ &= 10x + 15y && \text{Associative property and} \\ &&& \text{multiplication} \end{aligned}$$

C Similar Terms

We can also use the distributive property to simplify expressions like $4x + 3x$. Because multiplication is a commutative operation, we can also rewrite the distributive property like this:

$$b \cdot a + c \cdot a = (b + c)a$$

Applying the distributive property in this form to the expression $4x + 3x$, we have

$$\begin{aligned} 4x + 3x &= (4 + 3)x && \text{Distributive property} \\ &= 7x && \text{Addition} \end{aligned}$$

Expressions like $4x$ and $3x$ are called *similar terms* because the variable parts are the same. Some other examples of similar terms are $5y$ and $-6y$ and the terms $7a$, $-13a$, and $\frac{3}{4}a$. To simplify an algebraic expression (an expression that involves both numbers and variables), we combine similar terms by applying the distributive property. Table 1 shows several pairs of similar terms and how they can be combined using the distributive property.

TABLE 1

Original Expression		Apply Distributive Property		Simplified Expression
$4x + 3x$	=	$(4 + 3)x$	=	$7x$
$7a + a$	=	$(7 + 1)a$	=	$8a$
$-5x + 7x$	=	$(-5 + 7)x$	=	$2x$
$8y - y$	=	$(8 - 1)y$	=	$7y$
$-4a - 2a$	=	$(-4 - 2)a$	=	$-6a$
$3x - 7x$	=	$(3 - 7)x$	=	$-4x$

As you can see from the table, the distributive property can be applied to any combination of positive and negative terms so long as they are similar terms.

7. $7(a - 5)$

8. $6(4x + 5)$

9. $3(8a - 4)$

10. $8(3x + 4y)$

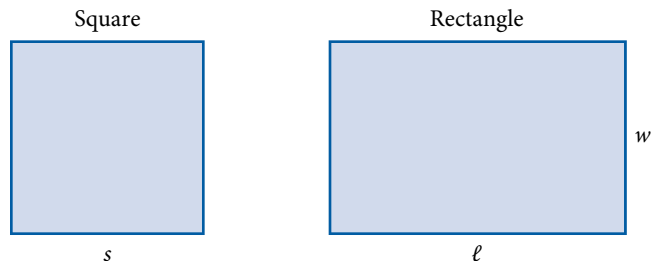
Answers

7. $7a - 35$ 8. $24x + 30$

9. $24a - 12$ 10. $24x + 32y$

D Algebraic Expressions Representing Area and Perimeter

Below are a square with a side of length s and a rectangle with a length of l and a width of w . The table that follows the figures gives the formulas for the area and perimeter of each.



	Square	Rectangle
Area A	s^2	lw
Perimeter P	$4s$	$2l + 2w$

11. Find the area and perimeter of a square if its side is 12 feet long.

EXAMPLE 11

Find the area and perimeter of a square with a side 6 inches long.

SOLUTION Substituting 6 for s in the formulas for area and perimeter of a square, we have

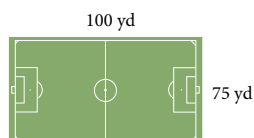
$$\text{Area} = A = s^2 = 6^2 = 36 \text{ square inches}$$

$$\text{Perimeter} = P = 4s = 4(6) = 24 \text{ inches}$$

12. A football field is 100 yards long and approximately 53 yards wide. Find the area and perimeter.

EXAMPLE 12

A soccer field is 100 yards long and 75 yards wide. Find the area and perimeter.



SOLUTION Substituting 100 for l and 75 for w in the formulas for area and perimeter of a rectangle, we have

$$\text{Area} = A = lw = 100(75) = 7,500 \text{ square yards}$$

$$\text{Perimeter} = P = 2l + 2w = 2(100) + 2(75) = 200 + 150 = 350 \text{ yards}$$

Answers

11. $A = 144$ sq ft, $P = 48$ ft
 12. $A = 5,300$ sq yd, $P = 306$ yd

Getting Ready for Class

After reading through the preceding section, respond in your own words and in complete sentences.

- Without actually multiplying, how do you apply the associative property to the expression $4(5x)$?
- What are similar terms?
- Explain why $2a - a$ is a , rather than 1.
- Can two rectangles with the same perimeter have different areas? Explain your answer.

Problem Set 9.6

A Apply the associative property to each expression, and then simplify the result. [Examples 1–5]

1. $5(4a)$

2. $8(9a)$

3. $6(8a)$

4. $3(2a)$

5. $-6(3x)$

6. $-2(7x)$

7. $-3(9x)$

8. $-4(6x)$

9. $5(-2y)$

10. $3(-8y)$

11. $6(-10y)$

12. $5(-5y)$

13. $2 + (3 + x)$

14. $9 + (6 + x)$

15. $5 + (8 + x)$

16. $3 + (9 + x)$

17. $4 + (6 + y)$

18. $2 + (8 + y)$

19. $7 + (1 + y)$

20. $4 + (1 + y)$

21. $(5x + 2) + 4$

22. $(8x + 3) + 10$

23. $(6y + 4) + 3$

24. $(3y + 7) + 8$

25. $(12a + 2) + 19$

26. $(6a + 3) + 14$

27. $(7x + 8) + 20$

28. $(14x + 3) + 15$

B Apply the distributive property to each expression, and then simplify. [Examples 6–10]

29. $7(x + 5)$

30. $8(x + 3)$

31. $6(a - 7)$

32. $4(a - 9)$

33. $2(x - y)$

34. $5(x - a)$

35. $4(5 + x)$

36. $8(3 + x)$

37. $3(2x + 5)$

38. $8(5x + 4)$

39. $6(3a + 1)$

40. $4(8a + 3)$

41. $2(6x - 3y)$

42. $7(5x - y)$

43. $5(7 - 4y)$

44. $8(6 - 3y)$

C Use the distributive property to combine similar terms. [Table 1]

45. $3x + 5x$

46. $7x + 8x$

47. $3a + a$

48. $8a + a$

49. $-2x + 6x$

50. $-3x + 9x$

51. $6y - y$

52. $3y - y$

53. $-8a - 2a$

54. $-7a - 5a$

55. $4x - 9x$

56. $5x - 11x$

■ Applying the Concepts

57. A farmer is replacing several turbines on his windmills. He plans to replace x turbines, and he is going to get \$300 off each turbine he buys. Also, he'll get a \$250 rebate on his entire purchase. Write an expression that describes this situation and then simplify.

58. A homeowner is replacing 4 solar modules. She is going to receive a discount of some amount x off each module and a \$350 mail-in rebate. Write an expression that describes this situation and then simplify.

Solar Versus Wind Energy Costs

Equipment Cost:	
Modules	\$6200
Fixed Rack	\$1570
Charge Controller	\$971
Cable	\$440
TOTAL	\$9181

Equipment Cost:	
Turbine	\$3300
Tower	\$3000
Cable	\$715
TOTAL	\$7015

Source: a Limited 2006

D Area and Perimeter Find the area and perimeter of each square if the length of each side is as given below. [Example 11]

59. $s = 6$ feet

60. $s = 14$ yards

61. $s = 9$ inches

62. $s = 15$ meters

D Area and Perimeter Find the area and perimeter for a rectangle if the length and width are as given below. [Example 12]

63. $l = 20$ inches, $w = 10$ inches

64. $l = 40$ yards, $w = 20$ yards

65. $l = 25$ feet, $w = 12$ feet

66. $l = 210$ meters, $w = 120$ meters

Temperature Scales In the metric system, the scale we use to measure temperature is the Celsius scale. On this scale water boils at 100 degrees and freezes at 0 degrees. When we write 100 degrees measured on the Celsius scale, we use the notation 100°C , which is read "100 degrees Celsius." If we know the temperature in degrees Fahrenheit, we can convert to degrees Celsius by using the formula

$$C = \frac{5(F - 32)}{9}$$

where F is the temperature in degrees Fahrenheit. Use this formula to find the temperature in degrees Celsius for each of the following Fahrenheit temperatures.

67. 68°F

68. 59°F

69. 41°F

70. 23°F

71. 14°F

72. 32°F

Chapter 9 Summary

Absolute Value [9.1]

The absolute value of a number is its distance from 0 on the number line. It is the numerical part of a number. The absolute value of a number is never negative.

EXAMPLES

1. $|3| = 3$ and $|-3| = 3$

Opposites [9.1]

Two numbers are called opposites if they are the same distance from 0 on the number line but in opposite directions from 0. The opposite of a positive number is a negative number, and the opposite of a negative number is a positive number.

2. $-(5) = -5$ and $-(-5) = 5$

Addition of Positive and Negative Numbers [9.2]

1. To add two numbers with *the same sign*: Simply add absolute values and use the common sign. If both numbers are positive, the answer is positive. If both numbers are negative, the answer is negative.
2. To add two numbers with *different signs*: Subtract the smaller absolute value from the larger absolute value. The answer has the same sign as the number with the larger absolute value.

3. $3 + 5 = 8$
 $-3 + (-5) = -8$

$$5 + (-3) = 2$$
$$-5 + 3 = -2$$

Subtraction [9.3]

Subtracting a number is equivalent to adding its opposite. If a and b represent numbers, then subtraction is defined in terms of addition as follows:

$$a - b = a + (-b)$$

↑ ↑
Subtraction Addition of the opposite

4. $3 - 5 = 3 + (-5) = -2$
 $-3 - 5 = -3 + (-5) = -8$
 $3 - (-5) = 3 + 5 = 8$
 $-3 - (-5) = -3 + 5 = 2$

Multiplication with Positive and Negative Numbers [9.4]

To multiply two numbers, multiply their absolute values.

1. The answer is *positive* if both numbers have the same sign.
2. The answer is *negative* if the numbers have different signs.

5. $3(5) = 15$
 $3(-5) = -15$
 $-3(5) = -15$
 $-3(-5) = 15$

Division [9.5]

The rule for assigning the correct sign to the answer in a division problem is the same as the rule for multiplication. That is, like signs give a positive answer, and unlike signs give a negative answer.

6. $\frac{12}{4} = 3$
 $\frac{-12}{4} = -3$
 $\frac{12}{-4} = -3$
 $\frac{-12}{-4} = 3$

Simplifying Expressions [9.6] 

7. Simplify.

a. $-2(5x) = (-2 \cdot 5)x = -10x$

b. $4(2a - 8) = 4(2a) - 4(8)$
 $= 8a - 32$

We simplify algebraic expressions by applying the commutative, associative, and distributive properties.

Combining Similar Terms [9.6] 

8. Combine similar terms.

a. $5x + 7x = (5 + 7)x = 12x$

b. $2y - 8y = (2 - 8)y = -6y$

We combine similar terms by applying the distributive property.

Chapter 9 Review

Give the opposite of each number. [9.1]

1. 17

2. -32

3. -4.6

4. $\frac{3}{5}$

For each pair of numbers, name the smaller number. [9.1]

5. 6; -6

6. -8; -3

7. |-3|; 2

8. |-4|; |6|

Simplify each expression. [9.1]

9. -(-4)

10. -|-4|

11. |-6|

12. |19|

Perform the indicated operations. [9.2, 9.3, 9.4, 9.5]

13. $5 + (-7)$

14. $-3 + 8$

15. $-345 + (-626)$

16. $-23 + 58$

17. $7 - 9 - 4 - 6$

18. $-7 - 5 - 2 - 3$

19. $4 - (-3)$

20. $30 - 42$

21. $5(-4)$

22. $-4(-3)$

23. $(56)(-31)$

24. $(20)(-4)$

25. $\frac{48}{-16}$

26. $\frac{-20}{5}$

27. $\frac{-14}{-7}$

28. $\frac{-25}{5}$

Simplify the following expressions as much as possible. [9.2, 9.3, 9.4, 9.5]

29. $(-6)^2$

30. $\left(-\frac{3}{4}\right)^2$

31. $(-2)^3$

32. $(-0.2)^4$

33. $7 + 4(6 - 9)$

34. $(-3)(-4) + 2(-5)$

35. $(7 - 3)(7 - 9)$

36. $3(-6) + 8(2 - 5)$

37. $\frac{8 - 4}{-8 + 4}$

38. $\frac{-4 + 2(-5)}{6 - 4}$

39. $\frac{8(-2) + 5(-4)}{12 - 3}$

40. $\frac{-2(5) + 4(-3)}{10 - 8}$

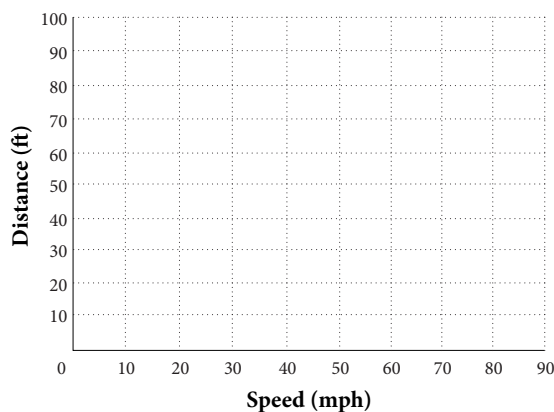
41. Give the sum of -19 and -23 . [9.2]
42. Give the sum of -78 and -51 . [9.2]
43. Find the difference of -6 and 5 . [9.3]
44. Subtract -8 from -10 . [9.3]
45. What is the product of -9 and 3 ? [9.4]
46. What is -3 times the sum of -9 and -4 ? [9.2, 9.4]
47. Divide the product of 8 and -4 by -16 . [9.4, 9.5]
48. Give the quotient of -38 and 2 . [9.5]

Indicate whether each statement is *True* or *False*. [9.2, 9.3, 9.4, 9.5]

49. $\frac{-10}{-5} = -2$ 50. $10 - (-5) = 15$ 51. $2(-3) = -3 + (-3)$ 52. $-6 - (-2) = -8$ 53. $3 - 5 = 5 - 3$

54. **Reaction Distance** The table below shows how many feet your car will travel from the time you decide you want to stop to the time it takes you to hit the brake pedal. Use the template to construct a line graph of the information in the table. [9.1]

REACTION DISTANCES	
Speed (mi/hr)	Distance (ft)
0	0
10	11
20	22
30	33
40	44
50	55
60	66
70	77
80	88



55. **Gambling** A gambler wins \$58 Saturday night and then loses \$86 on Sunday. Use positive and negative numbers to describe this situation. Then give the gambler's net loss or gain as a positive or negative number. [9.2]
56. Name two numbers that are 7 units from -8 on the number line. [9.1]
57. **Temperature** On Wednesday, the temperature reaches a high of 17° above 0 and a low of 7° below 0. What is the difference between the high and low temperatures for Wednesday? [9.3]
58. If the difference between two numbers is -3 , and one of the numbers is 5, what is the other number? [9.3]

Use the associative properties to simplify each expression. [9.6]

59. $(3x + 4) + 8$ 60. $8(3x)$ 61. $-3(7a)$ 62. $6(-5y)$

Apply the distributive property and then simplify if possible. [9.6]

63. $4(x + 3)$ 64. $2(x - 5)$ 65. $7(3y - 8)$ 66. $3(2a + 5b)$

Combine similar terms. [9.6]

67. $7x - 4x$ 68. $-8a + 10a$ 69. $5y - y$ 70. $12x + 4x$

Chapter 9 Cumulative Review

Simplify.

1. $\frac{3}{5} + \frac{2}{7}$

2. $\frac{7}{6} - \frac{5}{6}$

3. $613 - 297$

4. $\left(3\frac{1}{2} + \frac{1}{3}\right)\left(4\frac{1}{6} - \frac{2}{3}\right)$

5. $\left(\frac{2}{3}\right)^4$

6. $53(807)$

7. $\frac{5}{8} \div (-10)$

8. $6 - 3^2 + (6 - 9)$

9. Round 37.6451 to the nearest hundredth.

10. Change $4\frac{7}{8}$ to an improper fraction.

11. Write the number 38,609 in words.

12. Identify the property or properties used in the following: $5(x + 9) = 5(x) + 5(9)$

Simplify.

13. $6(3)^3 - 9(2)^2$

14. $\sqrt{\frac{36}{49}}$

15. $\frac{3}{8} - \frac{1}{4} + \frac{5}{6}$

16. $(0.2)^3 + (0.3)^2$

17. $\frac{9 - 5}{-9 + 5}$

18. $-(-6)$

Write each ratio as a fraction in lowest terms.

19. 24 seconds to 1 minute

20. $\frac{2}{3}$ to $\frac{3}{4}$

21. Change $\frac{49}{6}$ to a mixed number.

22. Write $4\frac{7}{8}$ as a decimal.

23. Change $\frac{3}{8}$ to a percent.

24. Change 76% to a fraction.

25. What is 2.5% of 40?

26. 17 is what percent of 42.5?

Make the following conversions.

27. 350 m to kilometers

28. 14 gal to liters

29. Write $\frac{14}{25}$ as a decimal.

30. 10 is 50% of what number?

31. Reduce $\frac{99}{36}$.

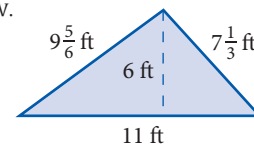
32. **Sale Price** A dress that normally sells for \$129 is on sale for 20% off the normal price. What is the sale price of the dress?

33. **Ratio** If the ratio of men to women in a self-defense class is 3 to 4, and there are 15 men in the class, how many women are in the class?

34. **Surfboard Length** A surfing company decides that a surfboard would be more efficient if its length were reduced by $3\frac{5}{8}$ inches. If the original length was 7 feet $\frac{3}{16}$ inches, what will be the new length of the board (in inches)?

35. **Average Distance** A bicyclist on a cross-country trip travels 72 miles the first day, 113 miles the second day, 108 miles the third day, and 95 miles the fourth day. What is her average distance traveled during the four days?

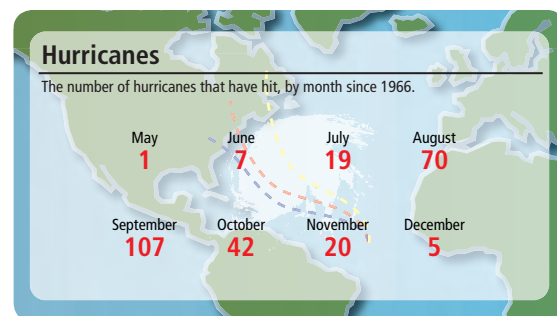
36. **Area and Perimeter** Find the area and perimeter of the triangle below.



37. **Cost of Chocolate** If white chocolate sells for \$4.32 per pound, how much will 2.5 pounds cost?

38. **Number Line** The distance between two numbers on the number line is 9. If one of the numbers is -4 , what are the two possibilities for the other number?

Use the illustration to answer Problems 39 and 40.



39. How many more hurricanes were there in September than in October?

40. What is the ratio of hurricanes in August to hurricanes in November?

Chapter 9 Test

Give the opposite of each number.

1. 14 2. $-\frac{2}{3}$

Place an inequality symbol ($<$ or $>$) between each pair of numbers so that the resulting statement is true.

3. -1 -4 4. $|-4|$ $|2|$

Simplify each expression.

5. $-(-7)$ 6. $-|-2|$

Perform the indicated operations.

7. $8 + (-17)$ 8. $-4.2 - 1.7$

9. $-\frac{2}{3} + \left(-\frac{4}{5}\right)$ 10. $-65 - (-29)$

11. $(-6)(-7)$ 12. $-\frac{1}{3}(-18)$

13. $\frac{-80}{16}$ 14. $\frac{-35}{-7}$

15. $-4.3 + 0.7$ 16. $-\frac{4}{9} \div \frac{16}{21}$

17. $-\frac{7}{3}(6)$ 18. $-\frac{42}{6}$

19. $\frac{3}{5} - \frac{9}{10}$ 20. $\left(-3\frac{1}{16}\right)\left(-\frac{8}{21}\right)$

Simplify the following expressions as much as possible.

21. $(-3)^2$ 22. $(-2)^3$

23. $(-7)(3) + (-2)(-5)$ 24. $(8 - 5)(6 - 11)$

25. $\frac{-5 + 3(-3)}{5 - 7}$ 26. $\frac{-3(2) + 5(-2)}{7 - 3}$

27. $(-4)^3 - (6 + 4)$ 28. $(-3)(8) - (-7)(-3)$

29. $3 - 2(5 - 3^2)$

30. $\frac{5}{3}(-6) - 7(-2)$

31. $\frac{-7 + 3(4)}{16 + 2(-3)}$

32. $3(5 - 9) + 4^2$

33. $(-5)^2 - 3(5 - 3)$

34. $\frac{8(-2) - 6(7 - 3)}{2(5 + 3)}$

35. Give the sum of -15 and -46 .

36. Subtract -5 from -12 .

37. What is the product of -8 and -3 ?

38. Give the quotient of 45 and -9 .

39. Two times the sum of 6 and -13 .

40. Three times the difference of 5 and 9 is increased by 7 .

41. **Gambling** A gambler loses \$100 Saturday night and wins \$65 on Sunday. Give the gambler's net loss or gain as a negative or positive number.

42. **Temperature** On Friday, the temperature reaches a high of 21° above 0 and a low of 4° below 0 . What is the difference between the high and low temperatures for Friday?

43. **National Parks** Use negative numbers to describe the difference in the number of visits from 1999 to 2003.



Chapter 9 Projects

INTRODUCTION TO ALGEBRA

GROUP PROJECT

Random Motion

Number of People 3

Time Needed 15 minutes

Equipment Coins, dice, pencil, and paper

Background Microscopic atoms and molecules move randomly. We use random movement models to help us understand their motion. Random motion also helps us understand things like the stock market and computer science.

In a random walk, an ant starts at a lamppost and takes steps of equal length along the street. We can think of the lamppost as the origin. The ant either takes a step in the negative or positive direction. Mathematicians have studied questions such as where the ant is likely to end up after taking a certain number of steps.

Procedure You will use a coin and die to simulate random motion. The ant will start at 0 on the number line. Roll the die and flip the coin. The ant will move the number of steps shown on the die. If the coin comes up heads, the ant moves in the positive direction. If the coin comes up tails, the ant moves in the negative direction. Repeat this process 10 times. Start each stage from the ending position of the previous stage. For example, if the ant ends up at -3 after Stage 1, then in Stage 2 the ant starts at -3 . Record your results in the table.

Stage	Coin	Die	Position of Ant
0	—	—	0
1			
2			
3			
4			
5			
6			
7			
8			
9			
10			

RESEARCH PROJECT

David Harold Blackwell

At age 22, David Blackwell earned his doctorate, becoming the seventh African American to earn a Ph.D. in mathematics. In high school, Blackwell did not care for algebra and trigonometry. When he took a course in analysis, he really became interested in math. Although Blackwell faced a good deal of racism during his career, he became a successful teacher, author, and mathematician. Research the life and work of Dr. Blackwell, and then present your results in an essay.



Courtesy of David Harold Blackwell

Solving Equations

10



Chapter Outline


- 10.1 The Distributive Property and Algebraic Expressions
- 10.2 The Addition Property of Equality
- 10.3 The Multiplication Property of Equality
- 10.4 Linear Equations in One Variable
- 10.5 Applications
- 10.6 Evaluating Formulas
- 10.7 Paired Data and the Rectangular Coordinate System

Introduction

Central Park in New York City was the first landscaped public park in the United States. More than 25 million people visit the park each year. Central Park is $\frac{1}{2}$ mile wide and covers an area of 1.4 square miles. A person who jogs around the perimeter of the park will cover approximately 6.6 miles. Because the park can be modeled with a rectangle, we can use these numbers to find the length of the park. In fact, solving either of the two equations below will give us the length.

$$\frac{1}{2}x = 1.4 \qquad 2x + 2 \cdot \frac{1}{2} = 6.6$$

In this chapter, we will learn how to take the numbers and relationships given in the paragraph above and translate them into equations like the ones above. Before we do that, we will learn how to solve these equations, and many others as well.



The illustration here shows the area of Central Park compared to other prominent parks in large cities.

Chapter Pretest

The pretest below contains problems that are representative of the problems you will find in the chapter.

Simplify.

1. $4a - 1 - 5a + 8$

2. $2(5y - 6) + 4y$

Solve each equation.

3. $a + 4 = -2$

4. $5y + 9 - 4y = -7 + 11$

5. $\frac{1}{5}x = 3$

6. $-2x + 9 = 11$

7. $2a + 1 = 5(a - 2) - 1$

8. $\frac{x}{3} - \frac{x}{4} = 5$

9. Find the value of $3x - 4$ when $x = -2$.

10. Is $x = 5$ a solution to the equation $6x - 28 = 1$?

11. The sum of a number and 6 is -17 . Find the number.

12. If four times a number is decreased by 7, the result is 25. Find the number.

Getting Ready for Chapter 10

The problems below review material covered previously that you need to know in order to be successful in Chapter 10. If you have any difficulty with the problems here, you need to go back and review before going on to Chapter 10.

Simplify.

1. $-2 + 7$

2. $180 - 45$

3. $-2 + (-4)$

4. $\frac{5}{8} + \frac{3}{4}$

5. $(-4)(5)$

6. $\frac{6}{-3}$

7. $\frac{3}{2}(12)$

8. $\left(-\frac{5}{4}\right)\left(-\frac{4}{5}\right)$

9. $\left(-\frac{5}{4}\right)\left(\frac{8}{15}\right)$

10. $-4(-1) + 9$

11. $\frac{1}{3}(15) + 2$

12. $\frac{5}{9}(95 - 32)$

13. $3x + 7x$


14. $-4(3x)$

15. $4(x - 5)$

16. $2\left(\frac{1}{2}x\right)$

17. Write in symbols: the sum of x and 2.

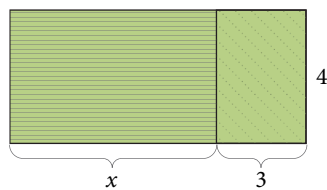
18. Find the perimeter.



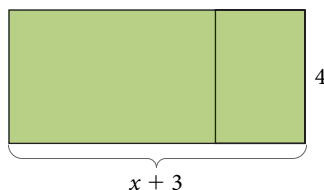
The Distributive Property and Algebraic Expressions

10.1

We recall that the distributive property from Section 1.5 can be used to find the area of a rectangle using two different methods.



$$\begin{aligned}\text{Area} &= 4(x) + 4(3) \\ &= 4x + 12\end{aligned}$$



$$\begin{aligned}\text{Area} &= 4(x + 3) \\ &= 4x + 12\end{aligned}$$

Since the areas are equal, the equation $4(x + 3) = 4(x) + 4(3)$ is a true statement.

A The Distributive Property

EXAMPLE 1

Apply the distributive property to the expression:

$$5(x + 3)$$

SOLUTION Distributing the 5 over x and 3, we have

$$\begin{aligned}5(x + 3) &= 5(x) + 5(3) && \text{Distributive property} \\ &= 5x + 15 && \text{Multiplication}\end{aligned}$$

Remember, $5x$ means “5 times x .”

The distributive property can be applied to more complicated expressions involving negative numbers.

EXAMPLE 2

Multiply: $-4(3x + 5)$

SOLUTION Multiplying both the $3x$ and the 5 by -4 , we have

$$\begin{aligned}-4(3x + 5) &= -4(3x) + (-4)5 && \text{Distributive property} \\ &= -12x + (-20) && \text{Multiplication} \\ &= -12x - 20 && \text{Definition of subtraction}\end{aligned}$$

Notice, first of all, that when we apply the distributive property here, we multiply through by -4 . It is important to include the sign with the number when we use the distributive property. Second, when we multiply -4 and $3x$, the result is $-12x$ because

$$\begin{aligned}-4(3x) &= (-4 \cdot 3)x && \text{Associative property} \\ &= -12x && \text{Multiplication}\end{aligned}$$

Objectives

- A** Apply the distributive property to an expression.
- B** Combine similar terms.
- C** Find the value of an algebraic expression.
- D** Solve applications involving complementary and supplementary angles.

PRACTICE PROBLEMS

1. Apply the distributive property to the expression $6(x + 4)$.

2. Multiply: $-3(2x + 4)$

Answers

1. $6x + 24$
2. $-6x - 12$

3. Multiply: $\frac{1}{2}(2x - 4)$

Note

We are using the word *term* in a different sense here than we did with fractions. (The terms of a fraction are the numerator and the denominator.)

4. Simplify: $6x - 2 + 3x + 8$

Answers

3. $x - 2$ 4. $9x + 6$

EXAMPLE 3

Multiply: $\frac{1}{3}(3x - 12)$

SOLUTION

$$\begin{aligned}\frac{1}{3}(3x - 12) &= \frac{1}{3}(3x) - \frac{1}{3}(12) && \text{Distributive property} \\ &= 1x - \frac{12}{3} && \text{Simplify} \\ &= x - 4 && \text{Divide}\end{aligned}$$

We can also use the distributive property to simplify expressions like $4x + 3x$. Because multiplication is a commutative operation, we can rewrite the distributive property like this:

$$b \cdot a + c \cdot a = (b + c)a$$

Applying the distributive property in this form to the expression $4x + 3x$, we have:

$$\begin{aligned}4x + 3x &= (4 + 3)x && \text{Distributive property} \\ &= 7x && \text{Addition}\end{aligned}$$

B Similar Terms

Recall that expressions like $4x$ and $3x$ are called *similar terms* because the variable parts are the same. Some other examples of similar terms are $5y$ and $-6y$, and the terms $7a$, $-13a$, $\frac{3}{4}a$. To simplify an algebraic expression (an expression that involves both numbers and variables), we combine similar terms by applying the distributive property. Table 1 reviews how we combine similar terms using the distributive property.

TABLE 1

Original Expression		Apply Distribution Property		Simplified Expression
$4x + 3x$	=	$(4 + 3)x$	=	$7x$
$7a + a$	=	$(7 + 1)a$	=	$8a$
$-5x + 7x$	=	$(-5 + 7)x$	=	$2x$
$8y - y$	=	$(8 - 1)y$	=	$7y$
$-4a - 2a$	=	$(-4 - 2)a$	=	$-6a$
$3x - 7x$	=	$(3 - 7)x$	=	$-4x$

As you can see from the table, the distributive property can be applied to any combination of positive and negative terms so long as they are similar terms.

EXAMPLE 4

Simplify: $5x - 2 + 3x + 7$

SOLUTION We begin by changing subtraction to addition of the opposite and applying the commutative property to rearrange the order of the terms. We want similar terms to be written next to each other.

$$\begin{aligned}5x - 2 + 3x + 7 &= 5x + 3x + (-2) + 7 && \text{Commutative property} \\ &= (5 + 3)x + (-2) + 7 && \text{Distributive property} \\ &= 8x + 5 && \text{Addition}\end{aligned}$$

Notice that we take the negative sign in front of the 2 with the 2 when we rearrange terms. How do we justify doing this?

EXAMPLE 5Simplify: $3(4x + 5) + 6$

SOLUTION We begin by distributing the 3 across the sum of $4x$ and 5. Then we combine similar terms.

$$\begin{aligned} 3(4x + 5) + 6 &= 12x + 15 + 6 && \text{Distributive property} \\ &= 12x + 21 && \text{Add 15 and 6} \end{aligned}$$

EXAMPLE 6Simplify: $2(3x + 1) + 4(2x - 5)$

SOLUTION Again, we apply the distributive property first; then we combine similar terms. Here is the solution showing only the essential steps:

$$\begin{aligned} 2(3x + 1) + 4(2x - 5) &= 6x + 2 + 8x - 20 && \text{Distributive property} \\ &= 14x - 18 && \text{Combine similar terms} \end{aligned}$$

C The Value of an Algebraic Expression

An expression such as $3x + 5$ will take on different values depending on what x is. If we were to let x equal 2, the expression $3x + 5$ would become 11. On the other hand, if x is 10, the same expression has a value of 35:

When $x = 2$ the expression $3x + 5$ becomes $3(2) + 5$ $= 6 + 5$ $= 11$	When $x = 10$ the expression $3x + 5$ becomes $3(10) + 5$ $= 30 + 5$ $= 35$
--	---

EXAMPLES

Find the value of each of the following expressions by replacing the variable with the given number.

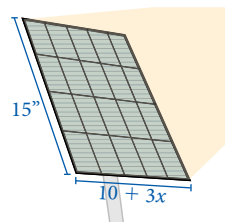
Original Expression	Value of the Variable	Value of the Expression
7. $3x - 1$	$x = 2$	$3(2) - 1 = 6 - 1 = 5$
8. $2x - 3 + 4x$	$x = -1$	$2(-1) - 3 + 4(-1) = -2 - 3 + (-4) = -9$
9. $y^2 - 6y + 9$	$y = 4$	$4^2 - 6(4) + 9 = 16 - 24 + 9 = 1$

EXAMPLE 10

Find the area of a 30-W solar panel shown here with a length of 15 inches and a width of $10 + 3x$ inches.

SOLUTION Previously we worked with area, so we know that $\text{Area} = (\text{length})(\text{width})$. Using the values for length and width, we have:

$$\begin{aligned} A &= lw \\ A &= 15(10 + 3x) && \text{length} = 15; \text{width} = 10 + 3x \\ &= 150 + 45x \text{ in}^2 && \text{Distributive property} \end{aligned}$$



5. Simplify: $2(4x + 3) + 7$

6. Simplify: $3(2x + 1) + 5(4x - 3)$

7. Find the value of $4x - 7$ when $x = 3$.

8. Find the value of $2x - 5 + 6x$ when $x = -2$.

9. Find the value of $y^2 - 10y + 25$ when $y = -2$.

10. Find the area of a 30-W solar panel with a length of 25 cm and a width of $8 + 2x$ cm.

Answers

5. $8x + 13$ 6. $26x - 12$ 7. 5

8. -21 9. 49 10. $200 + 50x \text{ cm}^2$

FACTS FROM GEOMETRY Angles

An angle is formed by two rays with the same endpoint. The common endpoint is called the *vertex* of the angle, and the rays are called the *sides* of the angle.

In Figure 1, angle θ (theta) is formed by the two rays OA and OB . The vertex of θ is O . Angle θ is also denoted as angle AOB , where the letter associated with the vertex is always the middle letter in the three letters used to denote the angle.

Degree Measure The angle formed by rotating a ray through one complete revolution about its endpoint (Figure 2) has a measure of 360 degrees, which we write as 360° .

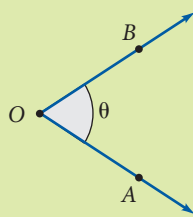


FIGURE 1

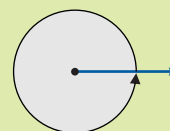
One complete revolution = 360°

FIGURE 2

One degree of angle measure, written 1° , is $\frac{1}{360}$ of a complete rotation of a ray about its endpoint; there are 360° in one full rotation. (The number 360 was decided upon by early civilizations because it was believed that the Earth was at the center of the universe and the Sun would rotate once around the Earth every 360 days.) Similarly, 180° is half of a complete rotation, and 90° is a quarter of a full rotation. Angles that measure 90° are called *right angles*, and angles that measure 180° are called *straight angles*. If an angle measures between 0° and 90° it is called an *acute angle*, and an angle that measures between 90° and 180° is an *obtuse angle*. Figure 3 illustrates further.

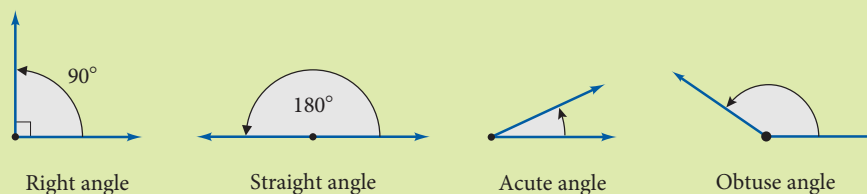


FIGURE 3

D **Complementary Angles and Supplementary Angles** If two angles add up to 90° , we call them *complementary angles*, and each is called the *complement* of the other. If two angles have a sum of 180° , we call them *supplementary angles*, and each is called the supplement of the other. Figure 4 illustrates the relationship between angles that are complementary and angles that are supplementary.

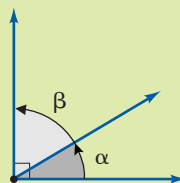
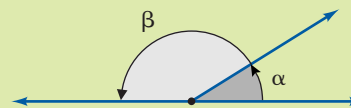
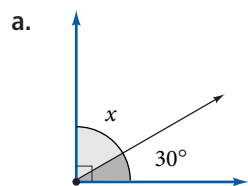
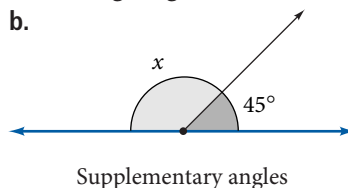
Complementary angles: $\alpha + \beta = 90^\circ$ Supplementary angles: $\alpha + \beta = 180^\circ$

FIGURE 4

EXAMPLE 11Find x in each of the following diagrams.

Complementary angles



Supplementary angles

SOLUTION We use subtraction to find each angle.

- a. Because the two angles are complementary, we can find x by subtracting 30° from 90° :

$$x = 90^\circ - 30^\circ = 60^\circ$$

We say 30° and 60° are complementary angles. The complement of 30° is 60° .

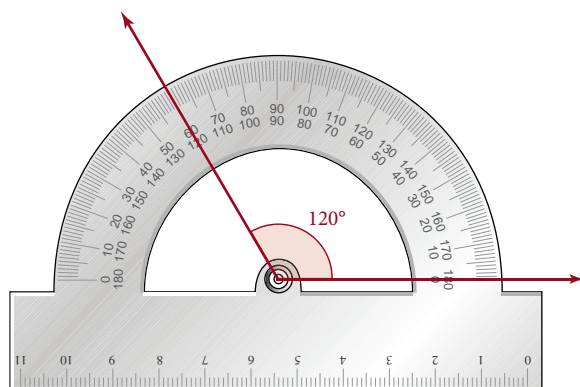
- b. The two angles in the diagram are supplementary. To find x , we subtract 45° from 180° :

$$x = 180^\circ - 45^\circ = 135^\circ$$

We say 45° and 135° are supplementary angles. The supplement of 45° is 135° .

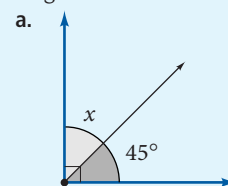
USING TECHNOLOGY**Calculators**

When we think of technology, we think of computers and calculators. However, some simpler devices are also in the category of technology, because they help us do things that would be difficult to do without them. The protractor below can be used to draw and measure angles. In the diagram below, the protractor is being used to measure an angle of 120° . It can also be used to draw angles of any size.

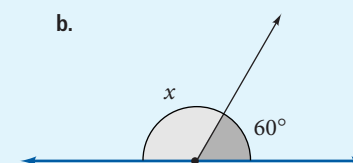


If you have a protractor, use it to draw the following angles: 30° , 45° , 60° , 120° , 135° , and 150° . Then imagine how you would draw these angles without a protractor.

11. Find x in each of the following diagrams.



Complementary angles



Supplementary angles

Answer

11. a. 45° b. 120°

Getting Ready for Class

After reading through the preceding section, respond in your own words and in complete sentences.

1. What is the distributive property?
2. What property allows $5(x + 3)$ to be rewritten as $5x + 5(3)$?
3. What property allows $3x + 4x$ to be rewritten as $7x$?
4. True or false? The expression $3x$ means 3 multiplied by x .

Problem Set 10.1

A For review, use the distributive property to combine each of the following pairs of similar terms. [Examples 1–3]

1. $2x + 8x$

2. $3x + 7x$

3. $-4y + 5y$

4. $-3y + 10y$

5. $4a - a$

6. $9a - a$

7. $8(x + 2)$

8. $8(x - 2)$

9. $2(3a + 7)$

10. $5(3a + 2)$

11. $\frac{1}{3}(3x + 6)$

12. $\frac{1}{2}(2x + 4)$

B Simplify the following expressions by combining similar terms. In some cases the order of the terms must be rearranged first by using the commutative property. [Examples 4–6]

13. $4x + 2x + 3 + 8$

14. $7x + 5x + 2 + 9$

15. $7x - 5x + 6 - 4$

16. $10x - 7x + 9 - 6$

17. $-2a + a + 7 + 5$

18. $-8a + 3a + 12 + 1$

19. $6y - 2y - 5 + 1$

20. $4y - 3y - 7 + 2$

21. $4x + 2x - 8x + 4$

22. $6x + 5x - 12x + 6$

23. $9x - x - 5 - 1$

24. $2x - x - 3 - 8$

25. $2a + 4 + 3a + 5$

26. $9a + 1 + 2a + 6$

27. $3x + 2 - 4x + 1$

28. $7x + 5 - 2x + 6$

29. $12y + 3 + 5y$

30. $8y + 1 + 6y$

31. $4a - 3 - 5a + 2a$

32. $6a - 4 - 2a + 6a$

Apply the distributive property to each expression and then simplify.

33. $2(3x + 4) + 8$

34. $2(5x + 1) + 10$

35. $5(2x - 3) + 4$

36. $6(4x - 2) + 7$

37. $8(2y + 4) + 3y$

38. $2(5y + 1) + 2y$

39. $6(4y - 3) + 6y$

40. $5(2y - 6) + 4y$

41. $2(x + 3) + 4(x + 2)$

42. $3(x + 1) + 2(x + 5)$

43. $3(2a + 4) + 7(3a - 1)$

44. $7(2a + 2) + 4(5a - 1)$

C Find the value of each of the following expressions when $x = 5$. [Examples 7–9]

45. $2x + 4$

46. $3x + 2$

47. $7x - 8$

48. $8x - 9$

49. $-4x + 1$

50. $-3x + 7$

51. $-8 + 3x$

52. $-7 + 2x$

Find the value of each of the following expressions when $a = -2$.

53. $2a + 5$

54. $3a + 4$

55. $-7a + 4$

56. $-9a + 3$

57. $-a + 10$

58. $-a + 8$

59. $-4 + 3a$

60. $-6 + 5a$

Find the value of each of the following expressions when $x = 3$. You may substitute 3 for x in each expression the way it is written, or you may simplify each expression first and then substitute 3 for x .

61. $3x + 5x + 4$

62. $6x + 8x + 7$

63. $9x + x + 3 + 7$

64. $5x + 3x + 2 + 4$

65. $4x + 3 + 2x + 5$

66. $7x + 6 + 2x + 9$

67. $3x - 8 + 2x - 3$

68. $7x - 2 + 4x - 1$

Find the value of each of $12x - 3$ for each of the following values of x .

69. $\frac{1}{2}$

70. $\frac{1}{3}$

71. $\frac{1}{4}$

72. $\frac{1}{6}$

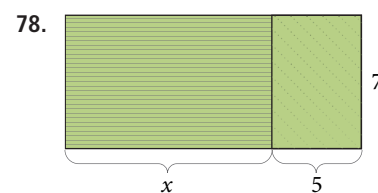
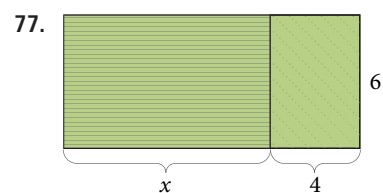
73. $\frac{3}{2}$

74. $\frac{2}{3}$

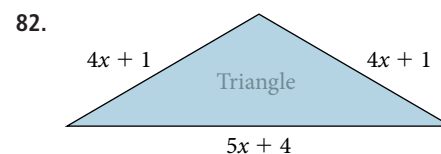
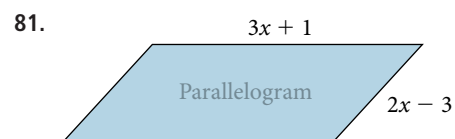
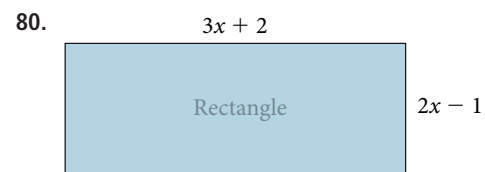
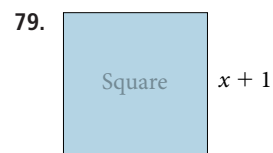
75. $\frac{3}{4}$

76. $\frac{5}{6}$

Use the distributive property to write two equivalent expressions for the area of each figure.



Write an expression for the perimeter of each figure.



D Applying the Concepts

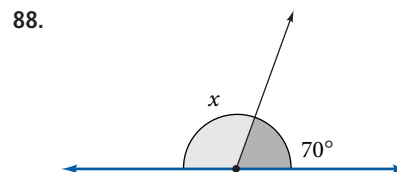
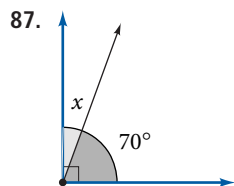
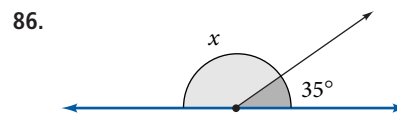
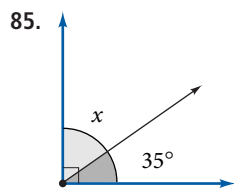
- 83. Buildings** This Google Earth image shows the Leaning Tower of Pisa. Most buildings stand at a right angle, but the tower is sinking on one side. The angle of inclination is the angle between the vertical and the tower. If the angle between the tower and the ground is 85° , what is the angle of inclination?



- 84. Geometry** This Google Earth image shows the Pentagon. The interior angles of a regular pentagon are all the same and sum to 540° . Find the size of each angle.

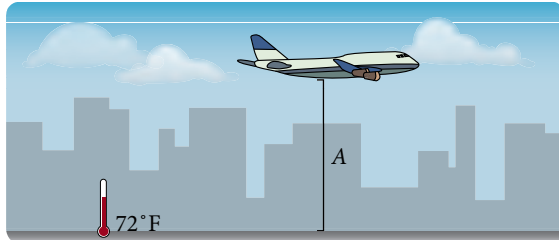


Find x in each figure and decide if the two angles are complementary or supplementary. [Example 11]




- 89.** Luke earns \$12 per hour working as a math tutor. We can express the amount he earns each week for working x hours with the expression $12x$. Indicate with a yes or no, which of the following could be one of Luke's paychecks. If you answer no, explain your answer.
- \$60 for working five hours
 - \$100 for working nine hours
 - \$80 for working seven hours
 - \$168 for working 14 hours
- 90.** Kelly earns \$15 per hour working as a graphic designer. We can express the amount she earns each week for working x hours with the expression $15x$. Indicate with a yes or no which of the following could be one of Kelly's paychecks. If you answer no, explain your answer.
- \$75 for working five hours
 - \$125 for working nine hours
 - \$90 for working six hours
 - \$500 for working 35 hours


- 91. Temperature and Altitude** On a certain day, the temperature on the ground is 72 degrees Fahrenheit, and the temperature at an altitude of A feet above the ground is found from the expression $72 - \frac{A}{300}$. Find the temperature at the following altitudes.
- a. 12,000 feet b. 15,000 feet c. 27,000 feet



- 92. Perimeter of a Rectangle** As you know, the expression $2l + 2w$ gives the perimeter of a rectangle with length l and width w . The garden below has a width of $3\frac{1}{2}$ feet and a length of 8 feet. What is the length of the fence that surrounds the garden?



- 93. Cost of Bottled Water** A water bottling company charges \$7 per month for their water dispenser and \$2 for each gallon of water delivered. If you have g gallons of water delivered in a month, then the expression $7 + 2g$ gives the amount of your bill for that month. Find the monthly bill for each of the following deliveries.
- a. 10 gallons b. 20 gallons

 WATER BOTTLE CO.		
MONTHLY BILL		
234 5th Street Glendora, CA 91740		DUE 07/23/10
Water dispenser	1	\$7.00
Gallons of water	8	\$16.00
		\$23.00

- 94. Cellular Phone Rates** A cellular phone company charges \$35 per month plus 25 cents for each minute, or fraction of a minute, that you use one of their cellular phones. The expression $\frac{3500 + 25t}{100}$ gives the amount of money, in dollars, you will pay for using one of their phones for t minutes a month. Find the monthly bill for using one of their phones:
- a. 20 minutes in a month b. 40 minutes in a month

Cell Phone Company <small>Grover Beach, CA</small>		
August 2010	DUE 08/15/10	
Monthly Access per Phone:	1	\$35.00
Charges:		
\$0.25/minute	50	\$12.50
		\$47.50

Getting Ready for the Next Section

Add.

95. $4 + (-4)$ 96. $2 + (-2)$ 97. $-2 + (-4)$ 98. $-2 + (-5)$ 99. $-5 + 2$
100. $-3 + 12$ 101. $\frac{5}{8} + \frac{3}{4}$ 102. $\frac{5}{6} + \frac{2}{3}$ 103. $-\frac{3}{4} + \frac{3}{4}$ 104. $-\frac{2}{3} + \frac{2}{3}$

Simplify.

105. $x + 0$

106. $y + 0$

107. $y + 4 - 6$

108. $y + 6 - 2$

■ Maintaining Your Skills

Give the opposite of each number.

109. 9

110. 12

111. -6

112. -5

Problems 113–118 review material we covered in Chapter 1. Match each statement on the left with the property that justifies it on the right.

113. $2(6 + 5) = 2(6) + 2(5)$

a. Distributive property

114. $3 + (4 + 1) = (3 + 4) + 1$

b. Associative property

115. $x + 5 = 5 + x$

c. Commutative property

116. $(a + 3) + 2 = a + (3 + 2)$

d. Commutative and associative properties

117. $(x + 5) + 1 = 1 + (x + 5)$

118. $(a + 4) + 2 = (4 + 2) + a$

Perform the indicated operation.

119. $-\frac{5}{4}\left(\frac{8}{15}\right)$

120. $-\frac{4}{3}\left(\frac{6}{5}\right)$

121. $12 \div \frac{2}{3}$

122. $6 \div \frac{3}{5}$

123. $\frac{2}{3} - \frac{3}{4}$

124. $\frac{3}{5} - \frac{5}{8}$

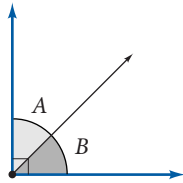
The Addition Property of Equality

10.2

Introduction . . .

Previously we defined complementary angles as two angles whose sum is 90° . If A and B are complementary angles, then

$$A + B = 90^\circ$$



Complementary angles

If we know that $A = 30^\circ$, then we can substitute 30° for A in the formula above to obtain the equation

$$30^\circ + B = 90^\circ$$

In this section we will learn how to solve equations like this one that involve addition and subtraction with one variable.

In general, solving an equation involves finding all replacements for the variable that make the equation a true statement.

A Solutions to Equations

Definition

A **solution** for an equation is a number that when used in place of the variable makes the equation a true statement.

For example, the equation $x + 3 = 7$ has as its solution the number 4, because replacing x with 4 in the equation gives a true statement:

When	$x = 4$	
the equation	$x + 3 = 7$	
becomes	$4 + 3 = 7$	
or	$7 = 7$	A true statement

EXAMPLE 1

Is $x = 5$ the solution to the equation $3x + 2 = 17$?

SOLUTION To see if it is, we replace x with 5 in the equation and find out if the result is a true statement:

When	$x = 5$	
the equation	$3x + 2 = 17$	
becomes	$3(5) + 2 = 17$	
	$15 + 2 = 17$	
	$17 = 17$	A true statement

Because the result is a true statement, we can conclude that $x = 5$ is the solution to $3x + 2 = 17$.

Objectives

- A Identify a solution to an equation.
- B Use the addition property of equality to solve linear equations.

Note

Although an equation may have many solutions, the equations we work with in the first part of this chapter will always have a single solution.

PRACTICE PROBLEMS

1. Show that $x = 3$ is the solution to the equation $5x - 4 = 11$.

Answer

1. See solutions section.

2. Is $a = -3$ the solution to the equation $6a - 3 = 2a + 4$?

EXAMPLE 2

Is $a = -2$ the solution to the equation $7a + 4 = 3a - 2$?

SOLUTION

$$\begin{array}{ll} \text{When} & a = -2 \\ \text{the equation} & 7a + 4 = 3a - 2 \\ \text{becomes} & 7(-2) + 4 = 3(-2) - 2 \\ & -14 + 4 = -6 - 2 \\ & -10 = -8 \end{array}$$

A false statement

Because the result is a false statement, we must conclude that $a = -2$ is *not* the solution to the equation $7a + 4 = 3a - 2$.

B Addition Property of Equality

We want to develop a process for solving equations with one variable. The most important property needed for solving the equations in this section is called the *addition property of equality*. The formal definition looks like this:

Addition Property of Equality

Let A , B , and C represent algebraic expressions.

$$\begin{array}{ll} \text{If} & A = B \\ \text{then} & A + C = B + C \end{array}$$

In words: Adding the same quantity to both sides of an equation never changes the solution to the equation.

This property is extremely useful in solving equations. Our goal in solving equations is to isolate the variable on one side of the equation. We want to end up with an equation of the form

$$x = \text{a number}$$

To do so we use the addition property of equality. Remember to follow this basic rule of algebra: *Whatever is done to one side of an equation must be done to the other side in order to preserve the equality.*

EXAMPLE 3

Solve for x : $x + 4 = -2$

SOLUTION

We want to isolate x on one side of the equation. If we add -4 to both sides, the left side will be $x + 4 + (-4)$, which is $x + 0$ or just x .

$$\begin{array}{ll} x + 4 = -2 & \\ x + 4 + (-4) = -2 + (-4) & \text{Add } -4 \text{ to both sides} \\ x + 0 = -6 & \text{Addition} \\ x = -6 & x + 0 = x \end{array}$$

The solution is -6 . We can check it if we want to by replacing x with -6 in the original equation:

$$\begin{array}{ll} \text{When} & x = -6 \\ \text{the equation} & x + 4 = -2 \\ \text{becomes} & -6 + 4 = -2 \\ & -2 = -2 \end{array} \quad \text{A true statement}$$

3. Solve for x : $x + 5 = -2$

Note


With some of the equations in this section, you will be able to see the solution just by looking at the equation. But it is important that you show all the steps used to solve the equations anyway. The equations you come across in the future will not be as easy to solve, so you should learn the steps involved very well.

Answers

2. No 3. -7

EXAMPLE 4Solve for a : $a - 3 = 5$ **SOLUTION**

$$\begin{aligned} a - 3 &= 5 \\ a - 3 + \mathbf{3} &= 5 + \mathbf{3} && \text{Add 3 to both sides} \\ a + 0 &= 8 && \text{Addition} \\ a &= 8 && a + 0 = a \end{aligned}$$

The solution to $a - 3 = 5$ is $a = 8$. **EXAMPLE 5**Solve for y : $y + 4 - 6 = 7 - 1$ **SOLUTION** Before we apply the addition property of equality, we must simplify each side of the equation as much as possible:


$$\begin{aligned} y + 4 - 6 &= 7 - 1 \\ y - 2 &= 6 && \text{Simplify each side} \\ y - 2 + \mathbf{2} &= 6 + \mathbf{2} && \text{Add 2 to both sides} \\ y + 0 &= 8 && \text{Addition} \\ y &= 8 && y + 0 = y \end{aligned}$$

EXAMPLE 6Solve for x : $3x - 2 - 2x = 4 - 9$ **SOLUTION** Simplifying each side as much as possible, we have


$$\begin{aligned} 3x - 2 - 2x &= 4 - 9 \\ x - 2 &= -5 && 3x - 2x = x \\ x - 2 + \mathbf{2} &= -5 + \mathbf{2} && \text{Add 2 to both sides} \\ x + 0 &= -3 && \text{Addition} \\ x &= -3 && x + 0 = x \end{aligned}$$

EXAMPLE 7Solve for x : $-3 - 6 = x + 4$ **SOLUTION** The variable appears on the right side of the equation in this problem. This makes no difference; we can isolate x on either side of the equation. We can leave it on the right side if we like:

$$\begin{aligned} -3 - 6 &= x + 4 \\ -9 &= x + 4 && \text{Simplify the left side} \\ -9 + \mathbf{(-4)} &= x + 4 + \mathbf{(-4)} && \text{Add } -4 \text{ to both sides} \\ -13 &= x + 0 && \text{Addition} \\ -13 &= x && x + 0 = x \end{aligned}$$

The statement $-13 = x$ is equivalent to the statement $x = -13$. In either case the solution to our equation is -13 . **EXAMPLE 8**Solve: $a - \frac{3}{4} = \frac{5}{8}$ **SOLUTION** To isolate a we add $\frac{3}{4}$ to each side:

$$\begin{aligned} a - \frac{3}{4} &= \frac{5}{8} \\ a - \frac{3}{4} + \frac{\mathbf{3}}{\mathbf{4}} &= \frac{5}{8} + \frac{\mathbf{3}}{\mathbf{4}} \\ a &= \frac{11}{8} \end{aligned}$$

When solving equations we will leave answers like $\frac{11}{8}$ as improper fractions, rather than change them to mixed numbers. 

4. Solve for a : $a - 2 = 7$

5. Solve for y : $y + 6 - 2 = 8 - 9$

6. Solve for x : $5x - 3 - 4x = 4 - 7$

7. Solve for x : $-5 - 7 = x + 2$

8. Solve: $a - \frac{2}{3} = \frac{5}{6}$

Answers

4. 9 5. -5 6. 0 7. -14

8. $\frac{3}{2}$

9. Solve: $5(3a - 4) - 14a = 25$

EXAMPLE 9

Solve: $4(2a - 3) - 7a = 2 - 5$.

SOLUTION We must begin by applying the distributive property to separate terms on the left side of the equation. Following that, we combine similar terms and then apply the addition property of equality.

$$\begin{array}{ll} 4(2a - 3) - 7a = 2 - 5 & \text{Original equation} \\ 8a - 12 - 7a = 2 - 5 & \text{Distributive property} \\ a - 12 = -3 & \text{Simplify each side} \\ a - 12 + \mathbf{12} = -3 + \mathbf{12} & \text{Add 12 to each side} \\ a = 9 & \text{Addition} \end{array}$$

A Note on Subtraction

Although the addition property of equality is stated for addition only, we can subtract the same number from both sides of an equation as well. Because subtraction is defined as addition of the opposite, subtracting the same quantity from both sides of an equation will not change the solution. If we were to solve the equation in Example 3 using subtraction instead of addition, the steps would look like this:

$$\begin{array}{ll} x + 4 = -2 & \text{Original equation} \\ x + 4 - \mathbf{4} = -2 - \mathbf{4} & \text{Subtract 4 from each side} \\ x = -6 & \text{Subtraction} \end{array}$$

In my experience teaching algebra, I find that students make fewer mistakes if they think in terms of addition rather than subtraction. So, you are probably better off if you continue to use the addition property just the way we have used it in the examples in this section. But, if you are curious as to whether you can subtract the same number from both sides of an equation, the answer is yes.

Getting Ready for Class

After reading through the preceding section, respond in your own words and in complete sentences. An answer of true or false should be accompanied by a sentence explaining why the answer is true or false.

1. What is a solution to an equation?
2. True or false? According to the addition property of equality, adding the same value to both sides of an equation will never change the solution to the equation.
3. Show that $x = 5$ is a solution to the equation $3x + 2 = 17$ without solving the equation.
4. True or false? The equations below have the same solution.

Equation 1: $7x + 5 = 19$

Equation 2: $7x + 5 + 3 = 19 + 3$

Answer

9. 45

Problem Set 10.2

A Check to see if the number to the right of each of the following equations is the solution to the equation. [Examples 1, 2]

1. $2x + 1 = 5$; 2

2. $4x + 3 = 7$; 1

3. $3x + 4 = 19$; 5

4. $3x + 8 = 14$; 2

5. $2x - 4 = 2$; 4

6. $5x - 6 = 9$; 3

7. $2x + 1 = 3x + 3$; -2

8. $4x + 5 = 2x - 1$; -6

9. $x - 4 = 2x + 1$; -4

10. $x - 8 = 3x + 2$; -5

B Solve each equation. [Examples 3, 4, 8]

11. $x + 2 = 8$

12. $x + 3 = 5$

13. $x - 4 = 7$

14. $x - 6 = 2$

15. $a + 9 = -6$

16. $a + 3 = -1$

17. $x - 5 = -4$

18. $x - 8 = -3$

19. $y - 3 = -6$

20. $y - 5 = -1$

21. $a + \frac{1}{3} = -\frac{2}{3}$

22. $a + \frac{1}{4} = -\frac{3}{4}$

23. $x - \frac{3}{5} = \frac{4}{5}$

24. $x - \frac{7}{8} = \frac{3}{8}$

25. $y + 7.3 = -2.7$

26. $y + 8.2 = -2.8$

B Simplify each side of the following equations before applying the addition property. [Examples 5–7]

27. $x + 4 - 7 = 3 - 10$

28. $x + 6 - 2 = 5 - 12$

29. $x - 6 + 4 = -3 - 2$

30. $x - 8 + 2 = -7 - 1$

31. $3 - 5 = a - 4$

32. $2 - 6 = a - 1$

33. $3a + 7 - 2a = 1$

34. $5a + 6 - 4a = 4$

35. $6a - 2 - 5a = -9 + 1$

36. $7a - 6 - 6a = -3 + 1$

37. $8 - 5 = 3x - 2x + 4$

38. $10 - 6 = 8x - 7x + 6$

B The following equations contain parentheses. Apply the distributive property to remove the parentheses, then simplify each side before using the addition property of equality. [Example 9]

39. $2(x + 3) - x = 4$

40. $5(x + 1) - 4x = 2$

41. $-3(x - 4) + 4x = 3 - 7$

42. $-2(x - 5) + 3x = 4 - 9$

43. $5(2a + 1) - 9a = 8 - 6$

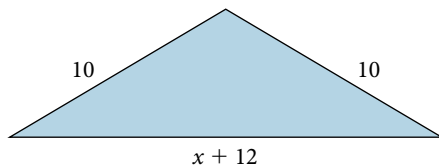
44. $4(2a - 1) - 7a = 9 - 5$

45. $-(x + 3) + 2x - 1 = 6$

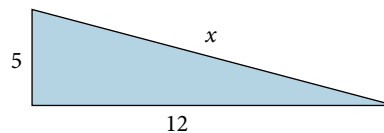
46. $-(x - 7) + 2x - 8 = 4$

Find the value of x for each of the figures, given the perimeter.

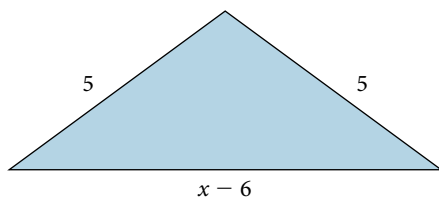
47. $P = 36$



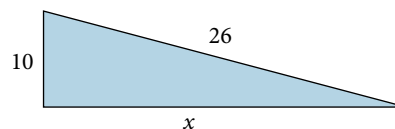
48. $P = 30$



49. $P = 16$




50. $P = 60$



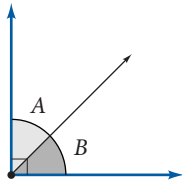
Applying the Concepts

Temperature The chart shows the temperatures for some of the world's hottest places. To convert from Celsius to Kelvin we use the formula $y = x + 273$, where y is the temperature in Kelvin and x is the temperature in Celsius. Use the formula to answer Questions 51 and 52.

51. The hottest temperature in Al'Aziziyah was 331 Kelvin. Convert this to Celsius.
52. The hottest temperature in Kebili, Tunisia, was 328 Kelvin. Convert this to Celsius.



53. **Geometry** Two angles are complementary angles. If one of the angles is 23° , then solving the equation $x + 23^\circ = 90^\circ$ will give you the other angle. Solve the equation.



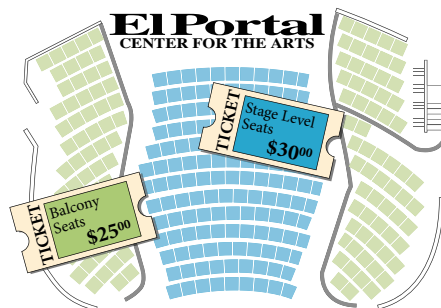
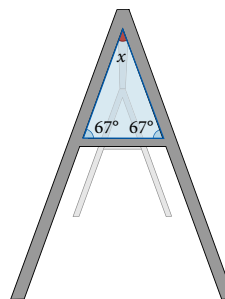
Complementary angles

54. **Geometry** Two angles are supplementary angles. If one of the angles is 23° , then solving the equation $x + 23^\circ = 180^\circ$ will give you the other angle. Solve the equation.

55. **Theater Tickets** The El Portal Center for the Arts in North Hollywood, California, holds a maximum of 400 people. The two balconies hold 86 and 89 people each; the rest of the seats are at the stage level. Solving the equation $x + 86 + 89 = 400$ will give you the number of seats on the stage level.

- a. Solve the equation for x .
- b. If tickets on the stage level are \$30 each, and tickets in either balcony are \$25 each, what is the maximum amount of money the theater can bring in for a show?

56. **Geometry** The sum of the angles in the triangle on the swing set is 180° . Use this fact to write an equation containing x . Then solve the equation.



Getting Ready for the Next Section

Find the reciprocal of each number.

57. 4

58. 3

59. $\frac{1}{2}$

60. $\frac{1}{3}$

61. $\frac{2}{3}$

62. $\frac{3}{5}$

Multiply.

63. $2 \cdot \frac{1}{2}$

64. $\frac{1}{4} \cdot 4$

65. $-\frac{1}{3}(-3)$

66. $-\frac{1}{4}(-4)$

67. $\frac{3}{2}\left(\frac{2}{3}\right)$

68. $\frac{5}{3}\left(\frac{3}{5}\right)$

69. $\left(-\frac{5}{4}\right)\left(-\frac{4}{5}\right)$

70. $\left(-\frac{4}{3}\right)\left(-\frac{3}{4}\right)$

Simplify.

71. $1 \cdot x$

72. $1 \cdot a$

73. $4x - 11 + 3x$

74. $2x - 11 + 3x$

Maintaining Your Skills

75. $\frac{3}{2} + \frac{5}{10}$

76. $\frac{1}{3} + \frac{4}{12}$

77. $\frac{2}{7} + \frac{1}{14}$

78. $\frac{3}{8} + \frac{1}{16}$

79. $\frac{1}{3} - \frac{2}{5}$

80. $\frac{3}{4} - \frac{3}{7}$

81. $\frac{1}{6} - \frac{4}{3}$

82. $\frac{2}{5} - \frac{5}{10}$

Translating Translate each of the following into an equation, and then solve the equation.

83. The sum of x and 12 is 30.

84. The difference of x and 12 is 30.

85. The difference of 8 and 5 is equal to the sum of x and 7. 86. The sum of 8 and 5 is equal to the difference of x and 7.

The Multiplication Property of Equality

10.3

Objectives

- A** Use the multiplication property of equality to solve equations.

In this section we will continue to solve equations in one variable. We will again use the addition property of equality, but we will also use another property—the *multiplication property of equality*—to solve the equations in this section. We will state the multiplication property of equality and then see how it is used by looking at some examples.

The most popular Internet video download of all time was a *Star Wars* movie trailer. The video was compressed so it would be small enough for people to download over the Internet. In movie theaters, a film plays at 24 frames per second. Over the Internet, that number is sometimes cut in half, to 12 frames per second, to make the file size smaller.

We can use the equation $240 = \frac{x}{12}$ to find the number of total frames, x , in a 240-second movie clip that plays at 12 frames per second.

A Multiplication Property of Equality

Multiplication Property of Equality

Let A , B , and C represent algebraic expressions, with C not equal to 0.

$$\begin{array}{l} \text{If } A = B \\ \text{then } AC = BC \end{array}$$

In words: Multiplying both sides of an equation by the same nonzero quantity never changes the solution to the equation.

Now, because division is defined as multiplication by the reciprocal, we are also free to divide both sides of an equation by the same nonzero quantity and always be sure we have not changed the solution to the equation.


EXAMPLE 1 Solve for x : $\frac{1}{2}x = 3$

SOLUTION Our goal here is the same as it was in Section 4.2. We want to isolate x (that is, $1x$) on one side of the equation. We have $\frac{1}{2}x$ on the left side. If we multiply both sides by 2, we will have $1x$ on the left side. Here is how it looks:

$$\begin{array}{l} \frac{1}{2}x = 3 \\ 2\left(\frac{1}{2}x\right) = 2(3) \quad \text{Multiply both sides by 2} \\ x = 6 \quad \text{Multiplication} \end{array}$$

To see why $2\left(\frac{1}{2}x\right)$ is equivalent to x , we use the associative property:

$$\begin{array}{l} 2\left(\frac{1}{2}x\right) = \left(2 \cdot \frac{1}{2}\right)x \quad \text{Associative property} \\ = 1 \cdot x \quad 2 \cdot \frac{1}{2} = 1 \\ = x \quad 1 \cdot x = x \end{array}$$

Although we will not show this step when solving problems, it is implied. 

PRACTICE PROBLEMS

1. Solve for x : $\frac{1}{3}x = 5$

Answer

1. 15

2. Solve for a : $\frac{1}{5}a + 3 = 7$

3. Solve for y : $\frac{3}{5}y = 6$

Answers

2. 20 3. 10

Chapter 10 Solving Equations

EXAMPLE 2

Solve for a : $\frac{1}{3}a + 2 = 7$

SOLUTION We begin by adding -2 to both sides to get $\frac{1}{3}a$ by itself. We then multiply by 3 to solve for a .

$$\frac{1}{3}a + 2 = 7$$

$$\frac{1}{3}a + 2 + (-2) = 7 + (-2) \quad \text{Add } -2 \text{ to both sides}$$

$$\frac{1}{3}a = 5 \quad \text{Addition}$$

$$3 \cdot \frac{1}{3}a = 3 \cdot 5 \quad \text{Multiply both sides by 3}$$

$$a = 15 \quad \text{Multiplication}$$

We can check our solution to see that it is correct:

When	$a = 15$	
the equation	$\frac{1}{3}a + 2 = 7$	
becomes	$\frac{1}{3}(15) + 2 = 7$	
	$5 + 2 = 7$	
	$7 = 7$	A true statement

EXAMPLE 3

Solve for y : $\frac{2}{3}y = 12$

SOLUTION In this case we multiply each side of the equation by the reciprocal of $\frac{2}{3}$, which is $\frac{3}{2}$.

$$\frac{2}{3}y = 12$$

$$\frac{3}{2} \left(\frac{2}{3}y \right) = \frac{3}{2}(12)$$

$$y = 18$$

The solution checks because $\frac{2}{3}$ of 18 is 12.

Note The reciprocal of a negative number is also a negative number. Remember, reciprocals are two numbers that have a product of 1. Since 1 is a positive number, any two numbers we multiply to get 1 must both have the same sign. Here are some negative numbers and their reciprocals:

The reciprocal of -2 is $-\frac{1}{2}$.

The reciprocal of -7 is $-\frac{1}{7}$.

The reciprocal of $-\frac{1}{3}$ is -3 .

The reciprocal of $-\frac{3}{4}$ is $-\frac{4}{3}$.

The reciprocal of $-\frac{9}{5}$ is $-\frac{5}{9}$.

EXAMPLE 4Solve for x : $-\frac{4}{5}x = \frac{8}{15}$ **SOLUTION** The reciprocal of $-\frac{4}{5}$ is $-\frac{5}{4}$.

$$-\frac{4}{5}x = \frac{8}{15}$$

$$-\frac{5}{4}\left(-\frac{4}{5}x\right) = -\frac{5}{4}\left(\frac{8}{15}\right)$$

$$x = -\frac{2}{3}$$

Many times, it is convenient to divide both sides by a nonzero number to solve an equation, as the next example shows.

EXAMPLE 5Solve for x : $4x = -20$

SOLUTION If we divide both sides by 4, the left side will be just x , which is what we want. It is okay to divide both sides by 4 because division by 4 is equivalent to multiplication by $\frac{1}{4}$, and the multiplication property of equality states that we can multiply both sides by any number so long as it isn't 0.

$$4x = -20$$

$$\frac{4x}{4} = \frac{-20}{4} \quad \text{Divide both sides by 4}$$

$$x = -5 \quad \text{Division}$$

Because $4x$ means “4 times x ,” the factors in the numerator of $\frac{4x}{4}$ are 4 and x .

Because the factor 4 is common to the numerator and the denominator, we divide it out to get just x .

EXAMPLE 6Solve for x : $-3x + 7 = -5$ **SOLUTION** We begin by adding -7 to both sides to reduce the left side to $-3x$.

$$-3x + 7 = -5$$

$$-3x + 7 + (-7) = -5 + (-7) \quad \text{Add } -7 \text{ to both sides}$$

$$-3x = -12 \quad \text{Addition}$$

$$\frac{-3x}{-3} = \frac{-12}{-3} \quad \text{Divide both sides by } -3$$

$$x = 4 \quad \text{Division}$$

With more complicated equations we simplify each side separately before applying the addition or multiplication properties of equality. The examples below illustrate.

EXAMPLE 7Solve for x : $5x - 8x + 3 = 4 - 10$ **SOLUTION** We combine similar terms to simplify each side and then solve as usual.

$$5x - 8x + 3 = 4 - 10$$

$$-3x + 3 = -6 \quad \text{Simplify each side}$$

$$-3x + 3 + (-3) = -6 + (-3) \quad \text{Add } -3 \text{ to both sides}$$

$$-3x = -9 \quad \text{Addition}$$

$$\frac{-3x}{-3} = \frac{-9}{-3} \quad \text{Divide both sides by } -3$$

$$x = 3 \quad \text{Division}$$

4. Solve for x : $-\frac{3}{4}x = \frac{6}{5}$

5. Solve for x : $6x = -42$

Note

If we multiply each side by $\frac{1}{4}$, the solution looks like this:

$$\frac{1}{4}(4x) = \frac{1}{4}(-20)$$

$$\left(\frac{1}{4} \cdot 4\right)x = -5$$

$$1x = -5$$

$$x = -5$$

6. Solve for x : $-5x + 6 = -14$

7. Solve for x : $3x - 7x + 5 = 3 - 18$

Answers

4. $-\frac{8}{3}$ 5. -7 6. 4 7. 5

8. Solve for x :
 $-5 + 4 = 2x - 11 + 3x$

EXAMPLE 8Solve for x : $-8 + 11 = 4x - 11 + 3x$ **SOLUTION** We begin by simplifying each side separately.

$$\begin{aligned} -8 + 11 &= 4x - 11 + 3x && \text{Simplify both sides} \\ 3 &= 7x - 11 && \text{Add 11 to both sides} \\ 3 + 11 &= 7x - 11 + 11 && \text{Addition} \\ 14 &= 7x && \\ \frac{14}{7} &= \frac{7x}{7} && \text{Divide both sides by 7} \\ 2 &= x \text{ or } x = 2 \end{aligned}$$

Again, it makes no difference which side of the equation x ends up on, so long as it is just one x .

COMMON MISTAKES

Before we end this section, we should mention a very common mistake made by students when they first begin to solve equations. It involves trying to subtract away the number in front of the variable—like this:

$$\begin{aligned} 7x &= 21 \\ 7x - 7 &= 21 - 7 && \text{Add } -7 \text{ to both sides} \\ x &= 14 && \text{Mistake} \end{aligned}$$

The mistake is not in trying to subtract 7 from both sides of the equation. The mistake occurs when we say $7x - 7 = x$. It just isn't true. We can add and subtract only similar terms. The terms $7x$ and 7 are not similar, because one contains x and the other doesn't. The correct way to do the problem is like this:

$$\begin{aligned} 7x &= 21 \\ \frac{7x}{7} &= \frac{21}{7} && \text{Divide both sides by 7} \\ x &= 3 && \text{Division} \end{aligned}$$

Getting Ready for Class

After reading through the preceding section, respond in your own words and in complete sentences.

1. True or false? Multiplying both sides of an equation by the same non-zero quantity will never change the solution to the equation.
2. If we were to multiply the right side of an equation by 2, then the left side should be multiplied by _____.
3. Dividing both sides of the equation $4x = -20$ by 4 is the same as multiplying both sides by what number?

Problem Set 10.3

A Use the multiplication property of equality to solve each of the following equations. In each case, show all the steps.

[Examples 1, 3–5]

1. $\frac{1}{4}x = 2$

2. $\frac{1}{3}x = 7$

3. $\frac{1}{2}x = -3$

4. $\frac{1}{5}x = -6$

5. $-\frac{1}{3}x = 2$

6. $-\frac{1}{3}x = 5$

7. $-\frac{1}{6}x = -1$

8. $-\frac{1}{2}x = -4$

9. $\frac{3}{4}y = 12$

10. $\frac{2}{3}y = 18$

11. $3a = 48$

12. $2a = 28$

13. $-\frac{3}{5}x = \frac{9}{10}$

14. $-\frac{4}{5}x = -\frac{8}{15}$

15. $5x = -35$

16. $7x = -35$

17. $-8y = 64$

18. $-9y = 27$

19. $-7x = -42$

20. $-6x = -42$

A Using the addition property of equality first, solve each of the following equations. [Examples 2, 6]

21. $3x - 1 = 5$

22. $2x + 4 = 6$

23. $-4a + 3 = -9$

24. $-5a + 10 = 50$

25. $6x - 5 = 19$

26. $7x - 5 = 30$

27. $\frac{1}{3}a + 3 = -5$

28. $\frac{1}{2}a + 2 = -7$

29. $-\frac{1}{4}a + 5 = 2$

30. $-\frac{1}{5}a + 3 = 7$

31. $2x - 4 = -20$

32. $3x - 5 = -26$

33. $\frac{2}{3}x - 4 = 6$

34. $\frac{3}{4}x - 2 = 7$

35. $-11a + 4 = -29$

36. $-12a + 1 = -47$

37. $-3y - 2 = 1$

38. $-2y - 8 = 2$

39. $-2x - 5 = -7$

40. $-3x - 6 = -36$

A Simplify each side of the following equations first, then solve. [Examples 7, 8]

41. $2x + 3x - 5 = 7 + 3$

42. $4x + 5x - 8 = 6 + 4$

43. $4x - 7 + 2x = 9 - 10$

44. $5x - 6 + 3x = -6 - 8$

45. $3a + 2a + a = 7 - 13$

46. $8a - 6a + a = 8 - 14$

47. $5x + 4x + 3x = 4 - 8$

48. $4x + 8x - 2x = 15 - 10$

49. $5 - 18 = 3y - 2y + 1$


50. $7 - 16 = 4y - 3y + 2$

Find the value of x for each of the figures, given the perimeter.

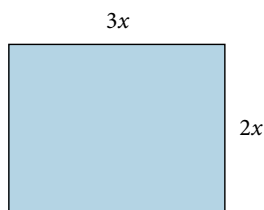
51. $P = 72$



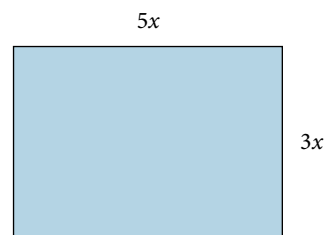
52. $P = 96$



53. $P = 80$

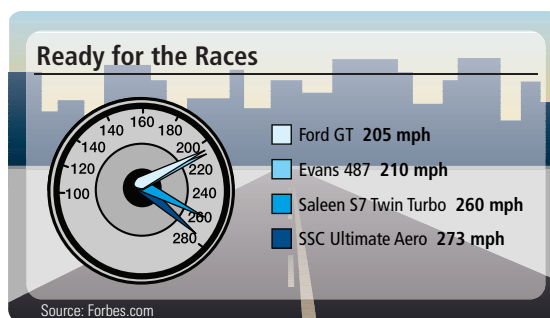


54. $P = 64$

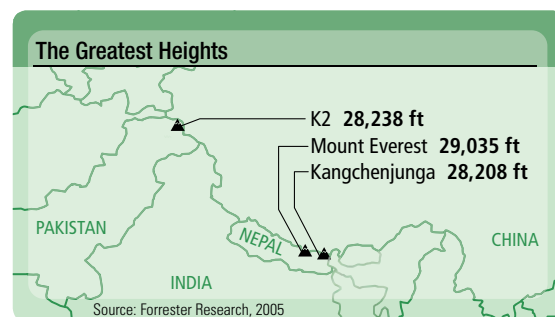


Applying the Concepts


55. **Cars** The chart shows the fastest cars in America. To convert miles per hour to feet per second we use the formula $y = \frac{15}{22}x$ where x is the car's speed in feet per second and y is the speed in miles per hour. Find the speed of the Ford GT in feet per second. Round to the nearest tenth.



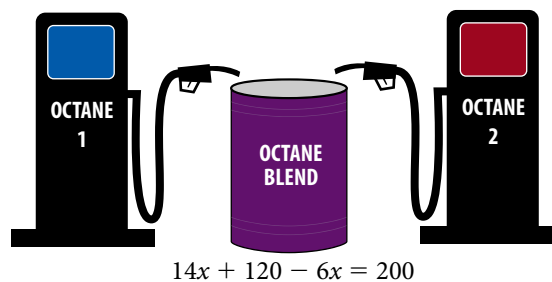
56. **Mountains** The map shows the heights of the tallest mountains in the world. To convert the heights of the mountains into miles, we use the formula $y = 5,280x$, where y is in feet and x is in miles. Find the height of K2 in miles. Round to the nearest tenth of a mile.



- 57. MP3 Players** Southwest Electronics tracked the number of MP3 players it sold each month for a year. The store manager found that when he raised the price of the MP3 players just slightly, sales went down. He used the equation $60 = -2x + 130$ to determine the price x he needs to charge if he wants to sell 60 MP3 players a month. Solve this equation.
- 58. Part-time Tuition Costs** Many two-year colleges have a large number of students who take courses on a part-time basis. Students pay a charge for each credit hour taken plus an activity fee. Suppose the equation $\$1960 = \$175x + \$35$ can be used to determine the number of credit hours a student is taking during the upcoming semester. Solve this equation.
- 59. Super Bowl XLII** According to Nielsen Media Research, the New York Giants' victory over the New England Patriots in Super Bowl XLII was the most watched Super Bowl ever, with 3 million more viewers than the previous record for Super Bowl XXX in 1996. The equation $192,000,000 = 2x - 3,000,000$ shows that the total number of viewers for both Super Bowl games was 192 million. Solve for x to determine how many viewers watched Super Bowl XLII.
- 60. Blending Gasoline** In an attempt to save money at the gas pump, customers will combine two different octane gasolines to get a blend that is slightly higher in octane than regular gas but not as expensive as premium gas. The equation $14x + 120 - 6x = 200$ can be used to find out how many gallons of one octane are needed. Solve this equation.



192,000,000 viewers total



Maintaining Your Skills

Translations Translate each sentence below into an equation, then solve the equation.

61. The sum of $2x$ and 5 is 19.
62. The sum of 8 and $3x$ is 2.
63. The difference of $5x$ and 6 is -9 .
64. The difference of 9 and $6x$ is 21.

Getting Ready for the Next Section

Apply the distributive property to each of the following expressions.

65. $2(3a - 8)$ 66. $4(2a - 5)$ 67. $-3(5x - 1)$ 68. $-2(7x - 3)$

Simplify each of the following expressions as much as possible.

69. $3(y - 5) + 6$ 70. $5(y + 3) + 7$ 71. $6(2x - 1) + 4x$ 72. $8(3x - 2) + 4x$

Linear Equations in One Variable

10.4

Introduction . . .

The Rhind Papyrus is an ancient Egyptian document, created around 1650 BC, that contains some mathematical riddles. One problem on the Rhind Papyrus asked the reader to find a quantity such that when it is added to one-fourth of itself the sum is 15. The equation that describes this situation is

$$x + \frac{1}{4}x = 15$$

As you can see, this equation contains a fraction. One of the topics we will discuss in this section is how to solve equations that contain fractions.

In this chapter we have been solving what are called *linear equations in one variable*. They are equations that contain only one variable, and that variable is always raised to the first power and never appears in a denominator. Here are some examples of linear equations in one variable:

$$3x + 2 = 17, \quad 7a + 4 = 3a - 2, \quad 2(3y - 5) = 6$$

Because of the work we have done in the first three sections of this chapter, we are now able to solve any linear equation in one variable. The steps outlined below can be used as a guide to solving these equations.

A Solving Linear Equations with One Variable

Strategy Solving a Linear Equation with One Variable

- Step 1:** Simplify each side of the equation as much as possible. This step is done using the commutative, associative, and distributive properties.
- Step 2:** Use the addition property of equality to get all *variable terms* on one side of the equation and all *constant terms* on the other, and then combine like terms. A *variable term* is any term that contains the variable. A *constant term* is any term that contains only a number.
- Step 3:** Use the multiplication property of equality to get the variable by itself on one side of the equation.
- Step 4:** Check your solution in the original equation if you think it is necessary.

EXAMPLE 1

Solve: $3(x + 2) = -9$

SOLUTION We begin by applying the distributive property to the left side:

$$\begin{array}{l} \text{Step 1} \left\{ \begin{array}{l} 3(x + 2) = -9 \\ 3x + 6 = -9 \end{array} \right. \quad \begin{array}{l} \text{Distributive property} \\ \text{Add } -6 \text{ to both sides} \end{array} \\ \text{Step 2} \left\{ \begin{array}{l} 3x + 6 + (-6) = -9 + (-6) \\ 3x = -15 \end{array} \right. \quad \begin{array}{l} \text{Addition} \\ \text{Divide both sides by 3} \end{array} \\ \text{Step 3} \left\{ \begin{array}{l} \frac{3x}{3} = \frac{-15}{3} \\ x = -5 \end{array} \right. \quad \begin{array}{l} \text{Division} \end{array} \end{array}$$

Objectives

- A** Solve linear equations with one variable.
- B** Solve linear equations involving fractions and decimals.

Note

Once you have some practice at solving equations, these steps will seem almost automatic. Until that time, it is a good idea to pay close attention to these steps.

PRACTICE PROBLEMS

1. Solve: $4(x + 3) = -8$

Answer
1. -5

This general method of solving linear equations involves using the two properties developed in Sections 10.2 and 10.3. We can add any number to both sides of an equation or multiply (or divide) both sides by the same nonzero number and always be sure we have not changed the solution to the equation. The equations may change in form, but the solution to the equation stays the same. Looking back to Example 1, we can see that each equation looks a little different from the preceding one. What is interesting, and useful, is that each of the equations says the same thing about x . They all say that x is -5 . The last equation, of course, is the easiest to read. That is why our goal is to end up with x isolated on one side of the equation.

2. Solve: $6a + 7 = 4a - 3$

3. Solve: $5(x - 2) + 3 = -12$

4. Solve: $3(4x - 5) + 6 = 3x + 9$

Answers

2. -5 3. -1 4. 2

EXAMPLE 2

Solve: $4a + 5 = 2a - 7$

SOLUTION Neither side can be simplified any further. What we have to do is get the variable terms ($4a$ and $2a$) on the same side of the equation. We can eliminate the variable term from the right side by adding $-2a$ to both sides:

$$\begin{array}{l} \text{Step 2} \left\{ \begin{array}{l} 4a + 5 = 2a - 7 \\ 4a + (-2a) + 5 = 2a + (-2a) - 7 \\ 2a + 5 = -7 \\ 2a + 5 + (-5) = -7 + (-5) \\ 2a = -12 \end{array} \right. \begin{array}{l} \text{Add } -2a \text{ to both sides} \\ \text{Addition} \\ \text{Add } -5 \text{ to both sides} \\ \text{Addition} \end{array} \\ \text{Step 3} \left\{ \begin{array}{l} \frac{2a}{2} = \frac{-12}{2} \\ a = -6 \end{array} \right. \begin{array}{l} \text{Divide by 2} \\ \text{Division} \end{array} \end{array}$$

EXAMPLE 3

Solve: $2(x - 4) + 5 = -11$

SOLUTION We begin by applying the distributive property to multiply 2 and $x - 4$:

$$\begin{array}{l} \text{Step 1} \left\{ \begin{array}{l} 2(x - 4) + 5 = -11 \\ 2x - 8 + 5 = -11 \\ 2x - 3 = -11 \end{array} \right. \begin{array}{l} \text{Distributive property} \\ \text{Addition} \end{array} \\ \text{Step 2} \left\{ \begin{array}{l} 2x - 3 + 3 = -11 + 3 \\ 2x = -8 \end{array} \right. \begin{array}{l} \text{Add 3 to both sides} \\ \text{Addition} \end{array} \\ \text{Step 3} \left\{ \begin{array}{l} \frac{2x}{2} = \frac{-8}{2} \\ x = -4 \end{array} \right. \begin{array}{l} \text{Divide by 2} \\ \text{Division} \end{array} \end{array}$$

EXAMPLE 4

Solve: $5(2x - 4) + 3 = 4x - 5$

SOLUTION We apply the distributive property to multiply 5 and $2x - 4$. We then combine similar terms and solve as usual:

$$\begin{array}{l} \text{Step 1} \left\{ \begin{array}{l} 5(2x - 4) + 3 = 4x - 5 \\ 10x - 20 + 3 = 4x - 5 \\ 10x - 17 = 4x - 5 \end{array} \right. \begin{array}{l} \text{Distributive property} \\ \text{Simplify the left side} \end{array} \\ \text{Step 2} \left\{ \begin{array}{l} 10x + (-4x) - 17 = 4x + (-4x) - 5 \\ 6x - 17 = -5 \\ 6x - 17 + 17 = -5 + 17 \\ 6x = 12 \end{array} \right. \begin{array}{l} \text{Add } -4x \text{ to both sides} \\ \text{Addition} \\ \text{Add 17 to both sides} \\ \text{Addition} \end{array} \\ \text{Step 3} \left\{ \begin{array}{l} \frac{6x}{6} = \frac{12}{6} \\ x = 2 \end{array} \right. \begin{array}{l} \text{Divide by 6} \\ \text{Division} \end{array} \end{array}$$

B Equations Involving Fractions

We will now solve some equations that involve fractions. Because integers are usually easier to work with than fractions, we will begin each problem by clearing the equation we are trying to solve of all fractions. To do this, we will use the multiplication property of equality to multiply each side of the equation by the LCD for all fractions appearing in the equation. Here is an example.

EXAMPLE 5

Solve the equation $\frac{x}{2} + \frac{x}{6} = 8$.

SOLUTION The LCD for the fractions $\frac{x}{2}$ and $\frac{x}{6}$ is 6. It has the property that both 2 and 6 divide it evenly. Therefore, if we multiply both sides of the equation by 6, we will be left with an equation that does not involve fractions.

$$\begin{aligned} 6\left(\frac{x}{2} + \frac{x}{6}\right) &= 6(8) && \text{Multiply each side by 6} \\ 6\left(\frac{x}{2}\right) + 6\left(\frac{x}{6}\right) &= 6(8) && \text{Apply the distributive property} \\ 3x + x &= 48 && \text{Multiplication} \\ 4x &= 48 && \text{Combine similar terms} \\ x &= 12 && \text{Divide each side by 4} \end{aligned}$$

We could check our solution by substituting 12 for x in the original equation. If we do so, the result is a true statement. The solution is 12. ■

As you can see from Example 5, the most important step in solving an equation that involves fractions is the first step. In that first step we multiply both sides of the equation by the LCD for all the fractions in the equation. After we have done so, the equation is clear of fractions because the LCD has the property that all the denominators divide it evenly.

EXAMPLE 6

Solve the equation $2x + \frac{1}{2} = \frac{3}{4}$.

SOLUTION This time the LCD is 4. We begin by multiplying both sides of the equation by 4 to clear the equation of fractions.

$$\begin{aligned} 4\left(2x + \frac{1}{2}\right) &= 4\left(\frac{3}{4}\right) && \text{Multiply each side by the LCD, 4} \\ 4(2x) + 4\left(\frac{1}{2}\right) &= 4\left(\frac{3}{4}\right) && \text{Apply the distributive property} \\ 8x + 2 &= 3 && \text{Multiplication} \\ 8x &= 1 && \text{Add } -2 \text{ to each side} \\ x &= \frac{1}{8} && \text{Divide each side by 8} \end{aligned}$$
■

EXAMPLE 7

Solve for x : $\frac{3}{x} + 2 = \frac{1}{2}$. (Assume x is not 0.)

SOLUTION This time the LCD is $2x$. Following the steps we used in Examples 5 and 6, we have

$$\begin{aligned} 2x\left(\frac{3}{x} + 2\right) &= 2x\left(\frac{1}{2}\right) && \text{Multiply through by the LCD, } 2x \\ 2x\left(\frac{3}{x}\right) + 2x(2) &= 2x\left(\frac{1}{2}\right) && \text{Distributive property} \\ 6 + 4x &= x && \text{Multiplication} \\ 6 &= -3x && \text{Add } -4x \text{ to each side} \\ -2 &= x && \text{Divide each side by } -3 \end{aligned}$$
■

5. Solve: $\frac{x}{3} + \frac{x}{6} = 9$

6. Solve: $3x + \frac{1}{4} = \frac{5}{8}$

7. Solve: $\frac{4}{x} + 3 = \frac{11}{5}$

Answers
5. 18 6. $\frac{1}{8}$ 7. -5

Equations Containing Decimals

8. Solve: $\frac{1}{5}x - 2.4 = 8.3$

9. Solve: $7a - 0.18 = 2a + 0.77$

EXAMPLE 8

Solve: $\frac{1}{2}x - 3.78 = 2.52$

SOLUTION We begin by adding 3.78 to each side of the equation. Then we multiply each side by 2.

$$\begin{aligned}\frac{1}{2}x - 3.78 &= 2.52 \\ \frac{1}{2}x - 3.78 + \mathbf{3.78} &= 2.52 + \mathbf{3.78} && \text{Add 3.78 to each side} \\ \frac{1}{2}x &= 6.30 \\ \mathbf{2}\left(\frac{1}{2}x\right) &= \mathbf{2}(6.30) && \text{Multiply each side by 2} \\ x &= 12.6\end{aligned}$$

EXAMPLE 9

Solve: $5a - 0.42 = -3a + 0.98$

SOLUTION We can isolate a on the left side of the equation by adding $3a$ to each side.

$$\begin{aligned}5a + \mathbf{3a} - 0.42 &= -3a + \mathbf{3a} + 0.98 && \text{Add } 3a \text{ to each side} \\ 8a - 0.42 &= 0.98 \\ 8a - 0.42 + \mathbf{0.42} &= 0.98 + \mathbf{0.42} && \text{Add 0.42 to each side} \\ 8a &= 1.40 \\ \frac{8a}{\mathbf{8}} &= \frac{1.40}{\mathbf{8}} && \text{Divide each side by 8} \\ a &= 0.175\end{aligned}$$

Getting Ready for Class

After reading through the preceding section, respond in your own words and in complete sentences.

1. Apply the distributive property to the expression $3(x + 4)$.
2. Write the equation that results when $-4a$ is added to both sides of the equation below.

$$6a + 9 = 4a - 3$$

3. Solve the equation $2x + \frac{1}{2} = \frac{3}{4}$ by first adding $-\frac{1}{2}$ to each side.

Compare your answer with the solution to the equation shown in Example 6.

Answers

8. 53.5 9. 0.19

Problem Set 10.4

A Solve each equation using the methods shown in this section. [Examples 1–4]

1. $5(x + 1) = 20$

2. $4(x + 2) = 24$

3. $6(x - 3) = -6$

4. $7(x - 2) = -7$

5. $2x + 4 = 3x + 7$

6. $5x + 3 = 2x + (-3)$

7. $7y - 3 = 4y - 15$

8. $3y + 5 = 9y + 8$

9. $12x + 3 = -2x + 17$

10. $15x + 1 = -4x + 20$

11. $6x - 8 = -x - 8$

12. $7x - 5 = -x - 5$

13. $7(a - 1) + 4 = 11$

14. $3(a - 2) + 1 = 4$

15. $8(x + 5) - 6 = 18$

16. $7(x + 8) - 4 = 10$

17. $2(3x - 6) + 1 = 7$

18. $5(2x - 4) + 8 = 38$

19. $10(y + 1) + 4 = 3y + 7$

20. $12(y + 2) + 5 = 2y - 1$

21. $4(x - 6) + 1 = 2x - 9$

22. $7(x - 4) + 3 = 5x - 9$

23. $2(3x + 1) = 4(x - 1)$

24. $7(x - 8) = 2(x - 13)$

25. $3a + 4 = 2(a - 5) + 15$

26. $10a + 3 = 4(a - 1) + 1$

27. $9x - 6 = -3(x + 2) - 24$

28. $8x - 10 = -4(x + 3) + 2$

29. $3x - 5 = 11 + 2(x - 6)$

30. $5x - 7 = -7 + 2(x + 3)$

B Solve each equation by first finding the LCD for the fractions in the equation and then multiplying both sides of the equation by it. (Assume x is not 0 in Problems 39–46.) [Examples 5–7]

31. $\frac{x}{3} + \frac{x}{6} = 5$

32. $\frac{x}{2} - \frac{x}{4} = 3$

33. $\frac{x}{5} - x = 4$

34. $\frac{x}{3} + x = 8$

35. $3x + \frac{1}{2} = \frac{1}{4}$

36. $3x - \frac{1}{3} = \frac{1}{6}$

37. $\frac{x}{3} + \frac{1}{2} = -\frac{1}{2}$

38. $\frac{x}{2} + \frac{4}{3} = -\frac{2}{3}$

39. $\frac{4}{x} = \frac{1}{5}$

40. $\frac{2}{3} = \frac{6}{x}$

41. $\frac{3}{x} + 1 = \frac{2}{x}$

42. $\frac{4}{x} + 3 = \frac{1}{x}$

43. $\frac{3}{x} - \frac{2}{x} = \frac{1}{5}$

44. $\frac{7}{x} + \frac{1}{x} = 2$

45. $\frac{1}{x} - \frac{1}{2} = -\frac{1}{4}$

46. $\frac{3}{x} - \frac{4}{5} = -\frac{1}{5}$

Solve each equation.

47. $4x - 4.7 = 3.5$

48. $2x + 3.8 = -7.7$

49. $0.02 + 5y = -0.3$

50. $0.8 + 10y = -0.7$

51. $\frac{1}{3}x - 2.99 = 1.02$

52. $\frac{1}{7}x + 2.87 = -3.01$

53. $7n - 0.32 = 5n + 0.56$

54. $6n + 0.88 = 2n - 0.77$

55. $3a + 4.6 = 7a + 5.3$

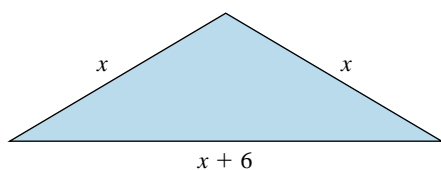
56. $2a - 3.3 = 7a - 5.2$

57. $0.5x + 0.1(x + 20) = 3.2$

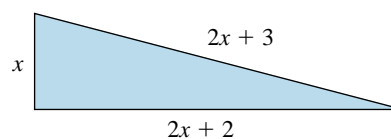
58. $0.1x + 0.5(x + 8) = 7$

Find the value of x for each of the figures, given the perimeter.

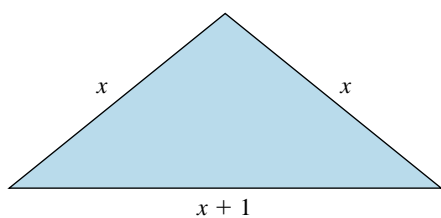
59. $P = 36$



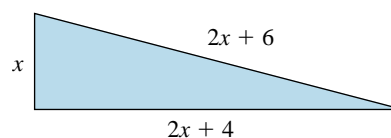
60. $P = 30$



61. $P = 16$




62. $P = 60$

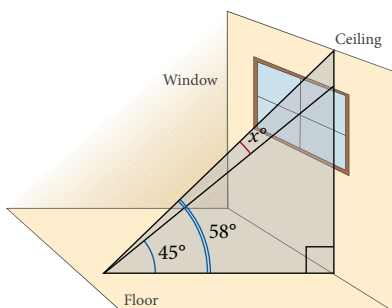


■ Applying the Concepts

63. **Skyscrapers** The chart shows the heights of the three tallest buildings in the world. The height of the Empire State Building relative to the Petronas Towers can be given by the equation $1483 = 233 + x$. What is the height of the Empire State Building?

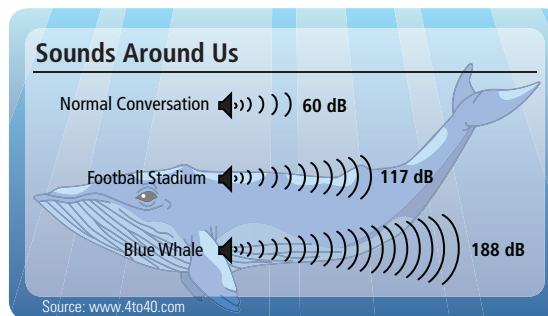


65. **Geometry** The figure shows part of a room. From a point on the floor, the angle of elevation to the top of the window is 45° , while the angle of elevation to the ceiling above the window is 58° . Solving either of the equations $58 - x = 45$ or $45 + x = 58$ will give us the number of degrees in the angle labeled x° . Solve both equations.




67. **Math Tutoring** Several students on campus decide to start a small business that offers tutoring services to students enrolled in mathematics courses. The following equation shows the amount of money they collected at the end of the month, assuming expenses of \$400 and a charge of \$30 an hour per student. Solve the equation $\$500 = \$30x - 400$ to determine the number of hours students came in for tutoring in one month.

64. **Sound** The chart shows the decibel level of various sounds. The human threshold of pain relative to the decibel level at a football stadium is given by the equation $117 = x - 3$. What is the human threshold of pain?



66. **Rhind Papyrus** As we mentioned in the introduction to this section, the Rhind Papyrus was created around 1650 BC and contains the riddle, "What quantity when added to one-fourth of itself becomes 15?" This riddle can be solved by finding x in the equation below. Solve this equation.

$$x + \frac{1}{4}x = 15$$



68. **Shopping for a Calculator** You find that you need to purchase a specific calculator for your college mathematics class. The equation $\$18.75 = p + \frac{1}{4}p$ shows the price charged by the college bookstore for a calculator after it has been marked up. How much did the bookstore pay the manufacturer for the calculator?

■ Getting Ready for the Next Section

Write the mathematical expressions that are equivalent to each of the following English phrases.

69. The sum of a number and 2

70. The sum of a number and 5

71. Twice a number

72. Three times a number

73. Twice the sum of a number and 6

74. Three times the sum of a number and 8

75. The difference of x and 4

76. The difference of 4 and x

77. The sum of twice a number and 5

78. The sum of three times a number and 4

■ Maintaining Your Skills

Place the correct symbol, $<$ or $>$, between the numbers.

79. 0.02

0.2

80. 0.3

0.03

81. 0.45

0.4

82. 0.5

0.56

Write the numbers in order from smallest to largest.

83. 0.01 0.013 0.03 0.003 0.031 0.001

84. 0.062 0.006 0.002 0.02 0.06 0.026

■ Extending the Concepts

85. Admission to the school basketball game is \$4 for students and \$6 for general admission. For the first game of the season, 100 more student tickets than general admission tickets were sold. The total amount of money collected was \$2,400.

a. Write an equation that will help us find the number of students in attendance.

b. Solve this equation for x .

c. What was the total attendance for the game?

Introduction . . .

As you begin reading through the examples in this section, you may find yourself asking why some of these problems seem so contrived. The title of the section is “Applications,” but many of the problems here don’t seem to have much to do with real life. You are right about that. Example 5 is what we refer to as an “age problem.” Realistically, it is not the kind of problem you would expect to find if you choose a career in which you use algebra. However, solving age problems is good practice for someone with little experience with application problems, because the solution process has a form that can be applied to all similar age problems.

To begin this section we list the steps used in solving application problems. We call this strategy the *Blueprint for Problem Solving*. It is an outline that will overlay the solution process we use on all application problems.

Blueprint for Problem Solving

- Step 1:** **Read** the problem, and then mentally **list** the items that are known and the items that are unknown.
- Step 2:** **Assign a variable** to one of the unknown items. (In most cases this will amount to letting x equal the item that is asked for in the problem.) Then **translate** the other **information** in the problem to expressions involving the variable.
- Step 3:** **Reread** the problem, and then **write an equation**, using the items and variables listed in Steps 1 and 2, that describes the situation.
- Step 4:** **Solve the equation** found in Step 3.
- Step 5:** **Write** your **answer** using a complete sentence.
- Step 6:** **Reread** the problem, and **check** your solution with the original words in the problem.

There are a number of substeps within each of the steps in our blueprint. For instance, with Steps 1 and 2 it is always a good idea to draw a diagram or picture if it helps you to visualize the relationship between the items in the problem.

It is important for you to remember that solving application problems is more of an art than a science. Be flexible. No one strategy works all of the time. Try to stay away from looking for the “one way” to set up and solve a problem. Think of the blueprint for problem solving as guidelines that will help you organize your approach to these problems, rather than as a set of rules.

A Number Problems

EXAMPLE 1

The sum of a number and 2 is 8. Find the number.

SOLUTION Using our blueprint for problem solving as an outline, we solve the problem as follows:

Step 1 *Read* the problem, and then mentally *list* the items that are known and the items that are unknown.

Known items: The numbers 2 and 8
Unknown item: The number in question

Objectives

- A** Set up and solve number problems using linear equations.
- B** Set up and solve geometry problems using linear equations.
- C** Set up and solve age problems using linear equations.

PRACTICE PROBLEMS

- The sum of a number and 3 is 10. Find the number.

Chapter 10 Solving Equations

Step 2 Assign a variable to one of the unknown items. Then *translate* the other information in the problem to expressions involving the variable.

Let x = the number asked for in the problem
Then “The sum of a number and 2” translates to $x + 2$.

Step 3 Reread the problem, and then *write an equation*, using the items and variables listed in Steps 1 and 2, that describes the situation.

With all word problems, the word “is” translates to $=$.

The sum of x and 2 is 8.
 $x + 2 = 8$

Step 4 Solve the equation found in Step 3.

$$\begin{aligned}x + 2 &= 8 \\x + 2 + (-2) &= 8 + (-2) && \text{Add } -2 \text{ to each side} \\x &= 6\end{aligned}$$

Step 5 Write your answer using a complete sentence.

The number is 6.

Step 6 Reread the problem, and *check* your solution with the original words in the problem.

The sum of 6 and 2 is 8. A true statement

To help with other problems of the type shown in Example 1, here are some common English words and phrases and their mathematical translations.

English	Algebra
The sum of a and b	$a + b$
The difference of a and b	$a - b$
The product of a and b	$a \cdot b$
The quotient of a and b	$\frac{a}{b}$
Of	\cdot (multiply)
Is	$=$ (equals)
A number	x
4 more than x	$x + 4$
4 times x	$4x$
4 less than x	$x - 4$

You may find some examples and problems in this section and the problem set that follows that you can solve without using algebra or our blueprint. It is very important that you solve those problems using the methods we are showing here. The purpose behind these problems is to give you experience using the blueprint as a guide to solving problems written in words. Your answers are much less important than the work that you show in obtaining your answer.

EXAMPLE 2

If 5 is added to the sum of twice a number and three times the number, the result is 25. Find the number.

SOLUTION

Step 1 Read and list.

Known items: The numbers 5 and 25, twice a number, and three times a number

Unknown item: The number in question

2. If 4 is added to the sum of twice a number and three times the number, the result is 34. Find the number.

Answer

1. The number is 7.

Step 2 Assign a variable and translate the information.

Let x = the number asked for in the problem.
Then “The sum of twice a number and three times the number” translates to $2x + 3x$.

Step 3 Reread and write an equation.

$$\begin{array}{ccccccc} 5 & \text{added to} & \text{the sum of twice a number} & \text{is 25} & & & \\ & \swarrow & \searrow & \swarrow & \searrow & & \\ & 5 & + & 2x + 3x & = & 25 & \end{array}$$

Step 4 Solve the equation.

$$\begin{array}{l} 5 + 2x + 3x = 25 \\ 5x + 5 = 25 \quad \text{Simplify the left side} \\ 5x + 5 + (-5) = 25 + (-5) \quad \text{Add } -5 \text{ to both sides} \\ 5x = 20 \quad \text{Addition} \\ \frac{5x}{5} = \frac{20}{5} \quad \text{Divide by 5} \\ x = 4 \end{array}$$

Step 5 Write your answer.

The number is 4.

Step 6 Reread and check.

Twice **4** is 8, and three times **4** is 12. Their sum is $8 + 12 = 20$. Five added to this is 25. Therefore, 5 added to the sum of twice **4** and three times **4** is 25. ■

B Geometry Problems

EXAMPLE 3

The length of a rectangle is three times the width. The perimeter is 72 centimeters. Find the width and the length.

SOLUTION

Step 1 Read and list.

Known items: The length is three times the width.
The perimeter is 72 centimeters.
Unknown items: The length and the width

Step 2 Assign a variable, and translate the information. We let x = the width. Because the length is three times the width, the length must be $3x$. A picture will help.

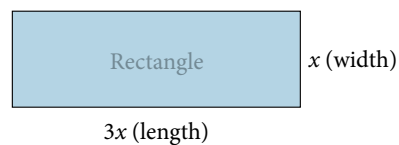


FIGURE 1

3. The length of a rectangle is twice the width. The perimeter is 42 centimeters. Find the length and the width.

Answer

2. The number is 6.

Step 3 *Reread and write an equation.* Because the perimeter is the sum of the sides, it must be $x + x + 3x + 3x$ (the sum of the four sides). But the perimeter is also given as 72 centimeters. Hence,

$$x + x + 3x + 3x = 72$$

Step 4 *Solve the equation.*

$$x + x + 3x + 3x = 72$$

$$8x = 72$$

$$x = 9$$

Step 5 *Write your answer.* The width, x , is 9 centimeters. The length, $3x$, must be 27 centimeters.

Step 6 *Reread and check.* From the diagram below, we see that these solutions check:

Perimeter is 72

Length = $3 \times$ Width

$$9 + 9 + 27 + 27 = 72$$

$$27 = 3 \cdot 9$$

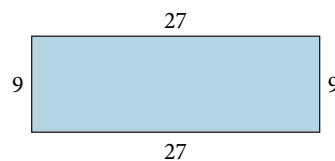


FIGURE 2

Next we review some facts about triangles that we introduced in a previous chapter.

FACTS FROM GEOMETRY Labeling Triangles and the Sum of the Angles in a Triangle

One way to label the important parts of a triangle is to label the vertices with capital letters and the sides with small letters, as shown in Figure 3.

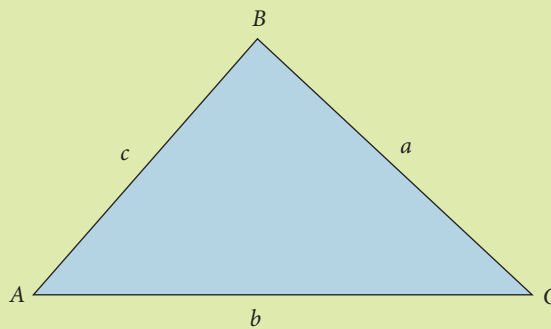


FIGURE 3

In Figure 3, notice that side a is opposite vertex A , side b is opposite vertex B , and side c is opposite vertex C . Also, because each vertex is the vertex of one of the angles of the triangle, we refer to the three interior angles as A , B , and C .

In any triangle, the sum of the interior angles is 180° . For the triangle shown in Figure 3, the relationship is written

$$A + B + C = 180^\circ$$

Answer

3. The width is 7 cm, and the length is 14 cm.

EXAMPLE 4

The angles in a triangle are such that one angle is twice the smallest angle, while the third angle is three times as large as the smallest angle. Find the measure of all three angles.

SOLUTION

Step 1 *Read and list.*

Known items: The sum of all three angles is 180° ; one angle is twice the smallest angle; and the largest angle is three times the smallest angle.

Unknown items: The measure of each angle

Step 2 *Assign a variable and translate information.* Let x be the smallest angle, then $2x$ will be the measure of another angle, and $3x$ will be the measure of the largest angle.

Step 3 *Reread and write an equation.* When working with geometric objects, drawing a generic diagram will sometimes help us visualize what it is that we are asked to find. In Figure 4, we draw a triangle with angles A , B , and C .

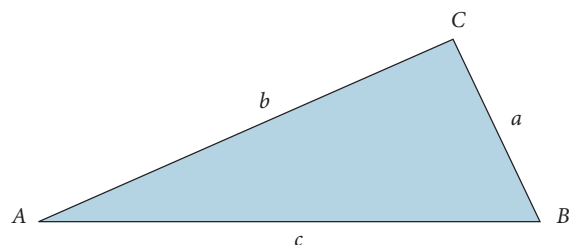


FIGURE 4

We can let the value of $A = x$, the value of $B = 2x$, and the value of $C = 3x$. We know that the sum of angles A , B , and C will be 180° , so our equation becomes

$$x + 2x + 3x = 180^\circ$$

Step 4 *Solve the equation.*

$$x + 2x + 3x = 180^\circ$$

$$6x = 180^\circ$$

$$x = 30^\circ$$

Step 5 *Write the answer.*

The smallest angle A measures 30° .

Angle B measures $2x$, or $2(30^\circ) = 60^\circ$.

Angle C measures $3x$, or $3(30^\circ) = 90^\circ$.

Step 6 *Reread and check.* The angles must add to 180° :

$$A + B + C = 180^\circ$$

$$30^\circ + 60^\circ + 90^\circ = 180^\circ$$

$$180^\circ = 180^\circ$$

Our answers check



4. The angles in a triangle are such that one angle is three times the smallest angle, while the largest angle is five times the smallest angle. Find the measure of all three angles.

Answer

4. The angles are 20° , 60° , and 100° .

C Age Problem

5. Joyce is 21 years older than her son Travis. In six years the sum of their ages will be 49. How old are they now?

EXAMPLE 5

Jo Ann is 22 years older than her daughter Stacey. In six years the sum of their ages will be 42. How old are they now?

SOLUTION

Step 1 Read and list:

Known items: Jo Ann is 22 years older than Stacey. Six years from now their ages will add to 42.

Unknown items: Their ages now

Step 2 Assign a variable and translate the information. Let x = Stacey's age now. Because Jo Ann is 22 years older than Stacey, her age is $x + 22$.

Step 3 Reread and write an equation. As an aid in writing the equation we use the following table:

	Now	In Six years
Stacey	x	$x + 6$
Jo Ann	$x + 22$	$x + 28$

Their ages in six years will be their ages now plus 6

Because the sum of their ages six years from now is 42, we write the equation as

$$(x + 6) + (x + 28) = 42$$

↑ ↑
Stacey's age in 6 years Jo Ann's age in 6 years

Step 4 Solve the equation.

$$x + 6 + x + 28 = 42$$

$$2x + 34 = 42$$

$$2x = 8$$

$$x = 4$$

Step 5 Write your answer. Stacey is now 4 years old, and Jo Ann is $4 + 22 = 26$ years old.

Step 6 Reread and check. To check, we see that in six years, Stacey will be 10, and Jo Ann will be 32. The sum of 10 and 32 is 42, which checks. ■

Car Rental Problem

EXAMPLE 6

A car rental company charges \$11 per day and 16 cents per mile for their cars. If a car were rented for 1 day and the charge was \$25.40, how many miles was the car driven?

SOLUTION

Step 1 Read and list.

Known items: Charges are \$11 per day and 16 cents per mile. Car is rented for 1 day. Total charge is \$25.40.

Unknown items: How many miles the car was driven

6. If a car were rented from the company in Example 6 for 2 days and the total charge was \$41, how many miles was the car driven?

Answer

5. Travis is 8; Joyce is 29.

Step 2 *Assign a variable and translate information.* If we let x = the number of miles driven, then the charge for the number of miles driven will be $0.16x$, the cost per mile times the number of miles.

Step 3 *Reread and write an equation.* To find the total cost to rent the car, we add 11 to $0.16x$. Here is the equation that describes the situation:

$$\underbrace{\$11 \text{ per day}}_{11} + \underbrace{16 \text{ cents per mile}}_{0.16x} = \underbrace{\text{Total cost}}_{25.40}$$

Step 4 *Solve the equation.* To solve the equation, we add -11 to each side and then divide each side by 0.16 .

$$\begin{aligned} 11 + (-11) + 0.16x &= 25.40 + (-11) && \text{Add } -11 \text{ to each side} \\ 0.16x &= 14.40 \\ \frac{0.16x}{0.16} &= \frac{14.40}{0.16} && \text{Divide each side by } 0.16 \\ x &= 90 && 14.40 \div 0.16 = 90 \end{aligned}$$

Step 5 *Write the answer.* The car was driven 90 miles.

Step 6 *Reread and check.* The charge for 1 day is \$11. The 90 miles adds $90(\$0.16) = \14.40 to the 1-day charge. The total is $\$11 + \$14.40 = \$25.40$, which checks with the total charge given in the problem. ■

Coin Problem

EXAMPLE 7

Diane has \$1.60 in dimes and nickels. If she has 7 more dimes than nickels, how many of each coin does she have?

SOLUTION

Step 1 *Read and list.*

Known items: We have dimes and nickels. There are 7 more dimes than nickels, and the total value of the coins is \$1.60.

Unknown items: How many of each type of coin Diane has

Step 2 *Assign a variable and translate information.* If we let x = the number of nickels, then the number of dimes must be $x + 7$, because Diane has 7 more dimes than nickels. Because each nickel is worth 5 cents, the amount of money she has in nickels is $0.05x$. Similarly, because each dime is worth 10 cents, the amount of money she has in dimes is $0.10(x + 7)$. Here is a table that summarizes what we have so far:

	Nickels	Dimes
Number of	x	$x + 7$
Value of	$0.05x$	$0.10(x + 7)$

7. Amy has \$1.75 in dimes and quarters. If she has 7 more dimes than quarters, how many of each coin does she have?

Answer

6. The car was driven 118.75 miles.

Step 3 *Reread and write an equation.* Because the total value of all the coins is \$1.60, the equation that describes this situation is

$$\begin{array}{rcccl} \text{Amount of money} & + & \text{Amount of money} & = & \text{Total amount} \\ \text{in nickels} & & \text{in dimes} & & \text{of money} \\ \hline 0.05x & + & 0.10(x + 7) & = & 1.60 \end{array}$$

Step 4 *Solve the equation.* This time, let's show only the essential steps in the solution.

$$\begin{array}{ll} 0.05x + 0.10x + 0.70 = 1.60 & \text{Distributive property} \\ 0.15x + 0.70 = 1.60 & \text{Add } 0.05x \text{ and } 0.10x \text{ to get } 0.15x \\ 0.15x = 0.90 & \text{Add } -0.70 \text{ to each side} \\ x = 6 & \text{Divide each side by } 0.15 \end{array}$$

Step 5 *Write the answer.* Because $x = 6$, Diane has 6 nickels. To find the number of dimes, we add 7 to the number of nickels (she has 7 more dimes than nickels). The number of dimes is $6 + 7 = 13$.

Step 6 *Reread and check.* Here is a check of our results.

$$\begin{array}{l} 6 \text{ nickels are worth } 6(\$0.05) = \$0.30 \\ 13 \text{ dimes are worth } 13(\$0.10) = \$1.30 \\ \hline \text{The total value is} \qquad \qquad \qquad \$1.60 \end{array}$$

Getting Ready for Class

After reading through the preceding section, respond in your own words and in complete sentences.

1. What is the first step in solving a word problem?
2. Write a mathematical expression equivalent to the phrase "the sum of x and ten."
3. Write a mathematical expression equivalent to the phrase "twice the sum of a number and ten."
4. Suppose the length of a rectangle is three times the width. If we let x represent the width of the rectangle, what expression do we use to represent the length?

Answer

7. There are 3 quarters and 10 dimes.

Problem Set 10.5

Write each of the following English phrases in symbols using the variable x .

1. The sum of x and 3
2. The difference of x and 2
3. The sum of twice x and 1
4. The sum of three times x and 4
5. Five x decreased by 6
6. Twice the sum of x and 5
7. Three times the sum of x and 1
8. Four times the sum of twice x and 1
9. Five times the sum of three x and 4
10. Three x added to the sum of twice x and 1

Use the six steps in the “Blueprint for Problem Solving” to solve the following word problems. You may recognize the solution to some of them by just reading the problem. In all cases, be sure to assign a variable and write the equation used to describe the problem. Write your answer using a complete sentence.

A Number Problems [Examples 1, 2]

11. The sum of a number and 3 is 5. Find the number.
12. If 2 is subtracted from a number, the result is 4. Find the number.
13. The sum of twice a number and 1 is -3 . Find the number.
14. If three times a number is increased by 4, the result is -8 . Find the number.
15. When 6 is subtracted from five times a number, the result is 9. Find the number.
16. Twice the sum of a number and 5 is 4. Find the number.
17. Three times the sum of a number and 1 is 18. Find the number.
18. Four times the sum of twice a number and 6 is -8 . Find the number.
19. Five times the sum of three times a number and 4 is -10 . Find the number.
20. If the sum of three times a number and two times the same number is increased by 1, the result is 16. Find the number.

B Geometry Problems [Examples 3, 4]

21. The length of a rectangle is twice its width. The perimeter is 30 meters. Find the length and the width.
22. The width of a rectangle is 3 feet less than its length. If the perimeter is 22 feet, what is the width?
23. The perimeter of a square is 32 centimeters. What is the length of one side?
24. Two sides of a triangle are equal in length, and the third side is 10 inches. If the perimeter is 26 inches, how long are the two equal sides?
25. Two angles in a triangle are equal, and their sum is equal to the third angle in the triangle. What are the measures of each of the three interior angles?
26. One angle in a triangle measures twice the smallest angle, while the largest angle is six times the smallest angle. Find the measures of all three angles.
27. The smallest angle in a triangle is $\frac{1}{3}$ as large as the largest angle. The third angle is twice the smallest angle. Find the three angles.
28. One angle in a triangle is half the largest angle, but three times the smallest. Find all three angles.

C Age Problems [Example 5]

29. Pat is 20 years older than his son Patrick. In 2 years, the sum of their ages will be 90. How old are they now?
30. Diane is 23 years older than her daughter Amy. In 5 years, the sum of their ages will be 91. How old are they now?

	Now	In 2 Years
Patrick	x	
Pat		

	Now	In 5 Years
Amy	x	
Diane		

31. Dale is 4 years older than Sue. Five years ago the sum of their ages was 64. How old are they now?
32. Pat is 2 years younger than his wife, Wynn. Ten years ago the sum of their ages was 48. How old are they now?

Renting a Car [Example 6]

33. A car rental company charges \$10 a day and 16 cents per mile for their cars. If a car were rented for 1 day for a total charge of \$23.92, how many miles was it driven?
34. A car rental company charges \$12 a day and 18 cents per mile to rent their cars. If the total charge for a 1-day rental were \$33.78, how many miles was the car driven?
35. A rental company charges \$9 per day and 15 cents a mile for their cars. If a car were rented for 2 days for a total charge of \$40.05, how many miles was it driven?
36. A car rental company charges \$11 a day and 18 cents per mile to rent their cars. If the total charge for a 2-day rental were \$61.60, how many miles was it driven?

Coin Problems [Example 7]

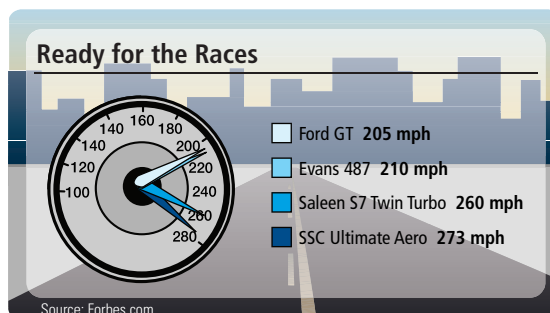
37. Mary has \$2.20 in dimes and nickels. If she has 10 more dimes than nickels, how many of each coin does she have?
38. Bob has \$1.65 in dimes and nickels. If he has 9 more nickels than dimes, how many of each coin does he have?
39. Suppose you have \$9.60 in dimes and quarters. How many of each coin do you have if you have twice as many quarters as dimes?
40. A collection of dimes and quarters has a total value of \$2.75. If there are 3 times as many dimes as quarters, how many of each coin is in the collection?

Miscellaneous Problems

41. **Magic Square** The sum of the numbers in each row, each column, and each diagonal of the square below is 15. Use this fact, along with the information in the first column of the square, to write an equation containing the variable x , then solve the equation to find x . Next, write and solve equations that will give you y and z .

x	1	y
3	5	7
4	z	2


43. **Wages** JoAnn works in the publicity office at the state university. She is paid \$14 an hour for the first 35 hours she works each week and \$21 an hour for every hour after that. If she makes \$574 one week, how many hours did she work?
45. **Cars** The chart shows the fastest cars in America. The maximum speed of an Evans 487 is twice the sum of the speed of a trucker and 45 miles per hour. What is the speed of the trucker?



42. **Magic Square** The sum of the numbers in each row, each column, and each diagonal of the square below is 3. Use this fact, along with the information in the second row of the square, to write an equation containing the variable a , then solve the equation to find a . Next, write and solve an equation that will allow you to find the value of b . Next, write and solve equations that will give you c and d .

4	d	b
a	1	3
0	c	-2

44. **Ticket Sales** Stacey is selling tickets to the school play. The tickets are \$6 for adults and \$4 for children. She sells twice as many adult tickets as children's tickets and brings in a total of \$112. How many of each kind of ticket did she sell?
46. **Skyscrapers** The chart shows the heights of the three tallest buildings in the world. The Sears Tower is 80 feet less than 5 times the height of the Statue of Liberty. What is the height of the Statue of Liberty?



Getting Ready for the Next Section

Simplify.

47. $\frac{5}{9}(95 - 32)$

48. $\frac{5}{9}(77 - 32)$

49. Find the value of $90 - x$ when $x = 25$.

50. Find the value of $180 - x$ when $x = 25$.

51. Find the value of $2x + 6$ when $x = -2$

52. Find the value of $2x + 6$ when $x = 0$.

Solve.

53. $40 = 2l + 12$

54. $80 = 2l + 12$

55. $6 + 3y = 4$

56. $8 + 3y = 4$

Maintaining Your Skills

The problems below review some of the work you have done with percents.

Change each fraction to a decimal and then to a percent.

57. $\frac{3}{4}$

58. $\frac{5}{8}$

59. $1\frac{1}{5}$

60. $\frac{7}{10}$

Change each percent to a fraction and a decimal.

61. 37%

62. 18%

63. 3.4%

64. 125%

65. What number is 15% of 135?

66. 19 is what percent of 38?

67. 12 is 16% of what number?

Objectives

- A** Solve a formula for a given variable.
B Solve problems using the rate equation.

Introduction . . .

In mathematics a formula is an equation that contains more than one variable. The equation $P = 2w + 2l$ is an example of a formula. This formula tells us the relationship between the perimeter P of a rectangle, its length l , and its width w .

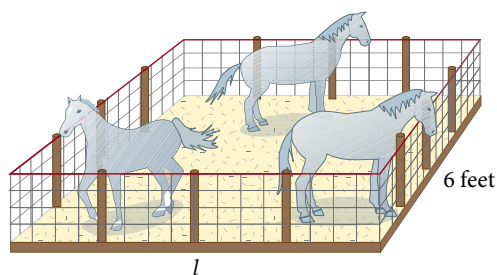
There are many formulas with which you may be familiar already. Perhaps you have used the formula $d = r \cdot t$ to find out how far you would go if you traveled at 50 miles an hour for 3 hours. If you take a chemistry class while you are in college, you will certainly use the formula that gives the relationship between the two temperature scales, Fahrenheit and Celsius:

$$F = \frac{9}{5}C + 32$$

Although there are many kinds of problems we can work using formulas, we will limit ourselves to those that require only substitutions. The examples that follow illustrate this type of problem.

A Formulas**EXAMPLE 1**

The perimeter P of a rectangular livestock pen is 40 feet. If the width w is 6 feet, find the length.



SOLUTION First we substitute 40 for P and 6 for w in the formula $P = 2l + 2w$. Then we solve for l :

When	$P = 40$ and $w = 6$	
the formula	$P = 2l + 2w$	
becomes	$40 = 2l + 2(6)$	
or	$40 = 2l + 12$	Multiply 2 and 6
	$28 = 2l$	Add -12 to each side
	$14 = l$	Multiply each side by $\frac{1}{2}$

To summarize our results, if a rectangular pen has a perimeter of 40 feet and a width of 6 feet, then the length must be 14 feet. ■

PRACTICE PROBLEMS

- Suppose the livestock pen in Example 1 has a perimeter of 80 feet. If the width is still 6 feet, what is the new length?

Answer

- 34 feet

2. Use the formula in Example 2 to find C when F is 77 degrees.

Note

The formula we are using here,

$$C = \frac{5}{9}(F - 32),$$

is an alternative form of the formula we mentioned in the introduction to this section:

$$F = \frac{9}{5}C + 32$$

Both formulas describe the same relationship between the two temperature scales. If you go on to take an algebra class, you will learn how to convert one formula into the other.

3. Use the formula in Example 3 to find y when x is 0.

4. Use the formula in Example 4 to find y when x is -3 .

Answers

2. 25 degrees Celsius 3. 6
4. $\frac{10}{3}$

Chapter 10 Solving Equations

EXAMPLE 2

Use the formula $C = \frac{5}{9}(F - 32)$ to find C when F is 95 degrees.

SOLUTION Substituting 95 for F in the formula gives us the following:

$$\begin{aligned} \text{When } F &= 95 \\ \text{the formula } C &= \frac{5}{9}(F - 32) \\ \text{becomes } C &= \frac{5}{9}(95 - 32) \\ &= \frac{5}{9}(63) \\ &= \frac{5}{9} \cdot \frac{63}{1} \\ &= \frac{315}{9} \\ &= 35 \end{aligned}$$

A temperature of 95 degrees Fahrenheit is the same as a temperature of 35 degrees Celsius.

EXAMPLE 3

Use the formula $y = 2x + 6$ to find y when x is -2 .

SOLUTION Proceeding as we have in the previous examples, we have:

$$\begin{aligned} \text{When } x &= -2 \\ \text{the formula } y &= 2x + 6 \\ \text{becomes } y &= 2(-2) + 6 \\ &= -4 + 6 \\ &= 2 \end{aligned}$$

In some cases evaluating a formula also involves solving an equation, as the next example illustrates.

EXAMPLE 4

Find y when x is 3 in the formula $2x + 3y = 4$.

SOLUTION First we substitute 3 for x ; then we solve the resulting equation for y .

$$\begin{aligned} \text{When } x &= 3 \\ \text{the equation } 2x + 3y &= 4 \\ \text{becomes } 2(3) + 3y &= 4 \\ 6 + 3y &= 4 \\ 3y &= -2 && \text{Add } -6 \text{ to each side} \\ y &= -\frac{2}{3} && \text{Divide each side by 3} \end{aligned}$$

B Rate Equation

Now we will look at some problems that use what is called the *rate equation*. You use this equation on an intuitive level when you are estimating how long it will take you to drive long distances. For example, if you drive at 50 miles per hour for 2 hours, you will travel 100 miles. Here is the rate equation:

$$\text{Distance} = \text{rate} \cdot \text{time, or } d = r \cdot t$$

The rate equation has two equivalent forms, one of which is obtained by solving for r , while the other is obtained by solving for t . Here they are:

$$r = \frac{d}{t} \text{ and } t = \frac{d}{r}$$

The rate in this equation is also referred to as *average speed*.

EXAMPLE 5

At 1 P.M., Jordan leaves her house and drives at an average speed of 50 miles per hour to her sister's house. She arrives at 4 P.M.

- How many hours was the drive to her sister's house?
- How many miles from her sister does Jordan live?

SOLUTION

- If she left at 1:00 P.M. and arrived at 4:00 P.M., we simply subtract 1 from 4 for an answer of 3 hours.
- We are asked to find a distance in miles given a rate of 50 miles per hour and a time of 3 hours. We will use the rate equation, $d = r \cdot t$, to solve this. We have:

$$\begin{aligned} d &= 50 \text{ miles per hour} \cdot 3 \text{ hours} \\ d &= 50(3) \\ d &= 150 \text{ miles} \end{aligned}$$

Notice that we were asked to find a distance in miles, so our answer has a unit of miles. When we are asked to find a time, our answer will include a unit of time, like days, hours, minutes, or seconds.

When we are asked to find a rate, our answer will include units of rate, like miles per hour, feet per second, problems per minute, and so on.

FACTS FROM GEOMETRY

Earlier we defined complementary angles as angles that add to 90° . That is, if x and y are complementary angles, then

$$x + y = 90^\circ$$

If we solve this formula for y , we obtain a formula equivalent to our original formula:

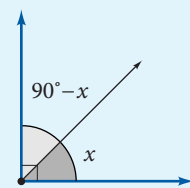
$$y = 90^\circ - x$$

Because y is the complement of x , we can generalize by saying that the complement of angle x is the angle $90^\circ - x$. By a similar reasoning process, we can say that the supplement of angle x is the angle $180^\circ - x$. To summarize, if x is an angle, then

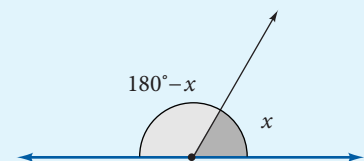
$$\begin{aligned} \text{the complement of } x &\text{ is } 90^\circ - x, \text{ and} \\ \text{the supplement of } x &\text{ is } 180^\circ - x \end{aligned}$$

If you go on to take a trigonometry class, you will see these formulas again.

- At 9 A.M. Maggie leaves her house and drives at an average speed of 60 miles per hour to her sister's house. She arrives at 11 A.M.
 - How many hours was the drive to her sister's house?
 - How many miles from her sister does Maggie live?



Complementary angles



Supplementary angles

Answer

5. a. 2 hours b. 120 miles

6. Find the complement and the supplement of 35° .

Answer

6. Complement = 55° ;
Supplement = 145°

EXAMPLE 6

Find the complement and the supplement of 25° .

SOLUTION We can use the formulas above with $x = 25^\circ$.

The complement of 25° is $90^\circ - 25^\circ = 65^\circ$.

The supplement of 25° is $180^\circ - 25^\circ = 155^\circ$.

Getting Ready for Class

After reading through the preceding section, respond in your own words and in complete sentences.

1. What is a formula?
2. How do you solve a formula for one of its variables?
3. What are complementary angles?
4. What is the formula that converts temperature on the Celsius scale to temperature on the Fahrenheit scale?

Problem Set 10.6

A The formula for the area A of a rectangle with length l and width w is $A = l \cdot w$. Find A if: [Examples 1–4]

1. $l = 32$ feet and $w = 22$ feet

2. $l = 22$ feet and $w = 12$ feet

3. $l = \frac{3}{2}$ inch and $w = \frac{3}{4}$ inch

4. $l = \frac{3}{5}$ inch and $w = \frac{3}{10}$ inch

The formula $G = H \cdot R$ tells us how much gross pay G a person receives for working H hours at an hourly rate of pay R . In Problems 5–8, find G .

5. $H = 40$ hours and $R = \$6$

6. $H = 36$ hours and $R = \$8$

7. $H = 30$ hours and $R = \$9\frac{1}{2}$

8. $H = 20$ hours and $R = \$6\frac{3}{4}$

Because there are 3 feet in every yard, the formula $F = 3 \cdot Y$ will convert Y yards into F feet. In Problems 9–12, find F .

9. $Y = 4$ yards

10. $Y = 8$ yards

11. $Y = 2\frac{2}{3}$ yards

12. $Y = 6\frac{1}{3}$ yards

If you invest P dollars (P is for *principal*) at simple interest rate R for T years, the amount of interest you will earn is given by the formula $I = P \cdot R \cdot T$. In Problems 13 and 14, find I .

13. $P = \$1,000$, $R = \frac{7}{100}$, and $T = 2$ years

14. $P = \$2,000$, $R = \frac{6}{100}$, and $T = 2\frac{1}{2}$ years

In Problems 15–18, use the formula $P = 2w + 2l$ to find P .

15. $w = 10$ inches and $l = 19$ inches

16. $w = 12$ inches and $l = 22$ inches

17. $w = \frac{3}{4}$ foot and $l = \frac{7}{8}$ foot

18. $w = \frac{1}{2}$ foot and $l = \frac{3}{2}$ feet

We have mentioned the two temperature scales, Fahrenheit and Celsius. Table 1 is intended to give you a more intuitive idea of the relationship between the two temperatures scales.

TABLE 1

COMPARING TWO TEMPERATURE SCALES

Situation	Temperature (Fahrenheit)	Temperature (Celsius)
Water freezes	32°F	0°C
Room temperature	68°F	20°C
Normal body temperature	$98\frac{3}{5}$ °F	37°C
Water boils	212°F	100°C
Bake cookies	365°F	185°C

Table 2 gives the formulas, in both symbols and words, that are used to convert between the two scales.

TABLE 2

FORMULAS FOR CONVERTING BETWEEN TEMPERATURE SCALES

To Convert From	Formula In Symbols	Formula In Words
Fahrenheit to Celsius	$C = \frac{5}{9}(F - 32)$	Subtract 32, then multiply by $\frac{5}{9}$.
Celsius to Fahrenheit	$F = \frac{9}{5}C + 32$	Multiply by $\frac{9}{5}$, then add 32.

19. Let $F = 212$ in the formula $C = \frac{5}{9}(F - 32)$, and solve for C . Does the value of C agree with the information in Table 1?
20. Let $C = 100$ in the formula $F = \frac{9}{5}C + 32$, and solve for F . Does the value of F agree with the information in Table 1?
21. Let $F = 68$ in the formula $C = \frac{5}{9}(F - 32)$, and solve for C . Does the value of C agree with the information in Table 1?
22. Let $C = 37$ in the formula $F = \frac{9}{5}C + 32$, and solve for F . Does the value of F agree with the information in Table 1?
23. Find C when F is 32° .
24. Find C when F is -4° .
25. Find F when C is -15° .
26. Find F when C is 35° .

B Maximum Heart Rate In exercise physiology, a person's maximum heart rate, in beats per minute, is found by subtracting his age in years from 220. So, if A represents your age in years, then your maximum heart rate is

$$M = 220 - A$$

Use this formula to complete the following tables.

27.

Age (years)	Maximum Heart Rate (beats per minute)
18	
19	
20	
21	
22	
23	

28.

Age (years)	Maximum Heart Rate (beats per minute)
15	
20	
25	
30	
35	
40	

Training Heart Rate A person's training heart rate, in beats per minute, is the person's resting heart rate plus 60% of the difference between maximum heart rate and his resting heart rate. If resting heart rate is R and maximum heart rate is M , then the formula that gives training heart rate is

$$T = R + \frac{3}{5}(M - R)$$

Use this formula along with the results of Problems 27 and 28 to fill in the following two tables.

29. For a 20-year-old person

Resting Heart Rate (beats per minute)	Training Heart Rate (beats per minute)
60	
65	
70	
75	
80	
85	

30. For a 40-year-old person

Resting Heart Rate (beats per minute)	Training Heart Rate (beats per minute)
60	
65	
70	
75	
80	
85	

B Use the rate equation $d = r \cdot t$ to solve Problems 31 and 32. [Example 5]

31. At 2:30 P.M. Shelly leaves her house and drives at an average speed of 55 miles per hour to her sister's house. She arrives at 6:30 P.M.

- How many hours was the drive to her sister's house?
- How many miles from her sister does Shelly live?

32. At 1:30 P.M. Cary leaves his house and drives at an average speed of 65 miles per hour to his brother's house. He arrives at 5:30 P.M.

- How many hours was the drive to his brother's house?
- How many miles from his brother's house does Cary live?

Use the rate equation $r = \frac{d}{t}$ to solve Problems 33 and 34.

- 33.** At 2:30 P.M. Brittney leaves her house and drives 260 miles to her sister's house. She arrives at 6:30 P.M.
- How many hours was the drive to her sister's house?
 - What was Brittney's average speed?
- 34.** At 8:30 A.M. Ethan leaves his house and drives 220 miles to his brother's house. He arrives at 12:30 P.M.
- How many hours was the drive to his brother's house?
 - What was Ethan's average speed?

As you know, the volume V enclosed by a rectangular solid with length l , width w , and height h is $V = l \cdot w \cdot h$. In Problems 35–38, find V if:

- 35.** $l = 6$ inches, $w = 12$ inches, and $h = 5$ inches
- 36.** $l = 16$ inches, $w = 22$ inches, and $h = 15$ inches
- 37.** $l = 6$ yards, $w = \frac{1}{2}$ yard, and $h = \frac{1}{3}$ yard
- 38.** $l = 30$ yards, $w = \frac{5}{2}$ yards, and $h = \frac{5}{3}$ yards

Suppose $y = 3x - 2$. In Problems 39–44, find y if:

- 39.** $x = 3$ **40.** $x = -5$ **41.** $x = -\frac{1}{3}$ **42.** $x = \frac{2}{3}$ **43.** $x = 0$ **44.** $x = 5$

Suppose $x + y = 5$. In Problems 45–50, find x if:

- 45.** $y = 2$ **46.** $y = -2$ **47.** $y = 0$ **48.** $y = 5$ **49.** $y = -3$ **50.** $y = 3$

Suppose $x + y = 3$. In Problems 51–56, find y if:

- 51.** $x = 2$ **52.** $x = -2$ **53.** $x = 0$ **54.** $x = 3$ **55.** $x = \frac{1}{2}$ **56.** $x = -\frac{1}{2}$

Suppose $4x + 3y = 12$. In Problems 57–62, find y if:

- 57.** $x = 3$ **58.** $x = -5$ **59.** $x = -\frac{1}{4}$ **60.** $x = \frac{3}{2}$ **61.** $x = 0$ **62.** $x = -3$

Suppose $4x + 3y = 12$. In Problems 63–68, find x if:

- 63.** $y = 4$ **64.** $y = -4$ **65.** $y = -\frac{1}{3}$ **66.** $y = \frac{5}{3}$ **67.** $y = 0$ **68.** $y = -3$

Find the complement and supplement of each angle. [Example 6]

- 69.** 45° **70.** 75° **71.** 31° **72.** 59°

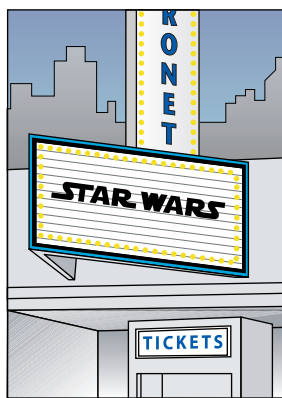
Applying the Concepts

- 73. Digital Video** The most popular video download of all time was a *Star Wars* movie trailer. The video was compressed so it would be small enough for people to download over the Internet. A formula for estimating the size, in kilobytes, of a compressed video is

$$S = \frac{\text{height} \cdot \text{width} \cdot \text{fps} \cdot \text{time}}{35,000}$$

where *height* and *width* are in pixels, *fps* is the number of frames per second the video is to play (television plays at 30 fps), and *time* is given in seconds.

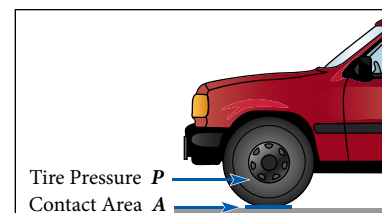
- Estimate the size in kilobytes of the *Star Wars* trailer that has a height of 480 pixels, has a width of 216 pixels, plays at 30 fps, and runs for 150 seconds.
- Estimate the size in kilobytes of the *Star Wars* trailer that has a height of 320 pixels, has a width of 144 pixels, plays at 15 fps, and runs for 150 seconds.



- 74. Vehicle Weight** If you can measure the area that the tires on your car contact the ground, and you know the air pressure in the tires, then you can estimate the weight of your car, in pounds, with the following formula:


$$W = APN$$

where W is the vehicle's weight in pounds, A is the average tire contact area with a hard surface in square inches, P is the air pressure in the tires in pounds per square inch (psi, or lb/in^2), and N is the number of tires.



- What is the approximate weight of a car if the average tire contact area is a rectangle 6 inches by 5 inches and if the air pressure in the tires is 30 psi?
- What is the approximate weight of a car if the average tire contact area is a rectangle 5 inches by 4 inches, and the tire pressure is 30 psi?

- 75. Temperature** The chart shows the temperatures for some of the world's hottest places.



- Use the formula $C = \frac{5}{9}(F - 32)$ to find the temperature in Celsius for Al'Aziziyah.
- Use the formula $K = \frac{5}{9}(F - 32) + 273$ to find the temperature in Ghudamis, Libya, in Kelvin.

- 76. Fermat's Last Theorem** The postage stamp shows Fermat's last theorem, which states that if n is an integer greater than 2, then there are no positive integers x , y , and z that will make the formula $x^n + y^n = z^n$ true.



Use the formula $x^n + y^n = z^n$ to

- Find x if $n = 1$, $y = 7$, and $z = 15$.
- Find y if $n = 1$, $x = 23$, and $z = 37$.

Maintaining Your Skills

Simplify.

77. $\frac{\frac{3}{5}}{\frac{4}{5}}$

78. $\frac{\frac{5}{7}}{\frac{6}{7}}$

79. $\frac{1 + \frac{1}{2}}{1 - \frac{1}{2}}$

80. $\frac{1 + \frac{1}{3}}{1 - \frac{1}{3}}$

81. $\frac{\frac{1}{2} + \frac{1}{4}}{\frac{1}{4} + \frac{1}{8}}$

82. $\frac{\frac{1}{2} - \frac{1}{4}}{\frac{1}{4} - \frac{1}{8}}$

83. $\frac{\frac{3}{5} + \frac{3}{7}}{\frac{3}{5} - \frac{3}{7}}$

84. $\frac{\frac{5}{7} + \frac{5}{8}}{\frac{5}{7} - \frac{5}{8}}$

Paired Data and the Rectangular Coordinate System

10.7

Introduction . . .

The table and line graph below are similar to those that we have used previously to discuss temperature. Note that we have extended both the table and the line graph to show some temperatures below zero on both scales.

TABLE 1 COMPARING TEMPERATURES ON TWO SCALES	
Temperature In Degrees Celsius	Temperature In Degrees Fahrenheit
-100°C	-148°F
-75°C	-103°F
-50°C	-58°F
-25°C	-13°F
0°C	32°F
25°C	77°F
50°C	122°F
75°C	167°F
100°C	212°F

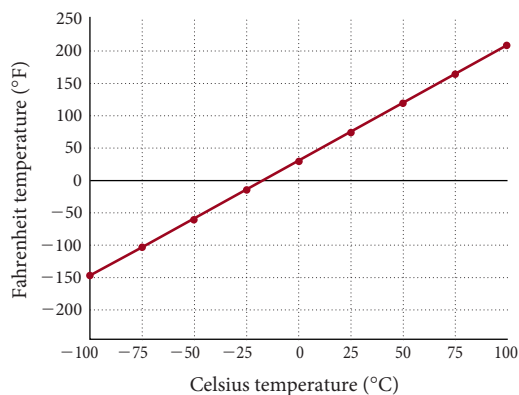


FIGURE 1 A line graph of the data in Table 1

The data in Table 1 are called *paired data* because it is organized so that each number in the first column is paired with a specific number in the second column: a Celsius temperature of 100°C (first column) corresponds to a Fahrenheit temperature of 212°F (second column). The information in Figure 1 is also paired data because each dot on the line graph comes from one of the pairs of numbers in the table: The upper rightmost dot on the line graph corresponds to 100°C and 212°F. In order to standardize the way in which we present paired data visually, we use the *rectangular coordinate system*.

A The Rectangular Coordinate System

The rectangular coordinate system can be used to plot (or graph) pairs of numbers (see Figure 2 on the following page). It consists of two number lines, called *axes*, which intersect at right angles. (A right angle is a 90° angle.) The point at which the axes intersect is called the *origin*.

Objectives

- A Plot ordered pairs on a coordinate system.
- B Name the coordinates of a point on the rectangular coordinate system.
- C Graph a line given two points.

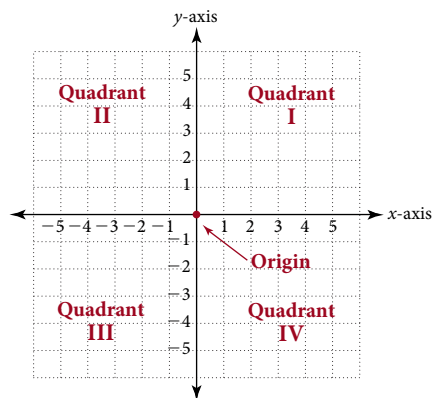


FIGURE 2

The horizontal number line is exactly the same as the real number line and is called the x -axis. The vertical number line is also the same as the real number line with the positive direction up and the negative direction down. It is called the y -axis. As you can see, the axes divide the plane into four regions, called *quadrants*, which are numbered 1 through IV in a counterclockwise direction.

Because the rectangular coordinate system consists of two number lines, one called the x -axis and the other called the y -axis, we can plot pairs of numbers such as $x = 2$ and $y = 3$. As a matter of fact, each point in the rectangular coordinate system is named by exactly one pair of numbers. We call the pair of numbers that name a point the *coordinates* of that point. To find the point that is associated with the pair of numbers $x = 2$ and $y = 3$, we start at the origin and move 2 units horizontally to the right and then 3 units vertically up (see Figure 3). The place where we end up is the point named by the pair of numbers $x = 2, y = 3$, which we write in shorthand form as the ordered pair $(2, 3)$.

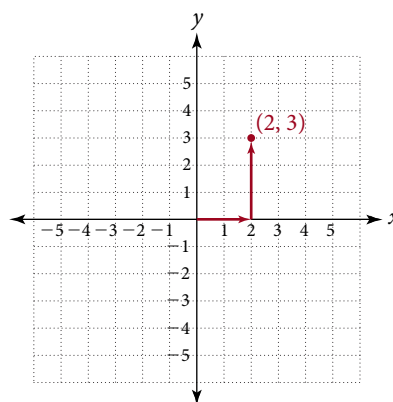


FIGURE 3

In general, to graph an ordered pair (a, b) on the rectangular coordinate system, we start at the origin and move a units right or left (right if a is positive, left if a is negative). From there we move b units up or down (up if b is positive, down if b is negative). The point where we end up is the graph of the ordered pair (a, b) .

PRACTICE PROBLEMS

- Plot the ordered pairs $(3, 2)$, $(3, -2)$, $(-3, -2)$, and $(-3, 2)$ on the coordinate system used in Example 1.

EXAMPLE 1

Plot (graph) the ordered pairs $(2, 3)$, $(-2, 3)$, $(-2, -3)$, and $(2, -3)$.

SOLUTION To graph the ordered pair $(2, 3)$, we start at the origin and move 2 units to the right, then 3 units up. We are now at the point whose coordinates are

(2, 3). We plot the other three ordered pairs in the same manner (Figure 4).

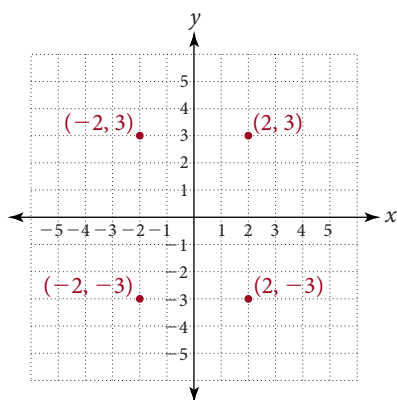
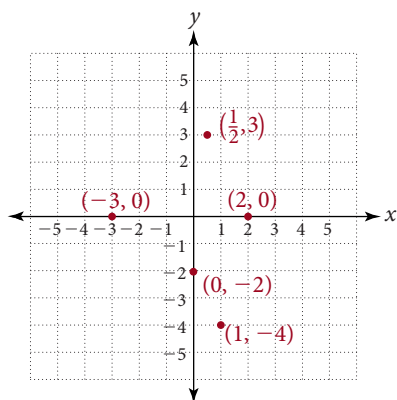


FIGURE 4

Note Looking at Example 1, we see that any point in quadrant I must have positive x - and y -coordinates, $(+, +)$. In quadrant II, x -coordinates are negative and y -coordinates are positive, $(-, +)$. In quadrant III, both coordinates are negative, $(-, -)$. Finally, in quadrant IV, all ordered pairs must have the form $(+, -)$.

EXAMPLE 2

Plot the ordered pairs $(1, -4)$, $(\frac{1}{2}, 3)$, $(2, 0)$, $(0, -2)$, and $(-3, 0)$.

SOLUTION**B Points on a Rectangular Coordinate System****EXAMPLE 3**

Give the coordinates of each point in Figure 5.

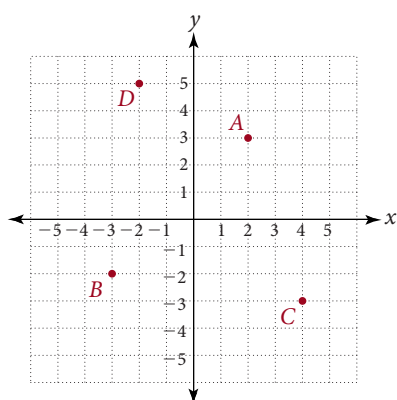
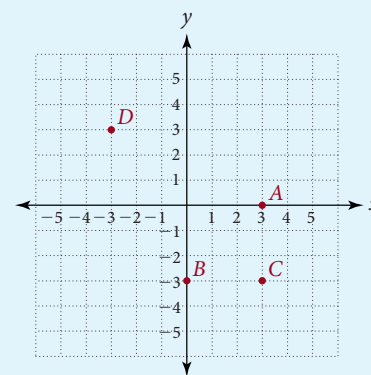


FIGURE 5

- Plot the ordered pairs $(-1, -4)$, $(-\frac{1}{2}, 3)$, $(0, 2)$, $(5, 0)$, $(0, -5)$, and $(-1, 0)$ on the coordinate system used in Example 2.

- Give the coordinates of each point in the figure below.

**Answers**

- See solutions section.
- See solutions section.

4. The points $(2, 0)$, $(-3, 0)$, $(\frac{5}{2}, 0)$, and $(-8, 0)$ all lie on which axis?

5. a. Does the point $(-3, -2)$ lie on the line shown in Example 5?
b. Does the point $(3, 2)$ lie on the line shown in Example 5?

SOLUTION A is named by the ordered pair $(2, 3)$. B is named by the ordered pair $(-3, -2)$. C is named by the ordered pair $(4, -3)$. D is named by the ordered pair $(-2, 5)$.

EXAMPLE 4

Where are all the points that have coordinates of the form $(x, 0)$?

SOLUTION Because the y -coordinate is 0, these points must lie on the x -axis. Remember, the y -coordinate tells us how far up or down we move to find the point in question. If the y -coordinate is 0, then we don't move up or down at all. Therefore, we must stay on the x -axis.

C Graphing Lines

EXAMPLE 5

Graph the points $(1, 2)$ and $(3, 4)$, and draw a line through them. Then use your result to answer these questions.

- a. Does the graph of $(2, 3)$ lie on this line?
b. Does the graph of $(-3, -5)$ lie on this line?

SOLUTION Figure 6 shows the graphs of $(1, 2)$ and $(3, 4)$ and the line that connects them. The line does not pass through the point $(-3, -5)$ but does pass through $(2, 3)$.

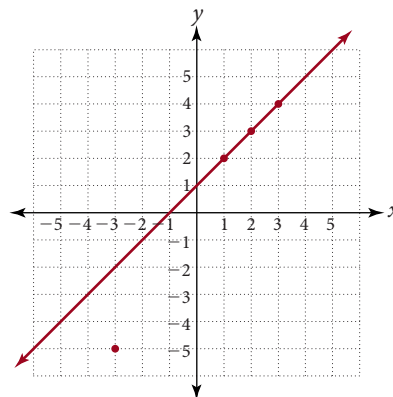


FIGURE 6

Getting Ready for Class

After reading the preceding section and working the practice problems in the margin, answer the following questions.

1. What is an ordered pair of numbers?
2. Explain in words how you would graph the ordered pair $(2, 3)$.
3. How do you construct a rectangular coordinate system?
4. Where is the origin on a rectangular coordinate system?

Answers

3. A is $(3, 0)$; B is $(0, -3)$; C is $(3, -3)$; D is $(-3, 3)$.
4. The x -axis 5. a. Yes b. No

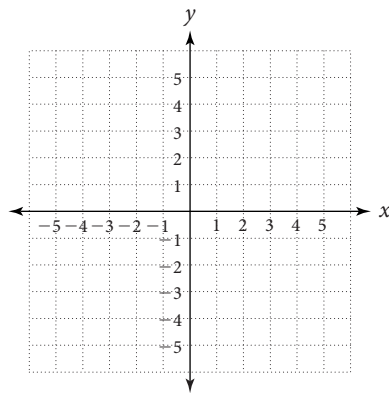
Problem Set 10.7

A Graph each of the following ordered pairs. [Examples 1, 2]

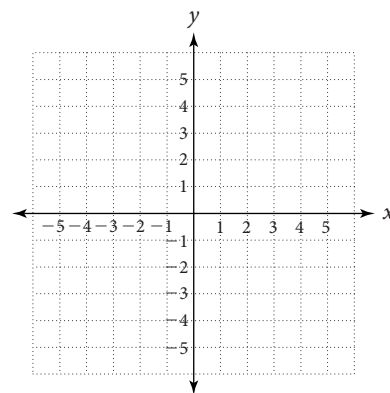
1. $(4, 2)$ 2. $(4, -2)$ 3. $(-4, 2)$ 4. $(-4, -2)$ 5. $(3, 4)$ 6. $(-3, 4)$

7. $(-3, -4)$ 8. $(3, -4)$ 9. $(4, 3)$ 10. $(-4, 3)$ 11. $(5, \frac{1}{2})$ 12. $(-5, -\frac{1}{2})$

13. $(1, -\frac{3}{2})$ 14. $(-\frac{3}{2}, 1)$ 15. $(2, 0)$ 16. $(0, -5)$ 17. $(-2, 0)$ 18. $(0, 5)$

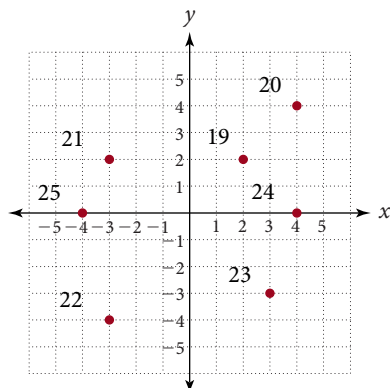


USE FOR ODD-NUMBERED PROBLEMS



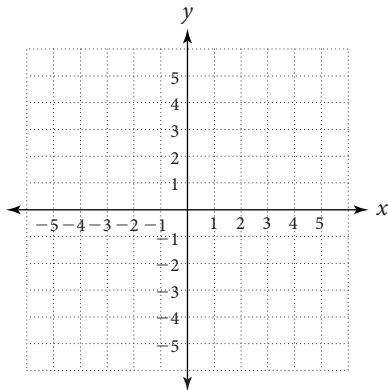
USE FOR EVEN-NUMBERED PROBLEMS

B 19–25. Give the coordinates of each point in the figure below. [Examples 3, 4]



26. Where will you find all the ordered pairs of the form $(0, y)$?

C Graph the points $(1, 3)$ and $(2, 4)$, and draw a line through them. Use that graph to answer Problems 27–30. [Example 5]



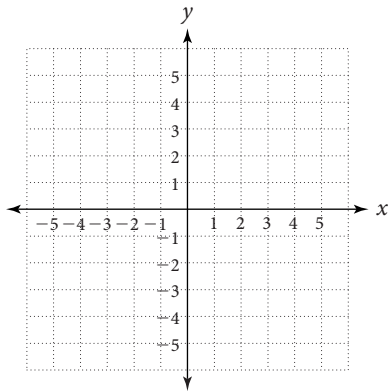
27. Does the ordered pair $(-1, 1)$ lie on this line?

28. Does the ordered pair $(3, 4)$ lie on this line?

29. Does the ordered pair $(-3, -5)$ lie on this line?

30. Does the ordered pair $(3, 5)$ lie on this line?

Graph the points $(-3, 2)$ and $(1, 3)$, and draw a line through them. Use that graph to answer Problems 31–34.



31. Does the ordered pair $(5, 4)$ lie on this line?

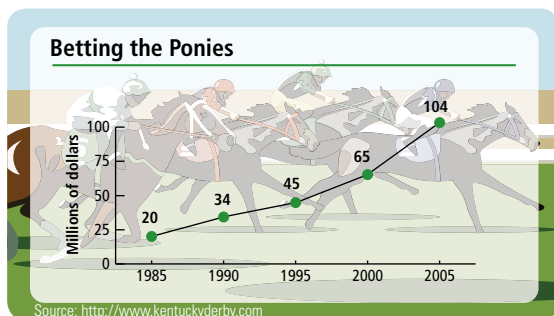
32. Does the ordered pair $(3, -1)$ lie on this line?

33. Does the ordered pair $(4, 5)$ lie on this line?

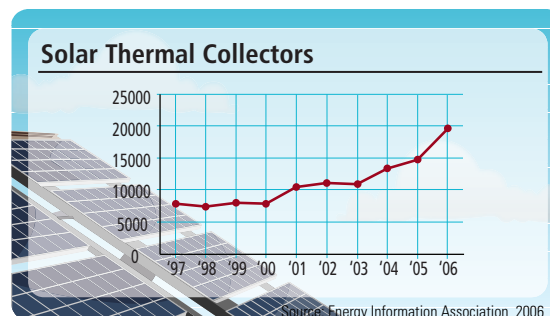
34. Does the ordered pair $(-7, 1)$ lie on this line?

Applying the Concepts

35. **Horse Racing** The graph shows the total amount of money wagered on the Kentucky Derby over the years. List three ordered pairs that lie on the graph.

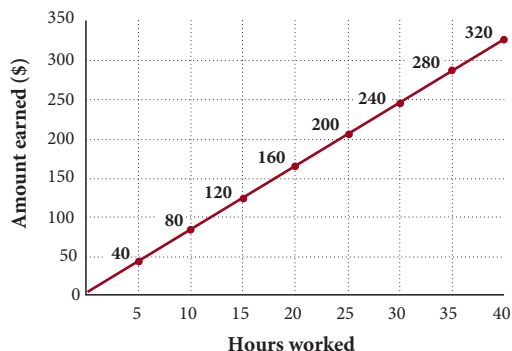


36. **Solar Energy** The graph shows the annual number of solar thermal collector shipments in the United States. Use the graph to answer the following questions.



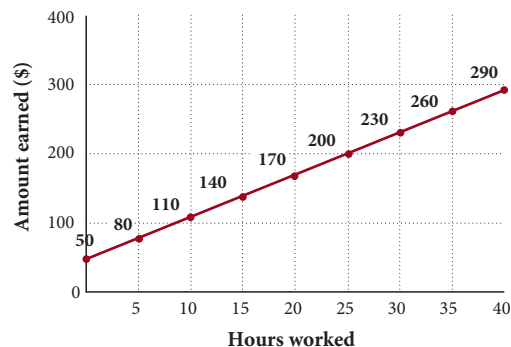
- Does the graph contain the point $(2000, 7,500)$?
- Does the graph contain the point $(2004, 15,000)$?
- Does the graph contain the point $(2005, 15,000)$?

- 37. Hourly Wages** Jane takes a job at the local Marcy's department store. Her job pays \$8.00 per hour. The graph shows how much Jane earns for working from 0 to 40 hours in a week.



- List three ordered pairs that lie on the line graph.
- How much will she earn for working 40 hours?
- If her check for one week is \$240, how many hours did she work?
- She works 35 hours one week, but her paycheck before deductions are subtracted out is for \$260. Is this correct? Explain.

- 38. Hourly Wages** Judy takes a job at Gigi's boutique. Her job pays \$6.00 per hour plus \$50 per week in commission. The graph shows how much Judy earns for working from 0 to 40 hours in a week.



- List three ordered pairs that lie on the line graph.
- How much will she earn for working 40 hours?
- If her check for one week is \$230, how many hours did she work?
- She works 35 hours one week, but her paycheck before deductions are subtracted out is for \$260. Is this correct? Explain.

Maintaining Your Skills

Multiply or divide as indicated.

39. $\frac{x^2}{y} \cdot \frac{y^3}{x}$

40. $\frac{a^3}{15} \cdot \frac{12}{a^2}$

41. $\frac{x^2}{y^3} \div \frac{x^3}{y^2}$

42. $\frac{a^2b}{c^3} \div \frac{ab^2}{c^3}$

Add or subtract as indicated.

43. $\frac{x}{5} + \frac{3}{4}$

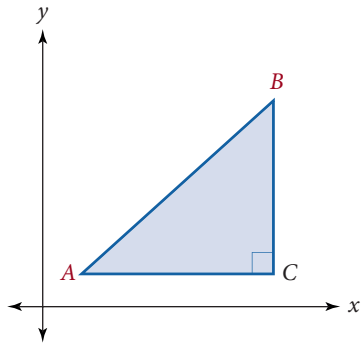
44. $5 + \frac{2}{x}$

45. $3 - \frac{1}{x}$

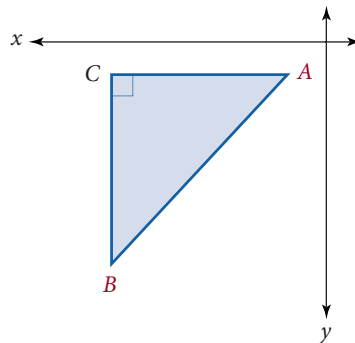
46. $\frac{x}{8} - \frac{5}{6}$

■ Extending the Concepts

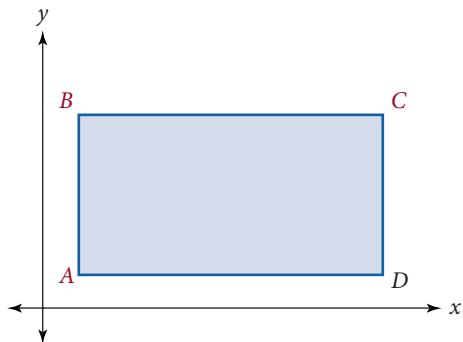
47. Right triangle ABC has legs of length 5. Point C is the ordered pair $(6, 2)$. Find the coordinates of A and B .



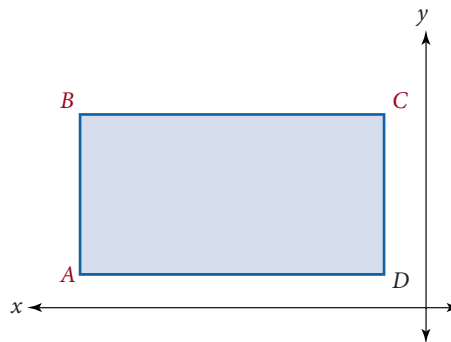
48. Right triangle ABC has legs of length 7. Point C is the ordered pair $(-8, -3)$. Find the coordinates of A and B .



49. Rectangle $ABCD$ has a length of 5 and a width of 3. Point D is the ordered pair $(7, 2)$. Find points A , B , and C .



50. Rectangle $ABCD$ has a length of 5 and a width of 3. Point D is the ordered pair $(-1, 1)$. Find points A , B , and C .



Chapter 10 Summary

Combining Similar Terms [10.1]

Two terms are similar terms if they have the same variable part. The expressions $7x$ and $2x$ are similar because the variable part in each is the same. Similar terms are combined by using the distributive property.

EXAMPLES

1. $7x + 2x = (7 + 2)x$
 $= 9x$

Finding the Value of an Algebraic Expression [10.1]

An algebraic expression is a mathematical expression that contains numbers and variables. Expressions that contain a variable will take on different values depending on the value of the variable.

2. When $x = 5$, the expression $2x + 7$ becomes
 $2(5) + 7 = 10 + 7 = 17$

The Solution to an Equation [10.2]

A solution to an equation is a number that, when used in place of the variable, makes the equation a true statement.

The Addition Property of Equality [10.2]

Let A , B , and C represent algebraic expressions.

$$\begin{array}{ll} \text{If} & A = B \\ \text{then} & A + C = B + C \end{array}$$

In words: Adding the same quantity to both sides of an equation will not change the solution.

3. We solve $x - 4 = 9$ by adding 4 to each side.

$$\begin{array}{l} x - 4 = 9 \\ x - 4 + 4 = 9 + 4 \\ x + 0 = 13 \\ x = 13 \end{array}$$

The Multiplication Property of Equality [10.3]

Let A , B , and C represent algebraic expressions, with C not equal to 0.

$$\begin{array}{ll} \text{If} & A = B \\ \text{then} & AC = BC \end{array}$$

In words: Multiplying both sides of an equation by the same nonzero number will not change the solution to the equation. This property holds for division as well.

4. Solve $\frac{1}{3}x = 5$.

$$\begin{array}{l} \frac{1}{3}x = 5 \\ 3 \cdot \frac{1}{3}x = 3 \cdot 5 \\ x = 15 \end{array}$$

Steps Used to Solve a Linear Equation in One Variable [10.4]

Step 1 Simplify each side of the equation.

Step 2 Use the addition property of equality to get all variable terms on one side and all constant terms on the other side.

5. $2(x - 4) + 5 = -11$

$$\begin{array}{l} 2x - 8 + 5 = -11 \\ 2x - 3 = -11 \\ 2x - 3 + 3 = -11 + 3 \\ 2x = -8 \\ \frac{2x}{2} = \frac{-8}{2} \\ x = -4 \end{array}$$

Step 3 Use the multiplication property of equality to get just one x isolated on either side of the equation.

Step 4 Check the solution in the original equation if necessary.

If the original equation contains fractions, you can begin by multiplying each side by the LCD for all fractions in the equation.

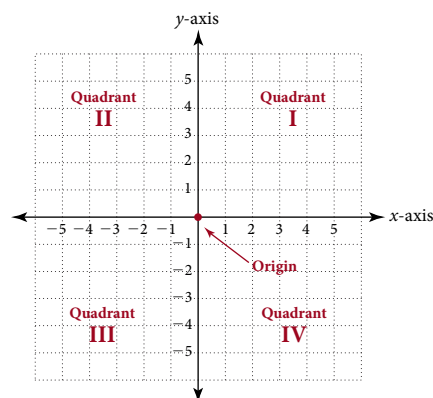
6. When $w = 8$ and $l = 13$
 the formula $P = 2w + 2l$
 becomes $P = 2 \cdot 8 + 2 \cdot 13$
 $= 16 + 26$
 $= 42$

Evaluating Formulas [10.6]

In mathematics, a formula is an equation that contains more than one variable. For example, the formula for the perimeter of a rectangle is $P = 2l + 2w$. We evaluate a formula by substituting values for all but one of the variables and then solving the resulting equation for that variable.

The Rectangular Coordinate System [10.7]

The rectangular coordinate system consists of two number lines, called axes, which intersect at right angles. The point at which the axes intersect is called the origin.



Graphing Ordered Pairs [10.7]

To graph an ordered pair (a, b) on the rectangular coordinate system, we start at the origin and move a units right or left (right if a is positive, left if a is negative). From there we move b units up or down (up if b is positive, down if b is negative). The point where we end up is the graph of the ordered pair (a, b) .

Chapter 10 Review

Simplify the expressions by combining similar terms. [10.1]

1. $10x + 7x$

2. $8x - 12x$

3. $2a + 9a + 3 - 6$

4. $4y - 7y + 8 - 10$

5. $6x - x + 4$

6. $-5a + a + 4 - 3$

7. $2a - 6 + 8a + 2$

8. $12y - 4 + 3y - 9$

Find the value of each expression when x is 4. [10.1]

9. $10x + 2$

10. $5x - 12$

11. $-2x + 9$

12. $-x + 8$

Find the value of each expression when x is -5 .

13. $3y + 6$

14. $9 - 2y$

15. $12 + y$

16. $-6y - 20$

17. Is $x = -3$ a solution to $5x - 2 = -17$? [10.2]

18. Is $x = 4$ a solution to $3x - 2 = 2x + 1$? [10.2]

Solve the equations. [10.2, 10.3, 10.4]

19. $x - 5 = 4$

20. $-x + 3 + 2x = 6 - 7$

21. $2x + 1 = 7$

22. $3x - 5 = 1$

23. $2x + 4 = 3x - 5$

24. $4x + 8 = 2x - 10$

25. $3(x - 2) = 9$

26. $4(x - 3) = -20$

27. $3(2x + 1) - 4 = -7$

28. $4(3x + 1) = -2(5x - 2)$

29. $5x + \frac{3}{8} = -\frac{1}{4}$

30. $\frac{7}{x} - \frac{2}{5} = 1$

31. $3(2x - 5) = 4x + 3$

32. $\frac{2}{3}(6x - 9) = 6x - 2$

33. $3x - 11 = 2(x - 2)$

34. $4(3x - 9) = 2(4x + 6)$

35. $5x + 9 = 4x - 7$

36. $4(x - 6) = 8$

37. $5x - 7 = 3$

38. $\frac{3}{x} - \frac{1}{4} = 2$

- 39. Number Problem** The sum of a number and -3 is -5 . Find the number. [10.5]
- 40. Number Problem** If twice a number is added to 3, the result is 7. Find the number. [10.5]
- 41. Number Problem** Three times the sum of a number and 2 is -6 . Find the number. [10.5]
- 42. Number Problem** If 7 is subtracted from twice a number, the result is 5. Find the number. [10.5]
- 43. Geometry** The length of a rectangle is twice its width. If the perimeter is 42 meters, find the length and the width. [10.5]
- 44. Age Problem** Patrick is 3 years older than Amy. In 5 years the sum of their ages will be 31. How old are they now? [10.5]
- 45. Geometry** Two angles are complementary angles. If one angle is 5 times larger than the other angle, find the two angles. [10.5]
- 46. Geometry** Two angles are supplementary. If one angle is 85° , what is the other angle? [10.5]
- 47. Geometry** The biggest angle in a triangle is 6 times bigger than the smallest angle. The third angle is half the largest angle. Find the three angles. [10.5]
- 48. Number Problem** If two times the sum of a number and 6 is increased by 12, the result is 16. Find the number. [10.5]

In Problems 49–52, use the equation $3x + 2y = 6$ to find y . [10.6]

49. $x = -2$

50. $x = 6$

51. $x = 0$

52. $x = \frac{1}{3}$

In Problems 53–55, use the equation $3x + 2y = 6$ to find x when y has the given value. [10.6]

53. $y = 3$

54. $y = -3$

55. $y = 0$

In Problems 56–59, use the equation $y = \frac{2}{3}x - 4$ to find x when y has the given value. [10.6]

56. $y = 0$

57. $y = -6$

58. $y = 4$

59. $y = -10$

In Problems 60–67, plot the points. [10.7]

60. $(4, 2)$

61. $(4, -2)$

62. $(-4, 2)$

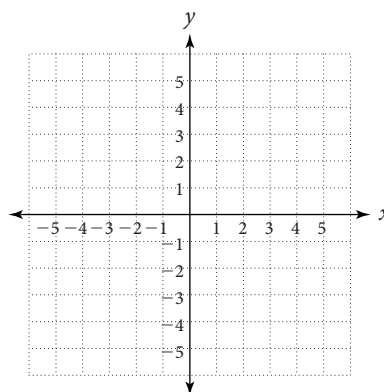
63. $(-4, -2)$

64. $(4, 0)$

65. $(0, 4)$

66. $(0, -4)$

67. $(-4, 0)$



Chapter 10 Cumulative Review

Simplify.

1. $5,309 + 687$

2. $\frac{7}{11} + \frac{4}{5}$

3. $11.09 - 6.531$

4. $4\frac{1}{8} - 1\frac{3}{4}$

5. $2305(407)$

6. $0.002(230)$

7. $314\overline{)13,188}$

8. $\frac{6}{32} \div \frac{9}{48}$

9. Round the number 435,906 to the nearest ten thousand.

10. Write 0.48 as a fraction in lowest terms.

11. Change $\frac{76}{12}$ to a mixed number in lowest terms.

12. Find the difference of 0.45 and $\frac{2}{5}$.

13. Write the decimal 0.8 as a percent.

Use the table given in Chapter 7 to make the following conversion.

14. 7 kilograms to pounds

15. Write 124% as a fraction or mixed number in lowest terms.

16. What percent of 60 is 21?

Simplify.

17. $\left(\frac{1}{3}\right)^3 + \left(\frac{1}{9}\right)^2$

18. $8x + 9 - 9x - 14$

19. $-|-7|$

20. $\frac{-3(-8) + 4(-2)}{11 - 9}$

21. $19 - 5(7 - 4)$

22. $\sqrt{25} + \sqrt{16}$

Solve.

23. $\frac{3}{8}y = 21$

24. $-3(2x - 1) = 3(x + 5)$

25. $\frac{3.6}{4} = \frac{4.5}{x}$

26. Write the following ratio as a fraction in lowest terms:
0.04 to 0.32

27. Subtract -3 from 5.

28. **Surface Area** Find the surface area of a rectangular solid with length 7 inches, width 3 inches, and height 2 inches.

29. **Age** Ben is 8 years older than Ryan. In 6 years the sum of their ages will be 38. How old are they now?

30. **Gas Mileage** A truck travels 432 miles on 27 gallons of gas. What is the rate of gas mileage in miles per gallon.

31. **Discount** A surfboard that usually sells for \$400 is marked down to \$320. What is the discount? What is the discount rate?

32. **Geometry** Find the length of the hypotenuse of a right triangle with sides of 5 and 12 meters.

33. **Cost of Coffee** If coffee costs \$6.40 per pound, how much will 2 lb 4 oz, cost?

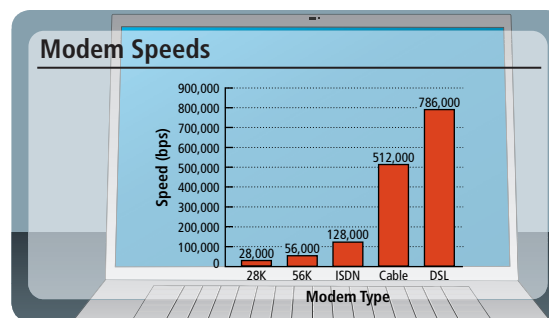
34. **Interest** If \$1,400 is invested at 6% simple interest for 90 days, how much interest is earned?

35. **Wildflower Seeds** C.J. works in a nursery, and one of his tasks is filling packets of wildflower seeds. If each packet is to contain $\frac{1}{4}$ pound of seeds, how many packets can be filled from 16 pounds of seeds?

36. **Commission** A car stereo salesperson receives a commission of 8% on all units he sells. If his total sales for March are \$9,800, how much money in commission will he make?

37. **Volume** How many 8 fluid ounce glasses of water will it take to fill a 15-gallon aquarium?

Internet Access Speed The graph below gives the speed of the most common modems used for Internet access.



38. How much faster is cable than a 56K modem?

39. What is the ratio of the speed of cable to the speed of an ISDN modem?

Chapter 10 Test

Simplify each expression by combining similar terms.

1. $9x - 3x + 7 - 12$ 2. $4b - 1 - b - 3$
3. $3(2x - 6) - 4x$ 4. $4(5x - 6) - 6x + 12$

Find the value of each expression when $x = 3$.

5. $3x - 12$ 6. $-x + 12$
7. Is $x = -1$ a solution to $4x - 3 = -7$?
8. Is $x = 3$ a solution to $3x - 7 = -2$?
9. Use the equation $4x + 3y = 12$ to find y when $x = -3$.
10. Use the equation $y = \frac{4}{3}x + 7$ to find x when $y = -1$.

Solve each equation.

11. $x - 7 = -3$ 12. $a - 2.9 = -7.8$
13. $\frac{2}{3}y = 18$ 14. $\frac{7}{x} - \frac{1}{6} = 1$
15. $3x - 7 = 5x + 1$ 16. $2(x - 5) = -8$
17. $3(2x + 3) = -3(x - 5)$ 18. $6(3x - 2) - 8 = 4x - 6$
19. $\frac{4}{3}(6x - 9) = 2(4x - 6)$ 20. $3(x - 7) = -6$

21. **Number Problem** Twice the sum of a number and 3 is -10 . Find the number.

22. **Hot Air Balloon** The first successful crossing of the Atlantic in a hot air balloon was made in August 1978 by Maxie Anderson, Ben Abruzzo, and Larry Newman of the United States. The 3,100 mile trip took approximately 140 hours. Use the formula $r = \frac{d}{t}$ to find their average speed to the nearest whole number.

23. **Geometry** The length of a rectangle is 4 centimeters longer than its width. If the perimeter is 28 centimeters, find the length and the width.

24. **Age problem** Karen is 5 years younger than Susan. Three years ago, the sum of their ages was 11. How old are they now?

25. **Geometry** The largest angle in a triangle is 3 times bigger than another angle, which is twice as big as the smallest angle. Find the three angles.

26. **Coin Problem** A coin collection has seven more dimes than quarters. If the collection has a value of \$2.10, how many quarters and dimes are in the collection?

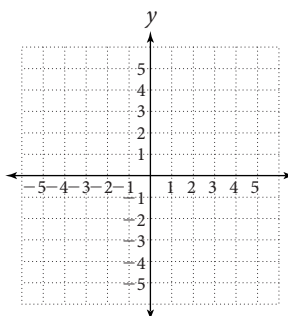
27. **Geometry** Two angles are complementary. If one angle is 3 times bigger than the other angle, find the two angles.

28. **Perimeter of a Rectangle** If a rectangle has a length of 13 meters and a perimeter of 35 meters, find the width of the rectangle.

29. **Google Earth** The length of the base of the Sphinx is 12 times longer than the width. If the perimeter of the base is 520 feet. Find the length and the width.



30. Plot the following points: $(3, 2)$, $(-3, 2)$, $(3, 0)$, $(0, -2)$.



Chapter 10 Projects

SOLVING EQUATIONS

GROUP PROJECT

The Equation Game

- Number of People** 2–5
- Time Needed** 30 minutes
- Equipment** Per group: deck of cards, timer or clock, pencil and paper, copy of rules.
- Background** The Equation Game is a fun way to practice working with equations.
- Procedure** Remove all the face cards from the deck. Aces will be 1's. The dealer deals four cards face up, a fifth card face down. Each player writes down the four numbers that are face up. Set the timer for 5 minutes, then flip the fifth card. Each player writes down equations that use the numbers on the first four cards to equal the number on the fifth card. When the five minutes are up, figure out the scores. An equation that uses
- 1 of the four cards scores 0 points
 - 2 of the four cards scores 4 points
 - 3 of the four cards scores 9 points
 - 4 of the four cards scores 16 points
- Check the other players' equations. If you find an error, you get 7 points. The person with the mistake gets no points for that equation.

Example The first four cards are a four, a nine, an ace, and a two. The fifth card is a seven. Here are some equations you could make:

$$\begin{aligned}9 - 2 &= 7 \\4 + 2 + 1 &= 7 \\9 - (4 - 2) &= 7 \\ \frac{\quad}{1} &= 7\end{aligned}$$



One solution (9 points)

$$\frac{9}{6} - \left(\frac{4}{4} - \frac{2}{2} \right) = \frac{7}{7}$$

*This project was adapted from www.exploratorium.edu/math_explorer/fantasticFour.html.

RESEARCH PROJECT

Algebraic Symbolism

Algebra made a beginning as early as 1850 B.C. in Egypt. However, the symbols we use in algebra today took some time to develop. For example, the algebraic use of letters for numbers began much later with Diophantus, a mathematician famous for studying *Diophantine equations*. In the early centuries, the full words *plus*, *minus*, *multiplied by*, *divided by*, and *equals* were written out. Imagine how much more difficult your homework would be if you had to write out all these words instead of using symbols. Algebraists began to come up with a system of symbols to make writing algebra easier. At first, not everyone agreed on the symbols to be used. For example, the present division sign \div was often used for subtraction. People in different countries used different symbols: the Italians preferred to use p and m for plus and minus, while the less traditional Germans were starting to use $+$ and $-$.

Research the history of algebraic symbolism. Find out when the algebraic symbols we use today (such as letters to represent variables, $+$, $-$, \div , \cdot , a/b and $\left(\frac{a}{b}\right)$) came into common use. Summarize your results in an essay.



Appendix A

RESOURCES

By gathering resources early in the term, before you need help, the information about these resources will be available to you when they are needed.

Instructor

Knowing the contact information for your instructor is very important. You may already have this information from the course syllabus. It is a good idea to write it down again.

Name _____ Office Location _____
Available Hours: M _____ T _____ W _____ TH _____ F _____
Phone Number _____ ext. _____ E-mail Address _____ @ _____

Tutoring Center

Many schools offer tutoring, free of charge to their students. If this is the case at your school, find out when and where tutoring is offered.

Tutoring Location _____ Phone Number _____ ext. _____
Available Hours: M _____ T _____ W _____ TH _____ F _____

Computer Lab

Many schools offer a computer lab where students can use the online resources and software available with their textbook. Other students using the same software and websites as you can be very helpful. Find out where the computer lab at your school is located.

Computer Lab Location _____ Phone Number _____ ext. _____
Available Hours: M _____ T _____ W _____ TH _____ F _____

Videos

A complete set of videos is available to your school. These videos feature the author of your textbook presenting full-length, 15- to 20-minute lessons from every section of your textbook. If you miss class, or find yourself behind, these tapes will prove very useful.

Videotape Location _____ Phone Number _____ ext. _____
Available Hours: M _____ T _____ W _____ TH _____ F _____

Classmates

Form a study group and meet on a regular basis. When you meet try to speak to each other using proper mathematical language. That is, use the words that you see in the definition and property boxes in your textbook.

Name _____ Phone _____ E-mail _____
Name _____ Phone _____ E-mail _____
Name _____ Phone _____ E-mail _____

Appendix B

ONE HUNDRED ADDITION FACTS

The following 100 problems should be done mentally. You should be able to find these sums quickly and accurately. Do all 100 problems, and then check your answers. Make a list of each problem you missed, and then go over the list as many times as it takes to memorize the correct answers. Once this has been done, go back and work all 100 problems again. Repeat this process until you get all 100 problems correct.

Add.

- | | | | | | | | |
|-------------|-------------|-------------|--------------|-------------|-------------|-------------|-------------|
| 1. 0
+4 | 2. 1
+9 | 3. 2
+7 | 4. 0
+3 | 5. 4
+1 | 6. 2
+5 | 7. 5
+6 | 8. 2
+6 |
| 9. 9
+8 | 10. 4
+9 | 11. 3
+7 | 12. 9
+4 | 13. 4
+5 | 14. 1
+4 | 15. 0
+1 | 16. 6
+4 |
| 17. 5
+3 | 18. 9
+5 | 19. 5
+8 | 20. 0
+7 | 21. 5
+1 | 22. 1
+0 | 23. 6
+5 | 24. 5
+2 |
| 25. 5
+7 | 26. 3
+6 | 27. 7
+0 | 28. 4
+6 | 29. 1
+5 | 30. 3
+1 | 31. 1
+7 | 32. 7
+6 |
| 33. 3
+3 | 34. 8
+0 | 35. 1
+8 | 36. 5
+4 | 37. 2
+8 | 38. 0
+5 | 39. 5
+9 | 40. 9
+9 |
| 41. 0
+0 | 42. 6
+9 | 43. 7
+4 | 44. 8
+2 | 45. 7
+3 | 46. 8
+5 | 47. 8
+4 | 48. 6
+7 |
| 49. 8
+1 | 50. 1
+3 | 51. 7
+5 | 52. 0
+1 | 53. 8
+3 | 54. 6
+6 | 55. 9
+6 | 56. 8
+9 |
| 57. 3
+0 | 58. 6
+2 | 59. 2
+1 | 60. 6
+0 | 61. 4
+8 | 62. 6
+1 | 63. 2
+0 | 64. 7
+9 |
| 65. 2
+9 | 66. 9
+3 | 67. 3
+8 | 68. 7
+2 | 69. 8
+8 | 70. 4
+4 | 71. 8
+7 | 72. 2
+4 |
| 73. 3
+2 | 74. 4
+7 | 75. 9
+7 | 76. 1
+2 | 77. 6
+3 | 78. 2
+2 | 79. 9
+2 | 80. 9
+1 |
| 81. 3
+5 | 82. 1
+1 | 83. 5
+5 | 84. 7
+7 | 85. 0
+8 | 86. 7
+8 | 87. 2
+3 | 88. 3
+9 |
| 89. 6
+8 | 90. 4
+0 | 91. 0
+6 | 92. 4
+3 | 93. 7
+1 | 94. 0
+9 | 95. 9
+0 | 96. 8
+6 |
| 97. 3
+4 | 98. 5
+0 | 99. 1
+6 | 100. 4
+2 | | | | |

Appendix C

ONE HUNDRED MULTIPLICATION FACTS

The following 100 problems should be done mentally. You should be able to find these products quickly and accurately. Do all 100 problems, and then check your answers. Make a list of each problem you missed, and then go over the list as many times as it takes to memorize the correct answers. Once this has been done, go back and work all 100 problems again. Repeat this process until you get all 100 problems correct.

Multiply.

- | | | | | | | | |
|--|--|--|---|--|--|--|--|
| 1. $\begin{array}{r} 3 \\ \times 4 \\ \hline \end{array}$ | 2. $\begin{array}{r} 5 \\ \times 4 \\ \hline \end{array}$ | 3. $\begin{array}{r} 0 \\ \times 5 \\ \hline \end{array}$ | 4. $\begin{array}{r} 0 \\ \times 6 \\ \hline \end{array}$ | 5. $\begin{array}{r} 2 \\ \times 5 \\ \hline \end{array}$ | 6. $\begin{array}{r} 1 \\ \times 7 \\ \hline \end{array}$ | 7. $\begin{array}{r} 4 \\ \times 4 \\ \hline \end{array}$ | 8. $\begin{array}{r} 7 \\ \times 2 \\ \hline \end{array}$ |
| 9. $\begin{array}{r} 7 \\ \times 1 \\ \hline \end{array}$ | 10. $\begin{array}{r} 5 \\ \times 9 \\ \hline \end{array}$ | 11. $\begin{array}{r} 2 \\ \times 6 \\ \hline \end{array}$ | 12. $\begin{array}{r} 5 \\ \times 3 \\ \hline \end{array}$ | 13. $\begin{array}{r} 3 \\ \times 5 \\ \hline \end{array}$ | 14. $\begin{array}{r} 4 \\ \times 5 \\ \hline \end{array}$ | 15. $\begin{array}{r} 8 \\ \times 1 \\ \hline \end{array}$ | 16. $\begin{array}{r} 3 \\ \times 7 \\ \hline \end{array}$ |
| 17. $\begin{array}{r} 5 \\ \times 8 \\ \hline \end{array}$ | 18. $\begin{array}{r} 0 \\ \times 3 \\ \hline \end{array}$ | 19. $\begin{array}{r} 6 \\ \times 0 \\ \hline \end{array}$ | 20. $\begin{array}{r} 0 \\ \times 4 \\ \hline \end{array}$ | 21. $\begin{array}{r} 4 \\ \times 6 \\ \hline \end{array}$ | 22. $\begin{array}{r} 8 \\ \times 2 \\ \hline \end{array}$ | 23. $\begin{array}{r} 5 \\ \times 7 \\ \hline \end{array}$ | 24. $\begin{array}{r} 0 \\ \times 9 \\ \hline \end{array}$ |
| 25. $\begin{array}{r} 2 \\ \times 7 \\ \hline \end{array}$ | 26. $\begin{array}{r} 6 \\ \times 1 \\ \hline \end{array}$ | 27. $\begin{array}{r} 1 \\ \times 8 \\ \hline \end{array}$ | 28. $\begin{array}{r} 4 \\ \times 7 \\ \hline \end{array}$ | 29. $\begin{array}{r} 3 \\ \times 8 \\ \hline \end{array}$ | 30. $\begin{array}{r} 6 \\ \times 8 \\ \hline \end{array}$ | 31. $\begin{array}{r} 5 \\ \times 4 \\ \hline \end{array}$ | 32. $\begin{array}{r} 7 \\ \times 3 \\ \hline \end{array}$ |
| 33. $\begin{array}{r} 0 \\ \times 8 \\ \hline \end{array}$ | 34. $\begin{array}{r} 4 \\ \times 8 \\ \hline \end{array}$ | 35. $\begin{array}{r} 2 \\ \times 9 \\ \hline \end{array}$ | 36. $\begin{array}{r} 5 \\ \times 6 \\ \hline \end{array}$ | 37. $\begin{array}{r} 1 \\ \times 9 \\ \hline \end{array}$ | 38. $\begin{array}{r} 2 \\ \times 8 \\ \hline \end{array}$ | 39. $\begin{array}{r} 0 \\ \times 7 \\ \hline \end{array}$ | 40. $\begin{array}{r} 6 \\ \times 2 \\ \hline \end{array}$ |
| 41. $\begin{array}{r} 4 \\ \times 9 \\ \hline \end{array}$ | 42. $\begin{array}{r} 8 \\ \times 0 \\ \hline \end{array}$ | 43. $\begin{array}{r} 3 \\ \times 0 \\ \hline \end{array}$ | 44. $\begin{array}{r} 9 \\ \times 6 \\ \hline \end{array}$ | 45. $\begin{array}{r} 3 \\ \times 4 \\ \hline \end{array}$ | 46. $\begin{array}{r} 8 \\ \times 3 \\ \hline \end{array}$ | 47. $\begin{array}{r} 7 \\ \times 9 \\ \hline \end{array}$ | 48. $\begin{array}{r} 1 \\ \times 9 \\ \hline \end{array}$ |
| 49. $\begin{array}{r} 1 \\ \times 3 \\ \hline \end{array}$ | 50. $\begin{array}{r} 9 \\ \times 9 \\ \hline \end{array}$ | 51. $\begin{array}{r} 2 \\ \times 4 \\ \hline \end{array}$ | 52. $\begin{array}{r} 8 \\ \times 7 \\ \hline \end{array}$ | 53. $\begin{array}{r} 5 \\ \times 2 \\ \hline \end{array}$ | 54. $\begin{array}{r} 7 \\ \times 8 \\ \hline \end{array}$ | 55. $\begin{array}{r} 1 \\ \times 4 \\ \hline \end{array}$ | 56. $\begin{array}{r} 0 \\ \times 2 \\ \hline \end{array}$ |
| 57. $\begin{array}{r} 9 \\ \times 8 \\ \hline \end{array}$ | 58. $\begin{array}{r} 2 \\ \times 3 \\ \hline \end{array}$ | 59. $\begin{array}{r} 9 \\ \times 5 \\ \hline \end{array}$ | 60. $\begin{array}{r} 7 \\ \times 7 \\ \hline \end{array}$ | 61. $\begin{array}{r} 6 \\ \times 5 \\ \hline \end{array}$ | 62. $\begin{array}{r} 0 \\ \times 1 \\ \hline \end{array}$ | 63. $\begin{array}{r} 9 \\ \times 3 \\ \hline \end{array}$ | 64. $\begin{array}{r} 8 \\ \times 9 \\ \hline \end{array}$ |
| 65. $\begin{array}{r} 9 \\ \times 7 \\ \hline \end{array}$ | 66. $\begin{array}{r} 6 \\ \times 4 \\ \hline \end{array}$ | 67. $\begin{array}{r} 3 \\ \times 1 \\ \hline \end{array}$ | 68. $\begin{array}{r} 1 \\ \times 5 \\ \hline \end{array}$ | 69. $\begin{array}{r} 9 \\ \times 6 \\ \hline \end{array}$ | 70. $\begin{array}{r} 1 \\ \times 2 \\ \hline \end{array}$ | 71. $\begin{array}{r} 4 \\ \times 1 \\ \hline \end{array}$ | 72. $\begin{array}{r} 2 \\ \times 2 \\ \hline \end{array}$ |
| 73. $\begin{array}{r} 6 \\ \times 3 \\ \hline \end{array}$ | 74. $\begin{array}{r} 5 \\ \times 1 \\ \hline \end{array}$ | 75. $\begin{array}{r} 9 \\ \times 2 \\ \hline \end{array}$ | 76. $\begin{array}{r} 6 \\ \times 9 \\ \hline \end{array}$ | 77. $\begin{array}{r} 7 \\ \times 0 \\ \hline \end{array}$ | 78. $\begin{array}{r} 4 \\ \times 0 \\ \hline \end{array}$ | 79. $\begin{array}{r} 7 \\ \times 6 \\ \hline \end{array}$ | 80. $\begin{array}{r} 5 \\ \times 0 \\ \hline \end{array}$ |
| 81. $\begin{array}{r} 0 \\ \times 0 \\ \hline \end{array}$ | 82. $\begin{array}{r} 3 \\ \times 9 \\ \hline \end{array}$ | 83. $\begin{array}{r} 1 \\ \times 1 \\ \hline \end{array}$ | 84. $\begin{array}{r} 8 \\ \times 6 \\ \hline \end{array}$ | 85. $\begin{array}{r} 9 \\ \times 0 \\ \hline \end{array}$ | 86. $\begin{array}{r} 7 \\ \times 4 \\ \hline \end{array}$ | 87. $\begin{array}{r} 8 \\ \times 4 \\ \hline \end{array}$ | 88. $\begin{array}{r} 2 \\ \times 0 \\ \hline \end{array}$ |
| 89. $\begin{array}{r} 9 \\ \times 1 \\ \hline \end{array}$ | 90. $\begin{array}{r} 8 \\ \times 5 \\ \hline \end{array}$ | 91. $\begin{array}{r} 4 \\ \times 2 \\ \hline \end{array}$ | 92. $\begin{array}{r} 8 \\ \times 3 \\ \hline \end{array}$ | 93. $\begin{array}{r} 7 \\ \times 5 \\ \hline \end{array}$ | 94. $\begin{array}{r} 2 \\ \times 1 \\ \hline \end{array}$ | 95. $\begin{array}{r} 6 \\ \times 6 \\ \hline \end{array}$ | 96. $\begin{array}{r} 3 \\ \times 2 \\ \hline \end{array}$ |
| 97. $\begin{array}{r} 4 \\ \times 3 \\ \hline \end{array}$ | 98. $\begin{array}{r} 1 \\ \times 6 \\ \hline \end{array}$ | 99. $\begin{array}{r} 6 \\ \times 7 \\ \hline \end{array}$ | 100. $\begin{array}{r} 1 \\ \times 0 \\ \hline \end{array}$ | | | | |

Negative Exponents

D

Up to this point, all the exponents we have worked with have been positive numbers. We want to extend the type of numbers we can use for exponents to include negative numbers as well. The definition that follows allows us to work with exponents that are negative numbers.

Negative Exponents

Definition

Negative Exponents If r is a positive integer and a is any number other than zero, then

$$a^{-r} = \frac{1}{a^r}$$

The definition indicates that negative exponents give us reciprocals, as the following examples illustrate.

EXAMPLE 1

Simplify: 2^{-3}

SOLUTION The first step is to rewrite the expression with a positive exponent, by using our definition. After that, we simplify.

$$\begin{aligned} 2^{-3} &= \frac{1}{2^3} && \text{Definition of negative exponents} \\ &= \frac{1}{8} && \text{The cube of 2 is 8} \end{aligned}$$

EXAMPLE 2

Simplify: 5^{-2}

SOLUTION First we write the expression with a positive exponent, then we simplify.

$$\begin{aligned} 5^{-2} &= \frac{1}{5^2} && \text{Definition of negative exponents} \\ &= \frac{1}{25} && \text{The square of 5 is 25} \end{aligned}$$

As you can see from our first two examples, when we apply the definition for negative exponents to expressions containing negative exponents, we end up with reciprocals.

EXAMPLE 3

Simplify: $(-3)^{-2}$

SOLUTION The fact that the base in this problem is negative does not change the procedure we use to simplify:

$$\begin{aligned} (-3)^{-2} &= \frac{1}{(-3)^2} && \text{Definition of negative exponents} \\ &= \frac{1}{9} && \text{The square of } -3 \text{ is } 9 \end{aligned}$$

To check your understanding of negative exponents, look over the two lines below.

$$\begin{array}{cccc} 2^1 = 2 & 2^2 = 4 & 2^3 = 8 & 2^4 = 16 \\ 2^{-1} = \frac{1}{2} & 2^{-2} = \frac{1}{4} & 2^{-3} = \frac{1}{8} & 2^{-4} = \frac{1}{16} \end{array}$$

Appendix D Negative Exponents



Because division by 0 is undefined, our definition includes the restriction $a \neq 0$.

PRACTICE PROBLEMS

1. Simplify: 2^{-4}
2. Simplify: 4^{-2}
3. Simplify: $(-2)^{-3}$

Answers

1. $\frac{1}{16}$
2. $\frac{1}{16}$
3. $-\frac{1}{8}$

Appendix D

The properties of exponents we have developed so far hold for negative exponents as well as positive exponents. For example, Property 1, our multiplication property for exponents, is still written as

$$a^r \cdot a^s = a^{r+s}$$

but now r and s can be negative numbers also.

EXAMPLE 4Simplify: $2^5 \cdot 2^{-7}$

SOLUTION This is multiplication with the same base, so we add exponents.

$$\begin{aligned} 2^5 \cdot 2^{-7} &= 2^{5+(-7)} && \text{Property 1 for exponents} \\ &= 2^{-2} && \text{Addition} \\ &= \frac{1}{2^2} && \text{Definition of negative exponents} \\ &= \frac{1}{4} && \text{The square of 2 is 4} \end{aligned}$$

When we simplify expressions containing negative exponents, let's agree that the final expression contains only positive exponents.

EXAMPLE 5Simplify: $x^9 \cdot x^{-12}$

SOLUTION Again, because we have the product of two expressions with the same base, we use Property 1 for exponents to add exponents.

$$\begin{aligned} x^9 \cdot x^{-12} &= x^{9+(-12)} && \text{Property 1 for exponents} \\ &= x^{-3} && \text{Add exponents} \\ &= \frac{1}{x^3} && \text{Definition of negative exponents} \end{aligned}$$

Division with Exponents

To develop our next property of exponents, we use the definition for positive exponents. Consider the expression $\frac{x^6}{x^4}$. We can simplify by expanding the numerator and denominator and then reducing to lowest terms by dividing out common factors.

$$\begin{aligned} \frac{x^6}{x^4} &= \frac{x \cdot x \cdot x \cdot x \cdot x \cdot x}{x \cdot x \cdot x \cdot x} && \text{Expand numerator and denominator} \\ &= \frac{\cancel{x} \cdot \cancel{x} \cdot \cancel{x} \cdot \cancel{x} \cdot x \cdot x}{\cancel{x} \cdot \cancel{x} \cdot \cancel{x} \cdot \cancel{x}} && \text{Divide out common factors} \\ &= x \cdot x \\ &= x^2 && \text{Write answer with exponent 2} \end{aligned}$$

Note that the exponent in the answer is the difference of the exponents in the original problem. More specifically, if we subtract the exponent in the denominator from the exponent in the numerator, we obtain the exponent in the answer. This discussion leads us to another property of exponents.

4. Simplify: $3^4 \cdot 3^{-7}$

5. Simplify: $x^6 \cdot x^{-10}$

Answers

4. $\frac{1}{27}$ 5. $\frac{1}{x^4}$

Division Property for Expressions Containing Exponents

If a is any number other than zero, and r and s are integers, then

$$\frac{a^r}{a^s} = a^{r-s}$$

In words: To divide two numbers with the same base, subtract the exponent in the denominator from the exponent in the numerator, and use the common base as the base in the answer.

EXAMPLE 6

Simplify: $\frac{2^5}{2^8}$

SOLUTION Using our new property, we subtract the exponent in the denominator from the exponent in the numerator. The result is an expression containing a negative exponent.

$$\begin{aligned} \frac{2^5}{2^8} &= 2^{5-8} && \text{Division property for exponents} \\ &= 2^{-3} && \text{Subtraction} \\ &= \frac{1}{2^3} && \text{Definition of negative exponents} \\ &= \frac{1}{8} && \text{The cube of 2 is 8} \end{aligned}$$

To further justify our new property of exponents, we can rework the problem shown in Example 6, without using the division property for exponents, to see that we obtain the same answer.

$$\begin{aligned} \frac{2^5}{2^8} &= \frac{2 \cdot 2 \cdot 2 \cdot 2 \cdot 2}{2 \cdot 2 \cdot 2 \cdot 2 \cdot 2 \cdot 2 \cdot 2 \cdot 2} && \text{Expand numerator and denominator} \\ &= \frac{2 \cdot 2 \cdot 2 \cdot 2 \cdot 2}{2 \cdot 2 \cdot 2 \cdot 2 \cdot 2 \cdot 2 \cdot 2 \cdot 2} && \left. \begin{array}{l} \\ \\ \end{array} \right\} \text{Divide out common factors} \\ &= \frac{1}{2 \cdot 2 \cdot 2} \\ &= \frac{1}{8} && \text{Multiply} \end{aligned}$$

As you can see, the answer matches the answer obtained by using the division property for exponents.

EXAMPLE 7

Divide: $10^{-3} \div 10^5$

SOLUTION We begin by writing the division problem in fractional form. Then we apply our division property.

$$\begin{aligned} 10^{-3} \div 10^5 &= \frac{10^{-3}}{10^5} && \text{Write problem in fractional form} \\ &= 10^{-3-5} && \text{Division property for exponents} \\ &= 10^{-8} && \text{Subtraction} \\ &= \frac{1}{10^8} && \text{Definition of negative exponents} \end{aligned}$$

We can leave the answer in exponential form, as it is, or we can expand the denominator to obtain

$$= \frac{1}{100,000,000}$$

6. Simplify: $\frac{2^6}{2^8}$

7. Divide: $10^{-5} \div 10^3$

Answers

6. $\frac{1}{4}$ 7. $\frac{1}{10^8}$

8. Simplify: $\frac{10^{-6}}{10^{-8}}$

9. Simplify: $4x^{-3} \cdot 7x$

10. Simplify: $\frac{x^{-5} \cdot x^2}{x^{-8}}$

Answers

8. 100 9. $\frac{28}{x^2}$ 10. x^5

Appendix D

EXAMPLE 8 Simplify: $\frac{10^{-8}}{10^{-6}}$

SOLUTION Again, we are dividing expressions that have the same base. To find the exponent on the answer, we subtract the exponent in the denominator from the exponent in the numerator.

$$\begin{aligned}\frac{10^{-8}}{10^{-6}} &= 10^{-8-(-6)} && \text{Division property for exponents} \\ &= 10^{-2} && \text{Subtraction} \\ &= \frac{1}{10^2} && \text{Definition of negative exponents} \\ &= \frac{1}{100} && \text{Answer in expanded form}\end{aligned}$$

EXAMPLE 9 Simplify: $3x^{-4} \cdot 5x$

SOLUTION To begin to simplify this expression, we regroup using the commutative and associative properties. That way, the numbers 3 and 5 are grouped together, as are the powers of x . Note also how we write x as x^1 , so we can see the exponent.

$$\begin{aligned}3x^{-4} \cdot 5x &= 3x^{-4} \cdot 5x^1 && \text{Write } x \text{ as } x^1 \\ &= (3 \cdot 5)(x^{-4} \cdot x^1) && \text{Commutative and associative properties} \\ &= 15x^{-4+1} && \text{Multiply 3 and 5, then add exponents} \\ &= 15x^{-3} && \text{The sum of } -4 \text{ and } 1 \text{ is } -3 \\ &= \frac{15}{x^3} && \text{Definition of negative exponents}\end{aligned}$$

EXAMPLE 10 Simplify: $\frac{x^{-4} \cdot x^7}{x^{-2}}$

SOLUTION We simplify the numerator first by adding exponents.

$$\begin{aligned}\frac{x^{-4} \cdot x^7}{x^{-2}} &= \frac{x^{-4+7}}{x^{-2}} && \text{Multiplication property for exponents} \\ &= \frac{x^3}{x^{-2}} && \text{The sum of } -4 \text{ and } 7 \text{ is } 3 \\ &= x^{3-(-2)} && \text{Division property for exponents} \\ &= x^5 && \text{Subtracting } -2 \text{ is equivalent to adding } +2\end{aligned}$$

Getting Ready for Class

After reading through the preceding section, respond in your own words and in complete sentences.

1. Negative exponents are _____.
2. Do negative exponents result in negative numbers?
3. How do you divide exponents with the same base?
4. The problem below is wrong. Correct the right-hand side.

$$\frac{x^7}{x^8} = x$$

Problem Set D

Write each expression with positive exponents, then simplify. [Examples 1–5]

1. 2^{-5}

2. 3^{-4}

3. 10^{-2}

4. 10^{-3}

5. x^{-3}

6. x^{-4}

7. $(-4)^{-2}$

8. $(-2)^{-4}$

9. $(-5)^{-3}$

10. $(-4)^{-3}$

11. $2^6 \cdot 2^{-8}$

12. $3^5 \cdot 3^{-8}$

13. $10^{-2} \cdot 10^5$

14. $10^{-3} \cdot 10^6$

15. $x^{-4} \cdot x^{-3}$

16. $x^{-3} \cdot x^{-7}$

17. $3^8 \cdot 3^{-6}$

18. $2^9 \cdot 2^{-6}$

19. $2 \cdot 2^{-4}$

20. $3^{-5} \cdot 3$

21. $10^{-3} \cdot 10^8 \cdot 10^{-2}$

22. $10^{-3} \cdot 10^9 \cdot 10^{-4}$

23. $x^{-5} \cdot x^{-4} \cdot x^{-3}$

24. $x^{-7} \cdot x^{-9} \cdot x^{-6}$

25. $2^{-3} \cdot 2 \cdot 2^3$

26. $3 \cdot 3^5 \cdot 3^{-5}$

Divide as indicated. Write your answer using only positive exponents. [Examples 6–10]

27. $\frac{2^9}{2^7}$

28. $\frac{3^8}{3^4}$

29. $\frac{2^7}{2^9}$

30. $\frac{3^5}{3^7}$

31. $\frac{x^4}{x^3}$

32. $\frac{x^7}{x^5}$

33. $\frac{x^3}{x^4}$

34. $\frac{x^5}{x^7}$

35. $10^{-2} \div 10^5$

36. $10^{-4} \div 10^2$

37. $10^{-5} \div 10^2$

38. $10^{-3} \div 10$

39. $\frac{10^{-2}}{10^{-5}}$

40. $\frac{10^{-4}}{10^{-7}}$

41. $x^{12} \div x^{-12}$

42. $x^6 \div x^{-6}$

43. $2^{12} \div 2^{10}$

44. $3^{11} \div 3^9$

45. $\frac{10}{10^{-3}}$

46. $\frac{10^2}{10^{-5}}$

Simplify each expression. Write your answer using only positive exponents.

47. $3x^{-2} \cdot 5x^7$

48. $5x^{-3} \cdot 8x^6$

49. $2x^{-2} \cdot 3x^{-3}$

50. $4x^{-6} \cdot 5x^{-4}$

51. $(4x^{-4})(-3x^{-3})$

52. $(3x^2)(-4x^{-1})$

53. $7x \cdot 3x^{-4} \cdot 2x^5$

54. $6x \cdot 2x^{-3} \cdot 3x^4$

55. $\frac{x^{-3} \cdot x^7}{x^{-1}}$

56. $\frac{x^{-4} \cdot x^6}{x^{-2}}$

57. $\frac{x^{-2} \cdot x^{-8}}{x^{-12}}$

58. $\frac{x^{-5} \cdot x^{-7}}{x^{-15}}$

There are many disciplines that deal with very large numbers and others that deal with very small numbers. For example, in astronomy, distances commonly are given in light-years. A light-year is the distance that light will travel in one year. It is approximately

$$5,880,000,000,000 \text{ miles}$$

It can be difficult to perform calculations with numbers in this form because of the number of zeros present. Scientific notation provides a way of writing very large, or very small, numbers in a more manageable form.

Scientific Notation

Definition

A number is in scientific notation when it is written as the product of a number between 1 and 10 and an integer power of 10. A number written in scientific notation has the form

$$n \times 10^r$$

where $1 \leq n < 10$ and $r = \text{an integer}$.

EXAMPLE 1

The speed of light is 186,000 miles per second. Write 186,000 in scientific notation.

SOLUTION To write this number in scientific notation, we rewrite it as the product of a number between 1 and 10 and a power of 10. To do so, we move the decimal point 5 places to the left so that it appears between the 1 and the 8, giving us 1.86. Then we multiply this number by 10^5 . The number that results has the same value as our original number but is written in scientific notation. Here is our result:

$$186,000 = 1.86 \times 10^5$$

Both numbers have exactly the same value. The number on the left is written in *standard form*, while the number on the right is written in scientific notation. ■

Converting to Standard Form

EXAMPLE 2

If your pulse rate is 60 beats per minute, then your heart will beat 8.64×10^4 times each day. Write 8.64×10^4 in standard form.

SOLUTION Because 10^4 is 10,000, we can think of this as simply a multiplication problem. That is,

$$8.64 \times 10^4 = 8.64 \times 10,000 = 86,400$$

Looking over our result, we can think of the exponent 4 as indicating the number of places we need to move the decimal point to write our number in standard form. Because our exponent is positive 4, we move the decimal point from its original position, between the 8 and the 6, four places to the right. If we need to add any zeros on the right we do so. The result is the standard form of our number, 86,400. ■

PRACTICE PROBLEMS

- Write 27,500 in scientific notation.

- Write 7.89×10^5 in standard form.

Answers

- 2.75×10^4
- 789,000

Next, we turn our attention to writing small numbers in scientific notation. To do so, we use the negative exponents developed in the previous section. For example, the number 0.00075, when written in scientific notation, is equivalent to 7.5×10^{-4} . Here's why:

$$7.5 \times 10^{-4} = 7.5 \times \frac{1}{10^4} = 7.5 \times \frac{1}{10,000} = \frac{7.5}{10,000} = 0.00075$$

The table below lists some other numbers both in scientific notation and in standard form.

EXAMPLE 3

Each pair of numbers in the table below is equal.

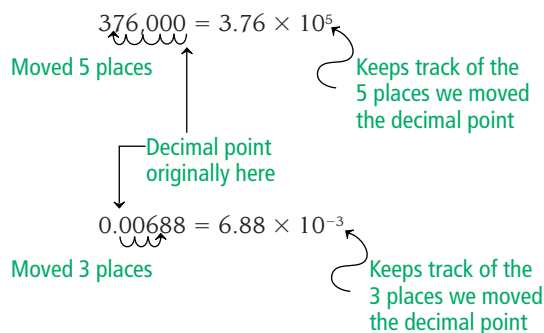
3. Fill in the missing numbers in the table below:

Standard Form	Scientific Notation
a. 24,500	=
b.	= 5.6×10^5
c. 0.000789	=
d.	= 4.8×10^{-3}

Standard Form	Scientific Notation
376,000	= 3.76×10^5
49,500	= 4.95×10^4
3,200	= 3.2×10^3
591	= 5.91×10^2
46	= 4.6×10^1
8	= 8×10^0
0.47	= 4.7×10^{-1}
0.093	= 9.3×10^{-2}
0.00688	= 6.88×10^{-3}
0.0002	= 2×10^{-4}
0.000098	= 9.8×10^{-5}

As we read across the table, for each pair of numbers, notice how the decimal point in the number on the right is placed so that the number containing the decimal point is always a number between 1 and 10. Correspondingly, the exponent on 10 keeps track of how many places the decimal point was moved in converting from standard form to scientific notation. In general, when the exponent is positive, we are working with a large number. On the other hand, when the exponent is negative, we are working with a small number. (By small number, we mean a number that is less than 1, but larger than 0.)

We end this section with a diagram that shows two numbers, one large and one small, that are converted to scientific notation.

**Getting Ready for Class**

After reading through the preceding section, respond in your own words and in complete sentences.

1. What is scientific notation?
2. What types of numbers are frequently written with scientific notation?
3. In writing the distance, in miles, to the sun, would we use a positive power of ten or a negative power of ten?
4. In writing the weight, in kilograms, of a paper clip, would we use a positive power of ten or a negative power of ten?

Answer

3. a. 2.45×10^4
 b. 560,000
 c. 7.89×10^{-4}
 d. 0.0048

Problem Set E

Write each number in scientific notation. [Examples 1, 3]

1. 425,000

2. 635,000

3. 6,780,000

4. 5,490,000

5. 11,000

6. 29,000

7. 89,000,000

8. 37,000,000

Write each number in standard form. [Examples 2, 3]

9. 3.84×10^4

10. 3.84×10^7

11. 5.71×10^7

12. 5.71×10^5

13. 3.3×10^3

14. 3.3×10^2

15. 8.913×10^7

16. 8.913×10^5

Write each number in scientific notation. [Examples 1, 3]

17. 0.00035

18. 0.0000035

19. 0.0007

20. 0.007

21. 0.06035

22. 0.0006035

23. 0.1276

24. 0.001276

Write each number in standard form. [Examples 2, 3]

25. 8.3×10^{-4}

26. 8.3×10^{-7}

27. 6.25×10^{-2}

28. 7.83×10^{-4}

29. 3.125×10^{-1}

30. 3.125×10^{-2}

31. 5×10^{-3}

32. 5×10^{-5}

■ Applying the Concepts

Super Bowl Advertising and Viewers The cost of a 30-second television ad along with the approximate number of viewers for four different Super Bowls is shown below. Complete the table by writing the ad cost in scientific notation, and the number of viewers in standard form.

Year	Super Bowl	Ad Cost	Ad Cost in Scientific Notation	Viewers in Scientific Notation	Number of Viewers
33. 1967	I	\$42,000		4.0×10^6	
34. 1977	XI	\$162,000		6.2×10^7	
35. 1987	XXI	\$575,000		8.7×10^7	
36. 1997	XXXI	\$1,200,000		8.8×10^7	

Galilean Moons The planet Jupiter has about 60 known moons. In the year 1610 Galileo first discovered the four largest moons of Jupiter, Io, Europa, Ganymede, and Callisto. These moons are known as the Galilean moons. Each moon has a unique period, or the time it takes to make a trip around Jupiter. Fill in the tables below.



37.

Jupiter's Moon	Period (seconds)
Io	153,000
Europa	3.07×10^5
Ganymede	618,000
Callisto	1.44×10^6

38.

Jupiter's Moon	Distance from Jupiter (kilometers)
Io	422,000
Europa	6.17×10^5
Ganymede	1,070,000
Callisto	1.88×10^6

Computer Science The smallest amount of data that a computer can hold is measured in bits. A byte is the next largest unit and is equal to 2^3 bits. Fill in the table below.

Unit	Number of Bytes	
	Exponential Form	Scientific Notation
39. Kilobyte	$2^{10} = 1,024$	
40. Megabyte	$2^{20} \approx 1,048,000$	
41. Gigabyte	$2^{30} \approx 1,074,000,000$	
42. Terabyte	$2^{40} \approx 1,099,500,000,000$	

More about Scientific Notation

F

Multiplication and Division with Numbers Written in Scientific Notation

In this section, we extend our work with scientific notation to include multiplication and division with numbers written in scientific notation. To work the problems in this section, we use the material presented in the previous two sections, along with the commutative and associative properties of multiplication and the rule for multiplication with fractions. Here is our first example.

EXAMPLE 1

Multiply: $(3.5 \times 10^8)(2.2 \times 10^{-5})$

SOLUTION First we apply the commutative and associative properties to rearrange the numbers, so that the decimal numbers are grouped together and the powers of 10 are also.

$$(3.5 \times 10^8)(2.2 \times 10^{-5}) = (3.5)(2.2) \times (10^8)(10^{-5})$$

Next, we multiply the decimal numbers together and then the powers of ten. To multiply the powers of ten, we add exponents.

$$\begin{aligned} &= 7.7 \times 10^{8+(-5)} \\ &= 7.7 \times 10^3 \end{aligned}$$

EXAMPLE 2

Find the product of 130,000,000 and 0.000005. Write your answer in scientific notation.

SOLUTION We begin by writing both numbers in scientific notation. Then we proceed as we did in Example 1: We group the numbers between 1 and 10 separately from the powers of 10.

$$\begin{aligned} (130,000,000)(0.000005) &= (1.3 \times 10^8)(5 \times 10^{-6}) \\ &= (1.3)(5) \times (10^8)(10^{-6}) \\ &= 6.5 \times 10^2 \end{aligned}$$

Our next examples involve division with numbers in scientific notation.

EXAMPLE 3

Divide: $\frac{8 \times 10^3}{4 \times 10^{-6}}$

SOLUTION To separate the numbers between 1 and 10 from the powers of 10, we “undo” the multiplication and write the problem as the product of two fractions. Doing so looks like this:

$$\frac{8 \times 10^3}{4 \times 10^{-6}} = \frac{8}{4} \times \frac{10^3}{10^{-6}} \quad \text{Write as two separate fractions}$$

Next, we divide 8 by 4 to obtain 2. Then we divide 10^3 by 10^{-6} by subtracting exponents.

$$\begin{aligned} &= 2 \times 10^{3-(-6)} \quad \text{Divide} \\ &= 2 \times 10^9 \end{aligned}$$

PRACTICE PROBLEMS

1. Multiply: $(2.5 \times 10^6)(1.4 \times 10^2)$

2. Find the product of 2,200,000 and 0.00015.

3. Divide: $\frac{6 \times 10^5}{2 \times 10^{-4}}$

Answers

1. 3.5×10^8 2. 3.3×10^2
3. 3.0×10^9

4. Divide: $\frac{0.0038}{19,000,000}$

5. Simplify: $\frac{(6.8 \times 10^{-4})(3.9 \times 10^2)}{7.8 \times 10^{-6}}$

6. Simplify: $\frac{(0.000035)(45,000)}{0.000075}$

Answers

4. 2.0×10^{-10} 5. 3.4×10^4
6. 2.1×10^4

Appendix F

EXAMPLE 4

Divide: $\frac{0.00045}{1,500,000}$

SOLUTION To begin, write each number in scientific notation.

$$\frac{0.00045}{1,500,000} = \frac{4.5 \times 10^{-4}}{1.5 \times 10^6} \quad \text{Write numbers in scientific notation}$$

Next, as in the previous example, we write the problem as two separate fractions in order to group the numbers between 1 and 10 together, as well as the powers of 10.

$$\begin{aligned} &= \frac{4.5}{1.5} \times \frac{10^{-4}}{10^6} && \text{Write as two separate fractions} \\ &= 3 \times 10^{-4-6} && \text{Divide} \\ &= 3 \times 10^{-10} && -4 - 6 = -4 + (-6) = -10 \end{aligned}$$

EXAMPLE 5

Simplify: $\frac{(6.8 \times 10^5)(3.9 \times 10^{-7})}{7.8 \times 10^{-4}}$

SOLUTION We group the numbers between 1 and 10 separately from the powers of 10:

$$\begin{aligned} \frac{(6.8 \times 10^5)(3.9 \times 10^{-7})}{7.8 \times 10^{-4}} &= \frac{(6.8)(3.9)}{7.8} \times \frac{(10^5)(10^{-7})}{10^{-4}} \\ &= 3.4 \times 10^{5+(-7)-(-4)} \\ &= 3.4 \times 10^2 \end{aligned}$$

EXAMPLE 6

Simplify: $\frac{(35,000)(0.0045)}{7,500,000}$

SOLUTION We write each number in scientific notation, and then we proceed as we have in the examples above.

$$\begin{aligned} \frac{(35,000)(0.0045)}{7,500,000} &= \frac{(3.5 \times 10^4)(4.5 \times 10^{-3})}{7.5 \times 10^6} \\ &= \frac{(3.5)(4.5)}{7.5} \times \frac{(10^4)(10^{-3})}{10^6} \\ &= 2.1 \times 10^{4+(-3)-6} \\ &= 2.1 \times 10^{-5} \end{aligned}$$

Getting Ready for Class

After reading through the preceding section, respond in your own words and in complete sentences.

- How is the commutative property used when multiplying or dividing with scientific notation?
- How is the associative property used when multiplying or dividing with scientific notation?
- The following problem is not complete. Why not?

$$(6.0 \times 10^3)(5.2 \times 10^4) = 31.2 \times 10^7$$

- Explain why it is easier to multiply very large or very small numbers when they are written in scientific notation, rather than standard form.

Problem Set F

Find each product. Write all answers in scientific notation. [Examples 1, 2]

1. $(2 \times 10^4)(3 \times 10^6)$
2. $(3 \times 10^3)(1 \times 10^5)$
3. $(2.5 \times 10^7)(6 \times 10^3)$
4. $(3.8 \times 10^6)(5 \times 10^3)$
5. $(7.2 \times 10^3)(9.5 \times 10^{-6})$
6. $(8.5 \times 10^5)(4.2 \times 10^{-9})$
7. $(36,000)(450,000)$
8. $(25,000)(620,000)$
9. $(4,200)(0.00009)$
10. $(0.0000065)(86,000)$

Find each quotient. Write all answers in scientific notation. [Examples 3, 4]

11. $\frac{3.6 \times 10^5}{1.8 \times 10^2}$
12. $\frac{9.3 \times 10^{15}}{3.0 \times 10^5}$
13. $\frac{8.4 \times 10^{-6}}{2.1 \times 10^3}$
14. $\frac{6.0 \times 10^{-10}}{1.5 \times 10^3}$
15. $\frac{3.5 \times 10^5}{7.0 \times 10^{-10}}$
16. $\frac{1.6 \times 10^7}{8.0 \times 10^{-14}}$
17. $\frac{540,000}{9,000}$
18. $\frac{750,000,000}{250,000}$
19. $\frac{0.00092}{46,000}$
20. $\frac{0.00000047}{235,000}$

Simplify each expression, and write all answers in scientific notation. [Examples 5, 6]


21. $\frac{(3 \times 10^7)(8 \times 10^4)}{6 \times 10^5}$
22. $\frac{(4 \times 10^9)(6 \times 10^5)}{8 \times 10^3}$
23. $\frac{(2 \times 10^{-3})(6 \times 10^{-5})}{3 \times 10^{-4}}$
24. $\frac{(4 \times 10^{-5})(9 \times 10^{-10})}{6 \times 10^{-6}}$
25. $\frac{(3.5 \times 10^{-4})(4.2 \times 10^5)}{7 \times 10^3}$
26. $\frac{(2.4 \times 10^{-6})(3.6 \times 10^3)}{9 \times 10^5}$
27. $\frac{(0.00087)(40,000)}{1,160,000}$
28. $\frac{(0.0045)(24,000)}{270,000}$
29. $\frac{(525)(0.0000032)}{0.0025}$
30. $\frac{(465)(0.000004)}{0.0093}$

■ Applying the Concepts

Super Bowl Advertising and Viewers The cost of a 30-second television ad along with the approximate number of viewers for four different Super Bowls is shown below. Complete the table by finding the cost per viewer by dividing the ad cost by the number of viewers.

Year	Super Bowl	Ad Cost	Number of Viewers	Cost per Viewer
31. 1967	I	$\$4.2 \times 10^4$	4.0×10^6	
32. 1977	XI	$\$1.62 \times 10^5$	6.2×10^7	
33. 1987	XXI	$\$5.75 \times 10^5$	8.7×10^7	
34. 1997	XXXI	$\$1.2 \times 10^6$	8.8×10^7	

35. Pyramids and Scientific Notation The Great Pyramid at Giza is one of the largest and oldest man-made structures in the world. It weighs over 10^{10} kilograms. If each stone making up the pyramid weighs approximately 4,000 kilograms, how many stones make up the structure? Write your answer in scientific notation.



36. Technology A CD-ROM holds about 700 megabytes, or 7.0×10^8 bytes, of data. A four-and-a-half minute song downloaded from the Internet uses 5 megabytes, or 5.0×10^6 bytes, of storage space. How many four-and-a-half minute songs can fit on a CD?



Solutions to Selected Practice Problems

Solutions to all practice problems that require more than one step are shown here. Before you look back here to see where you have made a mistake, you should try the problem you are working on twice. If you do not get the correct answer the second time you work the problem, then the solution here should show you where you went wrong.

Chapter 1

Section 1.2

$$\begin{array}{r} 1. \quad 63 \\ +25 \\ \hline 88 \end{array}$$

$$\begin{array}{r} 2. \quad 342 \\ +605 \\ \hline 947 \end{array}$$

$$\begin{array}{r} 3. \text{ a. } \overset{1}{3}75 \\ \quad \quad 121 \\ +473 \\ \hline 969 \end{array}$$

$$\begin{array}{r} \text{b. } \overset{22}{4}95 \\ \quad \quad 699 \\ +978 \\ \hline 2,172 \end{array}$$

$$\begin{array}{r} 4. \text{ a. } \overset{11}{5}7, \overset{11}{9}04 \\ \quad \quad \quad 7,193 \\ \quad \quad \quad \underline{655} \\ \quad \quad \quad 65,752 \end{array}$$

$$\begin{array}{r} \text{b. } \overset{11}{6}8, \overset{23}{4}95 \\ \quad \quad \quad 7,236 \\ \quad \quad \quad \quad 878 \\ \quad \quad \quad \quad \quad 29 \\ \quad \quad \quad \quad \quad \quad \underline{5} \\ \quad \quad \quad \quad \quad \quad 76,643 \end{array}$$

7. a. $6 + 2 + 4 + 8 + 3 = (6 + 4) + (2 + 8) + 3 = 10 + 10 + 3 = 23$
 b. $24 + 17 + 36 + 13 = (24 + 36) + (17 + 13) = 60 + 30 = 90$

8. a. $n = 8$, since $8 + 9 = 17$
 b. $n = 8$, since $8 + 2 = 10$
 c. $n = 1$, since $8 + 1 = 9$
 d. $n = 6$, since $16 = 6 + 10$

9. a. $7 + 7 + 7 + 7 = 28$ ft b. $88 + 88 + 33 + 33 = 242$ in. c. $44 + 66 + 77 = 187$ yd

Section 1.3

5. a. Food \$ 5,296
 Car 4,847
 Total \$10,143 = \$10,140 to the nearest ten dollars

b. Savings \$2,149
 Taxes 6,137
 Total \$8,286 = \$8,300 to the nearest hundred dollars

c. House \$10,200
 Taxes 6,137
 Misc. 6,142
 Car 4,847
 Savings 2,149
 Total \$29,475 = \$29,000 to the nearest thousand dollars

6. a. We round each of the four numbers in the sum to the nearest thousand, and then we add the rounded numbers.

$$\begin{array}{r} 5,287 \text{ rounds to } 5,000 \\ 2,561 \text{ rounds to } 3,000 \\ 888 \text{ rounds to } 1,000 \\ +4,898 \text{ rounds to } +5,000 \\ \hline 14,000 \end{array}$$

We estimate the answer to this problem to be approximately 14,000. The actual answer, found by adding the original, unrounded numbers, is 13,634.

b. We round each of the four numbers in the sum to the nearest thousand, and then we add the rounded numbers.

$$\begin{array}{r} 702 \text{ rounds to } 1,000 \\ 3,944 \text{ rounds to } 4,000 \\ 1,001 \text{ rounds to } 1,000 \\ +3,500 \text{ rounds to } +4,000 \\ \hline 10,000 \end{array}$$

We estimate the answer to this problem to be approximately 10,000. The actual answer, found by adding the original, unrounded numbers, is 9,147.

Section 1.4

$$\begin{array}{r} 1. \text{ a. } 684 \\ -431 \\ \hline 253 \end{array}$$

$$\begin{array}{r} \text{b. } 7,406 \\ -3,405 \\ \hline 4,001 \end{array}$$

$$\begin{array}{r} 2. \text{ a. } 6,857 \\ -405 \\ \hline 6,452 \end{array}$$

$$\begin{array}{r} \text{b. } 345 \\ -234 \\ \hline 111 \end{array}$$

$$3. \text{ a. } 63 = 6 \text{ tens} + 3 \text{ ones} = 5 \text{ tens} + 13 \text{ ones}$$

$$\begin{array}{r} -47 = 4 \text{ tens } 7 \text{ ones} \\ \hline 1 \text{ ten } + 6 \text{ ones} \end{array}$$

Answer: 16

$$3. \text{ b. } 532 = 5 \text{ hundreds} + 3 \text{ tens} + 2 \text{ ones} = 5 \text{ hundreds} + 2 \text{ tens} + 12 \text{ ones}$$

$$\begin{array}{r} -403 = 4 \text{ hundreds } 0 \text{ tens } 3 \text{ tens} \\ \hline 1 \text{ hundred } + 2 \text{ tens } + 9 \text{ ones} \end{array}$$

Answer: 129

$$4. \text{ a. } \begin{array}{r} 515 \\ 656 \\ -283 \\ \hline 373 \end{array}$$

$$4. \text{ b. } \begin{array}{r} 216 \\ 3,729 \\ -1,749 \\ \hline 1,980 \end{array}$$

Section 1.5

$$1. \text{ a. } 4 \cdot 70 = 70 + 70 + 70 + 70 = 280$$

$$1. \text{ b. } 4 \cdot 700 = 700 + 700 + 700 + 700 = 2,800$$

$$1. \text{ c. } 4 \cdot 7,000 = 7,000 + 7,000 + 7,000 + 7,000 = 28,000$$

$$4. \text{ a. } \begin{array}{r} 5 \\ 57 \\ \times 8 \\ \hline 456 \end{array}$$

$$4. \text{ b. } \begin{array}{r} 5 \\ 570 \\ \times 8 \\ \hline 4,560 \end{array}$$

$$5. \text{ a. } \begin{array}{r} 45 \\ \times 62 \\ \hline 90 \\ +2,700 \\ \hline 2,790 \end{array}$$

$90 \leftarrow 2(45) = 90$
 $+2,700 \leftarrow 60(45) = 2,700$

$$5. \text{ b. } \begin{array}{r} 1 \\ 620 \\ \times 45 \\ \hline 3,100 \\ +24,800 \\ \hline 27,900 \end{array}$$

$3,100 \leftarrow 5(620) = 3,100$
 $+24,800 \leftarrow 40(620) = 24,800$

$$6. \text{ a. } \begin{array}{r} 356 \\ \times 641 \\ \hline 356 \\ 14,240 \\ 213,600 \\ \hline 228,196 \end{array}$$

$356 \leftarrow 1(356) = 356$
 $14,240 \leftarrow 40(356) = 14,240$
 $213,600 \leftarrow 600(356) = 213,600$

$$6. \text{ b. } \begin{array}{r} 3,560 \\ \times 641 \\ \hline 3,560 \\ 142,400 \\ 2,136,000 \\ \hline 2,281,960 \end{array}$$

$3,560 \leftarrow 1(3,560) = 3,560$
 $142,400 \leftarrow 40(3,560) = 142,400$
 $2,136,000 \leftarrow 600(3,560) = 2,136,000$

$$7. \begin{array}{r} 365 \\ \times 550 \\ \hline 18,250 \\ 182,500 \\ \hline 200,750 \text{ mg} \end{array}$$

$$8. 36(\$12) = \$432 \text{ Total weekly earnings}$$

$$\$432 - \$109 = \$323 \text{ Take-home pay}$$

$$9. \text{ Fat: } 3(10) = 30 \text{ grams of fat; sodium: } 3(160) = 480 \text{ milligrams of sodium}$$

$$10. \text{ Bowling for 3 hours burns } 3(265) = 795 \text{ calories. Eating two bags of chips means you are consuming } 2(3)(160) = 960 \text{ calories. No; bowling won't burn all the calories.}$$

$$13. \text{ a. Area} = s^2 = 4^2 = 16 \text{ feet}^2$$

$$\text{ b. Area} = lw = (7)(5) = 35 \text{ inches}^2$$

Section 1.6

$$1. \text{ a. } \begin{array}{r} 74 \\ 4 \overline{)296} \\ \underline{28} \downarrow \\ 16 \\ \underline{16} \\ 0 \end{array}$$

$$1. \text{ b. } \begin{array}{r} 740 \\ 4 \overline{)2,960} \\ \underline{28} \downarrow \\ 16 \\ \underline{16} \\ 00 \end{array}$$

$$2. \text{ a. } \begin{array}{r} 283 \\ 24 \overline{)6,792} \\ \underline{48} \downarrow \\ 199 \\ \underline{192} \\ 72 \\ \underline{72} \\ 0 \end{array}$$

$$2. \text{ b. } \begin{array}{r} 2,830 \\ 24 \overline{)67,920} \\ \underline{48} \downarrow \\ 199 \\ \underline{192} \\ 72 \\ \underline{72} \\ 00 \end{array}$$

$$3. \begin{array}{r} 208 \\ 9 \overline{)1,872} \\ \underline{18} \downarrow \\ 07 \\ \underline{0} \\ 72 \\ \underline{72} \\ 0 \end{array}$$

$$4. \text{ a. } \begin{array}{r} 69 \text{ R } 20, \text{ or } 69 \frac{20}{27} \\ 27 \overline{)1,883} \\ \underline{162} \downarrow \\ 263 \\ \underline{243} \\ 20 \end{array}$$

$$4. \text{ b. } \begin{array}{r} 104 \text{ R } 11, \text{ or } 104 \frac{11}{18} \\ 18 \overline{)1,883} \\ \underline{18} \downarrow \\ 08 \\ \underline{0} \\ 83 \\ \underline{72} \\ 11 \end{array}$$

$$5. \begin{array}{r} 156 \text{ The family spent } \$156 \text{ per day} \\ 12 \overline{)1,872} \\ \underline{12} \downarrow \\ 67 \\ \underline{60} \\ 72 \\ \underline{72} \\ 0 \end{array}$$

Section 1.7

$$1. \text{ Base 5, exponent 2; 5 to the second power, or 5 squared} \quad 2. \text{ Base 2, exponent 3; 2 to the third power, or 2 cubed}$$

$$3. \text{ Base 1, exponent 4; 1 to the fourth power} \quad 4. 5^2 = 5 \cdot 5 = 25 \quad 5. 9^2 = 9 \cdot 9 = 81 \quad 6. 2^3 = 2 \cdot 2 \cdot 2 = 8$$

$$7. 1^4 = 1 \cdot 1 \cdot 1 \cdot 1 = 1 \quad 8. 2^5 = 2 \cdot 2 \cdot 2 \cdot 2 \cdot 2 = 32 \quad 9. 7^1 = 7 \quad 10. 4^1 = 4 \quad 11. 9^0 = 1 \quad 12. 1^0 = 1$$

$$13. \text{ a. } 5 \cdot 7 - 3 \cdot 6 = 35 - 18 \\ = 17$$

$$\text{ b. } 5 \cdot 70 - 3 \cdot 60 = 350 - 180 \\ = 170$$

$$14. 7 + 3(6 + 4) = 7 + 3(10) \\ = 7 + 30 \\ = 37$$

$$15. \text{ a. } 28 \div 7 - 3 = 4 - 3 \\ = 1$$

$$\text{ b. } 6 \cdot 3^2 + 64 \div 2^4 - 2 = 6 \cdot 9 + 64 \div 16 - 2 \\ = 54 + 4 - 2 \\ = 58 - 2 \\ = 56$$

$$16. \text{ a. } 5 + 3[24 - 5(6 - 2)] = 5 + 3[24 - 5(4)] \\ = 5 + 3[24 - 20] \\ = 5 + 3[4] \\ = 5 + 12 \\ = 17$$

$$\text{ b. } 50 + 30[240 - 50(6 - 2)] = 50 + 30[240 - 50(4)] \\ = 50 + 30[240 - 200] \\ = 50 + 30(40) \\ = 50 + 1,200 \\ = 1,250$$

Chapter 2

Section 2.1

$$6. \frac{2}{3} = \frac{2 \cdot 4}{3 \cdot 4} = \frac{8}{12} \quad 7. \frac{2}{3} = \frac{2 \cdot 4x}{3 \cdot 4x} = \frac{8x}{12x} \quad 8. \frac{15}{20} = \frac{15 \div 5}{20 \div 5} = \frac{3}{4} \quad 10. \frac{1}{3} \cdot \frac{4}{4} = \frac{4}{12}, \frac{1}{6} \cdot \frac{2}{2} = \frac{2}{12}, \frac{1}{4} \cdot \frac{3}{3} = \frac{3}{12}$$

Section 2.2

1. 37 and 59 are prime numbers; 39 is divisible by 3 and 13; 51 is divisible by 3 and 17.

$$2. \text{ a. } 90 = 9 \cdot 10 \\ = 3 \cdot 3 \cdot 2 \cdot 5 \\ = 2 \cdot 3^2 \cdot 5$$

$$\text{ b. } 900 = 9 \cdot 100 \\ = 3 \cdot 3 \cdot 25 \cdot 4 \\ = 3 \cdot 3 \cdot 5 \cdot 5 \cdot 2 \cdot 2 \\ = 2^2 \cdot 3^2 \cdot 5^2$$

$$4. \frac{12}{18} = \frac{12 \div 6}{18 \div 6} = \frac{2}{3}$$

$$5. \frac{15}{20} = \frac{3 \cdot 5}{2 \cdot 2 \cdot 5} = \frac{3}{4}$$

$$6. \text{ a. } \frac{30}{35} = \frac{2 \cdot 3 \cdot 5}{5 \cdot 7} = \frac{6}{7}$$

$$\text{ b. } \frac{300}{350} = \frac{2 \cdot 2 \cdot 3 \cdot 5 \cdot 5}{2 \cdot 5 \cdot 5 \cdot 7} = \frac{6}{7}$$

$$7. \text{ a. } \frac{8}{72} = \frac{2 \cdot 2 \cdot 2 \cdot 1}{2 \cdot 2 \cdot 2 \cdot 3 \cdot 3} = \frac{1}{9}$$

$$\text{ b. } \frac{16}{144} = \frac{2 \cdot 2 \cdot 2 \cdot 2}{2 \cdot 2 \cdot 2 \cdot 2 \cdot 3 \cdot 3} = \frac{1}{9}$$

$$8. \frac{5}{50} = \frac{5 \cdot 1}{5 \cdot 2 \cdot 5} = \frac{1}{10}$$

$$9. \frac{120}{25} = \frac{2 \cdot 2 \cdot 2 \cdot 3 \cdot 5}{5 \cdot 5} = \frac{24}{5}$$

Section 2.3

$$1. \frac{2}{3} \cdot \frac{5}{9} = \frac{10}{27}$$

$$2. \frac{2}{5} \cdot 7 = \frac{2}{5} \cdot \frac{7}{1} \\ = \frac{14}{5}$$

$$3. \frac{1}{3} \left(\frac{4}{5} \cdot \frac{1}{3} \right) = \frac{1}{3} \left(\frac{4}{15} \right) \\ = \frac{4}{45}$$

$$4. \text{ a. } \frac{12}{25} \cdot \frac{5}{6} = \frac{12 \cdot 5}{25 \cdot 6} \\ = \frac{(2 \cdot 2 \cdot 3) \cdot 5}{(5 \cdot 5) \cdot (2 \cdot 3)} \\ = \frac{2}{5}$$

$$\text{ b. } \frac{12}{25} \cdot \frac{50}{60} = \frac{12 \cdot 50}{25 \cdot 60} \\ = \frac{(2 \cdot 2 \cdot 3) \cdot (2 \cdot 5 \cdot 5)}{(5 \cdot 5) \cdot (2 \cdot 2 \cdot 3 \cdot 5)} \\ = \frac{2}{5}$$

$$5. \text{ a. } \frac{8}{3} \cdot \frac{9}{24} = \frac{8 \cdot 9}{3 \cdot 24} \\ = \frac{(2 \cdot 2 \cdot 2) \cdot (3 \cdot 3)}{3 \cdot (2 \cdot 2 \cdot 2 \cdot 3)} \\ = \frac{1}{1} \\ = 1$$

$$\text{ b. } \frac{8}{30} \cdot \frac{90}{24} = \frac{8 \cdot 90}{30 \cdot 24} \\ = \frac{(2 \cdot 2 \cdot 2) \cdot (2 \cdot 3 \cdot 3 \cdot 5)}{(2 \cdot 3 \cdot 5) \cdot (2 \cdot 2 \cdot 2 \cdot 3)} \\ = \frac{1}{1} \\ = 1$$

$$6. \frac{3}{4} \cdot \frac{8}{3} \cdot \frac{1}{6} = \frac{3 \cdot 8 \cdot 1}{4 \cdot 3 \cdot 6} \\ = \frac{(3 \cdot 2 \cdot 2 \cdot 2) \cdot 1}{(2 \cdot 2) \cdot 3 \cdot (2 \cdot 3)} \\ = \frac{1}{3}$$

$$7. \left(\frac{2}{3} \right)^2 = \frac{2}{3} \cdot \frac{2}{3} \\ = \frac{4}{9}$$

$$8. \text{ a. } \left(\frac{3}{4} \right)^2 \cdot \frac{1}{2} = \frac{3}{4} \cdot \frac{3}{4} \cdot \frac{1}{2} \\ = \frac{9}{32}$$

$$\text{ b. } \left(\frac{2}{3} \right)^3 \cdot \frac{9}{8} = \frac{2}{3} \cdot \frac{2}{3} \cdot \frac{2}{3} \cdot \frac{9}{8} \\ = \frac{2 \cdot 2 \cdot 2 \cdot 9}{3 \cdot 3 \cdot 3 \cdot 8} \\ = \frac{2 \cdot 2 \cdot 2 \cdot (3 \cdot 3)}{3 \cdot 3 \cdot 3 \cdot (2 \cdot 2 \cdot 2)} \\ = \frac{2 \cdot 2 \cdot 2 \cdot (3 \cdot 3)}{3 \cdot 3 \cdot 3 \cdot (2 \cdot 2 \cdot 2)} \\ = \frac{1}{3}$$

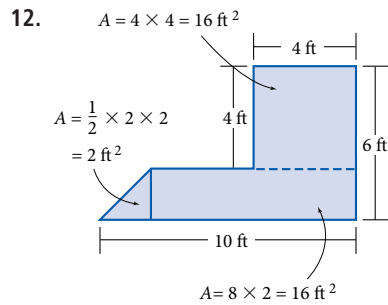
$$9. \text{ a. } \frac{2}{3} \cdot \frac{1}{2} = \frac{2 \cdot 1}{3 \cdot 2} \\ = \frac{1}{3}$$

$$\text{ b. } \frac{3}{5}(15) = \frac{3}{5} \left(\frac{15}{1} \right) \\ = \frac{3 \cdot 3 \cdot 5}{5} \\ = \frac{9}{1} \\ = 9$$

$$10. \text{ a. } \frac{2}{3}(12) = \frac{2}{3} \left(\frac{12}{1} \right) \\ = \frac{2 \cdot 2 \cdot 2 \cdot 3}{3 \cdot 1} \\ = \frac{8}{1} \\ = 8$$

$$\text{ b. } \frac{2}{3}(120) = \frac{2}{3} \left(\frac{120}{1} \right) \\ = \frac{2 \cdot 2 \cdot 2 \cdot 2 \cdot 3 \cdot 5}{3} \\ = \frac{80}{1} \\ = 80$$

$$11. A = \frac{1}{2}(7)(10) \\ = 35 \text{ in}^2$$



$$\text{Total area} = 2 + 16 + 16 = 34 \text{ ft}^2$$

Section 2.4

$$1. \text{ a. } \frac{1}{3} \div \frac{1}{6} = \frac{1}{3} \cdot \frac{6}{1} \\ = \frac{6}{3} \\ = 2$$

$$\text{ b. } \frac{1}{30} \div \frac{1}{60} = \frac{1}{30} \cdot \frac{60}{1} \\ = \frac{1 \cdot 2 \cdot 2 \cdot 3 \cdot 5}{2 \cdot 3 \cdot 5 \cdot 1} \\ = \frac{2}{1} \\ = 2$$

$$2. \frac{5}{9} \div \frac{10}{3} = \frac{5}{9} \cdot \frac{3}{10} \\ = \frac{5 \cdot 3}{3 \cdot 3 \cdot 2 \cdot 5} \\ = \frac{1}{6}$$

$$3. \text{ a. } \frac{3}{4} \div 3 = \frac{3}{4} \cdot \frac{1}{3} \\ = \frac{1}{4}$$

$$\text{ b. } \frac{3}{5} \div 3 = \frac{3}{5} \cdot \frac{1}{3} \\ = \frac{1}{5}$$

$$\text{ c. } \frac{3}{7} \div 3 = \frac{3}{7} \cdot \frac{1}{3} \\ = \frac{1}{7}$$

$$4. 4 \div \left(\frac{1}{5} \right) = 4(5) \\ = 20$$

$$5. \text{ a. } \frac{5}{32} \div \frac{10}{42} = \frac{5}{32} \cdot \frac{42}{10} \\ = \frac{5 \cdot (2 \cdot 3 \cdot 7)}{2 \cdot 2 \cdot 2 \cdot 2 \cdot 2 \cdot 2 \cdot 5} \\ = \frac{21}{32}$$

$$\text{ b. } \frac{15}{32} \div \frac{30}{42} = \frac{15}{32} \cdot \frac{42}{30} \\ = \frac{(3 \cdot 5) \cdot (2 \cdot 3 \cdot 7)}{(2 \cdot 2 \cdot 2 \cdot 2 \cdot 2) \cdot (2 \cdot 3 \cdot 5)} \\ = \frac{21}{32}$$

$$6. \frac{12}{25} \div 6 = \frac{12}{25} \cdot \frac{1}{6} \\ = \frac{2 \cdot 2 \cdot 3 \cdot 1}{5 \cdot 5 \cdot 2 \cdot 3} \\ = \frac{2}{25}$$

$$\text{ b. } \frac{24}{25} \div 6 = \frac{24}{25} \cdot \frac{1}{6} \\ = \frac{2 \cdot 2 \cdot 2 \cdot 3 \cdot 1}{(5 \cdot 5) \cdot (2 \cdot 3)} \\ = \frac{4}{25}$$

$$7. \text{ a. } 12 \div \left(\frac{4}{3} \right) = 12 \left(\frac{3}{4} \right) \\ = 9$$

$$\text{ b. } 12 \div \frac{4}{5} = 12 \left(\frac{5}{4} \right) \\ = 15$$

$$\text{ c. } 12 \div \frac{4}{7} = 12 \left(\frac{7}{4} \right) \\ = 21$$

$$8. \frac{5}{4} \div \frac{1}{8} + 8 = \frac{5}{4} \cdot \frac{8}{1} + 8 \\ = 10 + 8 \\ = 18$$

$$9. 18 \div \left(\frac{3}{5} \right)^2 + 48 \div \left(\frac{2}{5} \right)^2 = 18 \div \frac{9}{25} + 48 \div \frac{4}{25} \\ = 18 \cdot \frac{25}{9} + 48 \cdot \frac{25}{4} \\ = 50 + 300 \\ = 350$$

$$10. 12 \div \frac{3}{4} = 12 \cdot \frac{4}{3} \\ = 4 \cdot 4 \\ = 16 \text{ blankets}$$

Section 2.5

$$1. \frac{3}{10} + \frac{1}{10} = \frac{3+1}{10} \\ = \frac{4}{10} \\ = \frac{2}{5}$$

$$2. \frac{a+5}{12} + \frac{3}{12} = \frac{a+5+3}{12} \\ = \frac{a+8}{12}$$

$$3. \frac{8}{7} - \frac{5}{7} = \frac{8-5}{7} \\ = \frac{3}{7}$$

$$4. \frac{5}{9} + \frac{8}{9} + \frac{5}{9} = \frac{5+8+5}{9} \\ = \frac{18}{9} \\ = 2$$

$$5. \text{ a. } \left. \begin{array}{l} 18 = 2 \cdot 3 \cdot 3 \\ 14 = 2 \cdot 7 \end{array} \right\} \text{ LCD} = 2 \cdot 3 \cdot 3 \cdot 7 \\ = 126$$

$$\text{ b. } \left. \begin{array}{l} 36 = 2 \cdot 2 \cdot 3 \cdot 3 \\ 28 = 2 \cdot 2 \cdot 7 \end{array} \right\} \text{ LCD} = 2 \cdot 2 \cdot 3 \cdot 3 \cdot 7 \\ = 252$$

$$8. \text{ a. } \frac{2}{9} + \frac{4}{15} = \frac{2 \cdot 5}{9 \cdot 5} + \frac{4 \cdot 3}{15 \cdot 3} \\ = \frac{10}{45} + \frac{12}{45} \\ = \frac{22}{45}$$

$$\text{ b. } \frac{2}{27} + \frac{4}{45} = \frac{2 \cdot 5}{27 \cdot 5} + \frac{4 \cdot 3}{45 \cdot 3} \\ = \frac{10}{135} + \frac{12}{135} \\ = \frac{22}{135}$$

$$9. \text{ LCD} = 100; \quad \frac{8}{25} - \frac{3}{20} = \frac{8 \cdot 4}{25 \cdot 4} - \frac{3 \cdot 5}{20 \cdot 5} \\ = \frac{32}{100} - \frac{15}{100} \\ = \frac{17}{100}$$

$$10. \text{ LCD} = 20; \quad \frac{3}{4} - \frac{1}{5} = \frac{3 \cdot 5}{4 \cdot 5} - \frac{1 \cdot 4}{5 \cdot 4} \\ = \frac{15}{20} - \frac{4}{20} \\ = \frac{11}{20}$$

$$11. \text{ a. } \text{LCD} = 36; \quad \frac{1}{9} + \frac{1}{4} + \frac{1}{6} = \frac{1 \cdot 4}{9 \cdot 4} + \frac{1 \cdot 9}{4 \cdot 9} + \frac{1 \cdot 6}{6 \cdot 6} \\ = \frac{4}{36} + \frac{9}{36} + \frac{6}{36} \\ = \frac{19}{36}$$

$$\text{ b. } \frac{1}{90} + \frac{1}{40} + \frac{1}{60} = \frac{1 \cdot 4}{90 \cdot 4} + \frac{1 \cdot 9}{40 \cdot 9} + \frac{1 \cdot 6}{60 \cdot 6} \\ = \frac{4}{360} + \frac{9}{360} + \frac{6}{360} \\ = \frac{19}{360}$$

$$12. \quad 2 - \frac{3}{4} = \frac{2}{1} - \frac{3}{4} \\ = \frac{2 \cdot 4}{1 \cdot 4} - \frac{3}{4} \\ = \frac{8}{4} - \frac{3}{4} \\ = \frac{5}{4}$$

Section 2.6

$$1. \quad 5\frac{2}{3} = 5 + \frac{2}{3} \\ = \frac{5}{1} + \frac{2}{3} \\ = \frac{5 \cdot 3}{1 \cdot 3} + \frac{2}{3} \\ = \frac{15}{3} + \frac{2}{3} \\ = \frac{17}{3}$$

$$2. \quad 3\frac{1}{6} = 3 + \frac{1}{6} \\ = \frac{3}{1} + \frac{1}{6} \\ = \frac{3 \cdot 6}{1 \cdot 6} + \frac{1}{6} \\ = \frac{18}{6} + \frac{1}{6} \\ = \frac{19}{6}$$

$$3. \quad 5\frac{2}{3} = \frac{(3 \cdot 5) + 2}{3} \\ = \frac{17}{3}$$

$$4. \quad 6\frac{4}{9} = \frac{(9 \cdot 6) + 4}{9} \\ = \frac{58}{9}$$

$$5. \quad \frac{3}{3 \overline{)11}} \text{ so } \frac{11}{3} = 3\frac{2}{3}$$

$$6. \quad \begin{array}{r} 5 \overline{)14} \\ \underline{10} \\ 4 \end{array} \text{ so } \frac{14}{5} = 2\frac{4}{5}$$

$$7. \quad \begin{array}{r} 7 \\ 26 \overline{)207} \\ \underline{182} \\ 25 \end{array} \text{ so } \frac{207}{26} = 7\frac{25}{26}$$

Section 2.7

$$1. \quad 2\frac{3}{4} \cdot 4\frac{1}{3} = \frac{11}{4} \cdot \frac{13}{3} \\ = \frac{143}{12} \\ = 11\frac{11}{12}$$

$$2. \quad 2 \cdot 3\frac{5}{8} = \frac{2}{1} \cdot \frac{29}{8} \\ = \frac{58}{8} \\ = 7\frac{2}{8} \\ = 7\frac{1}{4}$$

$$3. \quad 1\frac{3}{5} \div 3\frac{2}{5} = \frac{8}{5} \div \frac{17}{5} \\ = \frac{8}{5} \cdot \frac{5}{17} \\ = \frac{8}{17}$$

$$4. \quad 4\frac{5}{8} \div 2 = \frac{37}{8} \div \frac{2}{1} \\ = \frac{37}{8} \cdot \frac{1}{2} \\ = \frac{37}{16} \\ = 2\frac{5}{16}$$

Section 2.8

$$1. \quad 3\frac{2}{3} + 2\frac{1}{4} = 3 + \frac{2}{3} + 2 + \frac{1}{4} \\ = (3 + 2) + \left(\frac{2}{3} + \frac{1}{4}\right) \\ = 5 + \left(\frac{2 \cdot 4}{3 \cdot 4} + \frac{1 \cdot 3}{4 \cdot 3}\right) \\ = 5 + \left(\frac{8}{12} + \frac{3}{12}\right) \\ = 5 + \frac{11}{12} = 5\frac{11}{12}$$

$$2. \quad 5\frac{3}{4} = 5\frac{3 \cdot 5}{4 \cdot 5} = 5\frac{15}{20} \\ + 6\frac{4}{5} = 6\frac{4 \cdot 4}{5 \cdot 4} = 6\frac{16}{20} \\ \underline{\hspace{1.5cm}} \quad \underline{\hspace{1.5cm}} \\ 11\frac{31}{20} = 11 + 1\frac{11}{20} = 12\frac{11}{20}$$

$$3. \quad 6\frac{3}{4} = 6\frac{3 \cdot 2}{4 \cdot 2} = 6\frac{6}{8} \\ + 2\frac{7}{8} = 2\frac{7}{8} = 2\frac{7}{8} \\ \underline{\hspace{1.5cm}} \quad \underline{\hspace{1.5cm}} \\ 8\frac{13}{8} = 9\frac{5}{8}$$

$$\begin{aligned}
 4. \quad 2\frac{1}{3} &= 2\frac{1 \cdot 4}{3 \cdot 4} = 2\frac{4}{12} \\
 1\frac{1}{4} &= 1\frac{1 \cdot 3}{4 \cdot 3} = 1\frac{3}{12} \\
 + 3\frac{11}{12} &= 3\frac{11}{12} \\
 \hline
 &= 6\frac{18}{12} = 7\frac{6}{12} = 7\frac{1}{2}
 \end{aligned}$$

$$\begin{aligned}
 5. \quad 4\frac{7}{8} \\
 - 1\frac{5}{8} \\
 \hline
 3\frac{2}{8} = 3\frac{1}{4}
 \end{aligned}$$

$$\begin{aligned}
 6. \quad 12\frac{7}{10} &= 12\frac{7}{10} = 12\frac{7}{10} \\
 - 7\frac{2}{5} &= -7\frac{2 \cdot 2}{5 \cdot 2} = -7\frac{4}{10} \\
 \hline
 &= 5\frac{3}{10}
 \end{aligned}$$

$$\begin{aligned}
 7. \quad 10 &= 9\frac{7}{7} \\
 - 5\frac{4}{7} &= -5\frac{4}{7} \\
 \hline
 &= 4\frac{3}{7}
 \end{aligned}$$

$$\begin{aligned}
 8. \quad 6\frac{1}{3} &= \left(5 + \frac{3}{3}\right) + \frac{1}{3} = 5\frac{4}{3} \\
 - 2\frac{2}{3} &= -2\frac{2}{3} \\
 \hline
 &= 3\frac{2}{3}
 \end{aligned}$$

$$\begin{aligned}
 9. \quad 6\frac{3}{4} &= 6\frac{3 \cdot 3}{4 \cdot 3} = 6\frac{9}{12} = 5\frac{21}{12} \\
 - 2\frac{5}{6} &= -2\frac{5 \cdot 2}{6 \cdot 2} = -2\frac{10}{12} = -2\frac{10}{12} \\
 \hline
 &= 3\frac{11}{12}
 \end{aligned}$$

Section 2.9

$$\begin{aligned}
 1. \quad 4 + \left(1\frac{1}{2}\right)\left(2\frac{3}{4}\right) &= 4 + \left(\frac{3}{2}\right)\left(\frac{11}{4}\right) \\
 &= 4 + \frac{33}{8} \\
 &= \frac{32}{8} + \frac{33}{8} \\
 &= \frac{65}{8} \\
 &= 8\frac{1}{8}
 \end{aligned}$$

$$\begin{aligned}
 2. \quad \left(\frac{2}{3} + \frac{1}{6}\right)\left(2\frac{5}{6} + 1\frac{1}{3}\right) &= \left(\frac{5}{6}\right)\left(4\frac{1}{6}\right) \\
 &= \frac{5}{6}\left(\frac{25}{6}\right) \\
 &= \frac{125}{36} \\
 &= 3\frac{17}{36}
 \end{aligned}$$

$$\begin{aligned}
 3. \quad \frac{3}{7} + \frac{1}{3}\left(1\frac{1}{2} + 4\frac{1}{2}\right)^2 &= \frac{3}{7} + \frac{1}{3}(6)^2 \\
 &= \frac{3}{7} + \frac{1}{3}(36) \\
 &= \frac{3}{7} + 12 \\
 &= 12\frac{3}{7}
 \end{aligned}$$

$$\begin{aligned}
 4. \quad \frac{\frac{2}{3}}{\frac{5}{9}} &= \frac{2}{3} \div \frac{5}{9} \\
 &= \frac{2}{3} \cdot \frac{9}{5} \\
 &= \frac{18}{15} \\
 &= \frac{6}{5} = 1\frac{1}{5}
 \end{aligned}$$

$$\begin{aligned}
 5. \quad \frac{\frac{1}{2} + \frac{3}{4}}{\frac{2}{3} - \frac{1}{4}} &= \frac{12\left(\frac{1}{2} + \frac{3}{4}\right)}{12\left(\frac{2}{3} - \frac{1}{4}\right)} \\
 &= \frac{12 \cdot \frac{1}{2} + 12 \cdot \frac{3}{4}}{12 \cdot \frac{2}{3} - 12 \cdot \frac{1}{4}} \\
 &= \frac{6 + 9}{8 - 3} \\
 &= \frac{15}{5} = 3
 \end{aligned}$$

$$\begin{aligned}
 6. \quad \frac{4 + \frac{2}{3}}{3 - \frac{1}{4}} &= \frac{12\left(4 + \frac{2}{3}\right)}{12\left(3 - \frac{1}{4}\right)} \\
 &= \frac{12 \cdot 4 + 12 \cdot \frac{2}{3}}{12 \cdot 3 - 12 \cdot \frac{1}{4}} \\
 &= \frac{48 + 8}{36 - 3} \\
 &= \frac{56}{33} = 1\frac{23}{33}
 \end{aligned}$$

$$\begin{aligned}
 7. \quad \frac{12\frac{1}{3}}{6\frac{2}{3}} &= 12\frac{1}{3} \div 6\frac{2}{3} \\
 &= \frac{37}{3} \div \frac{20}{3} \\
 &= \frac{37}{3} \cdot \frac{3}{20} \\
 &= \frac{37}{20} \\
 &= 1\frac{17}{20}
 \end{aligned}$$

Chapter 3

Section 3.1

1. $700 + 80 + 5 + \frac{4}{10} + \frac{6}{100} + \frac{2}{1,000}$ 2. a. Six hundredths b. Seven tenths c. Eight thousandths

3. a. Five and six hundredths b. Four and seven tenths c. Three and eight thousandths

4. a. Five and ninety-eight hundredths b. Five and ninety-eight thousandths 5. Three hundred five and four hundred six thousandths

Section 3.2

$$\begin{aligned}
 1. \quad \text{a.} \quad 38.45 &= 38\frac{45}{100} = 38\frac{450}{1,000} \\
 + 456.073 &= 456\frac{73}{1,000} = 456\frac{730}{1,000} \\
 \hline
 &= 494\frac{523}{1,000} = 494.523
 \end{aligned}$$

$$\begin{aligned}
 \text{b.} \quad 38.045 &= 38\frac{45}{1,000} = 38\frac{45}{1,000} \\
 + 456.73 &= 456\frac{73}{100} = 456\frac{730}{1,000} \\
 \hline
 &= 494\frac{775}{1,000} = 494.775
 \end{aligned}$$

$$\begin{array}{r} 2. \quad 78.674 \\ -23.431 \\ \hline 55.243 \end{array}$$

$$\begin{array}{r} 3. \quad 16.000 \\ \quad 0.033 \\ \quad 4.600 \\ + 0.080 \\ \hline 20.713 \end{array}$$

$$\begin{array}{r} 4. \quad \text{a. } 6.70 \\ \quad -2.05 \\ \hline 4.65 \end{array} \quad \begin{array}{r} \text{b. } 6.7000 \\ \quad -2.0563 \\ \hline 4.6437 \end{array}$$

$$\begin{array}{r} 5. \quad 7.000 \\ \quad +3.567 \\ \hline 10.567 \end{array} \quad \text{and} \quad \begin{array}{r} 10.567 \\ \quad -5.890 \\ \hline 4.677 \end{array}$$

$$\begin{array}{r} 6. \quad \$10.00 \\ \quad -9.56 \\ \hline \$.44 \end{array}$$

1 quarter + 2 dimes + 4 pennies = $0.25 + 0.20 + 0.04 = 0.49$, which is too much change. One of the dimes should be a nickel. Tell the clerk that you have been given too much change.

$$7. \quad \text{a. } P = 1.38 + 1.38 + 1.38 + 1.38 = 5.52 \text{ in.}$$

$$\text{b. } P = 6.6 + 4.7 + 4.7 = 16.0 \text{ cm}$$

Section 3.3

$$\begin{aligned} 1. \quad \text{a. } 0.4 \times 0.6 &= \frac{4}{10} \times \frac{6}{10} \\ &= \frac{24}{100} \\ &= 0.24 \end{aligned}$$

$$\begin{aligned} \text{b. } 0.04 \times 0.06 &= \frac{4}{100} \times \frac{6}{100} \\ &= \frac{24}{10,000} \\ &= 0.0024 \end{aligned}$$

$$\begin{aligned} 2. \quad \text{a. } 0.5 \times 0.007 &= \frac{5}{10} \times \frac{7}{1,000} \\ &= \frac{35}{10,000} \\ &= 0.0035 \end{aligned}$$

$$\begin{aligned} \text{b. } 0.05 \times 0.07 &= \frac{5}{100} \times \frac{7}{100} \\ &= \frac{35}{10,000} \\ &= 0.0035 \end{aligned}$$

$$\begin{aligned} 3. \quad \text{a. } 3.5 \times 0.04 &= 3 \frac{5}{10} \times \frac{4}{100} \\ &= \frac{35}{10} \times \frac{4}{100} \\ &= \frac{140}{1,000} \\ &= \frac{14}{100} \\ &= 0.14 \end{aligned}$$

$$\begin{aligned} \text{b. } 0.35 \times 0.4 &= \frac{35}{100} \times \frac{4}{10} \\ &= \frac{140}{1,000} \\ &= \frac{14}{100} \\ &= 0.14 \end{aligned}$$

$$4. \quad \text{a. } 3 + 2 = 5 \text{ digits to the right} \quad \text{b. } 2 + 4 = 6 \text{ digits to the right}$$

$$\begin{array}{r} 5. \quad \text{a. } \quad 4.03 \\ \quad \times 5.22 \\ \hline \quad 806 \\ \quad 8060 \\ \hline 20150 \\ \hline 21.0366 \end{array}$$

$$\begin{array}{r} \text{b. } \quad 40.3 \\ \quad \times 0.522 \\ \hline \quad 806 \\ \quad 8060 \\ \hline 20150 \\ \hline 21.0366 \end{array}$$

$$6. \quad \text{a. } 80 \times 6 = 480$$

$$\text{b. } 40 \times 180 = 7,200$$

$$\text{c. } 8^2 = 64$$

$$7. \quad \text{a. } 0.03(5.5 + 0.02) = 0.03(5.52) = 0.1656$$

$$\text{b. } 0.03(0.55 + 0.002) = 0.03(0.552) = 0.01656$$

$$\begin{aligned} 8. \quad \text{a. } 5.7 + 14(2.4)^2 &= 5.7 + 14(5.76) \\ &= 5.7 + 80.64 \\ &= 86.34 \end{aligned}$$

$$\begin{aligned} \text{b. } 0.57 + 1.4(2.4)^2 &= 0.57 + 1.4(5.76) \\ &= 0.57 + 8.064 \\ &= 8.634 \end{aligned}$$

$$9. \quad \text{a. } A = s^2 = 1.38^2 = 1.90 \text{ in}^2$$

$$\text{b. } A = lw = (39.6)(25.1) = 993.96 \text{ mm}^2$$

$$10. \quad 6.82(36) + 10.23(14) = 245.52 + 143.22 = \$388.74$$

$$11. \quad C = 3.14(3) = 9.42 \text{ cm}$$

$$12. \quad \text{a. } C = \pi d \approx (3.14)(0.92) \approx 2.89 \text{ in.}$$

$$\text{b. } C = 2\pi r \approx 2(3.14)(13.20) \approx 82.90 \text{ mm}$$

$$13. \quad \text{Radius} = \frac{1}{2}(20) = 10 \text{ ft}$$

$$\begin{aligned} A &= \pi r^2 = (3.14)(10)^2 \\ &= 314 \text{ ft}^2 \end{aligned}$$

$$14. \quad \text{Radius} = 2(0.125) = 0.250$$

$$\begin{aligned} V &= \pi r^2 h \\ &= (3.14)(0.250)^2(6) \\ &= 1.178 \text{ in}^3 \end{aligned}$$

Section 3.4

$$\begin{array}{r} 1. \quad 154.2 \\ 30 \overline{)4,626.0} \\ \underline{30} \\ 162 \\ \underline{150} \\ 126 \\ \underline{120} \\ 60 \\ \underline{60} \\ 0 \end{array}$$

$$\begin{array}{r} 2. \quad \text{a. } \quad 6.7 \\ 5 \overline{)33.5} \\ \underline{30} \\ 35 \\ \underline{35} \\ 0 \end{array}$$

$$\begin{array}{r} \text{b. } \quad 6.9 \\ 5 \overline{)34.5} \\ \underline{30} \\ 45 \\ \underline{45} \\ 0 \end{array}$$

$$\begin{array}{r} \text{c. } \quad 7.1 \\ 5 \overline{)35.5} \\ \underline{35} \\ 05 \\ \underline{5} \\ 0 \end{array}$$

$$\begin{array}{r} 3. \quad \text{a. } \quad 2.636 \\ 18 \overline{)47.448} \\ \underline{36} \\ 114 \\ \underline{108} \\ 64 \\ \underline{54} \\ 108 \\ \underline{108} \\ 0 \end{array}$$

$$\begin{array}{r} \text{b. } \quad 26.36 \\ 18 \overline{)474.48} \\ \underline{36} \\ 114 \\ \underline{108} \\ 64 \\ \underline{54} \\ 108 \\ \underline{108} \\ 0 \end{array}$$

4. a.
$$\begin{array}{r} 45.54 \\ 25 \overline{)1,138.50} \\ \underline{100} \\ 138 \\ \underline{125} \\ 135 \\ \underline{125} \\ 100 \\ \underline{100} \\ 0 \end{array}$$

b.
$$\begin{array}{r} 4.554 \\ 25 \overline{)113.850} \\ \underline{100} \\ 138 \\ \underline{125} \\ 135 \\ \underline{125} \\ 100 \\ \underline{100} \\ 0 \end{array}$$

5. a.
$$\begin{array}{r} 3.15 \\ 4.2 \overline{)13.230} \\ \underline{126} \\ 63 \\ \underline{42} \\ 210 \\ \underline{210} \\ 0 \end{array}$$

b.
$$\begin{array}{r} 31.5 \\ 0.42 \overline{)1323.0} \\ \underline{126} \\ 63 \\ \underline{42} \\ 210 \\ \underline{210} \\ 0 \end{array}$$

6.
$$\begin{array}{r} 1.422 \\ 0.32 \overline{)0.45530} \\ \underline{32} \\ 135 \\ \underline{128} \\ 73 \\ \underline{64} \\ 90 \\ \underline{64} \\ 26 \end{array}$$
 Answer to nearest hundredth is 1.42

7. a.
$$\begin{array}{r} 316.66 \\ 0.06 \overline{)1900.00} \\ \underline{18} \\ 10 \\ \underline{6} \\ 40 \\ \underline{36} \\ 40 \\ \underline{36} \\ 40 \\ \underline{36} \\ 4 \end{array}$$
 Answer to nearest tenth is 316.7

b.
$$\begin{array}{r} 31.66 \\ 0.06 \overline{)190.00} \\ \underline{18} \\ 10 \\ \underline{6} \\ 40 \\ \underline{36} \\ 40 \\ \underline{36} \\ 4 \end{array}$$
 Answer to nearest tenth is 31.7

8.
$$\begin{array}{r} 28.5 \text{ hours} \\ 6.54 \overline{)186.390} \\ \underline{1308} \\ 5559 \\ \underline{5232} \\ 3270 \\ \underline{3270} \\ 0 \end{array}$$

9.
$$\frac{4.39 - 0.43}{0.33} = \frac{3.96}{0.33}$$

= 12 additional minutes

The call was 13 minutes long.

10.
$$\text{GPA} = \frac{48}{15} = 3.20$$

Class	units	grade	value	grade points
Algebra	5	B	3	$5 \times 3 = 15$
Chemistry	4	B	3	$4 \times 3 = 12$
English	3	A	4	$3 \times 4 = 12$
History	3	B	3	$3 \times 3 = 9$
Total Units: 15			Total Grade Points: 48	

Section 3.5

1. a.
$$\begin{array}{r} .4 \\ 5 \overline{)2.0} \\ \underline{20} \\ 0 \end{array}$$
 so $\frac{2}{5} = 0.4$

b.
$$\begin{array}{r} 0.6 \\ 5 \overline{)3.0} \\ \underline{30} \\ 0 \end{array}$$
 so $\frac{3}{5} = 0.6$

c.
$$\begin{array}{r} .8 \\ 5 \overline{)4.0} \\ \underline{40} \\ 0 \end{array}$$
 so $\frac{4}{5} = 0.8$

2. a.
$$\begin{array}{r} 0.9166 \\ 12 \overline{)11.0000} \\ \underline{108} \\ 20 \\ \underline{12} \\ 80 \\ \underline{72} \\ 80 \\ \underline{72} \\ 8 \end{array}$$
 so $\frac{11}{12} = 0.917$ to the nearest thousandth

b.
$$\begin{array}{r} .9230 \\ 13 \overline{)12.0000} \\ \underline{117} \\ 30 \\ \underline{26} \\ 40 \\ \underline{39} \\ 10 \\ \underline{0} \\ 10 \end{array}$$
 so $\frac{12}{13} = 0.923$ to the nearest thousandth

$$3. \frac{0.4545}{11 \overline{)5.0000}} \text{ so } \frac{5}{11} = 0.\overline{45}$$

$$\begin{array}{r} 44 \downarrow \\ \underline{60} \\ 55 \downarrow \\ \underline{50} \\ 44 \downarrow \\ \underline{60} \\ 55 \\ \hline 5 \end{array}$$

$$4. \text{ a. } 0.48 = \frac{48}{100} = \frac{12}{25}$$

$$6. 12.8 = 12\frac{8}{10} = 12\frac{4}{5}$$

$$\text{b. } 0.048 = \frac{48}{1,000} = \frac{6}{125}$$

$$\begin{aligned} 7. \frac{14}{25}(2.43 + 0.27) \\ &= 0.56(2.43 + 0.27) \\ &= 0.56(2.70) \\ &= 1.512 \end{aligned}$$

$$5. 0.025 = \frac{25}{1,000} = \frac{1}{40}$$

$$\begin{aligned} 8. \frac{1}{4} + 0.25\left(\frac{3}{5}\right) &= \frac{1}{4} + \frac{1}{4}\left(\frac{3}{5}\right) \\ &= \frac{1}{4} + \frac{3}{20} \\ &= \frac{5}{20} + \frac{3}{20} \\ &= \frac{8}{20} \\ &= \frac{2}{5} \text{ or } 0.4 \end{aligned}$$

$$9. \left(\frac{1}{3}\right)^3(5.4) + \left(\frac{1}{5}\right)^2(2.5) = \frac{1}{27}(5.4) + \frac{1}{25}(2.5) = 0.2 + 0.1 = 0.3$$

$$10. 35.50 - \frac{1}{4}(35.50) = \frac{3}{4}(35.50) = 26.625 = \$26.63 \text{ to the nearest cent}$$

$$11. A = \frac{1}{2}bh = \frac{1}{2}(6.6)(3.3) = 10.89 \text{ cm}^2$$

$$\begin{aligned} 12. V &= \pi r^2 h + \frac{1}{2} \cdot \frac{4}{3} \pi r^3 = (3.14)(10)^2(10) + \frac{1}{2} \cdot \frac{4}{3}(3.14)(10)^3 \\ &= 3,140 + \frac{2}{3}(3,140) \\ &= 3,140 + 2,093.3 \\ &= 5,233.3 \text{ in}^3 \end{aligned}$$

Chapter 4

Section 4.1

$$1. \text{ a. } \frac{32}{48} = \frac{2}{3} \quad \text{b. } \frac{3.2}{4.8} = \frac{2}{3} \quad \text{c. } \frac{0.32}{0.48} = \frac{2}{3}$$

$$2. \text{ a. } \frac{\frac{3}{5}}{\frac{9}{10}} = \frac{3}{5} \cdot \frac{10}{9} = \frac{2}{3} \quad \text{b. } \frac{0.6}{0.9} = \frac{2}{3}$$

$$3. \text{ a. } \frac{0.06}{0.12} = \frac{0.06 \times 100}{0.12 \times 100} = \frac{6}{12} = \frac{1}{2} \quad \text{b. } \frac{600}{1,200} = \frac{1}{2}$$

$$4. \frac{12}{16} = \frac{3}{4}$$

$$5. \text{ Alcohol to water: } \frac{4}{12} = \frac{1}{3}; \text{ water to alcohol: } \frac{12}{4} = \frac{3}{1}; \text{ water to total solution: } \frac{12}{16} = \frac{3}{4}$$

Section 4.2

$$1. \frac{107 \text{ miles}}{2 \text{ hours}} = 53.5 \text{ miles/hour}$$

$$2. \frac{192 \text{ miles}}{6 \text{ gallons}} = 32 \text{ miles/gallon}$$

$$3. \frac{48\text{¢}}{5.5 \text{ ounces}} = 8.7\text{¢/ounce}; \quad \frac{75\text{¢}}{11.5 \text{ ounces}} = 6.5\text{¢/ounce}; \quad \frac{219\text{¢}}{46 \text{ ounces}} = 4.8\text{¢/ounce}$$

(Answers are rounded to the nearest tenth.)

Section 4.3

$$1. \frac{8 \cdot n}{8} = n$$

$$2. \frac{3 \cdot y}{3} = y$$

$$3. \frac{8 \cdot n}{8} = \frac{40}{8} \\ n = 5$$

$$4. \frac{35}{7} = \frac{7 \cdot a}{7} \\ 5 = a$$

Section 4.4

1. First term = 2, second term = 3, third term = 6, fourth term = 9, means: 3 and 6; extremes: 2 and 9

2. a. $5 \cdot 18 = 90$
 $6 \cdot 15 = 90$
- b. $13 \cdot 3 = 39$
 $39 \cdot 1 = 39$
- c. $\frac{2}{3} \cdot 5 = \frac{10}{3}$
 $\frac{5}{3} \cdot 2 = \frac{10}{3}$
- d. $0.12(3) = 0.36$
 $0.18(2) = 0.36$
3. a. $3 \cdot x = 4 \cdot 9$
 $3 \cdot x = 36$
 $\frac{3 \cdot x}{3} = \frac{36}{3}$
 $x = 12$
- b. $5 \cdot x = 8 \cdot 3$
 $5 \cdot x = 24$
 $\frac{5 \cdot x}{5} = \frac{24}{5}$
 $x = 4.8$
4. $2 \cdot 19 = 8 \cdot y$
 $38 = 8 \cdot y$
 $\frac{38}{8} = \frac{8 \cdot y}{8}$
 $4.75 = y$
5. a. $15 \cdot n = 6(0.3)$
 $15 \cdot n = 1.8$
 $\frac{15 \cdot n}{15} = \frac{1.8}{15}$
 $n = 0.12$
- b. $0.35(100) = n \cdot 7$
 $35 = n \cdot 7$
 $\frac{35}{7} = \frac{n \cdot 7}{7}$
 $5 = n$
6. a. $\frac{3}{4} \cdot 8 = 7 \cdot x$
 $6 = 7 \cdot x$
 $\frac{6}{7} = \frac{7 \cdot x}{7}$
 $\frac{6}{7} = x$
- b. $6 \cdot x = \frac{3}{5} \cdot 15$
 $6 \cdot x = 9$
 $\frac{6 \cdot x}{6} = \frac{9}{6}$
 $x = \frac{3}{2}$
7. $\frac{b}{18} = \frac{0.5}{1}$
 $b \cdot 1 = 18(0.5)$
 $b = 9$

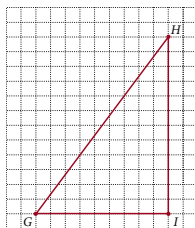
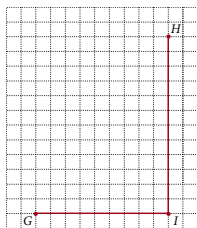
Section 4.5

1. a. $\frac{x}{10} = \frac{288}{6}$
 $x \cdot 6 = 10 \cdot 288$
 $x \cdot 6 = 2,880$
 $\frac{x \cdot 6}{6} = \frac{2,880}{6}$
 $x = 480$ miles
- b. $\frac{x}{11} = \frac{288}{6}$
 $x \cdot 6 = 11 \cdot 288$
 $x \cdot 6 = 3,168$
 $\frac{x \cdot 6}{6} = \frac{3,168}{6}$
 $x = 528$ miles
2. a. $\frac{x}{54} = \frac{10}{18}$
 $x \cdot 18 = 54 \cdot 10$
 $x \cdot 18 = 540$
 $\frac{x \cdot 18}{18} = \frac{540}{18}$
 $x = 30$ hits
- b. $\frac{x}{27} = \frac{10}{18}$
 $x \cdot 18 = 27 \cdot 10$
 $x \cdot 18 = 270$
 $\frac{x \cdot 18}{18} = \frac{270}{18}$
 $x = 15$ hits

3. $\frac{x}{35} = \frac{8}{20}$
 $x \cdot 20 = 35 \cdot 8$
 $x \cdot 20 = 280$
 $\frac{x \cdot 20}{20} = \frac{280}{20}$
 $x = 14$ milliliters of alcohol
4. $\frac{x}{4.75} = \frac{105}{1}$
 $x \cdot 1 = 4.75(105)$
 $x = 498.75$ miles

Section 4.6

1. $\frac{x}{14} = \frac{25}{10}$
 $10x = 350$
 $x = 35$
2. $\frac{h}{120} = \frac{360}{160}$
 $\frac{h}{120} = \frac{9}{4}$ reduce to lowest terms
 $4h = 1080$
 $h = 270$ pixels
3. We see AC has a length of 3 units and BC has a length of 4 units. Since AC is proportional to GI , which has a length of 6 units, we set up a proportion to find the length of a new side, HI .
- $$\frac{HI}{BC} = \frac{GI}{AC}$$
- $$\frac{HI}{4} = \frac{6}{3}$$
- $$\frac{HI}{4} = 2$$
- $$HI = 8$$
- Now we can draw HI with length 8 units, and complete the triangle by drawing line GH



4. $\frac{x}{18} = \frac{42}{12}$
 $12x = 756$
 $x = 63$ ft
5. $\frac{b}{15} = \frac{32}{24}$
 $24b = 480$
 $b = 20$ in.

Chapter 5

Section 5.1

21. $\frac{82}{100} = \frac{41}{50}$

22. $\frac{6.5}{100} = \frac{65}{1000} = \frac{13}{200}$

23. $\frac{42\frac{1}{2}}{100} = \frac{85}{200}$
 $= \frac{85}{2} \cdot \frac{1}{100}$
 $= \frac{85}{200}$
 $= \frac{17}{40}$

24. a. $\frac{9}{10} = 0.9 = 90\%$

b. $\frac{9}{20} = 0.45 = 45\%$

25. a. $\frac{5}{8} = 0.625 = 62.5\%$ b. $\frac{9}{8} = 1.125 = 112.5\%$ 26. a. $\frac{7}{12} = 0.58\bar{3} = 58\frac{1}{3}\% \text{ or } \approx 58.3\%$ b. $\frac{13}{12} = 1.08\bar{3} = 108\frac{1}{3}\% \text{ or } \approx 108.3\%$

27. a. $3\frac{3}{4} = 3.75 = 375\%$ b. $3\frac{7}{8} = 3.875 = 387.5\%$

Section 5.2

1. a. $n = 0.25(74)$
 $= 18.5$

b. $n = 0.50(74)$
 $= 37$

2. a. $n \cdot 84 = 21$
 $\frac{n \cdot 84}{84} = \frac{21}{84}$
 $n = 0.25$
 $n = 25\%$

b. $n \cdot 84 = 42$
 $\frac{n \cdot 84}{84} = \frac{42}{84}$
 $n = 0.50$
 $n = 50\%$

3. a. $35 = 0.40 \cdot n$
 $\frac{35}{0.40} = \frac{0.40 \cdot n}{0.40}$
 $87.5 = n$

b. $70 = 0.40 \cdot n$
 $\frac{70}{0.40} = \frac{0.40 \cdot n}{0.40}$
 $175 = n$

4. $n = 0.635(45)$
 $n \approx 28.6$

5. $n \cdot 85 = 11.9$
 $\frac{n \cdot 85}{85} = \frac{11.9}{85}$
 $n = 0.14$
 $n = 14\%$

6. $62 = 0.39 \cdot n$
 $\frac{62}{0.39} = \frac{0.39 \cdot n}{0.39}$
 $159.0 \approx n$

7. 25 is what percent of 160?
 $25 = n \cdot 160$
 $\frac{25}{160} = n$
 $n = 0.156 = 15.6\% \text{ to the}$
nearest tenth of a percent

8. a. $\frac{25}{100} = \frac{n}{74}$
 $25 \cdot 74 = 100 \cdot n$
 $1850 = 100 \cdot n$
 $18.5 = n$

b. $\frac{50}{100} = \frac{n}{74}$
 $50 \cdot 74 = 100 \cdot n$
 $3,700 = 100 \cdot n$
 $37 = n$

9. a. $\frac{n}{100} = \frac{21}{84}$
 $84 \cdot n = 21 \cdot 100$
 $84 \cdot n = 2,100$
 $n = 25$
25%

b. $\frac{n}{100} = \frac{42}{84}$
 $84 \cdot n = 42 \cdot 100$
 $84 \cdot n = 4,200$
 $n = 50$
50%

10. a. $\frac{40}{100} = \frac{35}{n}$
 $40 \cdot n = 35 \cdot 100$
 $40 \cdot n = 3,500$
 $n = 87.5$

b. $\frac{40}{100} = \frac{70}{n}$
 $40 \cdot n = 70 \cdot 100$
 $40 \cdot n = 7,000$
 $n = 175$

Section 5.3

1. 114 is what percent of 150?
 $114 = n \cdot 150$
 $\frac{114}{150} = \frac{n \cdot 150}{150}$
 $n = 0.76$
 $n = 76\%$

2. What is 75% of 40?
 $n = 0.75(40)$
 $n = 30 \text{ milliliters HCl}$

3. 3,360 is 42% of what number?
 $3,360 = 0.42 \cdot n$
 $\frac{3,360}{0.42} = \frac{0.42 \cdot n}{0.42}$
 $n = 8,000 \text{ students}$

4. What is 35% of 300?
 $n = 0.35(300)$
 $n = 105 \text{ students}$

Section 5.4

1. What is 6% of \$625?
 $n = 0.06(625)$
 $n = \$37.50$

2. \$4.35 is 3% of what number?
 $4.35 = 0.03 \cdot n$
 $n = \$145 \text{ Purchase price}$
Total price = \$145 + \$4.35
 $= \$149.35$

3. \$11.82 is what percent of \$197?
 $11.82 = n \cdot 197$
 $n = 0.06 = 6\%$

4. What is 3% of 115,000?
 $n = 0.03(115,000)$
 $n = \$3,450$

5. 10% of what number is \$115?
 $0.10 \cdot n = 115$
 $n = \$1,150$

6. \$105 is what percent of \$750?
 $105 = n \cdot 750$
 $n = 0.14 = 14\%$

Section 5.5

1. $0.07(18,000) = 1,260$
 $\begin{array}{r} \$18,000 \text{ Old salary} \\ + \quad 1,260 \text{ Raise} \\ \hline \$19,260 \text{ New salary} \end{array}$
2. $0.89(271,000) = 241,190$
 $\begin{array}{r} 271,000 \text{ Drunk drivers in 1986} \\ +241,190 \text{ Increase} \\ \hline 512,190 = 512,000 \text{ to the nearest thousand} \end{array}$
3. $\$35 - \$28 = \$7$ Decrease
 $\$7$ is what percent of $\$35$?
 $7 = n \cdot 35$
 $n = 0.20 = 20\%$ Decrease
4. What is 15% of $\$550$?
 $n = 0.15(550)$
 $n = \$82.50$ Discount
 $\begin{array}{r} \$550.00 \text{ Original price} \\ - \quad 82.50 \text{ Less discount} \\ \hline \$467.50 \text{ Sale price} \end{array}$
5. What is 15% of $\$45$?
 $n = 0.15(45)$
 $n = \$6.75$ Discount
 $\begin{array}{r} \$45.00 \text{ Original price} \\ - \quad 6.75 \text{ Less discount} \\ \hline \$38.25 \text{ Sale price} \end{array}$
- What is 5% of $\$38.25$?
 $n = 0.05(38.25)$
 $n = \$1.91$ to the nearest cent
 $\begin{array}{r} \$38.25 \text{ Sale price} \\ + \quad 1.91 \text{ Sales tax} \\ \hline \$40.16 \text{ Total price} \end{array}$

Section 5.6

1. Interest = $0.08(\$3,000)$
 $= \$240$
 $\begin{array}{r} \$3,000 \text{ Principal} \\ + \quad 240 \text{ Interest} \\ \hline \$3,240 \text{ Amount after 1 year} \end{array}$
2. Interest = $0.12(\$7,500)$
 $= \$900$
 $\begin{array}{r} \$7,500 \text{ Principal} \\ + \quad 900 \text{ Interest} \\ \hline \$8,400 \text{ Total amount to pay back} \end{array}$
3. $I = P \cdot R \cdot T$
 $I = 700 \times 0.04 \times \frac{90}{360}$
 $I = 700 \times 0.04 \times \frac{1}{4}$
 $I = \$7$ Interest
4. $I = P \cdot R \cdot T$
 $I = 1,200 \times 0.095 \times \frac{120}{360}$
 $I = 1,200 \times 0.095 \times \frac{1}{3}$
 $I = \$38$ Interest
 $\begin{array}{r} \$1,200 \text{ Principal} \\ + \quad 38 \text{ Interest} \\ \hline \$1,238 \text{ Total amount} \\ \text{withdrawn} \end{array}$
5. Interest after 1 year is
 $0.06(\$5,000) = \300
 Total in account after 1 year is
 $\begin{array}{r} \$5,000 \text{ Principal} \\ + \quad 300 \text{ Interest} \\ \hline \$5,300 \end{array}$
- Interest paid the second year is
 $0.06(\$5,300) = \318
 Total in account after 2 years is
 $\begin{array}{r} \$5,300 \text{ Principal} \\ + \quad 318 \text{ Interest} \\ \hline \$5,618 \end{array}$
6. Interest at the end of first quarter
 $I = \$20,000 \times 0.08 \times \frac{1}{4} = \400
 Total in account at end of first quarter
 $\$20,000 + \$400 = \$20,400$
 Interest for the second quarter
 $I = \$20,400 \times 0.08 \times \frac{1}{4} = \408
 Total in account at end of second quarter
 $\$20,400 + \$408 = \$20,808$
- Interest for the third quarter
 $I = \$20,808 \times 0.08 \times \frac{1}{4} = \416.16
 Total in account at the end of third quarter
 $\$20,808 + \$416.16 = \$21,224.16$
 Interest for the fourth quarter
 $I = \$21,224.16 \times 0.08 \times \frac{1}{4} = \424.48 to the nearest cent
 Total in account at end of 1 year
 $\begin{array}{r} \$21,224.16 \\ + \quad 424.48 \\ \hline \$21,648.64 \end{array}$

Chapter 6

Section 6.1

1. $\begin{array}{r} 187 \\ 273 \\ 150 \\ 173 \\ \hline 227 \\ 1010 \end{array}$ $\frac{1010}{5} = 202$ miles
2. First we place them in order from smallest to largest
 150 173 187 227 273
 Because there are 5 numbers, the one in the middle,
 187, is the median.

3. We first put the numbers in order from smallest to largest. Because there is an even number of numbers, we find the mean of the middle two:

$$\frac{146,320 + 242,635}{2} = \frac{388,955}{2} = 194,477.5$$

The median is \$194,477.50.

5. The highest score is 97, and the lowest score is 45. The range is $97 - 45 = 52$.

4. The most frequently occurring score is 74. It occurs three times. The mode is 74.

Section 6.2

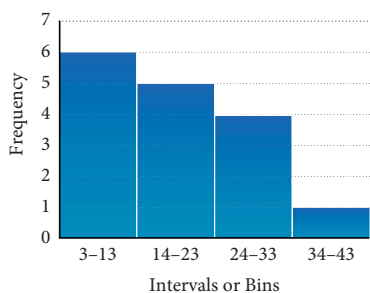
1. 14, 25, 7, 28, 36, 25, 17, 46, 9, 12, 16, 21, 26, 32, 38

Stem	Leaf
0	7, 9
1	4, 7, 2, 6
2	5, 8, 5, 1, 6
3	6, 2, 8
4	6

2. 11, 5, 8, 0, 12, 7, 9, 10, 22, 15, 13, 16, 5, 20, 8, 12, 16, 7, 25, 18

Interval	Tally	Frequency	Relative Freq.
0-5		3	0.15
6-11		7	0.35
12-17		6	0.30
18-23		3	0.15
24-29		1	0.05

3. 9, 16, 3, 27, 36, 21, 11, 10, 17, 8, 29, 30, 20, 28, 12, 23



4. 3, 8, 9, 10, 11, 12, 16, 17, 20, 21, 23, 27, 28, 29, 30, 36

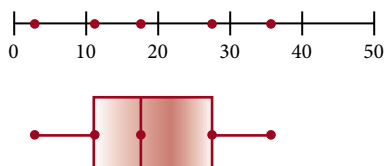
$$\text{Median} = \frac{17 + 20}{2} = 18.5 \quad Q2 = 18.5$$

$$Q1 = \frac{11 + 10}{2} = 10.5$$

$$Q3 = \frac{27 + 28}{2} = 27.5$$

5. 3, 8, 9, 10, 11, 12, 16, 17, 20, 21, 23, 27, 28, 29, 30, 36

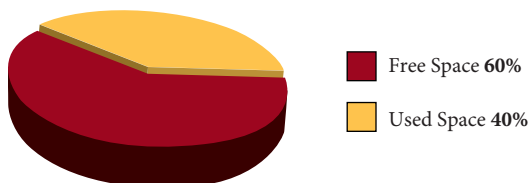
Five number summary = 3, 10.5, 18.5, 27.5, 36



Section 6.3

1. a. $9 + 11 + 16 + 10 = 46$ b. $\frac{11}{46}$ c. $\frac{9}{16}$

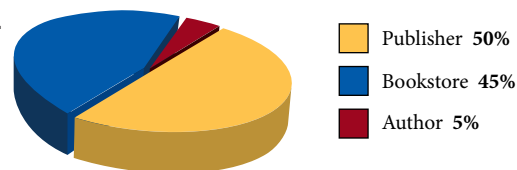
3.



2. a. $0.76(600) = 456$ people

b. $0.24(600) = 144$ people

4.



Section 6.4

3. $S = \{1, 2, 3, 4, 5, 6, 7, 8, 9, 10, 11, 12\}$
 a. $>7 = \{8, 9, 10, 11, 12\}$
 $P(>7) = \frac{5}{12}$
 b. $\text{odd} = \{1, 3, 5, 7, 9, 11\}$
 $P(\text{odd}) = \frac{6}{12} = \frac{1}{2}$
 c. multiple of 3 $A = \{3, 6, 9, 12\}$
 $P(A) = \frac{4}{12} = \frac{1}{3}$
4. One more blue added
 blue 4
 $\frac{\text{red } 2}{\text{total } 6}$
 a. $P(\text{blue}) = \frac{4}{6} = \frac{2}{3}$
 b. $P(\text{red}) = \frac{2}{6} = \frac{1}{3}$
 b. $P(\text{blue or red}) = \frac{6}{6} = 1$
5. a. $P(\text{sum} \geq 7) = \frac{15}{36} = \frac{5}{12}$
 b. $P(\text{sum} = 9) = \frac{4}{36} = \frac{1}{9}$
 c. $P(\text{both even}) = \frac{9}{36} = \frac{1}{4}$
6. a. $P(\text{black}) = \frac{26}{52} = \frac{1}{2}$
 b. $P(\text{even}) = \frac{20}{52} = \frac{5}{13}$
 c. $P(\text{king or ace}) = \frac{8}{52} = \frac{2}{13}$
7. a. $P(\text{Bing}) = 0.07 = \frac{7}{100}$
 b. $P(\text{Bing} + \text{Yahoo}) = 0.07 + 0.28$
 $= 0.35 = \frac{35}{100}$
 c. $P(\text{not Bing}) = 1.00 - 0.07 = 0.93 = \frac{93}{100}$
8. a. $P(\text{undecided or no plans})$
 $= \frac{8}{300} = 0.027$
 b. $P(\text{military}) = \frac{13}{300} = 0.04$
 c. $P(\text{not a 2-yr college}) = \frac{289}{300} = 0.963$

Chapter 7

Section 7.1

1. $8 \text{ ft} = 8 \times 12 \text{ in.}$
 $= 96 \text{ in.}$
2. $26 \text{ ft} = 26 \text{ ft} \times \frac{1 \text{ yd}}{3 \text{ ft}}$
 $= \frac{26}{3} \text{ yd}$
 $= 8\frac{2}{3} \text{ yd, or } 8.67 \text{ yd}$
3. $220 \text{ yd} = 220 \text{ yd} \times \frac{3 \text{ ft}}{1 \text{ yd}} \times \frac{12 \text{ in.}}{1 \text{ ft}}$
 $= 220 \times 3 \times 12 \text{ in.}$
 $= 7,920 \text{ in.}$
4. $67 \text{ cm} = 67 \text{ cm} \times \frac{1 \text{ m}}{100 \text{ cm}}$
 $= \frac{67 \text{ m}}{100}$
 $= 0.67 \text{ m}$
5. $78.4 \text{ mm} = 78.4 \text{ mm} \times \frac{1 \text{ m}}{1,000 \text{ mm}} \times \frac{10 \text{ dm}}{1 \text{ m}}$
 $= \frac{78.4 \times 10}{1,000} \text{ dm}$
 $= 0.784 \text{ dm}$
6. $6 \text{ pens} = 6 \text{ pens} \times \frac{28 \text{ feet of fencing}}{1 \text{ pen}} \times \frac{1.72 \text{ dollars}}{1 \text{ foot of fencing}}$
 $= 6 \times 28 \times 1.72 \text{ dollars}$
 $= \$288.96$
7. $1,100 \text{ feet per minute} = \frac{1,100 \text{ feet}}{1 \text{ minute}} \cdot \frac{1 \text{ mile}}{5,280 \text{ feet}} \cdot \frac{60 \text{ minutes}}{1 \text{ hour}}$
 $= 1,100 \cdot \frac{60 \text{ miles}}{5,280 \text{ hours}}$
 $= 12.5 \text{ miles per hour, which is a reasonable speed for a chair lift.}$

Section 7.2

1. $1 \text{ yd}^2 = 1 \text{ yd} \times \text{yd} \times \frac{3 \text{ ft}}{1 \text{ yd}} \times \frac{3 \text{ ft}}{1 \text{ yd}} = 3 \text{ ft} \times 3 \text{ ft} = 9 \text{ ft}^2$
2. Length = $36 \text{ in.} + 12 \text{ in.} = 48 \text{ in.}$; Width = $24 \text{ in.} + 12 \text{ in.} = 36 \text{ in.}$;
 Area = $48 \text{ in.} \times 36 \text{ in.} = 1,728 \text{ in}^2$
 Area in square feet = $1,728 \text{ in}^2 \times \frac{1 \text{ ft}^2}{144 \text{ in}^2} = \frac{1,728}{144} \text{ ft}^2 = 12 \text{ ft}^2$
3. $A = 1.5 \times 45$
 $= 67.5 \text{ yd}^2$
 $67.5 \text{ yd}^2 = 67.5 \text{ yd}^2 \times \frac{9 \text{ ft}^2}{1 \text{ yd}^2}$
 $= 607.5 \text{ ft}^2$
4. $55 \text{ acres} = 55 \text{ acres} \times \frac{43,560 \text{ ft}^2}{1 \text{ acre}}$
 $= 55 \times 43,560 \text{ ft}^2$
 $= 2,395,800 \text{ ft}^2$
5. $960 \text{ acres} = 960 \text{ acres} \times \frac{1 \text{ mi}^2}{640 \text{ acres}}$
 $= \frac{960}{640} \text{ mi}^2$
 $= 1.5 \text{ mi}^2$

$$6. 1 \text{ m}^2 = 1 \cancel{\text{m}}^2 \times \frac{100 \cancel{\text{dm}}^2}{1 \cancel{\text{m}}^2} \times \frac{100 \text{ cm}^2}{1 \cancel{\text{dm}}^2}$$

$$= 10,000 \text{ cm}^2$$

$$7. 5 \text{ gal} = 5 \cancel{\text{gal}} \times \frac{4 \cancel{\text{qt}}}{1 \cancel{\text{gal}}} \times \frac{2 \text{ pt}}{1 \cancel{\text{qt}}}$$

$$= 5 \times 4 \times 2 \text{ pt}$$

$$= 40 \text{ pt}$$

$$8. 2,000 \text{ qt} = 2,000 \cancel{\text{qt}} \times \frac{1 \text{ gal}}{4 \cancel{\text{qt}}}$$

$$= \frac{2,000}{4} \text{ gal}$$

$$= 500 \text{ gal}$$

The number of 10-gal containers in

$$500 \text{ gal is } \frac{500}{10} = 50 \text{ containers.}$$

$$9. 3.5 \text{ liters} = 3.5 \cancel{\text{liters}} \times \frac{1,000 \text{ mL}}{1 \cancel{\text{liter}}}$$

$$= 3.5 \times 1,000 \text{ mL}$$

$$= 3,500 \text{ mL}$$

Section 7.3

$$1. 15 \text{ lb} = 15 \cancel{\text{lb}} \times \frac{16 \text{ oz}}{1 \cancel{\text{lb}}}$$

$$= 15 \times 16 \text{ oz}$$

$$= 240 \text{ oz}$$

$$2. 5 \text{ T} = 5 \cancel{\text{T}} \times \frac{2,000 \text{ lb}}{1 \cancel{\text{T}}}$$

$$= 10,000 \text{ lb}$$

10,000 lb is the equivalent of 5 tons.

$$3. 5 \text{ kg} = 5 \cancel{\text{kg}} \times \frac{1,000 \text{ g}}{1 \cancel{\text{kg}}} \times \frac{1,000 \text{ mg}}{1 \cancel{\text{g}}}$$

$$= 5 \times 1,000 \times 1,000 \text{ mg}$$

$$= 5,000,000 \text{ mg}$$

$$4. \text{ Total number of milligrams in bottle} = 75 \times 200 = 15,000 \text{ mg.}$$

$$15,000 \text{ mg} = 15,000 \cancel{\text{mg}} \times \frac{1 \text{ g}}{1,000 \cancel{\text{mg}}}$$

$$= \frac{15,000}{1,000} \text{ g}$$

$$= 15 \text{ g}$$

Section 7.4

$$1. 10 \text{ in.} = 10 \cancel{\text{in.}} \times \frac{2.54 \text{ cm}}{1 \cancel{\text{in.}}}$$

$$= 10 \times 2.54 \text{ cm}$$

$$= 25.4 \text{ cm}$$

$$2. 16.4 \text{ ft} = 16.4 \cancel{\text{ft}} \times \frac{1 \text{ m}}{3.28 \cancel{\text{ft}}}$$

$$= \frac{16.4}{3.28} \text{ m}$$

$$= 5 \text{ m}$$

$$3. 10 \text{ liters} = 10 \cancel{\text{liters}} \times \frac{1 \text{ gal}}{3.79 \cancel{\text{liters}}}$$

$$= \frac{10}{3.79} \text{ gal}$$

= 2.64 gal (rounded to the nearest hundredth)

$$4. 2.2 \text{ liters} = 2.2 \cancel{\text{liters}} \times \frac{1,000 \text{ mL}}{1 \cancel{\text{liter}}} \times \frac{1 \text{ in}^3}{16.39 \cancel{\text{mL}}}$$

$$= \frac{2.2 \times 1,000}{16.39} \text{ in}^3$$

$$= 134 \text{ in}^3 \text{ (rounded to the nearest cubic inch)}$$

$$5. 165 \text{ lb} = 165 \cancel{\text{lb}} \times \frac{1 \text{ kg}}{2.20 \cancel{\text{lb}}}$$

$$= \frac{165}{2.20} \text{ kg}$$

$$= 75 \text{ kg}$$

$$6. F = \frac{9}{5}(40) + 32$$

$$= 72 + 32$$

$$= 104^\circ\text{F}$$

$$7. C = \frac{5(101.6 - 32)}{9}$$

$$= 38.7^\circ\text{C} \text{ (rounded to the nearest tenth)}$$

Section 7.5

$$1. \text{ a. } 2 \text{ hr } 45 \text{ min} = 2 \cancel{\text{hr}} \times \frac{60 \text{ min}}{1 \cancel{\text{hr}}} + 45 \text{ min}$$

$$= 120 \text{ min} + 45 \text{ min}$$

$$= 165 \text{ min}$$

$$\text{ b. } 2 \text{ hr } 45 \text{ min} = 2 \text{ hr} + 45 \cancel{\text{min}} \times \frac{1 \text{ hr}}{60 \cancel{\text{min}}}$$

$$= 2 \text{ hr} + 0.75 \text{ hr}$$

$$= 2.75 \text{ hr}$$

$$2. \begin{array}{r} 4 \text{ min } 27 \text{ sec} \\ + 8 \text{ min } 46 \text{ sec} \\ \hline 12 \text{ min } 73 \text{ sec} \end{array}$$

Since there are 60 seconds in every minute, we write 73 seconds as

1 minute 13 seconds. We have

$$12 \text{ min } 73 \text{ sec} = 12 \text{ min} + 1 \text{ min } 13 \text{ sec}$$

$$= 13 \text{ min } 13 \text{ sec}$$

$$\begin{array}{r} 3. \quad 6 \text{ hr } 25 \text{ min} \quad 5 \text{ hr } 85 \text{ min} \\ - \quad 42 \text{ min} \quad = \quad - 42 \text{ min} \\ \hline \quad \quad \quad \quad \quad \quad 5 \text{ hr } 43 \text{ min} \end{array}$$

4. First, we multiply each unit by 4:

$$\begin{array}{r} 3 \text{ lb } 8 \text{ oz} \\ \times \quad 4 \\ \hline 12 \text{ lb } 32 \text{ oz} \end{array}$$

To convert the 32 ounces to pounds, we multiply the ounces by the conversion factor

$$\begin{aligned} 12 \text{ lb } 32 \text{ oz} &= 12 \text{ lb} + 32 \text{ oz} \times \frac{1 \text{ lb}}{16 \text{ oz}} \\ &= 12 \text{ lb} + 2 \text{ lbs} \\ &= 14 \text{ lb} \end{aligned}$$

Finally, we multiply the 14 lb and \$5.00 for a total price of \$70.00.

Chapter 8

Section 8.1

$$\begin{aligned} 1. \quad P &= 2(9) + 2(6) \\ &= 18 + 12 \\ &= 30 \text{ yards} \end{aligned}$$

$$2. \quad \text{a. } P = 4s = 4(1.38) = 5.52 \text{ in.}$$

$$\text{b. } P = a + b + c = 6.6 + 4.7 + 4.7 = 16 \text{ cm}$$

$$\text{c. } P = 2l + 2w = 2(39.6) + 2(25.1) = 129.4 \text{ mm}$$

$$3. \quad \text{a. } C = \pi d \approx (3.14)(0.92) \approx 2.89 \text{ in.}$$

$$\text{b. } C = 2\pi r \approx 2(3.14)(13.20) \approx 82.90 \text{ mm}$$

$$4. \quad 6,790 = \pi d$$

$$6,790 = 3.14d$$

$$d = \frac{6,790}{3.14}$$

$$d = 2,160 \text{ miles (to the nearest ten)}$$

Section 8.2

$$1. \quad A = bh = 3 \cdot 2 = 6 \text{ cm}^2$$

$$2. \quad A = \frac{1}{2}bh = \frac{1}{2} \cdot 4 \cdot 2 = 4 \text{ cm}^2$$

$$3. \quad \text{a. } A = s^2 = 1.38^2 = 1.90 \text{ in}^2 \quad \text{b. } A = \frac{1}{2}bh = \frac{1}{2}(6.6)(3.3) = 10.89 \text{ cm}^2 \quad \text{c. } A = lw = (39.6)(25.1) = 993.96 \text{ mm}^2$$

$$\begin{aligned} 4. \quad A &= \pi r^2 \approx 3.14(5)^2 \\ &= 3.14(25) = 78.5 \text{ ft}^2 \end{aligned}$$

$$\begin{aligned} 5. \quad A &= 10^2 - 5^2\pi \\ &= 100 - 25\pi \\ &= 21.5 \text{ cm}^2 \text{ (to the nearest tenth)} \end{aligned}$$

Section 8.3

1. a. Surface area = $2(15 \cdot 8) + 2(8 \cdot 12) + (15 \cdot 12) = 612 \text{ ft}^2$ b. 2 gallons will cover it, with some paint left over.

$$\begin{aligned} 2. \quad S &= 2\pi rh \\ &= 2(3.14)(0.25)(6) \\ &= 9.42 \text{ in}^2 \end{aligned}$$

$$\begin{aligned} 3. \quad S &= 4\pi r^2 \\ &\approx 4(3.14)(6)^2 \\ &= 452.16 \text{ in}^2 \end{aligned}$$

$$\begin{aligned} 4. \quad S &= \pi r^2 + 2\pi rh + \frac{1}{2}(4\pi r^2) \\ &= (3.14)(10)^2 + 2(3.14)(10)(10) + \frac{1}{2}[4(3.14)(10)^2] \\ &= 314 + 628 + 628 \\ &= 1,570 \text{ in}^2 \end{aligned}$$

Section 8.4

$$1. \quad V = 15 \cdot 12 \cdot 8 = 1,440 \text{ ft}^3$$

$$2. \quad \text{Radius} = 2(0.125) = 0.250$$

$$\begin{aligned} V &= \pi r^2 h \\ &= (3.14)(0.250)^2(6) \\ &= 1.178 \text{ in}^3 \end{aligned}$$

$$\begin{aligned} 3. \quad V &= \frac{1}{3}\pi r^2 h \\ &= \frac{1}{3}(3.14)(2^2)(4) \\ &= \frac{1}{3}(3.14)(4)(4) \\ &= 16.747 \text{ ft}^3 \end{aligned}$$

$$\begin{aligned} 4. \quad V &= \frac{4}{3}\pi r^3 \\ &\approx \frac{4}{3}(3.14)(4)^3 \\ &= 267.95 \text{ cm}^3 \end{aligned}$$

$$\begin{aligned} 5. \quad V &= \pi r^2 h + \frac{1}{2} \cdot \frac{4}{3}\pi r^3 \\ &= (3.14)(10)^2(10) + \frac{1}{2} \cdot \frac{4}{3}(3.14)(10)^3 \\ &= 3,140 + \frac{2}{3}(3,140) \\ &= 3,140 + 2,093.3 \\ &= 5,233.3 \text{ in}^3 \end{aligned}$$

Section 8.5

$$1. 4\sqrt{25} = 4 \cdot 5 \\ = 20$$

$$2. \sqrt{36} + \sqrt{4} = 6 + 2 \\ = 8$$

$$3. \sqrt{\frac{36}{100}} = \frac{6}{10} \\ = \frac{3}{5}$$

$$4. 14\sqrt{36} = 14 \cdot 6 \\ = 84$$

$$5. \sqrt{81} - \sqrt{25} = 9 - 5 \\ = 4$$

$$6. \sqrt{\frac{64}{121}} = \frac{8}{11}$$

$$8. \sqrt{405} + \sqrt{147} \approx 20.124612 + 12.124356 \\ = 32.248968 \\ = 32.25 \text{ to the nearest hundredth}$$

$$9. \sqrt{\frac{7}{12}} \approx \sqrt{0.5833333} \\ \approx 0.7637626 \\ = 0.764 \text{ to the nearest thousandth}$$

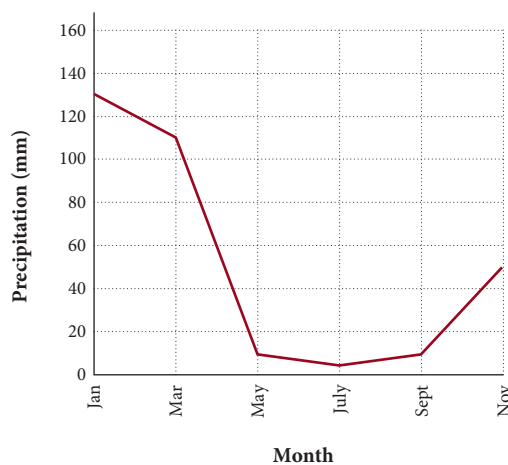
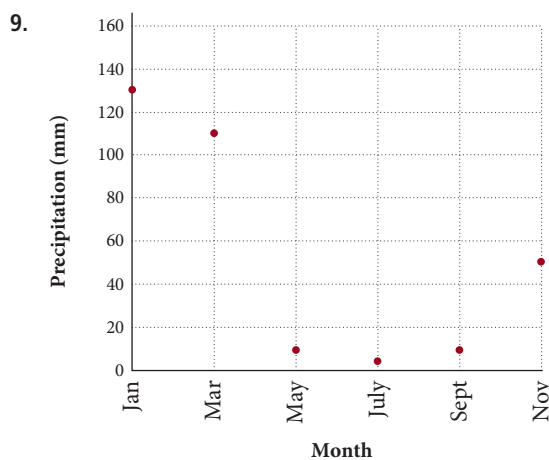
$$10. \text{ a. } c = \sqrt{5^2 + 5^2} \\ = \sqrt{25 + 25} \\ = \sqrt{50} \\ c = 7.07 \text{ ft (to the nearest hundredth)}$$

$$\text{ b. } c = \sqrt{16^2 + 12^2} \\ = \sqrt{256 + 144} \\ = \sqrt{400} \\ c = 20 \text{ cm}$$

$$11. c = \sqrt{12^2 + 5^2} = \sqrt{144 + 25} \\ = \sqrt{169} \\ = 13 \text{ ft}$$

Chapter 9

Section 9.1



Section 9.2

$$1. 2 + (-5) = -3 \quad 2. -2 + 5 = 3 \quad 3. -2 + (-5) = -7 \quad 4. 2 + 6 = 8 \quad 5. 2 + (-6) = -4 \quad 6. -2 + 6 = 4$$

$$7. -2 + (-6) = -8 \quad 8. \begin{array}{l} 15 + 12 = 27 \\ 15 + (-12) = 3 \\ -15 + 12 = -3 \\ -15 + (-12) = -27 \end{array} \quad 9. 12 + (-3) + (-7) + 5 = 9 + (-7) + 5 \\ = 2 + 5 \\ = 7 \quad 10. [-2 + (-12)] + [7 + (-5)] = [-14] + [2] \\ = -12$$

$$11. -5.76 + (-3.24) = -9.00 \quad 12. 6.88 + (-8.55) = -1.67 \quad 13. \frac{5}{6} + \left(-\frac{2}{6}\right) = \frac{3}{6} = \frac{1}{2} \quad 14. \frac{1}{2} + \left(-\frac{3}{4}\right) + \left(-\frac{5}{8}\right) = \frac{1 \cdot 4}{2 \cdot 4} + \left(-\frac{3 \cdot 2}{4 \cdot 2}\right) + \left(-\frac{5}{8}\right) \\ = \frac{4}{8} + \left(-\frac{6}{8}\right) + \left(-\frac{5}{8}\right) \\ = -\frac{2}{8} + \left(-\frac{5}{8}\right) \\ = -\frac{7}{8}$$

Section 9.3

$$1. 7 - 3 = 7 + (-3) \\ = 4 \quad 2. -7 - 3 = -7 + (-3) \\ = -10 \quad 3. -8 - 6 = -8 + (-6) \\ = -14 \quad 4. 10 - (-6) = 10 + 6 \\ = 16 \quad 5. -10 - (-15) = -10 + 15 \\ = 5$$

$$6. \text{ a. } 8 - 5 = 8 + (-5) = 3 \quad \text{b. } -8 - 5 = -8 + (-5) = -13 \quad \text{c. } 8 - (-5) = 8 + 5 = 13 \quad \text{d. } -8 - (-5) = -8 + 5 = -3 \quad \text{e. } 12 - 10 = 12 + (-10) = 2$$

$$\text{f. } -12 - 10 = -12 + (-10) = -22 \quad \text{g. } 12 - (-10) = 12 + 10 = 22 \quad \text{h. } -12 - (-10) = -12 + 10 = -2 \quad \text{7. } -4 + 6 - 7 = -4 + 6 + (-7) = 2 + (-7) = -5$$

$$8. 15 - (-5) - 8 = 15 + 5 + (-8) = 20 + (-8) = 12 \quad \text{9. } -8 - 2 = -8 + (-2) = -10 \quad \text{10. } 7 - (-5) = 7 + 5 = 12 \quad \text{11. } -8 - (-6) = -8 + 6 = -2$$

$$12. -57.8 - 70.4 = -57.8 + (-70.4) = -128.2 \quad \text{13. } -\frac{5}{8} - \frac{3}{8} = -\frac{5}{8} + \left(-\frac{3}{8}\right) = -\frac{8}{8} = -1 \quad \text{14. } 42 - (-42) = 42 + 42 = 84^\circ\text{F}$$

Section 9.4

$$1. 2(-6) = (-6) + (-6) = -12 \quad \text{2. } -2(6) = 6(-2) = (-2) + (-2) + (-2) + (-2) + (-2) + (-2) + (-2) + (-2) = -12 \quad \text{3. } -2(-6) = 12 \quad \text{10. } -5(2)(-4) = -10(-4) = 40$$

$$11. \text{ a. } (-8)^2 = (-8)(-8) = 64 \quad \text{b. } -8^2 = -8 \cdot 8 = -64 \quad \text{c. } (-3)^3 = (-3)(-3)(-3) = -27 \quad \text{d. } -3^3 = -3 \cdot 3 \cdot 3 = -27$$

$$\text{12. } -2[5 + (-8)] = -2[-3] = 6 \quad \text{13. } -3 + 4(-7 + 3) = -3 + 4(-4) = -3 + (-16) = -19 \quad \text{14. } -3(5) + 4(-4) = -15 + (-16) = -31$$

$$15. -2(3 - 5) - 7(-2 - 4) = -2(-2) - 7(-6) = 4 - (-42) = 4 + 42 = 46 \quad \text{16. } (-6 - 1)(4 - 9) = (-7)(-5) = 35 \quad \text{17. } \frac{3}{4}\left(-\frac{4}{7}\right) = -\frac{3 \cdot 4}{4 \cdot 7} = -\frac{3}{7}$$

$$18. \left(-\frac{5}{6}\right)\left(-\frac{9}{20}\right) = \frac{5 \cdot 9}{6 \cdot 20} = \frac{5 \cdot 3 \cdot 3}{2 \cdot 3 \cdot 4 \cdot 5} = \frac{3}{8} \quad \text{19. } (-3)(6.7) = -20.1 \quad \text{20. } (-0.6)(-0.5) = 0.30$$

Section 9.5

$$6. \frac{8(-5)}{-4} = \frac{-40}{-4} = 10 \quad \text{7. } \frac{-20 + 6(-2)}{7 - 11} = \frac{-20 + (-12)}{-4} = \frac{-32}{-4} = 8 \quad \text{8. } -3(4^2) + 10 \div (-5) = -3(16) + 10 \div (-5) = -48 + (-2) = -50 \quad \text{9. } -80 \div 2 \div 10 = -40 \div 10 = -4$$

Section 9.6

$$1. 5(7a) = (5 \cdot 7)a = 35a \quad \text{2. } -3(9x) = (-3 \cdot 9)x = -27x \quad \text{3. } 5(-8y) = [5(-8)]y = -40y \quad \text{4. } 6 + (9 + x) = (6 + 9) + x = 15 + x$$

$$5. (3x + 7) + 4 = 3x + (7 + 4) = 3x + 11 \quad \text{6. } 6(x + 4) = 6(x) + 6(4) = 6x + 24 \quad \text{7. } 7(a - 5) = 7(a) - 7(5) = 7a - 35 \quad \text{8. } 6(4x + 5) = 6(4x) + 6(5) = (6 \cdot 4)x + 6(5) = 24x + 30$$

$$9. 3(8a - 4) = 3(8a) - 3(4) = 24a - 12 \quad \text{10. } 8(3x + 4y) = 8(3x) + 8(4y) = 24x + 32y \quad \text{11. } A = s^2 = 12^2 = 144 \text{ ft}^2 \quad P = 4s = 4(12) = 48 \text{ ft}$$

$$12. A = lw = 100(53) = 5,300 \text{ yd}^2 \quad P = 2l + 2w = 2(100) + 2(53) = 200 + 106 = 306 \text{ yd}$$

Chapter 10

Section 10.1

$$1. 6(x + 4) = 6(x) + 6(4) = 6x + 24 \quad \text{2. } -3(2x + 4) = -3(2x) + (-3)(4) = -6x + (-12) = -6x - 12 \quad \text{3. } \frac{1}{2}(2x - 4) = \frac{1}{2}(2x) - \frac{1}{2}(4) = x - 2 \quad \text{4. } 6x - 2 + 3x + 8 = 6x + 3x + (-2) + 8 = 9x + 6$$

$$\begin{aligned} 5. \quad 2(4x + 3) + 7 &= 2(4x) + 2(3) + 7 \\ &= 8x + 6 + 7 \\ &= 8x + 13 \end{aligned}$$

$$\begin{aligned} 6. \quad 3(2x + 1) + 5(4x - 3) &= 3(2x) + 3(1) + 5(4x) - 5(3) \\ &= 6x + 3 + 20x - 15 \\ &= 26x - 12 \end{aligned}$$

$$\begin{aligned} 10. \quad A &= lw \\ &= 25(8 + 2x) \\ &= 25(8) + 25(2x) \\ &= 200 + 50x \text{ cm}^2 \end{aligned}$$

$$11. \text{ a. } x = 90^\circ - 45^\circ = 45^\circ$$

$$\text{ b. } x = 180^\circ - 60^\circ = 120^\circ$$

Section 10.2

$$\begin{aligned} 1. \quad &\text{When } x = 3 \\ &\text{the equation } 5x - 4 = 11 \\ &\text{becomes } 5(3) - 4 = 11 \\ &\text{or } 15 - 4 = 11 \\ &11 = 11 \end{aligned}$$

$$\begin{aligned} 2. \quad &\text{When } a = -3 \\ &\text{the equation } 6a - 3 = 2a + 4 \\ &\text{becomes } 6(-3) - 3 = 2(-3) + 4 \\ &-18 - 3 = -6 + 4 \\ &-21 = -2 \end{aligned}$$

$$\begin{aligned} 3. \quad &x + 5 = -2 \\ &x + 5 + (-5) = -2 + (-5) \\ &x + 0 = -7 \\ &x = -7 \end{aligned}$$

This is a false statement, so $a = -3$ is not a solution.

$$\begin{aligned} 4. \quad &a - 2 = 7 \\ &a - 2 + 2 = 7 + 2 \\ &a + 0 = 9 \\ &a = 9 \end{aligned}$$

$$\begin{aligned} 5. \quad &y + 6 - 2 = 8 - 9 \\ &y + 4 = -1 \\ &y + 4 + (-4) = -1 + (-4) \\ &y + 0 = -5 \\ &y = -5 \end{aligned}$$

$$\begin{aligned} 6. \quad &5x - 3 - 4x = 4 - 7 \\ &x - 3 = -3 \\ &x - 3 + 3 = -3 + 3 \\ &x + 0 = 0 \\ &x = 0 \end{aligned}$$

$$\begin{aligned} 7. \quad &-5 - 7 = x + 2 \\ &-12 = x + 2 \\ &-12 + (-2) = x + 2 + (-2) \\ &-14 = x + 0 \\ &-14 = x \end{aligned}$$

$$\begin{aligned} 8. \quad &a - \frac{2}{3} = \frac{5}{6} \\ &a - \frac{2}{3} + \frac{2}{3} = \frac{5}{6} + \frac{2}{3} \\ &a = \frac{9}{6} = \frac{3}{2} \end{aligned}$$

$$\begin{aligned} 9. \quad &5(3a - 4) - 14a = 25 \\ &15a - 20 - 14a = 25 \\ &a - 20 = 25 \\ &a - 20 + 20 = 25 + 20 \\ &a = 45 \end{aligned}$$

Section 10.3

$$\begin{aligned} 1. \quad &\frac{1}{3}x = 5 \\ &3 \cdot \frac{1}{3}x = 3 \cdot 5 \\ &x = 15 \end{aligned}$$

$$\begin{aligned} 2. \quad &\frac{1}{5}a + 3 = 7 \\ &\frac{1}{5}a + 3 + (-3) = 7 + (-3) \\ &\frac{1}{5}a = 4 \\ &5 \cdot \frac{1}{5}a = 5 \cdot 4 \\ &a = 20 \end{aligned}$$

$$\begin{aligned} 3. \quad &\frac{3}{5}y = 6 \\ &\frac{5}{3} \cdot \frac{3}{5}y = \frac{5}{3} \cdot 6 \\ &y = 10 \end{aligned}$$

$$\begin{aligned} 4. \quad &-\frac{3}{4}x = \frac{6}{5} \\ &-\frac{4}{3} \left(-\frac{3}{4}x \right) = -\frac{4}{3} \cdot \frac{6}{5} \\ &x = -\frac{8}{5} \end{aligned}$$

$$\begin{aligned} 5. \quad &6x = -42 \\ &\frac{6x}{6} = \frac{-42}{6} \\ &x = -7 \end{aligned}$$

$$\begin{aligned} 6. \quad &-5x + 6 = -14 \\ &-5x + 6 + (-6) = -14 + (-6) \\ &-5x = -20 \\ &\frac{-5x}{-5} = \frac{-20}{-5} \\ &x = 4 \end{aligned}$$

$$\begin{aligned} 7. \quad &3x - 7x + 5 = 3 - 18 \\ &-4x + 5 = -15 \\ &-4x + 5 + (-5) = -15 + (-5) \\ &-4x = -20 \\ &\frac{-4x}{-4} = \frac{-20}{-4} \\ &x = 5 \end{aligned}$$

$$\begin{aligned} 8. \quad &-5 + 4 = 2x - 11 + 3x \\ &-1 = 5x - 11 \\ &-1 + 11 = 5x - 11 + 11 \\ &10 = 5x \\ &\frac{10}{5} = \frac{5x}{5} \\ &2 = x \end{aligned}$$

Section 10.4

$$\begin{aligned} 1. \quad &4(x + 3) = -8 \\ &4x + 12 = -8 \\ &4x + 12 + (-12) = -8 + (-12) \\ &4x = -20 \\ &\frac{4x}{4} = \frac{-20}{4} \\ &x = -5 \end{aligned}$$

$$\begin{aligned} 2. \quad &6a + 7 = 4a - 3 \\ &6a + (-4a) + 7 = 4a + (-4a) - 3 \\ &2a + 7 = -3 \\ &2a + 7 + (-7) = -3 + (-7) \\ &2a = -10 \\ &\frac{2a}{2} = \frac{-10}{2} \\ &a = -5 \end{aligned}$$

$$\begin{aligned} 3. \quad &5(x - 2) + 3 = -12 \\ &5x - 10 + 3 = -12 \\ &5x - 7 = -12 \\ &5x - 7 + 7 = -12 + 7 \\ &5x = -5 \\ &\frac{5x}{5} = \frac{-5}{5} \\ &x = -1 \end{aligned}$$

$$\begin{aligned}
 4. \quad & 3(4x - 5) + 6 = 3x + 9 \\
 & 12x - 15 + 6 = 3x + 9 \\
 & 12x - 9 = 3x + 9 \\
 & 12x + (-3x) - 9 = 3x + (-3x) + 9 \\
 & 9x - 9 = 9 \\
 & 9x - 9 + 9 = 9 + 9 \\
 & 9x = 18 \\
 & \frac{9x}{9} = \frac{18}{9} \\
 & x = 2
 \end{aligned}$$

$$\begin{aligned}
 5. \quad & \frac{x}{3} + \frac{x}{6} = 9 \\
 & 6\left(\frac{x}{3} + \frac{x}{6}\right) = 6(9) \\
 & 6\left(\frac{x}{3}\right) + 6\left(\frac{x}{6}\right) = 6(9) \\
 & 2x + x = 54 \\
 & 3x = 54 \\
 & x = 18
 \end{aligned}$$

$$\begin{aligned}
 6. \quad & 3x + \frac{1}{4} = \frac{5}{8} \\
 & 8\left(3x + \frac{1}{4}\right) = 8\left(\frac{5}{8}\right) \\
 & 8(3x) + 8\left(\frac{1}{4}\right) = 8\left(\frac{5}{8}\right) \\
 & 24x + 2 = 5 \\
 & 24x = 3 \\
 & x = \frac{1}{8}
 \end{aligned}$$

$$\begin{aligned}
 7. \quad & \frac{4}{x} + 3 = \frac{11}{5} \\
 & 5x\left(\frac{4}{x} + 3\right) = 5x\left(\frac{11}{5}\right) \\
 & 5x\left(\frac{4}{x}\right) + 5x(3) = 5x\left(\frac{11}{5}\right) \\
 & 20 + 15x = 11x \\
 & 20 = -4x \\
 & -5 = x
 \end{aligned}$$

$$\begin{aligned}
 8. \quad & \frac{1}{5}x - 2.4 = 8.3 \\
 & \frac{1}{5}x - 2.4 + 2.4 = 8.3 + 2.4 \\
 & \frac{1}{5}x = 10.7 \\
 & 5\left(\frac{1}{5}x\right) = 5(10.7) \\
 & x = 53.5
 \end{aligned}$$

$$\begin{aligned}
 9. \quad & 7a - 0.18 = 2a + 0.77 \\
 & 7a + (-2a) - 0.18 = 2a + (-2a) + 0.77 \\
 & 5a - 0.18 = 0.77 \\
 & 5a - 0.18 + 0.18 = 0.77 + 0.18 \\
 & 5a = 0.95 \\
 & \frac{5a}{5} = \frac{0.95}{5} \\
 & a = 0.19
 \end{aligned}$$

Section 10.5

1. STEP 1 *Read and list.*

Known items: The numbers 3 and 10

Unknown item: The number in question

STEP 2 *Assign a variable and translate the information.*

Let x = the number asked for in the problem.

Then "The sum of a number and 3" translates to $x + 3$.

STEP 3 *Reread and write an equation.*

The sum of x and 3 is 10.

$$\begin{array}{ccc}
 \underbrace{x + 3} & & = 10 \\
 \downarrow \downarrow & & \\
 x + 3 & & = 10
 \end{array}$$

STEP 4 *Solve the equation.*

$$\begin{aligned}
 x + 3 &= 10 \\
 x &= 7
 \end{aligned}$$

STEP 5 *Write your answer.*

The number is 7.

STEP 6 *Reread and check.*

The sum of 7 and 3 is 10.

2. STEP 1 *Read and list.*

Known items: The numbers 4 and 34, twice a number, and three times a number

Unknown item: The number in question

STEP 2 *Assign a variable and translate the information.*

Let x = the number asked for in the problem.

Then "The sum of twice a number and three times the number" translates to $2x + 3x$.

STEP 3 *Reread and write an equation.*

$$\begin{array}{ccc}
 \underbrace{4 \text{ added to}} & \underbrace{\text{the sum of twice a number and}} & \text{is } 34 \\
 & \underbrace{\text{three times the number}} & \\
 \downarrow & \downarrow & \downarrow \downarrow \\
 4 + & 2x + 3x & = 34
 \end{array}$$

STEP 4 *Solve the equation.*

$$\begin{aligned}
 4 + 2x + 3x &= 34 \\
 5x + 4 &= 34 \\
 5x &= 30 \\
 x &= 6
 \end{aligned}$$

STEP 5 *Write your answer.*

The number is 6.

STEP 6 Reread and check.

Twice 6 is 12 and three times 6 is 18. Their sum is $12 + 18 = 30$. Four added to this is 34. Therefore, 4 added to the sum of twice 6 and three times 6 is 34.

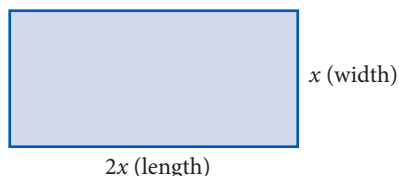
3. STEP 1 Read and list.

Known items: Length is twice width;
perimeter 42 cm

Unknown items: The length and the width

STEP 2 Assign a variable and translate the information.

Let x = the width. Since the length is twice the width, the length must be $2x$. Here is a picture.

**STEP 3 Reread and write an equation.**

The perimeter is the sum of the sides, and is given as 42; therefore,
 $x + x + 2x + 2x = 42$

STEP 4 Solve the equation.

$$\begin{aligned}x + x + 2x + 2x &= 42 \\6x &= 42 \\x &= 7\end{aligned}$$

STEP 5 Write your answer.

The width is 7 centimeters and the length is
 $2(7) = 14$ centimeters

STEP 6 Reread and check.

The length, 14, is twice the width, 7. The perimeter is $7 + 7 + 14 + 14 = 42$ centimeters.

4. STEP 1 Read and list.

Known items: Three angles are in a triangle. One is 3 times the smallest. The largest is 5 times the smallest.

Unknown item: The three angles

STEP 2 Assign a variable and translate the information.

Let x = the smallest angle. The other two angles are $3x$ and $5x$.

STEP 3 Reread and write an equation.

The three angles must add up to 180° , so
 $x + 3x + 5x = 180^\circ$

STEP 4 Solve the equation.

$$\begin{aligned}x + 3x + 5x &= 180^\circ \\9x &= 180^\circ \quad \text{Add similar terms on left side} \\x &= 20^\circ \quad \text{Divide each side by 9}\end{aligned}$$

STEP 5 Write the answer.

The three angles are, 20° , $3(20^\circ) = 60^\circ$, and
 $5(20^\circ) = 100^\circ$.

STEP 6 Reread and check.

The sum of the three angles is $20^\circ + 60^\circ + 100^\circ = 180^\circ$. One angle is 3 times the smallest, while the largest is 5 times the smallest.

5. STEP 1 Read and list.

Known items: Joyce is 21 years older than Travis. Six years from now their ages will add to 49.

Unknown items: Their ages now

STEP 2 Assign a variable and translate the information.

Let x = Travis's age now; since Joyce is 21 years older than that, she is presently $x + 21$ years old.

STEP 3 Reread and write an equation.

	Now	in 6 years
Joyce	$x + 21$	$x + 27$
Travis	x	$x + 6$

$$x + 27 + x + 6 = 49$$

STEP 4 Solve the equation.

$$x + 27 + x + 6 = 49$$

$$2x + 33 = 49$$

$$2x = 16$$

$$x = 8$$

STEP 5 Write your answer.

Travis is now 8 years old, and Joyce is

$8 + 21 = 29$ years old.

STEP 6 Reread and check.

Joyce is 21 years older than Travis. In six years, Joyce will be 35 years old and Travis will be 14 years old. At that time, the sum of their ages will be

$$35 + 14 = 49.$$

6. STEP 1 Read and list.

Known items: Charges are \$11 per day and 16 cents per mile. Car is rented for 2 days.

Total charge is \$41.

Unknown items: How many miles the car was driven

STEP 2 Assign a variable and translate the information.

Let x = the number of miles the car was driven. Two days rental is $2(11)$. The cost for driving x miles is $0.16x$.

STEP 3 Reread and write an equation.

The total cost is the two days' rental plus the mileage cost. It must add up to 41. The equation is

$$2(11) + 0.16x = 41$$

STEP 4 Solve the equation.

$$2(11) + 0.16x = 41$$

$$22 + 0.16x = 41$$

$$22 + (-22) + 0.16x = 41 + (-22)$$

$$0.16x = 19$$

$$\frac{0.16x}{0.16} = \frac{19}{0.16}$$

$$x = 118.75$$

STEP 5 Write your answer.

The car was driven 118.75 miles.

STEP 6 Reread and check.

The charge for two days is $2(11) = \$22$. The 118.75 miles adds $118.75(0.16) = \$19$. The total is $\$22 + \$19 = \$41$, which checks with the total charge given in the problem.

7. STEP 1 Read and list.

Known items: We have dimes and quarters. There are 7 more dimes than quarters, and the total value of the coins is \$1.75.

Unknown items: How many of each type of coin Amy has

STEP 2 Assign a variable and translate the information.

Let x = the number of quarters. Here is a table that summarizes the information in the problem.

	Quarters	Dimes
Number of	x	$x + 7$
Value of	$0.25x$	$0.10(x + 7)$

STEP 3 Reread and write an equation.

The value of the quarters plus the value of the dimes must add to 1.75. Therefore, our equation is

$$0.25x + 0.10(x + 7) = 1.75$$

STEP 4 Solve the equation.

$$\begin{aligned} 0.25x + 0.10(x + 7) &= 1.75 \\ 0.25x + 0.10x + 0.70 &= 1.75 \\ 0.35x + 0.70 &= 1.75 \\ 0.35x &= 1.05 \\ x &= 3 \end{aligned}$$

STEP 5 Write your answer.

She has 3 quarters. The number of dimes is 7 more than that, which is 10.

STEP 6 Reread and check.

3 quarters are worth \$0.75. 10 dimes are worth \$1.00. The total of the two is \$1.75, which checks with the information in the problem.

Section 10.6

1. When $P = 80$ and $w = 6$
the formula $P = 2l + 2w$
becomes $80 = 2l + 2(6)$
 $80 = 2l + 12$
 $68 = 2l$
 $34 = l$
The length is 34 feet.

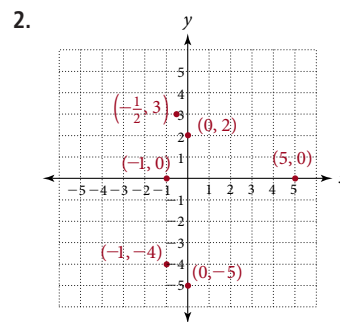
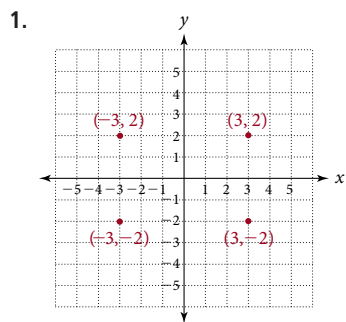
2. When $F = 77$
the formula $C = \frac{5}{9}(F - 32)$
becomes $C = \frac{5}{9}(77 - 32)$
 $= \frac{5}{9}(45)$
 $= \frac{5}{9} \cdot \frac{45}{1}$
 $= \frac{225}{9}$
 $= 25$ degrees Celsius

3. When $x = 0$
the formula $y = 2x + 6$
becomes $y = 2 \cdot 0 + 6$
 $= 0 + 6$
 $= 6$

4. When $x = -3$
the formula $2x + 3y = 4$
becomes $2(-3) + 3y = 4$
 $-6 + 3y = 4$
 $3y = 10$
 $y = \frac{10}{3}$

5. a. $11 - 9 = 2$ hr
b. $d = 60 \text{ mi/hr} \cdot 2 \text{ hr}$
 $d = 60 \cdot 2$
 $d = 120$ miles

6. With $x = 35^\circ$ we use the formulas for finding the complement and the supplement of an angle:
The complement of 35° is $90^\circ - 35^\circ = 55^\circ$
The supplement is 35° is $180^\circ - 35^\circ = 145^\circ$

Section 10.7**Appendices****Appendix D**

1. $2^{-4} = \frac{1}{2^4}$
 $= \frac{1}{16}$

2. $4^{-2} = \frac{1}{4^2}$
 $= \frac{1}{16}$

3. $(-2)^{-3} = \frac{1}{(-2)^3}$
 $= \frac{1}{-8}$
 $= -\frac{1}{8}$

4. $3^4 \cdot 3^{-7} = 3^{4+(-7)}$
 $= 3^{-3}$
 $= \frac{1}{3^3}$
 $= \frac{1}{27}$

5. $x^6 \cdot x^{-10} = x^{6+(-10)}$
 $= x^{-4}$
 $= \frac{1}{x^4}$

$$\begin{aligned} 6. \frac{2^6}{2^8} &= 2^{6-8} \\ &= 2^{-2} \\ &= \frac{1}{2^2} \\ &= \frac{1}{4} \end{aligned}$$

$$\begin{aligned} 7. \frac{10^{-5}}{10^3} &= 10^{-5-3} \\ &= 10^{-8} \\ \frac{1}{10^8} &= \frac{1}{100,000,000} \end{aligned}$$

$$\begin{aligned} 8. \frac{10^{-6}}{10^{-8}} &= 10^{-6-(-8)} \\ &= 10^{-6+8} \\ &= 10^2 = 100 \end{aligned}$$

$$\begin{aligned} 9. 4x^{-3} \cdot 7x &= 4x^{-3} \cdot 7x^1 \\ &= (4 \cdot 7)(x^{-3} \cdot x^1) \\ &= 28x^{-3+1} \\ &= 28x^{-2} = \frac{28}{x^2} \end{aligned}$$

$$\begin{aligned} 10. \frac{x^{-5} \cdot x^2}{x^{-8}} &= \frac{x^{-5+2}}{x^{-8}} \\ &= \frac{x^{-3}}{x^{-8}} \\ &= x^{-3-(-8)} \\ &= x^{-3+8} \\ &= x^5 \end{aligned}$$

Appendix F

$$\begin{aligned} 1. (2.5 \times 10^6)(1.4 \times 10^2) &= (2.5)(1.4) \times (10^6)(10^2) \\ &= 3.5 \times 10^{6+2} \\ &= 3.5 \times 10^8 \end{aligned}$$

$$\begin{aligned} 2. (2,200,000)(0.00015) &= (2.2 \times 10^6)(1.5 \times 10^{-4}) \\ &= (2.2)(1.5) \times (10^6)(10^{-4}) \\ &= 3.3 \times 10^{6+(-4)} \\ &= 3.3 \times 10^2 \end{aligned}$$

$$\begin{aligned} 3. \frac{6 \times 10^5}{2 \times 10^{-4}} &= \frac{6}{2} \times \frac{10^5}{10^{-4}} \\ &= 3.0 \times 10^{5-(-4)} \\ &= 3.0 \times 10^{5+4} \\ &= 3.0 \times 10^9 \end{aligned}$$

$$\begin{aligned} 4. \frac{0.0038}{19,000,000} &= \frac{3.8 \times 10^{-3}}{1.9 \times 10^7} \\ &= \frac{3.8}{1.9} \times \frac{10^{-3}}{10^7} \\ &= 2.0 \times 10^{-3-7} \\ &= 2.0 \times 10^{-10} \end{aligned}$$

$$\begin{aligned} 5. \frac{(6.8 \times 10^{-4})(3.9 \times 10^2)}{7.8 \times 10^{-6}} &= \frac{(6.8)(3.9)}{(7.8)} \times \frac{(10^{-4})(10^2)}{10^{-6}} \\ &= 3.4 \times 10^{-4+2-(-6)} \\ &= 3.4 \times 10^4 \end{aligned}$$

$$\begin{aligned} 6. \frac{(0.000035)(45,000)}{0.000075} &= \frac{(3.5 \times 10^{-5})(4.5 \times 10^4)}{7.5 \times 10^{-5}} \\ &= \frac{(3.5)(4.5)}{(7.5)} \times \frac{(10^{-5})(10^4)}{10^{-5}} \\ &= 2.1 \times 10^{-5+4-(-5)} \\ &= 2.1 \times 10^4 \end{aligned}$$

Answers to Odd-Numbered Problems

Chapter 1

Pretest for Chapter 1

1. $7000 + 60 + 2$ 2. Three million, four hundred nine thousand, twenty-one 3. 18,507 4. 597 5. 5,410 6. 211
7. 264 8. 216 9. 21,440 10. 32 11. 174 R 16 12. 510 13. 6,800 14. 31 15. 74 16. $6(12 - 8) = 24$

Getting Ready for Chapter 1

TABLE 1 Addition Facts										
+	0	1	2	3	4	5	6	7	8	9
0	0	1	2	3	4	5	6	7	8	9
1	1	2	3	4	5	6	7	8	9	10
2	2	3	4	5	6	7	8	9	10	11
3	3	4	5	6	7	8	9	10	11	12
4	4	5	6	7	8	9	10	11	12	13
5	5	6	7	8	9	10	11	12	13	14
6	6	7	8	9	10	11	12	13	14	15
7	7	8	9	10	11	12	13	14	15	16
8	8	9	10	11	12	13	14	15	16	17
9	9	10	11	12	13	14	15	16	17	18

TABLE 2 Multiplication Facts										
×	0	1	2	3	4	5	6	7	8	9
0	0	0	0	0	0	0	0	0	0	0
1	0	1	2	3	4	5	6	7	8	9
2	0	2	4	6	8	10	12	14	16	18
3	0	3	6	9	12	15	18	21	24	27
4	0	4	8	12	16	20	24	28	32	36
5	0	5	10	15	20	25	30	35	40	45
6	0	6	12	18	24	30	36	42	48	54
7	0	7	14	21	28	35	42	49	56	63
8	0	8	16	24	32	40	48	56	64	72
9	0	9	18	27	36	45	54	63	72	81

Problem Set 1.1

1. 8 ones, 7 tens 3. 5 ones, 4 tens 5. 8 ones, 4 tens, 3 hundreds 7. 8 ones, 0 tens, 6 hundreds
9. 8 ones, 7 tens, 3 hundreds, 2 thousands 11. 9 ones, 6 tens, 5 hundreds, 3 thousands, 7 ten thousands, 2 hundred thousands
13. Ten thousands 15. Hundred millions 17. Ones 19. Hundred thousands 21. $600 + 50 + 8$ 23. $60 + 8$
25. $4,000 + 500 + 80 + 7$ 27. $30,000 + 2,000 + 600 + 70 + 4$ 29. $3,000,000 + 400,000 + 60,000 + 2,000 + 500 + 70 + 7$
31. $400 + 7$ 33. $30,000 + 60 + 8$ 35. $3,000,000 + 4,000 + 8$ 37. Twenty-nine 39. Forty 41. Five hundred seventy-three
43. Seven hundred seven 45. Seven hundred seventy 47. Twenty-three thousand, five hundred forty
49. Three thousand, four 51. Three thousand, forty 53. One hundred four million, sixty-five thousand, seven hundred eighty
55. Five billion, three million, forty thousand, eight 57. Two million, five hundred forty-six thousand, seven hundred thirty-one
59. 325 61. 5,432 63. 86,762 65. 2,000,200 67. 2,002,200
69. a. Twenty-eight thousand, six hundred thirty-one b. Ninety-three thousand, three hundred thirty-three
71. Hundred thousands 73. Three million, one hundred seventy-three thousand, four hundred three
75. Twenty-one thousand, four hundred eighty 77. Seven hundred fifty dollars and no cents 79. 304,000,000
81. One hundred twenty-seven million 83. 36,000,000 85. Ten million, nine hundred thousand

Problem Set 1.2

1. 15 3. 14 5. 24 7. 15 9. 20 11. 68 13. 98 15. 7,297 17. 6,487 19. 96 21. 7,449 23. 65
25. 102 27. 875 29. 829 31. 10,391 33. 16,204 35. 155,554 37. 111,110 39. 17,391 41. 14,892 43. 180
45. 2,220 47. 18,285 49.

First Number a	Second Number b	Their Sum $a + b$
61	38	99
63	36	99
65	34	99
67	32	99

First Number a	Second Number b	Their Sum $a + b$
9	16	25
36	64	100
81	144	225
144	256	400

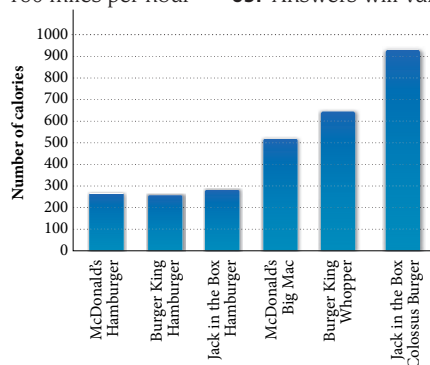
53. $9 + 5$ 55. $8 + 3$ 57. $4 + 6$ 59. $1 + (2 + 3)$ 61. $2 + (1 + 6)$ 63. $(1 + 9) + 1$ 65. $4 + (n + 1)$ 67. $n = 4$
69. $n = 5$ 71. $n = 8$ 73. $n = 8$ 75. The sum of 4 and 9 77. The sum of 8 and 1 79. The sum of 2 and 3 is 5.
81. a. $5 + 2$ b. $8 + 3$ 83. a. $m + 1$ b. $m + n$ 85. 12 in. 87. 16 ft 89. 26 yd 91. 18 in. 93. a. 150 b. 1,125
95. \$349 97. a. \$62,377.00 b. \$55,177.00 c. \$7,200.00

Problem Set 1.3

1. 40 3. 50 5. 50 7. 80 9. 460 11. 470 13. 56,780 15. 4,500 17. 500 19. 800 21. 900 23. 1,100
 25. 5,000 27. 39,600 29. 5,000 31. 10,000 33. 1,000 35. 658,000 37. 510,000 39. 3,789,000

Original Number	Rounded to the Nearest		
	Ten	Hundred	Thousand
41. 7,821	7,820	7,800	8,000
43. 5,999	6,000	6,000	6,000
45. 10,985	10,990	11,000	11,000
47. 99,999	100,000	100,000	100,000

49. 1,200 51. 1,900 53. 58,000 55. 33,400 57. 190,000 59. 81,400
 61. a. 4,265,997 babies b. Yes c. 2,300,000 babies d. 112,000 babies
 63. 160 miles per hour 65. Answers will vary, but 70 miles per hour is a good estimate.
 67.



Problem Set 1.4

1. 32 3. 22 5. 10 7. 111 9. 312 11. 403 13. 1,111 15. 4,544 17. 15 19. 33 21. 5 23. 33 25. 95
 27. 152 29. 274 31. 488 33. 538 35. 163 37. 1,610 39. 46,083

41.

First Number a	Second Number b	The Difference of a and b $a - b$
25	15	10
24	16	8
23	17	6
22	18	4

43.

First Number a	Second Number b	The Difference of a and b $a - b$
400	256	144
400	144	256
225	144	81
225	81	144

45. The difference of 10 and 2 47. The difference of a and 6 49. The difference of 8 and 2 is 6. 51. 3 53. 8 55. 23
 57. $8 - 3$ 59. $y - 9$ 61. $3 - 2 = 1$ 63. $37 - 9x = 10$ 65. $2y - 15x = 24$ 67. $(x + 2) - (x + 1) = 1$ 69. \$255
 71. \$172,500 73. 91 mph 75. 173 GB
 77. a.

State	Energy (MegaWatts)
Texas	2,768
California	2,361
Iowa	936
Washington	818

b. 407 MW

Problem Set 1.5

1. 300 3. 600 5. 3,000 7. 5,000 9. 21,000 11. 81,000 13. 100 15. 228 17. 36 19. 1,440 21. 950
 23. 1,725 25. 121 27. 1,552 29. 4,200 31. 66,248 33. 279,200 35. 12,321 37. 106,400 39. 198,592
 41. 612,928 43. 333,180 45. 18,053,805 47. 263,646,976

49.

First Number a	Second Number b	Their Product ab
11	11	121
11	22	242
22	22	484
22	44	968

51.

First Number a	Second Number b	Their Product ab
25	10	250
25	100	2,500
25	1,000	25,000
25	10,000	250,000

53.

First Number a	Second Number b	Their Product ab
12	20	240
36	20	720
12	40	480
36	40	1,440

55. The product of 6 and 7

57. The product of 2 and n

59. The product of 9 and 7 is 63. 61. $7 \cdot n$ 63. $6 \cdot 7 = 42$ 65. $0 \cdot 6 = 0$ 67. Products: $9 \cdot 7$ and 63
 69. Products: 4(4) and 16 71. Factors: 2, 3, and 4 73. Factors: 2, 2, and 3 75. 9(5) 77. $7 \cdot 6$ 79. $(2 \cdot 7) \cdot 6$
 81. $(3 \times 9) \times 1$ 83. $7(2) + 7(3) = 35$ 85. $9(4) + 9(7) = 99$ 87. $3x + 3$ 89. $2x + 10$ 91. $n = 3$ 93. $n = 9$ 95. $n = 0$
 97. 2,860 mi 99. \$7.18 101. 148,800 jets 103. 2,081 calories 105. 280 calories 107. Yes 109. 1 in^2 111. 1.125 in^2
 113. 8,000 115. 1,500,000 117. 1,400,000 119. 40 121. 54

Problem Set 1.6

1. $6 \div 3$ 3. $45 \div 9$ 5. $r \div s$ 7. $20 \div 4 = 5$ 9. $2 \cdot 3 = 6$ 11. $9 \cdot 4 = 36$ 13. $6 \cdot 8 = 48$ 15. $7 \cdot 4 = 28$ 17. 5 19. 8
 21. Undefined 23. 45 25. 23 27. 1,530 29. 1,350 31. 18,000 33. 16,680 35. a 37. b 39. 1 41. 2
 43. 4 45. 6 47. 45 49. 49 51. 432 53. 1,438 55. 705 57. 3,020
 59. 61. 61 R 4 63. 90 R 1 65. 13 R 7 67. 234 R 6

First Number a	Second Number b	The Quotient of a and b $\frac{a}{b}$
100	25	4
100	26	3 R 22
100	27	3 R 19
100	28	3 R 16

69. 402 R 4 71. 35 R 35 73. \$3,525 75. 79¢ 77. 3 bottles 79. 6 glasses, with 2 ounces left over 81. \$3,900,000
 83. 665 mg 85. 5 mi

Problem Set 1.7

1. Base 4; exponent 5 3. Base 3; exponent 6 5. Base 8; exponent 2 7. Base 9; exponent 1 9. Base 4; exponent 0 11. 36
 13. 8 15. 1 17. 1 19. 81 21. 10 23. 12 25. 1 27. 12 29. 100 31. 4 33. 43 35. 16 37. 84
 39. 14 41. 74 43. 12,768 45. 104 47. 416 49. 66 51. 21 53. 7 55. 16 57. 84 59. 40 61. 41
 63. 18 65. 405 67. 124 69. 11 71. 91 73. 7 75. $8(4 + 2) = 48$ 77. $2(10 + 3) = 26$ 79. $3(3 + 4) + 4 = 25$
 81. $(20 \div 2) - 9 = 1$ 83. $(8 \cdot 5) + (5 \cdot 4) = 60$ 85. 255 calories 87. 465 calories 89. Big Mac has twice the calories.
 91. 4 93. 16

Chapter 1 Review

1. One thousand, three hundred seventy-six 3. 5,245,652 5. $1,000,000 + 20,000 + 5,000 + 600 + 30 + 9$ 7. d 9. c 11. b
 13. g 15. 749 17. 8,272 19. 314 21. 3,149 23. 584 25. 3,717 27. 173 29. 428 31. 3,781,090 33. 3,800,000
 35. 79 37. 222 39. 8 41. 32 43. $3(4 + 6) = 30$ 45. $2(17 - 5) = 24$ 47. $P = 22 \text{ m}$

Chapter 1 Test

1. Twenty thousand, three hundred forty-seven 2. 2,045,006 3. $100,000 + 20,000 + 3,000 + 400 + 7$ 4. f 5. c 6. a 7. e
 8. 876 9. 16,383 10. 524 11. 3,085 12. 1,674 13. 22,258 14. 85 15. 21 16. 520,000 17. 11 18. 4
 19. 107 20. $3x - 6$ 21. $2(11 + 7) = 36$ 22. $(20 \div 5) + 9 = 13$ 23. $P = 46 \text{ m}$ 24. \$131,363,606 25. \$912,251,368

A Glimpse of Algebra

1. $36x^2$ 3. $16x^2$ 5. $27a^3$ 7. $8a^3b^3$ 9. $81x^2y^2$ 11. $25x^2y^2z^2$ 13. $1,296x^4y^2$ 15. $576x^6$ 17. $200x^5$ 19. $7,200a^7$
 21. $432x^5y^5$ 23. $400x^6y^6z^6$ 25. $x^5y^7z^6$ 27. $324a^{14}b^{16}$ 29. $40x^{11}y^{12}$

Chapter 2

Pretest for Chapter 2

1. $\frac{4}{5}$ 2. $2^4 \cdot 7$ 3. 6 4. 12 5. $\frac{28}{25}$ 6. $\frac{1}{12}$ 7. $\frac{53}{80}$ 8. $\frac{19}{24}$ 9. $\frac{23}{5}$ 10. $2\frac{5}{8}$ 11. $3\frac{17}{20}$ 12. $3\frac{15}{19}$
 13. $5\frac{3}{10}$ 14. $2\frac{5}{6}$ 15. $\frac{1}{16}$ 16. 12 17. $12\frac{81}{100}$ 18. 1 19. $\frac{2}{3}$ 20. $1\frac{2}{7}$

Getting Ready for Chapter 2

1. a. > b. > c. < d. > 2. 10 3. 2 4. 16 5. 23 6. 16 7. 0 8. 24 9. 101 10. 5 11. 2 R 3 12. 8 R 16
 13. 201 R 5 14. 507 R 10 15. $(2 + 3) \cdot 7$ 16. $2^2 \cdot 3^3$

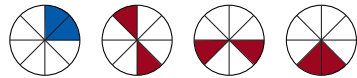
Problem Set 2.1

1. 1 3. 2 5. x 7. a 9. 5 11. 1 13. 12 15.

Numerator	Denominator	Fraction
a	b	$\frac{a}{b}$
3	5	$\frac{3}{5}$
1	7	$\frac{1}{7}$
x	y	$\frac{x}{y}$
x + 1	x	$\frac{x + 1}{x}$

17. $\frac{3}{4}, \frac{1}{2}, \frac{9}{10}$

19. True 21. False 23. $\frac{3}{4}$ 25. $\frac{43}{47}$ 27. $\frac{4}{3}$ 29. $\frac{13}{17}$ 31. $\frac{4}{6}$ 33. $\frac{5}{6}$ 35. $\frac{8}{12}$ 37. $\frac{8}{12}$ 39. $\frac{2x}{12x}$ 41. $\frac{48a}{24a}$
 43. $\frac{120a}{24a}$ 45. Answers will vary 47. 3 49. 2 51. 37 53. a. $\frac{1}{2}$ b. $\frac{1}{2}$ c. $\frac{1}{4}$ d. $\frac{1}{4}$



- 55.–63. 65. $\frac{1}{20} < \frac{4}{25} < \frac{3}{10} < \frac{2}{5}$ 67. $\frac{3}{12}$ inch

69.

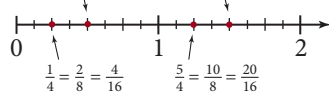
How Often Workers Send Non-Work-Related E-Mail From the Office	Fraction of Respondents Saying Yes
never	$\frac{4}{25}$
1 to 5 times a day	$\frac{47}{100}$
5 to 10 times a day	$\frac{8}{25}$
more than 10 times a day	$\frac{1}{20}$

 71. $\frac{4}{5}$ 73. $\frac{311}{500}$ 75. $\frac{19}{33}$ 77. a. $\frac{90}{360}$ b. $\frac{45}{360}$ c. $\frac{180}{360}$ d. $\frac{270}{360}$

79. d 81. a 83. 108 85. 60 87. 4 89. 5 91. 7 93. 51 95. 23 97. 32 99. 16 101. 18

Problem Set 2.2

1. Prime 3. Composite; 3, 5, and 7 are factors 5. Composite; 3 is a factor 7. Prime 9. $2^2 \cdot 3$ 11. 3^4 13. $5 \cdot 43$ 15. $3 \cdot 5$
 17. $\frac{1}{2}$ 19. $\frac{2}{3}$ 21. $\frac{4}{5}$ 23. $\frac{9}{5}$ 25. $\frac{7}{11}$ 27. $\frac{3}{5}$ 29. $\frac{1}{7}$ 31. $\frac{7}{9}$ 33. $\frac{7}{5}$ 35. $\frac{1}{5}$ 37. $\frac{11}{7}$ 39. $\frac{5}{3}$ 41. $\frac{8}{9}$ 43. $\frac{42}{55}$
 45. $\frac{17}{19}$ 47. $\frac{14}{33}$ 49. a. $\frac{2}{17}$ b. $\frac{3}{26}$ c. $\frac{1}{9}$ d. $\frac{3}{28}$ e. $\frac{2}{19}$ 51. a. $\frac{1}{45}$ b. $\frac{1}{30}$ c. $\frac{1}{18}$ d. $\frac{1}{15}$ e. $\frac{1}{10}$ 53. a. $\frac{1}{3}$ b. $\frac{5}{6}$ c. $\frac{1}{5}$
 55. $\frac{9}{16}$ 57.–59. $\frac{1}{2} = \frac{2}{4} = \frac{4}{8} = \frac{8}{16}$ $\frac{3}{2} = \frac{6}{4} = \frac{12}{8} = \frac{24}{16}$ 61. $\frac{106}{115}$ 63. $\frac{1}{3}$ 65. $\frac{8}{25}$ 67. $\frac{1}{3}$ 69. $\frac{37}{70}$



71. $\frac{1}{3}$ 73. $\frac{1}{8}$ 75. 3 77. 45 79. 25 81. $2^2 \cdot 5 \cdot 3$ 83. $2^2 \cdot 5 \cdot 3$ 85. 9 87. 25 89. 12 91. 18 93. 42 95. 53

Problem Set 2.3

1. $\frac{8}{15}$ 3. $\frac{7}{8}$ 5. 1 7. $\frac{27}{4}$ 9. 1 11. $\frac{1}{24}$ 13. $\frac{24}{125}$ 15. $\frac{105}{8}$

17.

First Number x	Second Number y	Their Product xy
$\frac{1}{2}$	$\frac{2}{3}$	$\frac{1}{3}$
$\frac{2}{3}$	$\frac{3}{4}$	$\frac{1}{2}$
$\frac{3}{4}$	$\frac{4}{5}$	$\frac{3}{5}$
$\frac{5}{a}$	$\frac{a}{6}$	$\frac{5}{6}$

19.

First Number x	Second Number y	Their Product xy
$\frac{1}{2}$	30	15
$\frac{1}{5}$	30	6
$\frac{1}{6}$	30	5
$\frac{1}{15}$	30	2

21. $\frac{3}{5}$ 23. 9 25. 1 27. 8 29. $\frac{1}{15}$ 31. $\frac{4}{9}$ 33. $\frac{9}{16}$ 35. $\frac{1}{4}$ 37. $\frac{8}{27}$ 39. $\frac{1}{2}$ 41. $\frac{9}{100}$ 43. 3 45. 24

47. 4 49. 9 51. $\frac{3}{10}$; numerator should be 3, not 4.

53. a. b. Either *larger* or *greater* will work. 55. 133 in²

Number x	Square x^2
1	1
2	4
3	9
4	16
5	25
6	36
7	49
8	64

57. $\frac{4}{9}$ ft² 59. 3 yd² 61. 138 in² 63. a. $\frac{5}{4}$ in. b. $\frac{7}{10}$ in. c. 3 in. 65. 126,500 ft³ 67. About 8 million 69. 846
 71. Canada: > 1,668,000 Venezuela: 1,251,000 Iraq: < 834,000 73. $\frac{1}{27}$ 75. $\frac{8}{27}$ 77. 2 79. 3 81. 2 83. 5 85. 3
 87. $\frac{4}{3}$ 89. 3 91. $\frac{1}{7}$ 93. 100 95. 9 97. 18 99. 8

Problem Set 2.4

1. $\frac{15}{4}$ 3. $\frac{4}{3}$ 5. 9 7. 200 9. $\frac{3}{8}$ 11. 1 13. $\frac{49}{64}$ 15. $\frac{3}{4}$ 17. $\frac{15}{16}$ 19. $\frac{1}{6}$ 21. 6 23. $\frac{5}{18}$ 25. $\frac{9}{2}$
 27. $\frac{2}{9}$ 29. 9 31. $\frac{4}{5}$ 33. $\frac{15}{22}$ 35. 40 37. $\frac{7}{10}$ 39. 13 41. 12 43. 186 45. 646 47. $\frac{3}{5}$ 49. 40
 51. $3 \cdot 5 = 15$; $3 \div \frac{1}{5} = 3 \cdot \frac{5}{1} = 15$ 53. 490 feet 55. 14 blankets 57. 6 59. 28 cartons 61. 20 lots
 63. $\frac{3}{6}$ 65. $\frac{9}{6}$ 67. $\frac{4}{12}$ 69. $\frac{8}{12}$ 71. $\frac{14}{30}$ 73. $\frac{18}{30}$ 75. $\frac{12}{24}$ 77. $\frac{4}{24}$ 79. $\frac{15}{36}$ 81. $\frac{9}{36}$

83.

Number	Rounded to the Nearest		
	Ten	Hundred	Thousand
74	70	100	0
747	750	700	1,000
474	470	500	0

85. b

Problem Set 2.5

1. $\frac{2}{3}$ 3. $\frac{1}{4}$ 5. $\frac{1}{2}$ 7. $\frac{1}{3}$ 9. $\frac{3}{2}$ 11. $\frac{x+6}{2}$ 13. $\frac{4}{5}$ 15. $\frac{10}{3}$

17.

First Number a	Second Number b	The Sum of a and b $a + b$
$\frac{1}{2}$	$\frac{1}{3}$	$\frac{5}{6}$
$\frac{1}{3}$	$\frac{1}{4}$	$\frac{7}{12}$
$\frac{1}{4}$	$\frac{1}{5}$	$\frac{9}{20}$
$\frac{1}{5}$	$\frac{1}{6}$	$\frac{11}{30}$

19.

First Number a	Second Number b	The Sum of a and b $a + b$
$\frac{1}{12}$	$\frac{1}{2}$	$\frac{7}{12}$
$\frac{1}{12}$	$\frac{1}{3}$	$\frac{5}{12}$
$\frac{1}{12}$	$\frac{1}{4}$	$\frac{4}{12} = \frac{1}{3}$
$\frac{1}{12}$	$\frac{1}{6}$	$\frac{3}{12} = \frac{1}{4}$

21. $\frac{7}{9}$ 23. $\frac{7}{3}$ 25. $\frac{7}{4}$ 27. $\frac{7}{6}$ 29. $\frac{9}{20}$ 31. $\frac{7}{10}$ 33. $\frac{19}{24}$ 35. $\frac{13}{60}$ 37. $\frac{31}{100}$ 39. $\frac{67}{144}$ 41. $\frac{29}{35}$ 43. $\frac{949}{1,260}$
 45. $\frac{13}{420}$ 47. $\frac{41}{24}$ 49. $\frac{53}{60}$ 51. $\frac{5}{4}$ 53. $\frac{88}{9}$ 55. $\frac{3}{4}$ 57. $\frac{1}{4}$ 59. 19 61. 3 63. $\frac{160}{63}$ 65. $\frac{5}{8}$ 67. $\frac{7}{20}$ inch
 69. $\frac{9}{2}$ pints 71. $\frac{61}{400}$ 73. $\frac{5}{3}$ hours 75. $\frac{1}{3}$ 77. 10 lots 79. $\frac{3}{2}$ in. 81. $\frac{9}{5}$ ft 83. $\frac{7}{3}$ 85. 3 87. 59 89. $\frac{16}{8}$
 91. $\frac{8}{8}$ 93. $\frac{11}{4}$ 95. $\frac{17}{8}$ 97. $\frac{9}{8}$ 99. 2 R 3 101. 8 R 16 103. $\frac{9}{10}$ 105. 8 107. 3 109. 2 111. $\frac{2}{7}$ 113. $\frac{15}{22}$

Problem Set 2.6

1. $\frac{14}{3}$ 3. $\frac{21}{4}$ 5. $\frac{13}{8}$ 7. $\frac{47}{3}$ 9. $\frac{104}{21}$ 11. $\frac{427}{33}$ 13. $1\frac{1}{8}$ 15. $4\frac{3}{4}$ 17. $4\frac{5}{6}$ 19. $3\frac{1}{4}$ 21. $4\frac{1}{27}$ 23. $28\frac{8}{15}$
 25. $\frac{11}{4}$ 27. $\frac{37}{8}$ 29. $\frac{14}{5}$ 31. $\frac{9}{40}$ 33. $\frac{3}{8}$ 35. $\frac{32}{35}$ 37. $\frac{4}{7}$ 39. $\frac{4}{5}$ 41. 9 43. 98

Problem Set 2.7

1. $5\frac{1}{10}$ 3. $13\frac{2}{3}$ 5. $6\frac{93}{100}$ 7. $5\frac{5}{6}$ 9. $9\frac{3}{4}$ 11. $3\frac{1}{5}$ 13. $12\frac{1}{2}$ 15. $9\frac{9}{20}$ 17. $\frac{32}{45}$ 19. $1\frac{2}{3}$ 21. 4 23. $4\frac{3}{10}$ 25. $\frac{1}{10}$
 27. $3\frac{1}{5}$ 29. $2\frac{1}{8}$ 31. $7\frac{1}{2}$ 33. $\frac{11}{13}$ 35. $5\frac{1}{2}$ cups 37. $1\frac{1}{3}$ 39. 2,687 $\frac{1}{5}$ cents 41. $163\frac{3}{4}$ mi 43. $6\frac{758}{1,207}$ shares
 45. $\$2,516\frac{2}{3}$ 47. $182\frac{9}{16}$ ft² 49. $3\frac{7}{16}$ mi²

51. Can 1 contains $157\frac{1}{2}$ calories, whereas Can 2 contains $87\frac{1}{2}$ calories. Can 1 contains 70 more calories than Can 2.

53. Can 1 contains 1,960 milligrams of sodium, whereas Can 2 contains 1,050 milligrams of sodium. Can 1 contains 910 more milligrams of sodium than Can 2.

55. a. $\frac{10}{15}$ b. $\frac{3}{15}$ c. $\frac{9}{15}$ d. $\frac{5}{15}$ 57. a. $\frac{5}{20}$ b. $\frac{12}{20}$ c. $\frac{18}{20}$ d. $\frac{2}{20}$ 59. $\frac{13}{15}$ 61. $\frac{14}{9} = 1\frac{5}{9}$ 63. $\frac{3}{5}$ 65. $\frac{3}{14}$ 67. $2\frac{1}{4}$
 69. $3\frac{1}{16}$

Problem Set 2.8

1. $5\frac{4}{5}$ 3. $12\frac{2}{5}$ 5. $3\frac{4}{9}$ 7. 12 9. $1\frac{3}{8}$ 11. $14\frac{1}{6}$ 13. $4\frac{1}{12}$ 15. $2\frac{1}{12}$ 17. $26\frac{7}{12}$ 19. 12 21. $2\frac{1}{2}$ 23. $8\frac{6}{7}$ 25. $3\frac{3}{8}$
 27. $10\frac{4}{15}$ 29. $2\frac{1}{15}$ 31. $21\frac{17}{20}$ 33. 9 35. $18\frac{1}{10}$ 37. 14 39. 17 41. $24\frac{1}{24}$ 43. $27\frac{6}{7}$ 45. $6\frac{1}{4}$ 47. $9\frac{7}{10}$ 49. $5\frac{1}{2}$
 51. $\frac{2}{3}$ 53. $1\frac{11}{12}$ 55. $3\frac{11}{12}$ 57. $5\frac{19}{20}$ 59. $5\frac{1}{2}$ 61. $\frac{13}{24}$ 63. $3\frac{1}{2}$ 65. $\$2\frac{1}{2}$ 67. \$250 69. \$300
 71. a. NFL: $P = 306\frac{2}{3}$ yd; Canadian: $P = 350$ yd; Arena: $P = 156\frac{2}{3}$ yd
 b. NFL: $A = 5,333\frac{1}{3}$ sq yd; Canadian: $A = 7,150$ sq yd; Arena: $A = 1,416\frac{2}{3}$ sq yd
 73. $31\frac{1}{6}$ in. 75. $4\frac{63}{64}$ 77. 2 79. $\frac{11}{8} = 1\frac{3}{8}$ 81. $3\frac{5}{8}$ 83. 17 85. 14 87. 104 89. 96 91. 40 93. $3\frac{1}{2}$
 95. $5\frac{29}{40}$ 97. $34\frac{4}{5}$

Problem Set 2.9

1. 7 3. 7 5. 2 7. 35 9. $\frac{7}{8}$ 11. $8\frac{1}{3}$ 13. $\frac{11}{36}$ 15. $3\frac{2}{3}$ 17. $6\frac{3}{8}$ 19. $4\frac{5}{12}$ 21. $\frac{8}{9}$ 23. $\frac{1}{2}$ 25. $1\frac{1}{10}$ 27. 5
 29. $\frac{3}{5}$ 31. $\frac{7}{11}$ 33. 5 35. $\frac{17}{28}$ 37. $1\frac{7}{16}$ 39. $\frac{13}{22}$ 41. $\frac{5}{22}$ 43. $\frac{15}{16}$ 45. $1\frac{5}{17}$ 47. $\frac{3}{29}$ 49. $1\frac{34}{67}$ 51. $\frac{346}{441}$
 53. $5\frac{2}{5}$ 55. 8 57. 5 miles² 59. $115\frac{2}{3}$ yd 61. $\frac{2}{3}$ 63. $\frac{1}{6}$ 65. $\frac{1}{7}$ 67. $9\frac{7}{9}$

Chapter 2 Review

1. $\frac{3}{4}$ 3. $\frac{11}{7}$ 5. 1 7. $\frac{8}{21}$ 9. $\frac{2}{3}$ 11. $\frac{3}{8}$ 13. $\frac{1}{2}$ 15. $\frac{7}{2}$ 17. $\frac{1}{36}$ 19. $\frac{29}{8}$ 21. $3\frac{3}{4}$ 23. $\frac{8}{13}$ 25. 12
 27. $17\frac{11}{12}$ 29. $11\frac{2}{3}$ 31. 5 33. $\frac{1}{2}$ 35. 20 items 37. 9 39. $1\frac{7}{8}$ cups 41. $10\frac{1}{2}$ tablespoons
 43. Area = $25\frac{1}{5}$ ft²; perimeter = 28 ft

Chapter 2 Cumulative Review

1. 6,317 3. $\frac{81}{169}$ 5. $\frac{1}{4}$ 7. $\frac{4}{11}$ 9. 24 11. $4\frac{8}{21}$ 13. 625 15. $\frac{11}{12}$ 17. $\frac{4}{9}$ 19. 9 21. 2,274 23. $\frac{81}{125}$
 25. 1090 27. $\frac{9x}{39x}$ 29. $\frac{46}{45} = 1\frac{1}{45}$ 31. 1,561,471 babies

Chapter 2 Test

1. $\frac{2}{5}$ 2. $\frac{3}{8}$ 3. $\frac{23}{5}$ 4. $\frac{7}{10}$ 5. $\frac{47}{36}$ 6. $9\frac{17}{24}$ 7. $3\frac{2}{3}$ 8. $5\frac{2}{5}$ 9. $\frac{1}{3}$ 10. $\frac{1}{9}$ 11. $\frac{5}{16}$ 12. $\frac{5}{6}$ 13. $2\frac{1}{2}$
 14. $\frac{1}{4}$ 15. $\frac{3}{8}$ 16. $4\frac{1}{2}$ 17. $6\frac{2}{3}$ 18. $2\frac{13}{18}$ 19. $16\frac{3}{4}$ 20. $9\frac{11}{12}$ 21. $\frac{1}{2}$ 22. $1\frac{2}{3}$ 23. $12\frac{3}{8}$ 24. $16\frac{3}{4}$ 25. $\frac{1}{6}$
 26. $3\frac{3}{4}$ 27. $\frac{1}{10}$ 28. $\frac{7}{10}$ 29. $27\frac{1}{2}$ in. 30. Perimeter = $23\frac{1}{3}$ ft 31. $8\frac{1}{5}$ in

Chapter 2 Glimpse of Algebra

1. $\frac{x+3}{4}$ 3. $\frac{x+2}{5}$ 5. $\frac{7x}{8}$ 7. $\frac{2}{x}$ 9. $\frac{3x+2}{6}$ 11. $\frac{2x-1}{4}$ 13. $\frac{12+3x}{4x}$ 15. $\frac{4x-5}{5x}$ 17. $\frac{7x+24}{12x}$ 19. $\frac{3x+4}{4x}$
 21. $\frac{12+x}{4}$ 23. $\frac{10-x}{2}$ 25. $\frac{28-a}{7}$ 27. $\frac{5+2a}{5}$ 29. $\frac{8x+3}{x}$ 31. $\frac{2x-5}{x}$ 33. $\frac{4x+3}{4}$ 35. $\frac{11x}{9}$ 37. $\frac{3a}{7}$ 39. $\frac{5x}{4}$

Chapter 3

Pretest for Chapter 3

1. Four and thirteen thousandths 2. $12\frac{9}{100}$ 3. 0.34 4. 0.42 5. 0.04, 0.4, 0.41, 0.45, 0.5, 0.51 6. $\frac{17}{20}$ 7. 15.41
 8. 5.21 9. 9.72 10. 567.8 11. 4.12 12. 8.7

Getting Ready for Chapter 3

1. 407,927 2. 25,576 3. 436 4. 663 5. 132,980 6. 728 7. 12,768 8. 96 9. 1,848 10. 298 R 14 11. 74
 12. $\frac{1}{16}$ 13. $\frac{3}{10}$ 14. $1\frac{41}{64}$ 15. 9,200 16. $\frac{19}{50}$ 17. $2^4 \cdot 3$ 18. $2^2 \cdot 3^2 \cdot 5$

Problem Set 3.1

1. Three tenths 3. Fifteen thousandths 5. Three and four tenths 7. Fifty-two and seven tenths 9. $405\frac{36}{100}$ 11. $9\frac{9}{1,000}$
 13. $1\frac{234}{1,000}$ 15. $\frac{305}{100,000}$ 17. Tens 19. Tenths 21. Hundred thousandths 23. Ones 25. Hundreds 27. 0.55 29. 6.9
 31. 11.11 33. 100.02 35. 3,000.003 37. a. < b. > 39. 0.002 0.005 0.02 0.025 0.05 0.052 41. 7.451, 7.54
 43. $\frac{1}{4}$ 45. $\frac{1}{8}$ 47. $\frac{5}{8}$ 49. $\frac{7}{8}$ 51. 9.99 53. 10.05 55. 0.05 57. 0.01

	Number	Rounded to the Nearest			
		Whole Number	Tenth	Hundredth	Thousandth
59.	47.5479	48	47.5	47.55	47.548
61.	0.8175	1	0.8	0.82	0.818
63.	0.1562	0	0.2	0.16	0.156
65.	2,789.3241	2,789	2,789.3	2,789.32	2,789.324
67.	99.9999	100	100.0	100.00	100.000

69. Hundredths 71.

PRICE OF 1 GALLON OF REGULAR GASOLINE	
Date	Price (Dollars)
5/5/08	3.903
5/12/08	3.919
5/19/08	3.952
5/26/08	4.099

73. Three and eleven hundredths; two and five tenths

75. Fifteen hundredths 77. $6\frac{31}{100}$ 79. $6\frac{23}{50}$
 81. $18\frac{123}{1000}$ 83. $\frac{3}{16} < \frac{3}{10} < \frac{3}{8} < \frac{3}{4}$ 85. < 87. >

Problem Set 3.2

1. 6.19 3. 1.13 5. 6.29 7. 9.042 9. 8.021 11. 11.7843 13. 24.343 15. 24.111 17. 258.5414 19. 666.66
 21. 11.11 23. 3.57 25. 4.22 27. 120.41 29. 44.933 31. 7.673 33. 530.865 35. 27.89 37. 35.64
 39. 411.438 41. 6 43. 1 45. 3.1 47. 5.9 49. 3.272 51. 4.001 53. 1.47 seconds 55. \$1,571.10 57. 4.5 in.
 59. \$5.43 61. 6.42 sec 63. 2 in. 65. \$3.25; three \$1 bills and a quarter 67. 3.25 69. $\frac{3}{100}$ 71. $\frac{51}{10,000}$ 73. $1\frac{1}{2}$
 75. 1,400 77. $\frac{3}{20}$ 79. $\frac{147}{1,000}$ 81. 132,980 83. 2,115 85. 12 87. 16 89. 20 91. 68

Problem Set 3.3

1. 0.28 3. 0.028 5. 0.0027 7. 0.78 9. 0.792 11. 0.0156 13. 24.29821 15. 0.03 17. 187.85 19. 0.002
 21. 27.96 23. 0.43 25. 49,940 27. 9,876,540 29. 1.89 31. 0.0025 33. 5.1106 35. 7.3485 37. 4.4
 39. 2.074 41. 3.58 43. 187.4 45. 116.64 47. 20.75 49. 371.34 meters 51. 0.126
 53. Moves it two places to the right 55. \$1,381.38 57. a. 83.21 mm b. 551.27 mm² c. 1,102.53 mm³ 59. 1.18 in²
 61. C = 25.12 in.; A = 50.24 in² 63. C = 24,492 mi 65. 168 in. 67. 100.48 ft³ 69. 50.24 ft³ 71. 1,879 73. 1,516 R 4
 75. 298 77. 34.8 79. 49.896
 81. 825 83. $\frac{3}{10} < \frac{2}{5} < \frac{1}{2} < \frac{4}{5}$ 85. $\frac{3}{2} < 1\frac{2}{3} < 1\frac{5}{6} < \frac{25}{12}$ 87. No

Problem Set 3.4

1. 19.7 3. 6.2 5. 5.2 7. 11.04 9. 4.8 11. 9.7 13. 2.63 15. 4.24 17. 2.55 19. 1.35 21. 6.5 23. 9.9
 25. 0.05 27. 89 29. 2.2 31. 1.35 33. 16.97 35. 0.25 37. 2.71 39. 11.69 41. 3.98 43. 5.98 45. 0.77778
 47. 307.20607 49. 0.70945 51. 3,472 square miles 53. 7.5 mi 55. \$6.65/hr 57. 22.4 mi 59. 5 hr 61. 7 min
 63.

Rank	Name	Number of Events	Total Earnings	Average per Event
1.	Lorena Ochoa	25	\$1,838,616	\$73,545
2.	Annika Sorenstam	13	\$1,295,585	\$99,660
3.	Paula Creamer	24	\$891,804	\$37,159
4.	Seon Hwa Lee	28	\$656,313	\$23,440
5.	Jeong Jang	27	\$642,320	\$23,790

65. 2.73 67. 0.13 69. $\frac{3}{4}$ 71. $\frac{2}{3}$ 73. $\frac{3}{8}$ 75. $\frac{19}{50}$ 77. $\frac{6}{10}$ 79. $\frac{60}{100}$ 81. $\frac{12}{15}$ 83. $\frac{60}{15}$ 85. $\frac{18}{15}$ 87. 0.75
 89. 0.875 91. 19 93. 3

Problem Set 3.5

1. 0.125 3. 0.625

5.

Fraction	$\frac{1}{4}$	$\frac{2}{4}$	$\frac{3}{4}$	$\frac{4}{4}$
Decimal	0.25	0.5	0.75	1

 7.

Fraction	$\frac{1}{6}$	$\frac{2}{6}$	$\frac{3}{6}$	$\frac{4}{6}$	$\frac{5}{6}$	$\frac{6}{6}$
Decimal	$0.1\bar{6}$	$0.\bar{3}$	0.5	$0.\bar{6}$	$0.8\bar{3}$	1

 9. 0.48 11. 0.4375 13. 0.92

15. 0.27 17. 0.09 19. 0.28

21.

Decimal	0.125	0.250	0.375	0.500	0.625	0.750	0.875
Fraction	$\frac{1}{8}$	$\frac{1}{4}$	$\frac{3}{8}$	$\frac{1}{2}$	$\frac{5}{8}$	$\frac{3}{4}$	$\frac{7}{8}$

 23. $\frac{3}{20}$ 25. $\frac{2}{25}$ 27. $\frac{3}{8}$ 29. $5\frac{3}{5}$ 31. $5\frac{3}{50}$ 33. $1\frac{11}{50}$

35. 2.4 37. 3.98 39. 3.02 41. 0.3 43. 0.072 45. 0.8 47. 1 49. 0.25 51. $4\frac{4}{10} = 4\frac{2}{5}$ 53. \$16.22
 55. \$52.66 57. 9 in.

59.

CHANGE IN STOCK PRICE		
Date	Gain (\$)	As a Decimal (\$) (To the Nearest hundredth)
Monday, March 6, 2000	$\frac{3}{4}$	0.75
Tuesday, March 7, 2000	$\frac{9}{16}$	0.56
Wednesday, March 8, 2000	$\frac{3}{32}$	0.09
Thursday, March 9, 2000	$\frac{7}{32}$	0.22
Friday, March 10, 2000	$\frac{1}{16}$	0.06

 61. 104.625 calories 63. \$10.38

65. Yes 67. 33.49 m³ 69. 226.1 ft³ 71. 22.28 in² 73. 852 75. 20,675

Chapter 3 Review

1. Thousandths 3. 37.0042 5. 98.77 7. 5.816 9. 36.381 11. 7.65 13. 7.09 15. 5.729 17. 1.008 19. 34.1
 21. 4.16 23. 0.875 25. $\frac{141}{200}$ 27. $14\frac{1}{8}$ 29. 2.42 31. 79 33. 1.224 35. 0.4

Chapter 3 Cumulative Review

1. 4,079 3. 16,072 5. 6.22 7. 55.728 9. $\frac{1}{2}$ 11. $15\frac{3}{4}$ 13. 20 15. 9 17. $3(13 + 4) = 51$ 19. False 21. $\frac{7}{9}$
 23. 0.94 25. $14\frac{7}{8}$ 27. $8\frac{1}{4}$ cups 29. 399.5 yds

Chapter 3 Test

1. Five and fifty-three thousandths 2. Thousandths 3. 17.0406 4. 46.75 5. 8.18 6. 6.056 7. 35.568 8. 8.72 9. 11.36
 10. 8.907 11. 1.568 12. 0.24 13. 0.92 14. $\frac{14}{25}$ 15. 14.664 16. 4.69 17. 17.129 18. 0.26 19. 6.48 20. 10.784
 21. \$11.53 22. \$24.47 23. \$6.55 24. \$285.83

A Glimpse of Algebra

1. $6x^2 + 9x + 8$ 3. $5a + 8$ 5. $9x + 6$ 7. $5y^3 + 5y^2 + 9y + 7$ 9. $6x^2 + 4x + 5$ 11. $3a^2 + 7a + 6$ 13. $5x^3 + 7x^2 + 16x + 13$

Chapter 4**Pretest for Chapter 4**

1. $\frac{3}{5}$ 2. $\frac{8}{3}$ 3. $\frac{5}{7}$ 4. $\frac{16}{23}$ 5. 62 mi/hr 6. 15¢ 7. 10 8. 5 9. $\frac{14}{3}$ 10. 12 11. 720 mi 12. \$54.75 13. 8
 14. 50

Getting Ready for Chapter 4

1. $\frac{1}{3}$ 2. 2 3. 0.25 4. 0.125 5. 65 6. 1.2 7. 297.5 8. 4 9. 8 10. 12 11. 62.5 12. 0.695 13. 3.98
 14. $\frac{3}{2}$ 15. 8.7 16. 6.5

Problem Set 4.1

1. $\frac{4}{3}$ 3. $\frac{16}{3}$ 5. $\frac{2}{5}$ 7. $\frac{1}{2}$ 9. $\frac{3}{1}$ 11. $\frac{7}{6}$ 13. $\frac{7}{5}$ 15. $\frac{5}{7}$ 17. $\frac{8}{5}$ 19. $\frac{1}{3}$ 21. $\frac{1}{10}$ 23. $\frac{3}{25}$ 25. a. $\frac{1}{2}$ b. $\frac{1}{3}$ c. $\frac{2}{3}$
 27. $\frac{11}{14}$ 29. $\frac{20 \text{ mg}}{1 \text{ mL}}$ 31. $\frac{75 \text{ mg}}{2 \text{ mL}}$ 33. a. $\frac{13}{8}$ b. $\frac{1}{4}$ c. $\frac{3}{8}$ d. $\frac{13}{3}$ 35. a. $\frac{6}{1}$ b. $\frac{5}{1}$ c. $\frac{4}{1}$ d. $\frac{3}{1}$ e. $\frac{4}{1}$ 37. a. $\frac{44}{39}$ b. $\frac{1}{1}$ c. $\frac{6}{7}$
 39. 18 41. 62.5 43. 0.615 45. 176 47. 184 49. 0.087 51. 0.048 53. $\frac{5}{8}$ 55. $\frac{11}{2} = 5\frac{1}{2}$ 57. $\frac{5}{14}$ 59. 96

Problem Set 4.2

1. 55 mi/hr 3. 84 km/hr 5. 0.2 gal/sec 7. 14 L/min 9. 19 mi/gal 11. $4\bar{3}$ mi/L 13. The Midwest 15. 480 mL/hr
 17. 4.95¢ per oz 19. 34.7¢ per diaper, 31.6¢ per diaper; Happy Baby 21. \$1.00 = 0.646 Euros 23. \$1.00 = 0.509 pounds
 25. The 18 oz box is the best buy at \$0.277 per ounce. 27. 54.03 mi/hr 29. 9.3 mi/gal 31. \$64 33. \$16,000 35. $n = 6$
 37. $n = 4$ 39. $n = 4$ 41. $n = 65$ 43. $\frac{7}{8}$ 45. $\frac{1}{40}$ 47. $\frac{1}{60}$ 49. $\frac{11}{6} = 1\frac{5}{6}$ 51. The 100 ounce size is the better value.

Problem Set 4.3

1. 35 3. 18 5. 14 7. n 9. y 11. $n = 2$ 13. $x = 7$ 15. $y = 7$ 17. $n = 8$ 19. $a = 8$ 21. $x = 2$ 23. $y = 1$
 25. $a = 6$ 27. $n = 5$ 29. $x = 3$ 31. $n = 7$ 33. $y = 1$ 35. $y = 9$ 37. $n = 3\frac{1}{2}$ 39. $x = 3\frac{1}{2}$ 41. $a = 2\frac{2}{5}$ 43. $y = \frac{4}{7}$
 45. $y = \frac{10}{13}$ 47. $x = 2\frac{1}{2}$ 49. $n = 1\frac{1}{2}$ 51. $\frac{3}{4}$ 53. 1.2 55. 6.5 57. 0.75 59. 5.5 61. 0.03 63. 0.375 65. $\frac{17}{50}$
 67. $2\frac{2}{5}$ 69. $1\frac{3}{4}$ 71. $\frac{7}{8}$

Problem Set 4.4

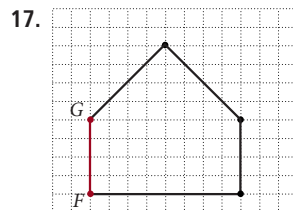
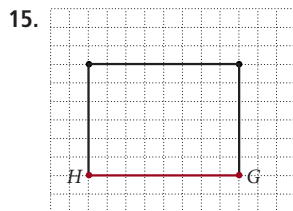
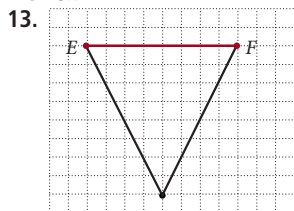
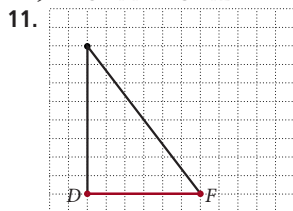
1. Means: 3, 5; extremes: 1, 15; products: 15 3. Means: 25, 2; extremes: 10, 5; products: 50 5. Means: $\frac{1}{2}$, 4; extremes: $\frac{1}{3}$, 6; products: 2
 7. Means: 5, 1; extremes: 0.5, 10; products: 5 9. 10 11. $\frac{12}{5}$ 13. $\frac{3}{2}$ 15. $\frac{10}{9}$ 17. 7 19. 14 21. 18 23. 6 25. 40
 27. 50 29. 108 31. 3 33. $\frac{2}{5}$ 35. $\frac{1}{4}$ 37. 108 39. 65 41. 41 43. 108 45. 20 47. 297.5 49. 450
 51. 5 53. Tens 55. 26.516 57. 0.39

Section 4.5

1. 329 mi 3. 360 points 5. 15 pt 7. 427.5 mi 9. 900 eggs 11. 35.5 mg/pill 13. 5.5 mL 15. 2.5 tablets
 17. 435 in. = 36.25 ft 19. \$313.50 21. 265 g 23. 91.3 L 25. 60,113 people 27. 78 teachers 29. 850 meters
 31. 15 mL 33. 900 mg/day 35. 2 37. 147 39. 20 41. 147 43. 1.35 45. 3.816 47. 4 49. 160 51. 183.79

Section 4.6

1. 9 3. 14 5. 12 7. 25 9. 32



19. 45 in. 21. 960 pixels 23. 1,440 pixels 25. 57 ft 27. 177 ft 29. 13.99 31. 40.999
 33. 0.10545 35. 18
37. $4\frac{1}{6}$ 39. 4 41. a. $\frac{1}{2}$ b. 18 rectangles should be shaded. c. $\frac{1}{3}$

Chapter 4 Review

1. $\frac{3}{10}$ 3. $\frac{3}{4}$ 5. $\frac{7}{5}$ 7. $\frac{1}{2}$ 9. $\frac{1}{3}$ 11. $\frac{9}{2}$ 13. $\frac{1}{4}$ 15. 19 mi/gal
 17. 9.05¢/ounce; 8.41¢/ounce; 32-ounce carton is the better buy. 19. 49 21. $\frac{1}{10}$ 23. 1,500 mL 25. 5 weeks 27. 3 tablets
 29. 9 31. 160

Chapter 4 Cumulative Review

1. 10,522 3. 18 5. $506\frac{3}{31}$ 7. 47 9. 74 11. 310 13. 71.48 15. 4.5 17. 80 19. $\frac{25}{42}$ 21. 25
 23. $P = 42$ in.; $A = 72$ in² 25. $x = 16$ cm 27. $80\frac{9}{16}$ in. 29. 150 sections 31. $\frac{1}{3}$

Chapter 4 Test

1. $\frac{4}{3}$ 2. $\frac{9}{10}$ 3. $\frac{3}{2}$ 4. $\frac{3}{10}$ 5. $\frac{3}{5}$ 6. $\frac{24}{5}$ 7. $\frac{6}{25}$ 8. 23 mi/gal
 9. 16-ounce can: 16.2¢/ounce; 12-ounce can: 15.8¢/ounce; 12-ounce can is the better buy 10. 36 11. 8 12. 24 hits
 13. 135 mi 14. $h = 16$ 15. 27 mg 16. 33.15 mg 17. 1,053 students

A Glimpse of Algebra

1. $x^2 + 6x + 8$ 3. $6x^2 + 13x + 6$ 5. $21x^2 + 34x + 8$ 7. $x^2 + 7x + 10$ 9. $2x^2 + 11x + 12$ 11. $14x^2 + 41x + 15$
 13. $9x^2 + 12x + 4$ 15. $4a^2 + 9a + 5$ 17. $42y^2 + 111y + 72$ 19. $8 + 24x + 18x^2$

Chapter 5

Pretest for Chapter 5

1. 0.68 2. 0.02 3. 0.215 4. 39% 5. 38.6% 6. 398% 7. $\frac{33}{100}$ 8. $\frac{9}{20}$ 9. $\frac{17}{200}$ 10. 67% 11. 80% 12. 225%
 13. 1.2 14. 15% 15. 50

Getting Ready for Chapter 5

1. 141.44 2. 225 3. 1,477,432 4. $\frac{13}{40}$ 5. 20 6. 489 7. 9.45 8. 0.352 9. 0.0362 10. 117.2 11. 4
 12. $\frac{9}{25}$ 13. $\frac{9}{200}$ 14. $\frac{65}{2}$ 15. 0.375 16. $0.41\bar{6}$ 17. 2.5 18. 62.5 19. 15,300 20. 2,976.74

Section 5.1

1. $\frac{20}{100}$ 3. $\frac{60}{100}$ 5. $\frac{24}{100}$ 7. $\frac{65}{100}$ 9. 0.23 11. 0.92 13. 0.09 15. 0.034 17. 0.0634 19. 0.009 21. 23% 23. 92%
 25. 45% 27. 3% 29. 60% 31. 80% 33. 27% 35. 123% 37. $\frac{3}{5}$ 39. $\frac{3}{4}$ 41. $\frac{1}{25}$ 43. $\frac{53}{200}$ 45. $\frac{7,187}{10,000}$
 47. $\frac{3}{400}$ 49. $\frac{1}{16}$ 51. $\frac{1}{3}$ 53. 50% 55. 75% 57. $33\frac{1}{3}\%$ 59. 80% 61. 87.5% 63. 14% 65. 325% 67. 150%
 69. 48.8% 71. a. 0.506 b. 0.527 c. 0.537 73. a. $\frac{27}{50}, \frac{7}{25}, \frac{3}{20}, \frac{3}{100}$ b. 0.54, 0.28, 0.15, 0.03 c. About two times as likely
 75. 78.4% 77. 11.8% 79. 72.2% 81. 18.5 83. 10.875 85. 0.5 87. 62.5 89. 0.5 91. 0.125 93. 0.625
 95. 0.0625 97. 0.3125 99. 2 101. 2 103. 2 105. 2

Section 5.2

1. 8 3. 24 5. 20.52 7. 7.37 9. 50% 11. 10% 13. 25% 15. 75% 17. 64 19. 50 21. 925 23. 400 25. 5.568
 27. 120 29. 13.72 31. 22.5 33. 50% 35. 942.684 37. 97.8 39. What number is 25% of 350?
 41. What percent of 24 is 16? 43. 46 is 75% of what number? 45. 4.8% calories from fat; healthy
 47. 50% calories from fat; not healthy 49. 0.80 51. 0.76 53. 48 55. 0.25 57. 0.5 59. $\frac{5}{8}, \frac{3}{4}, \frac{7}{8}$ 61. $\frac{1}{4}$ 63. 0.25
 65. 0.75 67. 0.125 69. 0.375 71. $\frac{1}{8}, \frac{1}{4}, \frac{3}{8}, \frac{1}{2}, \frac{5}{8}, \frac{3}{4}, \frac{7}{8}$

Section 5.3

1. 70% 3. 84% 5. 45 mL 7. 18.2 acres for farming; 9.8 acres are not available for farming 9. \$11.20
 11. Bush 286; Kerry 251 13. 34,266,960 15. 3,000 students 17. 400 students 19. 1,664 female students 21. 31.25%
 23. 50% 25. About 19.2 million 27. 33 29. 8,685 31. 136 33. 0.05 35. 15,300 37. 0.15 39. $\frac{1}{5}$ 41. $\frac{5}{12}$
 43. $\frac{3}{4}$ 45. $\frac{2}{3}$ 47. 39.4% 49. 94 hits 51. At least 16 hits

Section 5.4

1. \$52.50 3. \$2.70; \$47.70 5. \$150; \$156 7. 5% 9. \$420.90 11. \$2,820 13. \$200 15. 14% 17. 26.9%
 19. 62.8 cents or \$0.628¢ 21. \$560 23. \$11.93 25. 4.5% 27. \$3,995 29. 1,100 31. 75 33. 0.16 35. 4
 37. 396 39. 415.8 41. $\frac{1}{2}$ 43. $2\frac{2}{3}$ 45. $1\frac{1}{2}$ 47. $4\frac{1}{2}$

Section 5.5

1. \$24,610 3. \$7,020 5. \$13,200 7. 10% 9. 20% 11. 21% 13. \$45; \$255 15. \$381.60 17. 13.9% 19. 16%
 21. 21.8 in. to 23.2 in. 23. \$46,595.88 25. a. 51.9% b. 7.8% 27. 140 29. 4 31. 152.25 33. 3,434.7 35. 10,150
 37. 10,456.78 39. 2,140 41. 3,210 43. 1 45. $\frac{3}{4}$ 47. $1\frac{5}{12}$ 49. 6

Section 5.6

1. \$2,160 3. \$665 5. \$8,560 7. \$2,160 9. \$5 11. \$813.33 13. \$406.34 15. \$5,618 17. \$8,407.56
 19. \$974.59 21. a. \$13,468.55 b. \$13,488.50 c. \$12,820.37 d. \$12,833.59 23. 30% 25. $16\frac{2}{3}\%$ 27. 108 29. 162
 31. 8 33. 3 35. $\frac{1}{2}$ 37. $\frac{3}{8}$ 39. $\frac{2}{3}$ 41. $\frac{3}{2} = 1\frac{1}{2}$ 43. $\frac{1}{12}$ 45. $1\frac{1}{4}$ 47. $\frac{16}{21}$ 49. $\frac{64}{525}$ 51. \$30.78
 53. Percent increase in production cost: *Star Wars* 1 to 2 = 63.6%; *Star Wars* 2 to 3 = 80.6%; *Star Wars* 3 to 4 = 253.8%

Chapter 5 Review

1. 0.35 3. 0.05 5. 95% 7. 49.5% 9. $\frac{3}{4}$ 11. $1\frac{9}{20}$ 13. 30% 15. $66\frac{2}{3}\%$ 17. 16.8 19. 50% 21. 80 23. 75%
 25. \$477 27. \$4.93 29. 55.4% increase 31. \$60; 20% off

Chapter 5 Cumulative Review

1. 7,714 3. 45,084 5. 33 7. $\frac{125}{216}$ 9. 1.322 11. $\frac{1}{6}$ 13. $\frac{23}{24}$ 15. 42 17. 6 19. $\frac{1}{4}$ 21. 648 in² 23. $\frac{23}{50}$
 25. 67 27. 20% 29. 47¢ 31. 100°C 33. 345 miles 35. P = 34 in., A = 72.25 in² 37. \$7 per hour

Chapter 5 Test

1. 0.18 2. 0.04 3. 0.005 4. 45% 5. 70% 6. 135% 7. $\frac{13}{20}$ 8. $1\frac{23}{50}$ 9. $\frac{7}{200}$ 10. 35% 11. 37.5% 12. 175%
 13. 45 14. 45% 15. 80 16. 92% 17. \$960 18. \$40; 16% off 19. \$220.50 20. \$100 21. \$2,520 22. \$1,064
 23. 2,940 people

A Glimpse of Algebra

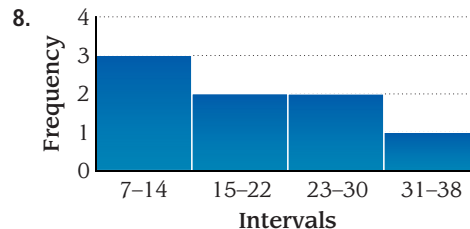
1. 9 3. 180 5. 8 7. $\frac{8}{15}$ 9. 20 11. 36 13. $\frac{17}{13} = 1\frac{4}{13}$ 15. $\frac{22}{23}$ 17. 140 19. 25 21. 3 23. 1 25. 21

Chapter 6

Pretest for Chapter 6

1. mean: 7, median: 6 2. mean: 33, median: 33 3. mean: 17.5, median: 15.5 4. mode: 6, range: 9 5. mode: 1, range: 12
 6. mode: none, range: 19 7.

Stem	Leaf
0	4
1	7, 6, 9
2	8, 7, 3
3	1



Getting Ready for Chapter 6

1. 2.1 2. 4.9 3. 7.9 4. 14.2 5. 5,169 6. 7,335 7. 347.2 8. 182.2 9. 23,126 10. 17,943 11. 216 12. 90
 13. 86.8 14. 36.44 15. 2,890.75 16. 3,588.6 17. 60% 18. 25% 19. 1.25% 20. 1.5%

Problem Set 6.1

1. 3 3. 6 5. 16,194 7. 7.5 9. 11 11. 50 13. 900 15. 3.2 17. 18 19. 87 21. 1 23. 22 25. 2.9
 27. 38 29. mean = 79.5, median = 83 31. Both are \$31,000 33. a. 78.5 b. 76 c. 76 35. \$6,868.83, \$6,993
 37. \$19,985, \$19,788 39. 62 41. \$3,190 43. \$1,530 45. a. 3,055 b. mean 47. 7

Problem Set 6.2

1.

Stem	Leaf
1	9, 8
2	4, 7, 2, 9, 0, 6
3	2, 0, 0, 1, 4

3.

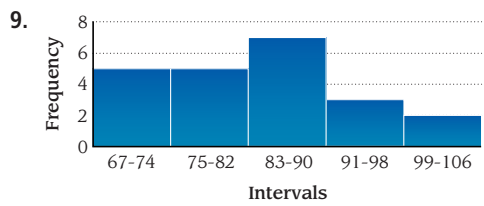
Stem	Leaf
1	6
2	7, 9
3	4, 5, 5
4	6, 8
5	2, 8, 1, 1
6	7
7	2, 6, 3
8	5, 4, 3, 6
9	4, 8

5.

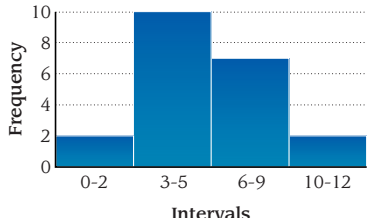
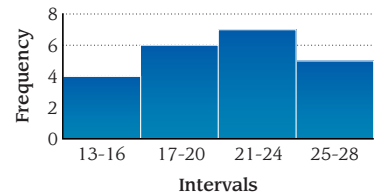
Stem	Leaf
3	9, 5, 4, 6
4	7, 7, 1, 0, 3, 8, 5, 6, 0, 2, 3
5	8, 4, 2, 3, 4, 3, 9, 8, 6, 2, 0
6	0, 1, 3, 0, 4

7.

Interval	Tally	Frequency	Relative Freq.
47-56		1	$\frac{1}{20} = 0.05$
57-66		3	$\frac{3}{20} = 0.15$
67-76		10	$\frac{10}{20} = 0.5$
77-86		5	$\frac{5}{20} = 0.25$
87-96		1	$\frac{1}{20} = 0.05$



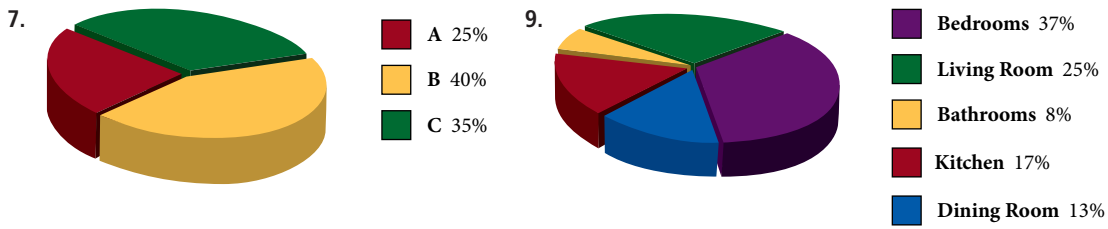
11. a. (below) b. $\frac{6}{22} = 0.27$ c. $\frac{12}{22} = 0.55$ 13. a. (below) b. 21 c. $\frac{10}{21} = 0.48$ d. $\frac{9}{21} = 0.43$ 15. a. 29 b. 36



17. Q1: 18.5 Q2: 23 Q3: 29 19. Q1: 1.3 Q2: 2.35 Q3: 3.6 21. Q1: 64 Q2: 80.5 Q3: 85 Min: 64 Max: 91
 23. $x > 75$ or $x < 75$ or $70 < x < 85$ 25. 70 27. 75 29. $x > 85$ or $x < 85$ or $75 < x < 90$ 31. 75 33. 85
 35. Q1: 2 Q2: 3.5 Q3: 4.5 Min: 1 Max: 5

Problem Set 6.3

1. a. $\frac{41}{100}$ b. $\frac{38}{41}$ c. $\frac{31}{50}$ d. $\frac{31}{19}$ 3. a. 78% b. 10% c. 18% d. 22%
 5. a. 240 people b. 960 people c. 750 people d. 1,800 people



11. $\frac{8}{3}$ or $2\frac{2}{3}$ 13. $\frac{1}{40}$ 15. $\frac{73}{20}$ or $3\frac{13}{20}$ 17. $\frac{62}{25}$ or $2\frac{12}{25}$ 19. $\frac{4}{3}$ or $1\frac{1}{3}$

Problem Set 6.4

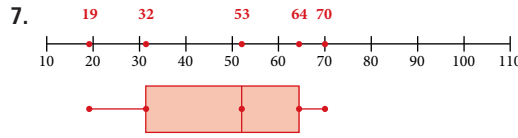
1. a. $\frac{1}{2}$ b. 0 c. 1 d. $\frac{1}{2}$ 3. a. $\frac{1}{36}$ b. $\frac{1}{18}$ c. $\frac{1}{2}$ d. $\frac{5}{6}$ 5. a. $\frac{1}{13}$ b. $\frac{1}{4}$ c. $\frac{12}{13}$ d. $\frac{10}{13}$ 7. a. $\frac{1}{8}$ b. $\frac{1}{4}$ c. $\frac{1}{2}$ d. $\frac{1}{8}$
 9. a. $\frac{1}{3}$ b. $\frac{1}{2}$ c. $\frac{1}{2}$ d. $\frac{5}{6}$ 11. a. $\frac{4}{7}$ b. $\frac{3}{7}$ c. 1 d. 0 13. $0.8 = \frac{4}{5}$ 15. a. $\frac{1}{2}$ b. $\frac{5}{36}$ c. $\frac{23}{36}$ d. $\frac{13}{36}$

Chapter 6 Review

1. a. 12.6 cents/cup b. 10 cents/cup c. 27 cents/cup 3. 2

5.

Stem	Leaf
1	6, 9
2	8, 1, 0
3	2



9.

Interval	Tally	Frequency	Relative Freq.
17-25		6	$\frac{6}{15} = 0.4$
26-34		4	$\frac{4}{15} = 0.267$
35-43		3	$\frac{3}{15} = 0.2$
44-52		1	$\frac{1}{15} = 0.067$
53-61		1	$\frac{1}{15} = 0.067$

11. a. 72% b. 54 c. 28% 13. $\frac{3}{13}$ 15. $\frac{5}{6}$

17. a. $\frac{33}{95}$ b. $\frac{2}{95}$ c. $\frac{64}{95}$

Chapter 6 Cumulative Review

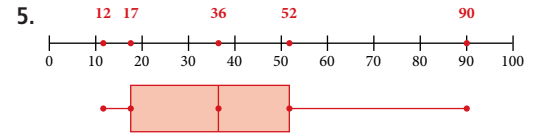
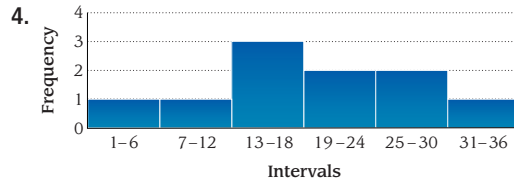
1. 42 3. $\frac{3}{28}$ 5. $17\frac{1}{2}$ 7. 9.648 9. $1\frac{5}{7}$ 11. 7.617 13. 4.65 15. $\frac{5}{4}$ 17. 16 19. \$17 21. \$24 23. 3
 25. 7.5 tablespoons 27. 204 in. = 17 ft 29. $\frac{1}{13}$

Chapter 6 Test

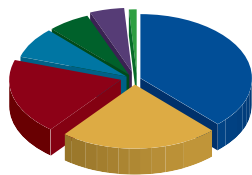
1. a. 6.6 seconds b. 11.4 seconds c. 10.8 sec 2. a. \$2,036 b. \$2,443 c. \$2,443 d. \$3,564

3.

Stem	Leaf
0	9, 4, 3, 6
1	9, 6, 2
2	0, 4
3	0



6. What People Like to Barbecue



- Beef 38%
- Seafood 19%
- Chicken 23%
- Vegetables 5%
- Hot Dogs 6%
- Pork 8%
- Fruit 1%

7. $\frac{1}{4}$ 8. $\frac{5}{13}$ 9. $\frac{5}{8}$ 10. $\frac{3}{8}$ 11. $\frac{1}{2}$ 12. $\frac{7}{80}$

Chapter 7

Pretest for Chapter 7

1. 96 in. 2. $2\frac{1}{2}$ yd 3. 3,200 cm 4. 6.1 cm 5. 270 ft² 6. 3 ft² 7. 6 mi² 8. 14,000 cm² 9. 12 qt 10. 9 gal
 11. 0.251 L 12. 64 oz 13. 2.142 g 14. 9.84 yd 15. 11.37 L 16. 40°C 17. 66 ft/sec 18. \$6.86

Getting Ready for Chapter 7

1. $\frac{2}{5}$ 2. $\frac{4}{1}$ 3. 192 4. 12,500 5. 3,267,000 6. 3,600 7. 9.3375 8. 190.4 9. $2\frac{2}{3}$ 10. 0.025 11. 450
 12. 0.4 13. 50 14. 3.65 15. 750 16. 24 17. 122 18. 38.9 19. 0.75 20. Perimeter = 120 in., Area = 864 in²

Section 7.1

1. 60 in. 3. 120 in. 5. 6 ft 7. 162 in. 9. $2\frac{1}{4}$ ft 11. 13,200 ft 13. $1\frac{1}{3}$ yd 15. 1,800 cm 17. 4,800 m 19. 50 cm
 21. 0.248 km 23. 670 mm 25. 34.98 m 27. 6.34 dm 29. 5.3 miles 31. 20 yd 33. 80 in. 35. 244 cm
 37. 2,960 chains 39. 120,000 μm 41. 7,920 ft 43. 80.7 ft/sec 45. 19.5 mi/hr 47. 1,023 mi/hr 49. 3,965,280 ft
 51. 179,352 in. 53. 2.7 mi 55. 18,094,560 ft 57. 144 59. 8 61. 1,000 63. 3,267,000 65. 6 67. 0.4 69. 405

71. 450 73. 45 75. 2,200 77. 607.5 79. $\frac{1}{3}$ 81. 6 83. $3\frac{1}{2}$ 85. 6 87. 6 89. $\frac{7}{10}$
 91. 10,000 steps $\cdot \frac{2.5 \text{ ft}}{1 \text{ step}} \cdot \frac{1 \text{ mi}}{5,280 \text{ ft}} = 4.7 \text{ mi}$

Section 7.2

1. 432 in² 3. 2 ft² 5. 1,306,800 ft² 7. 1,280 acres 9. 3 mi² 11. 108 ft² 13. 1,700 mm² 15. 28,000 cm²
 17. 0.0012 m² 19. 500 m² 21. 700 a 23. 3.42 ha 25. 135 ft³ 27. 48 fl oz 29. 8 qt 31. 20 pt 33. 480 fl oz
 35. 8 gal 37. 6 qt 39. 9 yd³ 41. 5,000 mL 43. 0.127 L 45. 4,000,000 mL 47. 14,920 L 49. 2,177,280 acres
 51. 30 a 53. 5,500 bricks 55. 16 cups 57. 34,560 in³ 59. 48 glasses 61. 20,288,000 acres 63. 3,230.93 mi²
 65. 23.35 gal 67. 21,492 ft³ 69. 192 71. 6,000 73. 300,000 75. 12.5 77. $\frac{5}{8}$ 79. 9 81. $\frac{1}{3}$ 83. $\frac{17}{144}$

Section 7.3

1. 128 oz 3. 4,000 lb 5. 12 lb 7. 0.9 T 9. 32,000 oz 11. 56 oz 13. 13,000 lb 15. 2,000 g 17. 40 mg
 19. 200,000 cg 21. 508 cg 23. 4.5 g 25. 47.895 cg 27. 1.578 g 29. 0.42 kg 31. 48 g 33. 4 g 35. 9.72 g
 37. 120 g 39. 3 L 41. 1.5 L 43. 0.561 grams 45. a. 3 capsules b. 1 capsule c. 2 capsules 47. 20.32 49. 6.36
 51. 50 53. 50 55. 122 57. 248 59. 40 61. $\frac{9}{50}$ 63. $\frac{9}{100}$ 65. $\frac{4}{5}$ 67. $1\frac{3}{4}$ 69. 0.75 71. 0.85 73. 0.6
 75. 3.625 77. $\frac{1}{8}$ 79. $6\frac{1}{4}$ 81. 0.125 83. 6.25

Section 7.4

1. 15.24 cm 3. 13.12 ft 5. 6.56 yd 7. 32,200 m 9. 5.98 yd² 11. 24.7 acres 13. 8,195 mL 15. 2.12 qt 17. 75.8 L
 19. 339.6 g 21. 33 lb 23. 365°F 25. 30°C 27. 58°C 29. 7.5 mL 31. 3.94 in. 33. 7.62 m 35. 46.23 L
 37. 17.67 oz 39. Answers will vary. 41. 91.46 m 43. 20.90 m² 45. 88.55 km/hr 47. 2.03 m 49. 38.3°C 51. 75
 53. 82 55. 3.25 57. 22 59. 41 61. 48 63. 195 65. 3.26 67. \$90 69. mean = 8, range = 6
 71. mean = 6, range = 9 73. median = 21, range = 14 75. median = 40, range = 16 77. mode = 14, range = 7
 79. a. 73 b. 71 c. 70 d. 23 81. 381.8 mg/day; 1.53 mL/day

Section 7.5

1. a. 270 min b. 4.5 hr 3. a. 320 min b. 5.33 hr 5. a. 390 sec b. 6.5 min 7. a. 320 sec b. 5.33 min
 9. a. 40 oz b. 2.5 lb 11. a. 76 oz b. 4.75 lb 13. a. 54 in. b. 4.5 ft 15. a. 69 in. b. 5.75 ft 17. a. 9 qt b. 2.25 gal
 19. 11 hr 21. 22 ft 4 in. 23. 11 lb 25. 5 hr 40 min 27. 3 hr 47 min 29. 52 min 31. 7.5 seconds 33. 8:18:18; 9:08:01
 35. 00:06:15 37. \$104 39. 10 hr 41. \$150 43. \$6 45. 47. 1.79 sec

CAFFEINE CONTENT IN SOFT DRINKS

Drink	Caffeine (In Milligrams)
Jolt	100
Mountain Dew	55
Coca-Cola	45
Diet Pepsi	36
7 up	0

Chapter 7 Review

1. 144 in. 3. 0.49 m 5. 435,600 ft² 7. 576 in² 9. 6 gal 11. 128 oz 13. 5,000 g 15. 10.16 cm 17. 7.42 qt
 19. 141.5 g 21. 248°F 23. 8.52 liters 25. 4,383.23 mi² 27. 402.5 km 29. 600 bricks 31. 80 glasses 33. 117 mi/hr
 35. 322 km/hr 37. 13 lb

Chapter 7 Cumulative Review

1. 16,759 3. 12 5. $490\frac{1}{32}$ 7. 21 9. 38 11. 13 13. 11.07 15. 16.2 17. 153 19. $6\frac{2}{5}$ 21. 0.75 23. $14\frac{4}{5}$
 25. 11.5 27. 72 in., 207 in² 29. 47 31. 1,788 33. 42 35. 87%

Chapter 7 Test

1. 21 ft 2. 0.75 km 3. 130,680 ft² 4. 3 ft² 5. 10,000 mL 6. 8.05 km 7. 10.6 qt 8. 26.7° C 9. 2,400 lb 10. 9 lb
 11. 3.5 ft² 12. 450 m² 13. 6.5 yd³ 14. 104°F 15. 0.26 gal 16. 20,844 in. 17. 0.24 ft³ 18. 70.75 liters 19. 74.70 m
 20. 7.55 liters 21. 6.30 in. 22. 8.05 km 23. 109.65 cm² 24. 17.29 acres 25. 4.72 L 26. 7.73 kg 27. 90 tiles
 28. 64 glasses 29. a. 330 min b. 5.5 hr 30. 11 lb 31. 0.51 km

Chapter 8

Pretest for Chapter 8

1. $P = 16$ in., $A = 16$ in² 2. $P = 18$ cm, $A = 18$ cm² 3. $C = 31.4$ in., $A = 78.5$ in² 4. 54 in² 5. 212.5 m² 6. 180 ft²
 7. 258 m² 8. 527.52 ft² 9. 113.04 mm² 10. 9 11. $\frac{4}{7}$ 12. -6 13. $h = 13$ m

Getting Ready for Chapter 8

1. 140 2. 12.56 3. 73.005 4. 3.2656 5. 26 6. 54 7. 9 8. $1\frac{41}{64} \approx 1.64$ 9. 8 10. $6\frac{3}{8} = 6.375$
 11. $\frac{88}{7} \approx 12.57$ 12. 154 13. $\frac{729}{4} = 182.25$ 14. 30.96 15. 5.1 16. 114.4 17. 452.16 18. ≈ 33.49 19. $\frac{3,168}{7} \approx 452.57$
 20. $\frac{704}{21} \approx 33.52$ 21. 7,930 22. 2,162

Problem Set 8.1

1. 16 yds 3. 12.8 ft 5. 22 ft 7. 10 yds 9. 40.4 ft 11. 41 in. 13. 50 in. 15. 40 yds 17. 56 in. 19. 37.68 yds
 21. 69.08 ft 23. 18.84 ft 25. a. 10.2 in. b. 7.68 in. 27. 38.94 mm 29. 98 in. 31. 1040 ft 33. Yes, when $w = 1 = 5$ ft
 35. 2 in. 37. 9 39. 1.64 41. 660.19 43. 30.96 45. 91.5 m 47. a. 6.30 in. b. 5.09 in. 49. 18.28 in.

Problem Set 8.2

1. 9 in² 3. 4.84 yd² 5. 135 yd² 7. 18 yd² 9. 1.73 ft² 11. 18 mi² 13. 24 ft² 15. 58.3 cm² 17. 113.04 in²
 19. 156 cm² 21. 59.13 ft² 23. 37.74 ft² 25. a. 5.4 in² b. .864 in² 27. 120.70 mm² 29. 588 in²
 31. a. 24 b. 40 c. 48 d. 49 e. 62.42 f. Circle 33. 16 cm 35. 24 37. 72 39. 4.71 41. 547 43. 200 yd²
 45. 5 mi² 47. 22.28 in²

Problem Set 8.3

1. 54 m² 3. 88 in² 5. 108 yd² 7. 31.4 in² 9. 149.15 cm² 11. 2,198 ft² 13. 78.5 m² 15. 153.86 ft² 17. 162.78 in²
 19. 87.92 in² 21. 901.18 cm² 23. 100 m² 25. 439.6 in² 27. a. 1.354 in b. 93.5 in² c. yes 29. 288 ft²
 31. 60,288,000 mi² 33. 282.6 cm² 35. 27 37. $\frac{2}{3}$ 39. 0.294 41. 785 43. 1,728 in³ 45. 1.5 gal

Problem Set 8.4

1. 27 m³ 3. 20.4 in³ 5. 20.48 m³ 7. 70.65 yd³ 9. 14.47 in³ 11. 121.52 m³ 13. 7.07 m³ 15. 66.99 cm³
 17. 10.60 cm³ 19. 267.95 ft³ 21. 4,186.67 cm³ 23. 1,837.85 m³ 25. 169.56 in³ 27. 0.21 ft³ 29. 80 ft³ 31. 49.63 cm³
 33. 22.5 m³ 35. $\frac{1}{81}$ 37. $\frac{25}{36}$ 39. 0.25 41. 1.44 43. 25 45. 100 47. $\frac{3}{2}$ 49. $\frac{8}{3}$ 51. $\frac{2}{3}$ 53. $\frac{6}{7}$ 55. 1
 57. $\frac{8}{5}$ 59. $\frac{1}{5}$ 61. $\frac{1}{16}$ 63. No

Problem Set 8.5

1. 8 3. 9 5. 6 7. 5 9. 15 11. 48 13. 45 15. 48 17. 15 19. 1 21. 78 23. 9 25. $\frac{4}{7}$ 27. $\frac{3}{4}$ 29. False
 31. True 33. 10 in. 35. 13 ft 37. 6.40 in. 39. 17.49 m 41. 1.1180 43. 11.1803 45. 3.46 47. 11.18 49. 0.58
 51. 0.58 53. 12.124 55. 9.327 57. 12.124 59. 12.124 61. 6.7 miles 63. 30 ft 65. 25 ft 67. 5 miles
 69. $16 \cdot 2$ 71. $25 \cdot 3$ 73. $25 \cdot 2$ 75. $4 \cdot 10$ 77. $16 \cdot 2$ 79. $49 \cdot 2$ 81. $16 \cdot 3$ 83. $\frac{2}{5}$ 85. $9\frac{8}{25}$ 87. 8 89. $2\frac{4}{5}$
 91. $\frac{7}{16}$ 93. 19

Chapter 8 Review

1. $\frac{1}{2}$ mm 3. 14.7 in. 5. $24\frac{9}{16}$ cm 7. 27 in² 9. $\frac{1}{7}$ m² 11. 19.625 in² 13. 32 cm² 15. Perimeter = 40 ft; area = 84 ft²
 17. $V = 997.80$ km³; $S = 482.81$ km² 19. 628 in³ 21. 183.17 ft³ 23. 701,201.25 ft³

Chapter 8 Cumulative Review

1. 5,555 3. 73.8 5. $\frac{1}{2}$ 7. 8.936 9. 1.156 11. $\frac{1}{9}$ 13. $2\frac{1}{10}$ 15. $1\frac{1}{8}$ 17. $\frac{2}{3}$ 19. 1,600 acres 21. $\frac{11}{20}$
 23. $3 \cdot 10^4 + 4 \cdot 10^2 + 5$ 25. $66\frac{2}{3}\%$ 27. 80.5 km/hr 29. 0.54 31. \$41.07

Chapter 8 Test

1. 34 ft 2. 14.4 cm 3. 38 in. 4. 62.8 yd 5. 24 m 6. 49 cm² 7. 52 in² 8. $\frac{5}{3}$ ft² 9. 77.13 mm² 10. 28 in²
 11. 84 ft³ 12. 68.39 m³ 13. 113.04 cm³ 14. 284.69 in³ 15. Volume = 96 in³; surface area = 136 in² 16. 61 ft
 17. 989 mm² 18. 3.75 cm 19. 1 ft 20. 1.88 meters

Chapter 9

Pretest for Chapter 9

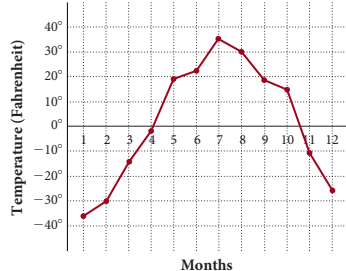
1. -10 2. 3 3. $\frac{6}{5} > -\frac{5}{6}$ 4. $2 < |-4|$ 5. -8 6. 1 7. -10 8. -3.47 9. -1 10. $-\frac{17}{20}$ 11. -33 12. -20
 13. $\frac{2}{5}$ 14. -3 15. 8 16. 0 17. -8 18. -14 19. -3 20. $3x + 13$ 21. $15y - 10$ 22. $-b$ 23. 35°

Getting Ready for Chapter 9

1. $(5 \cdot 3)^2$ 2. $4(7 - 2)$ 3. 110.1 4. 9 5. 0.32 6. 0 7. 125 8. $\frac{9}{10}$ 9. 6 10. 2 11. 3 12. 1 13. $\frac{5}{16}$
 14. 8 15. 3 16. 4 17. 24 in. 18. 7,500 ft²

Problem Set 9.1

1. 4 is less than 7. 3. 5 is greater than -2. 5. -10 is less than -3. 7. 0 is greater than -4. 9. $30 > -30$ 11. $-10 < 0$
 13. $-3 > -15$ 15. $3 < 7$ 17. $7 > -5$ 19. $-6 < 0$ 21. $-12 < -2$ 23. $-\frac{1}{2} > -\frac{3}{4}$ 25. $-0.75 < 0.25$ 27. $-0.1 < -0.01$
 29. $-3 < |6|$ 31. $15 > |-4|$ 33. $|-2| < |-7|$ 35. 2 37. 100 39. 8 41. 231 43. $\frac{3}{4}$ 45. 200 47. 8 49. 231
 51. -3 53. 2 55. -75 57. 0 59. 0.123 61. $-\frac{7}{8}$ 63. 2 65. 8 67. -2 69. -8 71. 0 73. Positive
 75. -100 77. -20 79. -360 81. -450 feet 83. -3,060 feet 85. $-\$5,000; -\$2,750$ 87. $-61^\circ\text{F}, -51^\circ\text{F}$
 89. $-5^\circ\text{F}, -15^\circ\text{F}$ 91. New Orleans -6:00 GMT 93. -7°F 95. 10°F and 25-mph wind
 97. 99. 25 101. 5 103. 6 105. 19 107. 4,313 109. 56 111. $5 + 3$



113. $(7 + 2) + 6$ 115. $x + 4$ 117. $y + 5$ 119. -3
 121. The opposite of a number is the number that is the same distance from 0, but on the opposite side of 0.
 123. The opposite of the absolute value of -3. It simplifies to -3.

Problem Set 9.2

1. 5 3. 1 5. -2 7. -6 9. 4 11. 4 13. -9 15. 15 17. -3 19. -11 21. -7 23. -3 25. -16 27. -8
 29. -127 31. 49 33. 34 35. 37.

First Number a	Second Number b	Their Sum $a + b$
5	-3	2
5	-4	1
5	-5	0
5	-6	-1
5	-7	-2

First Number x	Second Number y	Their Sum $x + y$
-5	-3	-8
-5	-4	-9
-5	-5	-10
-5	-6	-11
-5	-7	-12

39. 10 41. -445 43. 107 45. -20 47. -17 49. -50 51. -7 53. 3 55. 50 57. -73 59. -11 61. 17
 63. -3.8 65. 14.4 67. -9.89 69. -1 71. $-\frac{2}{7}$ 73. $-\frac{3}{5}$ 75. -0.86 77. -4.2 79. $-\frac{1}{4}$ 81. -21 83. -5
 85. -4 87. 7 89. 10 91. 380 feet above the trailhead 93. \$10 95. -2 97. 4 99. $-\frac{2}{5}$ 101. 30 103. -60.3
 105. 2 107. 3 109. 604 111. 0 113. $10 - x$ 115. $y - 17$

Problem Set 9.3

1. 2 3. 2 5. -8 7. -5 9. 7 11. 12 13. 3 15. -7 17. -3 19. -13 21. -50 23. -100 25. 399
 27. -21 29. -11.41 31. -1.9 33. -1 35. $-\frac{5}{12}$ 37. $-\frac{11}{15}$ 39. -7 41. -9 43. -14 45. -65 47. -11
 49. 202 51. -400 53. -17.5 55. $-\frac{1}{12}$ 57. 11 59. -4 61. 8 63. 6 65. b 67. a 69. -100
 71. -16 degrees 73. 7,603 feet 75. -100 items 77. \$1,760 79. \$3,009 81. $-11 - (-22) = 11^\circ\text{F}$ 83. $3 - (-24) = 27^\circ\text{F}$
 85. $60 - (-26) = 86^\circ\text{F}$ 87. $-14 - (-26) = 12^\circ\text{F}$ 89. 30 91. 36 93. 64 95. 48 97. 41 99. 40 101. 17 103. 32
 105. 25 107. 72 109. $3 \cdot 5$ 111. $7x$ 113. $5(3)$ 115. $(5 \cdot 7) \cdot 8$ 117. $2(3) + 2(4) = 6 + 8 = 14$ 119. $3 - 5 \neq 5 - 3$
 121. You have a balance of \$10 in your checkbook, and you write a check for \$12. Your new balance is $-\$2$. 123. -5, -10 125. 2, 6

Problem Set 9.4

1. -56 3. -60 5. 56 7. 81 9. -9.03 11. $\frac{3}{7}$ 13. -8 15. -24 17. 24 19. -6 21. a. 16 b. -16
 23. a. -125 b. -125 25. a. 16 b. -16

27.

Number x	Square x^2
-3	9
-2	4
-1	1
0	0
1	1
2	4
3	9

29.

First Number x	Second Number y	Their Product xy
6	2	12
6	1	6
6	0	0
6	-1	-6
6	-2	-12

31. -4 33. 50 35. 1 37. -35 39. -22 41. -30 43. -25 45. 9 47. -13 49. -11 51. 19 53. 6
 55. -6 57. -4 59. -17 61. a 63. d 65. a 67. b 69. -6°C 71. -16 degrees 73. \$400 remains 75. 7
 77. 5 79. -5 81. 9 83. 4 85. 17 87. 405 89. $12 \div 6$ or $\frac{12}{6}$ 91. $6 \div 3 = 2$ 93. $5 \cdot 2 = 10$ 95. 89
 97. -54, 162 99. 54, -162 101. 44 103. 19 105. -17

Problem Set 9.5

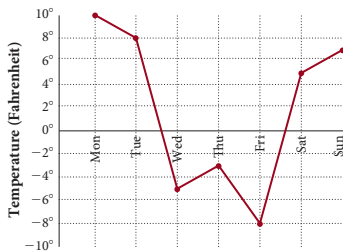
1. -3 3. -5 5. 3 7. 2 9. -4 11. -2 13. 0 15. -5
 17.

First Number a	Second Number b	The Quotient of a and b $\frac{a}{b}$
100	-5	-20
100	-10	-10
100	-25	-4
100	-50	-2

19.

First Number a	Second Number b	The Quotient of a and b $\frac{a}{b}$
-100	-5	20
-100	5	-20
100	-5	-20
100	5	20

21. -5 23. 35 25. 6 27. 1 29. -6 31. -2 33. -1 35. -1 37. 2 39. -3 41. -7 43. 30 45. 4
 47. -5 49. -20 51. -5 53. -1 55. c 57. a 59. d 61. -\$9,810.50
 63.



65. $x + 3$ 67. $(5 + 7) + a$ 69. $(3 \cdot 4)y$ 71. $5(3) + 5(7)$ 73. 36 75. 64 77. 350
 79. 7,500 81. 4 83. -12 85. 12 87. -32 89. 32 91. -2 93. -4 95. 4 97. -1 99. -1

Problem Set 9.6

1. $20a$ 3. $48a$ 5. $-18x$ 7. $-27x$ 9. $-10y$ 11. $-60y$ 13. $5 + x$ 15. $13 + x$ 17. $10 + y$ 19. $8 + y$ 21. $5x + 6$
 23. $6y + 7$ 25. $12a + 21$ 27. $7x + 28$ 29. $7x + 35$ 31. $6a - 42$ 33. $2x - 2y$ 35. $20 + 4x$ 37. $6x + 15$ 39. $18a + 6$
 41. $12x - 6y$ 43. $35 - 20y$ 45. $8x$ 47. $4a$ 49. $4x$ 51. $5y$ 53. $-10a$ 55. $-5x$
 57. $x(\$3,300 - \$300) - \$250 = \$3,000x - \$250$ 59. $A = 36 \text{ ft}^2; P = 24 \text{ ft}$ 61. $A = 81 \text{ in}^2; P = 36 \text{ in.}$ 63. $A = 200 \text{ in}^2; P = 60 \text{ in.}$
 65. $A = 300 \text{ ft}^2; P = 74 \text{ ft}$ 67. 20° C 69. 5° C 71. -10° C

Chapter 9 Review

1. -17 3. 4.6 5. -6 7. 2 9. 4 11. 6 13. -2 15. -971 17. -12 19. 7 21. -20 23. -1,736
 25. -3 27. 2 29. 36 31. -8 33. -5 35. -8 37. -1 39. -4 41. -42 43. -11 45. -27 47. 2 49. False
 51. True 53. False 55. $\$58 + (-\$86) = -\$28$ 57. 24° 59. $3x + 12$ 61. $-21a$ 63. $4x + 12$ 65. $21y - 56$ 67. $3x$
 69. $4y$

Chapter 9 Cumulative Review

1. $\frac{31}{35}$ 3. 316 5. $\frac{16}{81}$ 7. $-\frac{1}{16}$ 9. 37.65 11. Thirty-eight thousand six hundred nine 13. 126 15. $\frac{23}{24}$ 17. -1
 19. $\frac{2}{5}$ 21. $8\frac{1}{6}$ 23. 37.5% 25. 1 27. 0.35 km 29. 0.56 31. $\frac{11}{4}$ 33. 20 women 35. 97 mi. 37. \$10.80
 39. 65 more

Chapter 9 Test

1. -14 2. $\frac{2}{3}$ 3. $-1 > -4$ 4. $|-4| > |2|$ 5. 7 6. -2 7. -9 8. -5.9 9. $-\frac{22}{15}$ 10. -36 11. 42 12. 6
 13. -5 14. 5 15. -3.6 16. $-\frac{7}{12}$ 17. -14 18. -7 19. $-\frac{3}{10}$ 20. $\frac{7}{6}$ 21. 9 22. -8 23. -11 24. -15
 25. 7 26. -4 27. -74 28. -45 29. 11 30. 4 31. $\frac{1}{2}$ 32. 4 33. 19 34. $-\frac{5}{2}$ 35. -61 36. -7
 37. 24 38. -5 39. -14 40. -5 41. $-\$35$ 42. 25° 43. -21 million visitors

Chapter 10

Pretest for Chapter 10

1. $-a + 7$ 2. $14y - 12$ 3. -6 4. -5 5. 15 6. -1 7. 4 8. 60 9. -10 10. No 11. -23 12. 8

Getting Ready for Chapter 10

1. 5 2. 135 3. -6 4. $\frac{11}{8}$ 5. -20 6. -2 7. 18 8. 1 9. $-\frac{2}{3}$ 10. 13 11. 7 12. 35 13. $10x$
 14. $-12x$ 15. $4x - 20$ 16. x 17. $x + 2$ 18. $P = 8x$

Problem Set 10.1

1. $10x$ 3. y 5. $3a$ 7. $8x + 16$ 9. $6a + 14$ 11. $x + 2$ 13. $6x + 11$ 15. $2x + 2$ 17. $-a + 12$ 19. $4y - 4$
 21. $-2x + 4$ 23. $8x - 6$ 25. $5a + 9$ 27. $-x + 3$ 29. $17y + 3$ 31. $a - 3$ 33. $6x + 16$ 35. $10x - 11$ 37. $19y + 32$
 39. $30y - 18$ 41. $6x + 14$ 43. $27a + 5$ 45. 14 47. 27 49. -19 51. 7 53. 1 55. 18 57. 12 59. -10
 61. 28 63. 40 65. 26 67. 4 69. 3 71. 0 73. 15 75. 6 77. $6(x + 4) = 6x + 24$ 79. $4x + 4$ 81. $10x - 4$
 83. 5° 85. 55° ; complementary angles 87. 20° ; complementary angles
 89. a. Yes b. No, he should earn \$108 for working 9 hours c. No, he should earn \$84 for working 7 hours d. Yes
 91. a. 32°F b. 22°F c. -18°F 93. a. \$27 b. \$47 95. 0 97. -6 99. -3 101. $\frac{11}{8}$ 103. 0 105. x 107. $y - 2$
 109. -9 111. 6 113. a 115. c 117. c 119. $-\frac{2}{3}$ 121. 18 123. $-\frac{1}{12}$

Problem Set 10.2

1. Yes 3. Yes 5. No 7. Yes 9. No 11. 6 13. 11 15. -15 17. 1 19. -3 21. -1 23. $\frac{7}{5}$ 25. -10
 27. -4 29. -3 31. 2 33. -6 35. -6 37. -1 39. -2 41. -16 43. -3 45. 10 47. $x = 4$ 49. $x = 12$
 51. 58° celsius 53. 67° 55. a. 225 b. \$11,125 57. $\frac{1}{4}$ 59. 2 61. $\frac{3}{2}$ 63. 1 65. 1 67. 1 69. 1 71. x
 73. $7x - 11$ 75. 2 77. $\frac{5}{14}$ 79. $-\frac{1}{15}$ 81. $-\frac{7}{6}$ 83. Equation: $x + 12 = 30$; $x = 18$ 85. Equation: $8 - 5 = x + 7$; $x = -4$

Problem Set 10.3

1. 8 3. -6 5. -6 7. 6 9. 16 11. 16 13. $-\frac{3}{2}$ 15. -7 17. -8 19. 6 21. 2 23. 3 25. 4 27. -24
 29. 12 31. -8 33. 15 35. 3 37. -1 39. 1 41. 3 43. 1 45. -1 47. $-\frac{1}{3}$ 49. -14 51. 9 53. 8
 55. 300.7 ft/sec 57. \$35.00 59. 97,500,000 or 97.5 million viewers 61. $2x + 5 = 19$; $x = 7$ 63. $5x - 6 = -9$; $x = -\frac{3}{5}$
 65. $6a - 16$ 67. $-15x + 3$ 69. $3y - 9$ 71. $16x - 6$

Problem Set 10.4

1. 3 3. 2 5. -3 7. -4 9. 1 11. 0 13. 2 15. -2 17. 3 19. -1 21. 7 23. -3 25. 1 27. -2 29. 4
 31. 10 33. -5 35. $-\frac{1}{12}$ 37. -3 39. 20 41. -1 43. 5 45. 4 47. 2.05 49. -0.064 51. 12.03 53. 0.44
 55. -0.175 57. 2 59. 10 61. 5 63. 1,250 feet 65. 13 67. 30 hours 69. $x + 2$ 71. $2x$ 73. $2(x + 6)$ 75. $x - 4$
 77. $2x + 5$ 79. $<$ 81. $>$ 83. 0.001, 0.003, 0.01, 0.013, 0.03, 0.031 85. a. $4x + 6(x - 100) = 2,400$ b. $x = 300$ c. 500 people

Problem Set 10.5

1. $x + 3$ 3. $2x + 1$ 5. $5x - 6$ 7. $3(x + 1)$ 9. $5(3x + 4)$ 11. The number is 2. 13. The number is -2 .
 15. The number is 3. 17. The number is 5. 19. The number is -2 . 21. The length is 10 m and the width is 5 m.
 23. The length of one side is 8 cm. 25. The measures of the angles are 45° , 45° , and 90° . 27. The angles are 30° , 60° , and 90° .
 29. Patrick is 33 years old, and Pat is 53 years old. 31. Sue is 35 years old, and Dale is 39 years old. 33. 87 mi 35. 147 mi
 37. 8 nickels, 18 dimes 39. 16 dimes, 32 quarters 41. $x = 8, y = 6, z = 9$ 43. 39 hours 45. 60 miles per hour 47. 35
 49. 65 51. 2 53. 14 55. $-\frac{2}{3}$ 57. 0.75, 75% 59. 1.2, 120% 61. $\frac{37}{100}, 0.37$ 63. $\frac{17}{500}, 0.034$ 65. 20.25 67. 75

Problem Set 10.6

1. 704 ft^2 3. $\frac{9}{8}\text{ in}^2$ 5. \$240 7. \$285 9. 12 ft 11. 8 ft 13. \$140 15. 58 in. 17. $3\frac{1}{4} = \frac{13}{4}\text{ ft}$ 19. $C = 100^\circ\text{C}$; yes
 21. $C = 20^\circ\text{C}$; yes 23. 0°C 25. 5°F

27.

AGE (YEARS)	MAXIMUM HEART RATE (BEATS PER MINUTE)
18	202
19	201
20	200
21	199
22	198
23	197

29.

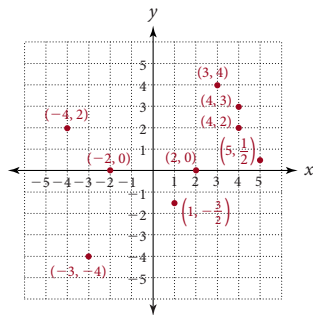
RESTING HEART RATE	TRAINING HEART RATE
60	144
65	146
70	148
75	150
80	152
85	154

31. a. 4 hrs b. 220 miles

33. a. 4 hours b. 65 mph 35. 360 in³ 37. 1 yd³ 39. $y = 7$ 41. $y = -3$ 43. $y = -2$ 45. $x = 3$ 47. $x = 5$
 49. $x = 8$ 51. $y = 1$ 53. $y = 3$ 55. $y = \frac{5}{2}$ 57. $y = 0$ 59. $y = \frac{13}{3}$ 61. $y = 4$ 63. $x = 0$ 65. $x = \frac{13}{4}$ 67. $x = 3$
 69. Complement: 45°; supplement: 135° 71. Complement: 59°; supplement: 149° 73. a. 13,330 kilobytes b. 2,962 kilobytes
 75. a. About 58° Celcius b. 328 K 77. $\frac{3}{4}$ 79. 3 81. 2 83. 6

Problem Set 10.7

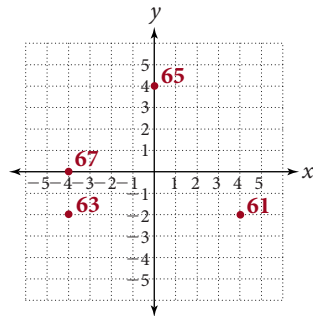
- 1.-17. 19. (2, 2) 21. (-3, 2) 23. (3, -3) 25. (-4, 0) 27. yes 29. No 31. Yes



33. No 35. (1985, 20), (1990, 34), (1995, 45)
 37. a. (5, 40), (10, 80), (20, 160) b. \$320 c. 30 hours d. No, if she works 35 hours, she should be paid \$280. 39. xy^2 41. $\frac{1}{xy}$
 43. $\frac{4x+15}{20}$ 45. $\frac{3x-1}{x}$ 47. $A = (1, 2), B = (6, 7)$ 49. $A = (2, 2), B = (2, 5), C = (7, 5)$

Chapter 10 Review

1. $17x$ 3. $11a - 3$ 5. $5x + 4$ 7. $10a - 4$ 9. 42 11. 1 13. -9 15. 7 17. Yes 19. 9 21. 3 23. 9
 25. 5 27. -1 29. $-\frac{1}{8}$ 31. 9 33. 7 35. -16 37. 2 39. -2 41. -4 43. The length is 14 m, and the width is 7 m.
 45. 15° and 75° 47. 18°, 54°, 108° 49. $y = 6$ 51. $y = 3$ 53. $x = 0$ 55. $x = 2$ 57. $x = -3$ 59. $x = -9$
 61-67.



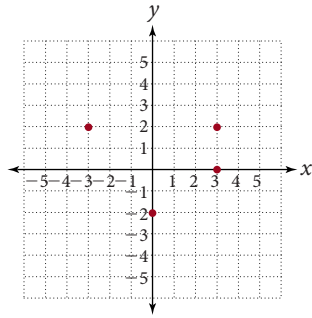
Chapter 10 Cumulative Review

1. 5,996 3. 4.559 5. 938,135 7. 42 9. 440,000 11. $6\frac{1}{3}$ 13. 80% 15. $1\frac{6}{25}$ 17. $\frac{4}{81}$ 19. -7 21. 4
 23. 56 25. 5 27. 8 29. Ben is 17, Ryan is 9 31. \$80, 20% 33. \$14.40 35. 64 37. 240 39. $\frac{4}{1}$

Chapter 10 Test

1. $6x - 5$ 2. $3b - 4$ 3. $2x - 18$ 4. $14x - 12$ 5. -3 6. 9 7. Yes 8. No 9. 8 10. -6 11. 4 12. -4.9
 13. 27 14. 6 15. -4 16. 1 17. $\frac{2}{3}$ 18. 1 19. all real numbers 20. 5 21. -8 22. 22 mi/hr
 23. Length = 9 cm; width = 5 cm 24. Susan is 11, Karen is 6. 25. 20°, 40°, 120° 26. 4 quarters, 11 dimes 27. 22.5°, and 67.5°

28. 4.5 m 29. 20 ft, 240 ft 30.



Appendices

Problem Set D

1. $\frac{1}{32}$ 3. $\frac{1}{100}$ 5. $\frac{1}{x^3}$ 7. $\frac{1}{16}$ 9. $-\frac{1}{125}$ 11. $\frac{1}{4}$ 13. 1,000 15. $\frac{1}{x^7}$ 17. 9 19. $\frac{1}{8}$ 21. 1,000 23. $\frac{1}{x^{12}}$ 25. 2
 27. 4 29. $\frac{1}{4}$ 31. x 33. $\frac{1}{x}$ 35. $\frac{1}{10^7}$ 37. $\frac{1}{10^7}$ 39. 1,000 41. x^{24} 43. 4 45. 10,000 47. $15x^5$ 49. $\frac{6}{x^5}$
 51. $-\frac{12}{x^7}$ 53. $42x^2$ 55. x^5 57. x^2

Problem Set E

1. 4.25×10^5 3. 6.78×10^6 5. 1.1×10^4 7. 8.9×10^7 9. 38,400 11. 57,100,000 13. 3,300 15. 89,130,000
 17. 3.5×10^{-4} 19. 7×10^{-4} 21. 6.035×10^{-2} 23. 1.276×10^{-1} 25. 0.00083 27. 0.0625 29. 0.3125 31. 0.005
 33. $\$4.2 \times 10^4$; 4,000,000 35. $\$5.75 \times 10^5$; 87,000,000 37. 39. 1.024×10^3
 41. 1.074×10^9

Jupiter's Moon	Period (Seconds)	
Io	153,000	1.53×10^5
Europa	307,000	3.07×10^5
Ganymede	618,000	6.18×10^5
Callisto	1,440,000	1.44×10^6

Problem Set F

1. 6×10^{10} 3. 1.5×10^{11} 5. 6.84×10^{-2} 7. 1.62×10^{10} 9. 3.78×10^{-1} 11. 2×10^3 13. 4×10^{-9} 15. 5×10^{14}
 17. 6×10^1 19. 2×10^{-8} 21. 4×10^5 23. 4×10^{-4} 25. 2.1×10^{-2} 27. 3×10^{-5} 29. 6.72×10^{-1} 31. $\$1.05 \times 10^{-2}$
 33. $\$6.61 \times 10^{-3}$ 35. 2,500,000 stones or 2.5×10^6

Index

A

Absolute value, 520
Acute angle, 582
Addition
 associative property of, 17
 with carrying, 15
 commutative property of, 16
 with decimals, 193
 with fractions, 129
 with mixed numbers, 153
 with negative numbers, 529, 531
 with table, 14
 with whole numbers, 14
 with zero, 16
Addition property
 of equality, 592
 of zero, 16
Additive inverse, 521
Algebraic expression, 564, 579
 value of, 581
Angle, 582
 acute, 582
 complementary, 582, 629
 complement of, 582, 629
 measure, 582
 notation, 582
 obtuse, 582
 right, 19, 582
 sides of, 582
 straight, 582
 sum of (triangle), 618
 supplementary, 582, 629
 supplement of, 582, 629
 vertex of, 582
Area, 47
 of a circle, 207, 475
 metric units of, 427
 of a parallelogram, 47, 475
 of a rectangle, 47, 297, 475, 566
 of a square, 47, 475, 566
 of a triangle, 113, 475
 U.S. units of, 426
Arithmetic mean, 370
Arithmetic sequence, 139
Associative property
 of addition, 17
 of multiplication, 46
Average, 367, 370
Average speed, 629

B

Bar chart, 28
Base, 67
Batting average, 328
Blackwell, David, 576
Blueprint for problem solving, 615
Body mass index, 463
Borrowing, 35, 156
Box-and-whisker plot, 378

C

Carrying, 15
Celsius scale, 443
Circle, 205
 area, 207, 475
 circumference, 205, 468
 diameter, 205, 469
 radius, 205, 469
Circumference, 205, 468
Commission, 330
Commutative property
 of addition, 16
 of multiplication, 46
Complementary angles, 582, 629
Complex fractions, 162
Composite numbers, 101
Compound interest, 346
Constant term, 607
Conversion factors, 416
 area, 426, 427
 between metric and U.S. systems, 441
 length, 416, 418
 time, 449
 volume, 428, 429
 weight, 435
Counting numbers, 8
Cube, 491
Cylinder, 207

D

Decimal fractions, 186
Decimal notation, 185
Decimal numbers, 185
 addition with, 193
 converting fractions to, 225
 converting to fractions, 187, 226
 converting to mixed numbers, 187
 converting percents to, 304
 converting to percents, 305
 division with, 213
 and equations, 610
 expanded form, 186
 multiplication with, 201
 repeating, 226
 rounding, 187
 subtraction with, 194
 writing in words, 186
Decimal point, 186
Degree measure, 582
Denominator, 90
 least common, 131
Diameter, 205
Difference, 33
Digit, 3
Discount, 338
Distributive property, 43, 564, 579
Dividend, 55
Division
 with decimals, 213

 with fractions, 121
 long, 57
 with mixed numbers, 143
 with negative numbers, 557
 with remainders, 59
 with whole numbers, 56
 by zero, 61
Divisor, 55, 101

E

Egyptian numbers, 81
Equation Game, 651
Equations
 applications of, 615
 in one variable, 18, 48, 265, 592, 599, 607
 involving decimals, 610
 involving fractions, 609
Equivalent fractions, 91
Estimating, 27, 44, 203
Evaluating formulas, 627
Expanded form, 4, 186
Exponents, 67, 83, 111
 negative, 657
 zero, 68
Extremes, 269

F

Factor, 42, 101
Factoring into prime numbers, 101
Fahrenheit scale, 443
Formula, 627
Fraction bar, 55
Fractions, 89
 addition with, 129
 combinations of operations, 161
 complex, 162
 converting decimals to, 187, 226
 converting to decimals, 226
 converting percents to, 306
 converting to percents, 307
 denominator of, 90
 division with, 121
 and equations, 609
 equivalent, 91
 improper, 90
 least common denominator, 131
 lowest terms, 102
 meaning of, 89
 multiplications with, 109
 and the number one, 93
 numerator of, 90
 proper, 90
 properties of, 92
 as ratios, 251
 reducing to lowest terms, 102, 110
 subtraction with, 130
 terms of, 90
Frequency table, 376
Fundamental property of proportions, 270

G

Geometric sequence, 54
 Golden ratio, 296
 Grade point average, 217
 Greater than, 520

H

Hypotenuse, 501
 Histogram, 377

I

Improper fractions, 90
 Inequality symbols, 520
 Integers, 521
 Interest
 compound, 346
 principal, 345
 rate, 345
 simple, 345
 Irrational number, 205, 469

K

Kronecker, Leopold, 82

L

Least common denominator, 131, 609
 Length
 metric units of, 418
 U.S. units of, 416
 Less than, 520
 Line graph, 637
 Linear equations in one variable, 607
 Long division, 57
 Lowest terms, 102

M

Mean, 367
 Means, 269
 Median, 369
 Metric system
 converting to U.S. system, 441
 prefixes of, 417
 units of, 418, 427, 429, 435
 Minard, Charles, 412
 Mixed numbers, 141
 addition with, 153
 borrowing, 156
 converting decimals to, 187
 converting improper fractions to, 143
 converting to improper fractions, 141
 division with, 148
 multiplication with, 147
 notation, 141
 subtraction with, 155
 Mode, 369
 Multiplication
 associative property of, 46
 commutative property of, 46
 with decimals, 201
 with fractions, 109
 with mixed numbers, 147
 with negative numbers, 549
 by one, 46
 with whole numbers, 41, 46
 by zero, 46

Multiplication property
 of equality, 599
 of one, 46
 of zero, 46

N

Negative numbers, 519
 addition with, 529, 531
 division with, 557
 multiplication with, 549
 subtraction with, 539
 Number line, 8, 529
 Numbers
 absolute value of, 520
 composite, 101
 counting, 8
 decimal, 185
 integer, 521
 irrational, 205, 469
 mixed, 141
 negative, 519
 opposite of, 521
 positive, 519
 prime, 101
 rounding, 25, 187
 whole, 8
 writing in words, 6
 writing with digits, 7
 Numerator, 90

O

Obtuse angle, 582
 Opposite, 521
 Order of operations, 69
 Origin, 637

P

Parallelogram
 area of, 47, 475
 Pascal's triangle, 3
 Percents
 applications, 323
 basic percent problems, 313
 and commission, 330
 converting decimals to, 305
 converting fractions to, 307
 converting to decimals, 304
 converting to fractions, 306
 and discount, 338
 increase and decrease, 337, 338
 meaning of, 303
 and proportions, 316
 and sales tax, 329
 Perfect square, 500
 Perimeter, 19, 467
 of a square, 19, 467
 of a rectangle, 19, 467
 of a triangle, 19, 467
 Pi, 205
 Pie chart, 89, 385
 Place value, 3, 185
 Polygon, 19
 Positive numbers, 519
 Prime numbers, 101
 Principal, 345
 Probability, 393
 Product, 42

Proper fractions, 90
 Proportions, 269
 applications of, 275, 316
 extremes, 269
 fundamental property of, 270
 means, 269
 percent problems, 316
 terms of, 269
 Protractor, 387, 583
 Pythagorean theorem, 501

Q

Quartile, 377
 Queen Dido, 563
 Quotient, 55

R

Radical sign, 499
 Radius, 205
 Range, 370
 Rate equation, 628
 Rates, 259
 Ratio, 251
 Reciprocal, 121
 Rectangle, 19
 area, 47, 475, 566
 perimeter, 19, 467, 566
 Rectangular solid
 surface area, 483
 volume, 491
 Remainder, 59
 Right angle, 19, 582
 Right circular cylinder
 volume, 207
 surface area, 484
 Right triangle, 501
 Rounding
 decimals, 187
 whole numbers, 25

S

Sales tax, 329
 Scatter diagram, 94, 522
 Scientific notation, 663
 Sequence
 arithmetic, 139
 geometric, 54
 Set, 8
 Sierpinski Triangle, 233, 516
 Similar figures, 281
 Similar Triangles, 281
 Simple interest, 345
 Similar terms, 565, 580
 Solution, 18, 591
 Sphere, 229
 Spiral of Roots, 243
 Stem-and-leaf diagram, 375
 Square, 19
 area, 47, 475, 566
 perimeter, 19, 467
 Square root, 499
 approximating, 500
 simplifying, 500
 Straight angle, 582
 Study skills, 5, 7, 8, 17, 70, 89, 93, 114,
 163, 196, 208, 218, 251, 272

S

- Subtraction
 - with borrowing, 35, 156
 - with decimals, 194
 - with fractions, 130
 - with mixed numbers, 155
 - with negative numbers, 539
 - with whole numbers, 34
- Supplementary angles, 582, 629
- Sum, 14
- Surface area,
 - rectangular solid, 483
 - right circular cylinder, 484
 - sphere, 485

T

- Tapia, Richard, 464
- Temperature, 443
- Terms
 - of a fraction, 90
 - of a proportion, 269
 - similar, 565, 580
- Time, 449
- Triangle, 19
 - area, 113, 475
 - labeling, 618
 - perimeter, 19, 467

right, 501

- Sierpinski, 233, 516
- similar, 281
- sum of angles in, 618

U

- Unit analysis, 415, 425, 435
- Unit pricing, 260
- Units
 - area, 426, 427
 - length, 416, 418
 - mixed, 450
 - volume, 428, 429
 - weight, 435

V

- Variable, 564
- Variable term, 607
- Vertex of an angle, 582
- Volume, 491
 - cone, 492
 - metric units of, 429
 - rectangular solid, 491
 - right circular cylinder, 492
 - sphere, 229, 493

U.S. units of, 428

W

- Weight
 - metric units of, 435
 - U.S. units of, 435
- Weighted average, 217
- Whole numbers, 8
 - addition with, 14
 - division with, 56
 - multiplication with, 41, 46
 - rounding, 25
 - subtraction with, 34
 - writing in words, 6
- Wizard of Oz, 244
- Writing numbers
 - in words, 6, 186
 - with digits, 7

Z

- Zero
 - and addition, 16
 - and division, 61
 - as an exponent, 68
 - and multiplication, 46