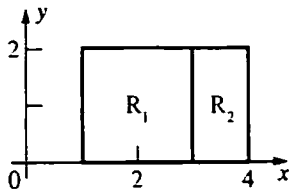


16.1 Concepts Review

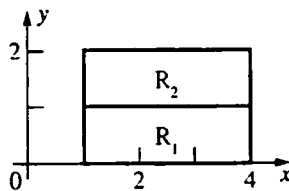
1.  $\sum_{k=1}^n f(\bar{x}_k, \bar{y}_k) \Delta A_k$
2. the volume of the solid under  $z = f(x, y)$  and above  $R$
3. continuous
4. 12

Problem Set 16.1

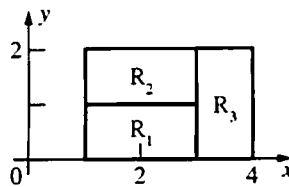
1.  $\iint_{R_1} 2 dA + \iint_{R_2} 3 dA = 2A(R_1) + 3A(R_2)$   
 $= 2(4) + 3(2) = 14$



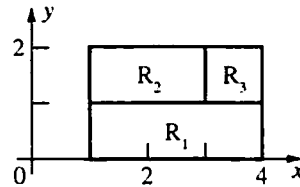
2.  $\iint_{R_1} (-1) dA + \iint_{R_2} 2 dA = (-1)A(R_1) + 2A(R_2)$   
 $= (-1)(3) + 2(3) = 3$



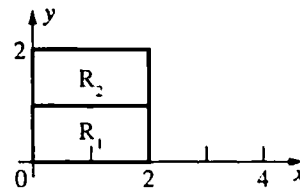
3.  $\iint_R f(x, y) dA = \iint_{R_1} 2 dA + \iint_{R_2} 1 dA + \iint_{R_3} 3 dA$   
 $= 2A(R_1) + 1A(R_2) + 3A(R_3)$   
 $= 2(2) + 1(2) + 3(2) = 12$



4.  $\iint_{R_1} 2 dA + \iint_{R_2} 3 dA + \iint_{R_3} 1 dA$   
 $= 2A(R_1) + 3A(R_2) + 1A(R_3)$   
 $= 2(3) + 3(2) + 1(1) = 13$



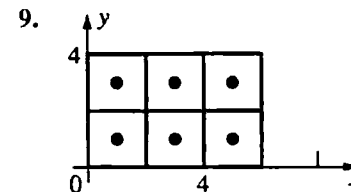
5.  $3 \iint_R f(x, y) dA - \iint_R g(x, y) dA = 3(3) - (5) = 4$



6.  $2 \iint_R f(x, y) dA + 5 \iint_R g(x, y) dA$   
 $= 2(3) + 5(5) = 31$

7.  $\iint_R g(x, y) dA - \iint_{R_1} g(x, y) dA = (5) - (2) = 3$

8.  $2 \iint_{R_1} g(x, y) dA + \iint_{R_1} 3 dA = 2(2) + 3A(R_1)$   
 $= 4 + 3(2) = 10$



$[f(1, 1) + f(3, 1) + f(5, 1) + f(1, 3) + f(3, 3)$   
 $+ f(5, 3)](4) = [(10) + (8) + (6) + (8) + (6)$   
 $+ (4)](4) = 168$

10.  $4(9 + 9 + 9 + 1 + 1 + 1) = 120$

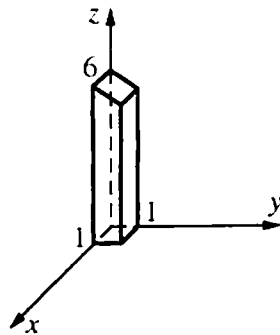
11.  $4(3 + 11 + 27 + 19 + 27 + 43) = 520$

$$12. \left[ \left( \frac{41}{6} \right) + \left( \frac{33}{6} \right) + \left( \frac{25}{6} \right) + \left( \frac{35}{6} \right) + \left( \frac{27}{6} \right) + \left( \frac{19}{6} \right) \right] (4) = 120$$

$$13. 4(\sqrt{2} + \sqrt{4} + \sqrt{6} + \sqrt{4} + \sqrt{6} + \sqrt{8}) \approx 52.5665$$

$$14. 4(e + e^3 + e^5 + e^3 + e^9 + e^{15}) \approx 13109247$$

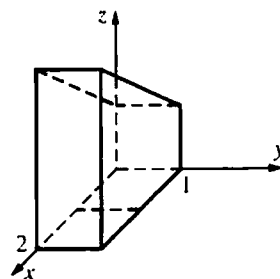
15.



$z = 6 - y$  is a plane parallel to the  $x$ -axis. Let  $T$  be the area of the front trapezoidal face; let  $D$  be the distance between the front and back faces.

$$\iint_R (6 - y) dA = \text{volume of solid} = (T)(D) = \left[ \left( \frac{1}{2} \right) (6 + 5) \right] (1) = 5.5$$

16.



$z = 1 + x$  is a plane parallel to the  $y$ -axis.

$\iint_R (1 + x) dA$  is the product of the area of a trapezoidal side face and the distance between the side faces.

$$= \left[ \left( \frac{1}{2} \right) (1 + 3)(2) \right] (1) = 4$$

$$17. \iint_R 0 dA = 0A(R) = 0$$

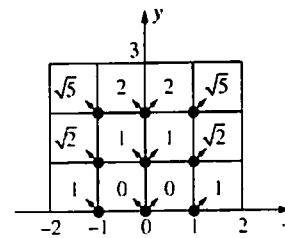
The conclusion follows.

$$18. \iint_R m dA < \iint_R f(x, y) dA < \iint_R M dA$$

(Comparison property)

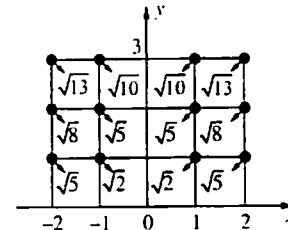
$$\text{Therefore, } ma(R) < \iint_R f(x, y) dA < MA(R)$$

19.



For  $c$ , take the sample point in each square to be the point of the square that is closest to the origin.

$$\text{Then } c = 2\sqrt{5} + 2\sqrt{2} + 2(2) + 4(1) \approx 15.3006$$



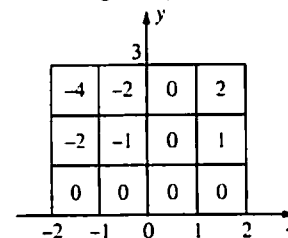
For  $C$ , take the sample point in each square to be the point of the square that is farthest from the origin. Then,

$$C = 2\sqrt{13} + 2\sqrt{10} + 2\sqrt{8} + 4\sqrt{5} + 2\sqrt{2} \approx 30.9652.$$

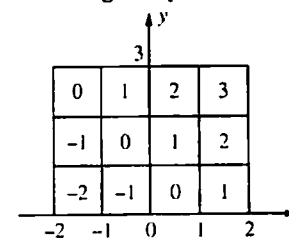
20. The integrand is symmetric with respect to the  $y$ -axis, so the value of the integral is 0.

21. The values of  $[[x]]$  and  $[[y]]$  are indicated in the various square subregions of  $R$ . In each case the value of the integral on  $R$  is the sum of the values in the squares since the area of each square is 1.

a. The integral equals  $-6$ .



b. The integral equals 6.



22. Mass of the plate in grams

23. Total rainfall in Colorado in 1999; average rainfall in Colorado in 1999

24. For each partition of  $R$ , each subrectangle contains some points at which  $f(x, y) = 0$  and some points at which  $f(x, y) = 1$ . Therefore, for each partition there are sample points for which the Riemann sum is 0 and others for which the Riemann sum is  $(1)[\text{Area}(R)] = 12$ .

25. To begin, we divide the region  $R$  (we will use the outline of the contour plot) into 16 equal squares. Then we can approximate the volume by

$$V = \iint_R f(x, y) dA \approx \sum_{k=1}^{16} f(\bar{x}_k, \bar{y}_k) \Delta A_k.$$

Each square will have  $\Delta A = (1 \cdot 1) = 1$  and we will use the height at the center of each square as  $f(\bar{x}_k, \bar{y}_k)$ .

Therefore, we get

$$\begin{aligned} V &\approx \sum_{k=1}^{16} f(\bar{x}_k, \bar{y}_k) = 20 + 21 + 24 + 29 + 22 + 23 + 26 + 32 + 26 + 27 + 30 + 35 + 32 + 33 + 36 + 42 \\ &= 458 \text{ cubic units} \end{aligned}$$

## 16.2 Concepts Review

- iterated
- $\int_{-1}^2 \left[ \int_0^2 f(x, y) dy \right] dx$ ,  $\int_0^2 \left[ \int_{-1}^2 f(x, y) dx \right] dy$
- signed; plus; minus
- is below the  $xy$ -plane

## Problem Set 16.2

$$1. \int_0^2 \left[ \left( \frac{1}{2} \right) x^2 y^2 \right]_{y=1}^3 dx = \int_0^2 4x^2 dx = \frac{32}{3}$$

$$2. \int_{-1}^4 \left[ xy + \left( \frac{1}{3} \right) y^3 \right]_{y=1}^2 dx = \int_{-1}^4 \left( x + \frac{7}{3} \right) dx = \frac{115}{6}$$

$$\begin{aligned} 3. \int_1^2 \left[ \frac{x^2 y}{2} + xy^2 \right]_{x=0}^3 dx &= \int_1^2 \left( \frac{9y}{2} + 3y^2 \right) dy \\ &= \left[ \frac{9y^2}{4} + y^3 \right]_1^2 = 17 - \frac{13}{4} = \frac{55}{4} = 13.75 \end{aligned}$$

$$4. \int_{-1}^1 \left[ \left( \frac{1}{3} \right) x^3 + xy^2 \right]_{x=1}^2 dy = \int_{-1}^1 \left( \frac{7}{3} + y^2 \right) dy = \frac{16}{3}$$

$$5. \int_0^\pi \left[ \left( \frac{1}{2} \right) x^2 \sin y \right]_{x=0}^1 dy = \int_0^\pi \left( \frac{1}{2} \right) \sin y dy = 1$$

$$\begin{aligned} 6. \int_0^{\ln 3} \int_0^{\ln 2} e^x e^y dy dx &= \int_0^{\ln 3} [e^x e^y]_{y=0}^{\ln 2} dx \\ &= \int_0^{\ln 3} [e^x (2) - e^x (1)] dx = \int_0^{\ln 3} e^x dx \\ &= [e^x]_0^{\ln 3} = 3 - 1 = 2 \end{aligned}$$

$$\begin{aligned} 7. \int_0^{\pi/2} [-\cos xy]_{y=0}^1 dx &= \int_0^{\pi/2} (1 - \cos x) dx \\ &= \frac{\pi}{2} - 1 \approx 0.5708 \end{aligned}$$

$$8. \int_0^1 [e^{xy}]_{y=0}^1 dx = \int_0^1 (e^x - 1) dx = e - 2 \approx 0.7183$$

$$\begin{aligned} 9. \int_0^3 \left[ \frac{2(x^2 + y)^{3/2}}{3} \right]_{x=0}^1 dy &= \int_0^3 \frac{2[(1+y)^{3/2} - y^{3/2}]}{3} dy \\ &= \left[ \frac{4[(1+y)^{5/2} - y^{5/2}]}{15} \right]_0^3 = \frac{4(32 - 9\sqrt{3}) - 4}{15} \\ &= \frac{4(31 - 9\sqrt{3})}{15} \approx 4.1097 \end{aligned}$$

$$\begin{aligned} 10. \int_0^1 [-(xy+1)^{-1}]_{x=0}^1 dy &= \int_0^1 \left( 1 - \frac{1}{y+1} \right) dy \\ &= 1 - \ln 2 \approx 0.3069 \end{aligned}$$

$$\begin{aligned} 11. \int_0^{\ln 3} \left[ \left( \frac{1}{2} \right) \exp(xy^2) \right]_{y=0}^1 dx &= \int_0^{\ln 3} \left( \frac{1}{2} \right) (e^x - 1) dx \\ &= 1 - \left( \frac{1}{2} \right) \ln 3 \approx 0.4507 \end{aligned}$$

$$12. \int_0^1 \left[ \frac{y^2}{2(1+x^2)} \right]_{y=0}^2 dx = \int_0^1 \frac{2}{1+x^2} dx$$

$$= [2 \tan^{-1} x]_0^1 = 2 \left( \frac{\pi}{4} \right) - 0 = \frac{\pi}{2}$$

$$13. \int_0^1 0 dx = 0 \text{ (since } xy^3 \text{ defines an odd function in } y).$$

$$14. \int_{-1}^1 \left[ x^2 y + \left( \frac{1}{3} \right) y^3 \right]_{y=0}^2 dx = \int_{-1}^1 \left( 2x^2 + \frac{8}{3} \right) dx$$

$$= \left[ \left( \frac{2}{3} \right) x^3 + \left( \frac{8}{3} \right) x \right]_{-1}^1 = \frac{20}{3}$$

$$15. \int_0^{\pi/2} \int_0^{\pi/2} \sin(x+y) dx dy$$

$$= \int_0^{\pi/2} [-\cos(x+y)]_{x=0}^{\pi/2} dy$$

$$= \int_0^{\pi/2} \left[ -\cos\left(\frac{\pi}{2} + y\right) + \cos y \right] dy$$

$$= \int_0^{\pi/2} (\sin y + \cos y) dy = [-\cos y + \sin y]_0^{\pi/2}$$

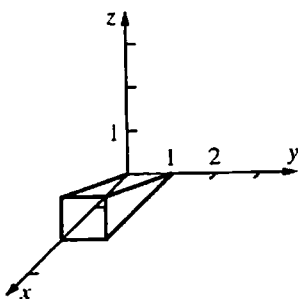
$$= (0 + 1) - (-1 + 0) = 2$$

$$16. \int_1^2 \left[ \left( \frac{1}{3} \right) y(1+x^2)^{3/2} \right]_{x=0}^{\sqrt{3}} dy = \int_1^2 \left( \frac{7}{3} \right) y dy$$

$$= \left[ \left( \frac{7}{6} \right) y^2 \right]_1^2 = 3.5$$

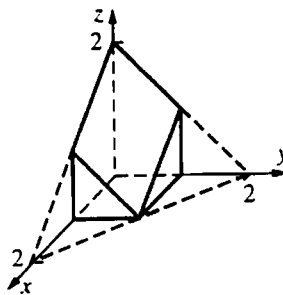
$$17. z = \frac{x}{2} \text{ is a plane.}$$

$$x - 2z = 0$$

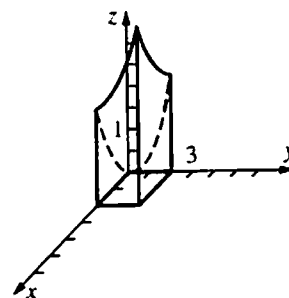


$$18. z = 2 - x - y \text{ is a plane.}$$

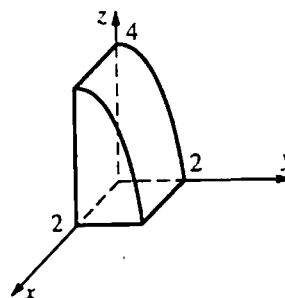
$$x + y + z = 2$$



$$19. z = x^2 + y^2 \text{ is a paraboloid opening upward with } z\text{-axis for axis.}$$



$$20. z = 4 - y^2 \text{ is a parabolic cylinder parallel to the } x\text{-axis.}$$



$$21. \int_1^3 \int_0^1 (x+y+1) dx dy = \int_1^3 \left[ \left( \frac{1}{2} \right) x^2 + yx + x \right]_{x=0}^1 dy$$

$$= \int_1^3 \left( y + \frac{3}{2} \right) dy = 7$$

$$22. \int_1^2 \int_0^4 (2x+3y) dy dx = \int_1^2 \left[ 2xy + \left( \frac{3}{2} \right) y^2 \right]_{y=0}^4 dx$$

$$= \int_1^2 (8x + 24) dx = 36$$

$$23. x^2 + y^2 + 2 > 1$$

$$\int_{-1}^1 \int_0^1 [(x^2 + y^2 + 2) - 1] dy dx$$

$$= \int_{-1}^1 \left[ x^2 y + \left( \frac{1}{3} \right) y^3 + y \right]_{y=0}^1 dx$$

$$= \int_{-1}^1 \left( x^2 + \frac{4}{3} \right) dx = \frac{10}{3}$$

$$24. \int_0^2 \int_0^2 (4-x^2) dx dy = \int_0^2 \left[ 4x - \frac{x^3}{3} \right]_0^2 dy$$

$$= \int_0^2 \left( \frac{16}{3} \right) dy = \left[ \frac{16y}{3} \right]_0^2 = \frac{32}{3}$$

$$25. \int_a^b \int_c^d g(x)h(y) dy dx = \int_a^b g(x) \int_c^d h(y) dy dx$$

$$= \int_c^d h(y) dy \int_a^b g(x) dx$$

(First step used linearity of integration with respect to  $y$ ; second step used linearity of integration with respect to  $x$ ; now commute.)

$$26. \int_0^{\sqrt{\ln 2}} x e^{x^2} dx \int_0^1 y(1+y^2)^{-1} dy$$

$$= \left[ \left( \frac{1}{2} \right) e^{x^2} \right]_0^{\sqrt{\ln 2}} \left[ \left( \frac{1}{2} \right) \ln(1+y^2) \right]_0^1$$

$$= \left[ \frac{1}{2} \right] \left[ \left( \frac{1}{2} \right) \ln 2 \right] = \left( \frac{1}{4} \right) \ln 2 \approx 0.1733$$

$$27. \int_0^1 \int_0^1 x y e^{x^2} e^{y^2} dy dx = \left( \int_0^1 x e^{x^2} dx \right) \left( \int_0^1 y e^{y^2} dy \right)$$

$$= \left( \int_0^1 x e^{x^2} dx \right)^2 \quad (\text{Changed the dummy variable } y$$

to the dummy variable  $x$ .)

$$= \left( \left[ \frac{e^{x^2}}{2} \right]_0^1 \right)^2 = \left( \frac{e-1}{2} \right)^2 \approx 0.7381$$

$$28. V = \int_{-\pi}^{\pi} \int_{-\pi}^{\pi} |\cos x \cos y| dx dy$$

$$= \int_{-\pi}^{\pi} |\cos x| dx \int_{-\pi}^{\pi} |\cos y| dy = \left( \int_{-\pi}^{\pi} |\cos x| dx \right)^2$$

$$= \left( 4 \int_0^{\pi/2} |\cos x| dx \right)^2 = \left( 4[\sin x]_0^{\pi/2} \right)^2 = 16$$

$$29. \int_{-2}^2 x^2 dx \int_1^1 |y^3| dy = 2 \int_0^2 x^2 dx \cdot 2 \int_0^1 y^3 dy$$

$$= 2 \left( \frac{8}{3} \right) 2 \left( \frac{1}{4} \right) = \frac{8}{3}$$

$$30. \int_{-2}^2 [x^2] dx \int_1^1 y^3 dy = 0 \quad (\text{since the second integral equals 0}).$$

$$31. \int_{-2}^2 [x^2] dx \int_1^1 |y^3| dy = 2 \int_0^2 [x^2] dx \cdot 2 \int_0^1 y^3 dy$$

$$= 2 \left[ \int_0^1 0 dx + \int_1^{\sqrt{2}} 1 dx + \int_{\sqrt{2}}^{\sqrt{3}} 2 dx + \int_{\sqrt{3}}^2 3 dx \right] \left[ 2 \left( \frac{1}{4} \right) \right]$$

$$= 2 \left[ 0 + (\sqrt{2}-1) + 2(\sqrt{3}-\sqrt{2}) + 3(2-\sqrt{3}) \right] \left[ \frac{1}{2} \right]$$

$$= 5 - \sqrt{3} - \sqrt{2} \approx 1.8537$$

$$32. \int_0^1 \int_0^{\sqrt{3}} 8x(x^2+y^2+1)^{-2} dx dy = \int_0^1 [-4(x^2+y^2+1)^{-1}]_{x=0}^{\sqrt{3}} dy = 4 \int_0^1 \left[ \frac{-1}{4+y^2} + \frac{1}{1+y^2} \right] dy$$

$$= 4 \left[ -\frac{1}{2} \arctan\left(\frac{y}{2}\right) + \arctan(y) \right]_0^1 = 4 \left[ \left( -\frac{1}{2} \arctan\left(\frac{1}{2}\right) + \frac{\pi}{4} \right) - 0 \right] = \pi - 2 \arctan\left(\frac{1}{2}\right) \approx 2.2143$$

$$33. 0 \leq \int_a^b \int_a^b [f(x)g(y) - f(y)g(x)]^2 dx dy = \int_a^b \int_a^b [f^2(x)g^2(y) - 2f(x)g(x)f(y)g(y) + f^2(y)g^2(x)] dx dy$$

$$= \int_a^b f^2(x) dx \int_a^b g^2(y) dy - 2 \int_a^b f(x)g(x) dx \int_a^b f(y)g(y) dy + \int_a^b f^2(y) dy \int_a^b g^2(x) dx$$

$$= 2 \int_a^b f^2(x) dx \int_a^b g^2(x) dx - 2 \left[ \int_a^b f(x)g(x) dx \right]^2$$

Therefore,  $\left[ \int_a^b f(x)g(x) dx \right]^2 \leq \int_a^b f^2(x) dx \int_a^b g^2(x) dx$ .

$$34. \text{ Since } f \text{ is increasing, } [y-x][f(y)-f(x)] > 0. \text{ Therefore,}$$

$$0 < \int_a^b \int_a^b [y-x][f(y)-f(x)] dx dy = \int_a^b \int_a^b y f(y) dx dy - \int_a^b \int_a^b y f(x) dx dy - \int_a^b \int_a^b x f(y) dx dy + \int_a^b \int_a^b x f(x) dx dy$$

$$\begin{aligned}
&= (b-a) \int_a^b y f(y) dy - \frac{b^2-a^2}{2} \int_a^b f(x) dx - \frac{b^2-a^2}{2} \int_a^b f(y) dy + (b-a) \int_a^b x f(x) dx \\
&= 2(b-a) \int_a^b x f(x) dx - (b^2-a^2) \int_a^b f(x) dx = (b-a) \left[ 2 \int_a^b x f(x) dx - (b+a) \int_a^b f(x) dx \right]
\end{aligned}$$

Therefore,  $(b+a) \int_a^b f(x) dx < 2 \int_a^b x f(x) dx$ . Now divide each side by the positive number  $2 \int_a^b f(x) dx$  to obtain the desired result.

Interpretation:

If  $f$  is increasing on  $[a, b]$  and  $f(x) \geq 0$ , then the  $x$ -coordinate of the centroid (of the region between the graph of  $f$  and the  $x$ -axis for  $x$  in  $[a, b]$ ) is to the right of the midpoint between  $a$  and  $b$ .

Another interpretation:

If  $f(x)$  is the density at  $x$  of a wire and the density is increasing as  $x$  increases for  $x$  in  $[a, b]$ , then the center of mass of the wire is to the right of the midpoint of  $[a, b]$ .

### 16.3 Concepts Review

1. A rectangle containing  $S$ ; 0
2.  $\phi_1(x) \leq y \leq \phi_2(x)$
3.  $\int_a^b \int_{\phi_1(x)}^{\phi_2(x)} f(x, y) dy dx$
4.  $\int_0^1 \int_0^{1-x} 2x dy dx; \frac{1}{3}$

### Problem Set 16.3

1.  $\int_0^1 [x^2 y]_{y=0}^{3x} dx = \int_0^1 3x^3 dx = \frac{3}{4}$
2.  $\int_1^2 \left[ \left( \frac{1}{2} \right) y^2 \right]_{y=0}^{x-1} dx = \int_1^2 \left( \frac{1}{2} \right) (x-1)^2 dx = \frac{1}{6}$
3.  $\int_{-1}^3 \left[ \frac{x^3}{3} + y^2 x \right]_{x=0}^{3y} dy = \int_{-1}^3 (9y^3 + 3y^3) dy$   
 $= [3y^4]_{-1}^3 = 243 - 3 = 240$
4.  $\int_{-3}^1 \left[ x^2 y - \left( \frac{1}{4} \right) y^4 \right]_{y=0}^x dx = \int_{-3}^1 \left[ x^3 - \left( \frac{1}{4} \right) x^4 \right] dx$   
 $= -32.2$
5.  $\int_1^3 \left[ \left( \frac{1}{2} \right) x^2 \exp(y^3) \right]_{x=-y}^{2y} dy = \int_1^3 \left( \frac{3}{2} \right) y^2 \exp(y^3) dy$   
 $= \left( \frac{1}{2} \right) (e^{27} - e) \approx 2.660 \times 10^{11}$

$$\begin{aligned}
6. \int_1^5 \left[ \frac{3}{x} \tan^{-1} \left( \frac{y}{x} \right) \right]_{y=0}^x dx &= \int_1^5 \frac{3}{x} \frac{\pi}{4} dx \\
&= \left[ \frac{3\pi \ln x}{4} \right]_1^5 = \frac{3\pi \ln 5}{4} \approx 3.7921
\end{aligned}$$

$$\begin{aligned}
7. \int_{1/2}^1 [y \cos(\pi x^2)]_{y=0}^{2x} dx &= \int_{1/2}^1 2x \cos(\pi x^2) dx \\
&= -\frac{\sqrt{2}}{2\pi} \approx -0.2251
\end{aligned}$$

$$\begin{aligned}
8. \int_0^{\pi/4} \left[ \left( \frac{1}{2} \right) r^2 \right]_{r=\sqrt{2}}^{\sqrt{2} \cos \theta} d\theta &= \int_0^{\pi/4} (\cos^2 \theta - 1) d\theta \\
&= \frac{(2-\pi)}{8} \approx -0.1427
\end{aligned}$$

$$\begin{aligned}
9. \int_0^{\pi/9} [\tan \theta]_{\theta=\pi/4}^{3r} dr &= \int_0^{\pi/9} (\tan 3r - 1) dr \\
&= \left[ -\frac{\ln |\cos 3r|}{3} - r \right]_0^{\pi/9} \\
&= \left( -\frac{\ln \left( \frac{1}{2} \right)}{3} - \frac{\pi}{9} \right) - \left( -\frac{\ln(1)}{3} - 0 \right) \\
&= \frac{3 \ln 2 - \pi}{9} \approx -0.1180
\end{aligned}$$

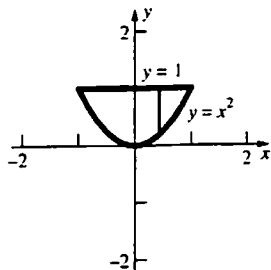
$$\begin{aligned}
10. \int_0^{\pi/2} [e^x \cos y]_{x=0}^{\sin y} dy &= \int_0^{\pi/2} (e^{\sin y} \cos y - \cos y) dy \\
&= e - 2 \approx 0.7183
\end{aligned}$$

$$\begin{aligned}
11. \int_0^2 \left[ xy + \left( \frac{1}{2} \right) y^2 \right]_{y=0}^{\sqrt{4-x^2}} dx &= \int_0^2 \left[ x(4-x^2)^{1/2} + 2 - \left( \frac{1}{2} \right) x^2 \right] dx = \frac{16}{3}
\end{aligned}$$

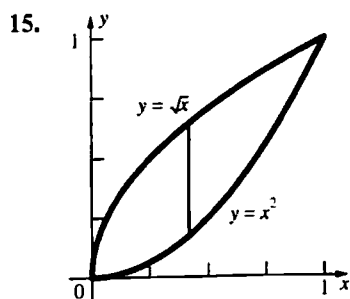
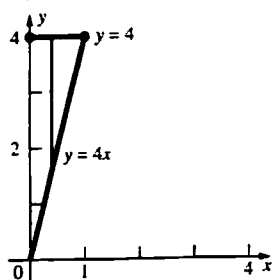
$$12. \int_{\pi/6}^{\pi/2} [3r^2 \cos \theta]_{r=0}^{\sin \theta} d\theta = \int_{\pi/6}^{\pi/2} 3 \sin^2 \theta \cos \theta d\theta$$

$$= [\sin^3 \theta]_{\pi/6}^{\pi/2} = \frac{7}{8} = 0.875$$

$$13. \int_{-1}^1 \int_{x^2}^1 xy dy dx = 0$$



$$14. \int_0^1 \int_{4x}^4 (x+y) dy dx = 6$$



$$\int_0^1 \int_{x^2}^{\sqrt{x}} (x^2 + 2y) dy dx = \int_0^1 [x^2 y + y^2]_{y=x^2}^{\sqrt{x}} dx$$

$$= \int_0^1 [(x^{5/2} + x) - (x^4 + x^4)] dx$$

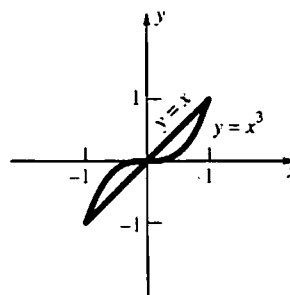
$$= \left[ \frac{2x^{7/2}}{7} + \frac{x^2}{2} - \frac{2x^5}{5} \right]_0^1 = \frac{2}{7} + \frac{1}{2} - \frac{2}{5}$$

$$= \frac{27}{70} \approx 0.3857$$

$$16. \int_0^2 \int_x^{3x-x^2} (x^2 - xy) dy dx = \frac{52}{15}$$

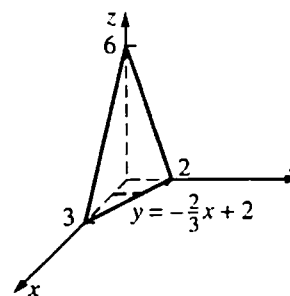
$$17. \int_0^2 \int_x^2 2(1+x^2)^{-1} dy dx = 4 \tan^{-1} 2 - \ln 5 \approx 2.8192$$

18.



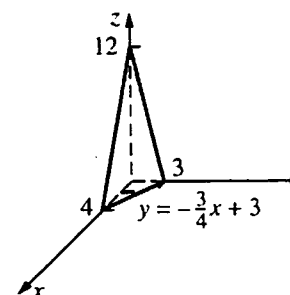
Since  $S$  is symmetric with respect to the origin and the integrand is an odd function in  $x$ , the value of the integral is 0.

19.



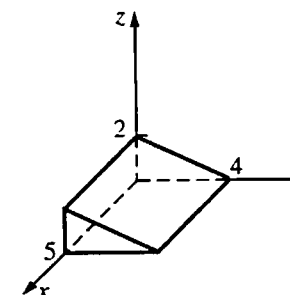
$$\int_0^3 \int_0^{(-2/3)x+2} (6-2x-3y) dy dx = 6$$

20.



$$\int_0^4 \int_0^{(-3/4)x+3} (12-3x-4y) dy dx = 24$$

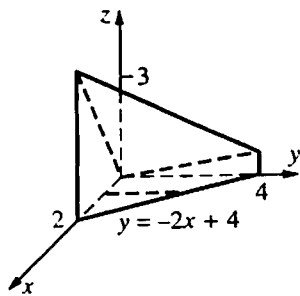
21.



$$\int_0^5 \int_0^{4-y} \frac{4-y}{2} dy dx = \left( \int_0^5 1 dx \right) \left( \int_0^{4-y} \frac{4-y}{2} dy \right)$$

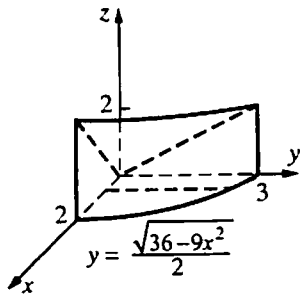
$$= 5 \left[ 2y - \frac{y^2}{4} \right]_0^{4-y} = 5(8-4) = 20$$

22.



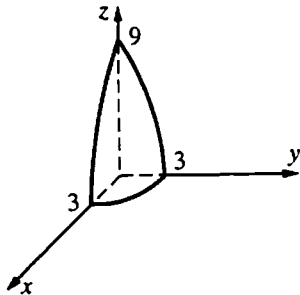
$$\int_0^2 \int_0^{-2x+4} \left[ 2x + \left(\frac{1}{4}\right)y \right] dy dx = \frac{20}{3}$$

23.



$$\int_0^2 \int_0^{(1/2)\sqrt{36-9x^2}} \left(\frac{1}{6}\right)(9x+4y) dy dx = 10$$

24.



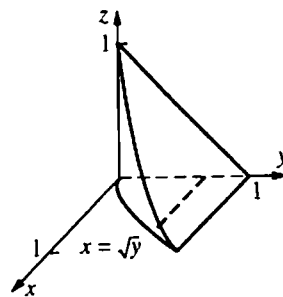
$$\begin{aligned} & \int_0^3 \int_0^{\sqrt{9-x^2}} (9-x^2-y^2) dy dx \\ &= \int_0^3 \left[ (9-x^2)y - \frac{y^3}{3} \right]_{y=0}^{\sqrt{9-x^2}} dx \\ &= \int_0^3 \frac{2(9-x^2)^{3/2}}{3} dx = \int_0^{\pi/2} 18 \cos^3 t \cdot 3 \cos t dt \\ &= \int_0^{\pi/2} 54 \cos^4 t dt \\ &= \int_0^{\pi/2} \left( \frac{81}{4} + 27 \cos 2t + \frac{27 \cos 4t}{4} \right) dt \\ &= \left[ \frac{81t}{4} + \frac{27 \sin 2t}{2} + \frac{27 \sin 4t}{16} \right]_0^{\pi/2} \\ &= \frac{81\pi}{8} \approx 31.8086 \end{aligned}$$

(At the third step, the substitution  $x = 3 \sin t$  was

used. At the 5th step the identity

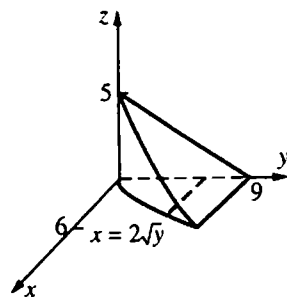
$$\cos^2 A = \left(\frac{1}{2}\right)(1 + \cos 2A) \text{ was used a few times.})$$

25.

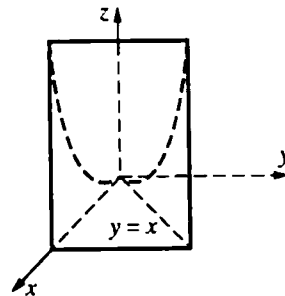


$$\int_0^1 \int_0^{\sqrt{y}} (1-y) dx dy = \frac{4}{15}$$

$$26. \int_0^9 \int_0^{2\sqrt{y}} \left[ 5 - \left(\frac{5}{9}\right)y \right] dx dy = 72$$



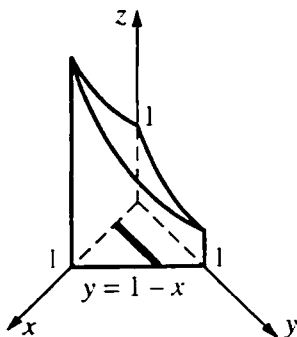
27.



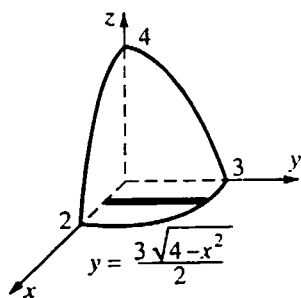
$$\begin{aligned} & \int_0^1 \int_0^x \tan x^2 dy dx = \int_0^1 [y \tan x^2]_{y=0}^x dx \\ &= \int_0^1 x \tan x^2 dx = \left[ -\frac{\ln |\cos x^2|}{2} \right]_0^1 = \left(-\frac{1}{2}\right) \ln(\cos 1) \\ &\approx 0.3078 \end{aligned}$$



$$28. \int_0^1 \int_0^{1-x} e^{x-y} dy dx = \left(\frac{1}{2}\right)(e + e^{-1} - 2) \approx 0.5431$$



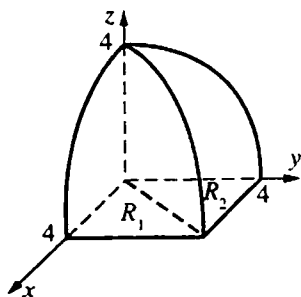
29.



$$\int_0^2 \int_0^{(3/2)\sqrt{4-x^2}} \left[4-x^2 - \left(\frac{4}{9}\right)y^2\right] dy dx = 3\pi$$

$$\approx 9.4248$$

30.



Making use of symmetry, the volume is

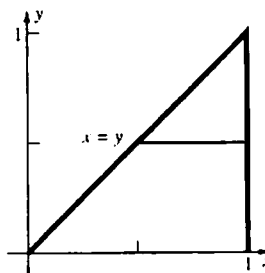
$$2 \iint_{R_1} (16-x^2)^{1/2} dA = 2 \int_0^4 \int_0^x (16-x^2)^{1/2} dy dx$$

$$= 2 \int_0^4 [(16-x^2)^{1/2} y]_{y=0}^x dx$$

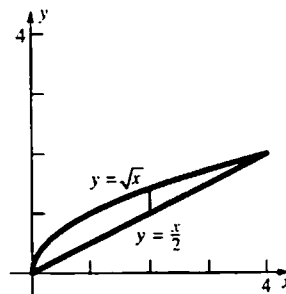
$$= 2 \int_0^4 (16-x^2)^{1/2} x dx = \left[ \frac{-2(16-x^2)^{3/2}}{3} \right]_0^4$$

$$= 0 + \frac{2(64)}{3} = \frac{128}{3} \approx 42.6667$$

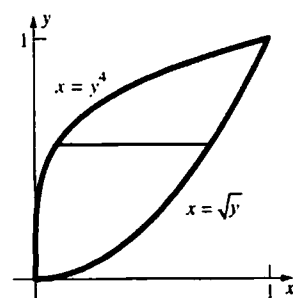
$$31. \int_0^1 \int_y^1 f(x, y) dx dy$$



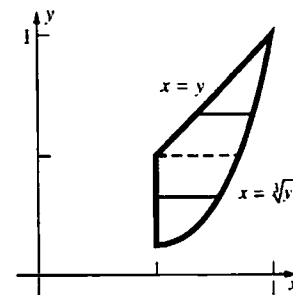
$$32. \int_0^4 \int_{x/2}^{\sqrt{x}} f(x, y) dy dx$$



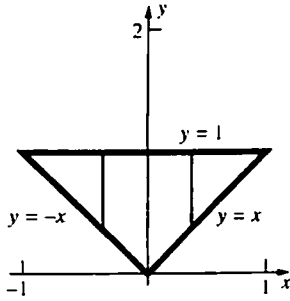
$$33. \int_0^1 \int_{y^4}^{\sqrt{y}} f(x, y) dx dy$$



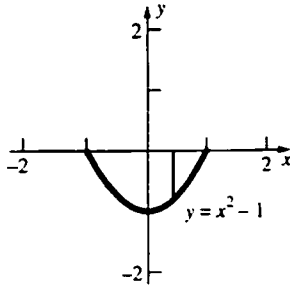
$$34. \int_{1/8}^{1/2} \int_{1/2}^{y^{1/3}} f(x, y) dx dy + \int_{1/2}^1 \int_y^{y^{1/3}} f(x, y) dx dy$$



$$35. \int_{-1}^0 \int_{-x}^1 f(x, y) dy dx + \int_0^1 \int_x^1 f(x, y) dy dx$$

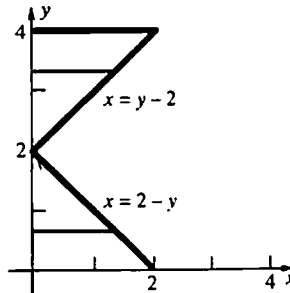


$$36. \int_{-1}^1 \int_{x^2-1}^0 f(x, y) dy dx$$



$$37. \int_0^2 \int_0^{2-y} xy^2 dx dy + \int_2^4 \int_0^{y-2} xy^2 dx dy = \frac{256}{15}$$

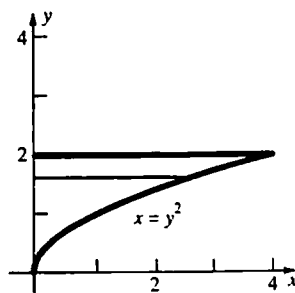
$$\approx 17.0667$$



$$38. \int_{-2}^1 \int_{x^2}^{-x+2} xy dy dx - \int_{1/\sqrt{2}}^{1/\sqrt{2}} \int_{x^2}^{1/2} xy dy dx$$

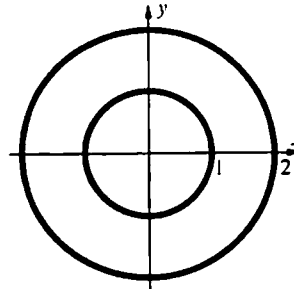
$$= -\frac{45}{8} = -5.625$$

39.



$$\begin{aligned} \int_0^2 \int_0^{y^2} \sin(y^3) dx dy &= \int_0^2 [x \sin(y^3)]_{x=0}^{y^2} dy \\ &= \int_0^2 y^2 \sin(y^3) dy = \left[ -\frac{\cos(y^3)}{3} \right]_0^2 \\ &= \frac{1 - \cos 8}{3} \approx 0.3818 \end{aligned}$$

40.



$z = f(x, y) = \sin(xy^2)$  is symmetric with respect to the  $x$ -axis, as is the annulus. Therefore, the integral equals 0.

41. The integral over  $S$  of  $x^4 y$  is 0 (see Problem 40).

Therefore,

$$\begin{aligned} \iint_S (x^2 + x^4 y) dA &= \iint_S x^2 dA \\ &= 4 \left( \iint_{S_1} x^2 dA + \iint_{S_2} x^2 dA \right) \\ &= 4 \left( \int_0^1 \int_{\sqrt{1-x^2}}^{\sqrt{4-x^2}} x^2 dy dx + \int_1^2 \int_0^{\sqrt{4-x^2}} x^2 dy dx \right) \\ &= 4 \left( \int_0^1 x^2 \sqrt{4-x^2} dx - \int_0^1 x^2 \sqrt{1-x^2} dx \right) \\ &= 4 \left( 16 \int_0^{\pi/2} \sin^2 \theta \cos^2 \theta d\theta - \int_0^{\pi/2} \sin^2 \phi \cos^2 \phi d\phi \right) \end{aligned}$$

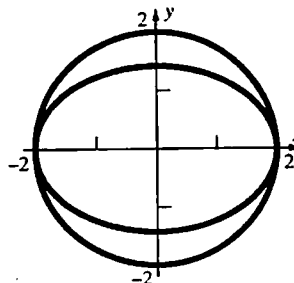
(using  $x = 2 \sin \theta$  in 1st integral;  $x = \sin \phi$  in 2nd)

$$= 60 \int_0^{\pi/2} \sin^2 \theta \cos^2 \theta d\theta = \frac{15\pi}{4}$$

(See work in Problem 42.)

$$\approx 11.7810$$

42.



$$\iint_S x^2 dA = \int_0^2 \int_{\sqrt{4-x^2}}^{\sqrt{4-x^2}} x^2 dy dx$$

$$\begin{aligned}
&= \int_0^2 x^2 \left( \sqrt{4-x^2} - \frac{\sqrt{4-x^2}}{\sqrt{2}} \right) dx \\
&= \int_0^2 x^2 \sqrt{4-x^2} \left( 1 - \frac{1}{\sqrt{2}} \right) dx \\
&= \frac{(2-\sqrt{2})}{2} \int_0^2 x^2 \sqrt{4-x^2} dx
\end{aligned}$$

$$\text{Let } x = 2 \sin \theta, \theta \text{ in } \left( -\frac{\pi}{2}, \frac{\pi}{2} \right).$$

$$\text{Then } dx = 2 \cos \theta d\theta$$

$$x = 2 \Rightarrow \theta = \frac{\pi}{2}$$

$$x = 0 \Rightarrow \theta = 0$$

$$= \frac{(2-\sqrt{2})}{2} \int_0^{\pi/2} (2 \sin \theta)^2 (2 \cos \theta) 2 \cos \theta d\theta$$

$$= 8(2-\sqrt{2}) \int_0^{\pi/2} \sin^2 \theta \cos^2 \theta d\theta$$

$$* = 8(2-\sqrt{2}) \left( \frac{\pi}{16} \right) = \frac{\pi(2-\sqrt{2})}{2}$$

Therefore,

$$\iint_S x^2 dA = 4 \left[ \frac{\pi(2-\sqrt{2})}{2} \right] = 2\pi(2-\sqrt{2}) \approx 3.6806$$

$$* = \int_0^{\pi/2} \sin^2 \theta \cos^2 \theta d\theta$$

$$= \int_0^{\pi/2} \left[ \frac{1}{2}(1-\cos 2\theta) \right] \left[ \frac{1}{2}(1+\cos 2\theta) \right] d\theta$$

## 16.4 Concepts Review

$$1. a \leq r \leq b; \alpha \leq \theta \leq \beta$$

$$2. r dr d\theta$$

$$3. \int_0^\pi \int_0^2 r^3 dr d\theta$$

$$4. 4\pi$$

## Problem Set 16.4

$$1. \int_0^{\pi/2} \left[ \left( \frac{1}{3} \right) r^3 \sin \theta \right]_{r=0}^{\cos \theta} d\theta$$

$$= \int_0^{\pi/2} \left( \frac{1}{3} \right) \cos^3 \theta \sin \theta d\theta$$

$$= \frac{1}{12} \approx 0.0833$$

$$= \frac{1}{4} \int_0^{\pi/2} (1 - \cos^2 2\theta) d\theta$$

$$= \frac{1}{4} \frac{\pi}{2} - \frac{1}{4} \int_0^{\pi/2} \frac{1}{2} (1 + \cos 4\theta) d\theta$$

$$= \frac{\pi}{8} - \frac{1}{8} \frac{\pi}{2} + \frac{1}{8} \left[ \frac{\sin 4\theta}{4} \right]_0^{\pi/2}$$

$$= \frac{\pi}{8} - \frac{\pi}{16} + 0 = \frac{\pi}{16}$$

43. We first slice the river into eleven 100' sections parallel to the bridge. We will assume that the cross-section of the river is roughly the shape of an isosceles triangle and that the cross-sectional area is uniform across a slice. We can then approximate the volume of the water by

$$\begin{aligned}
V &\approx \sum_{k=1}^{11} A_k(y_k) \Delta y = \sum_{k=1}^{11} \frac{1}{2} (w_k)(d_k) 100 \\
&= 50 \sum_{k=1}^{11} (w_k)(d_k)
\end{aligned}$$

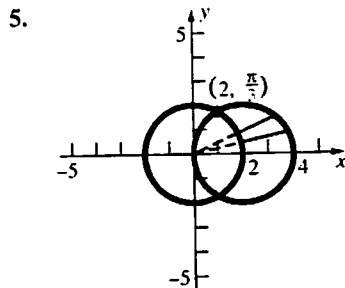
where  $w_k$  is the width across the river at the left side of the  $k$ th slice, and  $d_k$  is the center depth of the river at the left side of the  $k$ th slice. This gives

$$\begin{aligned}
V &\approx 50[300 \cdot 40 + 300 \cdot 39 + 300 \cdot 35 + 300 \cdot 31 \\
&\quad + 290 \cdot 28 + 275 \cdot 26 + 250 \cdot 25 + 225 \cdot 24 \\
&\quad + 205 \cdot 23 + 200 \cdot 21 + 175 \cdot 19] \\
&= 4,133,000 \text{ ft}^3
\end{aligned}$$

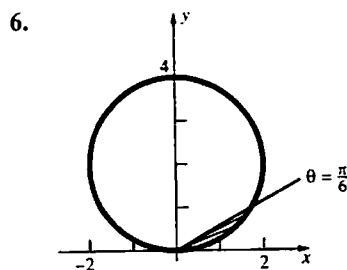
$$\begin{aligned}
2. \int_0^{\pi/2} \left[ \left( \frac{1}{2} \right) r^2 \right]_{r=0}^{\sin \theta} d\theta &= \int_0^{\pi/2} \left( \frac{1}{2} \right) \sin^2 \theta d\theta \\
&= \frac{\pi}{8} \approx 0.3927
\end{aligned}$$

$$\begin{aligned}
3. \int_0^\pi \left[ \frac{r^3}{3} \right]_{r=0}^{\sin \theta} d\theta &= \int_0^\pi \frac{\sin^3 \theta}{3} d\theta \\
&= \int_0^\pi \frac{(1 - \cos^2 \theta) \sin \theta}{3} d\theta \\
&= \left[ \frac{-\cos \theta}{3} + \frac{\cos^3 \theta}{9} \right]_0^\pi \\
&= \left( \frac{1}{3} - \frac{1}{9} \right) - \left( -\frac{1}{3} + \frac{1}{9} \right) = \frac{4}{9}
\end{aligned}$$

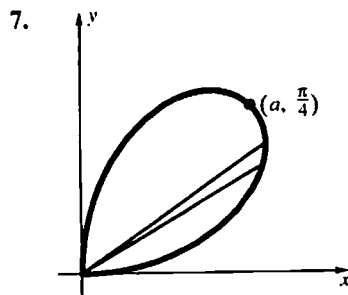
$$\begin{aligned}
 4. \quad & \int_0^\pi \left[ \left( \frac{1}{2} \right) r^2 \sin \theta \right]_{r=0}^{1-\cos \theta} d\theta \\
 &= \int_0^\pi \left( \frac{1}{2} \right) (1-\cos \theta)^2 \sin \theta d\theta \\
 &= \frac{4}{3}
 \end{aligned}$$



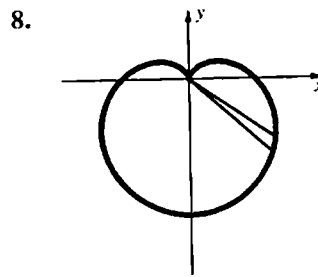
$$2 \int_0^{\pi/3} \int_2^{4 \cos \theta} r dr d\theta = 2 \left[ \frac{2\pi}{3} + \sqrt{3} \right] \approx 7.6529$$



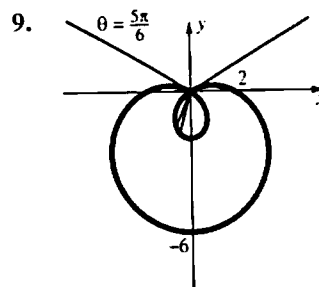
$$\begin{aligned}
 \int_0^{\pi/6} \int_0^{4 \sin \theta} r dr d\theta &= \int_0^{\pi/6} \left[ \frac{r^2}{2} \right]_0^{4 \sin \theta} d\theta \\
 &= \int_0^{\pi/6} 8 \sin^2 \theta d\theta = \int_0^{\pi/6} 4(1 - \cos 2\theta) d\theta \\
 &= [4\theta - 2 \sin 2\theta]_0^{\pi/6} = \frac{2\pi}{3} - \sqrt{3} \approx 0.3623
 \end{aligned}$$



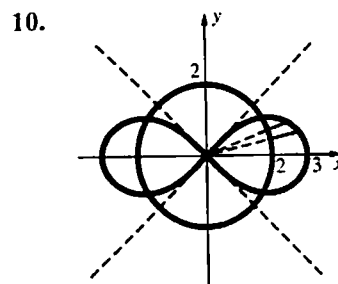
$$\int_0^{\pi/2} \int_0^{a \sin 2\theta} r dr d\theta = \frac{a^2 \pi}{8}$$



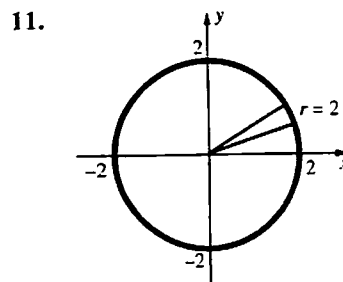
$$\int_0^{2\pi} \int_0^{6-6 \sin \theta} r dr d\theta = 54\pi \approx 169.6460$$



$$\begin{aligned}
 2 \int_{5\pi/6}^{3\pi/2} \int_0^{2-4 \sin \theta} r dr d\theta &= 2 \int_{5\pi/6}^{3\pi/2} \left[ \frac{r^2}{2} \right]_0^{2-4 \sin \theta} d\theta \\
 &= 2 \int_{5\pi/6}^{3\pi/2} (6 - 8 \sin \theta - 4 \cos 2\theta) d\theta \\
 &= 2 [6\theta + 8 \cos \theta - 2 \sin 2\theta]_{5\pi/6}^{3\pi/2} \\
 &= 2(4\pi + 3\sqrt{3}) \approx 35.525
 \end{aligned}$$

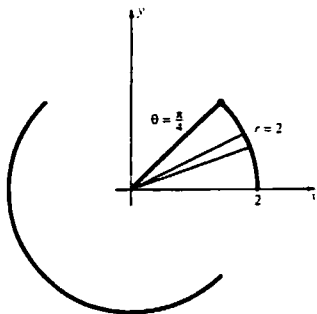


$$4 \int_0^{(1/2) \cos^{-1}(4/9)} \int_2^{3 \sqrt{\cos 2\theta}} r dr d\theta = \sqrt{65} - 4 \cos^{-1} \left( \frac{4}{9} \right) \approx 3.6213$$



$$2 \int_0^\pi \int_0^2 e^{r^2} dr d\theta = \pi(e^4 - 1) \approx 168.3836$$

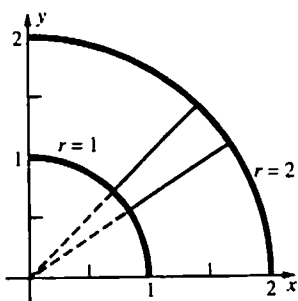
12.



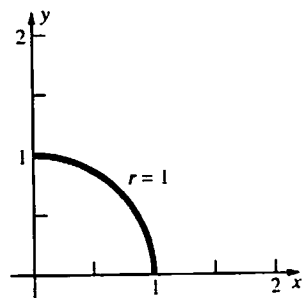
$$\begin{aligned} & \int_0^{\pi/4} \int_0^2 (4-r^2)^{1/2} r \, dr \, d\theta \\ &= \int_0^{\pi/4} \left[ \frac{(4-r^2)^{3/2}}{-3} \right]_0^2 d\theta \\ &= \int_0^{\pi/4} \left( \frac{8}{3} \right) d\theta = \left[ \frac{8\theta}{3} \right]_0^{\pi/4} = \frac{2\pi}{3} \approx 2.0944 \end{aligned}$$

$$13. \int_0^{\pi/4} \int_0^2 (4+r^2)^{-1} r \, dr \, d\theta = \left( \frac{\pi}{8} \right) \ln 2 \approx 0.2722$$

$$14. \int_0^{\pi/2} \int_1^2 r \sin \theta \, dr \, d\theta = \frac{7}{3}$$

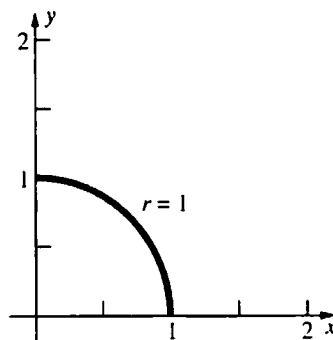


15.

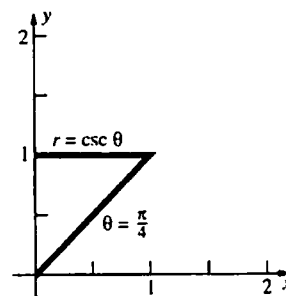


$$\begin{aligned} & \int_0^{\pi/2} \int_0^1 (4-r^2)^{-1/2} r \, dr \, d\theta \\ &= \int_0^{\pi/2} \left[ -(4-r^2)^{1/2} \right]_0^1 d\theta \\ &= \int_0^{\pi/2} (-\sqrt{3} + 2) d\theta = (-\sqrt{3} + 2) \left( \frac{\pi}{2} \right) \approx 0.4209 \end{aligned}$$

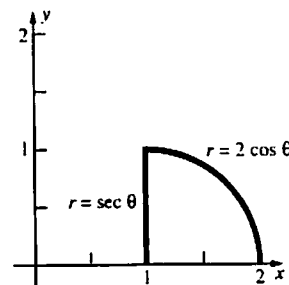
$$16. \int_0^{\pi/2} \int_0^1 [\sin(r^2)] r \, dr \, d\theta = \left( \frac{\pi}{4} \right) (1 - \cos 1) \approx 0.3610$$



$$17. \int_{\pi/4}^{\pi/2} \int_0^{\csc \theta} r^2 \cos^2 \theta \, r \, dr \, d\theta = \frac{1}{12} \approx 0.0833$$

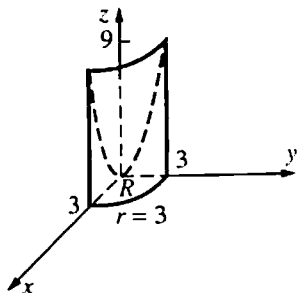


18.



$$\begin{aligned} & \int_0^{\pi/4} \int_{\sec \theta}^{2 \cos \theta} r^{-1} r \, dr \, d\theta = \int_0^{\pi/4} [r]_{\sec \theta}^{2 \cos \theta} d\theta \\ &= \int_0^{\pi/4} (2 \cos \theta - \sec \theta) d\theta \\ &= \left[ 2 \sin \theta - \ln |\sec \theta + \tan \theta| \right]_0^{\pi/4} \\ &= \left[ \sqrt{2} - \ln(\sqrt{2} + 1) \right] - [0 - \ln(1 + 0)] \\ &= \sqrt{2} - \ln(\sqrt{2} + 1) \approx 0.5328 \end{aligned}$$

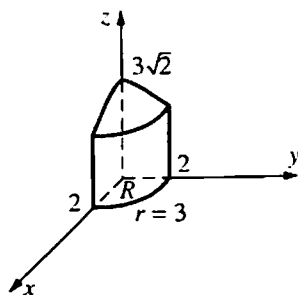
19.



$$\iint_R (x^2 + y^2) dA = \int_0^{\pi/2} \int_0^3 r^2 r dr d\theta$$

$$= \frac{81\pi}{8} \approx 31.8086$$

20.

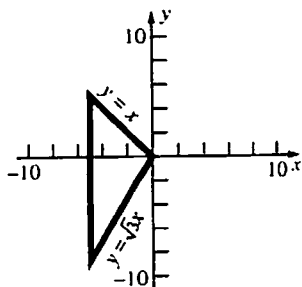


$$4 \iint_R (18 - 2x^2 - 2y^2)^{1/2} dA$$

$$= 4 \int_0^{\pi/2} \int_0^2 (18 - 2r^2)^{1/2} r dr d\theta$$

$$= \left(\frac{\pi}{3}\right) (18^{3/2} - 10^{3/2}) \approx 46.8566$$

21.



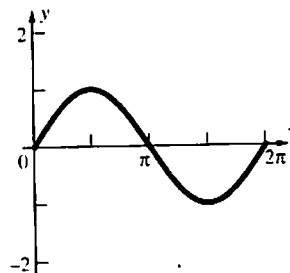
$$\int_{-5}^0 \int_{\sqrt{3}x}^x (y^2) dy dx = \int_{-5}^0 \left[ \frac{y^3}{3} \right]_{\sqrt{3}x}^x dx$$

$$= \int_{-5}^0 \frac{-1-3\sqrt{3}}{3} x^3 dx = \left[ \frac{(-1-3\sqrt{3})x^4}{12} \right]_{-5}^0$$

$$= \frac{(1+3\sqrt{3})625}{12} \approx 322.7163$$

22. a. The solid bounded by the  $xy$ -plane and  $z = \sin \sqrt{x^2 + y^2}$  for  $x^2 + y^2 \leq 4\pi^2$  is the solid of revolution obtained by revolving

about the  $z$ -axis the region in the  $xz$ -plane that is bounded by the  $x$ -axis and the graph of  $z = \sin x$  for  $0 \leq x \leq 2\pi$ .



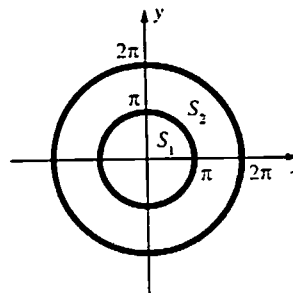
Regions  $A$  and  $B$  are congruent but region  $B$  is farther from the origin, so it generates a larger solid than region  $A$  generates. Therefore, the integral is negative.

b.  $V = \int_0^{2\pi} \int_0^{2\pi} (\sin r) r dr d\theta = 2\pi \int_0^{2\pi} (\sin r) r dr$

Now use integration by parts.

$$= 2\pi(-2\pi) = -4\pi^2 \approx -39.4784$$

c.



$$W = \iint_{S_1} \sin \sqrt{x^2 + y^2} dA + \iint_{S_2} -\sin \sqrt{x^2 + y^2} dA$$

$$= \int_0^{2\pi} \left[ \int_0^{\pi} (\sin r) r dr - \int_0^{2\pi} (\sin r) r dr \right] d\theta$$

$$= 2\pi[(\pi) - (-3\pi)] = 8\pi^2 \approx 78.9568$$

23. This can be done by the methods of this section, but an easier way to do it is to realize that the intersection is the union of two congruent segments (of one base) of the spheres, so (see Problem 20, Section 6.2, with  $d = h$  and  $a = r$ ) the volume is  $2 \left[ \left( \frac{1}{3} \right) \pi d^2 (3a - d) \right] = 2\pi d^2 \frac{(3a - d)}{3}$ .

24.  $100 = \int_0^{2\pi} \int_0^{10} k e^{-r/10} r dr d\theta = 2\pi \int_0^{10} k e^{-r/10} r dr$

Let  $u = r$  and  $dv = e^{-r/10} dr$ .

Then  $du = dr$  and  $v = -10e^{-r/10}$ .

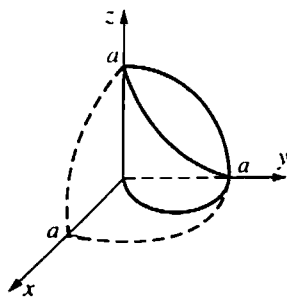
$$= 2\pi k \left( \left[ -10r e^{-r/10} \right]_0^{10} + \int_0^{10} 10 e^{-r/10} dr \right)$$

$$= 2\pi k \left( -100e^{-1} - \left[ 100e^{-r/10} \right]_0^{10} \right)$$

$$= 2\pi k(-100e^{-1} - 100e^{-1} + 100)$$

$$= 200\pi k(1 - 2e^{-1}), \text{ so } k = \frac{e}{2\pi(e-2)} \approx 0.6023.$$

25.



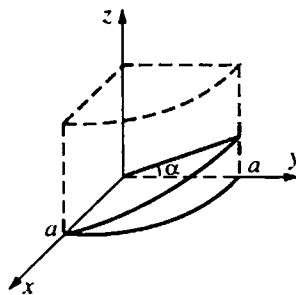
$$\text{Volume} = 4 \int_0^{\pi/2} \int_0^{a \sin \theta} \sqrt{a^2 - r^2} r dr d\theta$$

$$= \int_0^{\pi/2} \left[ \left( -\frac{1}{3} \right) (a^3 \cos^3 \theta - a^3) \right] d\theta$$

$$= \left( -\frac{4}{3} \right) a^3 \left[ \frac{2}{3} - \frac{\pi}{2} \right] = \left( \frac{2}{9} \right) a^3 (3\pi - 4)$$

26. Normal vector to plane is  $\langle 0, -\sin \alpha, \cos \alpha \rangle$ .

Therefore, an equation of the plane is  $(-\sin \alpha)y + (\cos \alpha)z = 0$ , or  $z = (\tan \alpha)y$ , or  $z = (\tan \alpha)(r \sin \theta)$ .



$$\text{Volume} = 2 \int_0^{\pi/2} \int_0^a (\tan \alpha) r \sin \theta r dr d\theta$$

$$= 2(\tan \alpha) \int_0^{\pi/2} \sin \theta d\theta \int_0^a r^2 dr$$

$$= 2(\tan \alpha) [1] \left[ \frac{a^3}{3} \right] = \left( \frac{2}{3} \right) a^3 \tan \alpha$$

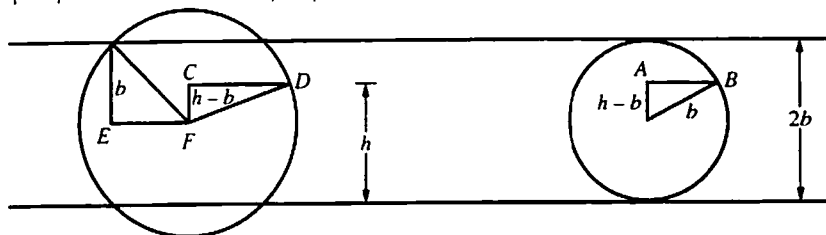
27. Choose a coordinate system so the center of the sphere is the origin and the axis of the part removed is the z-axis.

$$\text{Volume (Ring)} = \text{Volume (Sphere of radius } a) - \text{Volume (Part removed)}$$

$$= \frac{4}{3} \pi a^3 - 2 \int_0^{2\pi} \int_0^{\sqrt{a^2 - b^2}} \sqrt{a^2 - r^2} r dr d\theta = \frac{4}{3} \pi a^3 - 2(2\pi) \int_0^{\sqrt{a^2 - b^2}} (a^2 - r^2)^{1/2} r dr$$

$$= \frac{4}{3} \pi a^3 - 4\pi \left[ \frac{1}{3} (a^2 - r^2)^{3/2} \right]_0^{\sqrt{a^2 - b^2}} = \frac{4}{3} \pi a^3 + 4\pi \frac{1}{3} (b^3 - a^3) = \frac{4}{3} \pi b^3$$

$$28. |EF|^2 = a^2 - b^2 \quad |CD| = a^2 - (h-b)^2 \quad |AB|^2 = b^2 - (h-b)^2$$



$$\text{Area of left cross-sectional region} = \pi[a^2 - (h-b)^2] - \pi[a^2 - b^2]$$

$$= \pi[b^2 - (h-b)^2] = \text{area of right cross-sectional region}$$

$$\text{Volume} = \left( \frac{4}{3} \right) \pi b^3 - \left( \frac{1}{3} \right) \pi (2b-h)^2 [3b - (2b-h)] \quad (\text{using problem 23})$$

$$= \left( \frac{1}{3} \right) \pi h^2 (3b-h)$$

$$29. \int_0^{\pi/2} \left[ \lim_{b \rightarrow \infty} \int_0^b (1+r^2)^{-2} r dr \right] d\theta = \int_0^{\pi/2} \left( \lim_{b \rightarrow \infty} \left[ \left( -\frac{1}{2} \right) (1+b^2)^{-1} - \left( -\frac{1}{2} \right) \right] \right) d\theta = \int_0^{\pi/2} \left( \frac{1}{2} \right) d\theta = \frac{\pi}{4} \approx 0.7854$$

$$\begin{aligned}
 30. \quad A &= \frac{1}{2}r_2^2(\theta_2 - \theta_1) - \frac{1}{2}r_1^2(\theta_2 - \theta_1) \\
 &= \frac{1}{2}(\theta_1 - \theta_2)(r_2^2 - r_1^2) \\
 &= \frac{1}{2}(\theta_2 - \theta_1)(r_2 - r_1)(r_2 + r_1) \\
 &= \frac{r_1 + r_2}{2}(r_2 - r_1)(\theta_2 - \theta_1)
 \end{aligned}$$

31. From symmetry we have

$$\begin{aligned}
 &\int_{-\infty}^{\infty} \frac{1}{\sigma\sqrt{2\pi}} e^{-(x-\mu)^2/2\sigma^2} dx \\
 &= 2 \int_0^{\infty} \frac{1}{\sigma\sqrt{2\pi}} e^{-(x-\mu)^2/2\sigma^2} dx.
 \end{aligned}$$

Using the substitution  $u = \frac{x-\mu}{\sigma\sqrt{2}}$  we get

$du = \frac{dx}{\sigma\sqrt{2}}$ . Our integral then becomes

$$\begin{aligned}
 &\int_{-\infty}^{\infty} \frac{1}{\sigma\sqrt{2\pi}} e^{-(x-\mu)^2/2\sigma^2} dx \\
 &= \frac{2}{\sqrt{\pi}} \int_0^{\infty} e^{-u^2} du
 \end{aligned}$$

Using the result from Example 4, we see that

$$\begin{aligned}
 &\int_0^{\infty} e^{-u^2} du = \frac{\sqrt{\pi}}{2}. \text{ Thus we have} \\
 &\int_{-\infty}^{\infty} \frac{1}{\sigma\sqrt{2\pi}} e^{-(x-\mu)^2/2\sigma^2} dx \\
 &= \frac{2}{\sqrt{\pi}} \cdot \frac{\sqrt{\pi}}{2} = 1.
 \end{aligned}$$

## 16.5 Concepts Review

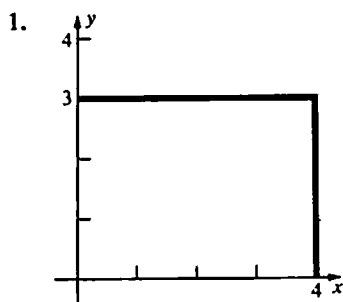
1.  $\iint_S x^2 y^4 dA$

2.  $\iint_S \frac{x^2 y^5 dA}{m}$

3.  $\iint_S x^4 y^4 dA$

4. greater

### Problem Set 16.5

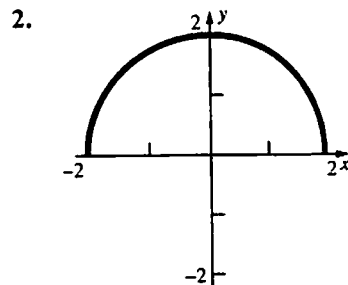


$$m = \int_0^3 \int_0^4 (y+1) dx dy = 30$$

$$M_y = \int_0^3 \int_0^4 x(y+1) dx dy = 60$$

$$M_x = \int_0^3 \int_0^4 y(y+1) dx dy = 54$$

$$(\bar{x}, \bar{y}) = (2, 1.8)$$

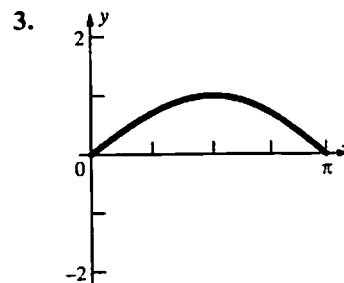


$$m = \int_{-2}^2 \int_0^{\sqrt{4-x^2}} y dy dx = \frac{16}{3}$$

$M_y = 0$  (symmetry)

$$M_x = \int_{-2}^2 \int_0^{\sqrt{4-x^2}} yy dx dy = 2\pi$$

$$(\bar{x}, \bar{y}) = \left(0, \frac{3\pi}{8}\right)$$



$$m = \int_0^{\pi} \int_0^{\sin x} y dy dx = \int_0^{\pi} \left[ \frac{y^2}{2} \right]_0^{\sin x} dx$$

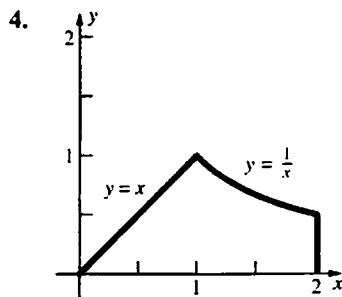
$$= \int_0^{\pi} \frac{\sin^2 x}{2} dx = \int_0^{\pi} \frac{1 - \cos 2x}{4} dx$$

$$= \left[ \frac{x}{4} - \frac{\sin 2x}{8} \right]_0^{\pi} = \frac{\pi}{4}$$

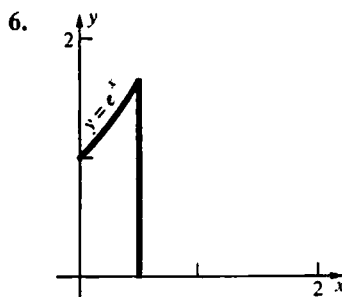


$$\begin{aligned}
 M_x &= \int_0^{\pi} \int_0^{\sin x} yy \, dy \, dx = \int_0^{\pi} \left[ \frac{y^3}{3} \right]_0^{\sin x} dx \\
 &= \int_0^{\pi} \frac{\sin^3 x}{3} dx = \frac{1}{3} \int_0^{\pi} (1 - \cos^2 x) \sin x \, dx \\
 &= \frac{1}{3} \left[ -\cos x + \frac{\cos^3 x}{3} \right]_0^{\pi} = \frac{4}{9} \\
 \bar{y} &= \frac{M_x}{m} = \frac{\frac{4}{9}}{\frac{\pi}{4}} = \frac{16}{9\pi} \approx 0.5659; \\
 \bar{x} &= \frac{\pi}{2} \text{ (by symmetry)}
 \end{aligned}$$

$$\text{Thus, } M_y = \bar{x} \cdot m = \frac{\pi}{4} \cdot \frac{\pi}{2} = \frac{\pi^2}{8}$$



$$\begin{aligned}
 m &= \int_0^1 \int_0^x x \, dy \, dx + \int_1^2 \int_0^{1/x} x \, dy \, dx = \frac{4}{3} \\
 M_y &= \int_0^1 \int_0^x x^2 \, dy \, dx + \int_1^2 \int_0^{1/x} x^2 \, dy \, dx = \frac{7}{4} \\
 M_x &= \int_0^1 \int_0^x xy \, dy \, dx + \int_1^2 \int_0^{1/x} xy \, dy \, dx
 \end{aligned}$$

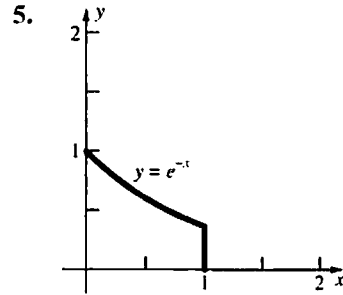


$$\begin{aligned}
 m &= \int_0^1 \int_0^{e^x} (2-x+y) \, dy \, dx = \int_0^1 \left[ (2-x)y + \frac{y^2}{2} \right]_{y=0}^{e^x} dx = \int_0^1 \left( 2e^x - xe^x + \frac{e^{2x}}{2} \right) dx \\
 &= \left[ 2e^x - (xe^x - e^x) + \frac{e^{2x}}{4} \right]_0^1 = \frac{e^2 + 8e - 13}{4}
 \end{aligned}$$

$$M_x = \int_0^1 \int_0^{e^x} (2-x+y)y \, dy \, dx = \int_0^1 \left[ y^2 - \frac{xy^2}{2} + \frac{y^3}{3} \right]_{y=0}^{e^x} dx = \int_0^1 \left[ e^{2x} - \frac{xe^{2x}}{2} + \frac{e^{3x}}{3} \right] dx$$

$$= \left( \frac{1}{8} \right) (1 + 4 \ln 2)$$

$$(\bar{x}, \bar{y}) = \left( \frac{21}{16}, \left( \frac{3}{32} \right) (1 + 4 \ln 2) \right) \approx (1.3125, 0.3537)$$



$$m = \int_0^1 \int_0^{e^{-x}} y^2 \, dy \, dx = \left( \frac{1}{9} \right) (1 - e^{-3})$$

$$M_x = \int_0^1 \int_0^{e^{-x}} y^3 \, dy \, dx = \left( \frac{1}{16} \right) (1 - e^{-4})$$

$$M_y = \int_0^1 \int_0^{e^{-x}} xy^2 \, dy \, dx = \left( \frac{1}{27} \right) (1 - 4e^{-3}) \approx 0.1056$$

$$(\bar{x}, \bar{y}) =$$

$$\begin{aligned}
 &\left( \left( \frac{1}{3} \right) (e^3 - 4)(e^3 - 1)^{-1}, \left( \frac{9}{16} \right) e^{-1} (e^4 - 1)(e^3 - 1)^{-1} \right) \\
 &\approx (0.2809, 0.5811)
 \end{aligned}$$

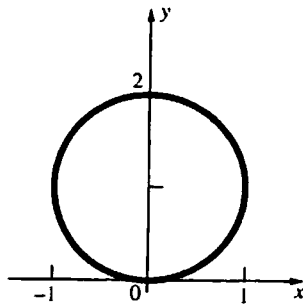
$$= \left[ \frac{e^{2x}}{2} - \left( \frac{xe^{2x}}{4} - \frac{e^{2x}}{8} \right) + \frac{e^{3x}}{9} \right]_0^1 = \left( \frac{e^2}{2} - \frac{e^2}{4} + \frac{e^2}{8} + \frac{e^3}{9} \right) - \left( \frac{1}{2} - 0 + \frac{1}{8} + \frac{1}{9} \right) = \frac{8e^3 + 27e^2 - 53}{72}$$

$$M_y = \int_0^1 \int_0^{e^x} (2-x+y)x \, dy \, dx = \int_0^1 \left[ 2xy - x^2y + \frac{xy^2}{2} \right]_{y=0}^{e^x} dx = \int_0^1 \left( 2xe^x - x^2e^x + \frac{xe^{2x}}{2} \right) dx$$

$$= \left[ (2xe^x - 2e^x) - (x^2e^x - 2xe^x + 2e^x) + \left( \frac{xe^{2x}}{4} - \frac{e^{2x}}{8} \right) \right]_0^1 = \frac{e^2 - 8e + 33}{8}$$

$$\bar{x} = \frac{M_y}{m} = \frac{e^2 - 8e + 33}{2(e^2 + 8e - 13)} \approx 0.5777; \bar{y} = \frac{M_x}{m} = \frac{8e^3 + 27e^2 - 53}{18(e^2 + 8e - 13)} \approx 1.0577$$

7.



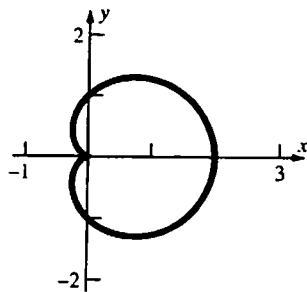
$$m = \int_0^\pi \int_0^{2\sin\theta} r \, r \, dr \, d\theta = \frac{32}{9}$$

$$M_x = \int_0^\pi \int_0^{2\sin\theta} (r \sin\theta) r \, r \, dr \, d\theta = \frac{64}{15}$$

$$M_y = 0 \text{ (symmetry)}$$

$$(\bar{x}, \bar{y}) = (0, 1.2)$$

8.



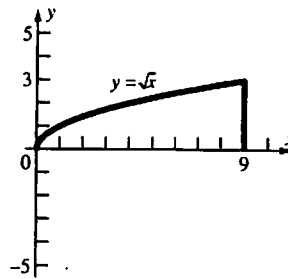
$$m = 2 \int_0^\pi \int_0^{1+\cos\theta} r \, r \, dr \, d\theta = \frac{5\pi}{3}$$

$$M_y = 2 \int_0^\pi \int_0^{1+\cos\theta} (r \cos\theta) r \, r \, dr \, d\theta = \frac{7\pi}{4}$$

$$M_x = 0 \text{ (symmetry)}$$

$$(\bar{x}, \bar{y}) = (1.05, 0)$$

9.



$$I_x = \int_0^9 \int_0^{\sqrt{x}} y^2(x+y) \, dy \, dx$$

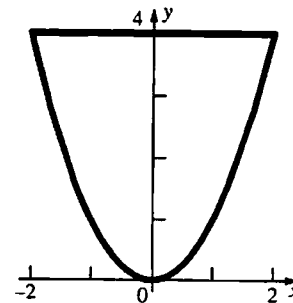
$$= \int_0^9 \left( \frac{81y^2}{2} + 9y^3 - \frac{y^6}{2} - y^5 \right) dy = \frac{7533}{28} \approx 269$$

$$I_y = \int_0^9 \int_0^{\sqrt{x}} x^2(x+y) \, dy \, dx = \int_0^9 \left( x^{7/2} + \frac{x^3}{2} \right) dx$$

$$= \frac{41553}{8} \approx 5194$$

$$I_z = I_x + I_y = \frac{305937}{56} \approx 5463$$

10.

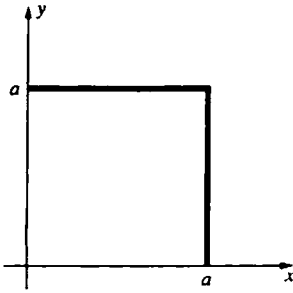


$$I_x = \int_0^4 \int_{-\sqrt{y}}^{\sqrt{y}} y^3 \, dx \, dy = \frac{2048}{9} \approx 227.56$$

$$I_y = \int_0^4 \int_{-\sqrt{y}}^{\sqrt{y}} x^2 y \, dx \, dy = \frac{512}{21} \approx 24.38$$

$$I_z = I_x + I_y = \frac{15872}{63} \approx 251.94$$

11.

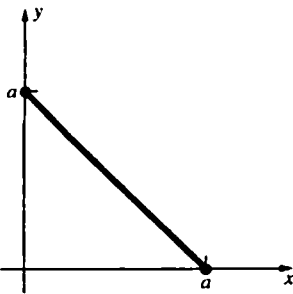


$$I_x = \int_0^a \int_0^a (x+y)y^2 dx dy = \left(\frac{5}{12}\right)a^5$$

$$I_y = \left(\frac{5}{12}\right)a^5$$

$$I_z = \left(\frac{5}{6}\right)a^5$$

12.



$$I_x = \int_0^a \int_0^{a-y} (x^2 + y^2)y^2 dx dy$$

$$= \frac{1}{3} \int_0^a (a^3 y^2 - 3a^2 y + 6ay^2 - 4y^5) dy = \frac{7a^6}{180}$$

$$I_y = \frac{7a^6}{180}; I_z = \frac{7a^6}{90} \text{ (Same result for } a < 0 \text{)}$$

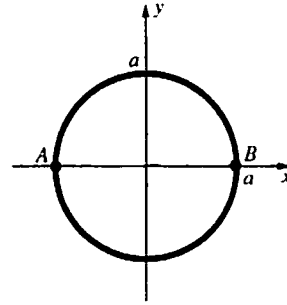
$$13. \quad m = \int_0^a \int_0^a (x+y) dx dy = a^3$$

$$\bar{r} = \left(\frac{I_x}{m}\right)^{1/2} = \left(\frac{5}{12}\right)^{1/2} a \approx 0.6455a$$

$$14. \quad m = \int_0^a \int_0^{a-y} (x^2 + y^2) dx dy = \left(\frac{1}{6}\right)a^4$$

$$\bar{r} = \left(\frac{I_y}{m}\right)^{1/2} = \left(\frac{7}{30}\right)^{1/2} a \approx 0.4830a$$

15.



$$m = \delta \pi a^2$$

The moment of inertia about diameter  $AB$  is

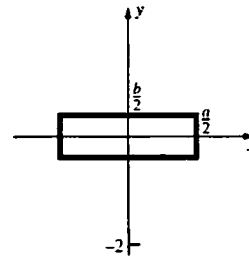
$$I = I_x = \int_0^{2\pi} \int_0^a \delta r^2 \sin^2 \theta r dr d\theta$$

$$= \int_0^{2\pi} \frac{\delta a^4 \sin^2 \theta}{4} d\theta = \frac{\delta a^4}{8} \int_0^{2\pi} (1 - \cos 2\theta) d\theta$$

$$= \frac{\delta a^4}{8} \left[ \theta - \frac{\sin 2\theta}{2} \right]_0^{2\pi} = \frac{\delta a^4 \pi}{4}$$

$$\bar{r} = \left(\frac{I}{m}\right)^{1/2} = \left(\frac{\frac{\delta a^4 \pi}{4}}{\delta \pi a^2}\right)^{1/2} = \frac{a}{2}$$

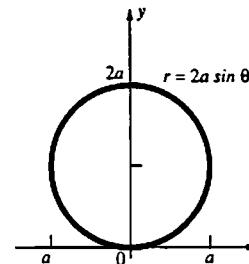
16.



$$I = I_z = \int_{-b/2}^{b/2} \int_{-a/2}^{a/2} (x^2 + y^2) k dx dy$$

$$= \left(\frac{k}{12}\right)(a^3 b + ab^3)$$

17.



$$I_x = \iint_S \delta y^2 dA$$

$$= 2\delta \int_0^{\pi/2} \int_0^{2a \sin \theta} (r \sin \theta)^2 r dr d\theta$$

$$= 2\delta \int_0^{\pi/2} 4a^4 \sin^6 \theta d\theta$$

$$= 8a^4 \delta \frac{(1)(3)(5)}{(2)(4)(6)} \frac{\pi}{2} = \frac{5a^4 \delta \pi}{4}$$

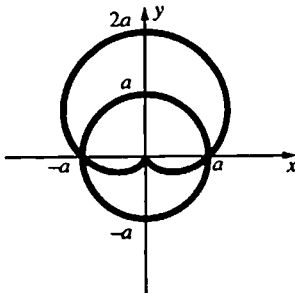
18.  $\bar{x} = 0$  (by symmetry)

$$\begin{aligned}
 M_x &= \iint_S 1y \, dA = 2k \int_{-\pi/2}^{\pi/2} \int_0^{a(1+\sin\theta)} (r \sin\theta) r \, dr \, d\theta = 2k \int_{-\pi/2}^{\pi/2} \left[ \frac{r^3}{3} \sin\theta \right]_{r=0}^{a(1+\sin\theta)} d\theta \\
 &= \frac{2ka^3}{3} \int_{-\pi/2}^{\pi/2} (1+\sin\theta)^3 \sin\theta \, d\theta \\
 &= \frac{2ka^3}{3} \int_{-\pi/2}^{\pi/2} (\sin\theta + 3\sin^2\theta + 3\sin^3\theta + \sin^4\theta) d\theta \\
 &= \frac{4ka^3}{3} \int_0^{\pi/2} (3\sin^2\theta + \sin^4\theta) d\theta \quad (\text{using the symmetry property for odd and even functions.}) \\
 &= \frac{4ka^3}{3} \left( 3 \frac{1}{2} \frac{\pi}{2} + \frac{1 \cdot 3}{2 \cdot 4} \frac{\pi}{2} \right) = \frac{5\pi ka^3}{4} \quad (\text{using Formula 113})
 \end{aligned}$$

Therefore,  $\bar{y} = \frac{M_x}{m} = \frac{5a}{6}$ .

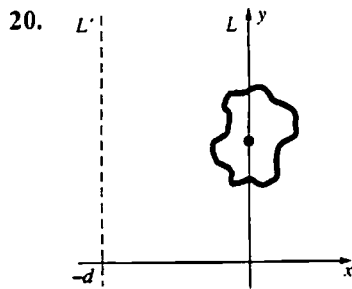
$$\begin{aligned}
 I_x &= \iint_S ky^2 \, dA = 2k \int_{-\pi/2}^{\pi/2} \int_0^{a(1+\sin\theta)} (r \sin\theta)^2 r \, dr \, d\theta = 2k \int_{-\pi/2}^{\pi/2} \left[ \frac{r^4}{4} \sin^2\theta \right]_{r=0}^{a(1+\sin\theta)} d\theta \\
 &= \frac{ka^4}{2} \int_{-\pi/2}^{\pi/2} (1+\sin\theta)^4 \sin^2\theta \, d\theta = \frac{ka^4}{2} \int_{-\pi/2}^{\pi/2} (\sin^2\theta + 4\sin^3\theta + 6\sin^4\theta + 4\sin^5\theta + \sin^6\theta) d\theta \\
 &= ka \int_0^{\pi/2} (\sin^2\theta + 6\sin^4\theta + \sin^6\theta) d\theta \quad (\text{symmetry property for odd and even functions}) \\
 &= ka^4 \left[ \frac{1}{2} \frac{\pi}{2} + 6 \frac{1 \cdot 3}{2 \cdot 4} \frac{\pi}{2} + \frac{1 \cdot 3 \cdot 5}{2 \cdot 4 \cdot 6} \frac{\pi}{2} \right] = \frac{49\pi ka^4}{32} \quad (\text{using Formula 113})
 \end{aligned}$$

19.

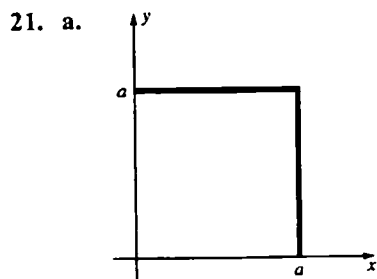


$x = 0$  (by symmetry)

$$\begin{aligned}
 M_x &= \iint_S ky \, dA = 2k \int_{-\pi/2}^{\pi/2} \int_0^{a(1+\sin\theta)} (r \sin\theta) r \, dr \, d\theta = 2k \int_0^{\pi/2} \left( \frac{a^3}{3} \right) (3\sin^2\theta + 3\sin^3\theta + \sin^4\theta) d\theta \\
 &= \left( \frac{2}{3} \right) ka^3 \left[ \frac{(15\pi + 32)}{16} \right] = \left( \frac{1}{24} \right) ka^3 (15\pi + 32) \\
 m &= \iint_S k \, dA = 2k \int_{-\pi/2}^{\pi/2} \int_0^{a(1+\sin\theta)} r \, dr \, d\theta = 2k \int_0^{\pi/2} \left( \frac{1}{2} \right) a^2 (2\sin\theta + \sin^2\theta) d\theta = ka^2 \left[ \frac{(8 + \pi)}{4} \right] = \left( \frac{1}{4} \right) ka^2 (\pi + 8) \\
 \text{Therefore, } \bar{y} &= \frac{M_x}{m} = \frac{\left( \frac{1}{24} \right) ka^3 (15\pi + 32)}{\left( \frac{1}{4} \right) ka^2 (\pi + 8)} = \frac{a(15\pi + 32)}{6(\pi + 8)} \approx 1.1836a
 \end{aligned}$$



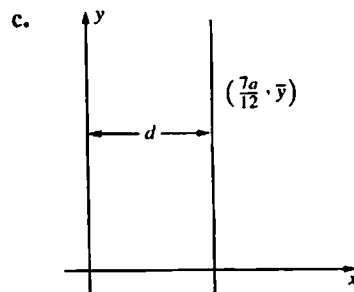
$$\begin{aligned}
 I' &= \iint_S (x+d)^2 \delta(x, y) dA = \iint_S (x^2 + 2xd + d^2) \delta(x, y) dA \\
 &= \iint_S x^2 \delta(x, y) dA + \iint_S 2xd \delta(x, y) dA + \iint_S d^2 \delta(x, y) dA \\
 &= I + M_y + d^2 m = I + 0 + d^2 m = I + d^2 m
 \end{aligned}$$



$$\begin{aligned}
 m &= \iint_S (x+y) dA = \int_0^a \int_0^a (x+y) dx dy \\
 &= \int_0^a \left[ \frac{x^2}{2} + xy \right]_{x=0}^a dy = \int_0^a \left( \frac{a^2}{2} + ay \right) dy \\
 &= \left[ \frac{a^2 y}{2} + \frac{ay^2}{2} \right]_0^a = a^3
 \end{aligned}$$

b. 
$$\begin{aligned}
 M_y &= \iint_S x(x+y) dA = \int_0^a \int_0^a (x^2 + xy) dy dx \\
 &= \int_0^a \left[ x^2 y + \frac{xy^2}{2} \right]_{y=0}^a dx = \int_0^a \left( ax^2 + \frac{a^2 x}{2} \right) dx \\
 &= \left[ \frac{ax^3}{3} + \frac{a^2 x^2}{4} \right]_0^a = \frac{7a^4}{12}
 \end{aligned}$$

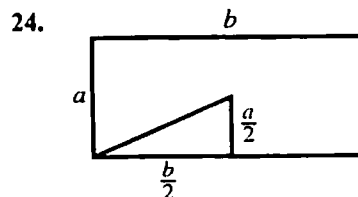
Therefore,  $\bar{x} = \frac{M_y}{m} = \frac{7a}{12}$ .



$$\begin{aligned}
 I_y &= I_L + d^2 m, \text{ so } \frac{5a^5}{12} = I_L + \left( \frac{7a}{12} \right)^2 (a^3); \\
 I_L &= \frac{11a^5}{144}
 \end{aligned}$$

22. 
$$\begin{aligned}
 I_{17} &= I_{15} + md^2 = 0.25\delta a^4 \pi + (\delta \pi a^2) a^2 \\
 &= 1.25\delta a^4 \pi
 \end{aligned}$$

23. 
$$\begin{aligned}
 I_x &= 2[I_{15}] = \frac{ka^4 \pi}{2} \\
 I_y &= 2[I_{15} + md^2] \\
 &= 2[0.25a^4 \pi + (k\pi a^2)(2a)^2] = 8.5ka^4 \pi \\
 I_z &= I_x + I_y = 9ka^4 \pi
 \end{aligned}$$



The square of the distance of the corner from the center of mass is  $d^2 = \frac{a^2 + b^2}{4}$ .

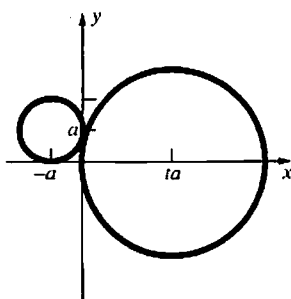
$$I = I(\text{Prob. 16}) + md^2 = \frac{k(a^3b + ab^3)}{12} + (kab) \frac{a^2 + b^2}{4} = \frac{k(a^3b + ab^3)}{3}$$

$$\begin{aligned} 25. \quad M_y &= \iint_{S_1 \cup S_2} x \delta(x, y) dA \\ &= \iint_{S_1} x \delta(x, y) dA + \iint_{S_2} x \delta(x, y) dA \\ &= \frac{m_1 \iint_{S_1} x \delta(x, y) dA}{m_1} + \frac{m_2 \iint_{S_2} x \delta(x, y) dA}{m_2} \\ &= m_1 \bar{x}_1 + m_2 \bar{x}_2 \end{aligned}$$

Thus,  $\bar{x} = \frac{M_y}{m} = \frac{m_1 \bar{x}_1 + m_2 \bar{x}_2}{m_1 + m_2}$  which is equal to

what we are to obtain and which is what we would obtain using the center of mass formula for two point masses. (Similar result can be obtained for  $\bar{y}$ .)

26.



$$\bar{x} = \frac{(-a)(\delta\pi a^2) + (ta)[\delta\pi(ta)^2]}{\delta\pi a^2 + \delta\pi(ta)^2} = \frac{a(t^3 - 1)}{t^2 + 1}$$

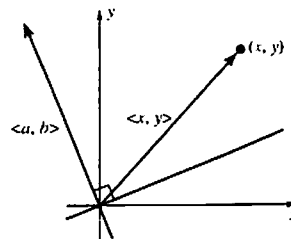
$$\bar{y} = \frac{(a)(\delta\pi a^2) + (0)}{\delta\pi a^2 + \delta\pi(ta)^2} = \frac{a}{t^2 + 1}$$

### 16.6 Concepts Review

1.  $|\mathbf{u} \times \mathbf{v}|$

2.  $\iint_S \sqrt{f_x^2 + f_y^2 + 1} dA$

27.

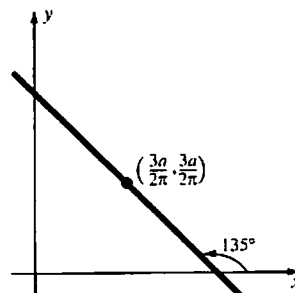


$\langle a, b \rangle$  is perpendicular to the line  $ax + by = 0$ . Therefore, the (signed) distance of  $(x, y)$  to  $L$  is the scalar projection of  $\langle x, y \rangle$  onto  $\langle a, b \rangle$ , which is  $d(x, y) = \frac{\langle x, y \rangle \cdot \langle a, b \rangle}{|\langle a, b \rangle|} = \frac{ax + by}{|\langle a, b \rangle|}$ .

$$\begin{aligned} M_L &= \iint_S d(x, y) \delta(x, y) dA \\ &= \iint_S \frac{ax + by}{|\langle a, b \rangle|} \delta(x, y) dA \\ &= \frac{a}{|\langle a, b \rangle|} \iint_S x \delta(x, y) dA + \frac{b}{|\langle a, b \rangle|} \iint_S y \delta(x, y) dA \\ &= \frac{a}{|\langle a, b \rangle|} (0) + \frac{b}{|\langle a, b \rangle|} (0) = 0 \end{aligned}$$

[since  $(\bar{x}, \bar{y}) = (0, 0)$ ]

28.



The equation has the form  $x + y = b$ .

$$\frac{3a}{2\pi} + \frac{3a}{2\pi} = b \text{ so } b = \frac{3a}{\pi}$$

Therefore, the equation is  $x + y = \frac{3a}{\pi}$ , or

$$\pi x + \pi y = 3a.$$

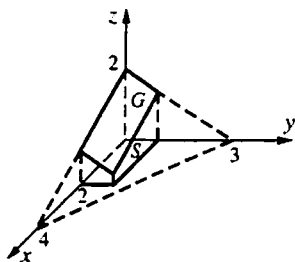
3.  $\int_{-a}^a \int_{\sqrt{a^2-x^2}}^{\sqrt{a^2-x^2}} \left( \frac{a}{\sqrt{a^2-x^2-y^2}} \right) dy dx$

$$= \int_0^{2\pi} \int_0^a \left( \frac{ar}{\sqrt{a^2-r^2}} \right) dr d\theta; \quad 2\pi a^2$$

4.  $2\pi ah$

**Problem Set 16.6**

1.



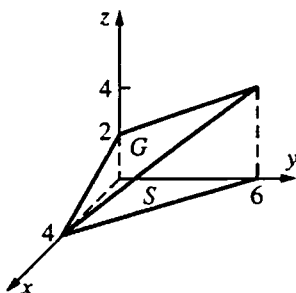
$$z = 2 - \frac{1}{2}x - \frac{2}{3}y$$

$$f_x(x, y) = -\frac{1}{2}; f_y(x, y) = -\frac{2}{3}$$

$$A(G) = \int_0^2 \int_0^1 \sqrt{\frac{1}{4} + \frac{4}{9} + 1} dy dx$$

$$= \frac{\sqrt{61}}{3} \approx 2.6034$$

2.



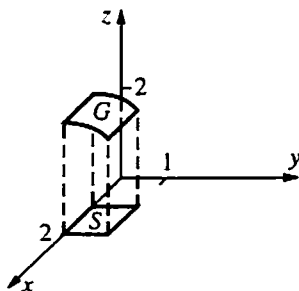
$$z = 2 - \frac{1}{2}x + \frac{1}{3}y$$

$$f_x(x, y) = -\frac{1}{2}; f_y(x, y) = \frac{1}{3}$$

$$A(G) = \int_0^4 \int_0^{\frac{3}{2}x+6} \sqrt{\frac{1}{4} + \frac{1}{9} + 1} dy dx$$

$$= \frac{7}{6} \int_0^4 \left(-\frac{3}{2}x + 6\right) dx = \left(\frac{7}{6}\right)(12) = 14$$

3.



$$z = f(x, y) = (4 - y^2)^{1/2}; f_x(x, y) = 0;$$

$$f_y(x, y) = -y(4 - y^2)^{-1/2}$$

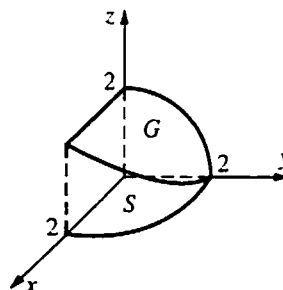
$$A(G) = \int_0^1 \int_0^2 \sqrt{y^2(4 - y^2)^{-1} + 1} dx dy$$

$$= \int_0^1 \int_0^2 \frac{2}{\sqrt{4 - y^2}} dx dy$$

$$= \int_0^1 \frac{2}{\sqrt{4 - y^2}} dy = \left[ 2 \sin^{-1}\left(\frac{y}{2}\right) \right]_0^1 = 2\left(\frac{\pi}{6}\right) - 2(0)$$

$$= \frac{\pi}{3} \approx 1.0472$$

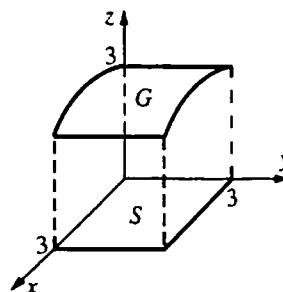
4.



$$A(G) = \int_0^2 \int_0^{\sqrt{4-y^2}} 2(4 - y^2)^{-1/2} dx dy = 4$$

(See problem 3 for the integrand.)

5.



Let  $z = f(x, y) = (9 - x^2)^{1/2}$ .

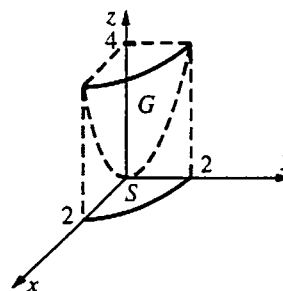
$$f_x(x, y) = -x(9 - x^2)^{-1/2}, f_y(x, y) = 0$$

$$A(G) = \int_0^2 \int_0^3 [x^2(9 - x^2)^{-1} + 1] dy dx$$

$$= \int_0^2 \int_0^3 3(9 - x^2)^{-1/2} dx dy = 9 \sin^{-1}\left(\frac{2}{3}\right)$$

$$\approx 6.5675$$

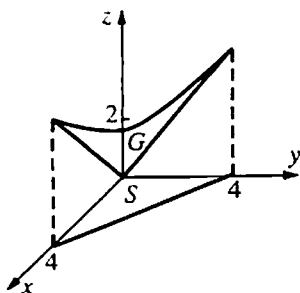
6.



Let  $z = f(x, y) = x^2 + y^2$ ;  $f_x(x, y) = 2x$ ;  
 $f_y(x, y) = 2y$ .

$$\begin{aligned} A(G) &= 4 \int_0^2 \int_0^{\sqrt{4-y^2}} \sqrt{4x^2 + 4y^2 + 1} \, dy \, dx \\ &= 4 \int_0^{\pi/2} \int_0^2 (4r^2 + 1)^{1/2} r \, dr \, d\theta \\ &= 4 \int_0^{\pi/2} \left[ \frac{(4r^2 + 1)^{3/2}}{12} \right]_0^2 \, d\theta = \frac{(17^{3/2} - 1) \pi}{3 \cdot 2} \\ &\approx 36.1769 \end{aligned}$$

7.

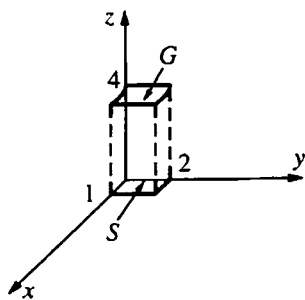


$$z = f(x, y) = (x^2 + y^2)^{1/2}$$

$$f_x(x, y) = x(x^2 + y^2)^{-1/2}, \quad f_y(x, y) = y(x^2 + y^2)^{-1/2}$$

$$A(G) = \int_0^4 \int_0^{4-x} [x^2(x^2 + y^2)^{-1} + y^2(x^2 + y^2)^{-1} + 1]^{1/2} \, dy \, dx = \int_0^4 \int_0^{4-x} \sqrt{2} \, dy \, dx = 8\sqrt{2}$$

8.

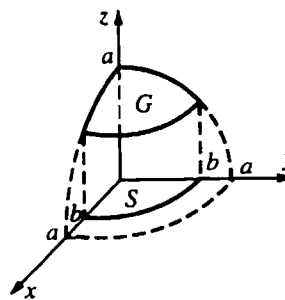


$$z = f(x, y) = \left(\frac{1}{4}\right)x^2 + 4$$

$$f_x(x, y) = \frac{x}{2}; \quad f_y(x, y) = 0$$

$$\begin{aligned} A(G) &= \int_0^1 \int_0^2 \left[ \left(\frac{1}{4}\right)x^2 + 1 \right]^{1/2} \, dy \, dx \\ &= \frac{\sqrt{5}}{2} + 2 \ln \left[ \frac{(\sqrt{5} + 1)}{2} \right] \approx 2.0805 \end{aligned}$$

9.



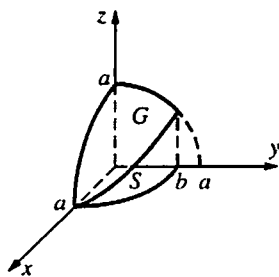
$$f_x(x, y) = \frac{x^2}{a^2 - x^2 - y^2}; \quad f_y(x, y) = \frac{y^2}{a^2 - x^2 - y^2}$$

(See Example 3.)

$$\begin{aligned} A(G) &= 8 \iint_S \frac{a}{\sqrt{a^2 - x^2 - y^2}} \, dA \\ &= 8 \int_0^{\pi/2} \int_0^b \frac{a}{\sqrt{a^2 - r^2}} r \, dr \, d\theta \\ &= 8a \left(\frac{\pi}{2}\right) \int_0^b (a^2 - r^2)^{-1/2} r \, dr \\ &= -4a\pi \left[ (a^2 - r^2)^{1/2} \right]_0^b = 4\pi a \left( a - \sqrt{a^2 - b^2} \right) \end{aligned}$$



10.



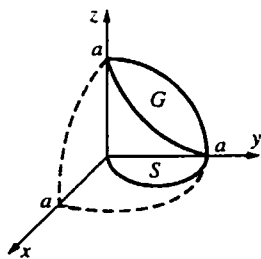
$$f_x(x, y) = \frac{x^2}{a^2 - x^2 - y^2}; f_y(x, y) = \frac{y^2}{a^2 - x^2 - y^2}$$

(See Example 3.)

$$A(G) = 8 \int_0^a \int_0^{(b/a)\sqrt{a^2-x^2}} \frac{a}{\sqrt{a^2-x^2-y^2}} dy dx$$

$$= 8a \int_0^a \sin^{-1}\left(\frac{b}{a}\right) dx = 8a^2 \sin^{-1}\left(\frac{b}{a}\right)$$

11.



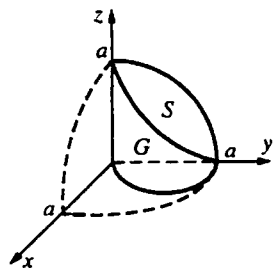
$$f_x(x, y) = \frac{x^2}{a^2 - x^2 - y^2}; f_y(x, y) = \frac{y^2}{a^2 - x^2 - y^2}$$

(See Example 3.)

$$A(G) = 4 \int_0^{\pi/2} \int_0^{\sin\theta} \frac{a}{\sqrt{a^2-r^2}} r dr d\theta$$

$$= 4a^2 \int_0^{\pi/2} (1 - \cos\theta) d\theta = 2a^2(\pi - 2)$$

12.



$$\text{Let } F(x, y, z) = x^2 + y^2 - ay.$$

$$\sec\gamma = \frac{\sqrt{(2x)^2 + (2y-a)^2}}{|2x|} \quad (\text{Interchange roles of } x \text{ and } z.)$$

$$= \frac{\sqrt{4(x^2 + y^2) - 4ay + a^2}}{2|x|} = \frac{\sqrt{4(ay) - 4ay + a^2}}{2\sqrt{y(a-y)}}$$

$$= \frac{a}{2\sqrt{y(a-y)}}$$

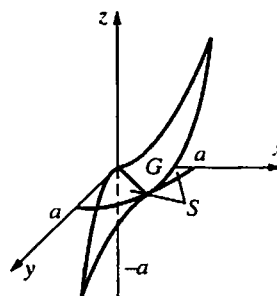
$$A(G) = 4 \iint_S \frac{a}{2\sqrt{y(a-y)}} dA$$

$$= 2a \int_0^a \int_0^{\sqrt{a(a-y)}} \frac{1}{\sqrt{y(a-y)}} dz dy$$

$$= 2a \int_0^a \frac{\sqrt{a(a-y)}}{\sqrt{y(a-y)}} dy = 2a\sqrt{a} \int_0^a y^{-1/2} dy$$

$$= 2a\sqrt{a} \left[ \lim_{k \rightarrow 0^+} \int_k^a y^{-1/2} dy \right] = 2a\sqrt{a} (2\sqrt{a}) = 4a^2$$

13.



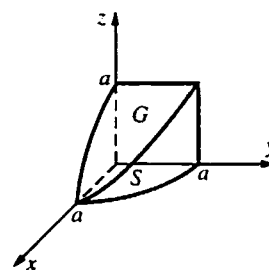
$$\text{Let } F(x, y, z) = x^2 - y^2 - az.$$

$$f_x(x, y) = \frac{2x}{a}; f_y(x, y) = \frac{-2y}{a}$$

$$A(G) = \int_0^{2\pi} \int_0^a \frac{\sqrt{4r^2 + a^2}}{a} r dr d\theta$$

$$= \frac{2\pi}{a} \int_0^a (4r^2 + a^2)^{1/2} r dr = \frac{\pi a^2 (5\sqrt{5} - 1)}{6}$$

14.



$$f_x(x, y) = \frac{-x}{\sqrt{a^2 - x^2}}; f_y(x, y) = 0$$

$$\sqrt{(f_x(x, y))^2 + (f_y(x, y))^2} + 1 = \frac{a}{\sqrt{a^2 - x^2}}$$

$$= \frac{a}{\sqrt{a^2 - r^2 \cos^2 \theta}}$$

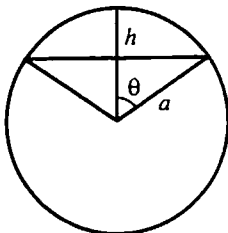
$$A(\text{all sides}) = 16 \int_0^{\pi/2} \int_0^a \frac{a}{\sqrt{a^2 - r^2 \cos^2 \theta}} d\theta dr$$

$$= 16 \int_0^{\pi/2} \frac{a^2}{1 + \sin \theta} d\theta = 16a^2(1) = 16a^2$$

15.  $\bar{x} = \bar{y} = 0$  (by symmetry)

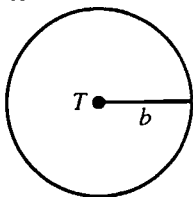
Let  $h = \frac{h_1 + h_2}{2}$ . Planes  $z = h_1$  and  $z = h_2$  cut out the same surface area as planes  $z = h$  and  $z = h_2$ . Therefore,  $\bar{z} = h$ , the arithmetic average of  $h_1$  and  $h_2$ .

16.

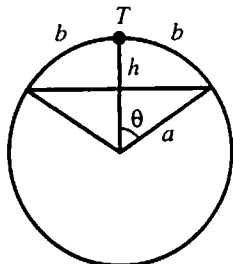


$$\begin{aligned} \text{Area} &= 2\pi ah \\ &= 2\pi a(a - a \cos \phi) = 2\pi a^2(1 - \cos \phi) \end{aligned}$$

17. a.  $A = \pi b^2$

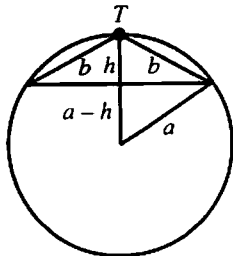


b.



$$\begin{aligned} B &= 2\pi a^2(1 - \cos \phi) \quad (\text{Problem 16}) \\ &= 2\pi a^2 \left[ 1 - \cos \left( \frac{b}{a} \right) \right] \\ &= 2\pi a^2 \left[ \frac{b^2}{2!a^2} - \frac{b^4}{4!a^4} + \frac{b^6}{6!a^6} + \dots \right] \\ &= \pi b^2 \left[ 1 - \frac{b^2}{12a^2} + \frac{b^4}{360a^4} - \dots \right] \leq \pi b^2 \end{aligned}$$

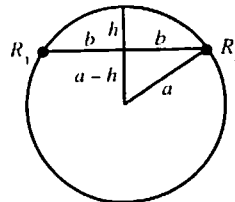
c.



$$a^2 - (a-h)^2 = b^2 - h^2, \text{ so } h = \frac{b^2}{2a}.$$

$$\begin{aligned} \text{Thus, } C &= 2\pi ah \\ &= 2\pi a \left( \frac{b^2}{2a} \right) = \pi b^2. \end{aligned}$$

d.



$$\begin{aligned} D &= 2\pi ah \\ &= 2\pi a \left( a - \sqrt{a^2 - b^2} \right) = \frac{2\pi a[a^2 - (a^2 - b^2)]}{a + \sqrt{a^2 - b^2}} \\ &= \frac{2\pi ab^2}{a + \sqrt{a^2 - b^2}} > \pi b^2 \end{aligned}$$

Therefore,  $B < A = C < D$ .

18.  $[A(S_{yz})]^2 + [A(S_{xz})]^2 + [A(S_{xy})]^2$   
 $= [A(S) \cos \alpha]^2 + [A(S) \cos \beta]^2 + [A(S) \cos \gamma]^2$   
 (where  $\alpha$ ,  $\beta$ , and  $\gamma$  are direction angles for a normal to  $S$ )  
 $= [A(S)]^2 (\cos^2 \alpha + \cos^2 \beta + \cos^2 \gamma) = [A(S)]^2$

19. In the following, each double integral is over  $S_{xy}$

$$\begin{aligned} A(S_{xy})f(\bar{x}, \bar{y}) &= A(S_{xy})(a\bar{x} + b\bar{y} + c) \\ &= \iint dA \left[ a \frac{\iint x dA}{\iint dA} + b \frac{\iint y dA}{\iint dA} + c \right] \\ &= a \iint x dA + b \iint y dA + c \iint dA \\ &= \iint (ax + by + c) dA \\ &= \text{Volume of solid cylinder under } S_{xy} \end{aligned}$$

20. Because the slopes of both roofs are the same, the area of  $T_m$  will be the same for both roofs. (Essentially we will be integrating over a constant). Therefore, the area of the roofs will be the same.

21. Let  $G$  denote the surface of that part of the plane  $z = Ax + By + C$  over the region  $S$ . First, suppose that  $S$  is the rectangle  $a \leq x \leq b$ ,  $c \leq y \leq d$ . Then the vectors  $u$  and  $v$  that form the edge of the parallelogram  $G$  are  $u = (b-a)\mathbf{i} + 0\mathbf{j} + A(b-a)\mathbf{k}$  and  $v = 0\mathbf{i} + (d-c)\mathbf{j} + B(d-c)\mathbf{k}$ . The surface area of

$G$  is thus

$$\begin{aligned} |\mathbf{u} \times \mathbf{v}| &= \\ &|-A(b-a)(d-c)\mathbf{i} - B(b-a)(d-c)\mathbf{j} + (b-a)(d-c)\mathbf{k}| \\ &= (b-a)(d-c)\sqrt{A^2 + B^2 + 1} \end{aligned}$$

A normal vector to the plane is  $\mathbf{n} = -A\mathbf{i} - B\mathbf{j} + \mathbf{k}$ .

Thus,

$$\cos \gamma = \frac{\mathbf{n} \cdot \mathbf{k}}{|\mathbf{n}||\mathbf{k}|} = \frac{\langle -A, -B, 1 \rangle \cdot \langle 0, 0, 1 \rangle}{\sqrt{A^2 + B^2 + 1} \cdot 1} = \frac{1}{\sqrt{A^2 + B^2 + 1}}$$

$$\sec \gamma = \frac{1}{\cos \gamma} = \sqrt{A^2 + B^2 + 1} = |\mathbf{u} \times \mathbf{v}| = A(G).$$

If  $S$  is not a rectangle, then make a partition of  $S$  with rectangles  $R_1, R_2, \dots, R_n$ . The Riemann sum will be

$$\sum_{m=1}^n A(G_m) \Delta x_m \Delta y_m = \sum_{m=1}^n \sec \gamma \Delta x_m \Delta y_m.$$

$$= \sec \gamma \sum_{m=1}^n A(R_m). \text{ As we take the limit as}$$

$|P| \rightarrow 0$  the sum converges to the area of  $S$ .

Thus the surface area will be

$$A(G) = \lim_{|P| \rightarrow 0} \sec \gamma \sum_{m=1}^n A(R_m) = \sec \gamma A(S).$$

22. Let  $\gamma = \gamma(x, y, f(x, y))$  be the acute angle between a unit vector  $\mathbf{n}$  that is normal to the surface and makes an acute angle with the  $z$ -axis. Let  $F(x, y, z) = z - f(x, y)$ . Then the normal vector to the surface  $F(x, y, z) = 0 = z - f(x, y)$  is parallel to the gradient

$$\nabla F(x, y, z) = -f_x \mathbf{i} - f_y \mathbf{j} + \mathbf{k}. \text{ The unit normal vector is thus } \mathbf{n} = (-f_x \mathbf{i} - f_y \mathbf{j} + \mathbf{k}) / \sqrt{f_x^2 + f_y^2 + 1}$$

The cosine of the angle  $\gamma$  is thus

$$\cos \gamma = \frac{\mathbf{n} \cdot \mathbf{k}}{|\mathbf{n}||\mathbf{k}|} = \frac{-f_x \mathbf{i} - f_y \mathbf{j} + \mathbf{k} \cdot \mathbf{k}}{\sqrt{f_x^2 + f_y^2 + 1} \cdot 1} = \frac{1}{\sqrt{f_x^2 + f_y^2 + 1}}$$

$$\text{Hence, } \sec \gamma = \sqrt{f_x^2 + f_y^2 + 1}$$

## 16.7 Concepts Review

1. volume

2.  $\iiint_S |xyz| dV$

3.  $y; \sqrt{y}$

4. 0

### Problem Set 16.7

1.  $\int_3^7 \int_0^{2x} (x-1-y) dy dx = \int_3^7 -2x dx = -40$

2.  $\int_0^2 \int_1^4 (3y+x) dy dx = \int_0^2 \left( \frac{45}{2} + 5x \right) dx = 55$

3.  $\int_1^4 \int_{z-1}^{2z} \int_0^{y+2z} dx dy dz = \int_1^4 \int_{z-1}^{2z} (y+2z) dy dz$   
 $= \int_1^4 \left[ \frac{y^2}{2} + 2yz \right]_{y=z-1}^{2z} dz$   
 $= \int_1^4 \left( \frac{7z^2}{2} + 3z - \frac{1}{2} \right) dz$   
 $= \left[ \frac{7z^3}{6} + \frac{3z^2}{2} - \frac{z}{2} \right]_1^4 = \frac{189}{2} = 94.5$

4.  $6 \int_0^5 z^3 dz \int_2^4 y^2 dy \int_1^2 x dx = \left( \frac{625}{4} \right) (72)(3) = 33,750$

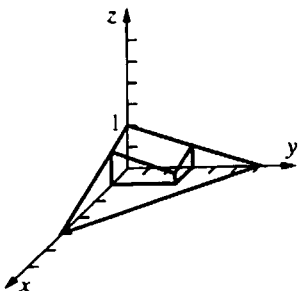
5.  $\int_0^2 \int_1^z x^2 dx dz = \int_0^2 \left( \frac{1}{3} \right) (z^3 - 1) dz = \frac{2}{3}$

6.  $\int_0^{\pi/2} \int_0^z \int_0^y \sin(x+y+z) dx dy dz$   
 $= \int_0^{\pi/2} \int_0^z [-\cos(2y+z) + \cos(y+z)] dy dz$   
 $= \int_0^{\pi/2} \left( -\frac{\sin 3z}{2} + \sin 2z - \frac{\sin z}{2} \right) dz = \frac{1}{3}$

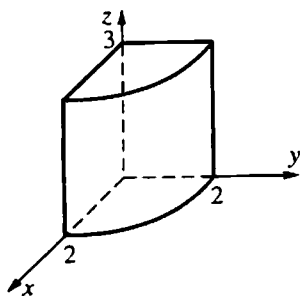
7.  $\int_{-2}^4 \int_{x-1}^{x+1} 3y^2 dy dx = \int_{-2}^4 (6x^2 + 2) dx = 156$

8.  $\int_0^{\pi/2} \int_{\sin 2z}^0 y(1 - \cos 2z) dy dz$   
 $= \int_0^{\pi/2} \left( -\frac{1}{2} \right) (\sin^2 2z)(1 - \cos 2z) dz$   
 $= -\frac{\pi}{8} \approx 0.3927$

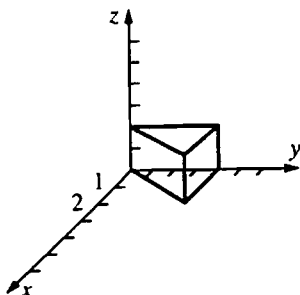
$$9. \int_0^1 \int_0^3 \int_0^{(12-3x-2y)/6} f(x, y, z) dz dy dx$$



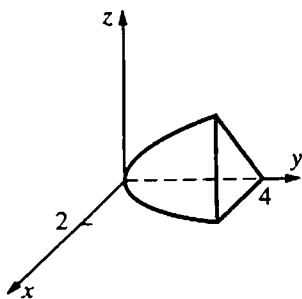
$$10. \int_0^3 \int_0^2 \int_0^{\sqrt{4-y^2}} f(x, y, z) dx dy dz$$



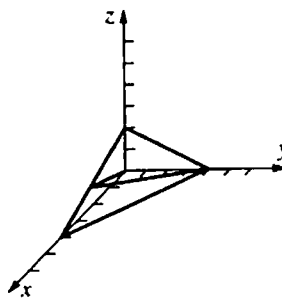
$$11. \int_0^2 \int_0^4 \int_0^{y/2} f(x, y, z) dx dy dz$$



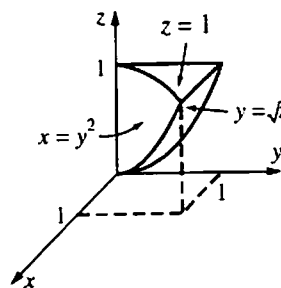
$$12. \int_0^4 \int_0^{\sqrt{y}} \int_0^{3x/2} f(x, y, z) dz dx dy$$



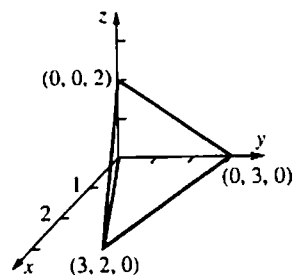
$$13. \int_0^{2.4} \int_{x/3}^{(4-x)/2} \int_0^{4-x-2z} f(x, y, z) dy dz dx$$



$$14. \int_0^1 \int_0^{\sqrt{z}} \int_0^{y^2} f(x, y, z) dx dy dz$$



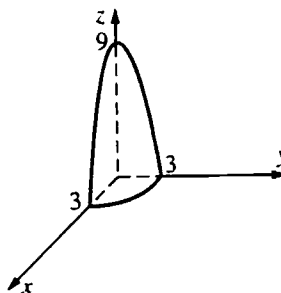
15.



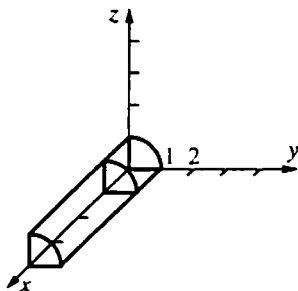
Using the cross product of vectors along edges, it is easy to show that  $\langle 2, 6, 9 \rangle$  is normal to the upward face. Then obtain that its equation is  $2x + 6y + 9z = 18$ .

$$\int_0^3 \int_{2x/3}^{(9-x)/3} \int_0^{(18-2x-6y)/9} f(x, y, z) dz dy dx$$

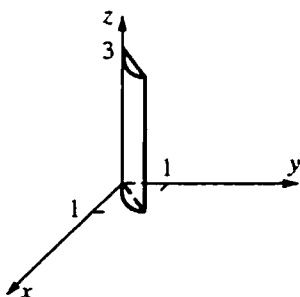
$$16. \int_0^3 \int_0^{\sqrt{9-x^2}} \int_0^{9-x^2-y^2} f(x, y, z) dz dy dx$$



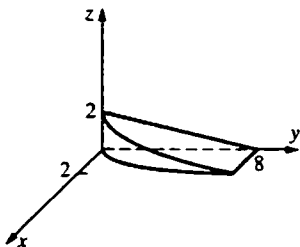
$$17. \int_1^4 \int_0^1 \int_0^{\sqrt{1-y^2}} f(x, y, z) dz dy dx$$



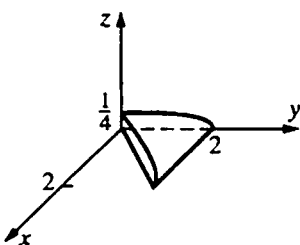
$$18. \int_0^3 \int_0^1 \int_y^{\sqrt{2y-y^2}} f(x, y, z) dx dy dz$$



$$19. \int_0^2 \int_{2x^2}^8 \int_0^{2-y/4} 1 dz dy dx = \frac{128}{15}$$

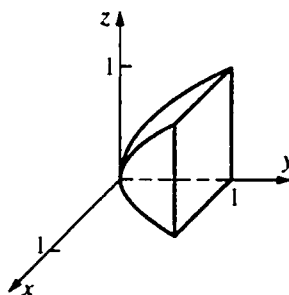


$$20. \int_0^2 \int_0^y \int_0^{\sqrt{4-y^2}/8} 1 dz dx dy = \frac{1}{3}$$

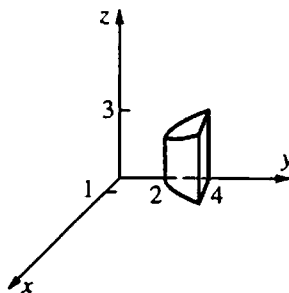


$$21. V = 4 \int_0^1 \int_0^{\sqrt{y}} \int_0^{\sqrt{y}} 1 dz dx dy = 4 \int_0^1 \int_0^{\sqrt{y}} \sqrt{y} dx dy$$

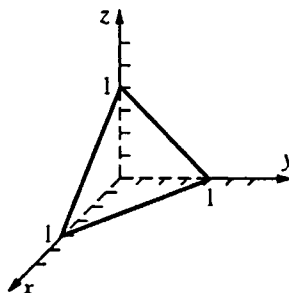
$$= 4 \int_0^1 \sqrt{y} \sqrt{y} dy = [2y^2]_0^1 = 2$$



$$22. 2 \int_0^{\sqrt{2}} \int_{x^2+2}^4 \int_0^{3y/4} 1 dz dy dx = 32 \frac{\sqrt{2}}{5} \approx 9.0510$$



23. Let  $\delta(x, y, z) = x + y + z$ . (See note with next problem.)



$$m = \int_0^1 \int_0^{1-x} \int_0^{1-x-y} (x+y+z) dz dy dx = \frac{1}{8}$$

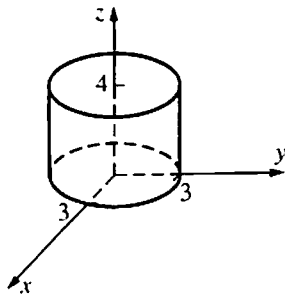
$$M_{yz} = \int_0^1 \int_0^{1-x} \int_0^{1-x-y} x(x+y+z) dz dy dx = \frac{1}{30}$$

$$\bar{x} = \frac{4}{15}$$

$$\text{Then } \bar{y} = \bar{z} = \frac{4}{15} \text{ (symmetry).}$$

$$24. (x, y, z) = k(x^2 + y^2 + z^2)$$

In evaluating the coordinates of the center of mass,  $k$  is a factor of the numerator and denominator and so may be canceled. Hence, for sake of convenience we may just let  $k = 1$  when determining the center of mass. Note that this is not valid if we are concerned with values of moments or mass.



$$\begin{aligned}
 m &= 4 \int_0^3 \int_0^{\sqrt{9-x^2}} \int_0^4 (x^2 + y^2 + z^2) dz dy dx \\
 &= 4 \int_0^3 \int_0^{\sqrt{9-x^2}} \left[ 4(x^2 + y^2) + \frac{64}{3} \right] dy dx \\
 &= 4 \int_0^{\pi/2} \int_0^3 \left( 4r^2 + \frac{64}{3} \right) r dr d\theta \quad (\text{changing to} \\
 &\quad \text{polar})
 \end{aligned}$$

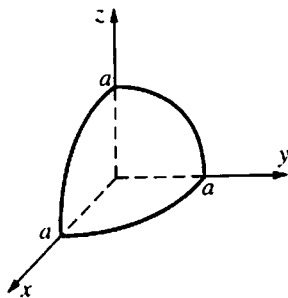
$$\begin{aligned}
 &= 4 \int_0^{\pi/2} \left[ r^4 + \frac{32r^2}{3} \right]_0^3 d\theta = 4 \int_0^{\pi/2} 177 d\theta \\
 &= 354\pi
 \end{aligned}$$

$$\begin{aligned}
 M_{xy} &= 4 \int_0^{\pi/2} \int_0^3 \int_0^4 z(r^2 + z^2) r dz dr d\theta \\
 &\quad (\text{polar coordinates})
 \end{aligned}$$

$$\begin{aligned}
 &= 4 \int_0^{\pi/2} \int_0^3 (8r^3 + 64r) dr d\theta \\
 &= 4 \int_0^{\pi/2} 450 d\theta = 900\pi
 \end{aligned}$$

$$\begin{aligned}
 \bar{z} &= \frac{900\pi}{354\pi} = \frac{150}{59} \approx 2.5425; \\
 \bar{x} &= \bar{y} = 0 \quad (\text{by symmetry})
 \end{aligned}$$

25. Let  $\delta(x, y, z) = 1$ . (See note with previous problem.)



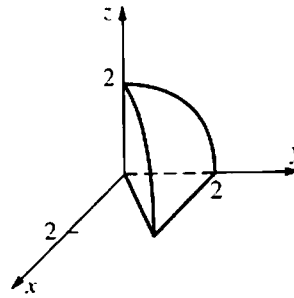
$$m = \left( \frac{1}{8} \right) (\text{volume of sphere}) = \left( \frac{\pi}{6} \right) a^3$$

$$\begin{aligned}
 M_{xy} &= \int_0^a \int_0^{\sqrt{a^2-x^2}} \int_0^{\sqrt{a^2-x^2-y^2}} z dz dy dx \\
 &= \int_0^{\pi/2} \int_0^a \int_0^{\sqrt{a^2-r^2}} zr dz dr d\theta = \left( \frac{\pi}{16} \right) a^4
 \end{aligned}$$

$$\bar{x} = \left( \frac{3}{8} \right) a$$

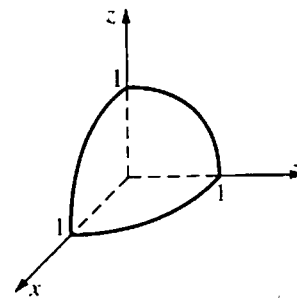
$$\bar{y} = \bar{z} = \left( \frac{3}{8} \right) a \quad (\text{by symmetry})$$

26.  $y^2 + z^2$  is the distance of  $(x, y, z)$  from the  $x$ -axis.



$$\begin{aligned}
 I_x &= \iiint_S (y^2 + z^2)(x, y, z) dV \\
 &= \int_0^2 \int_0^{\sqrt{4-z^2}} \int_0^y (y^2 + z^2)z dx dy dz = \frac{16}{3}
 \end{aligned}$$

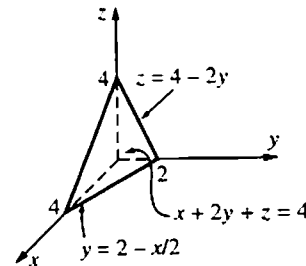
- 27.



The limits of integration are those for the first octant part of a sphere of radius 1.

$$\int_0^1 \int_0^{\sqrt{1-x^2}} \int_0^{\sqrt{1-x^2-y^2}} f(x, y, z) dz dy dx$$

- 28.

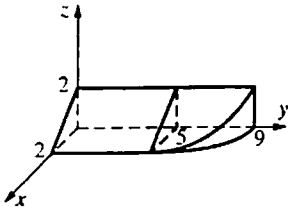


$$\int_0^2 \int_0^{2-x/2} \int_0^{4-x-2y} f(x, y, z) dz dy dx$$

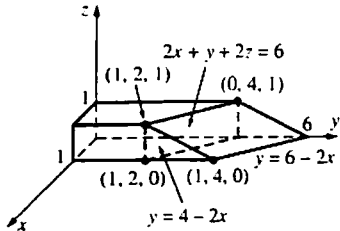
29.  $\int_0^2 \int_0^{2-z} \int_0^{\sqrt{4-x^2}} f(x, y, z) dy dx dz$

Figure is same as for Problem 30 except that the solid doesn't need to be divided into two parts.

$$30. \int_0^5 \int_0^{2-x} \int_0^{2-x} f(x, y, z) dz dx dy + \int_5^9 \int_0^{\sqrt{9-y}} \int_0^{2-x} f(x, y, z) dz dx dy$$



31.



$$a. \int_0^1 \int_0^{4-2x} \int_0^{6-2x} dz dy dx + \int_0^1 \int_{4-2x}^{6-2x} \int_0^{3-x-y/2} dz dy dx = 3 + 1 = 4$$

$$b. \int_0^1 \int_0^1 \int_0^{6-2x-2z} 1 dy dx dz = 4$$

$$c. A(S_{xz})f(\bar{x}, \bar{z}) \quad (S_{xz} \text{ is the unit square in the corner of } xz\text{-plane; and } (\bar{x}, \bar{z}) = \left(\frac{1}{2}, \frac{1}{2}\right) \text{ is the centroid of } S_{xz}.)$$

$$= (1) \left[ 6 - 2\left(\frac{1}{2}\right) - 2\left(\frac{1}{2}\right) \right] = 4$$

32. The moment of inertia with respect to the  $y$ -axis is the integral (over the solid) of the function which gives the square of the distance of each point in the solid from the  $y$ -axis.

$$\int_0^1 \int_0^1 \int_0^{6-2x-2z} k(x^2 + z^2) dy dx dz = \frac{7}{3}k$$

$$33. \int_0^1 \int_0^1 \int_0^{6-2x-2z} (30-z) dy dx dz = \int_0^1 \int_0^1 (30-z)(6-2x-2z) dx dz = \int_0^1 ([ (30-z)(6x-x^2-2xz) ]_{x=0}^1) dz$$

$$= \int_0^1 (30-z)(5-2z) dz = \int_0^1 (150 - 65z + 2z^2) dz = \left[ 150z - \frac{65z^2}{2} + \frac{2z^3}{3} \right]_0^1 = \frac{709}{6}$$

The volume of the solid is 4 (from Problem 31).

Hence, the average temperature of the solid is  $\frac{\frac{709}{6}}{4} = \frac{709}{24} \approx 29.54^\circ$ .

$$\int_0^1 \int_0^1 \int_0^{6-2x-2z} z dy dx dz = \int_0^1 \int_0^1 z(6-2x-2z) dx dz = \int_0^1 ([z(6x-x^2-2xz)]_{x=0}^1) dz$$

$$= \int_0^1 (5z - 2z^2) dz = \left[ \frac{5z^2}{2} - \frac{2z^3}{3} \right]_0^1 = \frac{11}{6}$$

Hence,  $\bar{z} = \frac{11}{6} = \frac{11}{24} \approx 0.4583$ .

34.

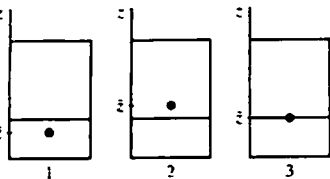


Figure 1: When the center of mass is in this position, it *will* go lower when a little more soda leaks out since mass above the center of mass is being removed.

Figure 2: When the center of mass is in this position, it *was* lower moments before since mass that was below the center of mass was removed,

causing the center of mass to rise. Therefore, the center of mass is lowest when it is at the height of the soda, as in Figure 3. The same argument would hold for a soda bottle.

35. The result obtained from Mathematica is:

$$\int_0^c \int_0^b \int_0^{\sqrt{1-z^2/c^2}} \int_0^{\sqrt{1-y^2/b^2-z^2/c^2}} 8(xy+xz+yz) dx dy dz = \frac{8}{15} a^2 b^2 c + \frac{8}{15} a^2 b c^2 + \frac{8}{15} a b^2 c^2$$

$$= \frac{8}{15} a c b (c a + c b + a b)$$

### 16.8 Concepts Review

1.  $r dz dr d\theta, \rho^2 \sin \phi d\rho d\theta d\phi$

2.  $\int_0^{\pi/2} \int_0^1 \int_0^3 r^3 \cos \theta \sin \theta dz dr d\theta$

3.  $\int_0^\pi \int_0^{2\pi} \int_0^1 \rho^4 \cos^2 \phi \sin \phi d\rho d\theta d\phi$

4.  $\frac{4\pi}{15}$

### Problem Set 16.8

1.  $\int_0^{2\pi} \int_0^2 \int_2^4 r dz dr d\theta = 8\pi \approx 25.1327$

2.  $\int_0^{2\pi} \int_0^2 \int_0^{\sqrt{9-r^2}} r dz dr d\theta = \left(\frac{2}{3}\right)\pi(27-5^{3/2})$   
 $\approx 33.1326$

3.  $\int_0^{2\pi} \int_0^2 \int_{r^2/4}^{\sqrt{5-r^2}} r dz dr d\theta$   
 $= \int_0^{2\pi} \int_0^2 \left[ 4r(5-r^2)^{1/2} - \frac{r^3}{4} \right] dr d\theta$   
 $= \int_0^{2\pi} \frac{5^{3/2} - 4}{3} d\theta = \frac{2\pi(5^{3/2} - 4)}{3} \approx 15.0385$

4.  $\int_0^{2\pi} \int_p^{2\cos\theta} \int_0^{\sin\theta\cos\theta} r dz dr d\theta = \frac{2}{3}$

5. Let  $\delta(x, y, z) = 1$ .  
 (See write-up of Problem 24, Section 16.7.)

$$m = \int_0^{2\pi} \int_0^2 \int_2^{12-2r^2} r dz dr d\theta = 24\pi$$

$$M_{xy} = \int_0^{2\pi} \int_0^2 \int_2^{12-2r^2} zr dz dr d\theta = 128\pi$$

$$\bar{z} = \frac{16}{3}$$

$$\bar{x} = \bar{y} = 0 \text{ (by symmetry)}$$

6. Let  $\delta(x, y, z) = 1$ .  
 (See comment at beginning of write-up of Problem 24 of the previous section.)

$$m = \int_0^{2\pi} \int_1^2 \int_0^{12-r^2} r dz dr d\theta = \int_0^{2\pi} \int_0^2 r(12-r^2) dr d\theta$$

$$= \int_0^{2\pi} \left[ 6r^2 - \frac{r^4}{4} \right]_0^2 d\theta = \int_0^{2\pi} \left( \frac{57}{4} \right) d\theta = \frac{57\pi}{2}$$

$$M_{xy} = \int_0^{2\pi} \int_1^2 \int_0^{12-r^2} zr dz dr d\theta$$

$$= \int_0^{2\pi} \int_1^2 \frac{(12-r^2)^2 (-2r)}{-4} dr d\theta$$

$$= \int_0^{2\pi} \frac{11^3 - 8^3}{12} d\theta = \frac{273\pi}{2}$$

$$\text{Therefore, } \bar{z} = \frac{\frac{273\pi}{2}}{\frac{57\pi}{2}} = \frac{91}{19} \approx 4.7895.$$

$$\bar{x} = \bar{y} = 0 \text{ (by symmetry)}$$

7. Let  $\delta(x, y, z) = k\rho$

$$m = \int_0^\pi \int_0^{2\pi} \int_a^b k\rho\rho^2 \sin \phi d\rho d\theta d\phi = k\pi(b^4 - a^4)$$

8.  $8 \int_{\pi/6}^{\pi/2} \int_0^{\pi/2} \int_{a \csc \phi}^{2a} k\rho^2 \rho^2 \sin \phi d\rho d\theta d\phi = \left(\frac{56}{5}\right)k\pi a^5$

9. Let  $\delta(x, y, z) = \rho$ .  
 (Letting  $k = 1$  - see comment at the beginning of the write-up of Problem 24 of the previous section.)

$$m = \int_0^{\pi/2} \int_0^{2\pi} \int_0^a \rho^3 \sin \phi d\rho d\theta d\phi$$

$$= \int_0^{\pi/2} \int_0^{2\pi} \frac{a^4 \sin \phi}{4} d\theta d\phi$$



$$= \int_0^{\pi/2} \frac{\pi a^4 \sin \phi}{2} d\phi = \frac{\pi a^4}{2}$$

$$M_{xy} = \int_0^{\pi/2} \int_0^{2\pi} \int_0^a \rho^4 \sin \phi \cos \phi d\rho d\theta d\phi$$

$$(z = \rho \cos \phi)$$

$$= \int_0^{\pi/2} \int_0^{2\pi} \frac{\rho^5 \sin 2\phi}{10} d\theta d\phi$$

$$= \int_0^{\pi/2} \frac{\pi a^5 \sin 2\phi}{5} d\phi = \left(\frac{\pi}{5}\right) a^5$$

$$\bar{z} = \frac{\frac{\pi a^5}{5}}{\frac{\pi a^4}{2}} = \frac{2}{5} a; \bar{x} = \bar{y} = 0 \text{ (by symmetry)}$$

10.  $\alpha(x, y, z) = \rho \sin \phi$  (letting  $k = 1$ )

$$m = \int_0^{\pi/2} \int_0^{2\pi} \int_0^a \rho^3 \sin^2 \phi d\rho d\theta d\phi = \left(\frac{1}{8}\right) \pi^2 a^4$$

$$M_{xy} = \int_0^{\pi/2} \int_0^{2\pi} \int_0^a \rho^4 \sin^2 \phi \cos \phi d\rho d\theta d\phi$$

$$= \left(\frac{2}{15}\right) \pi a^5$$

$$\bar{z} = \frac{16a}{15\pi} \approx 0.3395a$$

$$\bar{x} = \bar{y} = 0 \text{ (by symmetry)}$$

$$11. I_z = \iint_S (x^2 + y^2) k (x^2 + y^2)^{1/2} dV \\ = \int_0^{\pi/2} \int_0^{2\pi} \int_0^a k \rho^5 \sin^4 \phi d\rho d\theta d\phi = \left(\frac{k}{16}\right) \pi^2 a^6$$

$$12. \text{Volume} = \int_{\pi/4}^{\pi/2} \int_0^{2\pi} \int_0^4 \rho^2 \sin \phi d\rho d\theta d\phi \\ = \int_{\pi/4}^{\pi/2} \int_0^{2\pi} \frac{64 \sin \phi}{3} d\theta d\phi = \int_{\pi/4}^{\pi/2} \frac{128\pi \sin \phi}{3} d\phi \\ = \frac{64\sqrt{2}\pi}{3} \approx 94.7815$$

$$13. \int_0^{\pi} \int_0^{\pi/6} \int_0^1 \rho^2 \sin \phi d\rho d\theta d\phi = \frac{\pi}{9} \approx 0.3491$$

$$14. \int_0^{\pi} \int_0^{2\pi} \int_0^3 \rho^3 \rho^2 \sin \phi d\rho d\theta d\phi = 486\pi \approx 1526.81$$

$$15. \text{Volume} = \int_0^{\pi} \int_0^{\sin \theta} \int_r^{\sin \theta} r dz dr d\theta \\ = \int_0^{\pi} \int_0^{\sin \theta} r(r \sin \theta - r^2) dr d\theta = \int_0^{\pi} \frac{\sin^4 \theta}{12} d\theta \\ = \frac{1}{48} \int_0^{\pi} \left[ 1 - 2 \cos 2\theta + \frac{1 + \cos 4\theta}{2} \right] d\theta \\ = \frac{\pi}{32} \approx 0.0982$$

$$16. \int_{\pi/4}^{\pi/2} \int_0^{2\pi} \int_0^{2\sqrt{2} \cos \theta} \rho^2 \sin \phi d\rho d\theta d\phi = \left(\frac{\pi}{3}\right) \frac{2\sqrt{2}}{3} \pi \approx 2.9619$$

17. a. Position the ball with its center at the origin. The distance of  $(x, y, z)$  from the origin is  $(x^2 + y^2 + z^2)^{1/2} = \rho$ .

$$\iiint_S (x^2 + y^2 + z^2)^{1/2} dV = 8 \int_0^{\pi/2} \int_0^{\pi/2} \int_0^a \rho(\sin \theta \rho^2) d\rho d\theta d\phi = \pi a^4$$

$$\text{Then the average distance from the center is } \frac{\pi a^4}{\left[\left(\frac{4}{3}\right) \pi a^3\right]} = \frac{3a}{4}.$$

- b. Position the ball with its center at the origin and consider the diameter along the  $z$ -axis. The distance of  $(x, y, z)$  from the  $z$ -axis is  $(x^2 + y^2)^{1/2} = \rho \sin \phi$ .

$$\iiint_S (x^2 + y^2)^{1/2} dV = 8 \int_0^{\pi/2} \int_0^{\pi/2} \int_0^a (\rho \sin \phi)(\rho^2 \sin \theta) d\rho d\theta d\phi = \frac{a^4 \pi^2}{4}$$

$$\text{Then the average distance from a diameter is } \frac{\left[\frac{a^4 \pi^2}{4}\right]}{\left[\left(\frac{4}{3}\right) \pi a^3\right]} = \frac{3\pi a}{16}.$$

- c. Position the sphere above and tangent to the  $xy$ -plane at the origin and consider the point on the boundary to be the origin. The equation of the sphere is  $\rho = 2a \cos \phi$ , and the distance of  $(x, y, z)$  from the origin is  $\rho$ .

$$\iiint_S (x^2 + y^2 + z^2)^{1/2} dV = \int_0^{\pi/2} \int_0^{2\pi} \int_0^{2a \cos \phi} \rho (\rho^2 \sin \theta) d\rho d\theta d\phi = \frac{8\pi a^4}{5}$$

Then the average distance from the origin is  $\frac{\left[\frac{8\pi a^4}{5}\right]}{\left[\left(\frac{4}{3}\right)\pi a^3\right]} = \frac{6a}{5}$ .

18. Average value of  $ax + by + cz$  on  $S$  is

$$\frac{\iiint_S (ax + by + cz + d) dV}{\iiint_S dV} = \frac{a \iiint_S kx dV + b \iiint_S ky dV + c \iiint_S kz dV + d \iiint_S k dV}{\iiint_S k dV}$$

$$= \frac{aM_{yz} + bM_{xz} + cM_{xy} + dm}{m} = a\bar{x} + b\bar{y} + c\bar{z} + d = f(\bar{x}, \bar{y}, \bar{z}).$$

19. a.  $M_{yz} = \iiint_S kx dV = 4k \int_0^{\pi/2} \int_0^\alpha \int_0^\alpha (\rho \sin \phi \cos \theta) (\rho^2 \sin \phi) d\rho d\theta d\phi = ka^4 \pi \frac{(\sin \alpha)}{4}$

$$m = \iiint_S k dV = 4k \int_0^{\pi/2} \int_0^\alpha \int_0^\alpha \rho^2 \sin \phi d\rho d\theta d\phi = \frac{4a^3 k \alpha}{3}$$

Therefore,  $\bar{x} = \frac{\left[\frac{ka^4 \pi (\sin \alpha)}{4}\right]}{\left[\frac{4a^3 k \alpha}{3}\right]} = \frac{3a\pi (\sin \alpha)}{16\alpha}$ .

b.  $\frac{3\pi a}{16}$  (See Problem 17b.)

20. a. (See Problem 17b.)  $I_z = \iiint_S k[(x^2 + y^2)^{1/2}]^2 dV$

$$= 8k \int_0^{\pi/2} \int_0^{\pi/2} \int_0^\alpha (\rho \sin \phi)^2 (\rho^2 \sin \phi) d\rho d\theta d\phi = \frac{8a^5 \pi k}{15} = \frac{2a^2 m}{5} \quad (\text{since } m = \left(\frac{4}{3}\right)\pi a^3 k)$$

b.  $I' = I = d^2 m = \frac{2a^2 m}{5} + a^2 m = \frac{7a^2 m}{5}$

c.  $I = 2 \left[ \frac{2a^2 m}{5} + (a+b)^2 m \right] = \frac{2m(7a^2 + 10ab + 5b^2)}{5}$

21. Let  $m_1$  and  $m_2$  be the masses of the left and right balls, respectively. Then  $m_1 = \frac{4}{3}\pi a^3 k$  and

$$m_2 = \frac{4}{3}\pi a^3 (ck), \text{ so } m_2 = cm_1.$$

$$\bar{y} = \frac{m_1(-a-b) + m_2(a+b)}{m_1 + m_2}$$

$$= \frac{m_1(-a-b) + cm_1(a+b)}{m_1 + cm_1} = \frac{-a-b+c(a+b)}{1+c}$$

$$= \frac{(a+b)(-1+c)}{1+c} = \frac{c-1}{c+1}(a+b)$$

(Analogue)

$$\bar{y} = \frac{m_1 \bar{y}_1 + m_2 \bar{y}_2}{m_1 + m_2} = \bar{y}_1 \frac{m_1}{m_1 + m_2} + \bar{y}_2 \frac{m_2}{m_1 + m_2}$$

22.  $x = r \cos \theta, y = r \sin \theta, z = z$

$$J(r, \theta, z) = \begin{vmatrix} x_r & x_\theta & x_z \\ y_r & y_\theta & y_z \\ z_r & z_\theta & z_\theta \end{vmatrix}$$

$$= \begin{vmatrix} \cos \theta & -r \sin \theta & 0 \\ \sin \theta & r \cos \theta & 0 \\ 0 & 0 & 1 \end{vmatrix}$$

$$= |[(\cos \theta)(-r \cos \theta) - (\sin \theta)(-r \sin \theta)]|$$

$$= r(\cos^2 \theta + \sin^2 \theta) = r$$

23.  $x = \rho \sin \phi \cos \theta, y = \rho \sin \phi \sin \theta, z = \rho \cos \phi$

$$J(\rho, \phi, \theta) = \begin{vmatrix} x_\rho & x_\phi & x_\theta \\ y_\rho & y_\phi & y_\theta \\ z_\rho & z_\phi & z_\theta \end{vmatrix} = \begin{vmatrix} \sin \phi \cos \theta & \rho \cos \phi \cos \theta & -\rho \sin \phi \sin \theta \\ \sin \phi \sin \theta & \rho \cos \phi \sin \theta & \rho \sin \phi \cos \theta \\ \cos \phi & -\rho \sin \phi & 0 \end{vmatrix}$$

$$= (\cos \phi)(\rho^2 \cos \phi \sin \phi)(\cos^2 \theta + \sin^2 \theta) + (\rho \sin \phi)(\rho \sin^2 \phi)(\cos^2 \theta + \sin^2 \theta)$$

$$= \rho^2 \sin \phi (\cos^2 \phi + \sin^2 \phi) = \rho^2 \sin \phi$$

(Expansion was along the third row of the determinant.)

24. Volume =  $\iiint_S 1 dV$

Let  $x = au, y = bv, z = cw$

Then  $J(u, v, w) = \begin{vmatrix} a & 0 & 0 \\ 0 & b & 0 \\ 0 & 0 & c \end{vmatrix} = abc$

$= \iiint_T abc dV$

$S: \frac{x^2}{a^2} + \frac{y^2}{b^2} + \frac{z^2}{c^2} \leq 1$  (ellipsoid)

$= abc \frac{4}{3} \pi(1)^3 = \frac{4}{3} \pi abc$

$\Rightarrow T: u^2 + v^2 + w^2 \leq 1$  (ball)

$I_z = \iiint_S k(x^2 + y^2) dV = k \iiint_T (a^2 u^2 + b^2 v^2) abc dV$

$= kabc \left[ a^2 \iiint_T u^2 dV + b^2 \iiint_T v^2 dV \right]$  (By symmetry, these integrals are equals.)

$= kabc(a^2 + b^2) \iiint_T w^2 dV = kabc(a^2 + b^2) \iiint_T w^2 dV = 8kabc(a^2 + b^2) \int_0^{\pi/2} \int_0^{\pi/2} \int_0^1 (\rho \cos \phi)^2 \rho^2 \sin \phi d\rho d\theta d\phi$

$= 8kabc(a^2 + b^2) \int_0^{\pi/2} \int_0^{\pi/2} \left[ \left( \frac{\rho^5}{5} \cos^2 \phi \sin \phi \right) \Big|_{\rho=0}^1 \right] d\theta d\phi = 8kabc(a^2 + b^2) \int_0^{\pi/2} \int_0^{\pi/2} \left( \frac{1}{5} \cos^2 \phi \sin \phi \right) d\theta d\phi$

$= 8kabc(a^2 + b^2) \int_0^{\pi/2} \frac{1}{5} \frac{\pi}{2} \cos^2 \phi \sin \phi d\phi = 8kabc(a^2 + b^2) \left[ \frac{1}{5} \frac{\pi}{2} \left( \frac{-\cos^3 \phi}{3} \right) \right]_0^{\pi/2}$

$= 8kabc(a^2 + b^2) \frac{1}{5} \frac{\pi}{2} \frac{1}{3} = \frac{4kabc(a^2 + b^2)\pi}{15}$

## 16.9 Chapter Review

### Concepts Test

1. True: Use result of Problem 25, Section 16.2, and then change dummy variable  $y$  to dummy variable  $x$ .
2. False: Let  $f(x, y) = x$ . 1st integral is  $\frac{1}{3}$ ; 2nd is  $\frac{1}{6}$ .
3. True: Inside integral is 0 since  $\sin(x^3 y^2)$  is an odd function in  $x$ .

4. True: Use Problem 25, Section 16.2. Each integrand,  $e^{x^2}$  and  $e^{2y^2}$ , determines and even function.

5. True: It is less than or equal to  $\int_1^2 \int_0^2 1 dx dy$  which equals 2.

6. True:  $f(x, y) \geq \frac{f(x_0, y_0)}{2}$  in some neighborhood  $N$  of  $(x_0, y_0)$  due to the continuity. Then
 
$$\iint_R f(x, y) dA \geq \iint_N \left( \frac{1}{2} \right) f(x_0, y_0) dA$$

$$= \left( \frac{1}{2} \right) f(x_0, y_0) (\text{Area } N) > 0.$$

7. False: Let  $f(x, y) = x$ ,  $g(x, y) = x^2$ ,  
 $R = \{(x, y): x \text{ in } [0, 2], y \text{ in } [0, 1]\}$ .  
 The inequality holds for the integrals  
 but  $f(0.5, 0) > g(0.5, 0)$ .

8. False: Let  $f(0, 0) = 1$ ,  $f(x, y) = 0$  elsewhere  
 for  $x^2 + y^2 \leq 1$ .

9. True: See the write-up of Problem 24,  
 Section 16.7.

10. True: For each  $x$ , the density increases as  $y$   
 increases, so the top half of  $R$  is more  
 dense than the bottom half. For each  
 $y$ , the density decreases as the  $x$   
 increases, so the right half of  $R$  is  
 more dense than the left half.

11. True: The integral is the volume between  
 concentric spheres of radii 4 and 1.  
 That volume is  $84\pi$ .

12. True: See Section 16.6.  
 $A(T) = (\text{Area of base})(\sec 30^\circ)$   
 $= \pi(1)^2 \left(\frac{2}{\sqrt{3}}\right) = \frac{2\sqrt{3}\pi}{3}$

13. False: There are 6.

14. False: The integrand should be  $r$ .

15. True:  $|\nabla f|$  is the magnitude of the greatest  
 increase in  $f$ .  
 $|D_u f| = |\nabla f \cdot \mathbf{u}| = \left| \langle f_x, f_y \rangle \cdot \mathbf{u} \right|$   
 $= \sqrt{f_x^2 + f_y^2} (1) \cos \theta \leq \sqrt{4+4} = \sqrt{8}$   
 Therefore,  
 $\text{Area}(G) \leq \text{Area}(R) \max \{\sec \gamma\}$   
 $\leq (1) \sec(\tan^{-1} \sqrt{8}) = 3$ .

### Sample Test Problems

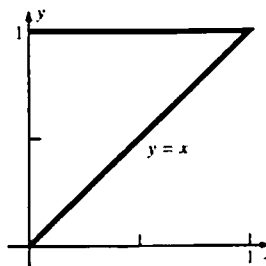
1.  $\int_0^1 \left(\frac{1}{2}\right)(x^2 - x^3) dx = \frac{1}{24} \approx 0.0417$

2.  $\int_{-2}^2 0 dy = 0$  (Integrand determines an odd  
 function in  $x$ .)

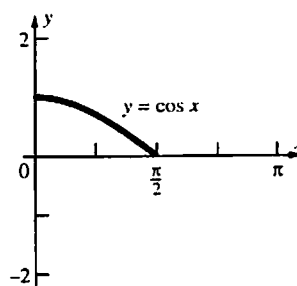
3.  $\int_0^{\pi/2} \left[ \frac{r^2 \cos \theta}{2} \right]_{r=0}^{2 \sin \theta} d\theta = \int_0^{\pi/2} 2 \sin^2 \theta \cos \theta d\theta$   
 $= \left[ \frac{2 \sin^3 \theta}{3} \right]_0^{\pi/2} = \frac{2}{3}$

4.  $\int_1^2 \int_3^x \left(\frac{\pi}{3}\right) dy dx = \int_1^2 \left(\frac{\pi}{3}\right)(x-3) dx = -\frac{\pi}{2}$

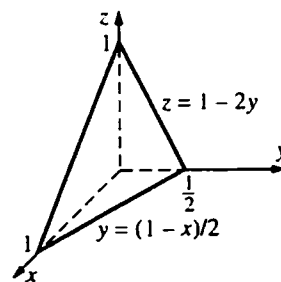
5.  $\int_0^1 \int_0^y f(x, y) dx dy$



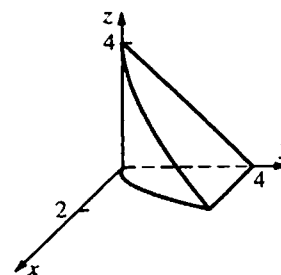
6.  $\int_0^{\pi/2} \int_0^{\cos x} f(x, y) dx dy$



7.  $\int_0^{1/2} \int_0^{1-2y} \int_0^{1-2y-z} f(x, y, z) dx dz dy$



8.  $\int_0^4 \int_0^{4-z} \int_0^{\sqrt{y}} f(x, y, z) dx dy dz$

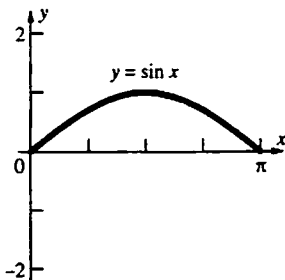


$$9. \text{ a. } 8 \int_0^a \int_0^{\sqrt{a^2-x^2}} \int_0^{\sqrt{a^2-x^2-y^2}} dz dy dx$$

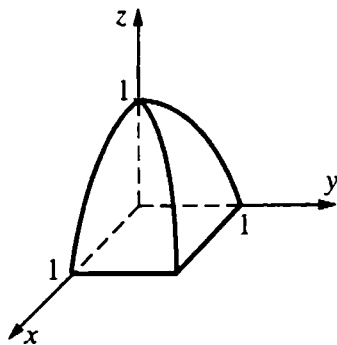
$$\text{b. } 8 \int_0^{\pi/2} \int_0^a \int_0^{\sqrt{a^2-r^2}} r dz dr d\theta$$

$$\text{c. } 8 \int_0^{\pi/2} \int_0^{\pi/2} \int_0^a \rho^2 \sin \phi d\rho d\theta d\phi$$

$$10. \int_0^{\pi} \int_0^{\sin x} (x+y) dy dx = \frac{5\pi}{4} \approx 3.9270$$



$$11. 8 \int_0^1 \int_0^x \int_0^{1-y^2} z^2 dz dy dx = \frac{31}{35} \approx 0.8857$$



$$12. \int_0^{2\pi} \int_2^3 (r^{-2}) r dr d\theta = \int_0^{2\pi} [\ln r]_2^3 d\theta$$

$$= \int_0^{2\pi} \ln\left(\frac{3}{2}\right) d\theta = 2\pi \ln\left(\frac{3}{2}\right) \approx 2.5476$$

$$13. m = \int_0^2 \int_1^3 xy^2 dx dy = \frac{32}{3}$$

$$M_x = \int_0^2 \int_1^3 xy^3 dx dy = 16$$

$$M_y = \int_0^2 \int_1^3 x^2 y^2 dx dy = \frac{208}{9}$$

$$(\bar{x}, \bar{y}) = \left(\frac{13}{6}, \frac{3}{2}\right)$$

$$14. I_x = \int_0^2 \int_1^3 xy^4 dx dy = \frac{128}{5} = 25.6$$

$$15. z = f(x, y) = (9 - y^2)^{1/2}; f_x(x, y) = 0;$$

$$f_y(x, y) = -y(9 - y^2)^{-1/2}$$

$$\text{Area} = \int_0^3 \int_{y/3}^y \sqrt{y^2(9 - y^2)^{-1} + 1} dx dy$$

$$= \int_0^2 \int_{y/3}^y 3(9 - y^2)^{-1/2} dx dy$$

$$= \int_0^3 (9 - y^2)^{-1/2} (2y) dy = [-2(9 - y^2)^{1/2}]_0^3 = 6$$

$$16. \text{ a. } \int_0^{\pi/2} \int_0^2 \int_0^3 r r dz d\theta = 9\pi \approx 28.2743$$

b.

$$\int_0^{\pi/2} \int_0^2 \int_0^{\sqrt{4-r^2}} z(4-r^2)^{1/2} r dz dr d\theta = \left(\frac{8}{5}\right)\pi$$

$$\approx 5.0265$$

$$17. \delta(x, y, z) = k\rho$$

$$m = \int_0^{\pi} \int_0^{2\pi} \int_1^3 k\rho \rho^2 \sin \phi d\rho d\theta d\phi = 80\pi k$$

$$18. m = \iint_R 1 dA = \int_0^{2\pi} \int_0^{4(1+\sin\theta)} r dr d\theta$$

$$= 16 \int_0^{2\pi} \left(1 + 2\sin\theta + \frac{1 - \cos 2\theta}{2}\right) d\theta = 24\pi$$

$$M_x = \iint_R y dA = \int_0^{2\pi} \int_0^{4(1+\sin\theta)} (r \sin\theta) r dr d\theta$$

$$= 80\pi$$

$$\bar{y} = \frac{80\pi}{24\pi} = \frac{10}{3}; \bar{x} = 0 \text{ (by symmetry)}$$

$$19. m = \int_0^a \int_0^{(b/a)(a-x)} \int_0^{(c/ab)(ab-bx-ay)} kx dz dy dx$$

$$= \left(\frac{k}{24}\right) a^2 bc$$

$$20. \int_0^{\pi} \int_0^{2\sin\theta} \int_0^2 r dz dr d\theta = \frac{3\pi}{2} \approx 4.7124$$